

STEGA SERIES

DARASA LA TANO 2015

KISWAHILI

MUDA: 1: DAKIKA

Soma kifungu kifuatacho. Kina nafasi 1 mpaka 15 kwa kila nafasi umepewa majibu manne. Chagua jibu lifaalo zaidi kati ya yale uliyopewa.

Binti _____ 1 _____ umri wa miaka _____ 2 _____ aliaga dunia mwezi uliopita _____ 3 _____ Wilaya _____
Songombele _____ 4 _____ ya kula mahindi waliopewa na shirika la msalaba _____ 5 _____ Watu _____ 6 _____
watano wa familia yake _____ 7 _____ walifuata njia hiyo ya mauti kutokana na mahindi hayo yenye sumu. W _____
walikuwa wametibiwa kwa _____ 8 _____ ya tumbo katika hospitali _____ 9 _____ ya wilaya hiyo. Msichana h _____
alifariki mwendo wa saa kumi na moja _____ 10 _____, baada ya yeye na ndugu zake _____ 11 _____ hospitalini k _____
matibabu.

Msemaji alieleza kwamba wote walikuwa _____ 12 _____ maumivu _____ 13 _____ tumbo muda mfupi baada _____
kula _____ 14 _____ cha siku kabla ya siku ya kifo chao. Wazazi wa watoto hao walilia _____ 15 _____ k _____
kuwapoteza watoto wao wapendwa.

- | | | | | |
|-----|------------------|------------------|-----------------|----------------|
| 1. | A. Wenye | B. Mwenye | C. Chenye | D. Lenye |
| 2. | A. mitisa | B. misita | C. mitano | D. misaba |
| 3. | A. katika | B. kwa | C. kwenye | D. ndani ya |
| 4. | A. kabla | B. kwa | C. baada | D. mbele |
| 5. | A. nyekundu | B. wekundu | C. chekundu | D. mwekundu |
| 6. | A. weingine | B. mwingine | C. wengine | D. wengi |
| 7. | A. pia | B. ingawa | C. bali | D. lakini |
| 8. | A. uchungu | B. vidonda | C. mateso | D. maumivu |
| 9. | A. mkuu | B. mikuu | C. kuu | D. kuukuu |
| 10. | A. adhuhuri | B. alasiri | C. mchana | D. alfajiri |
| 11. | A. kufikisha | B. kufikiwa | C. kufikishwa | D. kufikika |
| 12. | A. wakilalamikia | B. walilalamikia | C. watalalamika | D. hulalamikia |
| 13. | A. za | B. la | C. ya | D. wa |
| 14. | A. Chanjia | B. Chajjo | C. Chajo | D. Chajioni |
| 15. | A. kwi kwi kwi | B. kwa kwa kwa | C. kwe kwe kwe | D. ki ki ki |

Kutoka swali la 16-30 jibu kulingana na maagizo

16. Andika tarimu ifuatayo kwa maneno 9,696
A. Sita elfu, mia sita sitini na sita
B. Tisa elfu, mia tisa sitini na tisa
C. Tisa elfu, mia sita tisini na sita
D. Sita elfu, mia tisa tisini na tisa
17. Kamilisha tashbihi kwa usahihi
Wanyoike ana macho makubwa kama _____
A. goli
B. globu
C. taa
D. gololi
18. _____ ni kifaa cha kuandikia nayo _____
ni sherehe yenye vyakula na vinywaji tofauti.
A. Karamu, penseli
B. Buku, karamu
C. Kalamu, karamu
D. Karamu, kalamu
19. Ni kipi hutandazwa sakafuni?
A. sinia
B. kochi
C. pazia
D. zulia
20. Jaza pengo kwa kiulizi pi.
Madaktari _____ walipandishwa vyeo?
A. yapi
B. wepi
C. yupi
D. mpi
21. Tegua kitendawili: Nyumbani mwangu mna shetani ambaye daima hunywa maji yangu.
A. Mtungi
B. Taa
C. Shamba
D. Mimea
22. Nini maana ya maneno yaliyopigwa mstari?
Tulikula chakula kilichokuwa asali katika sherehe
A. Chakula chenye viungo vingi
B. Kilitiwa asali
C. Kililetwa na nyuki
D. Kilikuwa kitamu
Jaza pengo kwa - amba-
23. Kipofu _____ amepita hapa ni mjombangu

- A. ambacho
B. ambaye
C. ambako
D. ambamo

24. Taja jina la umbo lililochorwa



- A. Mche duara
B. Mche
C. Pia
D. Piramidi

25. Mwana huyu ni yatima kwa kuwa hana babu
_____ mama.

- A. isipokuwa
B. ijapokuwa
C. ila
D. wala

26. Ni vazi lipi linalovaliwa na jinsia ya kike pekee?

- A. Chupi
B. Kaptura
C. Sidira
D. Tai

27. Ni sentensi ipi iliyoandikwa kwa wakati timilifu?

- A. Paka ameyanywa maziwa yote
B. Mwalimu wetu hutufundisha vyema
C. Mgeni wako atafika mapema
D. Tunaimba wimbo wa taifa

28. Kanusha sentensi: uso ulipakwa mafuta

- A. uso hautapakwa mafuta
B. uso haumepakwa mafuta
C. uso haukupakwa mafuta
D. uso haupakwi mafuta

29. Ipi si sehemu ya nje ya mwili?

- A. kisogo
B. paja
C. pafu
D. kisugudi

30. Andika udogo wa: Mbwa alibweka usiku kucha

- A. Kimbwa kilibweka usiku kucha
B. Kibwa kilibweka usiku
C. Kambwa kalibweka usiku kucha
D. Kijibwa kilibweka usiku kucha

Mwalimu Mkuu,
Shule ya msingi ya Utubora,
Sanduku la Posta 666,
MALITELE.

Mwalimu Mkuu,

MINT: MAOMBI YA NAFASI KATIKA DARASA LA SITA

Ningependa kuchukua nafasi hii kuandika barua hii kwa lengo la kuomba nafasi ya kjiunga na darasa la sita mwaka ujao katika shule yako tukufu.

Mie ni binti mwenye umri wa miaka kumi na mmoja katika darasa la tano. Katika mthani wa kufunga muhula wa kwanza, nilijinyakulia nafasi ya kwanza baada ya kuwashinda wanafunzi sitini na wanne. Naomba udhibitishwe hayo kwa nakala ya ripoti yangu. Ninatarajia kufanya vyema zaidi ili niibuke mshindi katika muhula wa pili na wa tatu. Mimi ni kiranja wa mazingira katika shule yangu. Najivunia kuwa mwanamazingira. Mimi ni mwanasoka mlinda ngome au ukipenda utaniita difenda asiye na mzaha katika kusakata kabumbu. Muhula huu nitakuwa mmoja wa wale watakaowakilisha shule yetu katika tamasha za muziki kiwango cha gatu au kaunti

Lengo langu la kuomba nafasi hii ni kutokana na uhamisho wa kikazi wa wavyele wangu. Nitakuwa na furaha ya kibogoyo aliyeota meno iwapo ombi langu litazingatiwa.

Mimi wako mwaminifu

Jina sifa

41. Mwandishi wa barua hii anasoma katika shule gani?

- A. Malitele B. Ikuhu
C. Utubora D. Elimu

42. Sababu ya mwandishi kuandika barua hii ni

- A. kuomba ripoti B. kuomba nafasi
C. kuomba chakula D. kuomba mthani

43. Barua hii iliandikwa muhula gani?

- A. wa kwanza B. hatujaambiwa
C. wa pili D. wa tatu

44. Mwandishi anaomba nafasi ya darasa la _____ mwaka wa _____

- A. sita, 2015 B. sita, 2016
C. sita 2017 D. sita, 2014

45. Mwandishi anasimamia idara gani shuleni?

- A. michezo B. darasa
C. mazingira D. soka

46. Ni sehemu gani anayocheza katika kandanda?

A. kiungo cha kati B. difenda

C. mshambulizi D. mlinda lango

47. Ni shunguli gani inayotarajiwa katika gatu la shule yao?

- A. soka B. muziki
C. riadha D. sarakasi

48. Kwa nini mwandishi anaomba nafasi katika shule iliyotajwa?

- A. kutokana na uhamisho wa wazee wake
B. utokana na uhamisho wa marafiki zake
C. kutokana na uhamisho wa wazazi wake
D. kutokana na uhamisho wa walimu wake

49. Badala ya wako mwaminifu, pia angeandika _____

- A. wako wa daima B. wako mtiifu
C. wako mpendwa D. wako wa moyo

50. Maneno furaha kama kibogoyo aliyeota meno _____ fani gani ya lugha?

- A. istiara B. msemu
C. tashbihi D. methali

STEGA SERIES

STANDARD FIVE 2015

ENGLISH

Time: 1hour 40 minutes

Read the passage below and fill in the blank spaces with the correct choice from the ones given below.

As young 1 they might look, 2 amazing how 3 young players are determined to become 4 of the 5 footballers not only in Kenya, 6 across the boarders. 7 being girls has not 8 them from pursuing 9 dreams in a 10 largely associated 11 boys. After learning the 12 they are now 13 to take their talents to the next level. They want to build on this talent and 14 their lives in 15

- | | | | | |
|-----|---------------|--------------|--------------|--------------|
| 1. | A. like | B. so | C. all | D. as |
| 2. | A. it's | B. its | C. its' | D. it i's |
| 3. | A. that | B. those | C. these | D. this |
| 4. | A. many | B. some | C. all | D. a few |
| 5. | A. better | B. best | C. good | D. most best |
| 6. | A. but | B. and | C. or | D. far |
| 7. | A. And | B. But | C. Even | D. also |
| 8. | A. determined | B. detered | C. deterred | D. deter |
| 9. | A. their | B. there | C. they're | D. theirs |
| 10. | A. spots | B. spot | C. sports | D. sport |
| 11. | A. to | B. with | C. by | D. in |
| 12. | A. bases | B. base | C. basics | D. basis |
| 13. | A. king | B. kean | C. kin | D. keen |
| 14. | A. improve | B. disaprove | C. disaprove | D. prove |
| 15. | A. time | B. present | C. future | D. past |

In question 16-17, choose the best degree of the adjective given

16. The whale is the _____ of all sea mammals.
A. most largest B. largest
C. larger D. large
17. My composition is _____ than it was at mid-term.
A. good
B. the best
C. more better
D. better

Write the correct tags to complete question 18-19.

18. It is hardly midnight, _____?
A. was it B. it isn't
C. isn't it D. is it
19. I am in class Five, _____?
A. aren't I B. am I
C. am't I D. isn't it

Fill in the blank spaces in questions 20-21 with the correct preposition.

20. Mrs Oluoch was angry _____ the lazy pupil.
A. at B. with
C. by D. for
21. The teacher did not vacate _____ his old house
A. into B. to
C. from D. out of

Which sentence in questions 22-23 means the same as the underlined?

22. Who gave you the letter?
A. By whom were you given the letter _____?
B. You were given the letter by who?
C. Whom gave you the letter?
D. I was given the letter by who?
23. "Mount Kenya is the tallest Mountain in Kenya,"
_____ said the teacher

- A. The teacher said that Mt Kenya was the tallest mountain in Kenya
B. The teacher said Mt Kenya, in Kenya is the tallest mountain
C. Kenya is the tallest mountain as the teacher said in Kenya
D. The teacher said that Mount Kenya is the tallest mountain in Kenya

Pick the grammatically correct sentence in question 24

24. A. Raise up your hands if you want to speak.
B. Please go for the baby, it is crying.
C. The teacher asked the captain to bring the equipments.
D. I prefer tea or cocoa.

Arrange the sentences in question 25 to make a sensible paragraph

- (i) who would be the new coach?
(ii) it was the beginning of the Premier League Season.
(iii) Their coach had left at the end of last season
(iv) Before the new season, the players were wondering who would coach them.
(v) They finally got a German coach.
25. A. ii, iii, iv, v B. i, ii, iii, v, iv
C. iv, v, i, ii, iii D. ii, iv, iii, i, v

Read the following story and answer questions 26-38 correctly.

The name rhinoceros means 'nose horn' and is often shortened to rhino. There are more than five species of rhinoceros that are native to South Asia and Africa. Despite their names, white rhinoceros are actually grey in colour. The 'white' in its name is derived from the Afrikaans word 'Wyd' that refers to its wide or square upper lip that is best suited for grazing-eating grass on the ground. The pointed or hooked lip of the black rhino makes browsing-feeding on twigs, shrubs and trees- easy.

Rhinoceros can attain weights of 1000kg. All rhinoceros have thick, protective skin and they eat plants- which make them herbivorous. A group of rhinos is called a herd or a crash.

26. The rhinoceros gets its name from
A. its colour
B. face appearance
C. food
D. size
27. From paragraph one we understand that
A. the white rhino gets its name from its colour
B. rhinos are only found in Asia
C. rhinos do not live in groups
D. there are different kinds of rhinos
28. The word shortened means?
A. poached
B. cut
C. abbreviated
D. nicknamed
29. The wide square shaped lips help the rhino to
A. scare away the enemy
B. feed
C. protect itself
D. dig the ground
30. A grown up adult rhinoceros can weigh up to
A. 10 tonnes
B. 100 tonnes
C. 1000 gms
D. 1 tonne
31. The word 'wyd' comes from _____ language
A. Afrikaans
B. Asian
C. African
D. English
32. The word herbivores refers to an animal that feeds on
A. flesh and plants
B. flesh
C. plants
D. sea animals
33. What is common in all rhinoceros?
A. their origin
B. their habitat
C. their food
D. their colour
34. We say a herd of rhinos but a _____ horses
A. horde
B. pack
C. gang
D. team
35. The word native means
A. origin
B. natural
C. new
D. known
36. According to the passage feeding from trees, shrubs and twigs is known as
A. grazing
B. browsing
C. herb eating
D. chewing cud
37. What do you think rhinos are hunted for?
A. Their hoofs
B. Their meat
C. Their skin
D. Their horns
38. The best title for this passage is
A. The white rhino
B. The big five
C. The rhinoceros
D. The black rhino

Read the passage below carefully and then answer questions 41-50.

There once lived a wise and wealthy King who loved hunting. One day, when he was out hunting in an unfamiliar part of the forest, he got lost. Later on, he realised his assistants were nowhere to be found. He wandered for a while before finally coming to a lone hut at the edge of a forest. In the compound was a young beautiful girl tending to a garden.

From the royal robes he wore, the girl could tell he was monarch. She was surprised at the sight of a royal in their compound. The King asked the girl for water to drink. But the girl, appreciating his place in the society, was a little embarrassed to serve the king in the kind of utensils they owned so she warned his majesty that all she would give him was water in an unsightly jar, unworthy of his stature.

But the King was so thirsty to be bothered about the state of the jar. After he had finished drinking, to the King's surprise, she threw the vessel against the wall so that it broke into many little tiny pieces. Astonished, the King thought the girl, though pretty, had no manners. He sought to find out why the girl had done that.

But then the girl explained, that she had broken the jar because she did not want anyone else to touch and drink from the same vessel he had used. The King thought that was a very smart answer. He was very impressed and because he was a man who loved to test others, he decided to test the girl further. So he invited the girl to the palace the following day.

39. Nowhere to be found means
A. nowhere in sight
B. did not exist
C. they had died
D. every where but far away
40. Why did the King get lost?
A. His assistants had left him
B. He did not know that part of the forest
C. He was thirsty
D. He had gone hunting
41. A lone hut means
A. there were no people in the hut
B. it was an old hut
C. it was a quiet hut
D. it was the only hut
42. We truly conclude that the girl
A. came from a well up family
B. was expecting the King
C. was shocked by the King's visit
D. embarrassed the King
43. Who is referred to as "his majesty"?
A. God
B. the girls
C. the king
D. every body
44. The last sentence of the first paragraph tells us that the girl was all the following EXCEPT
A. Pretty
B. Charming
C. Elegant
D. Dirty
45. What help did the King want?
A. way out of the forest
B. way back to the palace
C. to quench his thirst
D. to get his assistants
46. The girl was embarrassed because
A. she was found dirty in the garden
B. their utensils were not fit to serve a King
C. the King was smartly dressed
D. she did not have water to serve the King
47. Why did the little girl break the jar that the King used?
A. It was dirty
B. The King had a strange disease
C. She was jealous of anyone using it
D. She wanted the King to buy a new one
48. Finally, the King
A. thought the girl was intelligent
B. was disappointed by the girl's behaviour
C. married the girl to his prince
D. kidnapped the girl
49. The following day, the girl was a _____ at the palace
A. steward
B. employee
C. host
D. guest
50. The best title for the passage is
A. The Desperate King
B. A pleasant Surprise
C. A cat may look at a King
D. All that glitters is not gold

STEGA SERIES

STANDARD FIVE 2015

MATHEMATICS

Time: 2 Hours

1. Add 96345 to 78954 then round off your answer to the nearest hundred

A. 175200 B. 173000
C. 170000 D. 175300

2. What is the total value of digit 8 in the number 184349?

A. Eight thousands B. Tens of thousands
C. Eighty thousand D. Thousands

3. Work out :-

$$\begin{array}{r} 914 \\ \times 58 \\ \hline \\ \hline \end{array}$$

A. 53012 B. 53102
C. 53120 D. 53210

4. What is the time 9.45 written in the long form?

A. Forty five minutes to ten
B. Fifteen minutes to nine
C. Forty five minutes past ten
D. Fifteen minutes to ten

5. Solve for x in the equation

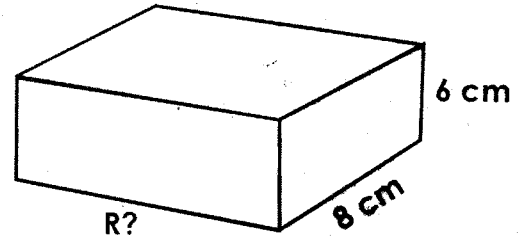
$$5x + 4 - 3x = 12$$

A. 1 B. 6
C. 2 D. 4

6. Juma carried 6kg 950g while Ali carried 4.8kg of sugar. What was the total mass of the sugar carried by both Ali and Juma?

A. 10kg 958g B. 11kg 750g
C. 11kg 1750 g D. 1.175kg

7. The volume of the cuboid below is 576cm^3 . Find its length



A. 12cm B. 14cm
C. 12cm^3 D. 48cm

8. Which of the numbers below is divisible by 6?

A. 41824 B. 892
C. 7332 D. 10039

9. What is the perimeter of a rectangle which measures 64cm by 48cm?

A. 448cm B. 112cm
C. 3072cm D. 224cm

10. The distance from Naomis home to the shops is 2km 200m. One day, she was sent to the shops three times. What distance did she cover?

A. 8km 800m B. 13km 200m
C. 4km 400m D. 6km 600m

11. Complete the blank using less than, equal to or greater than

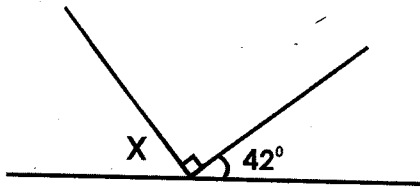
$$\frac{4}{5} \text{ ______ } \frac{7}{8}$$

A. less than B. greater than
C. equal to D. none

12. A lorry left a check point at 11.25 a.m. It took 3 hours 45 minutes to reach the next check point. At what time did it reach the check point?

- A. 1510 p.m B. 3.10 a.m
C. 3.10 pm D. 4.20 p.m

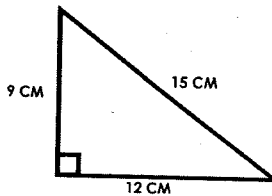
13. What is the value of the missing angle in the figure below?



- A. 90° B. 46°
C. 48° D. 58°
14. Write $\frac{9}{25}$ as decimal
- A. 0.28 B. 0.39
C. 0.63 D. 0.36
15. What is the total value of digit 7 in the number 419.317?

- A. Seven hundredths B. Seven thousandths
C. Thousands D. 0.07

16. Calculate the area of the triangle



- A. 54cm^2 B. 810cm^2
C. 36cm^2 D. 108cm^2
17. Work out :-
 $\frac{6}{7} + \frac{3}{4} =$
- A. $2\frac{7}{28}$ B. $1\frac{17}{45}$
C. $1\frac{17}{28}$ D. $1\frac{17}{45}$
18. Kiama bought the following items :-
A dress at sh 250
2 packets of maize meal @ sh 114
 $\frac{1}{2}$ kg of rice @sh 120 per kg
How much balance did he get from a sh 1000 note?

- A. Sh 516 B. Sh 462
C. Sh 538 D. Sh 402

19. Subtract 800 g from $4\frac{1}{2}$ kg

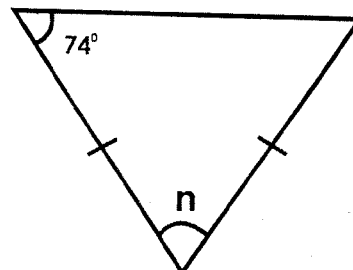
A. 370 kg B. 3800g
C. 5300g D. 3700g

20. The table below shows postal charges for sending letters

LETTERS Maximum mass 2kg	Sh	cts
Up to 20 g	25	00
Over 20g up to 50g	44	00
Over 50g up to 100g	86	50
Over 100g up to 250	105	00
Over 250 up to 500g	150	00
Over 500 up to 1kg	240	00
Over 1kg up to 2kg	280	00

How much would it cost to send 3 letters, one weighing 90g, another one 48g and the other one weighing 1.4kg?

- A. sh 471.50 B. sh 410.50
C. sh 476.50 D. sh 393.50
21. Convert 3750 millilitres into litres?
- A. 0.375 L B. 37.5 L
C. 375 L D. $3\frac{3}{4}$ L
22. Work out :-
 $8\frac{1}{2} - 5\frac{1}{6}$
- A. $3\frac{1}{4}$ B. $3\frac{1}{3}$
C. $3\frac{2}{3}$ D. $13\frac{1}{4}$
23. Find the value of angle n in the figure below



- A. 32° B. 148°
 C. 74° D. 42°

24. Simplify :-

$$2p + 3w - p + 2w + 6 =$$

- A. $3p + 5w + 6$ B. $p + w + 6$
 C. $p + 5w + 6$ D. $p - 5w + 6$

25. Add :-

Hr	Min
4	55
+ 2	35

- A. 6h 30min B. 6h 20min
 C. 6h 80min D. 7h 30min

26. What is the value of

$$5.4 - 2.562?$$

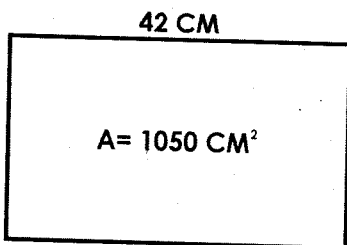
- A. 2.388 B. 2.838
 C. 2.883 D. 2.962

27. Work out :-

$$12 \times 3\frac{3}{4}$$

- A. $46\frac{1}{4}$ B. $36\frac{3}{4}$
 C. 45 D. $3\frac{1}{5}$

28. The area of the rectangle below is 1050cm^2 . What is the perimeter of the rectangle?



- A. 268cm B. 2108cm
 C. 25cm D. 134cm

29. What is the GCD of 54 and 90?

- A. 18 B. 270
 C. 27 D. 9

30. What is $\frac{42}{56}$ written in the simplest form?

- A. $\frac{4}{5}$ B. $\frac{6}{8}$
 C. $\frac{2}{3}$ D. $\frac{3}{4}$

31. What is the next numbers in the pattern below?

$$5, 9, 17, 21, 29, \underline{\hspace{2cm}}$$

- A. 33 B. 37
 C. 42 D. 38

32. What is the sum of the prime numbers between 40 and 50?

- A. 131 B. 84
 C. 88 D. 180

33. Which of the numbers below is NOT a prime number?

- A. 71 B. 97
 C. 39 D. 83

34. How many 250ml containers would be used to fill a 25 litre container?

- A. 100 B. 10
 C. 1000 D. 1500

35. Subtract $\frac{3}{4}$ from the sum of $2\frac{1}{2}$ and $\frac{3}{8}$

- A. $2\frac{5}{8}$ B. $3\frac{5}{8}$
 C. $2\frac{1}{8}$ D. $1\frac{1}{8}$

36. Otiato is 16 years old. Her brother is a half as old as her. What is the sum of their ages?

- A. 24 years B. 22 years
 C. 8 years D. 18 years

37. The number XLII written in Hindu/Arabic is?

- A. 39 B. 49
 C. 42 D. 52

38. Complete the missing numbers

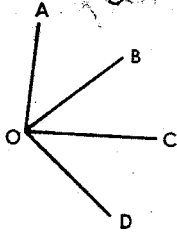
$$\frac{2}{3} = \frac{\square}{18} = \frac{18}{\square}$$

- A. 24, 30 B. 12, 27
 C. 6, 27 D. 12, 30


39. What is the least common multiple of 15, 18, and 30?

- A. 120
C. 60
- B. 6
D. 90

40. Which is the largest angle in the figure below?



- A. AOB
C. COD
- B. COA
D. DOA
41. On a certain map, 1 cm represents 5M. What would be the drawing length for 125M?
- A. 25cm
C. 5cm
- B. 625cm
D. 25m
42. How many cubes makes up the stack below?



- A. 72
C. 48
- B. 60
D. 56
43. Which of the numbers below is one hundred and forty three thousand four hundred and forty three?
- A. 143443
C. 14343
- B. 143043
D. 104442
44. Convert $4\frac{3}{8}$ into improper fractions
- A. $\frac{8}{35}$
C. $\frac{36}{8}$
- B. $\frac{22}{8}$
D. $\frac{35}{8}$
45. Arrange $\frac{2}{3}$, $\frac{5}{8}$, $\frac{5}{6}$ and $\frac{3}{4}$ from the smallest to the largest
- A. $\frac{5}{6}$, $\frac{3}{4}$, $\frac{2}{3}$, $\frac{5}{8}$
C. $\frac{5}{8}$, $\frac{2}{3}$, $\frac{3}{4}$, $\frac{5}{6}$
- B. $\frac{5}{8}$, $\frac{3}{4}$, $\frac{2}{3}$, $\frac{5}{6}$
D. $\frac{5}{6}$, $\frac{3}{4}$, $\frac{2}{3}$, $\frac{5}{8}$

46. Work out :-

$$44.16 \times 38 =$$

- A. 16780.8
B. 1678.08

- C. 167.808
D. 1688.08

47. Evaluate :-

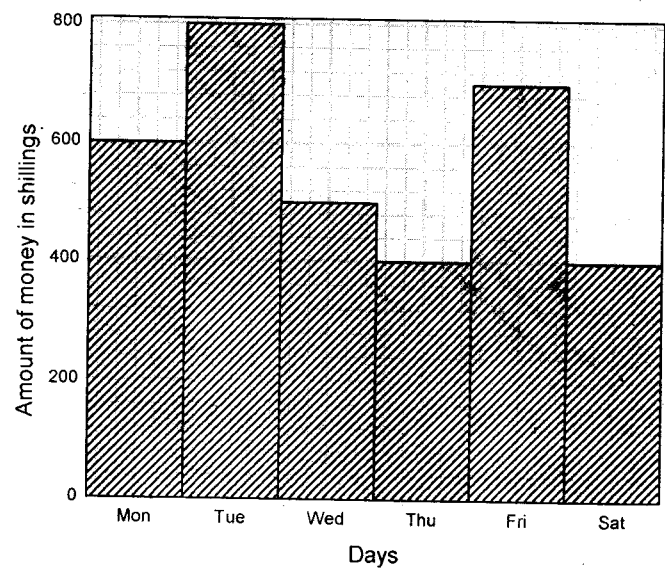
$$23494 \div 7 =$$

- A. 3356 rem 2
C. 33560 rem 2
- B. 3356 rem 20
D. 356 rem 20

48. What is the approximate mass of your Mathematics teacher?

- A. 75kg
C. 780kg
- B. 750g
D. 7.8kg

The graph below show the amount of money paid by tourists as entry fee to a game park in one week. Use it to answer a question 49 and 50



49. On which day was the highest amount of money collected?
- A. Monday
B. Friday
C. Tuesday
D. Thursday
50. How much money was collected in the last 3 days of the week?
- A. sh 1850
C. sh 1900
- B. sh 1500
D. sh 1450

STEGA SERIES

STANDARD FIVE 2015

SCIENCE

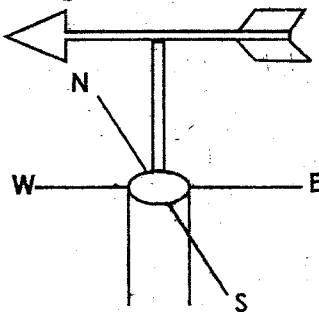
Time: 1 hour 40 min

1. Which teeth are NOT part of the deciduous set?
 - A. Molars
 - B. Canines
 - C. Premolars
 - D. Incisors

2. Which non-green plant is useful?
 - A. Ringworm
 - B. Dandruffs
 - C. Athlete's foot
 - D. Penicillium

3. Plants make their own food through a process called
 - A. chlorophyll
 - B. transpiration
 - C. photosynthesis
 - D. evaporation

4. The diagram below show a weather instrument called



- A. windsock
 - B. windvane
 - C. air thermometer
 - D. rain gauge

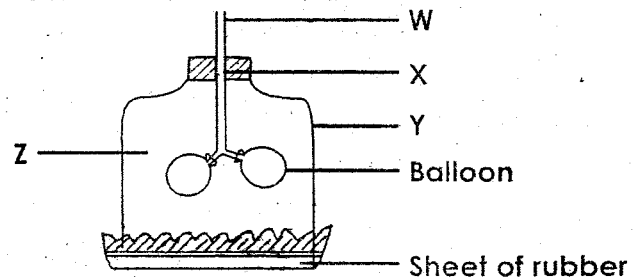
5. Which of the animals below feeds on flesh?
 - A. Zebra
 - B. Pigs
 - C. Sheep
 - D. Tiger

6. A certain soil has the following characteristics:-
 - (i). Medium sized particles
 - (ii). Its a mixture of two soils
 The soil is

- A. loam
 - B. clay
 - C. sandy
 - D. alluvial

7. Which of the animals is the odd one out?
 - A. Trout
 - B. Tilapia
 - C. Shark
 - D. Whale

Study the diagram below and answer questions 8 to 9



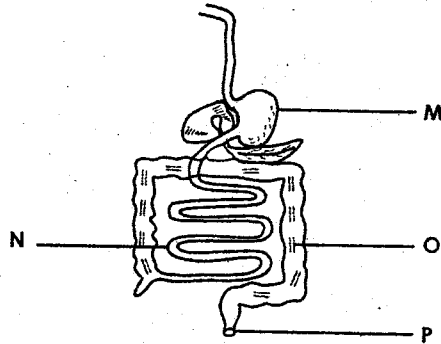
8. The part marked W represents the
 - A. bronchus
 - B. lungs
 - C. trachea
 - D. bronchiole

9. Which of the labelled parts represents the chest?
 - A. X
 - B. Y
 - C. Z
 - D. W

10. Which pair of plants have a fibrous root system?
 - A. Sorghum, beans
 - B. Peas, groundnuts
 - C. Millet, rice
 - D. Coconut, beans

11. The rainwater collected in a rain gauge should be measured
 - A. twice a day
 - B. at the same time each day
 - C. every week
 - D. after two hours

12. Which of the foods is a source of energy?
 A. Fish B. Kales
 C. Aoney D. Milk
13. Orina observed coffee berries being cleared before processing. This was use of water
 A. for recreation B. in industries
 C. on the farm D. at home
14. The diagram below represents the digestive system

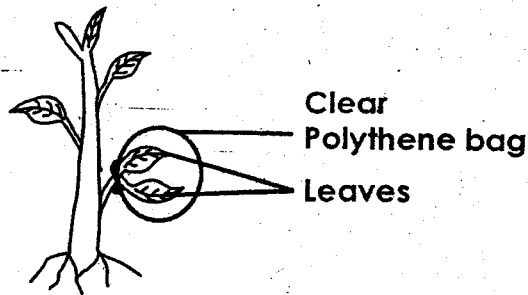


Digestion of food ends in the part marked

- A. P B. M
 C. O D. N
15. Which of the following CANNOT prevent tooth decay?
 A. Having regular dental check- ups
 B. Eating sugarcane
 C. Brushing teeth after every meal
 D. Eating biscuits regularly
16. The mouth is connected to the stomach by the
 A. liver B. oesophagus
 C. trachea D. bronchus
17. Which property of soil does NOT depend on its size of particles?
 A. Colour B. Texture
 C. Capillarity D. Drainage

18. Which characteristic is common to reptiles, amphibians and fish?
 A. Scale on the body
 B. External fertilisation
 C. Cold blooded
 D. Internal fertilisation
19. A piece of metal can be made to float on water by changing its
 A. material B. size
 C. shape D. weight
20. Which term is NOT used to describe the first set of teeth?
 A. Deciduous teeth B. Temporary teeth
 C. Primary teeth D. Wisdom teeth
21. Which one is INCORRECT about all animals?
 A. They make their own food
 B. They move from place to place
 C. They react to changes
 D. They reproduce
22. In which part of the breathing system is air cleaned?
 A. Nose and lungs
 B. Nose only
 C. Trachea and nose
 D. Trachea and diaphragm
23. Which one is NOT a use of heat?
 A. Cooking B. Lighting
 C. Ironing D. Drying
24. A wheelbarrow is BEST maintained by
 A. cleaning B. sharpening
 C. storing it well D. oiling

25. Jane covered some leaves in a clear polythene as shown below

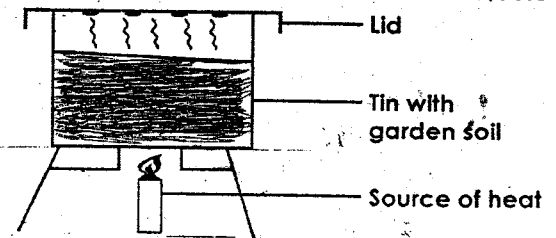


The process being investigated is

- A. breathing B. photosynthesis
 C. transpiration D. absorption
26. Which one is NOT a tuber crop?
 A. Irish potatoes B. Cassava
 C. Yams D. Groundnut
27. Which one is NOT a source of loud sound?
 A. Pupils talking at the same time in class
 B. Calling someone who is 100m away
 C. Whispering to someone
 D. A low-flying aircraft
28. Which weather instrument functions under the principle of expansion and contraction of air?
 A. Air thermometer
 B. Liquid thermometer
 C. Windsock
 D. Windvane
29. In which stage of HIV infection is the victim said to have developed AIDS?
 A. Incubation
 B. Fullblown
 C. Window
 D. Symptomatic
30. Which pair of teeth have similar functions?
 A. Premolars and canines
 B. Molars and premolar

- C. Incisors and canines
 D. Canines and premolars

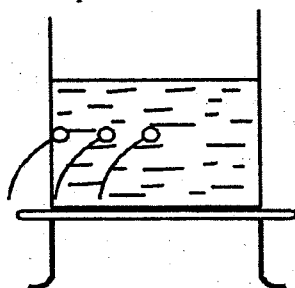
31. Which of the weeds is poisonous?
 A. Pigweed B. Sodom apple
 C. Thorn apple D. Oxalis
32. Which of the small animals is **WRONGLY** grouped?
 A. weevil B. spider
 C. mite D. scorpion
33. Heat travel in solids by
 A. conduction B. radiation
 C. convection D. expansion
34. Soil was heated in a container as shown below



The experiment was used to show that

- A. water has soil B. soil has water
 C. soil has air D. air has water
35. Std 4 pupils observed clouds which were feathery and white in colour. The clouds were also **LIKELY** to
 A. have rounded masses on top
 B. be low in the sky
 C. cover the whole sky
 D. Indicate rain
36. The humus in the soil is also known as
 A. Mineral salts B. Inorganic matter
 C. Organic matter D. Organisms
37. Which one is NOT a characteristic of all mammals?
 A. Body covered with hair or fur
 B. Feeding young ones on milk
 C. Giving birth to live young ones

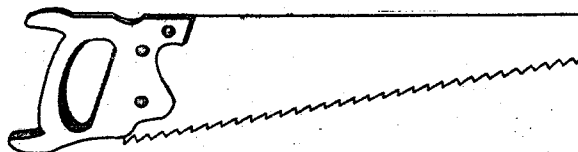
- D. Warm blooded
38. Birds kept for meat are known as
- A. Hens B. Layer
- C. Beef D. Broilers
39. The diagram below represents of experiment done by a group of std 4 pupils to demonstrate that pressure in liquids



- A. increases with depth
- B. is equal at the same depth
- C. decreases with depth
- D. is different at equal depths
40. Which one of the materials below can reflect light?
- A. A mirror B. A piece of wood
- C. Dirty water D. A piece of paper
41. Which one is NOT a cash crop?
- A. sisal B. sunflower
- C. peas D. cotton
42. One of the following is NOT a problem related to teeth. Which one is it?
- A. Cavities B. Tooth decay
- C. Bad breath D. Shedding teeth
43. Which one is NOT a way of caring for animals at home?
- A. Feeding them B. Proper housing
- C. Watering them D. Overworking them
44. Water is made safe for drinking by
- A. filtering
- B. boiling

- C. sieving
- D. keeping in clean containers

45. The condition where one is unable to remove solid waste properly is known as
- A. dehydration B. dryness
- C. constipation D. diarrhoea
46. Which one of the following is NOT a use of wind?
- A. Felling B. Winnowing
- C. Sailing boats D. Rotating windmills
47. The surroundings of an animal make up its
- A. habitat B. home
- C. environment D. house
48. The tool below is BEST maintained by



- A. oiling B. sharpening
- C. cleaning after use D. repairing the blade
49. A wind sock is painted with bright stripes MAINLY
- A. to last longer B. to look attractive
- C. to make it strong D. for visibility
50. The vitamin needed for good eye sight is
- A. Vitamin A
- B. Vitamin D
- C. Vitamin K
- D. Vitamin B

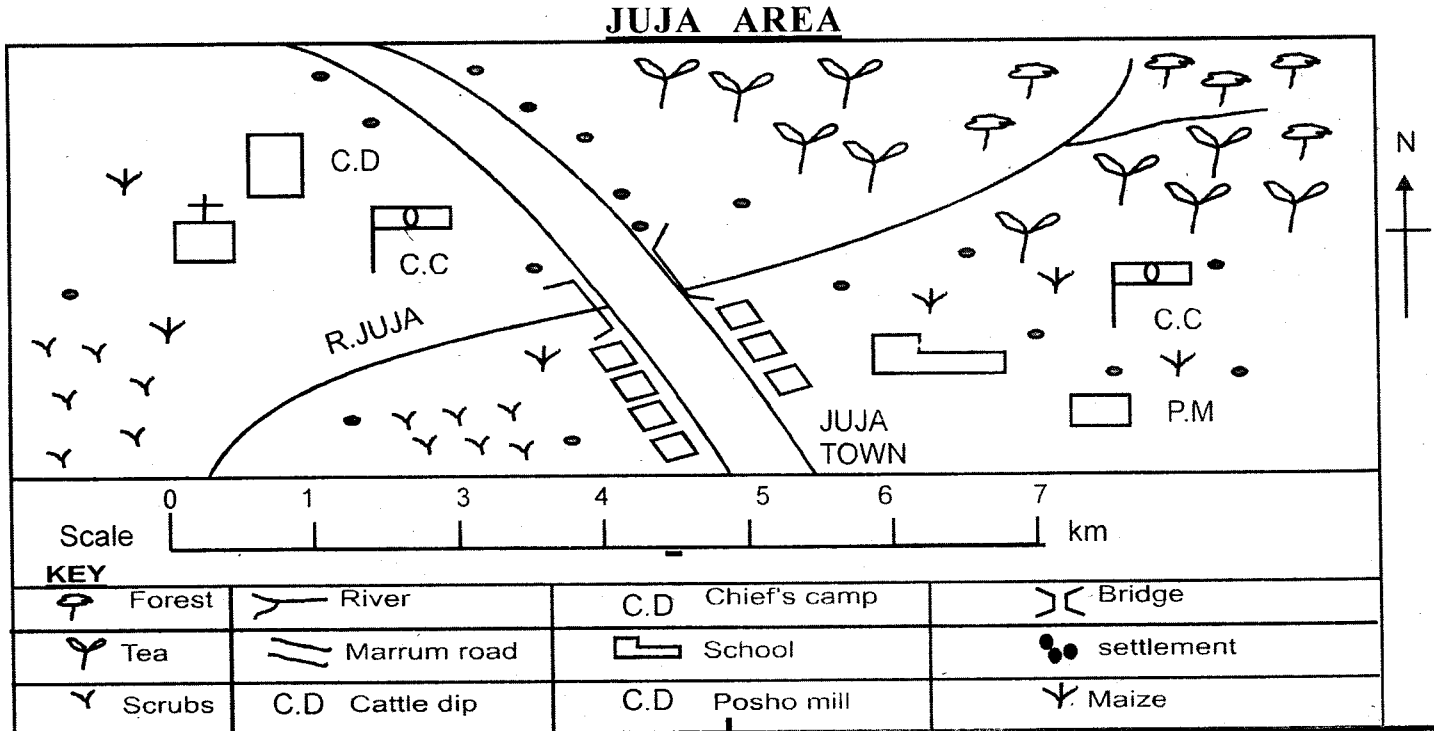
STEGA SERIES

STANDARD FIVE 2015

SOCIAL STUDIES

Time: 2hours :15 Min

Use the map of Kangari area to answer questions 1-7.



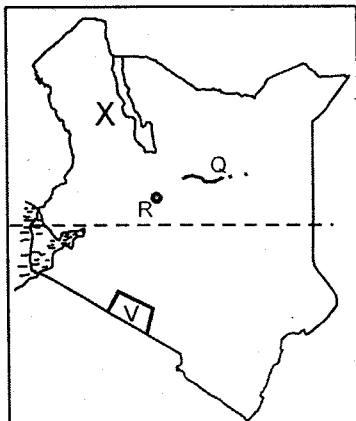
1. What is the main occupation of the people living in Juja town?
 A. trading
 B. crops growing
 C. livestock keeping
 D. mining
2. What is the approximate length of the road in kilometers?
 A. 5 km
 B. 5.5 km
 C. 4.5 km
 D. 6 km
3. The type of natural vegetation found in North East of Juja area is
 A. thicket
 B. forest
 C. scrub
 D. papyrus
4. The main cash crop in Juja area is
 A. coffee
 B. sisal
 C. cotton
 D. tea
5. What is the direction of the church from the school?
 A. North West
 B. North East
 C. South West
 D. South East
6. The common means of transport in the area is
 A. water
 B. road
 C. railway
 D. air
7. What evidence in the map shows that the area receives low rainfall? The presence of
 A. forest
 B. scrub
 C. cattle dip
 D. maize
8. The growing of crops and trees in the same piece of land is known as
 A. forestation
 B. arable farming
 C. agro-forestry
 D. forestry
9. The physical region that covers most parts of Kenya is the
 A. plateau
 B. plains
 C. highlands
 D. valleys
10. The main function of a compass is
 A. guiding tourists
 B. piloting ships
 C. finding directions
 D. finding speed of wind
11. In Kenya Soda ash is mined at
 A. Kariandusi
 B. Lake Magadi
 C. Lake Bogoria
 D. Kerio valley
12. Which one of the following lakes in Kenya is found outside the Rift valley?
 A. Lake Baringo
 B. Lake Magadi
 C. Lake Trukana
 D. lake Victoria
13. In Kenya tea is mainly grown for
 A. export
 B. brewing alcohol
 C. making milk
 D. making ropes
14. Which one of the following communities belong to the cushites?
 A. Abakuria
 B. Agiriama
 C. Agikuyu
 D. Orma
15. Which one of the following was NOT a means of communication used in Kenya in the Olden days
 A. writing telegrams
 B. beating drums
 C. blowing horns
 D. sending a messenger

16. The main tourist attraction to Kenya is
 A. Sandy beaches B. Wildlife
 C. Mangrove forest D. Rift valley
17. Which one of the following is a manufacturing industry?
 A. tourism B. glass making
 C. shoe shine D. water repair
18. The source of River Turkwel is
 A. Lake Turkana B. Mount Elgon
 C. Cherangani Hills D. Kerio valley
19. In Kenya dairy farming is mainly carried out in
 A. Mombasa county B. Nairobi county
 D. Kajiado county D. Kiambu county
20. Which method is used to extract salt from lake Magadi
 A. Evaporation B. Dredging
 C. Panning D. Open cast
21. One of the methods of preserving fish in Kenya used before the arrival of the British is
 A. canning B. freezing
 C. sun drying D. iceing
22. The road sign below informs the drivers that



- A. there is danger ahead
 B. school children are crossing nearby
 C. there is a railway crossing
 D. around about is just ahead
23. The main type of fish caught from Lake Turkana is
 A. Nile perch B. blackbass
 C. trout D. mudfish
24. The land that is fairly high and flat at the top is known as
 A. valley B. plateau
 C. highland D. mountain
25. In Kenya census is carried out after every
 A. ten years B. five years
 C. five days D. twenty days

Use the map of Kenya below and answer questions 26 to 29

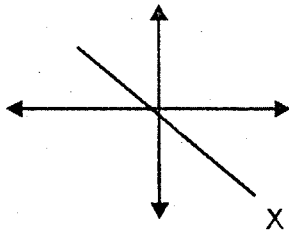


26. The river marketd Q is

- A. River Athi B. River Sondu
 C. River Ewaso Nyiro D. River Dava
27. The main economic activity in the area marked V is
 A. tea growing B. tourism
 C. fishing D. forestry
28. The town marked R is
 A. Nakuru B. Mombasa
 C. Eldoret D. Malindi
29. The main language group that occupied the area marked X in the map before the coming of the Europeans were
 A. Highland nilotes B. Western bantu
 C. River lake nilotes D. Plain nilotes
30. The word urbanization means
 A. the total number of towns
 B. origin and growth of town
 C. growth of slums
 D. the use of towns
31. Barter trade is
 A. exchange of goods
 B. buying from one another
 C. buying of goods
 D. trade between any two people
32. The most common type of birds in lake Bogoria is
 A. flamingo B. wild duck
 C. wood pecker D. ostrich
33. A community in Kenya famous for long distance trade during the pre-colonial days were the
 A. Agikuyu B. Pokot
 C. Akamba D. Taita
34. The mountain located at the border of Kenya and Tanzania is
 A. Mount Kilimanjaro B. Mount Kenya
 C. Mount Marsabit D. Mount Paradise
35. In the past marraiges in Kenya were arranged by
 A. priests B. bishops
 C. elders D. couples
36. Which one of the following is an example of a fresh water fish?
 A. Tuna B. Mullet
 C. Sardine D. catfish
37. It is true to say that Kenya lies between latitudes
 A. 5° N and 5° S B. 5 °N and 5° N
 C. 5° E and 5° W D. 5° W and 5° W
38. The height of a given place from the level of the sea is known as its
 A. latitude B. altitude
 C. climate D. plains
39. A member of the county assembly is elected in an area called
 A. constituency B. ward
 C. location D. country
40. Menengai crater is located in a county called
 A. Nakuru B. Kericho
 C. Uasin Gishu D. Laikipia
41. Which one of the following lakes in Kenya is not used for fishing?

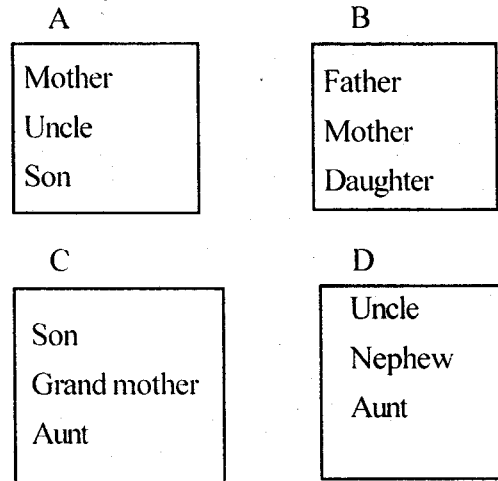
- A. Lake Baringo B. Lake Elementaita
C. Lake Turkana D. Lake Victoria
42. Which one of the following communities was famous for shifting cultivation before the coming of the British?
A. Nandis
B. Aembu
C. Maasai
D. Njemps
43. Which one of the following will NOT cause conflict in the society?
A. unselfishness B. hatred
C. tribalism D. favourism
44. The type of democracy practised in our country is
A. delegative democracy
B. direct democracy
C. representative democracy
D. appointment democracy
45. The climatic conditions in the Nyika plateaus can be said to be
A. cool and wet B. warm and dry
C. cool and dry D. hot and dry
46. In the Traditional African Society the beginning of adulthood was marked by
A. initiation B. birth
C. marriage D. tattooing
47. Which one of the following does not belong to the Western Bantu?
A. Abakuria B. Abasuba
C. Agiriama D. Abagusii

Use the diagram to answer questions 48 and 49

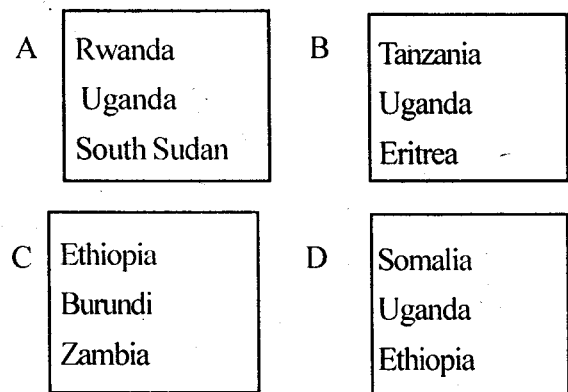


48. The diagram above represents
A. a compass B. magnetic North
C. director D. windvane
49. The point marked X is
A. North East B. North West
C. South East D. South West
50. Which one of the following does NOT make the culture of a given community?
A. food B. dressing
C. building style D. ceremonies
51. Which one of the following is a tributary of river Tana
A. Galana B. Sabaki
C. Nyamindi D. Sio
52. Which one of these counties does not border the Indian Ocean?
A. Mombasa B. Taita Taveta
C. Kilifi D. Kwale
53. Which one of the following areas in Kenya is NOT densely populated?
A. Nairobi B. Vihiga
C. Nyeri D. Marsabit

54. In Kenya maize was introduced by the
A. Portuguese B. Italians
C. Arabs D. British
55. Which one of the following is NOT an element of weather?
A. Latitude B. Rainfall
C. Temperature D. Wind
56. Which one of the following is NOT a member of the cabinet in Kenya?
A. President B. Deputy President
C. Cabinet Secretary D. Chief justice
57. Which one of the following belongs to a nuclear family?



58. Before the coming of the Europeans a way of treating the sick was by
A. eating meat
B. using herbs
C. drinking blood
D. performing physical exercise
59. In the traditional African Society ceremonies were held mainly for people to
A. display their gifts
B. eat special food
C. mark major events
D. meet their neighbours
60. Which groups of the following countries consists of neighbours of Kenya



CRE

61. Which one of the following was created on the fifth day?
A. birds B. all animals C. plants D. land
62. Terah was the father of _____
A. Moses B. Abraham
C. Haran D. Isaac
63. Mary was chosen to be the mother of Jesus because she was
A. a virgin B. greatly blessed
C. Elizabeth's cousin D. going to marry Joseph
64. The greatest commandment tells us to
A. respect our parents
B. keep the sabbath day Holy
C. Love God
D. Worship God only
65. The statement "On the third day He rose again from the dead" is found in the _____
A. Lord's prayer B. Apostles creed
C. Psalms of David D. Hymns
66. _____ and _____ lied to the Holy Spirit and died
A. Martha and Lazarus
B. Hannah and Elikana
C. Jacob and Rebecca
D. Ananias and Sapphira
67. Which commandment tells us to respect human life?
A. Do not steal
B. Do not kill
C. Do not cheat
D. Do not commit adultery
68. Who among the following was not one of the twelve disciples of Jesus?
A. James B. Stephen
C. John the baptist D. Judas
69. Jesus required _____ from people who came to Him for healing
A. faith B. money
C. prayers D. acceptance
70. Who among the following was told to take care of all God's creation?
A. Jesus B. Man
C. An angel D. The Holy Spirit
71. Jesus was baptised by _____ in the River Jordan
A. John the baptist B. God
C. Angel Gabriel D. The Spirit of God
72. After conversion Saul became _____
A. Philip B. Andrew
C. Paul D. Peter
73. Another name for Peter is _____
A. James B. John
C. Simon D. Andrew
74. The promise of the birth of the prince of peace was foretold by prophet _____
A. Samuel B. Jeremiah
C. Ezekiel D. Isaiah
76. Which of the following would cause God not to hear our prayers?
A. Love B. Sin

- C. Friendship D. Humility
76. When Jesus was on the cross, there was darkness for _____ hours
A. four B. six
C. two D. three
77. The second king of Israel was anointed by prophet _____
A. Jeremiah B. Samuel
C. Nathan D. Daniel
78. In which of the following ways should we not treat the street children?
A. care for them B. protect them
C. beat them D. help them
79. The wise men were led to where Jesus was born by _____
A. Angels B. a bright star
C. King Herod D. Joseph
80. On which mountain was Moses when he saw a burning bush?
A. Ararat B. Nebo
C. Ur D. Sinai
81. The soldiers arrested Jesus at the garden of _____
A. Eden B. Jerusalem
C. Gethsemane D. Galilee
82. Jesus ascended into heaven at a place called
A. Jerusalem B. Bethany
C. Nazareth D. Bethlehem
83. Which one of the following is not a gift of the Holy Spirit
A. faithfulness B. faith
C. knowledge D. wisdom
84. It is the belief of all Christians that Jesus _____
A. Will judge only the living
B. rose from the dead
C. was never crucified
D. descended into heaven
85. Lake Galilee is also called lake _____
A. Sea B. Tiberius
C. Horeb D. Ararat
86. A baby stays in the mother's womb for _____
A. nine days B. nine years
C. nine weeks D. 9 months
87. I am _____ and wonderfully made
A. beautifully B. smartly
C. fearfully D. physically
88. Christians best express their faith in God through _____
A. actions B. singing
C. praying D. reading the bible
89. The ten commandments are written in the book of _____
A. Genesis B. John
C. Exodus D. Mathew
90. Which of the following statements is true?
A. We should worship other gods
B. We should worship other gods once
C. We should make images to worship
D. We should worship God alone

STEGA SERIES - STD 5

MARKING SCHEME 2015

<u>ENGLISH</u>		<u>KISWAHILI</u>		<u>MATHS</u>		<u>SCIENCE</u>		<u>SOCIAL STUDIES</u>		
1. D	31. A	1. B	31. C	1. D	31. A	1. A	31. C	1. B	31. A	61. A
2. A	32. C	2. C	32. B	2. C	32. A	2. D	32. A	2. B	32. A	62. B
3. C	33. C	3. A	33. C	3. A	33. C	3. C	33. A	3. B	33. C	63. B
4. B	34. D	4. C	34. D	4. D	34. A	4. B	34. B	4. D	34. A	64. D
5. B	35. A	5. D	35. B	5. D	35. C	5. D	35. A	5. A	35. C	65. B
6. A	36. B	6. C	36. A	6. B	36. A	6. A	36. C	6. B	36. D	66. D
7. D	37. D	7. A	37. B	7. A	37. C	7. D	37. C	7. B	37. A	67. B
8. C	38. C	8. D	38. C	8. C	38. B	8. C	38. D	8. C	38. B	68. C
9. A	39. A	9. C	39. C	9. D	39. D	9. B	39. B	9. A	39. B	69. A
10. D	40. B	10. D	40. C	10. B	40. D	10. C	40. A	10. C	40. A	70. B
11. B	41. D	11. C	41. D	11. A	41. A	11. B	41. C	11. B	41. B	71. A
12. C	42. C	12. A	42. B	12. C	42. B	12. C	42. D	12. D	42. B	72. C
13. D	43. C	13. C	43. A	13. C	43. A	13. B	43. D	13. A	43. A	73. C
14. A	44. D	14. B	44. B	14. D	44. D	14. D	44. B	14. D	44. C	74. D
15. C	45. C	15. A	45. C	15. B	45. C	15. D	45. C	15. A	45. D	75. B
16. B	46. B	16. C	46. B	16. A	46. B	16. B	46. A	16. B	46. A	76. D
17. D	47. C	17. D	47. B	17. C	47. A	17. A	47. C	17. B	47. C	77. C
18. D	48. A	18. C	48. C	18. B	48. A	18. C	48. B	18. B	48. A	78. C
19. A	49. D	19. D	49. B	19. D	49. C	19. C	49. D	19. D	49. C	79. B
20. B	50. B	20. B	50. C	20. B	50. B	20. D	50. A	20. B	50. C	80. D
21. C		21. B		21. D		21. A		21. C	51. C	81. C
22. A		22. D		22. B		22. C		22. A	52. B	82. B
23. D		23. B		23. A		23. B		23. A	53. D	83. A
24. B		24. C		24. C		24. D		24. B	54. A	84. B
25. A		25. D		25. D		25. C		25. A	55. A	85. B
26. B		26. C		26. B		26. D		26. C	56. D	86. D
27. D		27. A		27. C		27. C		27. B	57. B	87. C
28. C		28. C		28. D		28. A		28. C	58. B	88. A
29. B		29. C		29. A		29. D		29. D	59. C	89. C
30. D		30. D		30. D		30. B		30. B	60. D	90. D

A COMPOSITION MARKING SCHEME

MARKING CRITERION

- The composition will be assessed according to the following guidelines.
 - The maximum mark will be 40 and the minimum (mark 01)
 - Does the script show that the candidate can communicate accurately, fluently and imaginatively in English?

Accuracy (8 marks)

- (16)
- | | |
|--|---|
| a) Correct tenses and agreement of verbs (4 marks) | b) Accurate use of vocabulary (4 marks) |
| c) Following a sequence (4 marks) | d) Correct punctuation (4 marks) |

Fluency (8 marks)

- | | |
|---|--|
| a) Words in the correct order (4 marks) | b) Sentence connection and paragraphs (4 marks) |
| c) Correct spelling (4 marks) | d) Ideas developed in logical sequence (4 marks) |

Imagination (8 marks)

- Unusual but appropriate use of words and phrases (4 marks)
- Variety of structure (4 marks)

NB: Please, teachers are requested to scrutinize this marking scheme before use, it is worth