

PERFECT ENERGIZER SERIES

STD 3 - YEAR 2015

ENGLISH



NAME: _____

SCHOOL _____

DATE _____

Dictation

- _____
- _____
- _____
- _____
- _____

Write the opposite

- Dark _____
- Enemy _____
- Strong _____
- Good _____

Complete the following

- As white as _____
- As sweet as _____
- As light as a _____

Use 'too', 'to', 'two' in the sentences

- Moses is going _____ school.
- There are _____ eggs in the basket.
- This tea is _____ hot.

Write well

- armket _____
- edaldr _____
- blckaobard _____

Match the words

- Sun light
- Moon ground
- Play flower

Add 'er' or 'est'

- Juma is the _____ in the family. (short)
- Anna is _____ than Mary. (tall)

Choose the correct answer

- Teacher _____ everyday. (write, wrote, writes)
- Maina _____ football. (play, playing, plays)
- We _____ our work yesterday. (do, did, done)

Write in plural


- 27. Sheep _____
- 28. Chief _____
- 29. Library _____
- 30. Child _____
- 31. Knife _____


Write the correct answer from the box


(baker, postman, mechanic, butcher, barber)


- 32. A _____ sells us meat.
- 33. My birthday cake was bought from a _____
- 34. Our car was repaired by a _____
- 35. I cut people hair. I am a _____
- 36. He delivers our letter. He is a _____

Use 'in', 'on', 'under', 'between'

- 37.  The ball is _____ the chair.

- 38.  The girl is _____ the tree.

- 39.  The book is _____ the table.



- 40.  The spoon is _____ the table.

Use 'there' or 'their'

- 41. Put the books on _____ tables.
- 42. The children have gone _____
- 43. I have _____ pencils.

- 44. She went _____ to see her friends.

Name the picture



Read the story then answer the questions

Father has a fish pond. He has many fish pond. They use a hoe and spade when they plant flower seed. The fish pond looks very good.

At night mother lets them play with the dog and the duck. Father says, 'before you go to play, feed the dogs then feed the fish'. When Linda and Kim feed the fish, they see a big frog jumping in the fish pond. Linda says. "the big frog can eat the fish."

- 47. Who has a fish pond _____?
- 48. What have Linda and Kim planted around the fish pond? _____.
- 49. When does mother let them play with the dog and the buck _____?
- 50. Which animal jumps in the fish pond _____?

PERFECT ENERGIZER SERIES

STD 3 - YEAR 2015

MATHEMATICS

PES
008


NAME: _____

SCHOOL _____

DATE _____

1. $9 \overline{) 45}$

2. John had 18 sweets, if he shared them among his 3 friends, how many did each get? _____

3.  What part of fraction is shaded _____

4. A third of nine is _____

5. $\frac{9}{10} + \frac{0}{10} =$ _____

6. What is the place value of 2 in 2,480? _____

7. $435 + 125 =$ _____

8.
$$\begin{array}{r} 941 \\ - 188 \\ \hline \end{array}$$

9. A school has 969 people. If 450 are boys. How many girls are there? _____

10. How many days are there in 4 weeks? _____

11. A cow has 0 horns. How many horns do 8 dogs have? _____


12. What is the place value of the underlined digit 4532? _____

13.

<u>Weeks</u>	<u>days</u>
7	1
+ 1	3
<hr/>	
1	2

14.
$$\begin{array}{r} 45m \\ + 26m \\ \hline \end{array}$$

15. Name the shape of the object x



16.


<u>Sh.</u>	<u>Cts.</u>
75	10
+ 21	35
<hr/>	

17. Arrange from the smallest to the largest
731, 79, 239, 106, 04

18. Write in figures one hundred and thirty _____

19. Ogendi had a banana. He gave $\frac{1}{2}$ of it to John. How much of the banana was she left with? _____

20. What fraction is unshaded?



21. Subtract 21 from 81 = _____

$$\begin{array}{r} \text{M} \quad \text{cm} \\ 22 \quad 13 \\ + 30 \quad 8 \\ \hline \end{array}$$

23. 1kg of sugar costs Sh. 5. How many will 3kg cost? _____

24. The time is _____



25. How many weeks are there in 56 days. _____

26. Which is bigger? $\frac{1}{2}$ or $\frac{1}{4}$ _____


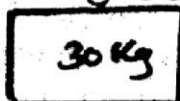
27. $52 - \square = 20$

28. A bread was cut into 24 equal slices. If every pupil ate 4 slices. How many pupils ate the bread? _____

29. $\frac{1}{3}$ of 12 = _____

30. Kendi has 16 goats. Each goat produces 5 litres of milk per day. How much milk does Kendi collect in a day? _____

31. How many small cans can fill this big can? _____



32. 5 eighths + 3 eighths = _____

33. $8 \times \underline{\quad} = 40$

$$\begin{array}{r} \text{Shs.} \quad \text{Cts.} \\ 70 \quad 75 \\ - 10 \quad 20 \\ \hline \end{array}$$

35. Write in figures six hundred and seven _____

36. $62 + 115 + 201 = \underline{\quad}$

37. $36 \div 6 = \underline{\quad}$

38. What is the difference between 23 and 14? _____

39. How many legs do eight cows have? _____

40. $634 = \underline{\quad}$ hundreds $\underline{\quad}$ tens $\underline{\quad}$ ones

41. What is the next number 3, 6, 9, 12, _____

42. $85 - 36 = \underline{\quad}$

43. Otieno bought a book at ten shillings and a pencil at three shillings. How much did Naomi use for buying a book and a pencil? _____

44. $56 = 8 \times \underline{\quad}$

45. A ten shillings coin has _____ shillings

Expand

46. $3962 = \underline{\quad} + \underline{\quad} + \underline{\quad} + \underline{\quad}$

47. 14 half litres + 23 half litres = _____ litres

48. Write in words: 12 _____

49. A book costs Sh. 12. 40cts. How much do 2 such books cost? _____

50. $\frac{5}{8} + \frac{\square}{8} = 1$

PERFECT ENERGIZER SERIES

DARASALATATUMWAKA WA - 2015

PES
008

KISWAHILI

JINA:

SHULE:

TAREHE:

Imla

1. _____
2. _____
3. _____
4. _____
5. _____

Andika maneno haya vizuri

6. lisimagi _____
7. kitabama _____
8. lebuse _____

Andika maana ya semi hizi

9. Ana mkono mrefu. Yeye ni _____
10. Nyanya amekula chumvi nyingi _____
(mwizi, amekufa, amezeeka)

Jaza nafasi zilizochwa

11. R__ nin__ a__
12. k__ g__ d__
13. Ch__ ng__
14. S__ b__ i__ n__

Tumia 'hii', 'hili', 'hiki' au

'hawa'

15. Mbuzi _____ wamevunjika
16. Meza _____ kimepakwa rangi.
17. Milango _____ imefungwa
18. Jibu _____ linafaa.
19. Veranda _____ ni chafu.

Andika kwa wingi

20. Mimi ni mkubwa _____
21. Chakula hiki ni kitamu _____
22. Kioo kimevunjika _____
23. Karatasi hii imevunjika _____

Andika tarakimu au maneno

24. 136 _____
25. Mia tisa na tano _____

Tumia sifa -epesi

26. Mama amepika ugali _____
27. Karatasi hii ni _____ sana.

Kamilisha sentensi na vitendawili

28. Ng'ombe dume huitwa _____
29. Zulia la Mungu _____
30. Kawia _____
31. Wakati wa uchaguzi watu hupiga _____
32. Maji yakimwagika _____

Kanusha sentensi hizi

33. Mtoto analia _____
34. Soma sentensi hili

35. Sisi tunakula

Taja wanyama hawa

36. Mnyama wa porini ni

37. Mnyama wa majini ni _____
(mbuzi, samaki, fisi)

Kamilisha methali

38. Njia ya mwongo ni _____
39. Jamaa mbele, maufi _____
40. Njia mbili zilimshinda _____
(fupi, fisi, nyuma)

Andika akisami hizi kwa maneno

41. $\frac{1}{2}$ _____
42. $\frac{3}{4}$ _____
43. $\frac{1}{4}$ _____

(robo moja, nusu, robo tatu)

Andika kinyume

44. Anika _____
45. Nenda _____

Kamilisha sentensi zifuatazo

46. Rangi ya juu katika bendera ya nchi yetu ni _____
47. Anayeendesha ndege huitwa _____
48. Mwalimu wangu wa darasa ni _____
49. Mtoto wa ndege anaitwa _____
50. Maziwa ni rangi ya _____

PERFECT ENERGIZER SERIES

STD 3 - YEAR 2015

READING / KUSOMA

PES
008

NAME:

SCHOOL

DATE

Read these words

- | | | | |
|----------------|----------------|------------------|----------------|
| 1. Song | 6. Labour | 11. Downpour | 16. Antiseptic |
| 2. Black board | 7. Trough | 12. Scratch card | 17. Typhoid |
| 3. Whisper | 8. Comfortable | 13. Basin | 18. Traffic |
| 4. Ambulance | 9. Sheep | 14. Drought | 19. Food |
| 5. Pencil | 10. Boundary | 15. Frightened | 20. Elephant |

Read these sentences

21. The tourists admired the butterflies.
22. Mr. Otieno spent the night in the hotel.
23. David and his father waited for the train at the railway station
24. The passengers spat on the floor of the bus.
25. The football team came in through the entrance.

KUSOMA

Soma maneno haya

- | | | | |
|------------|-------------|---------------|-------------|
| 1. Daftari | 6. Nyumba | 11. Paa | 16. Uzi |
| 2. Penseli | 7. Bustani | 12. Namamu | 17. Mgonjwa |
| 3. Mhogo | 8. Ngamia | 13. Chumba | 18. Msumeno |
| 4. Ufunguo | 9. Baiskeli | 14. Chandarua | 19. Nyepesi |
| 5. Gahasha | 10. Mswaki | 15. Mshumaa | 20. Mwili |

Soma sentensi hizi

21. Mama alitupikia chapati na nyama.
22. Baba yangu atakuja kesho.
23. Kuku ataliwa na mbweha.
24. Wanafunzi wataenda safari ya Mombasa.
25. Mbwa alibweka sana usiku.

PERFECT ENERGIZER SERIES

STD 3 - YEAR 2015


SCIENCE



PES
008

NAME: _____

SCHOOL _____

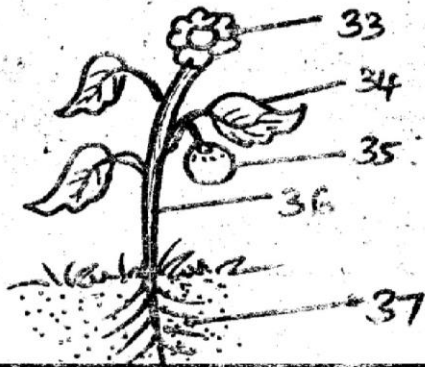
DATE _____

1. I am a small animal, I have eight legs and no wings. I am a _____ (spider, fly, bird)
2. Long sighted people can see things from very _____ (near, far, behind)
3. Plants that make food taste good are called _____ (spices, carrots, vegetables)
4. _____ is an insect which is very useful. (ant, bee, weevil)
5.  The balloon is full of _____ (air, light, soil)
6. A young frog is called a _____ (tadpole, child frog, froglet)
7. Objects that have smooth and shiny surfaces are usually _____ reflectors of light. (bad, good, not good)
8. A fish senses danger with its _____ (fins, gills, lateral line)
9. _____ is a source of water. (river, taps)
10. We clean toilets in order to keep away _____ (air, germs, people)

11. For a seed to germinate, it needs air, water and _____ (wind, warmth, soil)
12. _____ is not needed for good health. (food, exercise, sweets)
13.  This is _____
14. A _____ has no teeth. (snake, bird, lion)
15. A snake moves by _____ (walking, crawling)
16.  This is a _____
17. What makes it to fly _____ (rain, wind)
18. A true insect has _____ legs (8, 9, 6)
19. Which one of the following makes our teeth strong? _____ (milk, cassava, oranges, beans)
20. Animals breath in a gas called _____ (oxygen, carbon dioxide, air)


Match the plant with their uses

21. Flowers medicine
22. Mwarubaine insecticide
23. Pyrethrum beauty
24. The body of a bird is covered with _____
(scales, feathers, fur)
25. If you have a problem with your eyes, you visit a _____
(doctor, dentist, optician)
26. The sending back of light from an object is called _____
(reflection, filtering, coiling)
27. Which of these animals give birth to young ones _____
(bat, fish, toad)
28. Plants that shed their leaves are called _____ plants.
(dry, deciduous)
29. Water for drinking should be _____
(washed, boiled, warmed)
30. When you pour water in a container full of soil you will see _____
(air bubbles, balloons, wind)
31. _____ helps our bodies to be strong. (singing, exercising)
32. A hen gives us _____



38. We eat the _____ of a potatoes. (root, stem, leaves)
39. A _____ has prickly hair for protecting itself.
(dog, porcupine, bat)
40. A place where a plant grows is its _____.
(place, field, home, habitat)
41. Cactus plant grows on _____ areas. (dry, swampy, wet)
42. We get coffee drink from the _____
(leaves, berries, roots)
43. _____ are unwanted plants. (weeds, seedlings)

Name the following animals



Match the animals with their movements

- | | |
|------------|---------|
| 47. Cattle | hopping |
| 48. Flea | gliding |
| 49. Spider | flying |
| 50. Snail | walking |

PERFECT ENERGIZER SERIES

STD 3 - YEAR 2015




PES
008

SOCIAL STUDIES & C.R.E











NAME: _____


SCHOOL: _____

DATE: _____

1. The most important point of the compass is the _____
(South, East, North, West)
 2. Rivers, hills, forest, mountain, plain and ocean are examples of _____ features.
(economic, physical)
 3. A _____ is built across a river to store water.
(well, dam, borehole)
 4.  The weather is _____
 5. When rivers overflow they cause _____
(drought, floods)
 6. Basic needs are things which people _____ live without.
(can, cannot)
 7. Minerals are found under the _____
(trees, ground, house)
 8. _____ help us to carry heavy loads.
(cats, donkey, cows)
 9.  This source of water is a _____
(lake, river, rain)
 10. When we cut down trees, we should plant others. This is called _____
(re-forestation, planting, conservation)
 11. We take sick animals to a _____ doctor. (animal, veterinary)
 12. Rivers which flow throughout the year are called _____ rivers? (seasonal, permanent)
 13. We should always add _____ to the soil to make it fertile.
(manure, rubbish)
 14. Plain lands are good for _____
(fighting, farming)
 15. Reeds from swamps are used to make _____
(mats, pots)
 16. We get stones for building houses from a _____
(river, quarry, school)
 17. A _____ is a group of people living together.
(community, clan)
- 
18. A is a _____
 19. B is a _____
 20. C is a _____
(valley, hill, slope)
 21. When there are no clouds during the day, the sky is _____
(black, blue, white)
 22. Forest are good because they attract _____
(wind, rain, dust)

23. _____ means watering plants when there is no rain.
(flooding, pouring, irrigation)
Use the weather chart to answer questions 24 - 27.

Day	Morning	Afternoon
Mon		
Tue		
Wed		
Thur		
Fri		

24. Which day was the best for washing clothes? _____
25. Mary went to school in the morning with a jacket and an umbrella. It was on _____
26. On which day was it cloudy? _____
27. The weather on Thursday was _____ and _____
28.  Gumboots are worn on a _____ day.
(hot, wet, dry)
29. Cattle kept mainly for milk are called _____ cattle.
(beef, dairy)
30. Things that make up the weather are called _____ of weather.
(factors, elements, physical)

C.R.E.

31. Who saw a burning bush? _____
(Abraham, Moses, Joseph)
32. Joseph was sold to slavery by his _____
(enemies, brothers, friends)
33. _____ was known as the father of faith.
(John, Aaron, Abraham)
34. Which tribe called their God enkai? _____
(Kikuyu, Giriama, Maasai)

35. Our ancestors used to pray in _____
(churches, mosque, shrines)
36. _____ is the greatest commandment.
(do not kill, love, hatred)
37. Jesus performed his first miracle in _____
(Nazareth, Jerusalem, Cana of Galilee)
38. Jesus was born in a town called _____
(Bethlehem, Jerusalem, Nazareth)
39. Jesus took the children by hand and _____ them
(baptized, beaten, blessed)
40. In worship, God is interested in our _____
(clothes, hearts, building)
41. Messiah is another name for _____
(God, Saviour, Prophet)
42. Samuel's mother was called _____
(Elizabeth, Hannah, Mary)
43. The great-grand fathers of Israelites are called _____
(patriarchs, kings, prophets)
44. The first people to see baby Jesus were the _____
(The shepherd, the wisemen)
45. God created man on the _____ day. (6th, 1st, 5th)
46. The first book in the bible is _____
(Genesis, Mathew, Exodus)
47. _____ was called three times by God.
(John, Jesus, Samuel)
48. Unless we _____ others cannot forgive us. (love, forgive)
49. The day the Holy spirit descended to the disciples is called _____
(advent, christmas, pentecost)
50. It is wrong to _____ others.
(love, judge)