

PERFECT ENERGIZER SERIES

STD 2 - YEAR 2015

MATHEMATICS

PES
008



NAME: _____

SCHOOL _____


DATE _____

- $35 + 32 =$ _____
- $52 - 21 =$ _____
- Take away 50 from 100 = _____
- $30 + 10 + 40 =$ _____
- 41, 40, 39, _____
- Write 325 in words

- $\square - 10 = 6$
- 4 tens = _____
- How many legs do 4 cows have? _____
- $$\begin{array}{r} 378 \\ + 216 \\ \hline \end{array}$$
- $30 \div 6 =$ _____
- The number before 165 is _____
- 206, 207, 208, _____, _____
- $$\begin{array}{r} 116 \\ - 102 \\ \hline \end{array}$$
- $63 =$ _____ hundreds _____ tens
_____ ones
- $355 - 254 =$ _____
- $923 + 70 =$ _____
- 9 hundreds 4 tens 6 ones = _____
- A class has 45 pupil. 30 were girls. How many boys were there? _____
- Arrange these numbers from the smallest to the biggest.
69, 72, 94, 25, 43, 37

- April, May, June, _____
- 
- = _____ tens and _____ ones
- Divide 14 by 2 = _____
- There are _____ months in a year.
- $8 \times 0 =$ _____
- What is the time? _____


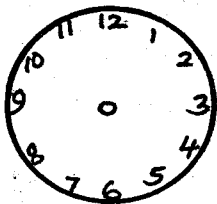
27. Name the shape _____



28.

<u>Sh.</u>	<u>Cts.</u>
38	50
- 12	00
<hr/>	
<hr/>	

29. Put hands to show 10 o'clock



30.

<u>Sh.</u>	<u>Cts.</u>
115	50
+ 212	20
<hr/>	
<hr/>	

Write in words

31. $126 =$ _____

32. Three snakes have _____ legs

33. Add twenty five to fourteen = _____

34. How many mouths do 8 girls have? _____

35. $18 \div 3 =$ _____

36. $8 =$ _____ tens _____ ones


37. $6 + 2 + 1 =$ _____

38. $10 + \square = 10$

39. 19, 17, 15, 13, _____

40. $28 =$ _____ tens _____ ones

41. Write the multiplication sentence





_____ x _____ = _____

42. What is the next number?

8, 16, 24, 32, _____

43. What is the value of digit 6 in the number 364? _____

44. Which one is heavier? Stones or wood? _____



45. How many squares are there? _____

46. How many triangles are there? _____

47. 20

$\times 4$

48. 100 shilling note is equal to _____ 5 shillings coins.

49. _____ months make a year.

50. Ken has Shs. 30. He buys one ruler at Sh. 18. How much money is he left with? _____

PERFECT ENERGIZER SERIES

STD 2 - YEAR 2015

ENGLISH

PES
008

NAME: _____

SCHOOL _____

DATE _____

Dictation

1. _____
2. _____
3. _____
4. _____
5. _____

Fill in the missing letters

6. B ___ _ k
7. T ___ y
8. G ___ _ d
9. Ch ___ _ coal
10. Ho ___ se

Write plurals of these words

11. Trouser _____
12. Leaf _____
13. Baby _____
14. Knife _____
15. Book _____

Write the opposite of these

words

16. Inside _____
17. East _____
18. Dirty _____
19. Buy _____

20. Open _____

(sell, clean, close, West, outside)

Write these words well

21. bleta _____
22. chereat _____
23. peesh _____
24. loosch _____
25. airch _____

Use 'was' or 'were' to fill the

gaps

26. She _____ writing her work.
27. The boys _____ playing football
28. My mother _____ baking a cake.
29. The teacher _____ absent
30. They _____ fighting.

Write the past tense

31. Come _____
32. Walk _____
33. Play _____
34. Go _____
35. Laugh _____

Fill the gaps

36. A _____ makes clothes.
37. A _____ drives a car.
38. A _____ teaches pupils in school.
39. A _____ grows crops.

40. A _____ looks after sick people.

(driver, tailor, teacher, nurse, farmer)

Write the doing words

(add-ing)

41. Walk _____
42. Cry _____
43. Sing _____
44. Write _____

Use 'do' or 'does'

45. _____ you like sweets.
46. She _____ not write well.
47. _____ they come for lunch.

Use 'two' 'too' or 'to'

48. I have _____ pens.
49. She is _____ old to run fast.
50. I am going _____ the market.

CLASSIFIED TESTING EXAMS

STD 2

READING

2

NAME _____

SCHOOL _____

DATE _____

READ THESE WORDS

- | | | | |
|---------------|--------------|---------------|-------------|
| 1. King | 6. River | 11. Prefect | 16. Tractor |
| 2. Philip | 7. Pretty | 12. Carpenter | 17. Wide |
| 3. Female | 8. Water | 13. Place | 18. Fence |
| 4. Photograph | 9. Rude | 14. Value | 19. Guest |
| 5. Jacket | 10. Envelope | 15. Pupils | 20. quite |

READ THESE SENTENCES

1. The bag is too heavy to carry.
2. This building is very tall.
3. They were not able to display their work.
4. He did not harvest his crops.
5. She trimmed her hair because it was long.

SOMA HAYA MANENO

- | | | | |
|--------------|------------|-------------|-----------------|
| 1. Shamba | 6. Kijiji | 11. Uta | 16. Kitandawili |
| 2. Chakula | 7. Kipepeo | 12. Jembe | 17. Bendera |
| 3. Shuka | 8. Kilema | 13. Kitoweo | 18. Sauti |
| 4. Tafadhali | 9. Bawabu | 14. Bibilia | 19. Seremala |
| 5. Alfajiri | 10. Hema | 15. Januari | 20. Taabu |

SOMA HIZI SENTENSI

1. Binamu ni mtoto wa Shangazi.
2. Kiatu changu kimepotea.
3. Mama amepika chakula kitamu.
4. Baba yangu ni Mwalimu wa Chuo Kikuu
5. Kikapu chake kimeraruka.

PERFECT ENERGIZER SERIES

DARASALAPILIMWAKA WA - 2015

KISWAHILI

PES
008

JINA: _____ SHULE: _____ TAREHE _____

Imla

1. _____
2. _____
3. _____
4. _____
5. _____

Jaza pengo

6. Mifuk _____
7. K__k__mbe
8. K__kapu
9. Ch__pa
10. Bir__ka

Andika kinyume

11. Juu _____
12. Mwalimu _____
13. Mfupi _____
14. Keti _____
15. Tajiri

Andika kwa wingi

16. Mtoto _____
17. Kisu _____
18. Mnyama _____
19. Kitambaa _____
20. Mdudu _____

Andika vizuri

21. mulaka _____
22. akka _____
23. nyapa _____
24. iikt _____
25. kapa _____

Andika kwa maneno au nambari

26. 69 _____
27. 100 _____

28. 35 _____

29. Sabini na saba _____

30. Kumi na tano _____

Kamilisha methali na

vitendawili

31. Haraka haraka haina _____

32. Polepole ndio _____

33. Nanywa supu natupa
nyama _____.

34. Mzungu amelala ndevu ziko
nje _____.

(muwa, baraka, hindi,
mwendo, nanasi)

Jibu maswali

35. Jina la mavazi rasmi ya
shule ni _____.

36. Waislamu wanawake huvalia

37. Mwanafunzi anayemsaidia
mwalimu darasani huitwa

38. Habari _____

39. Tunavaa _____ kwa
miguu.

40. Anayeendesha gari ni _____
(buibui, sare, dereva, kiranja,
njema, viatu)

Kanusha vitenzi hizi

41. Kula _____

42. Rukeni _____

43. Imba _____

44. Kimbieni _____

Tumia 'ule', 'ile', 'yule'

45. Mtoto _____


46. Mto _____


47. Nyumba _____

Tumia 'ndani ya', 'juu ya', na

'chini ya'

48.  Mpira uko _____
kiti.

49.  Embe liko _____
mti.

50.  Maji yamo _____
glasi

NAIROBI INTER PRIVATE SCHOOLS EXAM

NIP
009


STANDARD TWO - YEAR 2015

SCIENCE

NAME: _____

SCHOOL: _____

DATE: _____

1. Winnowing is a way of separating chaff from _____
(mud, grains, water)
2. Unwanted plants are called _____
(seeds, weeds, stems)
3. A motorcycle has _____ wheels.
(four, three, two)
4. Muddy water has _____
(soil, sugar, oil)
5. Wind is moving _____
(air, water, clouds)
6. We dry our hands with _____
(rag, towel, duster)
7. We clean the vegetables before _____
(peeling, chopping, storing)
8. Germs causes _____
(dirty, diseases, water)
9.  The weather is _____
(windy, calm, sunny)
10. The tongue, eyes, nose and skin are called the _____ organs.
(head, sense, face)
11. We feel using our _____
(nose, skin, ear)
12. _____ seeds cannot germinate.
(dry, small, cooked)
13. In which direction does the sun rise? _____
(East, West, South)
14. A _____ has seven colours.
(sun, flag, rainbow)
15. Birds have _____ beaks.
(2, 1, 4)
16. Animals which are kept at home are called _____
(domestic, bush, wild)
17. Light clothes should be worn on a _____ day.
(cold, rainy, hot)
18. Removing the unwanted plants is called _____
(planting, watering, weeding)
19. A _____ changes its colour according to the surrounding.
(lizard, chameleon, snake)
20. The meat of a pig is called _____
(pork, beef, mutton)
21. Lack of rain causes _____
(forest, floods, drought)
22. The best soil for farming is _____
(clay, loam, sand)
23. The house of a bird is called _____
(web, nest, shell)

24. We can produce sound by _____

(smelling, hitting, smiling)

25. We use a _____ to sweep our classroom.

(broom, duster, dustbin)

26. Which animal does not have legs? _____

(millipede, scorpion, fish)

27. We should brush our teeth _____ every meal.

(before, after, weekly)

28. _____ helps us to carry heavy things.

(goat, monkey, donkey)

Name the following parts of a plant



29. _____

30. _____

31. _____

32. _____

33. _____

34. _____ spoils our houses made of wood.

(fleas, flies, termites)

35. We should _____ the papers that we found in the compound.

(burn, make balls, play with)

36. Water is made good for drinking by _____

(cooking, warming, boiling)



37. To separate seeds from small leaves we use a _____

(windmill, winnower, posho mill)

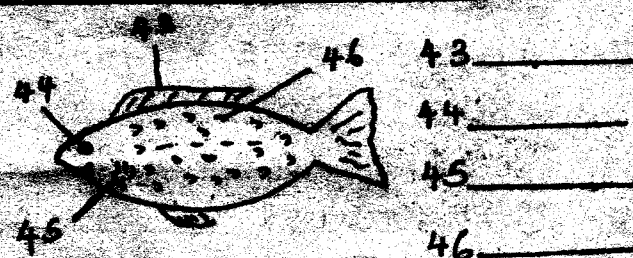
38. Most domestic animals eat _____

(bread, grass, meat)

Name these sources of light



Name the parts of a fish.



(eye, gills, scales, fin)

47. We clean our ears using _____

(cotton buds, match sticks)

48. The house of a spider is called a _____

(web, hutch, kennel)

49. Leaves are _____ in colour.

(blue, yellow, green)

50. A wheelbarrow has _____ wheels. (2, 4, 1)

PERFECT ENERGIZER SERIES

STD 2 - YEAR 2015

SOCIAL STUDIES & C.R.E

PES
008

NAME: _____

SCHOOL _____

DATE _____

1. A room for sleeping is called _____.

(kitchen, sitting room, bed room)

2. People who grow crops are called _____.

(teachers, doctors, farmers)

3. A person who sells things in a shop is called a _____.

(barber, tailor, shopkeeper)

4. The flag of Kenya has _____ colours. (2, 3, 4)

5. A _____ guards the school at night.

(headteacher, watchman, teacher)

6. We enter the school through the _____.

(fence, hole, gate)

7. Long ago people wore _____ as clothes.

(cotton, ropes, skins)

8. Sick people go to the _____.

(school, shamba, hospital)

9. Before riding a bicycle make sure that no parts are _____.

(broken, red, dirty)

10. During P.E. lesson we _____.

(read books, dig with jembes, play games)

11. Text books are kept in the _____.

(cupboards, paper bags, desks)

12. _____ is the head of the school.

(chief, headteacher, D.O)

13. Animals that live in the forest are called _____.

(domestic animals, beasts, wild animals)

14. We go to school to _____.

(sing, sleep, learn)

15. The sun rises from _____.

(North, South, East)

16. A _____ catches fish.

(tailor, fisherman, baker)

17. The weather is _____.



(windy, rainy, sunny)

18. The pupil who is sitting next to you is called _____.

(neighbour, deskmate, parent)

19. This sign means there is a _____.



(bend, bump, school)

20. Animals that hurt are _____.

(dangerous, good, big)

21. The building where food is cooked in school is the _____
(classroom, kitchen, staffroom)
22. A place where things are bought and sold is called _____
(farm, market, school)
23. We celebrate _____ day on 12th December.
(Christmas, Jamhuri, Kenyatta)
24. A _____ heads a home.
(father, mother, headman)
25. The president of Kenya is _____
(Kibaki, Moi, Raila, Uhuru)
26. The sun sets in the _____
(East, West, North, South)
27. Nuclear family is made up of father, mother and _____
(uncles, children, cousins)
28. Colour _____ on traffic light means go. (orange, red, green)
29. Every child has a right to _____
(punishment, child labour, education)
30. The rainbow has _____ colours.
(8, 7, 4)
- C.R.E.**
31. Christians pray in a _____
(church, temple, mosque)
32. The mother of Jesus was _____
(Mary, Ann, Jane)
33. The Old Testament has _____ books. (37, 66, 39)
34. Messiah means _____
(God, Saviour, healer)
35. The wife of Abraham was called _____
(Mary, Sarah, Rebecca)
36. Solomon asked God to give him _____.
(wealth, wisdom, wife)
37. In a wedding at Cana Jesus turned water into _____
(milk, wine, porridge)
38. It is good to trust and obey _____
(God, thieves, satan)
39. We should _____ people who are unfair to us.
(forgive, abuse, kill)
40. _____ killed Goliath with a stone and a sling.
(Joshua, Saul, David)
41. Another name for Dorcas was _____.
(Mary, Tabitha, Naomi)
42. Mary and Joseph were refugees in _____
(Canaan, Nazareth, Egypt)
43. The first man to be killed in the Bible was _____.
(Abel, Adam, Cain)
44. The body of Jesus was buried by _____.
(Simon, Joseph, Judas)
45. Elkanah was the father of _____
(John, James, Samuel)
46. The father of David was _____
(Abraham, Jacob, Jesse)
47. Joseph had _____ brothers.
(11, 10, 12)
48. Draw a church
-
49. Jesus grew up in _____
(Nazareth, Egypt, Bethlehem)
50. We should _____ God with all our heart. (love, hate, mock)