

STEGA SERIES

STD 3 2015

MATHEMATICS

NAME _____

DATE _____

1. $46 + 43 + 6 =$ _____

2. $16 + 416 + 2 =$ _____

3. $10 \times 9 =$ _____

Write words

4. 2010

5. 846

6. 621

7. What is the place value of 4 in 4561?

8. Work out $\frac{1}{8}$ of 64

9. $48 \div 8 =$ _____

10. $9 \times 0 =$ _____

11. sh cts

12 40

-10 60

12. Diftisha did ip sums everyday. How many sums did she do in four days? _____

13. $\square \div 9 = 8$

14. $660 - \square = 330$

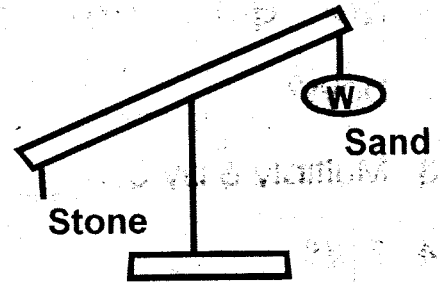
15.  What fraction is unshaded?

16. $\frac{5}{6} + \frac{1}{6} =$ _____

17. $\frac{1}{4}$ an hour = _____ minutes

18. Find the sum of 50 and 64 _____

19.



Stones are _____ than sand.
(heavier, lighter)

20. $3\frac{1}{2}$ years = _____ months.

21. Subtract 999 from 1000

22. $\square \times 8 = 32$

Put the correct sign

23. $24 \square 12 = 12$

24. $6 \square 6 = 36$

25. $21 \square 18 = 39$

26. $42 \square / 7 = 6$

27. Six bicycles have _____ wheels.

28. Subtract 143 from 527 =

$\frac{1}{6}$ or $\frac{1}{8}$? _____

29. What is the next number?

6, 12, 18, _____

30. 3678 31. 6430

$$\begin{array}{r} +3912 \\ \hline \end{array} \quad \begin{array}{r} -1019 \\ \hline \end{array}$$

32. There are 19 pupils in a class, seven are girls. How many are boys? _____

33. Multiply 6 by 8 = _____

34. $7 \overline{)28}$

35. $\frac{1}{8}$ of 80 = _____

36. John paid sh 64 for 8 books. How much was each book? _____

37. $\square - 665 = 413$

38. 3 weeks = _____ days.

39. Shade a half of these balls.



40. $450m - 235m =$ _____

41. $\frac{2}{4} + \frac{\square}{4} = \frac{3}{4}$

42. $56 = 8 \times$ _____

43. 7293 = _____ thousands _____

hundreds _____ tens _____ ones

44. sh cts

55 70

x 2

45. Arrange from the smallest to the biggest.

328, 400, 67, 500, 237

46. What number comes just after 486? _____

47. Onyango had $\frac{5}{8}$ of a loaf of bread. He gave $\frac{1}{8}$ to his sister. What fraction of the loaf was he left with? _____

Write symbols

48. Three hundred and eleven _____

49. Four hundred and four _____

50. Eighty six _____

STEGA SERIES

STD 3 2015

ENGLISH



NAME _____

DATE _____

Dictation

1. _____
2. _____
3. _____
4. _____
5. _____

Write the words correctly

6. stlo _____
7. seino _____
8. thirb _____
9. nedrag _____
10. iarh _____

Use 'on', 'in' 'under', and behind to complete the sentences.

11. The ball is _____ the table.
12. The cat is _____ the bed.
13. We sit _____ a chair.

14. Tom is hiding _____ the door.
15. There is some water _____ the bottle.

Use 'has' or 'have'

16. Mary _____ a new dress.
17. I _____ many friends.
18. I _____ finished my work.
19. This boy _____ money.
20. We _____ a nice house.

Write the opposites

21. Good _____
22. Friend _____
23. Empty _____
24. Rich _____
25. Beautiful _____

Add -ing

- 26. Sit _____
- 27. Run _____
- 28. Swim _____
- 29. Bake _____
- 30. Write _____

Write the plurals

- 31. Foot _____
- 32. Goose _____
- 33. Bench _____
- 34. Puppy _____
- 35. Loaf _____

Write in words

- 36. 444 _____
- 37. 621 _____
- 38. 200 _____
- 39. 48 _____
- 40. 172 _____

Write the past tense

- 41. Cook _____
- 42. Smell _____
- 43. Teach _____
- 44. Do _____
- 45. Buy _____

Write their young ones

- 46. Cow _____
- 47. Dog _____
- 48. Sheep _____
- 49. Lion _____
- 50. Cat _____

STEGA SERIES

KISWAHILI

DARASA LA TATU 2015

JINA _____

TAREHE _____

Imla

1. _____

2. _____

3. _____

4. _____

5. _____

Andika kwa wingi

6. Ng'ombe amechinjwa _____

7. Gari limeoshwa _____

8. Mzigo ni _____

9. Chupa ina maji _____

10. Kiatu king _____

Andika kwa wakati uliopita

11. Baba ataandika barua _____

12. Mgeni amefika _____

13. Dada yangu amepita mtihani _____

14. Mtoto anacheza mpira _____

Andika kwa maneno

15. 688 _____

16. 325 _____

17. 505 _____

Tumia sifa uliopewa vizuri

18. Wageni wamevaa nguo _____

(mzuri, nzuri, zuri)

19. Matunda _____ yameiva mtini.

(mizuri, mazuri, mzuri)

20. Jicho hili _____ linauma.

(nene, manene, mnene)

21. Kuku _____ wanachinjwa leo.

(mnene, wanene, kinene)

Ni neno lipi halifai kuwa

katika kikundi hiki

22. kiti, meza, kabati, chiriku, rafu.

23. daffari, kalamu, wino, bendera, _____ rula.

24. Jumamosi, Jumapili, Januari,

Jumatatu

Kamilisha methali

25. Ukitaka cha mvunguni sharti

26. Kikulacho kinguoni

27. Ajali _____

28. Mwenye macho haambiwi _____

Kanusha sentensi hizi

29. Njoo hapa _____

30. Juma alinawa mikono

31. Keti pale _____

32. Kubali _____

33. Fagieni darasa _____

Andika kinyume cha maneno

haya

34. Tajiri _____

35. Mchafu _____

36. Vaa _____

37. Anika _____

38. Mzee _____

Chagua jibu sahihi

39. Si vizuri kuwa _____

watoto . (ajiri, ajili)

40. Mimi hula _____ nikiwa na

njaa (chakula, chakura)

41. Nyumba yako iko _____ na

yetu (mbali, mbari)

42. _____ yangu imepotea

(karamu, kalamu)

43. _____ yangu amevalia suti

(Baba, Papa)

Andika majina vizuri

44. kojiki _____

45. sadara _____

46. tafadri _____

Jaza pengo

47. sa ___ d ___ k ___

48. k ___ k ___

49. d ___ r ___ sh ___

50. m ___ o ___ b ___

STEGA SERIES

STD 3 2015

READING

NAME _____

DATE _____

WORDS

1. Dangerous
2. Whistle
3. Mechanic
4. Measure
5. Journey
6. Engine
7. Direction
8. Plumber
9. Calculator
10. Typhoid

READ THE SENTENCES

11. The man is unable to read.
12. There is a lot of traffic in the road.
13. A snake is a dangerous animal.
14. The woman wept bitterly.
15. Our school library has many books.

READ THIS PASSAGE

Long time ago, not a single animal on earth had a tail. The horse had no tail to swish away the flies. The dog also had no tail to wag when happy. On the other hand, the monkey had no tail to curl around the branches when he was swinging from one tree to another.

KUSOMA DARASA LA TATU

KUSOMA

1. Arubaini
2. Matunda
3. Havijavunjika
4. Ng'ang'ana
5. Dhambi
6. Ghorofa
7. Mwingi
8. Kitukuu
9. Mochari
10. Mchanga

SOMA SENTENSI HIZI

11. Mwembamba kama sindano.
12. Nyumba yetu imepakwa rangi ya hudhurungi.
13. Pikipiki hubeba mtu mmoja.
14. Mfoto mwema huwa na adabu.
15. Macho hayana pazia.

SOMA KIFUNGU

Hospitali ni mahali ambapo watu hutibiwa. Watu walio na magonjwa mbalimbali hutibiwa hospitalini. Magonjwa haya ni kama vile homa, kifua kikuu, malaria na mengine mengi.

STEGA SERIES

STD 3 2015

CRE

NAME _____

DATE _____

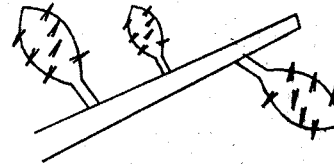
1. Jairus _____ was raised from the death.
(wife, son, daughter)
2. _____ was stoned to death.
(Stephen, John, Peter)
3. Emmanuel means _____.
(people with us, God with us)
4. _____ led the Israelites from Egypt.
(Moses, Abraham, Noah)
5. Luo call their God _____.
(Nyasaye, Ngai, Enkai)
6. The sabbath day should be observed and kept _____.
(dirty, holy, none)
7. Jacob loved his son _____ more than his brothers.
(Joseph, Esau, Moses)
8. The wife of Moses was _____.
(Hannah, Zipporah, Sarah)
9. Jacob's name changed to _____.
(Isaac, Israel, Egypt)
10. King _____ ordered for the arrest of Daniel.
(Darius, Solomon, David)
11. Elijah was taken up in a _____ of fire.
(aeroplane, donkey, chariot)
12. We should _____ our sins.
(repent, obey, disobey)
13. _____ was put in a den of lion.
(Peter, Daniel, Samson)
14. King _____ wanted to kill Jesus.
(Herod, David, Solomon)
15. _____ built the Ark.
(Noah, Abraham, Moses)
16. The greatest commandment is _____.
(hate, love, obey)
17. _____ had eleven brothers.
(Jacob, Jesus, Joseph)
18. King _____ wanted Ahab's vineyard.
(Ahab, Darius, Solomon)
19. The parents of Jesus had gone to Bethlehem to be _____.
(beaten, counted, visited)
20. The promised land was in _____.
(Bethlehem, Canaan, Cana)

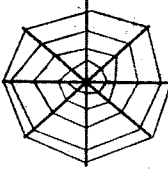
NAME _____

DATE _____

1. We eat the stem of a _____
(kales, sugarcane, maize)
2. To make water safe for drinking it should be _____
(filtered, boiled, drank)
3. A ripe banana tastes _____
(sour, bad, sweet)
4. Seedlings are young _____
(goats, plants, baby)
5. A place where plant grows is its ? _____
(garden, habitat, water)
6. A _____ person cannot speak.
(deaf, blind, dumb)
7. Separating mud and leaves from water is called _____
(boiling, filtering, sieve)
8. Rules of cleanliness are called _____
(cleanliness, hygiene, untidy)
9. Bees and wasps protect themselves by _____
(stinging, hopping, flying)
10. Fish move in water by _____
(walking, swimming, flying)
11. A _____ protects itself by stinging.
(housefly, spider, bee)
12. Young plants are called _____
(weeds, flowers, seedlings)


13.



- This plant is called _____
(maize, cactus, bean)
14. Where does it grow? _____
(swamp, dry areas, wet areas)
 15. After hard work the body needs to _____
(sleep, rest, work)
 16. A _____ grows in water.
(cactus, mango, water lily)
 17. Potters use _____ soil.
(clay, loam, sand)
 18. Potatoes are eaten when they are _____
(raw, cooked)
 19. A human being have _____ senses. (4, 5, 6)
 20. The mirror reflects _____
(right, sound, light)
 21.  Which animal lives in _____ here ?
(hen, spider, mosquito)
 22. We harvest crops during the _____ season (dry, cold, wet)
 23. We eat the roots of a _____
(sugarcane, carrot, cabbage)

The weather is


24.



25.



26.



27. People with poor eyesight use

_____ (glasses, shades, goggles)

28. The removal of unwanted plants is called _____

(uprooting, weeding, planting)

29. _____ soil has very big particles. (clay, loam, sand)

30. We can transport water using animals like _____

(dogs, pigs, donkeys)

31. Dark clouds in the sky show presence of _____

(clouds, rain, wind)

32. Milk make our teeth _____ (weak, strong, white)

33. Latrines are covered with a lid to keep off _____

(flies, germs, bees)

34. Shadows are shortest at _____ (night, morning, noon)

35. Birds kept at home are called _____

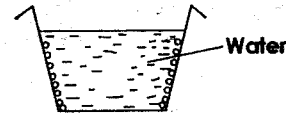
(insects, poultry, chicken)

36. _____ are found around a dirty latrine _____

(Lice, Flies, Jiggers)

37. _____ add flavour to our food. (flowers, vegetables, spices)

38.



The air bubbles shows the presence of air in the _____ (soil, glass, water)

39. Urinals are used by _____ (women, girls, men)

40. We record weather on a _____

(weather chart, symbol, paper)

41. Broken bottles should be _____

(buried, burned, thrown)

42. Vegetation is _____ in colour. (yellow, white, green)

43. Tall grass hides dangerous animals like _____

(cats, snakes, birds)

44. Drum produce sound by _____

(plucking, blowing, hitting)

45. Light travels in a _____ line (zigzag, straight, curved)

46. A pyrethrum plant is used to make _____ (medicine, insecticide, drinks)

47. Cooking food makes it? _____

(hard, soft, bitter)

48. When we look ourselves at the mirror we see our _____


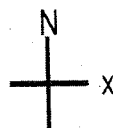
(look, mirror, image)

49. Long periods without rain causes _____ (drought, floods, wind)

50. A rainbow has _____ colours. (6, 10, 7)

STEGA SERIES
STD 3 2015
SOCIAL STUDIES

NAME _____ DATE _____

1. North, South, East and West are called _____
(compass, cardinal, points, directions)
2. _____ is a physical feature.
(dam, borehole, river)
3. Which one is an element of weather?
(sunshine, water, tress)
4. We wear heavy clothes when it is _____
(cold, hot, warm)
5. A low lying land is called _____
(plain, hill, forest)
6. Which of the following is a resource?
(vehicles, soil, flag)
7. People who kill wild animals are called _____
(hunters, killers, poachers)
8. Growing crops using water is called _____
(watering, irrigation, pruning)
9. We have to stand at _____ when raising the flag.
(straight, attention, alert)
10. In our sub-county we harvest when it is _____
(rainny, wet, dry)
11. Plants that grow in swamps are called _____ (cactus, maize, reeds)
12. Carrying away of soil by rain and wind is called soil _____
(pollution, erosion, carrying)
13. Manyattas are built by _____
(men, boys, women)
14. _____ is when people depend on each other
(culture, migration, interdependence)
15. _____ is not a basic need.
(food, car, shelter)
16. People who grow crops and keep animals are called _____
(doctors, farmers, teachers)
17. _____ provide us with security
(game warden, police officers, veterinary)
18. _____ is a source of water
(forest, tree, rain)
19. _____ are used to stop a bicycle. (brakes, pedals, bell)
20. The coldest month of the year is _____
(December, January, July)
21. The needle of a compass always points to the _____
(South, East, North)
22. _____ come to see wild animals.
(tourists, doctors, fishermen)
23. Children have a right to _____
(education, hate, abuse)
24. _____ are things we use to make our life comfortable.
(food, forest, resources)
25. Nilotes, Bantus and _____ are language groups.
(Kikuyu, Maasai, Cushites)
26. _____ is the head of a location
(sublocation, chief, D.O)
27.  This is a _____
(bridge, stair, zebra crossing)
28. Long ago children were taught by _____
(teachers, grandparents, neighbours)
29. _____ is not an economic activity (stealing, fishing, farming)
30.  Name the compass point marked X
(South, West, East)