



HIGH FLYER SERIES TRIAL EXAMINATION
STANDARD FOUR – 2015
MATHEMATIC

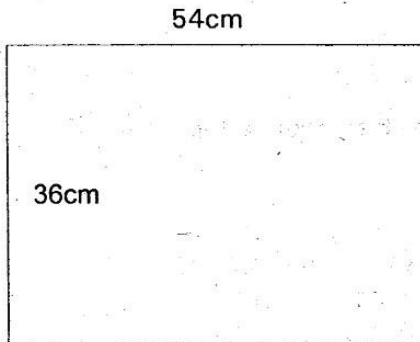


Time: 2 hours

- Which one of the following numbers is thirty four thousand three hundred and five in symbols?
 A. 344005
 B. 340305
 C. 34305
 D. 304305

- What is the total value of digit 4 in the number 54216?
 A. 4000
 B. 40000
 C. 400
 D. 40


- What is the perimeter of the rectangle below?



- A. 90cm
 B. 144cm
 C. 126cm
 D. 180cm
- Which of the following numbers is divisible by 2, 5 and 10?
 A. 105
 B. 150
 C. 1015
 D. 501
- Multiply $17 \times 50 =$
 A. 85
 B. 750
 C. 535
 D. 850
- What is $\frac{1}{8}$ of 72?
 A. 9
 B. 8
 C. 12
 D. 24
- Round off 859 to the nearest 10
 A. 850
 B. 800
 C. 860
 D. 900

- In a school there are 540 pupils. 192 of them are boys. How many girls are in the school?
 A. 732
 B. 448
 C. 348
 D. 352
- In a school there are 46 classes. Each class has 36 pupils. How many pupils are in that school?
 A. 82
 B. 1656
 C. 1256
 D. 1336

- What fraction is shaded in the figure below?



- A. $\frac{1}{2}$
 B. $\frac{2}{5}$
 C. $\frac{3}{5}$
 D. $\frac{5}{12}$

- What is the place value of digit 7 in the number 90743?
 A. Ten thousands
 B. Thousands
 C. Hundreds
 D. Tens
- Write 0.07 as a fraction
 A. $\frac{7}{10}$
 B. $\frac{7}{100}$
 C. $\frac{7}{1000}$
 D. $\frac{0.07}{100}$

- Work out

Weeks	Days
13	6
+ 8	5
<hr/>	

- A. 22 weeks 1 day
 B. 21 weeks 1 day
 C. 21 weeks 4 days
 D. 22 weeks 4 days

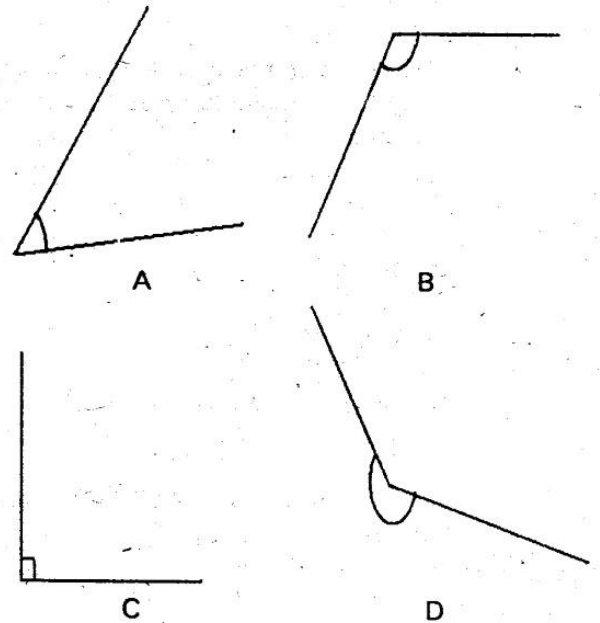
14. What is $\frac{4}{7}$ written in words?
 A. Forty seven
 B. Four seventh
 C. Seventy four
 D. Four hundredths
15. What is the sum of $13.89 + 14.83 + 67 =$
 A. 29.39
 B. 94.72
 C. 95.72
 D. 93.62
16. Work out
- | | |
|------|-----|
| Sh | cts |
| 29 | 75 |
| + 13 | 80 |
| | |
- A. sh 43 55cts
 B. sh 42 55cts
 C. sh 32 55cts
 D. sh 33 55cts
17. In Mukarara village there are 23674 women, 19897 men and 46891 children. How many people are there in that village altogether?
 A. 89462
 B. 90362
 C. 90462
 D. 90452
18. How many hours and minutes are there in 386 minutes?
 A. 3 hrs 86min
 B. 4hrs 26min
 C. 5hrs 26min
 D. 6hrs 26min
19. Which of the following is made up of even numbers only?
 A. 16,20,34,48
 B. 31,43,79,77
 C. 2,3,5,7,11
 D. 2,3,10,15,16,21
20. What is the sum of the first 8 odd numbers?
 A. 80
 B. 64
 C. 63
 D. 49
21. Work out the fraction $\frac{4}{7} + \frac{2}{7} =$
 A. $\frac{6}{14}$
 B. $\frac{5}{7}$
 C. $\frac{6}{7}$
 D. 1
22. In the fraction $\frac{8}{13}$ the digit eight is known as _____
 A. Numerator
 B. Denominator
 C. Improper
 D. Proper

23. Work out

$$3 \overline{)660}$$

- A. 22
 B. 330
 C. 110
 D. 220

24. Which angle below is obtuse?



25. Which fraction is the smallest?

- A. $\frac{1}{12}$
 B. $\frac{1}{2}$
 C. $\frac{1}{3}$
 D. $\frac{1}{9}$

26. What is $\frac{13}{100}$ as a decimal?

- A. 1.30
 B. 0.13
 C. 0.013
 D. 13.00

27. What is the next number in the series 1, 2, 4, 7, 11, _____

- A. 14
 B. 15
 C. 17
 D. 16

28. What are the common multiples of 3 and 2 less than 30?

- A. 2,3,6,9,12,15,24
 B. 6,9,15,18,24
 C. 6,12,18,24
 D. 6,9,12,18,24

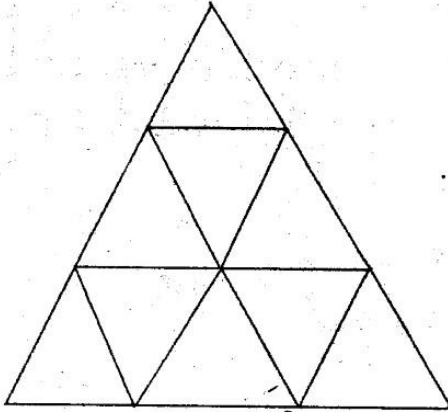
29. Work out

Hrs	min
5	30
- 2	45



- A. 3hrs 45min
- B. 3hrs 15min
- C. 2hrs 15min
- D. 2hrs 45min

30. How many triangles are in the figure below?



- A. 11
- B. 13
- C. 12
- D. 9


31. Divide $2072 \div 37 =$

- A. 56
- B. 46
- C. 66
- D. 48

32. A crate of soda holds 24 bottles. How many bottles will 16 crates hold?

- A. 40
- B. 284
- C. 384
- D. 296

33. Work out the mathematics statement in the figure below



- A. $4 \times 9 = 36$
- B. $4 \times 6 = 24$
- C. $6 \times 6 = 36$
- D. $12 \times 3 = 36$

34. Fill in the missing number in the following

$813 = \text{_____} + 10 + 3$

- A. 8
- B. 80
- C. 800
- D. 8000

35. Work out $\frac{11}{13} - \frac{3}{13} - \frac{5}{13} =$

- A. $\frac{5}{13}$
- B. $\frac{4}{13}$
- C. $\frac{2}{13}$
- D. $\frac{3}{13}$


36. How many days were there in the months of February, July and September 2014?

- A. 89
- B. 90
- C. 91
- D. 93

37. How many minutes are in 7 hours?

- A. 700 minutes
- B. 210 minutes
- C. 420 minutes
- D. 4200 minutes

38. What is the time on the clock face below?



- A. Half past 8 o'clock
- B. Half past 7 o'clock
- C. Twenty minutes to 6 o'clock
- D. Quarter past 7 o'clock

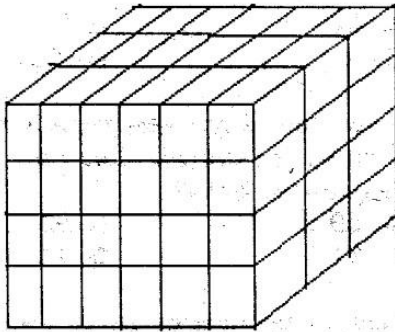
39. Divide sh 23 20cts among 4 girls. Each girl gets _____

- A. sh 5 40cts
- B. sh 5 30cts
- C. sh 4 60cts
- D. sh 5 80cts

40. Which number is divisible by both 2 and 3?

- A. 108
- B. 56
- C. 51
- D. 86

41. How many cubes are in the stack below?




- A. 96 B. 72
C. 84 D. 63

Use the calendar below to answer questions 42 and 44

Sun	Mon	Tue	Wed	Thu	Fri	Sat
			1	2	3	4
5	6	7	8	9	10	11
12	13	14	15	16	17	18
19	20	21	22	23	24	25
26	27	28	29	30	31	

42. What day of the week was 16th?
A. Thursday
B. Friday
C. Wednesday
D. Monday
43. What is the sum of the Tuesday dates?
A. 58 B. 85
C. 80 D. 70
44. Which month is it likely to be?
A. February
B. August
C. April
D. November
45. How many shillings are in 4300 cents?
A. sh 43 B. sh 430
C. sh 4.30 D. sh 4300
46. How many quarter litres are there in 3½ litres?
A. 7 B. 14
C. 10½ D. 9½

47. How many small squares are there in the figure below?



- A. 66 B. 50
C. 55 D. 44

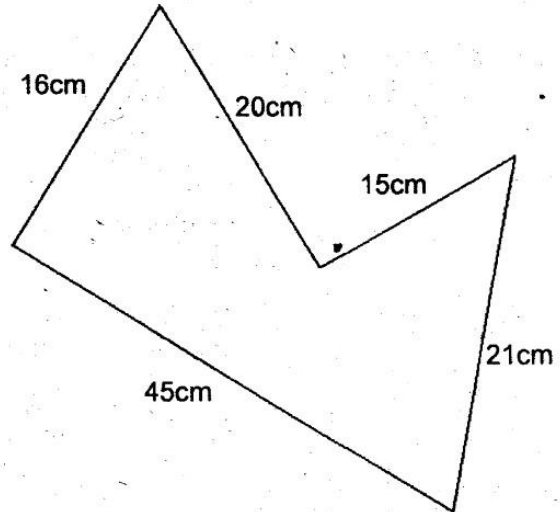
48. Work out
 - 0.14 = 9.08

- A. 9.22 B. 9.12
C. 9.94 D. 8.94

49. Which fraction is NOT equal to $\frac{2}{5}$?

- A. $\frac{14}{35}$ B. $\frac{8}{20}$
C. $\frac{6}{15}$ D. $\frac{20}{45}$

50. What is the distance round the figure below?



- A. 110cm B. 117cm
C. 127cm D. 107cm



**JARIBIO LA MTHANI WA HIGH FLYER SERIES
DARASA LA NNE – 2015
LUGHA YA KISWAHILI**

Muda: Saa 1 dakika 40

Soma kifungu kifuatacho. Kina nafasi 1 mpaka 15. Jaza kila nafasi kwa jibu lifaalo zaidi

Usafi _____ 1 _____ mazingira na mwili ni jambo _____ 2 _____ sana. Watu _____ 3 _____ husafisha miili _____ 4 _____ lakini wakakosa kusafisha mazingira. Utampata mtu nadhifu sana akitupa _____ 5 _____ ovyoovyo barabarani. Jambo _____ 6 _____ huchafua mazingira yetu. Kuna watu wengine _____ 7 _____ hawajui kuya _____ 8 _____ mazingira. Wao huchafua mito na _____ 9 _____ miti bila kupanda _____ 10 _____ . Faida _____ 11 _____ miti ni _____ 12 _____ mno. Kwanza miti hutupatia vyakula _____ 13 _____ aina mbalimbali . Pili miti ni makao _____ 14 _____ wanyamapori. Miti pia hutumiwa kutengeneza _____ 15 _____ za kutibu magonjwa mengi.

- | | | | |
|----------------|---------------|-------------|---------------|
| 1. A. la | B. wa | C. ya | D. za |
| 2. A. baya | B. mzuri | C. muhimu | D. bovu |
| 3. A. wengi | B. nyingi | C. wengi | D. mwingi |
| 4. A. mwao | B. pao | C. wao | D. yao |
| 5. A. karatasi | B. makaratasi | C. usafi | D. wakaratasi |
| 6. A. hili | B. hiyo | C. huo | D. hii |
| 7. A. ambawo | B. ambao | C. ambaye | D. wenye |
| 8. A. tuza | B. funza | C. tunza | D. fukuza |
| 9. A. huikata | B. huyakata | C. huzikata | D. kulikata |
| 10. A. mengine | B. nyingine | C. wengine | D. mingine |
| 11. A. wa | B. ya | C. za | D. mwa |
| 12. A. mingi | B. nyingi | D. mwingi | C. mengi |
| 13. A. vya | B. cha | C. wa | D. ya |
| 14. A. wa | B. za | C. ya | D. vya |
| 15. A. dawa | B. madawa | C. njama | D. mbao |

Kutoka swali la 16-30 jibu kulingana na maagizo

16. Kinyume cha neno mbingu ni _____
A. hewa
B. maji
C. mchanga
D. ardhi
17. Kitanda cha kubebea wagonjwa huitwa _____
A. ambulensi
B. machela
C. mochare
D. wodi

18. Shangazi ni mkali kama _____
A. pilipili
B. dawa
C. simba
D. shubiri
19. Jua hutua upande wa _____
A. mashariki
B. magharibi
C. kaskazini
D. kusini
20. Andika wingi wa sentensi
Mlango huu ulitengenezwa jana.
A. Milango hizi zilitengenezwa jana
B. Milango huu ulitengenezwa jana
C. Milango hii ilitengenezwa jana
D. Mlango hii ilitengenezwa leo

21. Ugonjwa unaomfanya mgonjwa kukojoa damu, unaoambukizwa na viini vya konokono huitwa _____
A. Malale
B. Majipu
C. Mafua
D. Kichocho
22. Maembe yaliyouzwa ni _____ ?
A. Magani
B. Mangapi
C. Zipi
D. Ngapi
23. Mjomba alipata jiko jana, kwa hivyo _____
A. Alinunua serehani
B. Aliuziwa jiko
C. Alipona ugonjwa
D. Alia
24. Kamilisha methali ifuatayo
Chelewa chelewa utapata _____
A. mwalimu darasani
B. umewachwa na gari
C. mwana si wako
D. subira baadaye
25. $\frac{1}{6}$ huitwaje _____
A. Subui
B. Sudusi
C. Ushuri
D. Thumni
26. Chagua sentensi iliyo katika hali timilifu _____
A. Mimi hupenda kucheza
B. Mwalimu alifundisha wanafunzi
C. Kwa nini unakunywa maji machafu
D. Kuku ametaga yai jeupe
27. Mtu anayetunga shairi huitwa _____
A. Mwandishi
B. Malenga
C. Mchuuzi
D. Mkalimani
28. Andika wingi wa sentensi
Ndege huyo alimtunza kindi wake kiotani
A. Wandege hao waliwatunza wakinda wao viotani
B. Ndege hizo zilitunza kindi zao zao viotani
C. Ndege hao waliwatunza makinda wao viotani
D. Ndege huyu aliwatunza makinda wale kiotani
29. Mpishi alitupikia chakula _____ sana
A. tamu
B. kitamu
C. mtamu
D. watamu
30. Katika lugha ya adabu, mama anapozaa mtoto tunafaa tuseme _____
A. Mama amezalisha
B. Mama amemwona mtoto
C. Mama amejifungua
D. Mama amekula chumvi nyingi

Soma ufahamu ufuatao kisha ujibu swali la 31-40

Brian alikuwa ameniialika kama rafiki yake katika sherehe ya kuadhimisha siku ya kuzaliwa kwake. Sikutaka kukosa sherehe hiyo ya rafiki yangu. Katika sherehe yangu miezi miwili iliyopita alikuja kwa mwaliko wangu. Tulikuwa tunasoma naye darasa moja la nne katika shule ya msingi ya Nyota Yetu.

Nilijua bayana kuwa nilihitaji zawadi ya kumpa rafiki yangu. Wazazi wangu nilijua wangenisaidia. Walikuwa wameona alichonilitea wakati wangu. Kupa ni kumpa anayekupa kumpa asokupa sio kupa ni kutupa.

Siku ya siku ilifika. Sherehe ilisadifu kufanyika Ijumaa baada ya masomo yetu. Usiku huo ungekuwa wa furaha ya ajabu. Hofu ya kuchelewa kufika shuleni siku iliyofuata haikuwepo.

Nilifika muda mchache kabla ya sherehe kung'oa nanga. Muziki mtulivu ulikuwa umeshika anga ile. Walioalikwa walikuwepo: wazazi wake, marafiki wenzetu wawili wa shuleni na majirani zake watatu. Hatukuishi mbali sana na kwa akina Brian.

Kiongozi wa sherehe, rafiki yetu, Kevin au Kevo kama tulivyozoea kumwita alisimama. Alitukaribisha sote. Wimbo ulifuatia. Wimbo wa happy birthday tulioimba kwa weledi na sauti kama za vinanda. Makofi, shangwe, vifijo na nderemo vilifuatia baada ya wimbo huo. Tulimwagia maji yaliyokuwa kwenye beseni. Alilowa chepechepe huku akitabasamu ghaya ya kutabasamu.

Kila mtu alimpa zawadi aliyomletea huku akichagua wimbo wa watu wote kucheza. Hata wazazi wake walishiriki hilo. Baadaye mapochopocho ya vyakula yalifuata lakini tu baada ya Brian kutupa keki yake tulioile, nywaji kama soda na sharubati vilifutia.

Mwisho Brian alipewa fursa ya kutamatisha. Alitushukuru sana kwa kuhudhuria. Ilikuwa sherehe ya fanaka. Sherehe iliyoshiba furaha kama ya tasa aliyefanikiwa kuwa mjamzito. Ilikuwa sherehe ya kukata na shoka.

31. Sherehe katika taarifa hii ilikuwa ya kuadhimisha _____
A. Siku ya kuzaliwa kwa mwandishi
B. Siku ya kuzaliwa kwa rafiki wa mwandishi
C. Siku ya krismasi
D. Siku ya harusi ya rafiki ya mwandishi
32. Aliyekuwa na sherehe aliitwa _____
A. Brian B. Rafiki yangu
C. Brita D. Alvin
33. Kwa nini mwandishi wa taarifa hii hakuwa na hofu ya kuchelewa shuleni siku iliyofuata?
A. Walikuwa washafunga shule
B. Alimwomba mwalimu ruhusa
C. Siku iliyofuata haikuwa siku ya wanafunzi kwenda shuleni
D. Siku iliyofuata ilikuwa Ijumaa
34. Sherehe ya siku ya kuzaliwa kwa rafiki wa Brian ilikuwa lini?
A. Ijumaa jioni
B. Miezi miwili iliyopita
C. Jumamosi asubuhi
D. Hatujaambiwa
35. Ni nani hakualikwa katika sherehe hii kulingana na taarifa?
A. Wanafunza waliosoma na Brian
B. Majirani
C. Mwandishi wa taarifa
D. Walimu wa Brian
36. Kiongozi wa sherehe aliitwa _____
A. Ryan
B. Brian
C. Kevin
D. Chepechepe
37. Brian alimwagiwa maji yaliyokuwa wapi?
A. Kwenye mfereji
B. Kwenye beseni
C. Kwenye bakuli
D. Mitunguni
38. Ni nani aliyechagua wimbo wa kucheza na watu wote Brian alipokuwa akipewa zawadi?
A. Kevin na wazazi wake
B. Brian na Kevin
C. Mwandishi na Brian
D. Brian na wazazi wake
39. Unadhani ni kwa nini Brian alimwagiwa maji na rafiki zake?
A. Alikuwa akinuka jasho
B. Ulikuwa mchezo wakati wa sherehe
C. Alikuwa hajaoga kwa muda mrefu
D. Alijichafua alipokuwa akikata keki
40. Kichwa kinachofaa taarifa hii ni _____
A. Sherehe ya krismasi
B. Sherehe ya kukata na shoka
C. Siku ya muziki
D. Sherehe nisyoweza kukumbuka

Soma ufahamu ufuatayo kisha ujibu swali 41-50 kwa makini

Kuku ni aina ya ndege ambaye hufugwa sana nyumbani. Kuku hutaga mayai ambayo huwa anatamia kwa muda wa siku ishirini na moja. Mayai hayo huanguliwa na kuku huanza kuwalea vifaranga.

Ingawa kuku mmoja anaweza kuwa na vifaranga zaidi ya kumi wakati mmoja, yeye huhakikisha kila kifaranga ametunzwa vyema. Mwewe ni adui mkuu wa kuku. Uadui huo hasa hutokana na tabia ya mwewe ya kuwala vifaranga. Kila mwewe anaponyakua kifaranga, kuku hubaki akipiga kelele.

Inaaminiwa kuwa kuku jike hasa huwa akipiga dua ili mwewe aweze kuwa na maisha mabaya kwa sababu ya kuwala vifaranga wake. Kinyume na matarajio ya kuku, mwewe huendelea kuwawinda vifaranga kila siku. Hii ndiyo sababu wahenga walisema dua ya kuku haimpati mwewe.

- | | |
|---|--|
| <p>41. Kuku hutamia mayai majuma mangapi
 A. mawili
 B. matatu
 C. ishirini na moja
 D. manne</p> <p>42. Baada ya kuku kutaga _____
 A. huyaangua mayai
 B. huyatamia mayai
 C. huangua vifaranga
 D. hupiga dua</p> <p>43. Mwewe ni aina ya _____
 A. ndege
 B. mnyama
 C. mayai
 D. mifugo</p> <p>44. Kuku jike huitwa _____
 A. jogoo
 B. kifaranga
 C. jongoo
 D. koo</p> <p>45. Kulingana na taarifa hii ni kweli kusema kuwa _____
 A. Mwewe haumizwi na dua ya kuku
 B. Mwewe hufa baada ya dua ya kuku
 C. Kuku na mwewe huishi pamoja
 D. Mwewe na jogoo ni marafiki</p> | <p>46. Dua ya kuku haimpati mwewe ni
 A. tashbihi
 B. methali
 C. tanakali ya sauti
 D. kitendawili</p> <p>47. Kinyume cha adui ni
 A. hasidi
 B. shaibu
 C. sahibu
 D. hayati</p> <p>48. Nomino kifaranga hupatikana katika ngeli gani?
 A. A_WA
 B. KI_VI
 C. LI_YA
 D. U_ZI</p> <p>49. Wana wa kuku ni vifaranga nao wana wa nyuni huitwa _____
 A. shibli
 B. vitungule
 C. ndama
 D. makinda</p> <p>50. Kichwa cha taarifa hii ni _____
 A. Mwewe
 B. Vifaranga
 C. Kuku
 D. Mwewe na vifaranga</p> |
|---|--|

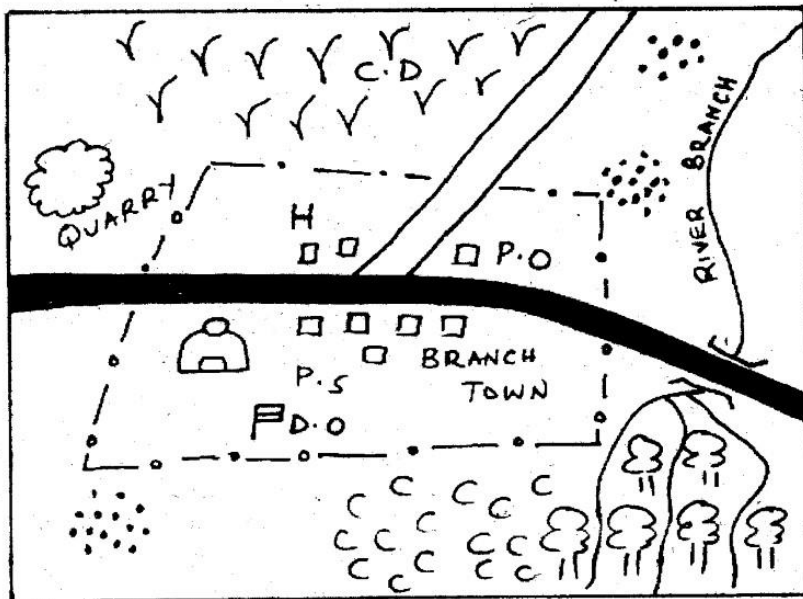




HIGH FLYER SERIES TRIAL EXAMINATION STANDARD FOUR – 2015 SOCIAL STUDIES & CRE/IRE

Time: 2 hours 15 minutes

BRANCH AREA



KEY

- TARMAC ROAD

- MURRAM ROAD

- FOREST

- COFFEE

- GRASS

- TOWN BOUNDARY

D.O - DISTRICT OFFICE

P.O - POST OFFICE

- PERMANENT BUILDINGS

- SETTLEMENTS

C.D - CATTLE DIP

H - HOSPITAL

- MOSQUE

P.S - POLICE STATION

Use the map of Branch area to answer questions 1 – 7

1. What is the direction of the quarry from the forest?
 A. South – East
 B. North – East
 C. South – West
 D. North – West
2. The natural vegetation in the northern part of the map is
 A. Grass
 B. Forest
 C. Papyrus reeds
 D. Coffee
3. A thief has been caught stealing from a trader in Branch town. The thief should be taken to the _____.
 A. Mosque
 B. Police station
 C. Post office
 D. Hospital
4. Residents of Branch area belong to _____.
 A. Christian religion
 B. Islamic religion
 C. Hindu religion
 D. African traditional religion
5. The MAIN means of transport in Branch area is by
 A. Rail transport
 B. Road transport
 C. Pipeline transport
 D. Water transport
6. Branch area is likely to be a _____.
 A. District B. Location
 C. County D. Division
7. Three of the following economic activities are carried out in the area covered by the map EXCEPT one. Which one is it?
 A. Transportation
 B. Tourism
 C. Farming
 D. Mining
8. Which of the following is a natural feature?
 A. A house
 B. A plateau
 C. A dam
 D. A road
9. Moving air is referred to as
 A. Wind
 B. Water vapour
 C. Moisture
 D. Climate
10. Which of the following directions is to the opposite of East?
 A. West
 B. South
 C. North
 D. North – West
11. Peter is facing the direction of the setting sun. His back is to the _____.
 A. South
 B. North
 C. West
 D. East
12. Three of the following counties are found in Kenya. Which one is NOT?
 A. Chavakali
 B. Bungoma
 C. Nakuru
 D. Isiolo
13. A river that flows only during the wet season is known as a _____.
 A. Dry river
 B. Useless river
 C. Seasonal river
 D. Permanent river
14. A point where small rivers meet the major river is known as a _____.
 A. Delta
 B. Estuary
 C. Confluence
 D. Bridge



65. Which of these kings coveted Naboth's vineyard?
A. King David
B. King Saul
C. King Ahab
D. King Darius
66. Who among the following led the Israelites into the land of Caanan?
A. Joshua
B. Aaron
C. Moses
D. Nun
67. Who among the following was NOT in the Noah's ark during the great flood?
A. Noah's wife
B. Noah's father
C. Shem's wife
D. Japheth
68. Which of these birds was sent by Noah to check whether the level of water had gone down?
A. Raven B. Duck
C. Sparrow D. Kingfisher
69. Which of these books is found in the Old Testament?
A. Titus
B. Philemon
C. Leviticus
D. Romans
70. Adam and Eve were sent out of the garden of Eden due to
A. Talking to the snake
B. Hiding from God
C. Their disobedience
D. Refusing to cultivate the garden
71. What did Abraham offer as a sacrifice to God on Mount Moriah?
A. A three - year old bull
B. A duck and a pigeon
C. A ram
D. A goat
72. The father of king Solomon was
A. David
B. Jesse
C. Joel
D. Joshua
73. Zipporah was Mose's wife. His father was called
A. Jethro
B. Bethuel
C. Nathan
D. Abijah
74. The two sons of Naomi married
A. Moabite girls
B. Caananite girls
C. Syrian girls
D. Midianite girls
75. Which of these kings of Israel was given wealth and honour by God because of making a wise choice?
A. King Solomon
B. King David
C. King Saul
D. King Joash
76. Jesus mainly taught the people by use of _____
A. Proverbs
B. Parables
C. Sayings
D. Riddles
77. Before being tempted by the devil Jesus had fasted for forty days and nights in the _____
A. Temple
B. Wilderness
C. Synagogue
D. Tabernacle
78. Who among the following members of the early church was punished for cheating the Holy Spirit?
A. Ananias
B. Joseph
C. Barnabas
D. Barsabas

79. Jesus washed the feet of His disciples
- A. During the last supper
 - B. When He was teaching in a boat
 - C. When He was teaching on a mountain
 - D. During His crucifixion
80. A person who desires to be a church leader should have the following qualities except one. Which one is it?
- A. One should only have one wife
 - B. One should be gentle and peaceful
 - C. One should only be disorderly and arrogant
 - D. One should be sober and self-controlled
81. Jesus always went to pray with His disciples on one of the following mountains. Which one is it?
- A. Mount Carmel
 - B. Mount Horeb
 - C. Mount Ararat
 - D. Mount Olives
82. Three of the following are fruits of the Holy Spirit. Which one is NOT?
- A. Having patience
 - B. Showing kindness
 - C. Having wisdom
 - D. Being humble
83. Christians have the hope of getting _____
- A. A lot of wealth
 - B. Plenty of land
 - C. Eternal life
 - D. A lot of money
84. The place Jesus was crucified is called Golgotha. Golgotha means
- A. Place of skull
 - B. Place of happiness
 - C. Place of suffering
 - D. Place of rejection
85. Judas betrayed Jesus to the chief priests for
- A. Twenty silver coins
 - B. Thirty silver coins
 - C. Forty silver coins
 - D. Fifty silver coins
86. Who among the following was a prophet in the early church?
- A. Micah
 - B. Daniel
 - C. Jeremiah
 - D. Agabus
87. Jesus was accused of giving Himself the power of God to forgive sins when He healed
- A. The ten lepers
 - B. The blind man
 - C. The paralysed man
 - D. The deaf and the dumb boy
88. Shaggy is a standard Four boy in Baba Mkubwa Primary school. He does not complete his homework. As a Christian we should advise him to
- A. Transfer to another school
 - B. Ask other pupils to do it for him
 - C. Take his work seriously
 - D. Pay his best friend to do it for him
89. Three of the following are names of God among African communities in Kenya. Which one is NOT?
- A. Jireh
 - B. Nyasaye
 - C. Mulungu
 - D. Asis
90. During the day of the Pentecost the symbol of the Holy Spirit was
- A. A dove
 - B. Tongues of fire
 - C. Lightning
 - D. Darknes



HIGH FLYER SERIES TRIAL EXAMINATION

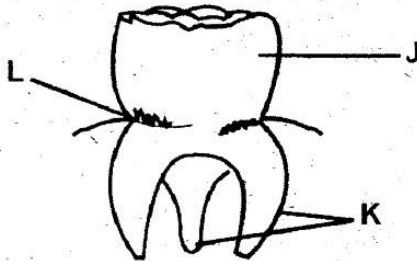
STANDARD 4 – 2015

SCIENCE

Time: 1 Hour 40 minutes

1. Which one of the following is not a problem related to teeth?
- A. Bad smell.
 - B. Dental floss.
 - C. Gingivitis.
 - D. Cavities.

Use the diagram below to answer questions 2-4.




2. The part marked J is called?
- A. Neck
 - B. Gum
 - C. Root
 - D. Crown
3. The type of tooth shown in the diagram is _____
- A. Molar.
 - B. Incisor
 - C. Premolar
 - D. Canine.
4. The function of the tooth shown is?
- A. Chewing.
 - B. Tearing
 - C. Cutting
 - D. Biting.

5. Which letter from the word AIDS means lack of?
- A. A
 - B. I
 - C. D
 - D. S

6. Which one of the following does not promote good health?
- A. Food
 - B. Excess sleep.
 - C. Exercise.
 - D. Rest.

7. The weather instrument below is called?



- A. Windsock.
 - B. Wind vane.
 - C. Rain gauge
 - D. Anemometer.
8. The best weather condition for washing clothes is
- A. Sunny and calm
 - B. Windy and cloudy
 - C. Sunny and windy.
 - D. Cloudy and windy
9. Which of these clouds resemble cotton wool?
- A. Nimbus
 - B. Cumulus
 - C. Stratus
 - D. Cirrus.

10. Which of the following can be seen in the sky during the day?

- A. Sun and clouds.
- B. Moon and stars.
- C. Stars and sun.
- D. Moon and clouds.

11. The study of weather is known as?

- A. Astronomy
- B. Weather station.
- C. Meteorology
- D. Meteorologist

12. The following are examples of cereals crops except

- A. Rice
- B. Soya
- C. Wheat
- D. Sorghum

13. Crops that give us seeds found in fruits called pods are known as?

- A. Tuber crops.
- B. Cereal crops
- C. Vegetables.
- D. Legume crops.

14. Plants that compete with crops for space and water are called?

- A. Beverages.
- B. Weeds.
- C. Trees
- D. Legumes.

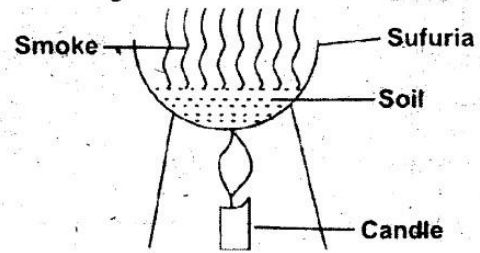
15. _____ is not an example of an oil crop

- A. Sunflower
- B. Cotton.
- C. Macadamia
- D. Coconut.

16. Which one of the following is not a component of soil?

- A. Water.
- B. Mineral particles.
- C. Plants
- D. Humus.

17. The diagram below shows that soil has?



- A. Air
- B. Water
- C. Organic matter
- D. Animals

18. The soil that makes the longest ribbon is _____

- A. Clay
- B. Loam
- C. Sand
- D. Loam and clay.

19. _____ Soil is found on the river bed?

- A. Loam
- B. Clay
- C. Sand
- D. None.

20. Which one of the following is not a source of fresh water?

- A. Rain
- B. Ocean.
- C. Rivers
- D. Boreholes

21. The following are domestic uses of water except

- A. Drinking
- B. Bathing
- C. Cooking
- D. Swimming.


22. Large volumes of water can be stored by using?

- A. Dams.
- B. Pots
- C. Jericans
- D. Drums.



23. All animals do the following except?
- A. Move
 - B. Feed
 - C. Excrete
 - D. Make food.

Use the diagram of an insect below to answer questions 24-25



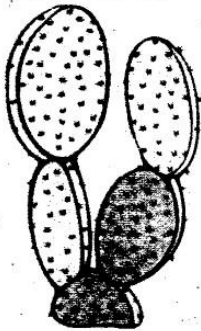
24. The part marked 1 is called _____
- A. Head
 - B. Abdomen
 - C. Feelers
 - D. Thorax.
25. The sense organ of the insect is marked?
- A. 1
 - B. 2
 - C. 3
 - D. 4
26. The following small animals have four pairs of legs except?
- A. Tick.
 - B. Housefly.
 - C. Scorpion.
 - D. Mite.
27. Meat got from sheep is known as _____
- A. Beef
 - B. Pork
 - C. Bacon
 - D. Mutton.
28. _____ is the main source of light energy on earth
- A. Stars
 - B. Moon
 - C. Candle
 - D. Sun.
29. Sound energy affects our sense of _____
- A. Hearing
 - B. Touch
 - C. Sight
 - D. Smell.
30. The form of energy that makes things hot is
- A. Electricity
 - B. Heat
 - C. Light
 - D. Sound
31. The following are artificial ways of lighting a house except
- A. Candles.
 - B. Electricity
 - C. Gas lamps
 - D. Skylights
32. The last meal of the day is known as?
- A. Lunch
 - B. Supper
 - C. Snacks.
 - D. Breakfast.
33. The following are sources of protective foods except
- A. Ground nuts
 - B. Pumpkins
 - C. Kales
 - D. Carrots.
34. Which one of the following represents a balanced diet?
- A. Pawpaw, kales and orange.
 - B. Yams, eggs and milk.
 - C. Beans, soya and milk.
 - D. Rice, beans and cabbage.
35. Pressure exerted by a liquid depends on?
- A. Area
 - B. Volume
 - C. Depth
 - D. Mass.



36. Which material below is not needed when investigating pressure in liquids?
- Nail
 - Collecting jar
 - Water
 - Plasticine.

37. _____ is not an example of a liquid
- Spirit
 - Water
 - Ink
 - Smoke

Use the diagram below to answer questions 38 - 39.



38. This plant is called _____
- Sisal
 - Cactus
 - Acacia.
 - Aloe vera.

39. The plant shown above grows in?
- Water
 - Swamp.
 - Along river banks
 - Deserts.

40. Which object below will float on water?
- Crushed bottle top
 - Nail
 - Cork
 - Wire.

41. Cutting tools should be _____ to make them more efficient?
- Oiled
 - Sharpened
 - Cleaned
 - Painted.

42. We use a _____ climb higher places
- Wheelbarrow.
 - Winch
 - Crowbar
 - Ladder

43. Things that burn to produce light are called?
- Charcoal.
 - Fuels
 - Fire
 - Firewood.

44. Our sense organ for touch is the _____
- Nose
 - Skin
 - Tongue
 - Ear

45. The following are special sounds except
- Ringing bell
 - Screaming.
 - Ambulance siren
 - Mowing cow.

46. An example of a herbivorous animal is?
- Cheetah
 - Elephant
 - Monkey
 - Pig.

47. A _____ reflects a lot of light?
- Mirror
 - Paper.
 - Glass
 - Stone.

48. Which animal coils when touched?
- Snail.
 - Ladybird
 - Millipede
 - Wasp

49. We wear _____ when playing in the field?
- Jackets.
 - T-shirts.
 - Suits.
 - Gum boots.

50. Which animal below gives birth?
- Bat
 - Crocodile.
 - Shark.
 - Ostrich.



HIGH FLYER SERIES TRIAL EXAMINATION STANDARD 4 – 2015

ENGLISH

Time: 1 hour 40 minutes

Read the passage below then select a suitable word to fill the gaps

1 time ago, the eagle and hyena were friends. 2 young ones were also friends. The eagle's 3 and the hyena's young ones used to 4 together. They 5 6. The hyena liked the eagle 7 he 8 fly far away looking 9 food. They always 10 the food brought by the eagle and then ate it. The hyena 11 lazy. He was even 12 than his old parents. He therefore did very 13. In one year, 14 was no food and eagle found it 15 to survive.

- | A | B | C | D |
|------------|----------|---------|-------------|
| 1. Long | Long | Along | Once |
| 2. The | There | Their | Its |
| 3. owlets | calves | cubs | eaglets |
| 4. feed | fed | find | cry |
| 5. live | leave | leaved | lived |
| 6. happy | sadly | happily | sorrowfully |
| 7. so much | because | then | therefore |
| 8. can | will | would | could |
| 9. after | at | for | on |
| 10. share | shared | ate | threw |
| 11. is | had been | was | were |
| 12. lazy | lazier | busier | lazier |
| 13. much | little | less | nothing |
| 14. their | it | then | there |
| 15. hard | herd | had | heard |

Select the correct word to fill the gap

16. Amin is the _____ of the twins
 A. Short
 B. Shorter
 C. Shortest
 D. Tallest

17. This milk is _____ than the way I left it
 A. less
 B. much
 C. little
 D. most

Martha was not happy about this, the other children did the right thing. They were never late to school but Martha was. Although she always did the wrong things everybody liked her. She was kind, fun, never angry or rude and loving. She had lots of friends.

- | | |
|---|--|
| <p>31. Martha liked to eat _____
 A. Bananas Bread
 C. Sweets D. Sugar cane</p> <p>32. On her birthday she wanted to have _____
 A. New bicycle
 B. A new dress
 C. Pretty long hair
 D. Good results</p> <p>33. After Martha tried something
 A. Somebody came to help her
 B. People laughed at her
 C. Things went wrong
 D. Everything was alright</p> <p>34. Which mistake is not mentioned in the story?
 A. Being late
 B. Dropping the baby
 C. Forgetting money
 D. Being laughed at</p> <p>35. Martha was
 A. Funny and selfish
 B. Friendly and funny
 C. Kind and rude
 D. Polite and ugly</p> | <p>36. What did she break? Her
 A. leg
 B. father's chair
 C. mother's chair
 D. bother's chair</p> <p>37. What happened when she went to the market?
 A. Dropped money
 B. Forgot what to buy
 C. Forgot some baskets
 D. Forgot the money</p> <p>38. How different was she from the other children?
 A. They did mistake as well
 B. They dropped their brothers
 C. They were late
 D. They did the right thing</p> <p>39. The opposite of early is
 A. late B. angry
 C. fast D. lazy</p> <p>40. The best title of the story is
 A. A pretty girl
 B. A bright girl
 C. Martha and the dog
 D. A girl who did everything wrong</p> |
|---|--|

Read the story then answer the questions

Many years ago, hyenas and human beings were great friends. One day man and hyena killed a buffalo. They were very happy because they knew they would not go hungry for many days. "We'll roast the meat tomorrow." said the hyena. "That is alright, we need to bring a lot of water and firewood." The next day they met in the forest. They



made a big fire. They put the whole buffalo on the fire to roast without cutting off the head or legs.

The hyena kept on salivating. He was so greedy that he could not wait for the meat to be ready. He started eating the meat before it was well cooked. The man was hungry too so he ate as well. They ate until the man could not eat any more.

"Please let us stop eating now," he said to the hyena. "We've had enough. If we eat more we shall get ill." However the hyena refused to hear.

"When there's meat, I don't leave it for the jackals, I eat it all," hyena said. He went on eating and ate even the hard hoofs. He was so full that he could not move. Finally he fell down after eating the whole buffalo. He collapsed and died.

41. From the passage it is said that
- Hyenas and people were enemies
 - One day hyena killed a buffalo
 - Hyenas and people were great friends
 - The man was hungrier than the hyena
42. We say as _____ as the hyena
- hungry
 - greedy
 - lazy
 - fast
43. Why were they happy after killing a buffalo?
- They were hungry
 - They would get food
 - They would share food
 - The buffalo was big
44. When man and hyena met what did they do?
- Roasted the buffalo
 - Lit a fire
 - Ate meat
 - Danced
45. Why couldn't the hyena wait for the meat to cook?
- He was hungry
 - There was no fire
 - The meat was not enough
 - He was greedy
46. "Please let us stop eating now....." who said so?
- man
 - hyena
 - both
 - buffalo
47. What happened to the hyena finally?
- He slept
 - He died
 - He ran away
 - He was killed
48. Meat that is not cooked is said to be _____
- raw
 - stale
 - fresh
 - stale
49. Which one of the following is FALSE?
- Hyena was greedy
 - Man wanted them to leave some meat
 - The man did not salivate
 - Hyena did not eat the hoofs
50. Which is the best title of the passage?
- The man and buffalo
 - The hyena and buffalo
 - The man and the hyena
 - Man killed a buffalo





HIGH FLYER TRIAL EXAM 2015

STANDARD FOUR

MARKING SCHEME

ENGLISH	KISWAHILI	MATHS	SCIENCE	SOCIAL STUDIES	
1. B	1. B	1. C	1. B	1. D	
2. C	2. C	2. A	2. D	2. A	51. D
3. D	3. A	3. D	3. A	3. B	52. C
4. A	4. D	4. B	4. A	4. B	53. C
5. D	5. A	5. D	5. C	5. B	54. C
6. C	6. A	6. A	6. B	6. A	55. D
7. B	7. B	7. C	7. A	7. B	56. A
8. D	8. C	8. C	8. C	8. B	57. B
9. C	9. A	9. B	9. B	9. A	58. C
10. B	10. D	10. A	10. A	10. A	59. B
11. C	11. C	11. C	11. C	11. D	60. D
12. D	12. B	12. B	12. B	12. A	
13. B	13. A	13. D	13. D	13. C	
14. D	14. D	14. B	14. B	14. C	
15. A	15. A	15. C	15. B	15. D	
16. B	16. D	16. A	16. C	16. B	
17. A	17. B	17. C	17. C	17. C	
18. D	18. C	18. D	18. A	18. C	
19. A	19. B	19. A	19. C	19. B	
20. A	20. C	20. B	20. B	20. B	
21. D	21. D	21. C	21. D	21. B	
22. D	22. B	22. A	22. A	22. A	
23. C	23. D	23. D	23. D	23. A	
24. D	24. C	24. B	24. D	24. B	
25. B	25. A	25. A	25. C	25. C	
26. C	26. D	26. B	26. B	26. A	
27. A	27. B	27. D	27. D	27. A	
28. C	28. C	28. C	28. D	28. C	
29. A	29. B	29. D	29. A	29. C	
30. C	30. C	30. B	30. B	30. C	
31. C	31. B	31. A	31. D	31. D	
32. B	32. A	32. C	32. B	32. B	
33. C	33. C	33. B	33. A	33. B	
34. D	34. A	34. C	34. D	34. C	
35. B	35. D	35. D	35. C	35. C	
36. C	36. C	36. A	36. B	36. D	
37. D	37. B	37. C	37. D	37. A	
38. D	38. D	38. B	38. B	38. A	
39. A	39. B	39. D	39. D	39. C	
40. D	40. B	40. A	40. C	40. C	
41. C	41. B	41. B	41. B	41. C	
42. B	42. B	42. A	42. D	42. D	
43. B	43. A	43. D	43. B	43. D	
44. B	44. D	44. B	44. B	44. D	
45. D	45. A	45. A	45. D	45. A	
46. A	46. B	46. B	46. B	46. A	
47. B	47. A	47. C	47. A	47. D	
48. C	48. A	48. A	48. C	48. C	
49. D	49. D	49. D	49. B	49. B	
50. C	50. C	50. B	50. A	50. D	
					I.R.E
					1. D
					2. C
					3. D
					4. C
					5. A
					6. C
					7. A
					8. A
					9. B
					10. C
					11. C
					12. B
					13. C
					14. D
					15. D
					16. A
					17. A
					18. A
					19. B
					20. C
					21. B
					22. A
					23. D
					24. A
					25. B
					26. B
					27. A
					28. A
					29. C
					30. B
					C.R.E
					61. A
					62. A
					63. C
					64. D
					65. C
					66. A
					67. B
					68. A
					69. C
					70. C
					71. C
					72. A
					73. A
					74. A
					75. A
					76. B
					77. B
					78. A
					79. A
					80. C
					81. D
					82. C
					83. C
					84. A
					85. B
					86. D
					87. C
					88. C
					89. A
					90. B

HIGH FLYER SERIES TRIAL EXAMINATION



STANDARD 4 – 2015

ENGLISH

COMPOSITION

Time: 40 minutes

YOUR NAME	
NAME OF YOUR SCHOOL	

READ THESE INSTRUCTIONS CAREFULLY

1. In the spaces provided above write your full Index Number, Your Name and Name of your school.
2. Now open this paper, read the composition subject carefully and write your composition on the lines provided.

This Question Paper consists of 4 printed pages.

JARIBIO LA MTIHANI WA HIGH FLYER SERIES



DARASA LA NNE – 2015 KISWAHILI – SEHEMU YA PILI INSHA

Muda: Dakika 40

JINA LAKO	
JINA LA SHULE YAKO	

SOMA MAAGIZO HAYA KWA MAKINI

1. Kwenye nafasi zilizoachwa hapo juu andika namba yako kamili ya mtihani, jina lako na jina la shule yako.
2. Sasa fungua karatasi hii, soma kichwa cha insha kwa makini na uandike insha yako kwenye nafasi zilizoacha.

Kijitabu hiki kina kurasa nne zimepigwa chapa.



