

STEGA SERIES

STD 2 2015

MATHEMATICS

NAME _____

DATE _____

1. Write in words 248 _____

2. $138 =$ _____ hundreds _____ tens,
_____ ones.

3. What number is missing?

2, 4, 6, _____

4. $3 + 9 + 2 =$

5. $4 + 5 + 13 =$

6. 67 7. 61

+52

+12

8. $81 + 96 =$ _____

9. $38 + 29 =$ _____

10. Arrange from biggest to the smallest.

19, 8, 20, 6, 2, 23

11. Circle the numbers more than 6

4, 9, 10, 3, 5

12. $27 - \square = 16$

13. $9 + \square = 18$

14. $8 + \square = 10$

15. $66 - 6 =$

16. $5 \times 8 =$

17. $2 \times 2 =$

18. $0 \times 8 =$

19. $10 \times \square = 50$

20. $5 + 5 + 5 =$ _____ \times _____ $=$ _____

21. One boy has 2 ears. How many ears
do 6 boys have? _____

22. Draw a triangle

23. A car has four wheels. How many
wheels do nine cars have? _____

24. The month of March has _____
days.

25. $126 + 224 =$ _____

26. $365 + 301 =$ _____

27. 3 hundreds 0 tens 2 ones = _____

28. John had 99 goats. 66 goats died.

How many remained? _____

29. $88 - 42 =$ _____

30. 576

-306

31. 56

-28

32. Kamau had 7 oranges, he added 2 more oranges. How many oranges had he altogether? _____

33. Ten plus eight = _____

34. $116 - 91 =$ _____

35. 39 metres

$+49$ metres

36. 31meters

-10 meters

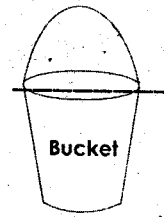
37. $15 \div 3 =$ _____

38. $14 \div 2 =$ _____

39. $21 \div 3 =$ _____

40. $20 \div 2 =$ _____

41. Which one holds more water?



42. $46 + 316 =$ _____

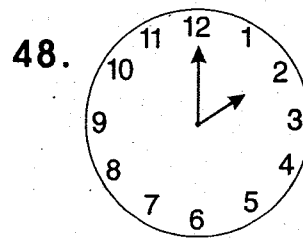
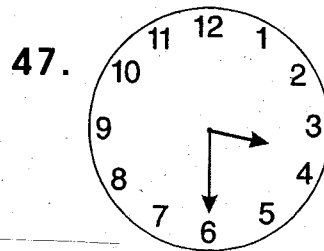
43. $4 + 4 + 4 + 4 =$ _____

44. Which is heavier, 2 kilograms of sugar or 2 kilograms of stones? _____

45. $\square - 6 = 13$

46. Write in figures: five hundred and ninety six _____

What is the time



49. The number before 970 is _____

50. _____ is the fifth month of the year.

NAME _____

DATE _____

Dictation

1. _____
2. _____
3. _____
4. _____
5. _____

Use how, why, who, what

6. _____ old is John?
7. I did not know the reason _____ she came late.
8. _____ is your friend?
9. _____ do you like eating?
10. _____ is the baby crying?

Write the plural of these words

11. Brush _____
12. Tray _____
13. Woman _____
14. Roof _____
15. Lorry _____

Write the opposite of the underlined word

16. Velvet is very smooth.
17. It was a hard job for Mary.
18. The cat played inside the house.
19. She used a sharp knife.

Write the ending word

20. fire _____
 21. sun _____
 22. rail _____
 23. book _____
- (shop, flower, way, wood)

Use has or have

24. We _____ done the work well.
25. My father _____ two cars.
26. Daniel _____ a toy car.
27. I _____ come late.

Underline the nouns

28. I bought a green ball.
29. The orange is very sweet.
30. All the books were stolen.
31. The doll has beautiful colours.

Write the doing words

eg look - looking

32. Walk _____
33. Write _____
34. Run _____
35. Play _____
36. Skip _____

Who are they?

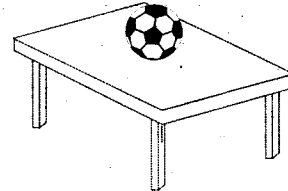
37. I sell sugar, bread and milk. I am
a _____
38. I fly aeroplanes all over the world.
I am a _____
39. I repair cars, buses and lorries. I
am a _____
40. One who drives cars, lorries and
buses is a _____

Fill in the missing letters

41. o___ ang ___
42. b___t___le
43. m___n___y

Use 'on' 'in' or 'under'

44.




The ball is _____ table.

45.



The milk is _____ the glass.

46.



The cat is _____ the table.

Write the words well

47. tike _____
48. onom _____
49. mjup _____
50. lofresw _____

STEGA SERIES

STD 2 2015

READING

NAME _____

DATE _____

READ THESE WORDS

1. Calendar
2. Direction
3. Lip
4. Shoelace
5. Millet
6. Hippopotamus
7. Shine
8. Hedge
9. Mattress
10. Soft

Read the sentences

1. The door is opened.
2. She is my sister.
3. The time is two o'clock.
4. I have two eyes.
5. My book is filled up.

Read the Passage

Last year a new boy came to our class from Nigeria. He was called Okw. He was seven years old. He wore very smart clothes. Everybody in our class liked him. Our teachers loved him very much.

KUSOMA DARASA LA PILI

Soma maneno haya

1. Maziwa
2. Soksi
3. Buibui
4. Mbwa
5. Tumbo
6. Mkeka
7. Rula
8. Fisi
9. Sokoni
10. Duka

Soma sentensi hizi

1. Paka anakula panya.
2. Hii ni chupa.
3. Hawa ni wavulana.
4. Nyoka ni mnyama hatari.
5. Kuku hutaga mayai.

Soma kifungu hiki

Jina langu ni Njeri. Mwalimu wangu wa Kiswahili anaitwa Okoth. Yeye hutupeleka kwenye maktaba. Kuna vitabu vingi maktabani ambavyo vimepangwa kwenye rafu; sisi husoma hadithi nzuri sana.

STEGA SERIES
KISWAHILI
DARASA LA PILI 2015

JINA _____

TAREHE _____

Imla

1. _____
2. _____
3. _____
4. _____
5. _____

Andika wingi wa maneno haya

6. Meza _____
7. Ng'ombe _____
8. Daktari _____
9. Dawati _____
10. Kiatu _____

Tumia huyu, huu, hiki, hii

11. Mtoto _____ ni mchafu.
12. Mti _____ umeanguka.
13. Kiatu _____ kimeraruka.
14. _____ ni mkate.
15. Mwalimu _____ amekuja
amechelewa.

Andika maneno vizuri

16. zimbu _____
17. ziwama _____
18. rachu _____
19. gemni _____
20. mbachu _____

Andika kwa umoja

21. Mikebe _____
22. Nyumba _____
23. Viberiti _____
24. Fagio _____
25. Walevi _____


Andika kinyume cha maneno

haya

26. Fupi _____
27. Mdogo _____
28. Joto _____
29. Kijana _____
30. Mchana _____

Andika majina ya picha

31.



32.



33.



Jaza pengo

34. T _____ mb _____ a

35. K _____ t _____ mb _____ a

36. K _____ nd _____

37. K _____ l _____ m _____

Tegua vitendawili

38. Siwezi kupanda mlima

(maji, ugali ,mate)

39. Huku ng'o na kule ng'o

(giza, mwangaza, maji)

40. Natembea na nyumba yangu

yote _____

(kobe, samaki, chura)

41. Nameza na sishibi _____

(usingizi, mguu, mate)

Andika kwa maneno au

nambari

42. 232 _____

43. 107 _____

44. Sabini na saba _____

45. Mia moja hamsini na tatu

46. Mia mbili _____

Kamilisha methali hizi

47. Bendera hufuata _____

48. Pole pole ndio _____

49. Fuata nyuki ule _____

50. Damu ni nzito kuliko _____

STEGA SERIES

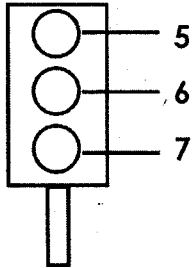
STD 2 2015

SOCIAL STUDIES

NAME _____ DATE _____

1. During the _____ seasons crops grow well.
(hot , cold, rainy)
2. The sun rises in the _____
(East, West, North)
3. All trees were shaking and bending on one side. It was a _____ day.
(calm, windy, rainy)
4. Street families do not have a _____
(land, home, people)

Name the traffic lights



8. We celebrate _____ on 12th December
(Jamhuri, Madaraka, Labour)
9. People walking along the road are called _____
(pedestrian, passengers cyclist)
10. The deputy headteacher of our school is called _____
11. We should always ride bicycles on the _____ side of the road.
(right, left, path)
12. A _____ school is safe from diseases.
(dirt, big, clean)
13. We should _____ the tap water after use (open, close, break)
14. A _____ centre is a place where people buy and sell goods.
(market, farm, church)
15. _____ are things that we see on land.
(physical features, drainage features, valleys)
16. National anthem is a _____ for our country.

- (president, prayer, worship)
17. Too much rain causes _____
(floods, drought, hunger)
18. One of the following does not provide our school needs.who is it? _____
(parents, teachers, thieves)
19. A flat land is also called _____
(hill, plain, mountain)
20. Things belonging to school are called school _____
(things, property, items)
21. Things used to meet our needs are called _____
(resources, activities. animals)
22. Painting the walls of a building in our school makes them look _____
(bad, big, smart)
23. This road sign means _____ ahead
(school, church, hospital)



24. _____ is a right of children
(sleeping, crying, education)
 25. _____ is a person who walks on the footpath along the road.
 26. When bad things are done to children, it is called _____
(child abuse, child discipline child love)
 27. The person who types letters in our school is called _____
(driver, secretary, cook)
- Complete
28. Nasi _____ kwa nguvu
(tujitoe, tujiweke, tujilaze)
 29. _____ is the fastest means of communication
(radio, letter, phone)
 30. Things like roads, dams, are known as _____ features.
(physical, natural, man-made)

NAME _____

DATE _____

- | | |
|---|--|
| <p>1. _____ is talking to God,
(crying, praying, laughing)</p> <p>2. _____ taught the Lord's prayer.
(satan, Jesus, God)</p> <p>3. There are _____ books in the old
testament.
(39, 37, 27)</p> <p>4. _____ was swallowed by a
big fish.
(Noah, Jonah, Eli)</p> <p>5. _____ was thrown in a den of
lions. (Moses, Peter, Daniel)</p> <p>6. God gave me _____ to walk.
(eyes, hands, legs)</p> <p>7. The mother of Jesus was called

(Elizabeth, Mary, Ruth)</p> <p>8. When sinners die they go to

(heaven, hell, home)</p> <p>9. King Solomon asked God to give
him _____
(richness, wisdom, a job)</p> <p>10. Adam and Eve lived in the land of
(Egypt, Israel, Eden)</p> | <p>11. We should rest on the _____ day.
(busy, sabbath, sixth)</p> <p>12. God's gift to us is _____
(Moses, Abraham, Jesus)</p> <p>13. Jesus was born in a _____
(bedroom, manger, hospital)</p> <p>14. _____ denied Jesus 3 times.
(Judas, Solomon, Peter)</p> <p>15. The strength of _____ was in the hair.
(Solomon, Goliath, Samson)</p> <p>16. Samuel's mother was called

(Ruth, Hannah, Leah)</p> <p>17. Who baptised Jesus _____
(John the baptist, Jonah,
David)</p> <p>18. Naomi had _____ sons.
(3, 2, 1)</p> <p>19. The bible is a _____ book.
(big, old, holy)</p> <p>20. You should love your neighbour
as you love _____
(books, children, yourself)</p> |
|---|--|

NAME _____

DATE _____

1. Which one is a sense organ?
(smell, sight, ears)
2. We use a _____ to remove
cob webs in our class
(brush, mop, twig broom)
3. A _____ has a bad smell,
(perfume, dead animal,
flower)
4. Rules of cleanliness are called

(cleaning, hygiene, dirt)
5. Always use a clean _____ to
wipe the nose.
(towel, handkerchief, socks)
6. Unwanted plants are called

(branches, weeds, grass)
7. We get seeds from _____.
(soil, fruits, air)
8. Draw a maize leaf
9. _____ causes diseases.
(germs, ticks, insects)
10. _____ soil is used for modelling.
(loam, clay, sand)
11. We get eggs and meat from

(cattle, poultry, fish)
12. Fruits should be _____ before
eating.
(boiled, cooked, washed)
13. Removing weeds from the farm is
called _____
(watering, weeding,
germinating)
14. A car has _____ wheels.
(4, 10, 6)
15. Trees bend because of _____
(sound, light, wind)
16. We should put on _____
clothes on a hot day.
(Black, heavy, light)
17. Mutton is meat of a _____
(cow, pig, sheep)
18. Moving air is called _____
(waves, wind, water)
19. When we mix soil and water we
get _____
(mud, stones, dust)
20. Honey tastes _____
(bitter, sour, sweet)
Name three ways of taking
care of plants
21. _____
22. _____
23. _____
24. We eat the _____ of sweet

potatoes.

(leaves, roots, stem)

25. Growing of a new plant from a seed is called.

(seedling, germination, watering)

26.  This animal is _____

27. It moves by _____
(crawling, swimming, walking)

28. Long nails keep _____
(water, germs, soap)

29. _____ germinates into a new plant
(seeds, fruits, leaf)

30. The body of an insect is divided into _____ parts. (3, 2, 4)

31. A guitar produces sound by _____
(blowing, plucking, hitting)

32. _____ causes malaria
(flies, termites, mosquitoes)

33. Sound travels in _____ direction. (one, left, one)

34. After using a pit latrine, we should _____ it. (flush, cover, wash)

35. Animals kept at home are called _____ animals. (wild, big, domestic)

36. On a _____ day kites fly well
(sunny, calm, windy)

37. Sound is produced when things _____
(move, vibrate, dance)

38. The best soil for growing crops is

_____ soil.

(loam, sand, clay)

39. When you look in the mirror you see your _____

(shadow, face, image)

40. Light clothes should be worn on a _____ day.

(cold, sunny, rainy)

41. When there is no rain we should _____ the plants

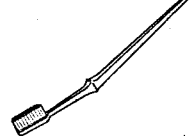
(water, cut, plant)

42. _____ is the main source of light at night.

(sun, moon, firewood)

43. We use _____ to clean the ears.
(cotton bud, toothpick, handkerchief)

44. Rain comes from the _____
(air, soil, clouds)

45.  This is used to brush our _____
(shoes, teeth, floor)

46. Winnowing separates chaff from _____
(grains, water, mud)

47. Urinals are used by _____ to pass urine.
(boys, mothers, girls)

48. Bodies of birds are covered with _____
(hair, feathers, scales)

Name two sources of water

49. _____

50. _____