

TARGETER WINGS EVALUATION TEST

STANDARD THREE - YEAR 2015

MATHEMATICS



006

NAME SCHOOL Date:

Fill in the missing numbers.






1. 910, 920, _____, _____, _____, _____

2. Arrange the numbers from the largest to the smallest.
208, 187, 710, 29, 125, 98

3. Write in words 548

4. Write in symbols
Nine hundred and twelve

In what position?

first	second	third	fourth	fifth
				

5. The cup is in the _____ position.
6. The ball is in the _____ position.
7. The fish is in the _____ position.
8. The bottle is in the _____ position.
9. The banana is in the _____ position.

10.
$$\begin{array}{r} 93 \\ +84 \\ \hline 79 \end{array}$$

11.
$$\begin{array}{r} 19 \\ +17 \\ \hline 75 \end{array}$$

12. One bag has 28 oranges. Another bag has 95 oranges. How many oranges are there altogether?

13.
$$\begin{array}{r} 300 \\ +619 \\ \hline \end{array}$$

14.
$$\begin{array}{r} 588 \\ +292 \\ \hline \end{array}$$

15. $87 - 5 =$ _____

16. $57 - 27 =$ _____

17.
$$\begin{array}{r} 950 \\ +619 \\ \hline \end{array}$$

18.
$$\begin{array}{r} 906 \\ +292 \\ \hline \end{array}$$

19. Subtract 136 from 680 _____

20. Njeri had 36 books. She gave out 17 books to her pupils. How many books were left?

21. Take away 15 from 51 _____

22. What is 93 take away 39? _____

23. What is the next number in the pattern?
12, 20, 28, 36, _____

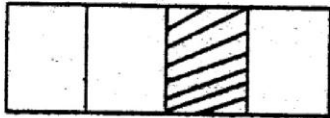
24. Half of 16 = _____

25. $\frac{1}{2}$ of 22 = _____

26. A quarter of 20 is _____

27. $\frac{1}{4}$ of 36 = _____

28. What fraction is shaded?



29.
$$\begin{array}{r} 10 \\ \times 9 \\ \hline \end{array}$$

30.
$$\begin{array}{r} 12 \\ \times 6 \\ \hline \end{array}$$

31. A shopkeeper sold a book for sh.6 for how much did she sell 7 such books? _____

32. $8 \times \square = 8$

33. $27 = \square \times 3$

34. $45 \div 9 =$ _____

35. $64 \div 8 =$ _____

36. If I divide 20 marbles equally among 4 girls. How many marbles will each girl get?

37. $6 \overline{)48}$ 38. $6 \overline{)54}$

39. $\frac{2}{8} + \frac{3}{8} =$ _____

40. $5 + \square = 25$

41. $\frac{1}{4} + \frac{1}{4} + \frac{1}{4} =$ _____

42. $18 - \square = 12$

43. $\frac{2}{4} - \frac{1}{4} =$ _____

44. 68 = _____ hundreds _____ tens _____ ones.

45. 8 thousands 0 hundreds 2 tens 1 ones = _____

46. 3 weeks 6 days = _____ days

47. 70 days = _____ weeks.

48. 16 days = _____ weeks _____ days

49.
$$\begin{array}{r} \text{weeks} \quad \text{days} \\ 3 \quad 6 \\ +1 \quad 6 \\ \hline \end{array}$$

50.
$$\begin{array}{r} \text{weeks} \quad \text{days} \\ 3 \quad 4 \\ -1 \quad 5 \\ \hline \end{array}$$

TARGETER WINGS EVALUATION TEST

STANDARD THREE - YEAR 2015

SCIENCE



006


Date:

NAME SCHOOL

1. We can ____ big things better than small things.
(hear, see, smell)
2. We can see only big things ____.
(true, false)
3. Maskio can see things that are far away better than the things that are near. We can say he is ____.
(both - sighted, far - sighted, near - sighted)
4. Food makes the body strong and ____.
(hungry, sick, bigger)
5. ____ is needed to make the muscles strong.
(exercise, sleep, rest)
6. Food protect us from ____.
(growing, the doctor, sickness)
7. Timber is used to make ____.
(feather, furniture, food)
8. We make cloth from ____.
(rubber, cotton, sunflower)
9. ____ is used as a spice.
(garlic, carrot, cabbage)

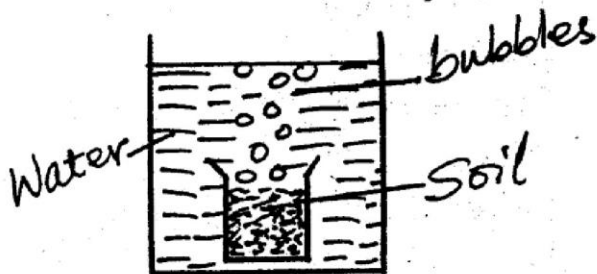
Match the items in the table correctly.

- | <u>plant</u> | <u>from it we get</u> |
|------------------|-----------------------|
| 10. tea leaves | coffee |
| 11. coffee berry | tea |
| 12. sisal | spices |
| 13. rubber | a basket |
| 14. pepper | tyres |
15. The weather can be recorded using ____.
(letters, pictures, symbols)
 16. We call monthly weather changes.
(charts, symbols, seasons)
 17. Most domestic animals eat ____.
(meat, soil, grass)
 18. Which one is not a domestic animal?
(goat, camel, buffalo)
 19. A snail protects itself by hiding in its ____.
(shell, house, hole)
 20. This is a ____.



- (bird, fish, snake)**
21. It moves by ____.
(flying, crawling, swimming)
 22. We boil water to ____.
(cook food, make it hot, make it safe for drinking)

23. Filtering water removes _____
(germs, dirt, colours)
24. There are _____ types of soil.
(three, four, two)
25. The type of soil with very small particles is _____ soil.
(clay, loam, sand)
26. Sound travels in _____ directions (one, two, all)
27. The experiment shown by the diagram below shows _____
(air in the soil, water in soil, water has bubbles)

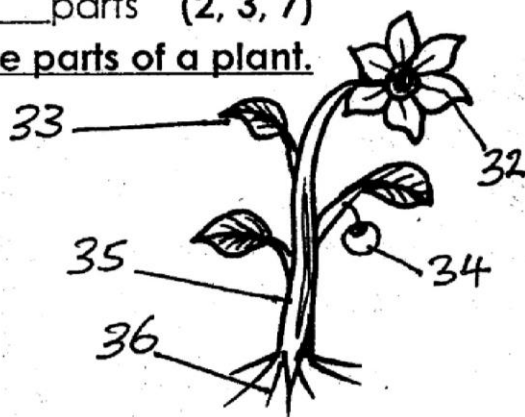


28. For a seed to germinate it needs air, water and _____
(light, warmth, soil)
29. How is the weather?



- (calm, windy, cloudy)
30. The watering of plants during dry season is called _____
(harvesting, irrigation, planting)
 31. The body of an insect has _____ parts (2, 3, 7)

Name the parts of a plant.



32. _____
33. _____
34. _____
35. _____
36. _____
37. Flowers produce _____
(seeds, plants, leaves)
38. Moving air is called _____
(oxygen, air, wind)
39. The meat of a cow is called _____
(beef, dairy, pork)
40. A spider lives in a _____
(web, nest, air)
41. Skin is a sense of _____
(sight, hearing, touch)
42. We harvest crops during _____ season.
(wet, dry, windy)
43. If you have a problem with your eyes you visit _____
(a dentist, a nurse, an optician,)
44. True insects have _____ legs.
(4, 6, 8)
45. We eat the root of a _____
(cabbage, rice, cassava)
46. Water lily grows in _____
(field, water, garden)
47. Too much rain causes _____
(drought, floods, blood)
48. A vest is worn when it is _____
(cold, rainy, hot)
49. Millipede protects itself by _____
(coiling, jumping, running)
50. A spider has _____ legs
(6, 8, 4)

TARGETER WINGS EVALUATION TEST

STANDARD THREE - YEAR 2015

ENGLISH



006

Date:

NAME SCHOOL

Use on, under, or in.

1. There is water _____ the bottle.
2. He is sitting _____ a chair.
3. Mary is hiding _____ the bed.
4. They swim _____ deep water.
5. John is running _____ the floor.

Put a full stop (.) or question mark (?) where necessary.

6. What is your name _____
7. This house is very big _____
8. Where are your books _____
9. What is John doing _____
10. Let us go home _____

Fill in the blank spaces.

11. R____bb____r
12. ch____r____o____l
13. Da______ hter
14. m____rk____t
15. b____sk____t

Use this or these.

16. _____ are our books.
17. _____ is my mother.
18. Are _____ animals grazing.
19. _____ are my friends.
20. _____ car belongs to him.

Write the past tense.

21. Drive _____
22. Put _____
23. Find _____
24. catch _____
25. steal _____

Use "there" or "their" to fill in the gaps.

26. Put your books _____
27. Those are _____ children.
28. John and James took _____ books.
29. I am going _____
30. They have _____ books ready.

Write the plural.

31. chinmey _____
32. loaf _____
33. Donkey _____
34. berry _____
35. chief _____

Write their young ones.

36. Elephant _____
37. Donkey _____
38. Lion _____
39. Dog _____
40. Sheep _____

Use has or have.

41. They _____ many pens.
42. She _____ water in the jug.
43. The child _____ long hair.
44. The clock _____ two hands.
45. The doctors _____ come.

Complete the following.

46. _____ easier, _____
47. Heavy _____, _____
48. _____, _____, Thinnest
49. _____, hotter, _____
50. bad, _____, _____

TARGETER WINGS JARIBIO LA MTHANI**DARASA LA TATU - MWAKA 2015**

006

KISWAHILI

Tarehe:

JINA SHULE

Chagua neno sahihi kujaza pengo.

1. Vyombo hivi ni _____.
(chafu, visafi, safi)
2. Kitabu _____ picha ni hiki.
(kina, chenye)
3. Juma aliandika _____
kalamu nzuri.
(na, kwa, ana)
4. Mgeni wetu _____ nyama
ya mbuzi.
(hali, hakuli, hajakula)
5. Kwa nini wewe _____ soda
yako?
(haunywi, hakunywi, hunywi)

Tumia kihusishi kamili.

6. Weka nguo _____ ya
sanduku.
7. Utosi ni _____ ya kichwa.
8. Mtoto amekaa _____ ya
mama yake.
9. Abiria amesimama _____ ya
barabara.

10. Vitabu vipo _____ ya meza.
(katikati, juu, ndani, mbele,
kando)

Tumia huu, hizi, hili, yale, hiyo.

11. Gari _____ ni la mwalimu
wetu.
12. Ufagio _____ ni wa ajuzi
yule.
13. Chupa _____ zitatiliwa maji.
14. Mawe _____ yalinunuliwa.
15. Meza yangu ndiyo _____
hapo.

Andika kinyume.

16. Mwalimu _____
17. Mjomba _____
18. Nunua _____
19. Mweusi _____
20. Kimbia _____




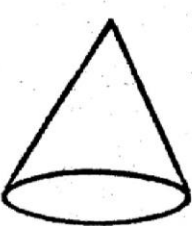

Tumia -enu.

21. Vitabu _____
 22. Gari _____
 23. Wazazi _____
 24. Njia _____
 25. Chumba _____

Kanusha.

26. Anaimba _____
 27. wamelala _____
 28. chezeni _____
 29. Njoo _____
 30. Kunyweni _____

Andika majina ya maumbo.

31.  _____
 32.  _____
 33.  _____
 34.  _____
 35.  _____

Andika kwa nambari au maneno.

36. Mia saba thelathini _____
 37. 805 _____
 38. 900 _____
 39. Mia sita thelathini na nne.

 40. Mia tisa themanini

Jaza herufi zilizochwa.

41. Ma _____ ngwa.
 42. Mn _____ r _____
 43. Mg _____ ng _____
 44. nd _____ z _____
 45. mt _____ h _____ n _____

Tumia li, u, ki, wa, au, i kujaza pengo

46. Kisima _____ lichimbwa hapa.
 47. Wembe _____ linikata.
 48. Yai _____ lianguka.
 49. Miti _____ sikatwe ovyo ovyo.
 50. Mbu _____ naleta malaria.

TARGETER WINGS EVALUATION TEST**STANDARD THREE - YEAR 2015****READING / KUSOMA**

006



Date:

NAME SCHOOL

READING**1. Read these words**

- | | | | |
|-------------|-------------|---------------|--------------|
| 1. children | 6. nephew | 11. barley | 16. curtain |
| 2. family | 7. lord | 12. bungalow | 17. report |
| 3. enemy | 8. question | 13. warehouse | 18. ticket |
| 4. benches | 9. singular | 14. medal | 19. garden |
| 5. language | 10. wheat | 15. circus | 20. marriage |

2. Read these sentences.

21. You sang very well.
22. The teacher told us a good story.
23. The lady sat on a black chair.
24. We learned a new game.
25. It jumped over a box.

KUSOMA**1. Soma maneno haya.**

- | | | | |
|---------------|----------------|--------------|---------------|
| 1. ugenini | 6. Tulifurahia | 11. lugha | 16. danganya |
| 2. mbaazi | 7. pundamilia | 12. magazeti | 17. imeanguka |
| 3. ubigubi | 8. twataka | 13. mikisa | 18. mjukuu |
| 4. chumbwi | 9. waaminifu | 14. alfabeti | 19. ubongo |
| 5. mheshimiwa | 10. darasani | 15. mbwa | 20. akicheua |

2. Soma sentensi hizi.

21. Kiangazi ni majira ya jua kali bila mvua.
22. Mgeni amekuja kwetu.
23. Kuku wamekufa wote.
24. Mimi ninakula chakula kitamu.
25. Mjomba ameninunulia shati jipya.

TARGETER WINGS EVALUATION TEST

STANDARD THREE - YEAR 2015


SOCIAL STUDIES / C.R.E

006




Date:

NAME SCHOOL

1. A long period without rain is called _____.
(drought, floods, rainy)
2. We celebrate Jamhuri day on _____ day.
(12 December, 1st May, 1st June)
3. The head of a location is the _____.
(village elder, chief, D.O)
4. Which one of the following is a natural feature? _____
(river, bridge, church)
5. This is a _____

(arrow, compass, cross)
6. It is used to show _____.
(direction, points, place)
7. Rivers that dry during the dry season are called _____.
(seasonal, permanent, perenial)
8. We record weather using weather _____.
(signs, symbols, chart)
9. _____ is the peoples way of life.
(community, tribe, culture)
10. Sides of the mountains are called _____.
(sides, direction, slopes)

11. Farmers plant during the _____ season.
(dry, hot, rainy)
12. The house of maasai is built by _____.
(men, boys, women)
13. People wear this when it is _____



14. _____ is a place where we learn.
(latrine, school, hospital)
15. _____ is the coldest month of the year.
(June, August, July)
16. During the _____ season people take a lot of water.
(cold, rainy, hot)
17. The elements of weather are wind, sunshine, rain, and _____.
(hot, calm, clouds)
18. The meat we get from cow is called _____.
(pork, mutton, beef)
19. Growing of crops and keeping animals is called _____.
(farming, herding, fishing)
20. Farmers who move with their animals from one place to another are called _____.
(pastoralists, nomads, tourists)

21. People who live near lakes are likely to be _____
(fishermen, farmers, teachers)
22. Cats and dogs are called _____
(pets, cattle, herds)
23. Birds kept at home are called _____
(poultry, chicken, ducks)
24. Dairy cows give us _____
(meat, milk, skin)
25. The three language groups are Bantus, Cushites and _____
(Turkana, Nandi, Nilotes)
26. _____ is moving from one place to another.
(transport, migration, movement)
27. The three basic needs are food, shelter and _____.
(clothes, forest, radio)
28. My aunt's children are my _____
(sisters, cousins, friends)
29. The quickest means of transport is _____.
(railway, aeroplane, vehicles)
30. _____ activity is an activity that you do to earn a living.
(economic, resource, needs)

C.R.E

31. Angel _____ was sent to Mary by God.
(Michael, Gabriel, Elijah)
32. Jesus was crucified at a place called _____.
(Golgotha, Calvary, Nazareth)
33. God told _____ that is known as "I AM WHO I AM"
(Abraham, Jacob, Moses)
34. The work of a pastor is to _____
(preach, run, give people food)
35. Jesus fed _____ people with

5 loaves and 2 fish.

(50, 5000, 500)

36. _____ was a prophet taken to heaven in a chariot.
(Elisha, Elijah, Isaiah)
37. The first people to visit baby Jesus were _____.
(shepherds, wisemen, angels)
38. The _____ of God is the beginning of wisdom
(law, love, fear)
39. _____ was swallowed by a big fish.
(Jonah, Peter, James)
40. The greatest commandment is _____.
(peace, love, faith)
41. The Luo call their God _____.
(Were, Ngai, Enkai)
42. The disciples received the Holy spirit on the day of _____.
(Easter, Christmas, Pentecost)
43. King Ahab took _____ vineyard.
(Jairo's, Naboth's, Judas)
44. At the age of _____ years Jesus parents took him to Jerusalem for the Passover feast
(12, 8, 10)
45. God created man on the _____ day.
(6th, 1st, 5th)
46. Tolerance means _____ other people's wishes.
(respecting, humiliating, condemn)
47. The Bible is divided into _____ parts. (two, three, one)
48. The disciples waited for the Holy spirit at _____.
(Nazareth, Jerusalem, Bethlehem)
49. _____ asked God for wisdom.
(David, Solomon, Noah)
50. _____ denied Jesus three times.
(Judas, Peter, John)