



HIGH FLYER SERIES EVALUATION TEST STANDARD THREE – YEAR 2015 CHRISTIAN RELIGIOUS EDUCATION

DATE:

NAME: SCHOOL:

1. When we are given something, we should say _____.
(sorry, thank you, please)
2. For you to grow spiritually, you should read the _____ everyday.
(Koran, Kamusi, Bible)
3. _____ means taken out of water
(Pharaoh, Moses, Jacob)
4. James and John were sons of _____.
(Adam, Paul, Zebedee)
5. Jesus was crucified at a place called _____.
(Mt. Olive, Gethsemane, Calvary)
6. Orphans are children who have no _____.
(money, parents, property)
7. _____ killed his brother Abel.
(Adam, Jesse, Cain)
8. Who built an ark?
(Moses, Noah, Joshua)
9. Jesus healed ten lepers but only _____ came back to say thank you. (five, seven, one)
10. _____ was stoned to death.
(Jesus, Stephen, Daniel)
11. A person who always tells the truth is _____.
(kind, honest, cruel)
12. Who had 2 fish and 5 loaves of bread that Jesus used to feed a crowd?
(a man, a disciple, a boy)
13. Jesus is the _____ of the world.
(dark, light, sin)
14. When Jesus was baptized, the Holy Spirit came upon him in form of a _____.
(eagle, dove, fire)
15. People with AIDS should be _____.
(cursed, killed, loved)
16. Jesus changed water into _____.
(milk, juice, wine)
17. _____ was thrown in the den of lions. (Daniel, David, Stephen)
18. Good leaders should be _____.
(unfair, proud, caring)
19. When baby Jesus was born, He was laid in a _____.
(bed, manger, table)
20. How many disciples did Jesus have?
_____. (10, 12, 15)



HIGH FLYER SERIES EVALUATION TEST
STANDARD THREE – YEAR 2015
MATHEMATICS



DATE:

NAME: SCHOOL:

Fill in the missing numbers

1. 85, 90, 95, __, __, 110
2. 890, 880, __, __, 850
3. 400, 500, 600, __, __, 900
4. 130, 131, __, __, __, 135

Arrange the numbers from the largest to the smallest

5. 408, 289, 317, 198, 450

6. 17, 31, 8, 49, 78, 63, 10

Read and write the numbers in symbols

7. Forty seven _____
8. Ninety three _____
9. Seven hundred _____
10. $43 + 56 =$ _____
11. $69 + 75 =$ _____
12. $28 + 31 =$ _____
13. $12 + 34 + 16 =$ _____
14. $23 + 8 + 14 =$ _____

15. $64 + 6 + 11 =$ _____

16. One basket has 68 oranges. Another has 47 oranges. How many oranges are there altogether?

17.
$$\begin{array}{r} 603 \\ +247 \\ \hline \end{array}$$

18.
$$\begin{array}{r} 740 \\ + 249 \\ \hline \end{array}$$

19.
$$\begin{array}{r} 78 \\ - 9 \\ \hline \end{array}$$

20.
$$\begin{array}{r} 83 \\ - 46 \\ \hline \end{array}$$

21. $44 - 8 =$ _____

22. $51 - 7 =$ _____

23. $90 - 9 =$ _____

24. There are 53 pupils in a class. If 28 pupils are girls, how many boys are there?

25. Subtract 148 from 760 _____

26. $57 + \underline{\quad\quad} = 93$

What is the next number in the pattern?

27. 12, 15, 18, 21, $\underline{\quad\quad}$

28. 1, 4, 8, 13, $\underline{\quad\quad}$


29. 1, 7, 13, 19, $\underline{\quad\quad}$

30. 5, 10, 15, 20, $\underline{\quad\quad}$

31. Half of 12 is $\underline{\quad\quad}$

32. A quarter of 16 is $\underline{\quad\quad}$

33. What fraction is shaded?




34. $4 \times 3 = \underline{\quad\quad}$

35. $6 \times 6 = \underline{\quad\quad}$

36. $7 \times 4 = \underline{\quad\quad}$

37.



$\underline{\quad\quad} \times \underline{\quad\quad} = \underline{\quad\quad}$

38. Four boys have six marbles each. How many marbles do they have altogether?

39. A cake costs sh 5. How much do I pay for 4 cakes? $\underline{\quad\quad}$

Read and write the numbers in words

40. 83 $\underline{\quad\quad\quad\quad\quad}$

41. 66 $\underline{\quad\quad\quad\quad\quad}$

42. 79 $\underline{\quad\quad\quad\quad\quad}$

Match the position with the day of the week

43. First Tuesday

44. Third Friday

45. Sixth Sunday

46. $10 \div 2 = \underline{\quad\quad}$

47. $16 \div 4 = \underline{\quad\quad}$

48. $6 \div 6 = \underline{\quad\quad}$

49. $\underline{\quad\quad} \times 10 = 90$

50. $25 \div 5 = \underline{\quad\quad}$



HIGH FLYER SERIES EVALUATION TEST
STANDARD THREE – YEAR 2015
READING

DATE:

NAME: SCHOOL:

Read these words

- | | | |
|--------------|---------------|--------------|
| 1. Socket | 8. Length | 15. Ordinals |
| 2. Remember | 9. Ditch | 16. Cough |
| 3. Injection | 10. Hundredth | 17. Ashamed |
| 4. Fluid | 11. Syringe | 18. Needle |
| 5. Exercise | 12. Lights | 19. Parcel |
| 6. Defeat | 13. False | 20. Champion |
| 7. Direction | 14. Water | |

Read these sentences

21. They happily walked past the building.
22. She bought some bananas from the market.
23. I looked through the key hole.
24. We talked on the phone yesterday.
25. Show me the good tomatoes and fruits.



HIGH FLYER SERIES EVALUATION TEST DARASA LA TATU – MWAKA 2015

KISWAHILI: LUGHA

TAREHE:

JINA: SHULE:

Imla


1. _____
2. _____
3. _____
4. _____
5. _____

Chora picha hizi

6. Mpira




7. Meza



8. Kitabu



9. Ndizi



Jaza mapengo

10. Chak _____ la

11. Ku _____ li

12. Mfu _____

13. Zu _____ a

Andika kwa umoja

14. Fagio _____

15. Meza _____

16. Walinzi _____

17. Vyakula _____

Kanusha amri hizi

18. Lala _____

19. Funga _____

20. Njoo _____

Andika kinyume

21. Panda _____

22. Juu _____

23. Joto _____

24. Mvulana _____

Jibu maamkuzi

25. Shikamoo _____

26. Hujambo _____

27. Kwa heri _____

Tumia 'vi', 'm', 'u' au 'a' kujaza pengo

28. Nyinyi _____ mevaa vizuri.

29. Mti _____ likatwa.

30. Vijiko _____ menunuliwa.

31. Mbwa _____ nabweka.

Andika idadi kwa tarakimu

32. Mia moja na tatu _____

33. Mia tatu ishirini _____

34. Themanini na nane _____

Tumia 'juu ya', 'ndani ya' na 'kando ya'


35. Weka nguo _____ sanduku.

36. Abiria amesimama _____ barabara.

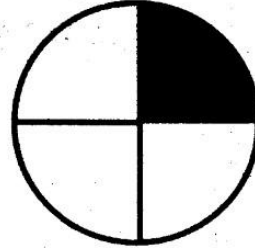
37. Utosi ni _____ kichwa.

Andika jina la sehemu iliyopakwa rangi

38.



39.



Tumia 'li', 'na' au 'ta' kujaza pengo

40. Redio i _____ tangaza mpira sasa.

41. Maji ya _____ tiririka jana.

42. Chakula ki _____ pikwa kesho.

43. Babu a _____ kuja leo.

Chagua jibu sahihi

44. Mfuko _____ umeraruka.
(hii, huu, hizi)

45. Kijiko _____ kimenunuliwa.
(hii, hiki, hivi)

46. Simu _____ inalia.
(hizi, hii, hiki)

47. Samaki _____ amevuliwa.
(hii, huyu, hawa)

Andika sentensi tatu kuhusu shule yako

48. _____

49. _____

50. _____



HIGH FLYER SERIES EVALUATION TEST
STANDARD THREE – YEAR 2015
ENGLISH: LANGUAGE

DATE:

NAME: SCHOOL:

Dictation

1. _____
2. _____
3. _____
4. _____
5. _____

Fill in the gaps

6. H ___ tel
7. Ch ___ ldr ___ n
8. Happ ___
9. V ___ hicl ___
10. H ___ spit ___ l

Use 'a' or 'an'

11. That is _____ lion.
12. He has _____ expensive pen.
13. She is wearing _____ skirt.
14. _____ ostrich is very big bird.
15. She is eating _____ pear and _____ orange.

Write the words well

16. ghlit _____
17. oolsch _____
18. ssdre _____
19. rtydi _____
20. nesto _____

Write the opposites

21. Daughter _____
22. Madam _____
23. New _____
24. Present _____
25. Close _____
(son, old, open, absent, sir)

Choose the correct endings

26. Book _____
27. Bath _____
28. Good _____
29. Play _____

30. House _____
(shelf, help, morning, ground,
room)

Write the plurals

31. Ox _____

32. Berry _____

33. Tomato _____

34. Family _____

35. Mango _____

Use 'to', 'too', 'two'

36. He bought _____ bananas.

37. We are _____, tired to stand.

38. He is going _____ ask for
money.

Use 'has' or 'have'

39. My mother _____ a good book.

40. We _____ many problems.

41. She _____ long hair.

42. I _____ a bad cold.

43. The bird _____ made a nest.

Use 'are' or 'is'

44. The houses _____ full.

45. The man _____ sick.

Complete the sentences

46. We see with our _____.
(ears, eyes, ice)

47. The woman caused an accident
_____.
(himself, myself, herself)

48. The _____ sets in the West.
(sun, son, sand)

49. A person who cuts people's hair
is a _____.
(barber, tailor, cobbler)

50. I ate a mango _____.
(himself, myself, herself)



HIGH FLYER SERIES EVALUATION TEST


STANDARD THREE – YEAR 2015

SOCIAL STUDIES

DATE:

NAME: SCHOOL:

1.



This helps us to cross a river. It is called a _____.
(road, bridge, railway)

2. The head of a location is a _____.
(elder, sub chief, chief)

3.

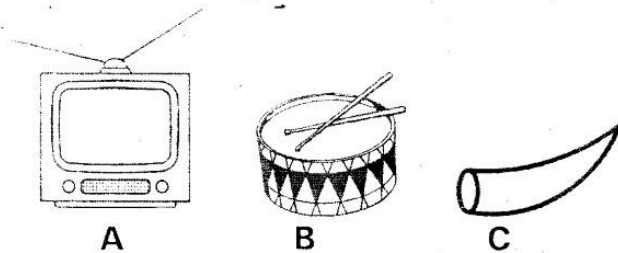


The walls of this hut are made of _____.
(grass, stones, mud)

4. One year has _____ months.
(five, twelve, seven)

5. We get stones from a _____.
(forest, quarry, river)

6. Which of these was not used to send messages in the olden days?



7. Farmer weed their farms during the _____ season.
(dry, wet, cold)

8. _____ is an example of a cash crop. (Maize, Beans, Tea)

9. Ducks, geese and turkeys are types of _____.
(insects, birds, animals)

Use the chart below to answer questions 10 – 13

Day	Morning	Afternoon
Friday		
Saturday		
Sunday		
Monday		

10. Which day was the best for washing clothes?
(Friday, Saturday, Sunday)

11. On which day did people carry umbrellas in the morning?
(Friday, Monday, Sunday)
12. What was the weather on Monday morning?
(cloudy, calm, sunny)
13. The table drawn above is known as _____
(weather chart, timetable, calendar)
14. The room where we prepare and cook food is called a _____
(bedroom, store, kitchen)
15. We should not kill a child because he or she has a right to _____
(report, cry, life)
6. We get _____ from cows.
(mutton, beef, pork)
17. A _____ is a doctor who treats sick animals.
(dentist, nurse, veterinary)
18. Animals that carry goods like camels and donkeys are called _____ animals.
(pets, wild, pack)
19. People who move from house to house selling goods are known as _____
(tourists, hawkers, sellers)
20. A _____ carries many people.
(car, bus, train)
21. The money we pay when travelling in a bus is called _____
(fees, fare, change)
22. A _____ is a pet.
(horse, cat, camel)
23. Teachers prepare their work and mark our books in the _____
(library, office, staffroom)
24. _____ takes care of our school when we are not there
(Watchman, Secretary, Head teacher)
25. A district is made up of two or more _____
(locations, divisions, counties)
26. Every school must have _____
(swimming pool, buses, toilets)
27. Pedestrians should walk on the _____ side of the road
(right, wrong, left)
28. _____ is a form of child abuse
(Treating, Teaching, Beating)
29. If my left hand points south, then my right hand will point _____
(West, East, North)
30. Uhuru Kenyatta is the head of a _____
(district, country, school)



HIGH FLYER SERIES EVALUATION TEST

STANDARD THREE – YEAR 2015

SCIENCE

DATE:

NAME: SCHOOL:

1. We clean our hands with water and _____. (salt, oil, soap)
2. _____ is not good for our health. (Rest, Exercise, Fighting)
3. A mango fruit has _____ seeds. (one, three, two)
4. _____ plant grows in dry places. (Maize, Cactus, Papyrus)

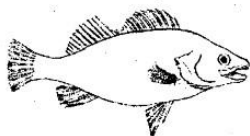
5.



This balloon has _____ inside. (water, air, blood)

6. A wheelbarrow is _____. (machine, tool)
7. Which one is not a tamed animal? (cow, buffalo, goat)
8. We _____ a whistle to produce sound. (beat, pluck, blow)
9. _____ is not a vegetable. (Orange, Spinach, Kales)

10.



This animal lives in _____. (soil, water, air)

11. _____ change colour to escape danger. (Frog, Chameleon, Lizard)
12. A train moves on _____. (water, land, air)
13. We burn _____ to produce heat for cooking. (soil, charcoal, water)
14. _____ can be eaten when raw. (Carrot, Yams, Maize)
15. Sunflower gives us _____. (fibre, medicine, cooking oil)
16. Farmers plant seeds when the weather is _____. (rainy, dry, cloudy)
17. Which insect makes honey? (wasp, bee, housefly)

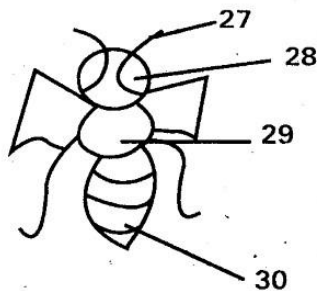
Match these animals with their houses

<u>Animal</u>	<u>house</u>
18. Rabbit	shell
19. Spider	nest
20. Snail	hutch
21. Bird	web

22. _____ are harmful plants. (Herbs, Weeds, Trees)

23. The first meal of the day is called _____. (lunch, breakfast, supper)
24. A _____ lays eggs. (cow, chicken, cat)
25. The best soil for modeling is _____. (loam sand, clay)
26. The _____ gives us light during the day. (stars, moon, sun)

Name the parts of the insect marked



(Thorax, eye, abdomen, feelers)

31. A _____ person uses gestures for communication. (blind, deaf)
32. We use _____ to kill germs in a pit latrine. (hot ash, water, soap)
33. Our sense organ for touch is _____. (tongue, skin, nose)
34. Leaves are _____ in colour. (red, green, blue)


Match these animals with how they protect themselves

<u>Animal</u>	<u>protection</u>
35. Cockroach	biting
36. Wasp	coiling
37. Millipede	running a way
38. Snake	stinging


39. _____ gives us fibre for making clothes. (Cotton, Sunflower, Coconut)
40. A _____ floats on water. (stone, feather, nail)
41. Which animal does not eat meat? (leopard, buffalo, hyena)
42. A _____ reflects a lot of light. (stone, plate, mirror)
43. We use _____ soil to make building bricks. (sand, loam, clay)
44. Which colour is not on a rainbow? (red, blue, black)

Name these weather conditions

45.



46.



47.



48. We wear _____ clothes on a sunny day. (heavy, light)
49. The sun rises in the _____. (East, West, South)
50. We see the _____ in the sky during the day. (stars, moon, sun)



HIGH FLYER SERIES EVALUATION TEST
DARASA LA TATU – MWAKA 2015
KUSOMA

TAREHE:

JINA: SHULE:

Soma maneno haya:-

- | | | |
|-------------|-------------|--------------|
| 1. Utepe | 8. Nidhamu | 15. Msumari |
| 2. Majengo | 9. Jogoo | 16. Humusi |
| 3. Gurudumu | 10. Kamusi | 17. Bundi |
| 4. Kinara | 11. Mishale | 18. Fahamu |
| 5. Daftari | 12. Bagua | 19. Kinyonga |
| 6. Utengano | 13. Chanuo | 20. Mwendo |
| 7. Kiganja | 14. Kinara | |

Soma sentensi zifuatazo:-

21. Marashi yananukia vizuri.
22. Mpanda ngazi hushuka.
23. Mti wa mkuyu ulikatwa.
24. Watoto wote wapewe haki sawa.
25. Nguo ya mtoto imeraruka.