

TARGETER WINGS EVALUATION TEST

STANDARD THREE - YEAR 2015

MATHEMATICS



005

NAME SCHOOL Date:

1. Add 609 to 150 = _____

2.
$$\begin{array}{r} 845 \\ + 199 \\ \hline \end{array}$$

What is the place value of digit 2 in the following?

3. 296 _____

4. 2480 _____

5. A book costs 84 shillings while a geometrical set cost 99 shillings. How much do the items cost?

6.
$$\begin{array}{r} 499 \\ - 160 \\ \hline \end{array}$$

7.
$$\begin{array}{r} 5000 \\ - 1563 \\ \hline \end{array}$$

8. Alice has 845 cows and goats. If the goats are 232, find the number of cows.

9. The seventh day of the week is _____

10. A quarter of 20 is _____

11. $\frac{1}{8}$ of 64 = _____

12. $\frac{3}{8} + \frac{2}{8} =$ _____

13. $\frac{1}{6} + \frac{2}{6} + \frac{3}{6} =$ _____

14. Which one of the following is the same as 1?

$\frac{1}{3}, \frac{4}{4}, \frac{2}{8} =$

15. $49 + \square = 134$

16. $5 \times \square = 35$

17. $9 \times 2 \times 0 =$ _____

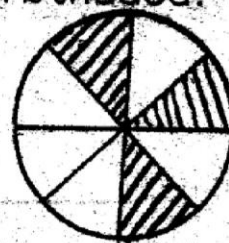
18. One rabbit weighs 3kg. How heavy are 5 rabbits? _____

19. David shared his 20 goats among his 4 children. How many goats did each child get? _____

20. $17 \div 3 =$ _____

21. $25 \div 5 =$ _____

22. What fraction is shaded?



23. 2 weeks = _____ days.

24. 28 days = _____ weeks.

25. 2 years = _____ months.

26. 4569 = _____ thousands _____ hundreds _____ tens _____ ones.

27. 9 hundreds 4 tens 5 ones = _____

28.

weeks	days
3	4
+ 1	2
_____	_____

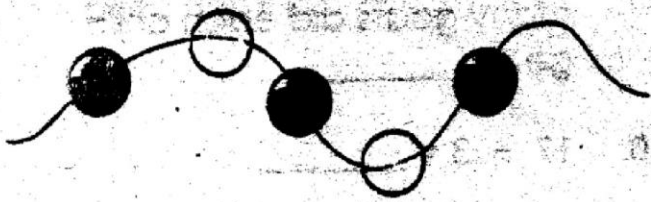
29.

weeks	days
6	7
- 3	4
_____	_____

30. Arrange from the smallest to the largest.
731, 79, 239, 106, 48, _____

31. The month of July has _____ days.


32. What fraction is unshaded?



33. Take away 27 from 50




34. This is a _____



35. How many legs do 6 dogs have? _____

36. What is the time?



37. $24 \div \square = 6$

38. $\square + 7 = 7$

39. $81 - \square = 35$

40. Write 407 in words

41. Write in figures
Three thousand one hundred and thirty seven _____

42. Draw a circle and shape $\frac{1}{2}$

43. One shilling has got _____ cents.

44. One hour = _____ minutes.

45. What is 93 take away 39?

46. What is the next number in the pattern?
12, 20, 28, 36, _____

47. $65 - 9 =$ _____

48. $441 + 322 + 89 =$ _____

49. Add: 1110 to 789 = _____

50. $456m - 231m =$ _____

TARGETER WINGS EVALUATION TEST

STANDARD THREE - YEAR 2015

ENGLISH



005

NAME: _____

SCHOOL: _____

Date: _____

Fill in the missing letters

1. P ___ ck ___ t
2. D ___ ct ___ if
3. P ___ n ___ il
4. B ___ tch ___ r
5. Cy ___ l ___ st

Use 'some' or 'any' in the following sentences.

6. Would you like _____ food?
7. The baby is drinking _____ milk.
8. Do you have _____ homework today?
9. No, I do not want _____ food.
10. He doesn't want _____ fruit.

Write the opposite

11. Narrow _____
12. Difficult _____
13. Smooth _____

14. Quiet _____
15. Female _____

Write in past tense

16. Eat _____
17. Move _____
18. Stand _____
19. Sing _____
20. Stop _____

Use the correct reflexive pronoun

21. She bought the pen _____
(herself, himself)
22. John rode the bicycle ____
(himself, themselves)
23. They built the house _____
(themselves, ourselves)
24. I carried the bag _____
(myself, herself)
25. He painted the wall _____
(himself, itself)

Name the pictures

26.



27.



33. Dave got the _____ marks in maths. **(low)**

34. Mary is the _____ in their family. **(small)**

35. Peter is _____ than this brother. **(bright)**

Complete the following similes.

36. As happy as _____

37. As proud as a _____

38. As beautiful as a _____

39. As poor as _____

40. As cunning as a _____

Use 'what', 'which', 'when', 'where' or 'how'.

41. _____ are your book ?

42. _____ old are you ?

43. _____ is Peter carrying ?

44. _____ does Mark live ?

45. _____ did not last see her ?

Write the doing words.

46. Cry _____

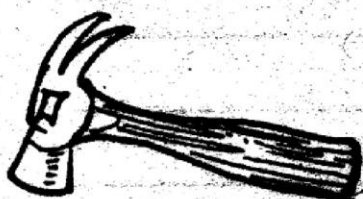
47. Sit _____

48. Look _____

49. Drive _____

50. Shut _____

28.



29.



30.



Add 'er' or 'est' to the word in bracket

31. Kamau is the _____ boy in their class. **(big)**

32. Their car is _____ than this car. **(cheap)**

TARGETER WINGS JARIBIO LA MTHANI



DARASA LA TATU - MWAKA 2015

005

KISWAHILI

Tarehe:

JINA SHULE

Jaza pengo na 'ya' au 'wa'

1. Mtoto _____ mbuzi.
2. Nyama _____ kuku.
3. Mfuko _____ mwanafunzi.
4. Shule _____ wasichana.
5. Pakifi _____ maziwa.

Andika kinyume cha neno lililopigwa mstari.

6. Mtoto analia _____
7. Uza maembe _____
8. Mwalimu anasoma _____
9. Shangazi alienda sokoni _____
10. Peleka kalamu ya mwalimu _____

Andika wingi wa sentensi hizi

11. Mama anaenda sokoni _____
12. Kalamu imepotea _____

13. Baba anasoma gazeti

14. Karatasi imeraruka

15. Mtoto anakunywa uji

Jaza pengo

16. Mw _____ r _____ v _____
17. Alf _____ j _____ r _____
18. W _____ be
19. S _____ ks _____
20. K _____ pt _____ r _____

Kanusha sentensi zifuatazo.

21. Mtoto anakula

22. Sisi tunacheza

23. Miti ilipanewa _____

24. Ng'ambe alizaa _____

25. Kaka amefagia _____

Andika kwa nambari

26. Mia tisa fisini na tisa _____

27. Mia tano themanini na tisa _____

28. Mia saba na nne _____

29. Mia sita thelathini _____

30. Mia nane hamsini na sita _____

Tumia -enu

31. Kiti _____

32. Kalamu _____

33. Tunda _____

34. Vitabu _____

35. Chumba _____

Karollisha sentensi hizi

36. Makaa ina rangi _____

37. Rangi ya jani ni _____

38. Damu ina rangi _____

39. Meno ni ya rangi _____

40. Maji ni ya rangi _____

Chagua kiashiria sahihi

41. Matunda _____ ni matamu.
(hii, haya)

42. Kuku _____ ni wetu.
(hizo, hao)

43. Vikombe _____
vinapendenda. (hizi, hivi)

44. Nywele _____ ni ndefu.
(ile, zile)

45. Mikate _____ tunapenda.
(hizi, hii)

Kamilisha methali na vitendawili

46. Fahari wawili hawaishi _____
moja.

47. Nishike kiuno la chawa _____
ngoma _____

48. Subira huvota _____

49. Hasira _____

50. Kiti cha dhahabu hakikaliwi _____
na watu _____

TARGETER WINGS EVALUATION TEST

STANDARD THREE - YEAR 2015

SCIENCE



005


NAME _____

Date: _____

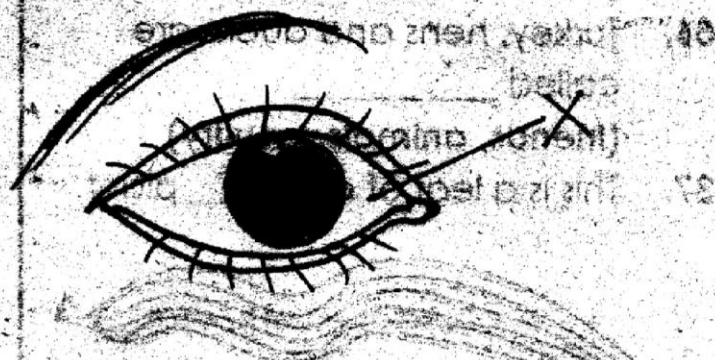
SCHOOL _____

1. Soil are of _____ colours.
(smell, same, different)
2. The removal of unwanted plants is known as _____
(weeding, irrigation, plowing)
3. A bird uses _____ to feed.
(mouth, beak, teeth)
4. _____ soil has the smallest particles.
(Clay, Sand, loam)
5. We filter water to remove _____
(dirt, germs, food)
6. The place where we get water is called _____
(the source, transport, a tap)
7. _____ is the main source of water.
(Tap, River, Rain)
8. Big vehicles that carry water are called _____
(lorry, tanks, water tankers)
9. Flour is gotten from _____ seed.
(beans, onion, maize)
10. The shadow is shortest at _____
(morning, noon, evening)
11. A rainbow has _____ colours.
(6, 7, 8)
12. For a seed to germinate it needs air, water and _____
(light, warmth, air)
13. A snake moves by _____
(slithering, walking, flying)

14. The dirt from our ears is called _____
(plus, wax, mucus)
15. Animals that stay together are called _____ animals.
(happy, social, group)
16. The plant shown below is called _____



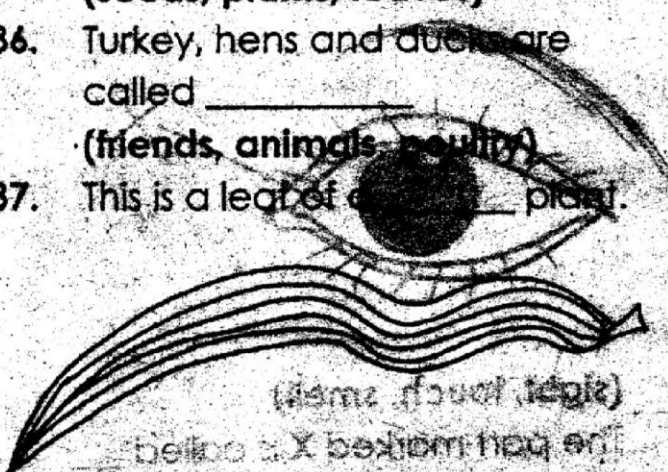
- (sisal, cactus, flower)
17. This plant is found in _____ places.
(wet, cold, dry)
18. We eat the _____ of spinach.
(root, leaves, stem)
19. The diagram shown gives us the sense of _____



- (sight, touch, smell)
20. The part marked X is called _____
(eyelid, eyelashes, eyeball)

Write the part that is eaten

- 21. Sukumawiki _____
- 22. Sugarcane _____
- 23. Carrot _____
- 24. Apple _____
- 25. I touch with my _____
(legs, hands, hair)
- 26. A donkey helps us to _____
goods. (people, milk, transport)
- 27. A lemon tastes _____
(bad, bitter, sweet)
- 28. _____ has many seeds.
(Pawpaw, Mango, Carrot)
- 29. We should wash our hands
before _____
(eating, sleeping, cooking)
- 30. Lions eat _____
(flowers, meat, grass)
- 31. A man has _____ senses.
(5, 6, 2)
- 32. Water has no _____
(food, colour, source)
- 33. Mammals feed their young
ones with _____
(food, milk, playing)
- 34. The _____ has two wheels.
(bus, handcart, wheelbarrow)
- 35. Flowers produce _____
(seeds, plants, leaves)
- 36. Turkey, hens and ducks are
called _____
(friends, animals, poultry)
- 37. This is a leaf of a _____ plant.
(maize, beans, yams)



38. For good _____ our bodies
need exercise.

- (food, health, play)
- 39. When a car is very far away
always looks _____
(big, small, large)
- 40. Strong _____ blows away the
roofs of houses.
(sun, rain, wind)
- 41. We get coffee drink from the

(leaves, berries, roots)
- 42. We wear gumboots when it is

(rainy, windy, sunny)
- 43. Which is the biggest bird?
(Ostrich, Hen, goose)
- 44. Moving air is called _____
(wind, cloud, mist)
- 45. A _____ has strong hind legs
for hopping.
(locust, bee, mosquito)
- 46. Germs make us _____
(ill, good, happy)
- 47. The diagram below shows _____
(filtering, boiling, drinking)
- 48. _____ plant give us medicine.
(Neem, Coffee, Maize)
- 49. Both snails and tortoises have
_____ for protection.
(thorns, shells, spines)
- 50. We make cloth from _____
(rubber, cotton, flower)



TARGETER WINGS EVALUATION TEST

STANDARD THREE - YEAR 2015


SOCIAL STUDIES / C.R.E

005

NAME _____

SCHOOL _____

Date: _____

1. People who kill wild animals are called _____
(**gradeners, poachers, watchmen**)
2. Animals kept at home are called _____ animals.
(**wild, forest, domestic**)
3. Buying and selling of goods is called _____.
(**trade, farming, working**)
4. The quickest means of transport is _____.
(**aeroplane, lorry, train**)
5. The money we pay to the government is called _____.
(**rent, tax, money**)
6. This is a _____ house.

(**modern, traditional**)
7. Janheri day is celebrated on _____ days.
(**10th October, 2th December, 20th October**)
8. A pedestrian should cross the road at the _____ crossing.
(**red, zebra, yellow**)
9. Green colour in the flag stands for _____.
(**people, vegetation, peace**)
10. We should keep our houses _____.
(**tidy, untidy, muddy**)

11. _____ is carrying away of soil.
(**Irrigation, Weeding, Soil erosion**)
12. _____ are animals that help to plough gardens.
(**Oxen, Horse, Dogs**)
13. The sun rises in the _____.
(**West, East, South**)
14. Fruits and vegetables are brought from the _____.
(**shop, farmer, market**)
15. A bicycle has _____ wheels.
(**3, 2, 1**)
16. The head of the school is _____.
(**headteacher, mother, prefect**)
17. The meat we get from sheep is called _____.
(**pork, mutton, beef**)
18. _____ arrest criminals.
(**Police men, Pastor, D.O**)
19. When singing the national anthem we should _____ in attention.
(**sit, stand, walk**)
20. We should not share _____.
(**soda, book, niddle**)
21. Plants grown for sale are called _____.
(**cash, food, crops**)
22. We use a _____ to show direction.
(**compass, stick, ruler**)

23. This sign says



(cattle crossing, valley, children crossing)

24. _____ soil is good for building.
(Sand, Clay, Loam)

25. Trains move on _____ line.
(road, air, railway line)

26. Long ago people in our location transported goods by _____
(ony, cattle, donkey)

27. _____ come to see wild animals
(Visitors, Tourists, Patients)

28. Circumcising _____ is illegal.
(boys, men, girls)

29. Things that make up weather are called _____ of weather.
(physical, factors, elements)

30. The wall of this house is made of _____



(wood, bricks, mud)

C.R.E

31. Good people shall go to _____
(heaven, hell, earth)

32. Jesus _____ children.
(loves, hates, beats)

33. Jacob had _____ sons.
(12, 11, 10)

34. We should _____ those who wrong us.
(beat, abuse, forgive)

35. Jesus _____ for our sins.
(died, raised, prayed)

36. _____ climbed a tree to see Jesus. (Moses, Zachaeus, John)

37. Jesus performed his first miracle in _____ (Nazareth, Jerusalem, Cana of Galilee)

38. Adam and Eve lived in the garden of _____ (Jordan, Eden, Gethsemane)

39. The Luhya call their God _____ (Nyanya, Takal, Mwalu)

40. Messiah is another name for _____ (God, Saviour, Prophet)

41. The disciples received the Holy Spirit on the day of _____ (Sabbath, Pentecost, Christmas)

42. _____ is the last book in the Bible. (Genesis, Malachi, Revelation)

43. Jacob's name was changed to _____ (Sack, Saul, Israel)

44. Prophet _____ was fed and shared with the widow of _____ (Zachaeus, Jesus, Jesus)

45. Love your neighbour as you love _____ (yourself, himself, itself)

46. Jesus said "I will make you _____ (hunters, killers, fishermen)

47. When we receive gifts we should _____ (say thank you, please)

48. Sabbath day is also called the _____ (Lord's day, good day)

49. Jesus was tested by _____ (Satan, Satan, Satan)

50. _____ took the children of _____ (Israel from Egypt)

TARGETER WINGS EVALUATION TEST

STANDARD THREE - YEAR 2015

READING / KUSOMA



005

NAME SCHOOL

Date:

READING

1. Read these words

- | | | | |
|---------------|--------------|---------------|---------------|
| 1. Record | 6. Beehive | 11. Fibre | 16. Physical |
| 2. Filtering | 7. Transport | 12. Symbols | 17. Mountain |
| 3. Irrigation | 8. Machine | 13. Hammer | 18. Mirror |
| 4. Tortoise | 9. Basket | 14. Reptile | 19. Millipede |
| 5. Measure | 10. Urinal | 15. Permanent | 20. Locust |

2. Read these sentences.

21. A bee is a useful animal to people.
22. A train moves on the railway line.
23. Brakes are used to stop a bicycle.
24. God created the whole world in six days.
25. Christmas is a happy occasion.

KUSOMA

1. Soma maneno haya.

- | | | | |
|-------------|---------------|----------------|--------------|
| 1. Mgonjwa | 6. Kibanda | 11. Kuakifisha | 16. Blauri |
| 2. Kichocho | 7. Shukrani | 12. Muhogo | 17. Mtungo |
| 3. Magazeti | 8. Buriani | 13. Hadithi | 18. Umma |
| 4. Msamiati | 9. Wasia | 14. Kufyeka | 19. Viteguzi |
| 5. Mwalimu | 10. Mcheduara | 15. Seredani | 20. Baiskeli |

2. Soma sentensi hizi.

21. Vyakula vingapi vimepikwa ?
22. Mtoto amekula chakula chote.
23. Kwa nini wewe huna kitabu kama hiki ?
24. Maji yalimwagika yote.
25. Nywele zimenyolewa vizuri.