

**PRIME
MIRROR
008**

STANDARD THREE 2015

ENGLISH

Dictation

1. _____
2. _____
3. _____
4. _____
5. _____

Fill in the missing letters.

6. bl ___ ckb ___ rd
7. h ___ dt ___ ch ___ r
8. P ___ p ___ r
9. M ___ n ___ y
10. Wh ___ sp ___ r

Add - Ing (doing words)

11. try _____
12. sleep _____

13. make _____
14. add _____
15. jump _____

Write these words in plurals.

16. box _____
17. man _____
18. city _____
19. church _____
20. baby _____

Write the past tense of these words.

21. play _____
22. ride _____
23. clap _____
24. carry _____
25. eat _____

Use 'two', 'too' or 'to' to complete the sentences

- 26. I have _____ eyes.
- 27. I want _____ go home.
- 28. I am _____ tired today.
- 29. I saw _____ policemen.
- 30. This box is _____ heavy for me to carry.

Use 'am', 'is' or 'are' to complete the sentences

- 31. These _____ good bananas.
- 32. The pens _____ on the table.
- 33. Where _____ my book?
- 34. I _____ going home.
- 35. The teacher _____ sick.

Complete these sentences using the words below.

(myself, ourselves, himself, herself, themselves)

- 36. I washed the car _____
- 37. We cooked the food _____

- 38. Her father cleaned the compound _____
- 39. Denis went to school _____
- 40. The girls collected rubbish _____

Write the opposites of these words.

- 41. dirty _____
- 42. sharp _____
- 43. top _____
- 44. beautiful _____
- 45. give _____
(ugly, take, bottom, clean, blunt)

Complete the sentences

- 46. A person who treats our eyes is called _____
- 47. A person who flies an aeroplane is called a _____
- 48. A person who cuts your hair is called a _____
- 49. Your full name.

- 50. The name of your school.

**PRIME
MIRROR
008**

STANDARD THREE 2015

MATHEMATICS

Write in words

1. 502 _____

2. 697 _____

3. Two hundred and nineteen

4. The third day of the week is

5. $123 + 82 =$

6. $76 + 25 =$

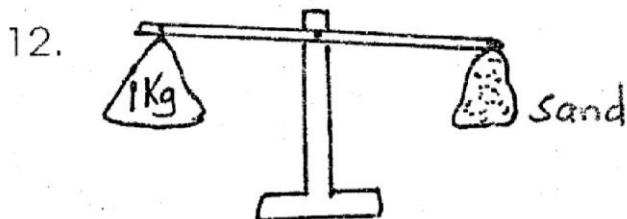
7.
$$\begin{array}{r} 49 \\ + 49 \\ \hline \hline \end{array}$$

8.
$$\begin{array}{r} 206 \\ + 37 \\ \hline \hline \end{array}$$

9.
$$\begin{array}{r} 14 \\ 27 \\ + 33 \\ \hline \hline \end{array}$$

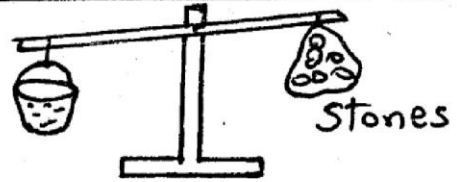
10. $55 + 66 + 16 =$

11. $97 + 7 =$



1 kg is _____ than sand
(**lighter, heavier**)

13.



The water is _____ than sand
(**lighter, heavier**)

14. How many legs have 3 butterflies? _____

15. One bag has 34 sweets. Another bag has 76 sweets. How many sweets are there altogether? _____

16.
$$\begin{array}{r} 167 \\ - 43 \\ \hline \hline \end{array}$$

17.
$$\begin{array}{r} 59 \\ - 45 \\ \hline \hline \end{array}$$

18.
$$\begin{array}{r} 674 \\ + 135 \\ \hline \hline \end{array}$$

19. $444 + 336 =$

20.
$$\begin{array}{r} 206 \\ - 127 \\ \hline \hline \end{array}$$

21. **Subtract** 16 from 24 =

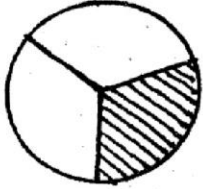
22. **Subtract** 143 from 527 =

23. $70 - 51 =$

24. $10 + \square = 23$

25. $\square + 8 = 20$

26. The shaded fraction is _____




27. 2 quarters + \square quarters = 3 quarter

28. $\frac{2}{8} + \frac{3}{8} =$

29. $\frac{2}{8} + \frac{1}{8} + \frac{2}{8} =$

30. Nafula had an Orange. She gave $\frac{1}{4}$ of it to her brother and another $\frac{1}{4}$ to her sister. What fraction of the orange did she give out altogether?

31. Onyango has $\frac{5}{8}$ of a loaf. He gave $\frac{1}{8}$ to his sister. What fraction of a loaf is he left with?



33. $\frac{1}{8}$ of 32 = _____

34. _____ x 7 = 42

35.
$$\begin{array}{r} 9 \\ \times 4 \\ \hline \\ \hline \end{array}$$

36. $66 \div 3 =$

37. Jane shared 49 beads among her 7 friends. How many beads did each friend get?

38. $4 \overline{)40}$ 39. $6 \overline{)48}$

40. $403m + 88m =$

41.
$$\begin{array}{r} 527m \\ - 41m \\ \hline \end{array}$$

42. What is 269m subtracted from 425m? _____

43. $4m \times 3 = \square m$

44. $10m \times 8 = \square m$

45. $45m \div 5 = \square m$

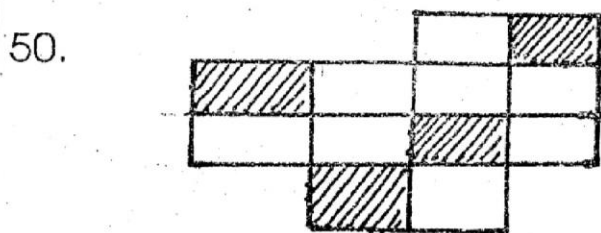
What is the next numbers

46. 5, 9, 13, 17, _____, _____?

47. 19, 17, 15, _____?

48. Which is bigger $\frac{1}{2}$ or $\frac{1}{4} =$ _____

49. Arrange the fractions from the smallest to the largest ($\frac{1}{4}, \frac{1}{2}, \frac{1}{8}$) _____



How many squares are unshaded?

SOCIAL STUDIES / RELIGIOUS EDUCATION

- | | |
|---|--|
| <p>1. Lakes are sources of _____
(stones, animals, water)</p> <p>2. Grandfather and grand-mother call you _____
(nephew, niece, grandchild)</p> <p>3. Games are good because they keep us _____
(hungry, busy, idle)
<u>Name 5 things you do to take care of school property?</u></p> <p>4. _____</p> <p>5. _____</p> <p>6. _____</p> <p>7. _____</p> <p>8. _____</p> <p>9. Which word tells how the land of your school is _____
(steep, sloppy, flat)
<u>Name five materials used in building our houses?</u></p> <p>10. _____</p> <p>11. _____</p> <p>12. _____</p> <p>13. _____</p> <p>14. _____</p> <p>15. <u>Name 2 main resources in your location</u></p> <p>15. _____ and _____</p> | <p>16. _____</p> <p>17. One of the following is a physical feature, which one?
(lake, river, dam)</p> <p>18. We use wood to make _____ for burning (water, fire, soil)</p> <p>19. _____ helps in drying clothes and pushing sailing boats (sun, wind, rain)</p> <p>20. Clouds may lead to _____
(rainfall, wind, dust)</p> <p>21. People who tell us about weather changes are called _____
(pilots, meteorologists, drivers)</p> <p>22. Little rain causes _____ and _____ floods.</p> <p>23. What is weather? _____

(is how hot, wet, cold or warm a place is in a day, beating, fishing)</p> <p>24. The main points of the compass are also called _____ points
(cardinal, show)</p> <p>25. The direction where the sun rises from is called _____
(south, west, east)</p> |
|---|--|

26. Our division is called _____
(Ngong, Nairobi)
27. The followers of Jesus were called _____
(Prophets, Disciples)
28. God created man on the _____ day (7, 5, 6)
29. Naomi had two daughters in-law called _____ and _____
(Rael, Orpha, Ruth)
30. Jesus washed his disciples _____
(face, body, feet)
31. Name two people you obey at home _____ and _____
32. _____
33. Cain killed his brother _____
(Judas, Abel, Isaac)
34. Before he was crucified, Jesus prayed for _____
(Love, Strength, Food)
35. The first king of Israel was called _____
(David, Saul, Ahab)
36. Jesus did his first miracle at _____ of Galilee
(Cain, Canaan, Jericho)
37. _____ wanted to kill baby Jesus
(Joshua, Pilate, Herod)
We care for animals by being kind to them
38. _____
39. _____ and _____
40. _____
41. Elkanah and his family worshipped God in the _____
(Church, Temple, Mosque)
42. Whom did Hannah promise to take to the temple?

(Isaac, Samuel, Jesus)
43. Why was Jesus Christ taken to the temple?

a. to question people
b. to worship God
c. to be crucified
44. Worshipping God is honouring and _____ God
(Loving, obeying, refusing)
45. We should not worry about _____ and _____ because God provides them to us
(Dring, love, food, friends, clothes)
46. We should observe the sabbath and keep it _____
(Waiting, holy, clean)
47. Immanuel means _____
a. Jesus our friend
b. God with us
c. Our father
48. Mulungu is the name given to God by _____ people
(Kamba, Luo, Kikuyu)
49. The Luo call God _____
(Asis, Nyasaye, Ngai)
50. Sarah was the wife of:

**PRIME
MIRROR
008**

STANDARD THREE 2015

SCIENCE

1. The body of a spider is divided into _____ parts. (6, 3, 2)
2. All living things cannot live without _____
(books, grass, air)
3. The best soil for growing plants is _____ soil. (clay, loam, sand)
4. A _____ changes its colour.
(goats, cow, chameleon)
5. We should _____ water before drinking. (boil, fetch, draw)
6. A pot is made of _____ soil.
(sand, loam, clay)
7. A cactus grow in _____ area.
(dry, wet, cool)

Name the parts of an insect




(wing, head, abdomen, leg, feeler, thorax)

8. _____ 9. _____
10. _____ 11. _____
12. _____ 13. _____
14. A fish breathes through the _____

15. Boiling water helps to _____
(remove colours, remove dirt, kill germs)
16. _____ soil contains sand, clay dead animals and dead plant particles.
(sand, clay, loam)
17. We eat the stem of a _____
(kales, sugarcane, maize)
18. A lot of rain causes _____
(rain, flood, drought)
19. A ripe banana tastes _____
(sour, bad, sweet)
20. Seedlings are young _____
(goats, plants, baby)
21. Separating mud and leaves from water is called _____
(boiling, filtering, sieve)
22. Bees and wasps protects themselves by _____
(stinging, hopping, flying)
23. _____ soil does not allow water to pass easily.
(loam, sand, clay)
24. The best soil for modeling is _____
(clay, loam, sand)
25. Potatoes are eaten when they are _____
(raw, cooked)
26. _____ brings malaria.
(locust, water, mosquito)

27. Which animal stays in this?



(bee, cockroach, spider)

28. We have _____ senses. (10, 3, 5)

29. An insects have _____ legs.
(4, 8, 6)

30. Shadows are shortest at _____
(night, morning, noon)

31. We make long ribbons using _____ soil. (sand, loam, clay)

32. Which one of the following can float on water?
(dry leaves, spoon, stones)

33. Around a dirty latrines we find _____
(lice, flies)

34. Dirty food can make us _____
(healthy, sick)

35. The unwanted plants growing in the garden are called _____
(seeds, weeds)

36. Doctor's who treat sick animals are called _____ doctors.
(veterinary, witch)


37. Tall grass hides dangerous animals like _____.
(cats, snakes, birds)


Use the pictures to answer question 38




38. Which is the main source of light?
(A, B, C)

39. At night we get light from _____ and _____.
(sun and star, moon and sun, star and moon)

40.  This is a leaf of a _____
(maize, bean, plant)


41.  The weather is _____
(rainy, windy, sunny)

42.  This bird feeds on _____
(meat, nector, seed)






43. The place where a plant grows is its _____.
(surrounding, habitat, field)

44. Cooking food makes it _____.
(hard, soft, bitter)

45. A deaf person lacks the sense of _____.
(seeing, hearing, touching)

46.  This balloon is full of _____.
(soil, air, light)

Use the weather chart to answer questions

Monday	
Tuesday	
Wednesday	
Thursday	
Friday	

47. The diagram shows a _____.
(timetable, weather chart)

48. On which day did people carry umbrellas? (Tuesday, Thursday)

49. It was _____ on Tuesday.
(windy, cloudy)

50. On Friday the weather was _____.
(cloudy, windy)

**PRIME
MIRROR
008**

DARASA LA TATU 2015

KISWAHILI

Imla

1. _____
2. _____
3. _____
4. _____
5. _____

Andika kwa wingi au umoja

6. Mdomo - _____
7. Maji - _____
8. Jicho - _____
9. _____ - vyakula
10. _____ - mawe

Kamilisha maamkizi haya

11. Hujambo - _____
12. Shikamoo - _____
13. Hamjambo- _____
14. Hodi - _____
15. Habari yako- _____

Andika tarakimu hizi kwa maneno au nambari

16. 0 _____
17. 15 _____
18. 70 _____
19. Mia saba hamsini na sita _____
20. Mla tatu na nne _____

Andika kinyume cha neno iliyopigwa mstari

21. Sarah anaanika nguo

22. Mtoto anatema chakula

23. Baba ali lala mapema

24. Kanga ana madoadoa mwilini

25. Funga mlango

Andika kwa wakati uliopita

26. Baba ataandika barua

27. Mgeni amefika

28. Dada yangu amepita mtihani

Andika majina haya vizuri

mfano : ongu - nguo

29. ali - _____
30. deegar - _____
31. alla - _____
32. pukika - _____
33. ndukusa - _____

Chagua jibu sahihi

34. Si vizuri kuwa _____ watoto
(ajiri, ajili)
35. Mimi hula _____ nikiwa na njaa.
(chakura, chakula)
36. Nyumba yao ilko _____ yetu.
(mbari, mbali)

Kamilisha sentensi hizi

37. Jogoo wa shamba _____ mjini
38. Mtaka yote hukosa _____
39. Bubu anayesema ni _____
40. Damu ni rangi _____
41. Mama ya mama yangu huitwa

42. Leo ni Jumatano kesho ni

Kanusha sentensi hizi

**mfano : Ameshika mkia -
Hajashika mkia**

43. Mfuko huu ni wangu

44. Mimi nililima

45. Kunywa uji

46. Nitaenda shule kesho

47. Nyasi imemea

**Andika sentesi tatu kuhusu
ng'ombe**

48. _____
49. _____
50. _____

**PRIME
MIRROR
008**

STANDARD THREE 2015

READING / KUSOMA

Read these words.

- | | | | |
|--------------|----------------|--------------|---------------|
| 1. Pineapple | 6. arrive | 11. building | 16. Bandage |
| 2. avoid | 7. holiday | 12. Mason | 17. Catch |
| 3. Wall | 8. shopkeeper | 13. Pass | 18. Animal |
| 4. Mistress | 9. Oxen | 14. Donkey | 19. Game park |
| 5. dance | 10. story book | 15. Naming | 20. Cupboard |

Read these sentences.

21. I have headache.
 22. We shall go to school tomorrow.
 23. Who did this job?
 24. My best food is chicken.
 25. Our teacher loves all of us.
-

KUSOMA

Soma maneno haya.

- | | | | |
|------------|-----------------|------------|-----------------|
| 1. Ndizi | 6. Kata | 11. Viazi | 16. Bei |
| 2. Kiranja | 7. mwendawazimu | 12. Mchoyo | 17. randa randa |
| 3. Kiwete | 8. Kabati | 13. Chura | 18. Kipepeo |
| 4. Mwembe | 9. Gereza | 14. Sahani | 19. Rununu |
| 5. Sahani | 10. Meza | 15. Zizini | 20. Kinara |

Soma sentensi hizi.

21. Nitakuona kesho asubuhi.
 22. Wanafunzi wote wamefika.
 23. Shule yetu imefanya vyema.
 24. Daladala ni gari.
 25. Asiyesikia la mkuu huvunjika guu.
-