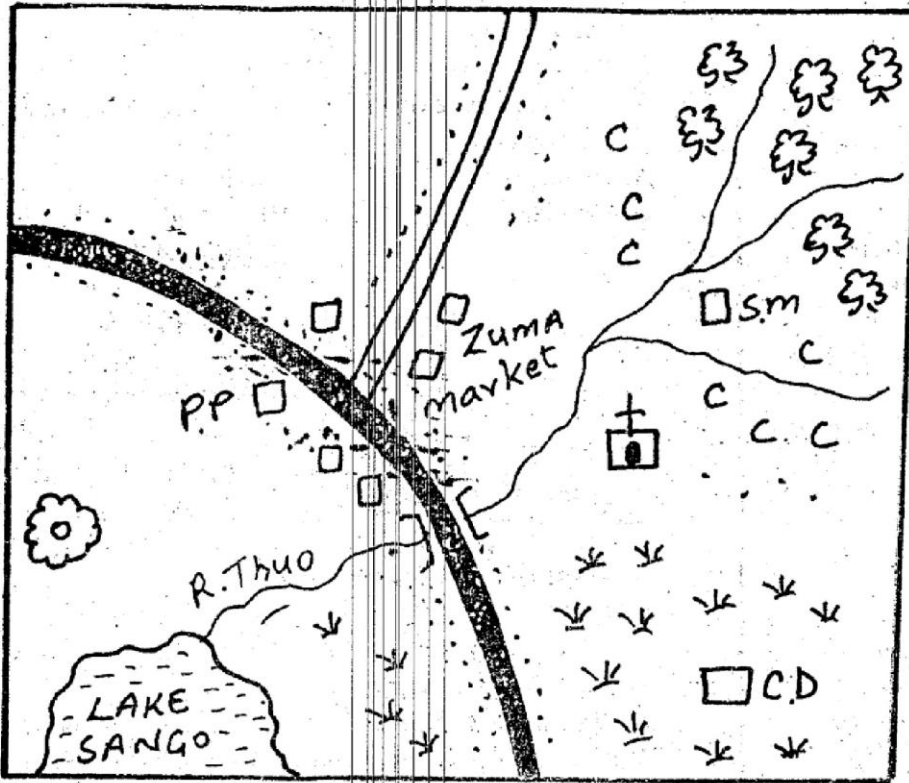


SOCIAL STUDIES /RELIGIOUS EDUCATION

KIMENDE AREA



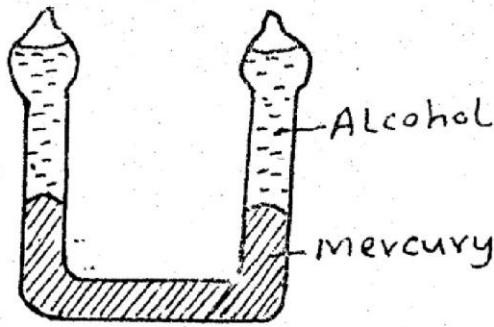
KEY	
	Quarry
	Church
C.D	Cattle dip
S.M	Saw mill
	Forest
	Grass
C C C C	Coffee
P.P	Police post

Use the map of Kimende area to answer questions 1-7.

- River Thuo flows from
 - N.W
 - S.W
 - S.E
 - N.E
- One of the following economic activity is **NOT** practised in the area :
 - Mining
 - Trading
 - Saw milling
 - Fishing
- People of Kimende area are **LIKELY** to be:-
 - Hindus
 - Christians
 - Muslims
 - Pagans
- The N.E part of Kimende experiences _____ climate.
 - Climate
 - Cool and wet
 - Hot and dry
 - Dry
- The lowest part of the area is around;
 - Lake Sango
 - Zuma market
 - Cattle dip
 - Saw mill

- The title of the map is:-
 - Zuma market
 - Key
 - Kimende
 - River
- What is the direction of the Quarry from the church?
 - West
 - East
 - North
 - South
- The smallest county in Kenya is:-
 - Nairobi
 - Machakos
 - Kitui
 - Kakamega
- River Yala drains into;
 - Lake Turkana
 - Lake Kanyaboli
 - Lake Victoria
 - Lake Magadi
- One of the following mountains is found in the Rift valley:-
 - Mt. Kenya
 - Mt. Elgon
 - Mt. Longonot
 - Mt. Kilimanjaro
- The Cushites originated from;
 - Southern
 - Ethiopia
 - Congo forest
 - South Africa

12.



The instrument above is called:

- A. Wind vane B. Thermometer
C. Rain gauge D. Windsock

13. The instrument above is used to measure:-

- A. Rainfall B. Wind direction
C. Temperature D. Wind strength

14. Reeds are found in _____ vegetation;

- A. Savannah grasslands B. Bushland vegetation
C. Swampy vegetation D. Mountain

15. The type of vegetation consisting of short scattered trees and grass is:-

- A. Mountain
B. Mangrove
C. Swamp vegetation
D. Savannah grassland vegetation

Use the map below to answer questions 16-21



16. Lake marked K:-

- A. Lake Turkana B. Lake Victoria
C. Lake Magadi D. Lake Kenyatta

17. Country marked P:-

- A. Southern Sudan B. Ethiopia
C. Somalia D. Uganda

18. The plain labelled XXXX

- A. Awara plains B. Lokitipi plains
C. Kano plains D. Athi-Kapiti plains

19. National game reserve marked Z:-

- A. Tsavo B. Maasai Mara
C. Sibiloi D. Mt. Kenya

20. Relief region labelled SSSS is called ;

- A. Coastal plains B. The highlands
C. Rift valley D. Lake basin

21. The town marked M:-

- A. Mandera B. Wajir C. Mombasa D. Moyale


22. The climate experienced along the coast is;

- A. Hot and dry B. Hot and dry
C. Cool and wet D. Convectional

23. The common type of soil found in River valleys and flood plains is.

- A. Volcanic B. Loamy soil
C. Alluvial soil D. Black cotton soil

24.



This type of rain is known as;

- A. Relief B. Convectional rainfall
C. Frontal rainfall D. Organic rainfall

25. Example of plain Nilotes;

- A. Maasai B. Nandi C. Akamba D. Galla

26. Which one of the following groups belongs to Southern Cushites?

- A. Somali B. Dahalo C. Borana D. Galla

27. The central highland of Kenya have a high population density due to:-

- A. Towns and cool temperatures
B. Mining activity and rainfall
C. High and fertile soils
D. Good roads and fertile

28. Which one of the following ways was NOT used to teach the youth in traditional education;

- A. Story telling B. Apprenticeship
C. Proverbs and riddles D. Reading

29. _____ is the process of removing precious minerals and precious materials.

- A. Agriculture B. Mining
C. Fishing D. Transport

30. Which one of the minerals is CORRECTLY matched with the place its mined;

- | Mineral | Place mined |
|--------------|--------------|
| A. Fluorspar | Kariandusi |
| B. Limestone | Kerio valley |
| C. Soda ash | Lake Magadi |
| D. Diatomite | Malindi |

31. Birds kept at home for mainly providing eggs are termed as:-
 A. Broilers B. Layers
 C. Chicken D. Beef
32. Growing of flowers is known as;
 A. Floriculture B. Horticulture
 C. Agro-forestry D. Green house
33. Tea growing is mostly suitable on the ;
 A. Coastal plains B. Nyika plains
 C. Lake basin D. The highlands
34. Which one is **NOT** a cash crop?
 A. Millet B. Tea C. Cotton D. Coffee
35. Which type of fish is **NOT** found in the inland fisheries?
 A. Nile perch B. Tilapia C. Trout D. Shellfish
36. Traditional method of catching fish is:-
 A. Purse seining B. Net drifting
 C. Trawling D. Traps
37. Which one of the tree is hard wood;
 A. Cypress B. Pine
 C. Gravela D. Mahogany
38. Which one of the following is **NOT** an importance of forests?
 A. Source of firewood
 B. Home for wild animals
 C. Promotes rain formation
 D. Increases soil erosion
39. Which one is **NOT** traditional method of preserving fish?
 A. Smoking B. Sun drying
 C. Refrigeration D. Salting
40. The type of education given in the past was known as _____
 A. Informal
 B. Modern
 C. Traditional education
 D. Missionary education
41. A National park that mainly conserves plants and animals living in water is:-
 A. Marine parks B. Mountain parks
 C. Game parks D. Ocean parks
42. Major tourist attraction in Kenya is:-
 A. Sand beaches B. Historical sites
 C. Wild life D. Relief features
43. Major problem facing wildlife in Kenya is:-
 A. Poaching B. Pollution
 C. Pests and diseases D. Drought
44. Exchange of goods for other goods is called:-
 A. Barter trade B. Foreign
 C. Internal trade D. Regional trade
45. Goods sold by a country to another country are termed as:-
 A. Imports B. Domestic goods
 C. Exports D. Internal goods
46. Growth of town is influenced by the following **EXCEPT**:-
 A. Mining activities B. Agricultural activities
 C. Transport D. Population
47. Which of the following towns grew due to industrial activities?
 A. Thika B. Eldoret
 C. Kisumu D. Machakos
48. Which one of the following is **NOT** a service industry?
 A. Hotel services B. Banking
 C. Tyre repairing D. Cement making
49. A traditional method of communication was:-
 A. Telephone B. Radios
 C. Television D. Drum beating
50. The most safe way of transporting petroleum from Mombasa to Nairobi:-
 A. Air B. Pipeline
 C. Railway D. Water
51. Who among the Akamba foretold the coming of the Europeans;
 A. Syokimau B. Eliud Mathu
 C. Paul Ngei D. Sakawa
52. Which community is **CORRECTLY** matched with the title of its leader;

Community	Title of leader
A. Nandi	Nabongo
B. Maasai	Oloibon
C. Wanga	Orkoiyot
D. Akamba	Masaku
53. Which is the slowest means of transport?
 A. Water B. Air
 C. Road D. Railway
54. Who among the following collaborated with colonial rule?
 A. Mekatilili wa Menza B. Koitalel Arap Samoei
 C. Waiyaki wa Hinga D. Ababukusu
55. Madaraka day is celebrated on;
 A. 1st May B. 1st June
 C. 12th December D. 20th October
56. Our National flag has _____ colours.
 A. Two B. Three C. Four D. Five
57. Which one is not a right of citizen ;
 A. Right to life B. Right to security
 C. Right to education D. Right to flight
58. For one to register as a voter, he/she must be of:-
 A. 18yrs B. 21yrs C. 35yrs D. 55yrs
59. Which one **DOES NOT** promote law and order?
 A. Love B. Respect C. Corruption D. Peace
60. **MAIN** source of government revenue _____
 A. Taxation
 B. Grants
 C. Fines and penalties in courts
 D. Loans

C.R.E

61. Naomi had a husband called _____
A. Joshua E. Elimelech
B. Nathan D. Stephen
62. _____ called fire from heaven.
A. Elisha B. Hosea
C. Elijah D. Jeremiah
63. Moses ran away from Egypt and went to _____
A. Midian B. Canaan
C. Bethlehem D. Joppa
64. Jesus resurrect on the _____ day.
A. 40th B. 33rd
C. 12th D. 3rd
65. The sons of Noah were:-
A. Cain, Ham, Japheth
B. Cain, Ham, Abel
C. Japheth, Jacob, Jachobed
66. Jesus means:-
A. Savior B. God with us
C. Son D. Messiah
67. Man is special because he was created in God's:-
A. Hands B. Image
C. Clay D. Esteem
68. A mature Christian should be a person of good:-
A. Will B. Mood
C. Conduct D. Ability
69. Which of the following is not a fruit of the holy spirit?
A. Goodness B. Love
C. Joy D. Emotions'
70. Irresponsible girl/boy relationship leads to _____
A. Love B. Morality
C. Immorality D. Marriage
71. The first four commandments show the relationship between _____
A. Man and God B. Man and man
C. God and God D. Man and creation
72. The new life in Christians is based on _____
A. God B. Love
C. Church D. Believe
73. Jesus turned water into wine at a wedding at:-
A. Antioch B. Bethlehem
C. Cana D. Jerusalem
74. Who of the following was a tax collector?
A. Jesus B. Abraham
C. Jeremiah D. Pentecost
75. The new covenant was foreseen by _____
A. Jesus B. Abraham
C. Jeremiah D. Pentecost
76. The disciples received the holy spirit on a day called;
A. Pentecost
B. Passover
C. Resurrection
D. Holy
77. "Father! into your hands, I commit my spirit"
(Luke 23: 46) These words were said by _____
A. Joshua B. Haron
C. Joseph D. Jesus
78. After resurrection, Jesus conversed with two disciples on their way to _____
A. Egypt B. Emmaus
C. Israel D. Rome
79. _____ came to prepare, the way for Jesus .
A. Disciples B. Peter
C. Judas Iscariot D. John the baptist
80. A part from Jesus who also said "Forgive them for they do not know what they are doing "
A. Bartimaeus B. Pirate
C. Stephen D. Saul
81. _____ healed Naaman of leprosy;
A. Elijah B. Elisha
C. Jesus D. Gehazi
82. The three visitors from mamic were welcomed by;
A. Abraham B. Lot
C. Pharaoh D. Good samaritan
83. A situation where there is disagreement between people is referred to as;
A. Fight B. Quarrel
C. Abuse D. Conflict
84. The fruit that can help us to overcome hatred is;
A. Self control B. Patience
C. Love D. Faithfulness
85. I am the prince of the peace, who am I?
A. John the baptist B. Jesus
C. God D. Holy spirit
86. My father was jealousy of David, who am I?
A. Saul B. Jonathan
C. Paul D. Goliath
87. The story of Peter and Jesus shows that _____ can be a threat to good relationship between God and us.
A. Love B. Fear
C. Kindness D. Humility
88. The wisemen were led by _____ on their way to Bethlehem to see baby Jesus.
A. Star B. Smoke
C. Light D. Fire
89. Jesus raised _____ from the dead.
A. Gerasene demoniac
B. Mary and Martha
C. Shummenite widow
D. Jairus daughter
90. "I believe in God, the father almighty" These words are found in _____
A. Disciples creed
B. Apostles creed
C. Lords prayer
D. Old testament

ENGLISH

Read the passage below. It contains blank spaces 1 - 15. Fill into the blanks correctly with the choices given.

One day Jack went hunting ___ 1 ___ his father. He sat ___ 2 ___ a big tree, on the river bank with ___ 3 ___ siblings. The branches of the tree ___ 4 ___ over the river. Jack ___ 5 ___ some ___ 6 ___ sounds above him. He looked up and saw a bird and her ___ 7 ___ in a nest. He aimed ___ 8 ___ the bird ___ 9 ___ unfortunately the stone hit one of the baby ___ 10 ___ which fell ___ 11 ___ the river. ___ 12 ___ mother flew down but could not get it out ___ 13 ___ water. On seeing this, Jack jumped into the water and caught hold of it. Lo ___ 14 ___ it was ___ 15 ___

- | | | | |
|---------------|-----------|--------------|---------------|
| 1. A. with | B. to | C. on | D. for |
| 2. A. on | B. with | C. under | D. above |
| 3. A. its | B. her | C. his | her |
| 4. A. spread | | B. spreaded | |
| | | C. spreading | D. spreads |
| 5. A. had | | B. heard | |
| | | C. hear | D. herd |
| 6. A. parking | | B. chirping | |
| | | C. roaring | D. chattering |
| 7. A. cubs | B. chicks | C. nesting | D. pub |
| 8. A. to | B. with | C. on | D. at |
| 9. A. and | B. but | C. with | D. when |
| 10. A. bird | B. birds | C. bird's | D. birds' |
| 11. A. in | B. on | C. into | D. to |
| 12. A. its | B. it's | C. their | D. it |
| 13. A. off | B. from | C. of | D. in |
| 14. A. , | B. ! | C. . | D. ? |
| 15. A. died | B. dead | C. death | D. dying |

Give one word for the following

- | | |
|---|---------------|
| 16. A place where things are manufactured _____ | |
| A. Market | B. City |
| C. Factory | D. House |
| 17. A group of singers _____ | |
| A. Tune | B. Singer |
| C. Dance | D. Choir |
| 18. Cupboard, tables, chair, bed _____ | |
| A. Equipment | B. Utensils |
| C. Furniture | D. Containers |

Choose the correct article to complete the sentences

- | | |
|---------------------------------------|---------|
| 19. They did not know _____ way back. | |
| A. an | B. the |
| C. a | D. off |
| 20. I can buy _____ apple anytime. | |
| A. a | B. an |
| C. the | D. with |

Complete the sentences with the correct sound

- | | |
|-----------------------|-------------|
| 21. A bee _____ | |
| A. Neighs | B. Harms |
| C. Chatters | D. Roars |
| 22. An elephant _____ | |
| A. Hisses | B. Brays |
| C. Laughs | D. Trumpets |

Complete the following

- | | |
|--|----------|
| 23. I have known Konde _____ five years. | |
| A. At | B. For |
| C. From | D. Since |
| 24. The water is _____ cold to drink. | |
| A. So | B. Very |
| C. That | D. Too |
| 25. It took like a man , and scares birds away _____ | |
| A. Paper | B. Scare |
| C. Dung | D. None |

Choose the correct question tag

- | | |
|---------------------------------|----------------|
| 26. You don't read much, _____ | |
| A. Isn't it? | B. Doesn't it? |
| C. Don't you? | D. Do you? |
| 27. I am late for class _____ | |
| A. Amn't I? | B. Aren't I? |
| C. Isn't it? | D. Are we? |
| 28. Lets go to the market _____ | |
| A. Shall we? | B. Go we? |
| C. Isn't it? | D. Are we? |

Write the opposite of the underlined words

- | | |
|---------------------------------------|-------------|
| 29. He has got a <u>temporary</u> job | |
| A. Permanent | |
| B. Durable | |
| C. Modern | |
| D. Useful | |
| 30. He came to school <u>late</u> . | |
| A. Unlate | B. Early |
| C. Now | D. Non-late |

Read the passage below and answer questions
31 - 40

Once upon a time there was an old man living with his wife, three son and one daughter. He was very poor but honest man. He had a small piece of land and was maintaining his family by growing vegetables in it. Fred the eldest son, was a very intelligent boy and after finishing his secondary school, he wanted to go for higher education, but due to poverty of his family, he had to drop the idea. He then decided to take a job so that he could help his old father in keeping the family going.

31. Fred dropped his idea of higher education because:-
 - A. he had failed his exam
 - B. his father wanted him to work
 - C. his father was poor and could not afford
 - D. He was unlucky
32. Fred had how many brothers?
 - A. Four
 - B. Three
 - C. Two
 - D. None
33. In the passage the sentence, " due to poverty " is underlined. It means
 - A. Because of poor situation of the family
 - B. He was rich
 - C. He had money but in the shamba
 - D. His father was very old
34. Fred's father was a _____
 - A. Teacher
 - B. Shopkeeper
 - C. Gardener
 - D. Thief
35. How many people were living in the family of the old man?
 - A. Four
 - B. Six
 - C. Five
 - D. Three
36. The **opposite** of the word wife is:-
 - A. Daughter
 - B. Woman
 - C. Husband
 - D. Grandmother
37. Spinach, kales, cabbage and tomatoes are all:-
 - A. Food
 - B. Fruits
 - C. Vegetables
 - D. Furniture
38. The **opposite** of **poor** is:-
 - A. Rich
 - B. Good
 - C. Old
 - D. None
39. The plural of family is _____
 - A. Family
 - B. Families
 - C. Familyses
 - D. Families
40. Father is to mother as daughter is to _____
 - A. Woman
 - B. Son
 - C. Grandfather
 - D. Sister

Read the passage and answer questions 41 -
50

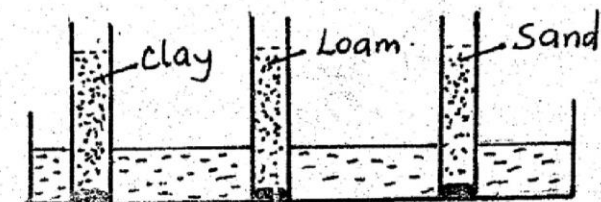
A lot has been done and said about the prevention of road accidents. Millions have been spent but accidents continue to happen. It is obvious that we are in the war against road accidents. Traffic police have been used, radio and T.V have campaigned hard, unworthy vehicles have been removed from the roads but the situation has not changed.

Manufacturers should bring into the markets the vehicles fitted with safety belts. Policemen should be strict with overloading. Poor roads should be repaired.

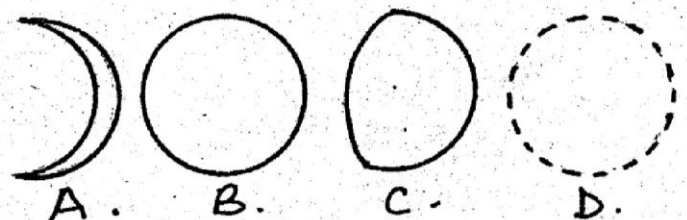
41. What is said about accidents?
 - A. They are bad.
 - B. Millions have been spent
 - C. Nothing should be done
 - D. Drivers
42. What are we defeated of?
 - A. To go on with accidents
 - B. To talk
 - C. To stop accidents
 - D. To spend on accidents
43. What is a campaign?
 - A. A game
 - B. A police notice
 - C. Serious talk and actions
 - D. Unplanned talk
44. What has been used for campaigning?
 - A. Safety
 - B. Unworthy
 - C. TV's and radio
 - D. Manufactures
45. What is the opposite of the word unworthy?
 - A. Worthy
 - B. Useless
 - C. Expensive
 - D. Real
46. Poor roads are supposed to be:-
 - A. Tarmacked
 - B. Cleared
 - C. Repaired
 - D. Put murrum
47. What is overloading?
 - A. Carrying loads
 - B. Carrying people
 - C. Carrying enough loads
 - D. Carrying overweight
48. People who maintain peace and order are called:-
 - A. Policemen
 - B. Guns
 - C. Fighters
 - D. Strict people
49. What is the opposite of the word **defeat**?
 - A. Unable
 - B. Undefeat
 - C. Win
 - D. Lazy
50. What is the **BEST** title for the passage?
 - A. Accident
 - B. Over loading
 - C. Campaign
 - D. Road usage

SCIENCE

- During the breathing process exchange of gases takes place in the _____.
A. Bronchus B. Bronchioles C. Air sacs D. Windpipe
- Which one of the following is part of the digestive system?
A. Trachea B. Oesophagus
C. Diaphragm D. Bronchioles
- The date before which medicine should be used is known as the;
A. Expiry date B. Manufacturing date
C. Delivery date D. Supply date
- The amount of medicine to be taken at a time is known as:-
A. Medicinal quantity B. Dosage
C. Prescription D. First aid
- The green substance contained in a leaf is called?
A. Photosynthesis B. Green colour
C. Algae D. Chlorophyll
- The following are examples of fungal infections. Which one is **NOT**?
A. Ringworm B. Dandruff
C. Yeast D. Athletes foot
- The diagram below is used to measure? _____
A. Amount of rainfall
B. Temperature
C. Humidity
D. Wind speed
- An instrument that is used to measure both strength and show direction of wind is the:-
A. Windvane B. Windsock
C. Thermometer D. Anemometer
- The process of grouping animals with common characteristics together is called;
A. Grouping B. Vertebrates
C. Invertebrates D. Classification
- An animal had the following characteristic;
(i) Lived partly (ii) Had moist skin
(iii) Lay eggs
The animal was **LIKELY** to be;
A. Fish B. Crocodile C. Frog D. Whale
- The soil with the best drainage is the:-
A. Clay soil B. Sandy soil C. Loam soil D. None

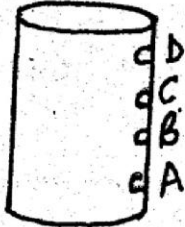


- The diagram above was set up to investigate capillary. After the experiment water rose highest in:-
A. Clay B. Loam C. Sand D. Same level
- Which of the following disease is caused by lack of enough proteins in the diet?
A. Marasmus B. Rickets
C. Anemia D. Kwashiorkor
 - Which of the following is an example of a carbohydrate?
A. Meat B. Green grams C. Rice D. Eggs
 - Whispering produces _____ sound.
A. Loud B. Soft C. Talking D. Crying
 - Which of the following is not an effect of noise pollution?
A. Mental disorders B. Deafness
C. Irritability D. Ringing in the years
 - The tooth below is used for _____
A. Cutting and biting
B. Grinding
C. Crushing
D. Gripping and tearing
 - The following are problems related to teeth. Which one is **NOT**?
A. Bad smell B. Cavities
C. Swollen D. Tooth decay
 - In the word AIDS letter A stands for?
A. Acmed B. Acquired
C. Accumulated D. Advanced
 - Sunflower and coconut are examples of _____.
A. Crops B. Fibre crops
C. Cash crops D. Beverage crops
 - Which one of the following phases of moon is the gibbous?
A. B. C. D.

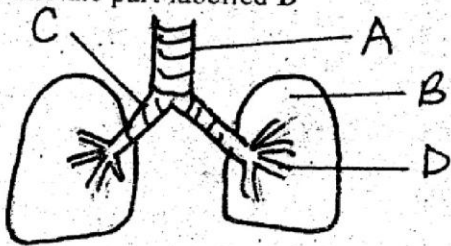


- Which type of crops look like bundles of cotton wool and have flat bases?
A. Cumulus B. Stratus C. Nimbus D. Cirrus
- Which of the following is **NOT** a characteristic of animals?
A. Feeding B. Movement
C. Growing D. Living forever
- Which of the following is **not** a product of a sheep?
A. Wool B. Molars C. Mutton D. Skin

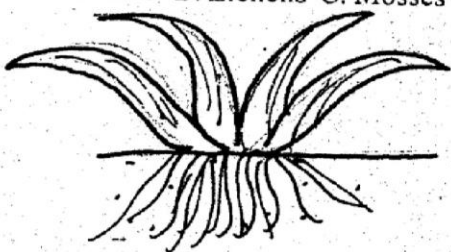
25. Which of the following is a use of water for recreation?
 A. Swimming B. Irrigation C. Watering D. Watering
26. Examples of animals that live in the soil include the following **EXCEPT**:-
 A. Termite B. Ant C. Snake D. Centipede
27. Foods that prevent certain diseases from attacking us are:-
 A. Proteins B. Energy C. Carbohydrates D. Vitamins
28. The **MAIN** source of light on earth is the;
 A. Lamps B. Sun C. Moon D. Electricity
29. In the diagram below which hole did the water jet farthest?



30. Which one of the following tools is used for digging?
 A. Panga B. Knife C. Jembe D. Slashes
31. Which one of the following organs produces bile juice?
 A. Stomach B. Duodenum C. Ileum D. Liver
32. Name the part labelled D



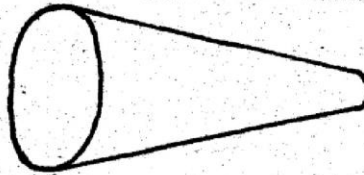
- A. Bronchus B. Windpipe C. Lungs D. Bronchioles
33. After taking medicine, the excess medicine should be:-
 A. Destroyed or thrown B. Given to relatives
 C. Kept for later use D. Given to neighbour
34. The second stage of HIV infection is called:-
 A. Window stage B. Incubate stage
 C. Full blown stage D. Symptomatic
35. Which of the following is **NOT** example of a non-green?
 A. Mushroom B. Lichens C. Mosses D. Toadstool



The following plants have this type of root system shown above **EXCEPT**:-

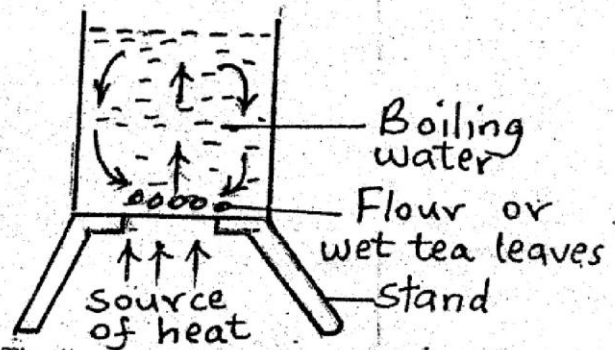
- A. Maize B. Onion C. Millet D. Mango
7. The degree of hotness or coldness of the atmosphere is called
 A. Temperature B. Hotness
 C. Thermometer D. Humidity

38. Mammals that feed on other animals are called:-
 A. Carnivore B. Omnivores
 C. Herbivores D. Vertebrates
39. Which one of the following statements about birds and reptiles is **NOT** true?
 A. Both are vertebrates
 B. Both are warm blooded
 C. Both lay eggs
 D. Reptiles give birth while birds lay eggs
40. The smoothness or roughness of soil is called;
 A. Capillarity B. Drainage
 C. Texture D. Coarseness
41. Lack of fibre in the diet leads to;
 A. Proper digestion B. Kwashiorkor
 C. Diarrhoea D. Constipation
42. The diagram below makes the sound _____



- A. Softer
 B. Low
 C. Louder
 D. Moderate

43.



The diagram above was set to investigate the process of;

- A. Convection B. Radiation
 C. Conduction D. Evaporation
44. When making utensils, poor conduction of heat are used as?
 A. Stirring utensils B. Insulators
 C. Radiators D. Metal lids
45. At age 6, the falling off teeth is called?
 A. Teeth falling B. Removing of teeth
 C. Dental D. Shedding
46. Weeds are _____ to crops.
 A. Beneficial B. Advantageous
 C. Harmful D. Useful
47. The sun looks larger than the other stars because it is:-
 A. Too bright B. Seen during day time
 C. Too hot D. Closer to the earth than other stars
48. Which of the following **DOES NOT** help an animal to grow healthy?
 A. Proper housing B. Proper medical care
 C. Adding fertilizer D. Proper feeding
49. The soil that contains a lot of organic matter is;
 A. Dark in colours B. White
 C. Colourless D. Bright in colours
50. Which one of the following is **NOT** a use of heat?
 A. Lighting B. Drying C. Cooking D. Ironing

MATHEMATICS

1. What is eight thousand, nine hundred and nine in symbols?

- A. 80009009 B. 8909
C. 80990 D. 800909

2. What is the place value of digit 4 in the number 439099?

- A. Hundreds B. Thousands
C. Ten thousands D. Hundred thousands

3. Write 924 in words

- A. Nine hundred and twenty four
B. Nine thousand and twenty four
C. Ninety thousand and twenty four
D. None of these

4. What is the L.C.M of 3 and 4?

- A. 7 B. 3 C. 12 D. 4

5. Which one is a prime number?

- A. 41 B. 46 C. 42 D. 44

6. Which number is divisible by 4?

- A. 520 B. 521 C. 522 D. 523

7. What is 43 in Roman numbers?

- A. XXXXIII B. XLIII
C. LXXIII D. LXIII

8. What is the G.C.D of 12 and 16?

- A. 28 B. 4 C. 6 D. 48

9. What is $\frac{14}{24}$ in its simplest form?

- A. $\frac{2}{12}$ B. $\frac{3}{12}$ C. $\frac{7}{12}$ D. $\frac{2}{3}$

10. Add: $8 + 13746 + 56184 =$

- A. 69938 B. 69838
C. 68938 D. 69937

11. What is the next number?

4, 12, 20, 28, _____

- A. 24 B. 36 C. 30 D. 35

12. $1 - \frac{5}{6} = ?$

- A. $\frac{1}{6}$ B. $\frac{4}{6}$ C. $\frac{6}{6}$ D. $\frac{3}{6}$

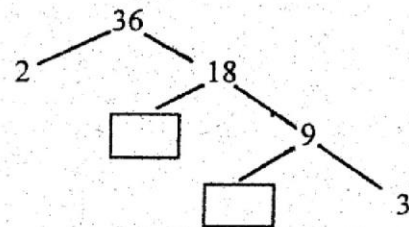
13. Change to improper fraction. $3\frac{4}{5}$

- A. $\frac{5}{19}$ B. $\frac{12}{5}$
C. $\frac{19}{5}$ D. $\frac{23}{5}$

14. Write as a mixed number $\frac{43}{4}$

- A. $10\frac{3}{4}$ B. $3\frac{4}{5}$
C. $10\frac{7}{4}$ D. $1\frac{3}{4}$

15. Complete the factor tree



- A. 2, 3 B. 3, 3
C. 2, 9 D. 3, 2

16. Write $\frac{4}{1000}$ as a decimal.

- A. 0.4 B. 0.004 C. 0.0004 D. 4.0

17. What is $\frac{75}{100}$ as decimal?

- A. 0.75 B. 7.5 C. 75.0 D. 0.75

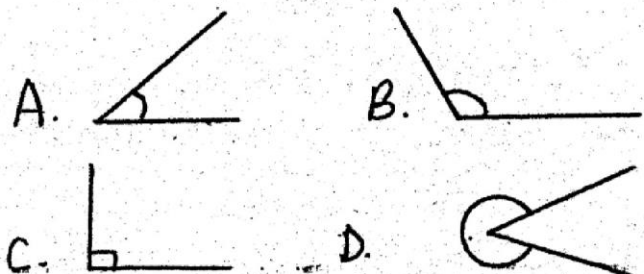
18. Find the L.C.M of 4, 6, and 24

- A. 24 B. 12 C. 36 D. 34

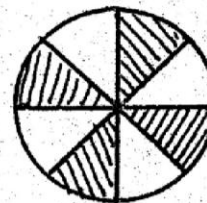
19. What is the product of 9 and 4?

- A. 5 B. 45 C. 36 D. 13

20. Which of these angles is obtuse?



21. What is the fraction of the shaded part?



- A. $\frac{1}{2}$
B. $\frac{4}{8}$
C. $\frac{8}{8}$
D. $\frac{7}{8}$

22. Work out: $\frac{2}{3} - \frac{1}{6} =$

- A. $\frac{3}{6}$ B. $\frac{1}{3}$ C. $\frac{2}{3}$ D. $\frac{4}{6}$

23. Arrange from the smallest to the biggest

$\frac{1}{5}, \frac{1}{3}, \frac{1}{2}, \frac{1}{4}$

- A. $\frac{1}{5}, \frac{1}{3}, \frac{1}{2}, \frac{1}{4}$ B. $\frac{1}{5}, \frac{1}{4}, \frac{1}{3}, \frac{1}{2}$
C. $\frac{1}{4}, \frac{1}{5}, \frac{1}{3}, \frac{1}{2}$ D. $\frac{1}{2}, \frac{1}{3}, \frac{1}{4}, \frac{1}{5}$

24. Write 0.58 as decimal in its simplest form.

- A. $\frac{58}{100}$ B. $\frac{26}{50}$ C. $\frac{29}{50}$ D. $\frac{58}{1000}$

25. Add: $21.7 + 0.03 + 123.124 =$

- A. 145.124 B. 370.124
C. 143.854 D. 144.854

26. Work out:
$$\begin{array}{r} 5.868 \\ - 2.378 \\ \hline \end{array}$$

- A. 8.246 B. 3.510
C. 3.516 D. 3.490

27. Work out: $83949 + 34625 + 28 =$

- A. 118602 B. 118612
C. 118574 D. 118402

28. $7 \times 5 \times 2 =$

- A. 35 B. 70 C. 14 D. 28

29. Nine girls bought 8 biscuits each. How many biscuits did they buy altogether?

- A. 17 B. 63 C. 72 D. 9

30. Multiply:
$$\begin{array}{r} 617 \\ \times 45 \\ \hline \end{array}$$

- A. 24670 B. 24680
C. 27765 D. 3085

31. Find the sum of the prime numbers between 40 and 50.

- A. 84 B. 131 C. 47 D. 41

32. A class of 350 pupils was divided into ten groups. How many pupils were in each group?

- A. 70 B. 50 C. 360 D. 35

33. $32 \overline{)788}$

- A. 24 rem 20 B. 23 rem 20
C. 25 D. 25 rem 20

34. The prime factorization of 24 is:

- A. $2 \times 2 \times 2 \times 3$ B. $2 \times 2 \times 6$
C. 8×3 D. 24×1

35. What is the product of 20 and 60?

- A. 80 B. 1200 C. 120 D. 40

36. Convert this fraction to a decimal $\frac{49}{50}$.

- A. 9.8 B. 0.0098
C. 0.88 D. 0.98

37. Subtract $1\frac{3}{8}$ from $2\frac{7}{8}$

- A. $1\frac{4}{8}$ B. $1\frac{11}{8}$ C. $4\frac{3}{8}$ D. $3\frac{11}{8}$

38. Work out: $2\frac{1}{3} \times 4$

- A. $\frac{11}{3}$ B. $\frac{28}{3}$ C. $9\frac{1}{3}$ D. $\frac{3}{28}$

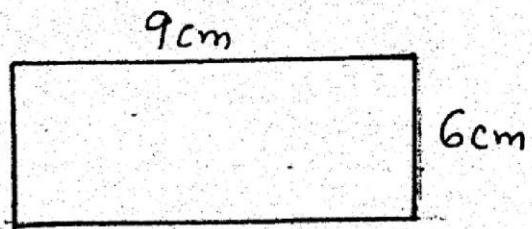
39. $19\frac{1}{3} \times 0 =$

- A. $\frac{58}{3}$ B. 0 C. $19\frac{1}{3}$ D. $\frac{3}{58}$

40. $1.2 \times 4 =$

- A. 8.1 B. 4.8 C. 1.6 D. 48

41. Find the perimeter of the figure.



- A. 55 cm B. 44 cm C. 22 cm D. 30 cm

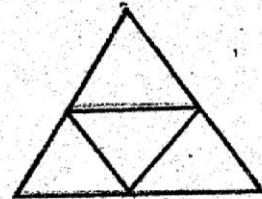
42. Change 240 min to hours.

- A. 4 hours B. 6 hours
C. 24 hours D. 10 hours

43. Round off 946 to the nearest 10.

- A. 900 B. 940 C. 950 D. 1000

44. How many triangles are there in this figure?



- A. 6 B. 5 C. 4 D. 8

45. The table shows Mr. Kitungu's animals in his farm.

Cows	Goats	Sheep	Donkeys
15	31	27	2

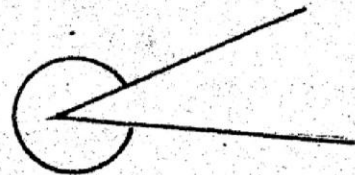
Which type of animals has the least number?

- A. Goats B. Cows
C. Sheep D. Donkeys

46. What is $\frac{3}{6} + \frac{4}{6} =$

- A. $\frac{7}{6}$ B. $\frac{6}{7}$ C. $1\frac{1}{6}$ D. $2\frac{1}{6}$

47. This is a _____ angled triangle.



- A. right B. obtuse C. acute D. reflex

48. 100 cm = _____ metres.

- A. 2 B. 1 C. 3 D. 4

49. Which of the following numbers is divisible by 5?

- A. 361 B. 423 C. 324 D. 940

50. Write nine point three in figures.

- A. 93 B. 3.9 C. 9.3 D. 3.9

**PRIME
MIRROR
008**

DARASA LA TANO 2015

INSHA

JINALAKO:	
JINALASHULEYAKO:	

Andika insha ya kuisimua juu ya kichwa kifuatacho:-

SIKU YAMICHEZO

MARKING SCHEME

ENGLISH	MATHEMATICS	KISWAHILI	SCIENCE	S/STUDIES/C.R.E
1. A 31. C	1. B 31. B	1. A 31. D	1. C 31. D	1. D 31. B 61. B
2. C 32. C	2. D 32. D	2. B 32. B	2. B 32. D	2. D 32. B 62. C
3. C 33. A	3. A 33. A	3. C 33. A	3. A 33. A	3. B 33. D 63. A
4. A 34. C	4. C 34. A	4. B 34. D	4. B 34. B	4. A 34. A 64. D
5. B 35. C	5. A 35. B	5. D 35. D	5. D 35. C	5. A 35. D 65. A
6. B 36. C	6. A 36. D	6. A 36. C	6. C 36. D	6. C 36. D 66. A
7. C 37. C	7. A 37. A	7. B 37. A	7. A 37. A	7. A 37. D 67. B
8. D 38. A	8. B 38. C	8. D 38. B	8. B 38. A	8. A 38. D 68. C
9. B 39. B	9. C 39. B	9. C 39. B	9. D 39. B	9. B 39. C 69. D
10. B 40. B	10. A 40. B	10. D 40. C	10. C 40. C	10. C 40. A 70. C
11. C 41. B	11. B 41. D	11. A 41. B	11. B 41. D	11. A 41. A 71. A
12. A 42. C	12. A 42. A	12. B 42. C	12. A 42. C	12. B 42. C 72. B
13. C 43. C	13. C 43. C	13. C 43. A	13. D 43. A	13. C 43. A 73. C
14. B 44. C	14. A 44. B	14. B 44. B	14. C 44. B	14. C 44. A 74. A
15. B 45. A	15. A 45. D	15. D 45. C	15. B 45. D	15. D 45. C 75. C
16. C 46. B	16. B 46. B	16. D 46. D	16. A 46. C	16. A 46. B 76. A
17. D 47. D	17. A 47. D	17. A 47. D	17. D 47. D	17. A 47. A 77. D
18. C 48. A	18. A 48. B	18. D 48. C	18. C 48. C	18. B 48. D 78. B
19. B 49. B	19. C 49. D	19. B 49. B	19. B 49. A	19. B 49. D 79. D
20. B 50. A	20. B 50. C	20. C 50. A	20. A 50. A	20. D 50. B 80. C
21. C	21. B	21. B	21. C	21. D 51. A 81. B
22. D	22. A	22. A	22. A	22. B 52. D 82. A
23. B	23. B	23. D	23. D	23. C 53. A 83. D
24. D	24. C	24. C	24. B	24. A 54. C 84. C
25. B	25. D	25. C	25. A	25. A 55. B 85. B
26. D	26. D	26. D	26. C	26. B 56. C 86. A
27. B	27. A	27. B	27. D	27. C 57. D 87. B
28. A	28. B	28. B	28. B	28. D 58. A 88. A
29. A	29. C	29. C	29. A	29. B 59. C 89. D
30. B	30. C	30. A	30. C	30. C 60. A 90. B

COMPOSITION / INSHA MARKING SCHEME

MARKING CRITERION

- The composition will be assessed according to the following guidelines.
 - The maximum mark will be 40 and the minimum mark 01.
- Does the script show that the candidate can communicate accurately, fluently and imaginatively in English
- Accuracy (16 marks)**
- (a) Correct tense and agreement of verbs (b) Accurate use of vocabulary (4 marks)
(c) Correct spelling (4 marks) (d) Correct punctuation (4 marks)
- Fluency (16 marks)**
- (a) Correct flow of the story (4 marks) (b) Well sequenced sentence and connected paragraphs (4 marks)
(c) Correct spelling (4 marks) (d) Ideas developed in logic sequence (4 marks)
- Imagination (8 marks)**
- (a) Unusual but appropriate use of words (4 marks)
(b) Variety of structure (4 marks)

NB: Please teachers are requested to scrutinize this marking scheme before use, it is worth