

GOLDEN SERIES

KRY
007

STANDARD EIGHT - 2014

COMPOSITION

TIME: 40 MINS

INDEX NUMBER	
YOUR NAME	
NAME OF YOUR SCHOOL	

Powered By: www.eeducationgroup.com

ENGLISH

SECTION B: COMPOSITION

TIME: 40 MINUTES

READ THESE INSTRUCTIONS CAREFULLY

1. In the space given above write your index number, your name and of your school.
2. Now open the page, read the heading of the composition carefully and write your composition in the given space.

GOLDEN SERIES

STANDARD EIGHT - 2014

KRY
007

ENGLISH

TIME 1HR 40 MIN

Read the passage below. It contains blank spaces 1-15. For each blank space, choose the BEST answer from the choices given

On Saturday morning the children of Kamboni Primary School attended 1 annual Nakuru Agricultural Show. They were all 2 excited about the tour. Many of them 3 about Agricultural show but they had never attended one. Before touring the show ground, the children 4 to go to a hotel for breakfast. When they finished eating, a waiter brought the 5 for the meal. To their surprise, their classmaster, Mr. Bukaka, 6 pay it. However, he asked the bus driver to 7 him some money to be refunded by the headmistress. After paying, they left 8 the show ground. On arrival, the children found their headmistress already waiting for them. She gave each of them 9 note to pay for the entry fee. The children quickly entered the show ground through the main gate and went 10 to the wildlife stand. There, the warden 11 to them in detail how lions and cheetahs differ. He told them that although lions are the bravest animals in the jungle, they do not run 12 the cheetahs. He surprised them when he further pointed out that cheetahs do not attack people 13 they are provoked. "Cheetahs are found in Kenya, 14 "one boy asked him. Before the warden answered, a guard ordered the children to leave the stand 15 it was getting overcrowded with people.

- | | | | |
|---------------------|-------------------|-----------------|--------------------|
| 1. A. an | B. the | C. their | D. one |
| 2. A. so | B. more | C. too | D. very |
| 3. A. would hear | B. had heard | C. were hearing | D. have heard |
| 4. A. wanted | B. planned | C. managed | D. decided |
| 5. A. receipt | B. order | C. bill | D. invoice |
| 6. A. could not | B. would | C. would not | D. could |
| 7. A. pay | B. borrow | C. bring | D. lend |
| 8. A. for | B. to | C. into | D. towards |
| 9. A. ten shillings | B. a ten shilling | C. ten shilling | D. a ten shillings |
| 10. A. ahead | B. away | C. straight | D. forward |
| 11. A. described | B. explained | C. told | D. talked |
| 12. A. as fast as | B. as well as | C. faster than | D. better than |
| 13. A. whether | B. until | C. when | D. unless |
| 14. A. is it? | B. isn't it? | C. aren't they? | D. are they? |
| 15. A. if | B. so | C. while | D. as |

For questions 16 - 18, choose the alternative that means the same as the given sentence

16. No sooner had Kazia fallen asleep than the dogs began barking
- A. The dogs barked when Kezia fell asleep
B. The dogs began barking as soon as Kezia fell asleep
C. Kezia fell asleep and the dogs barked
D. Kezia had not really fallen asleep when the dogs barked
17. "I met Suzi on my way to church," said Jimmy
- A. Jimmy said that he met Suzi on his to church
B. Jimmy said, "he met Suzi on his way to church"
C. Jimmy said that he met Suzi on her way to church
D. Jimmy said: 'I met Suzi on my way to church'

18. He would have bought you a new dress if you had asked him
- A. He did not buy you a new dress unless you ask her
B. He did not buy you a new dress because you did not ask him to
C. He bought you a new dress but you did not ask him
D. He will buy you a new dress when you ask him

For questions 19 - 21, choose the alternative that best completes the sentence

19. His uncle offered him a job but he _____
- A. turned it away B. turned it down
C. turned it back D. turned it off
20. Our classteacher has a _____ bag.

- A. small, beautiful expensive
- B. beautiful small expensive
- C. small expensive beautiful
- D. beautiful expensive small

21. There is an _____ that he was involved in the thuggery.

- A. allegation
- B. allagation
- C. alegation
- D. alleggation

In questions 22 - 23 choose the word that means the opposite of the underlined word

22. My uncles new car made him look fashionable

- A. outdated
- B. awesome
- C. stylish
- D. wonderful

23. The industrious girl was awarded during prize giving day.

- A. extravagant
- B. hardworking
- C. lazy
- D. energetic

In questions 24 and 25, choose the best arrangement of the given sentence to make a sensible paragraph

24. (i) My mother played a big role in convincing him that a little education did no harm

(ii) I had started school late, aged eight years

(iii) Because my father was not keen in taking me to school

(iv) By this time I was ten years old

- A. (iii), (i), (ii), (iv)
- B. (ii), (iii), (i), (iv)
- C. (ii), (i), (iii), (iv)
- D. (iv), (i), (iii), (ii)

25. (i) The attention of Linda's mother was drawn to their daughter's room by a screen

(ii) That is why she had screamed

(iii) She got into her room to find her shivering and sweating as she lay on the cement floor next to her bed

(iv) For what had seemed like a whole say, the girl explained, she had been wrestling with the most cruel monster that was overpowering her

- A. i, iv, iii, ii
- B. i, iii, iv, ii
- C. i, ii, iii, iv
- D. i, iv, ii, iii

Read the information below then answer questions 26-40

Most people look for jobs in the wrong places. To understand the future of employment, potential employees need to understand that jobs emerge in response to the changing needs of individuals in society. Finding a job is therefore a matter of carrying out research on people's changing needs and responding to them. This idea struck me when I came across a young man carrying a box of nail varnish bottles, a stool and all the paraphernalia that goes with pedicures. He was not selling the varnish, though. He was a pedicurist looking for clients. Within no time, a woman had sat down on his stool and was having her toe-nails done.

Jobs come up as a result of necessity.

It is really as simple as that; looking at problem areas that have not been adequately dealt with and coming up with an innovative solution. For instance, when the first mobile toilets came to Kenya, everyone was wondering, "Why didn't I think of that before?"

Jane is another example. Initially, she had done a lot of job hunting with no success. Later, she started her company, Reorganized Chaos, following months of rejections by potential employers. It all began when she noted how disorganized a particular office she had gone job-seeking looked. Besides being a tenacious person, Jane was quite organized. As she walked home, the idea of organizing people's offices for a small fee hit her.

Six months later, Jane opened her new company, Reorganized Chaos. She had visited enough offices to note that a good number of them were poorly organized and with their vital documents in disarray. Besides being tenacious, Jane was an organized person. She decided to go back to the very offices that had refused to hire her and sell to them the idea of getting them organized for a small fee. At first it was not easy but soon she got clients from word of mouth referrals by satisfied clients.

Since most unemployed people look for jobs within established career paths, they find that there are thin prospects of being hired. And yet there are several jobs that have not yet been created. Examples of problem areas that can be exploited abound everywhere. For instance, many people find themselves too busy to cook or clean for themselves. Someone has already identified this need and come up with ready to go meals and even cleaning services. Although there are risks, it pays to figure out what people want and come up with timely solutions.

Some jobs require that one sits in their office all day. This means that they do not have time to go shopping for essentials such as groceries. Imagine the amount of money a company would make, just filling this gap. However, it would mean being above board and able to deliver beyond the clients' expectations. The market should come to the clients, not the other way round.

Finding ways to bring the market closer to the clients means carrying out research on the best options, providing solutions and being flexible. It also means coming up with an attractive brochure explaining the possible benefits of engaging the company. For example, in Jane's case, she would probably explain that the mission of her company is to help organizations create a system that enables them find things easily, thus wasting time. Job seekers should look beyond our borders for jobs. With access to Internet, it is now easy to carry out assignments somewhere thousands of kilometers away without having to leave the comfort of one's home. There is a bright future in the digital world, which is quickly taking hold of our lives. The problems associated with it will be a great place to find a job.

26. Which of the following is false according to the first paragraph
- Jobs emerge in response to the needs of the whole society
 - Majority of the people are not aware of the right place to look for jobs
 - One should not just begin searching for jobs without prior research
 - Employees need to carry out searching and respond to the needs of the society
27. Who is a pedicurist according to the passage?
- A young man who carries a box of nail varnish bottle
 - A person who carries paraphernalia that goes with pedicures
 - A beautician of feet
 - A doctor who takes care of people's feet
28. What is an innovative solution according to the passage?
- A solution to a difficult problem
 - A solution that has never been offered before
 - A solution to a problem that has been adequately dealt with
 - A solution to a problem that people keep wondering about
29. Jane started 'reorganized chaos' after
- She hunted for a job unsuccessfully
 - She was rejected by potential employers
 - She had noted how disorganized a particular office was
 - She noted realized that she was tenacious and organized
30. Which of the following is true according to the passage
- Jane was either tenacious or organized
 - Jane was both tenacious and organized
 - Jane was neither tenacious nor organized
 - A part from being tenacious, Jane was not organized
31. Most unemployed people;
- look for jobs in companies
 - Hunt for jobs in companies that are initializing
 - Search for jobs in places where they hardly know
 - Become aware of their slim chances
32. The word **timely** has been underlined. It would also mean the same as
- In time
 - On time
 - At times
 - Within time
33. Which of the following has not been quoted as a job opportunity?
- Reorganizing chaos in offices
 - Purchasing of groceries
 - Coming up with attractive brochures
 - Cooking and cleaning
34. What is the opposite of the word flexible as used in the passage?
- Inflexible
 - Rigid
 - Taut
 - Straight
35. Which of the following is false according to the passage?
- Jane hunted for a job for six months
 - Jane used her strengths in life to open her company
 - For one to excel in job opportunities they need to exceed the clients expectations
 - Being innovative is one of the quantities of creating job opportunities
36. What according to the passage is the writer's opinion of the digital world?
- It makes one too busy to cook and clean
 - It is the only bright future
 - It has numerous advantages
 - It has both advantages and disadvantages
37. Which of these proverbs can be used to describe the opportunities?
- Look before you leap
 - A stitch in time saves nine
 - If the mountain won't go to Mohamed, then Mohamed must go to the mountain
 - A change is as good as a rest
38. Which of the following can be used as the best title for the passage?
- Ignoring job opportunities
 - Creating jobs by reorganizing chaos
 - Looking for job opportunities in the beyond borders
 - Job hunting

Read the passage below and then answer questions 38 to 50

The hospitality industry in Kenya has been growing over the years and just last year, The tourism sector — which anchors hospitality earned Kenya almost 100 billion.

The hospitality sector is a broad category of fields within the service industry that includes lodging, restaurants, and event planning, theme parks, transportation, and cruise lines and additional fields within the tourism industry. Kenya's towns and cities have developed into harbours for restaurants and hotels with support people such as tour operators, servers, housekeepers, porters, kitchen workers and bartenders. The industry offers a wide range of specialties ranging from hotel management, catering and marketing to human resources.

The fast-growing traffic of global hotel chains into Kenya has been touted as a manifestation of an expanding market for hospitality industry products in the country.

Some of the institutions that offer hospitality courses include Kenya Utalii College, Moi University, Kenya Methodist

University, Kenyatta University, Strathmore, University, Mt Kenya University, Daystar University and Gretsas University. Some of these institutions like the Kenya Utalii College, Kenyatta University and Gretsas University have their own stand-alone hotels to facilitate training.

Kenyatta University owns the North Coast Beach Hotel in Mombasa while Gretsas owns Sagret Hotel in Nairobi where the students go for practicals.

“Such opportunities and facilities allow us as an institution to give the students the real experience of the industry which goes far beyond mere theoretical work,” said Gretsas Vice-Chancellor Peter Thuo.

Prof. Thuo noted that the institution was aware of the lucrative hospitality industry and has thus made it their flagship course in the budding institution.

Government reports indicate that one in ten Kenyans depends on the tourism industry for their livelihood.

Some of the courses in this industry include hospitality management, travel and tourism management, food production, hotel management, food and beverage services, and sales. Other renowned institutions that offer the courses include Zetech College, Nairobi Aviation College, Amboseli Institute of Hospitality and Technology, Sheraton Catering College, and Jasmine School of Catering Nairobi, among others.

39. Which of the following is true according to the first paragraph?
- The hospitality industry has been growing since last year
 - The hotel industry has risen gradually from strength to strength
 - The hospitality industry anchors tourism over the years of tourism
 - Over the years the tourism has earned Kenya Shs. 100 billion
40. Which of the following is not found under the umbrella of hospitality industry?
- Restaurants
 - Event planning
 - Eats and drinks
 - Parking
41. “The hospitality sector is a broad category of fields” may mean: the hospitality sector
- Comprises a wide range of networks
 - Has many branches all over the country
 - Owns many hotels and a variety of businesses
 - Is a great employer
42. Which of the following is false according to the passage?
- The hospitality sector consists of one major department
 - The hospitality sector specializes in a wide range of networks
 - A couple of universities in the country own hotels at the coast
 - 10% of Kenyans depend on the tourism industry
43. Which of the following universities does not only offer hospitality courses but also have their own hotels?
- Gretsas and Mt. Kenya
 - Utalii and Mount Kenya
 - Utalii and Kenyatta
 - Sagret and North Coast Beach Hotel
44. The following are some of the courses in the hospitality industry. Which one is not?
- Tourism management
 - Hospitality management
 - Beverage services
 - Outside catering
45. The word renowned has been underlined. Which of the following is its opposite?
- Unknown
 - Unfamous
 - Unpopular
 - Celebrated
46. Why do the institutions that own their own stand alone hotels have an upper hand?
- Students get the real experience which goes beyond theory
 - They get money since the tourists pay well
 - The hotel business is lucrative
 - The institutions are more advanced than the others
47. The word “lucrative” has been underlined. Which of the following words can be used as its synonym?
- Looming
 - Well paying
 - Booming
 - Large
48. Which institution has been referred to as “the budding institutions”?
- Lucrative industry
 - Gretsas University
 - Kenyatta University
 - Sagret Hotel
49. Which proverb can be used to advise institutions that do not have their own stand alone hotels?
- Slow but sure wins the race
 - More haste less speed
 - Faith without action is dead
 - Practise makes perfect
50. The best title for this passage would be
- Tourism and hotels
 - Training staff for hotel industry
 - Institutions offering training
 - Opportunities in the hospitality industry

GOLDEN SERIES

DARASA LA NANE - 2014

KRY
007

INSHA

NAMBARI YAKO YA MTIHANI	
JINA YAKO	
JINA YA SHULE YAKO	

KISWAHILI

SEHEMU YA PILI: INSHA

MUDA: DAKIKA 40

SOMA KWA MAKINI MAAGIZO YAFUATAYO

1. Katika nafasi ulizopewa, andika Nambari yako ya mitihani. Jina lako, Jina la Shule.

Ufuatao ni mwanzo wa insha. Ikamilishe kwa maneno yako huku ukiifanya kuwa ya kulisimua zaidi.

Sisi vijana mara kwa mara tunahimizwa tuepukane na dawa za kulevya. Dawa hizi kwa jina jingine mihadarati.....

.....

GOLDEN SERIES

DARASA LA NANE - 2014

KRY
007

KISWAHILI

MUDA: SAA 1 DAKIKA 40

Soma vifungu vifuatavyo. Vina nafasi 1-15. Kwa kila nafasi umepewa majibu manne. Chagua jibu lifaalo zaidi kujaza nafasi

Hapo kale Papa na Kima walikuwa 1 wa chanda na pete na 2 walivyotangamana, katika kila walilolifanya ungalidhani ni kifo tu kingaliwatenganisha. Watu wote katika kijiji 3 Tushauriane, walijua urafiki huo na mara kwa mara 4. Hata hivyo, kwa muda mrefu, urafiki wao ulidumu kwani ulijengwa katika misingi ya uaminifu, upendo na kujaliana masilahi.

Marafiki hao 5 mfano katika masimulizi ukafika wakati 6 7 Papa aliugua sana. Fununu zikaenea 8 kwamba mzee huyo alikuwa mahututi.

- | | | | |
|----------------------|------------------|-------------------|---------------------|
| 1. A. mahasimu | B. maadui | C. masaibu | D. masahibu |
| 2. A. ungewaona | B. ungaliwaona | C. ungelwaona | D. hungewaona |
| 3. A. walimoishi | B. walipoishi | C. walikoishi | D. walioishi |
| 4. A. waliwalia ngoa | B. walikata ngoa | C. waliwaona ngoa | D. waliwalilia ngoa |
| 5. A. walipigwa | B. walipigishwa | C. walipigiwa | D. waliwapiga |
| 6. A. ambao | B. ambapo | C. ambako | D. ambamo |
| 7. A. babake | B. babaye | C. babae | D. babao |
| 8. A. pote | B. kwote | C. popote | D. kote |

Ni jambo la 9 kwa mwanafunzi 10 na nidhamu, bidii na uwajibikaji iwapo angetaka kufanikiwa. Wanafunzi wanatakiwa 11 na wenzao ili kuongezeana maarifa 12 si kwa kupotoshana. Kamwe mwanafunzi yeyote yule, 13 nafsini mwake 14 anaweza kufanikiwa 15.

- | | | | |
|---------------------|----------------|------------------|------------------|
| 9. A. muhimu | B. muhali | C. hiari | D. dharau |
| 10. A. kua | B. kukuwa | C. kuwa | D. kutokuwa |
| 11. A. kutangamana | B. kutangana | C. kutengena | D. kutangaa |
| 12. A. na | B. wala | C. hata | D. ilhali |
| 13. A. asiidanganye | B. asidanganye | C. asijidanganye | D. asim danganye |
| 14. A. kua | B. yakuwa | C. ya kwamba | D. kwamba |
| 15. A. peke yake | B. pekee yake | C. peke | D. upekee |

Kutoka nambari 16 - 18, jibu kila swali kulingana na maagizo

- | | |
|--|---|
| 16. Chagua sentensi iliyo na po ya mahali
A. Aliposimama sote tulishangilia
B. Azungumzapo wote humkosoa
C. Alipofika nilikuwa nimelala kitandani
D. Popote uendapo utaonekana | A. uthabiti, uwezo, uwepo
B. kinyama, hobelahobela, kijeuri
C. lau, laiti, aghalabu
D. minghairi, jeupe, jangili |
| 17. Chagua sentensi iliyoakifishwa vizuri
A. Lo! kumbe alikuwa mwizi!
B. Lo! kumbe alikuwa mwizi.
C. Lo kumbe alokuwa mwizi
D. Lo, kumbe alikuwa mwizi | 19. Chagua sentensi iliyotumia sitiari
A. Babake ni simba, hutamtembelea
B. Baada ya hua zile zote wote waliliangoa
C. Chuo kicho hicho kilimzawadi shahda
D. Walipopokea habari hizo walidondokwa na machozi |
| 18. Chagua kundi ambalo ni la vielezi tupu | 20. Teua kundi lenye vimelea pekee
A. Tekenya, jana, kiwavi
B. utitiri, kirobototo, tekenya |

- C. kitungule, minyoo, nirihi
D. kimatu, maige, tunutu
21. **Tambua ukubwa wa wingi wa sentensi hii**
Mwanamume huyu ana umbo kubwa
A. Janadume huyu ana umbo kubwa
B. Wanaume hawa wana maumbo makubwa
C. Majanaume haya yana majumbo makubwa
D. Vijanaume hivi vina vijumba vikumbwa
22. Ni sentensi gani kati ya hizi haiainishi maana ya neno 'PAA'
A. ndege ilianguka muda mfupi baada ya kupaa angani
B. Dhoruba kali ilibomoa paa la ikulu ya rais
C. Mbwa mwitu alimfukuza paa lakini hakumkuta
D. Paa iliyo ndani ya kitabu chake ni kizuri
23. Chombo ambacho hutumiwa kuwabebea wachezaji kutoka uwanjani wanapoumia wakati wa mchezo wa kandanda huitwa?
A. Msondo
B. Machela
C. Bikari
D. Dahalia
24. Chagua orodhoa yenye visawe pekee
A. Aibu, haya, tahayuri, soni
B. Baa, vaa, faa
C. Kipofu, kibofu, kibovu, kipovu
D. Dhalili, zuzu, hamaki, jaa
25. Ni sentensi ipi iliyoandikwa kwa wakati timilifu
A. kisu kinolewacho hupata makali
B. Ikiwa alifanya kazi lazima alipwe
C. Bendera hufuata upepo
D. Amewasili katika uwanja wa ndege muda mfupi
- uliopita
26. Wakati wa mashindano ya kombe la Dunia, Naimar alianguka na kuvunjika viungo vya mwili. Ili kuunganisha viungo hivi vya mwili Naimar alipelekwa kwa:-
A. Nyakanga
B. kungwi
C. mhazigi
D. ngariba
27. Sentensi, "Asingepata shida asingeomba msaada" ina maana kuwa:-
A. hakuwa na shida lakini alitaka msaada
B. shida ndiyo ilimfanya kuomba msaada
C. alipata shida lakini hakuhitaji msaada
D. hakupata shida wala kuhitaji msaada
28. "Nitaondoka sasa", mgeni alisema kwa usemi wa taarifa ni:-
A. Mgeni alisema angeondoka wakati huo
B. Mgeni alisema angeondoka saa hiyo
C. Mgeni alisema ataondoka wakati huo
D. Mgeni alisema kuwa anaondoka wakati huo
29. Ugonjwa wa kukojoa damu unaosababishwa na vijidudu vya konokono huitwa:-
A. kisonono
B. kichocho
C. kimeta
D. kiharusi
30. Ni methali ipi iliyo na maana na maelezo yafuatayo; Amfanyiaye mzaha mwenye ila fulani kwa ajili ya ila hiyo akae akielewa kuwa ipo siku yatampata yale yale ayachekayo
A. Uzuri wa mkakasi ndani kipande cha mti
B. Achekaye kilema hafi hakijamfika
C. Mcheza hawi kilema, ngoma yataka matao
D. Mkataa mchinjo hupata mtanda

Soma habari ifuatayo kisha ujibu maswali 31-40

Abiud, Mose na na Kim walikuwa wamemaliza kulinadhifi darasa lao. Tuseme ndivyo walivyofikiwa wao. Walikuwa wamepiga deki wakafuta madirisha, wakaisugua sakafu, wanaiosha na kuikauisha kwa kutumia matambara. Kitu nazo zilikuwa zimefutwa maandishi zikaoshwa kwa maji na sabuni. Vijana wetu hawa walikuwa wametoshaka na kazi yao. Walimsubili mwalimu wa zamu kwa hamu kuja kuikagua kazi yao ili wapate nafasi ya kwenda uwanjani kucheza.

"Bwana Msafi", jina la msimbo alilopewa mwalimu huyu, alifika. Aliwakuta vijana hawa mlangoni. Aliyobasamu na kuwaambia "Aha, naona mambo ni mazuri leo".

Nyoyo za wale vijana zikajawa na furaha. Wanajua hawangecheleweshwa. Bwana Usafi alizikagua sehemu sote, tangu dani, madirisha na kuta ak sakafu alionyesha kutolidhika kwake kwa kusonya. "Viajana, hakuna kazi iliyofanyika hapa..! Jaribuni tena. Nataka nikija nijiangalia na kujiona kwenye sakafu hii". Alipmaliza kusema hivi, Bwana Usafi aliondoka.

Ghafla mchakacho wa viatu vya mwalimu usafi ulisikika ulielekea darasani kwao. Palizuka haraka za ajabu. Hata hivyo, hakuna geni lililowezezana. Walikutana na Bwana Usafi mlangoni. Kila mmoja alikuwa amebeba kifaa cha kunadhilifu.

Mose alikuwa na ndoo ya maji machafu, yale ya awali. Abiud alikuwa ufagio mrefu. Kim naye alishika tambara. Hayo yote yalikuwa ishara kuwa walikuwa wamemaliza kazi.

Bwana Usafi aliwaagiza waviweke chini vifaa vyao. "Mmefanya nilivyoagiza"? Mwalimu aliuliza na kabla ya kupata jawabu, akaendelea. "Mhn! Naam hivi ndivyo kazi inapaswa kufanywa. Hata kama siwezi kujianglaia sakafuni, mmejita hidi. Mnaweza kwenda uwanjani". Marafiki wale watatu walipigwa na mshangao wasijue la kufanya. Waliga pale pale mlangoni. "Aha hamtaki kwenda? Basi nitawapa kazi zaidi". Hapo hawakuhitaji ushawisha zaidi. Waliondoka mbio. Kila mmoja alikuwa anawaza juu ya jambo hilo moja. Walipofika uwanjani waliangua kicheko wakagaragara nyasini.

- 31. Mwalimu wa zamu alitwa Bwana Usafi kwa sababu gani?
 - A. Ndilo jina alilobatizwa
 - B. Alipenda na kuisitiza hali ya usafi
 - C. Kwake kulikuwa na usafi mwingi
 - D. Alizoea kusafisha nguo zake
- 32. Vijana hawa walikuwa wamejitahidi kwani _____
 - A. sakafu ilikuwa iking'aa kama kioo
 - B. sakafu pekee ilikuwa imeoshwa
 - C. sakafu, dari, kuta na madirisha yalikuwa safi
 - D. sakafu, dari na dirisha ilikuwa safi
- 33. Wanafunzi hawa walikemewa kwa sababu:
 - A. Bwana Usafi alikuwa mkali sana
 - B. Walikuwa wamejitahidi hadi ukomo wao
 - C. Hawakupenda kucheleva kwenda uwanjani
 - D. Hawakupendelea kuosha darasa
- 34. Sakafu ya darasa ilikuwa katika hali gani?
 - A. Haingesafishika kwa sababu ilikuwa imezoea kuoshwa vibaya
 - B. Sakafu ilikuwa inachafuliwa siku zote
 - C. Sakafu ilikuwa na vishimo vishimo
 - D. Sakafu ilikuwa na tope siku zote
- 35. Kim alipendekeza wafanye nini?
 - A. Wamhepe Bwana Usafi
 - B. Wasioshe sakafu tena
 - C. Wamwambie mwalimu Usafi wamechoka.
 - D. Wakatafute maji zaidi kwa darada jirani
- 36. Bwana Usafi aliwakuta wanafunzi katika hali gani?
 - A. Hali ya kuogofya
 - B. Hali ya usafi
 - C. Wakiwa wameiosha sakafu tena
 - D. Wasiwasi na vifaa vyao mikononi
- 37. Je, mwalimu hatimaye alitosheka kwa kazi iliyofanywa?
 - A. Ndiyo
 - B. La
 - C. Ndio
 - D. Hatujaeleza
- 38. Maana ya jina la msimbo ni
 - A. Jina la mtu kwa ufupi
 - B. Jina la utani
 - C. Jina linaloitwa mtu kulingana na tabia zake
 - D. Jina la mtaani
- 39. Wanafunzi hawa watatu walitamani kwenda wapi?
 - A. uwanjani kucheza
 - B. nyumbani
 - C. likizoni
 - C. fungate
- 40. Ni methali gani inalingana na makala haya?
 - A. Inda ya mbwa
 - B. Mwenye nguvu mpishe
 - C. Kiazi kimoja kikioza kuharibu nzima
 - D. Kawia ufike

Soma makala vafuatayo kisha uiibu maswali 41-50

Kabla ya jogoo wa kwanza kuwika, wanawake walikuwa tayari kuyainjika majungu mekoni. Ungewaona walivyobeba wakiyawekelea juu ya magoti na mapaja ili yabebeke!. We! walikuwa na bidii za mchwa. Waliubwaga wimbo wakifanya kazi zao hali ya kawaida ya Kiafrika. Hii iliendelea mpaka wakahakikisha kuwa mambo yote yalikuwa tayari. Hauchi, hauchi unakucha. Jua lilichomozwa kwa miale ya dhahabu ilivyovibusu vijeje vya mlima, nao umandukwenye nyasi ulimetameta metumetu kwa mimuliko hii ya miale. Uhai ulionekana kwani ungaliwasikia watoto wakilia, ng'ombe wakikoroma huku wakingoja kukamwa na kupelekwa malishoni.

Siku njema huonekana asubuhi. Tuliamba na kuuitandika vitanda na kuoga. Macho yetu yalijaa furaha siku hii.

Tulikula kiamsha kinywa na kungoja nguo zetu mpya za arusi, ambazo tuliweka vizuri baada ya kupigwa pasi jioni iliyopita. "Shikamoo mama mkuu" nilimwamkua. "Marahaba mwanangu, umeamkaje? salama salimini!".

Kiamboni mlijaa watu. Halati na majomba walikuwa wamefika kwa kusudi la kusaidia kazi asubuhi hii, nao shangazi na amu zangu walionekana wakishughulika katika hekaheka zao za mwisho wa matayarisho ya boma, ambapo sherehe yote jioni ingalifanyiwa. Amu yangu alikuwa anaona siku hii, kwa hivyo ilimbidi kufanya mambo halahala ili tukamchukue bibi arusi kutoka kwao. Sisi wasichana tuliangukia kuingia kwenye magari. Tulikuwa tumepambwa tukapambika na nguo zetu zilishukuana vizuri ungalidhani tu malaika. Wavulana hawakushindwa pia.

Tulifika kwa wau hapo saa tatu asubuhi, huku magari yakipiga honi na wanawake wakiimba kwa shangwe na hoihoi. Bi. arusi alijitokeza, mwanamke kidosho mwenye shingo ya upanga, macho ya kikombe aliyenyooka kama mwanzi! Uzuri huu ulifunikwa kwa ueli safi, halafu tukaingia magari na kuelekea kanisani.

Bui, na bi, harusi walifunga ndoa mnamo saa tano na nusu hivi. Tuliwapigia makofi kwa kupiga hatu akubwa maishani. Baadaye tulipigwa picha. Bi arusi na bauyaa. Bw. Harusi na bamkwe na mamkwe wake. Bw. arusi Bi arusi na wageni wote. Huu ulikuwa ni mkutano wa jamaa mbalimbali.

Shangazi zangu walipata wifu na amu zangu wengine wakapata shemeji. Mimi nilipata mkazahau. Tulifurahi kumpata mwanamke mwengine katika familia yetu.

Nyumba sherehe ilitia fora sana. Bw. na bi arusi walipata zawadi kemkem. Vyakula vitamu viliandualiwa, navyo nilifanya kudodokwa na mate kwa mbali. Mambo yalianza vizuri na kuisha vizuri pia, tulishukuru.

41. Anayetoa kisha hiki ni nani?
 - A. Msichana
 - B. Mvulana
 - C. Mama
 - D. Baba
42. Mama mkuu ni mamake
 - A. baba
 - B. mjomba
 - C. mama
 - D. nyanya
43. Ni sababu gani iliyowafanya watende mambo halahala?
 - A. Walikuwa wamechelewa
 - B. Walitaka kumaliza mapema
 - C. Wakamchukue Bi harusi
 - D. Walitaka kuingia magari na watu wote kabla
44. Chakula kipi kati ya hivi huchukuliwa aduhuli?
 - A. chajio
 - B. kishuka
 - C. uporo
 - D. staffahi
45. Ng'ombe hukoroma naye chui
 - A. huvuma
 - B. hulua
 - C. hubweka
 - D. hukotoma
46. Mwamu ni _____
 - A. mume wa dadangu
 - B. mpwa wa kakangu
 - C. mkazahau wa mjomba
 - D. ndugu wa kike
47. Maana ya hauchi hauchi unakucha ni?
 - A. Usiku ulionekana mrefu lakini kulikucha
 - B. Mchana wote mambo yalienda polepole
 - C. Usiku ulionekana mfupi kukakucha
 - D. Mchana wote mambo yaliendelea polepole
48. Kinyume cha neno jogoo ni
 - A. tembe
 - B. pora
 - C. koo
 - D. jimbi
49. Kufunga ndoa ni
 - A. kufungana
 - B. kuoana
 - C. kutaliki
 - D. kuenda fungate
50. Kichwa mwafaka cha makala haya ni
 - A. kabla ya jogoo kuwika
 - B. Bidii za mchwa
 - C. Arusi ya amu
 - D. Talaka ya halati

GOLDEN SERIES

STANDARD EIGHT - 2014

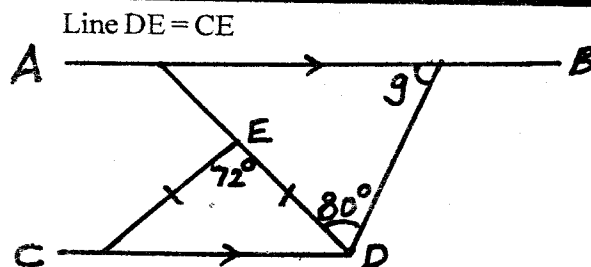
KRY
007

MATHEMATICS

Powered By: www.eeducationgroup.com

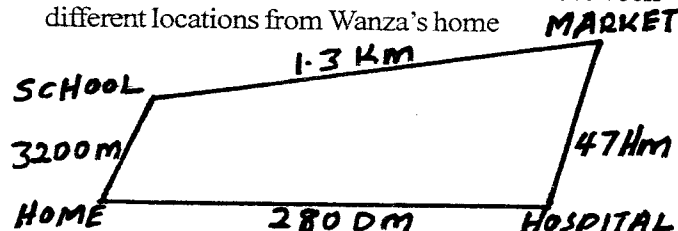
TIME 2: HOURS

- Which of the following is 3030701.71 in words?
A. Thirty million thirty thousand seven hundred and one and seventy one hundredths
B. Three million three hundred thousand seven hundred and one and seventy one hundredths
C. Three million, thirty thousand seven hundred and one and seventy one hundredths
D. Three million thirty thousand seven hundred and one and seventy one thousandths
- What is the value of $0.73362 \div 0.6$ Correct to 3 decimal places
A. 1.222 B. 1.227
C. 1.223 D. 1.228
- What is the value of $\frac{4.2 \times 7.0 \times 5.34}{0.98 \times 3.0 \times 1.78}$
A. 0.3 B. 3
C. 300 D. 30
- In a church the number of women was three times that of men. The children were 203 fewer than women. There were 421 children. How many more women than men attended the church?
A. 416 B. 103
C. 313 D. 832
- What is the value of x in the equation $\frac{1}{2}(x + 1) + \frac{1}{3}(2x - 1) = 5$
A. $4\frac{1}{7}$ B. $4\frac{3}{7}$
C. $4\frac{2}{7}$ D. $4\frac{1}{7}$
- A lorry has a mass of 7.7 tonnes when loaded with 75 bags of rice. There were 33 bags each with a mass of 85kg and the rest have mass of 45kg. What is the mass of the lorry when empty in tonnes?
A. 3.005t B. 4.85t
C. 12.395t D. 4.695t
- A trader bought 5 trays of eggs at Shs. 120 per tray. Ten eggs went and he sold the rest at Shs. 6 per egg. If a tray holds 30 eggs, what percentage profit did he make?
A. 40% B. $28\frac{3}{4}\%$
C. 50% D. 240%
- In the figure below, line AB is parallel to line CD.



Find the size of the angle marked g

- A. 72° B. 116°
C. 46° D. 108°
- Simplify the equation below
 $\frac{3(4q + 25) - 2(4q + 3r)}{2(3q - 4r) + 3(6r - 2q)}$
A. $\frac{q + 6r}{3q + 5r}$ B. $\frac{8q + 3r}{10r}$
C. $\frac{2q}{5r}$ D. $\frac{q}{3q - 5r}$
 - Wilson is two years older than Tom and three years younger than Jane. The sum of their ages is 64 years. If Wilson age is t, which one of the following equation can be used to get Wilson's age?
A. $3t + 1 = 64$ B. $3t - 5 = 64$
C. $3t - 1 = 64$ D. $3t + 5 = 64$
 - The mean mass of eight pupils is 39 kg. Six of the pupils have masses of 36 kg, 39 kg, 44 kg, 35 kg, 40 kg and 38 kg. If the remaining two pupils are of equal masses, what is the mode of the mass of the eight pupils?
A. 39 kg B. 36 kg
C. 40 kg D. 38 kg
 - The sketch drawn below shows distances between different locations from Wanza's home



If the sketch above was to be drawn on a piece of paper using the scale 1:50000. What will be the drawing length from her home to the market via hospital?

- A. 9cm B. 2.4cm
C. 15cm D. 1.5cm

13. The ratio of the number of boys to girls to adult at a function was 1:2:4 respectively. Six adults and four girls later went away. The number of adults who remained was 42. How many people were left in the function?

- A. 74 B. 42
C. 84 D. 80

14. Four tailor can make a certain number of dresses in 20 days. After working for two days, two more tailors are employed. How long will they take to make the dresses?

- A. 12 days B. 14 days
C. 10 days D. 18 days

15. What is the value of:


$\frac{3}{4} + \frac{1}{2} \times 2\frac{1}{2} - \frac{2}{3}$ of $\frac{7}{8} \div 1\frac{1}{4}$?

- A. $2\frac{7}{8}$ B. $1\frac{7}{15}$
C. $1\frac{8}{15}$ D. $2\frac{1}{2}$

16. Construct a quadrilateral EFGH such that angle EFG = 90°, line GH = 7cm, line FG = 5.3cm, line EH = 5.6cm and angle EHG = 70°. Join diagonal EG. Draw a perpendicular line from point H to cut line EG at point S. What is the measure of line ES?

- A. 2.5cm B. 3.6cm
C. 4.7cm D. 3.0cm

17. The diagram below represent Mkulima's chicken feeding trough



What is the total surface area of the trough?

- A. 6416cm² B. 3908cm²
C. 6108cm² D. 4216cm²

18. What is the value of x in the inequality;

$2\frac{1}{2}x + \frac{2}{3} > 6\frac{1}{2}$

- A. $x > 2\frac{1}{3}$ B. $x < 2\frac{1}{3}$
C. $x > 2\frac{13}{15}$ D. $x < 2\frac{13}{15}$

19. An aeroplane took 8 hrs 45 minutes to travel from London to Mombasa. If it reached Mombasa 0325hrs, on Tuesday, at what time had it left London?

- A. 6.40 am Monday B. 6.40pm Monday
C. 6.40am Tuesday D. 6.40pm Tuesday

20. What is the next number in the sequence below?

$1\frac{1}{5}, 1\frac{3}{5}, 2, 2\frac{2}{5}, \underline{\hspace{2cm}}$

- A. $2\frac{2}{5}$ B. 3
C. $3\frac{1}{25}$ D. $3\frac{4}{5}$

21. A salesman is given a salary of Shs. 17000 per month. He is also given a commission of 10% for the value of goods he sells upto Shs. 20000 and 15% above Shs. 20000. One month the salesman received a total of Shs. 25000. Calculate the amount of sales for that month

- A. Shs. 40000 B. Shs. 60000
C. Shs. 65000 D. Shs. 70000

22. Thirty five pupils were each given three - 5dl packets of milk. How many litres of milk did they get altogether?

- A. 17.5 B. 52.5
C. 10.5 D. 525

23. The table below shows bus fare from Karatina to Githurai. A man, his wife and their three children left Kenol for Karatina but still had to go to Githurai to pick up the children's grandma. After spending an evening in Karatina, they made a stop at Sagana on their way back to check on a business partner. They then went back to Kenol but the grandma went all the way to Thika

Karatina					
20	Sagana				
40	30	Makutano			
50	50	40	Kenol		
60	50	40	20	Thika	
80	60	50	40	30	Githurai

How much did the whole journey cost, if children paid half the fare charged?

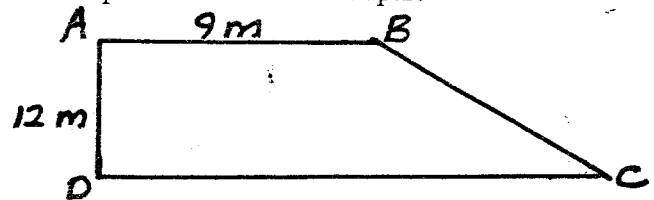
- A. Shs. 725 B. Shs. 825
C. Shs. 815 D. Shs. 855

24. What is the value of:

$\sqrt{1\frac{9}{16}} \times (\frac{2}{3})^2$

- A. $\frac{1}{3}$ B. $\frac{5}{9}$
C. $\frac{7}{9}$ D. $\frac{25}{24}$

25. The figure below shows Mr. Mueke's plot. Posts were put at intervals of 2m apart



If a gate of 4m is left, what is the total cost of the post if each one costs Shs. 100?

- A. Shs. 2600 B. Shs. 5000
C. Shs. 2400 D. Shs. 5400

26. Which set of measures below would not be used to construct a right angled triangle?

- A. 334m, 5m, 6.25m B. 26m, 10m, 24m
C. 21m, 72m, 75 D. 0.05m, 1.2m, 1.3m

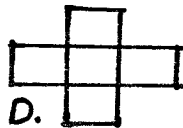
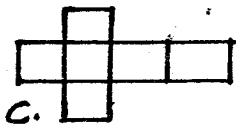
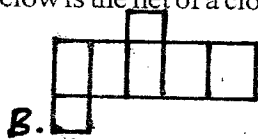
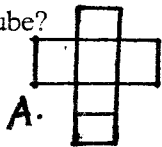
27. The marked price of a plasma T.V is Shs. 16200. Komu bought the T.V on cash terms and was given a 15% discount. Abdala bought the same type T.V on hire purchase terms whereby he paid Shs. 4860 as deposit and 8 equal monthly installments of Shs. 1620 each. How much more than Komu did Abdala pay?
 A. Shs. 4500 B. Shs. 4050
 C. Shs. 1620 D. Shs. 4455

28. What is the value of $\frac{2}{5}(3m + 2k^2) + 6n - \frac{n}{m}$ when;
 $m = k + 2, k = 3$ and $n = k^2 - m$
 A. $47\frac{1}{5}$ B. 21
 C. 19 D. $36\frac{2}{5}$

29. A passenger bus driving at 80km/hr was expected to arrive on time in town P, 400km away. After driving for two hours the bus got a puncture and it took 24 minutes to change the tyre. At what speed in km/hr would the bus be driven after changing the tyre if it had to arrive at the expected time?
 A. $92\frac{4}{13}$ km/hr B. 90km/hr
 C. 80km/hr D. $111\frac{1}{9}$ km/hr

30. The amount of water left in a tank was 2640 litres. This was after a family used 20% of the water on Monday. How much water was in the tank on Sunday?
 A. 2323.2 litres B. 2904 litres
 C. 3300 litres D. 1848 litres

31. Which of the nets shown below is the net of a closed cube?



32. Otuoma deposited Shs. 60000 in a bank that paid compound interest at the rate of 10% per annum. He withdrew all his money after $2\frac{1}{2}$ years. How much money did he withdraw?
 A. Shs. 75000 B. Shs. 75230
 C. Shs. 76230 D. Shs. 73630

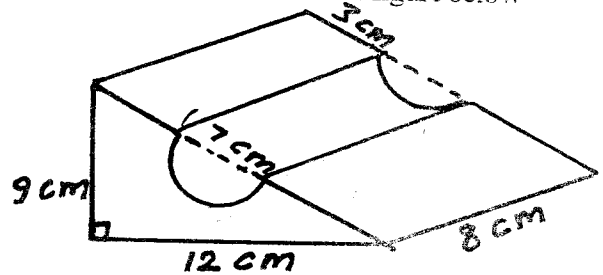
33. A teacher had a certain number of books. She gave $\frac{1}{3}$ of the books to John and $\frac{1}{4}$ to Lucy. She also gave $\frac{1}{10}$ of the remaining books to Patel. The teacher was left with 18 books. How many books had she given to Lucy?
 A. 48 B. 16 C. 12 D. 2

34. There are 75 benches in a hall. Each bench accommodates either 8 adults or 12 children. One

day $\frac{2}{5}$ of the benches were occupied by children and the rest by adults. How many people altogether were seated in the hall that day?

- A. 712 B. 740
 C. 780 D. 600

35. What is the volume of the figure below



- A. 114 cm³ B. 616 cm³
 C. 716 cm³ D. 278 cm³

36. Water gained heat of 10°C per minute for 6 minutes. It was then allowed to lose heat at 3°C per minute. What was its temperature after $\frac{1}{6}$ of an hour?
 A. 58°C B. 72°C
 C. 48°C D. 30°C

37. The table below represents sales of shoes by a trader in five days. The sale for Tuesday is not shown

Days	Mon	Tue	Wed	Thu	Fri
No. of shoes	10	-	6	9	7

One pair of shoes was sold at Shs. 1200. The trader got a total of Shs. 52800 for the sale of shoes during the five days. How many more pairs of shoes did the trader sell on Tuesday than on Friday?

- A. 14 B. 10 C. 5 D. 35

38. Which of the following is the correct order of the fractions $\frac{5}{9}, \frac{7}{12}, \frac{11}{20}$ and $\frac{9}{17}$ when arranged in ascending order?

- A. $\frac{7}{12}, \frac{5}{9}, \frac{11}{20}, \frac{9}{17}$
 B. $\frac{9}{17}, \frac{11}{20}, \frac{5}{9}, \frac{7}{12}$
 C. $\frac{9}{17}, \frac{5}{9}, \frac{11}{20}, \frac{7}{12}$
 D. $\frac{5}{9}, \frac{7}{12}, \frac{9}{17}, \frac{11}{20}$

39. A square of side 2 cm is cut from each earner of a rectangular paper measuring 8 cm by 12 cm. Which one of the following statements is true?

- A. The perimeter of the remaining paper is greater than the perimeter of the rectangular paper by 16cm
 B. The perimeter of the remaining paper is less than the perimeter of the rectangular paper by 16cm
 C. The perimeter of the rectangular paper is reduced by 8cm
 D. The perimeter of the remaining paper is equal to the perimeter of the rectangular paper

40. Which quadrilateral has all the properties listed below
 i) All sides are equal
 ii) Diagonals are equal
 iii) All angles are right angles
 iv) Diagonals bisect each other at right angle
 A. Square B. Trapezium
 C. Rectangle D. Rhombus

41. The stack below was glued and dipped in red paint. How many cubes had paint on three faces only?



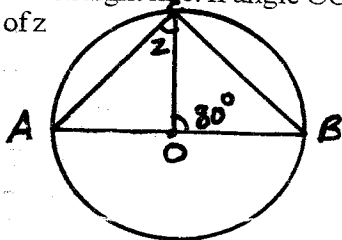
- A. 1 B. 8
 C. 12 D. 4

42. If 8th February 2005 was Tuesday, what day was it on 10th March the same year?
 A. Saturday B. Wednesday
 C. Friday D. Thursday

43. According to a survey, on average eight quails are hatched per minute whereas on average, three die per minute. What is the difference between the number of quails that are hatched and those that die in one and a half days?
 A. 6480 B. 1728
 C. 10800 D. 7200

44. The floor of a square room is covered completely by four equal square carpets. The area of each carpet is $2\frac{63}{81} \text{ m}^2$. What is the length of one side of the room in metres?
 A. $1\frac{2}{3} \text{ m}$ B. $6\frac{1}{9} \text{ m}$
 C. $3\frac{3}{9}$ D. $13\frac{3}{9} \text{ m}$

45. In the figure below O is the centre of the circle and AOB is a straight line. If angle COB is 80° , find the value of z



- A. 40° B. 104°
 C. 35° D. 60°

46. The table below shows the postal rates for sending money orders

Value of order (in sh)	Commission	
	Shs.	Cts.
Not exceeding 500	42	00
501 - 1000	114	00
1001 - 3000	174	00
3001 - 5000	209	00
5001 - 10000	295	00
10001 - 200000	441	00
200001 - 300000	617	00

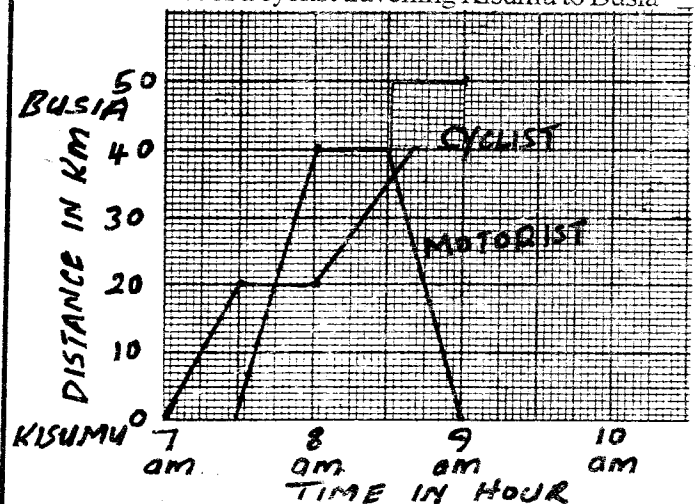
School fees for two children in the same school was Sh. 12500 and Shs. 15600. The father bought one money order to the total amount of fees. How much more would he have paid had he bought two separate money order for the fees?

- A. Shs. 441 B. Shs. 176
 C. Shs. 882 D. Shs. 265

47. How many faces (F), vertices (V) and edges (E) does a triangular pyramid have?

F	V	E
A. 4	4	6
B. 3	3	5
C. 3	4	6
D. 4	3	5

48. Below is a travel graph showing the journey of a motorist travelling from Kisumu to Busia and back, and that of a cyclist travelling Kisumu to Busia

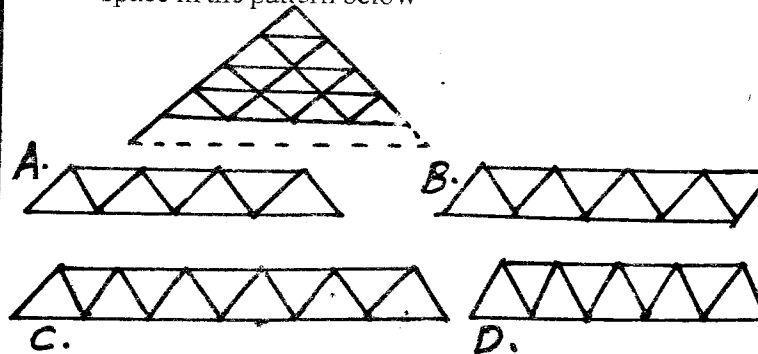


How far from Kisumu was the cyclist when he met the motorist travelling back to Kisumu?

- A. 40km B. 32km
 C. 20km D. 8km

49. Kinyanjui bought goods worth Shs. 2400. He gave the shopkeeper six 500 notes. He received the balance in equal number of 100 and 50 shilling notes. What was the total of Shs. 50 notes?
 A. 8 B. 4 C. 400 D. 600

50. Which of the following shapes would fit in the dotted space in the pattern below



GOLDEN SERIES

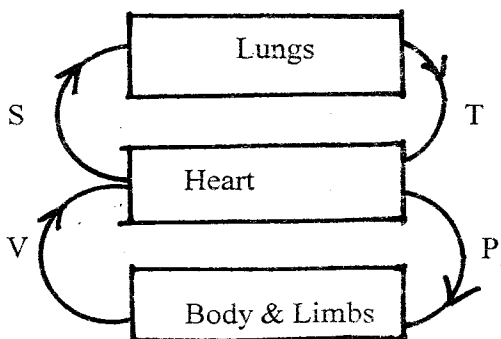
STANDARD EIGHT - 2014

KRY
007


SCIENCE

TIME: 1HR 40 MIN

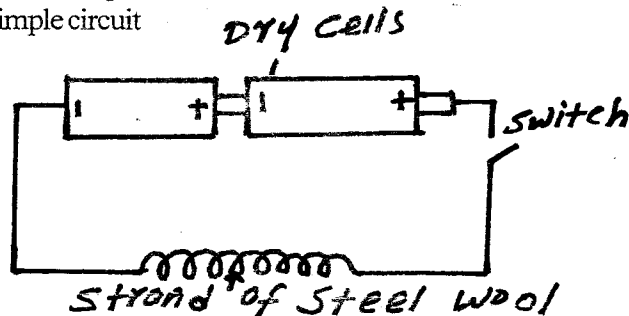
- Which one of the following does **NOT** describe the role of plasma as a component of blood?
A. It carries oxygen around the body
B. It distributes heat around the body
C. It carries waste products to the excretory organs
D. It carries digested food round the body
- The following are different ways of preventing the spread of malaria. Which one is **NOT**?
A. Draining stagnant water
B. Taking anti-malaria drugs
C. Sleeping under treated mosquito nets
D. Avoiding congested rooms
- Below are characteristics of a certain plant
i) *The plant grows in water*
ii) *The plant has chlorophyll*
iii) *The plant reproduces by cell division*
The plant described above is likely to be:-
A. Liverworts B. Algae
C. Moss D. Fern
- Below are advantages of a certain method of grazing
i) *livestock cannot get diseases easily*
ii) *there is maximum use of feeds*
iii) *manure is easily collected*
Which method of grazing is described above?
A. Strip grazing B. Stall feeding
C. Paddock D. Tethering
- The following are characteristics of plants:
i) *brightly coloured petals*
ii) *sticky stigma* iii) *produce nectar*
iv) *anthers hang out*
v) *produce a lot of pollen*
vi) *have scent*
Which among these are the characteristics of an insect pollinated flower?
A. i, vi, iv, v B. i, ii, iii, iv
C. vi, iii, ii, i D. iii, i, iv, vi
- The following diagram represents a simplified blood circulatory system



- Which blood vessels carries deoxygenated blood?
A. V and P B. V and T
C. V and S D. S and P
- Which one of the following is a safety measure against lightning?
A. Not sheltering under trees when raining
B. Not fitting lightning arrestors
C. Walking in open fields when it is raining
D. Standing next to a tree as you harvest water
- The diagram below shows a type of lever



- Which of the following set of levers are in the same group as the one shown?
A. Charcoal tongs, oar, broom
B. Oar, nut cracker, sea saw
C. Crow bar, claw hammer, human arm
D. Human foot, door hinge, wheelbarrow
- The following are disadvantages of using hard water. Which one is **NOT**?
A. Hard water discolours white garments
B. Hard water has calcium for strong bones
C. Hard water wastes soap during laundry
D. Hard water forms scum which blocks pipes
- Which one of the following does **NOT** explain how xerophytes survive in their habitats?
A. They shed their leaves
B. They have broad leaves
C. They have succulent stems
D. They have deep roots
- The set up shown below can be used to make a simple circuit



Which one of the following shows the energy

transformation that takes place in the set-up?

- A. chemical → heat → electrical → light
- B. chemical → electrical → heat → light
- C. electrical → chemical → heat → light
- D. heat → electrical → light → chemical

12. Which group shows field pests only?
- A. Aphids, monkey and stalkborers
 - B. Weevils, monkeys and termites
 - C. Cutworms, aphids and white ants
 - D. Birds, stalkborers and moths
13. A certain child had the following symptoms
- i) *Thin and weak*
 - ii) *pot - bellied*
 - iii) *swelling on the face*
 - iv) *brownish hair*


Which of the following foods was the child missing?

- A. Lemons, carrots, mangoes
- B. Meat, spinach, oranges
- C. Beans, fish, groundnuts
- D. Maize, potatoes, rice

14. Which of the following shows a pair of narcotic drugs in Kenya?

- A. khat and bhang
- B. heroine and alcohol
- C. bhang and tobacco
- D. mandrax and cocaine

15. A plastic cup was inverted over water as shown below. It was observed that the water did not enter the cup



Which one of the following could be one to make the water enter the cup?

- A. Pushing the cup to the bottom
- B. Adding more water to the basin
- C. Reducing the size of the cup
- D. Making a hole at the bottom of the cup

16. The following are myths and misconceptions about HIV and AIDs which one is NOT?

- A. HIV and AIDs is caused by witchcraft
- B. HIV /AIDs is a punishment from God
- C. HIV and AIDs has no curse
- D. HIV/AIDs is a curse from ancestors

17. Which of the following is an effect of parasites on the quality of livestock products?

- A. Poor eating habits leading to low milk production in dairy
- B. Perforation of the skins in animals
- C. Tapeworms affect the quality of meat
- D. The skin of animals being grossy and shinny

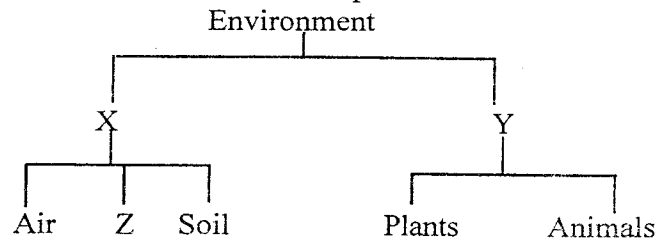
18. The following are correct statements about premolars. Which one is NOT?

- A. They are eight in number
- B. They have two roots

C. They are part of the milk teeth

D. They are used for biting food

19. The chart below shows how standard seven pupils classified the various components of the environment



In the table below the correct identities of X, Y and Z are

X	Y	Z
A. water	Abiotic	Biotic
B. Abiotic	Biotic	Water
C. Biotic	Water	Abiotic
D. Biotic	Abiotic	Water

20. Which of the following forms of energy require no medium to travel?

- A. Sound and electricity
- B. Heat and sound
- C. Heat and light
- D. Light and electricity

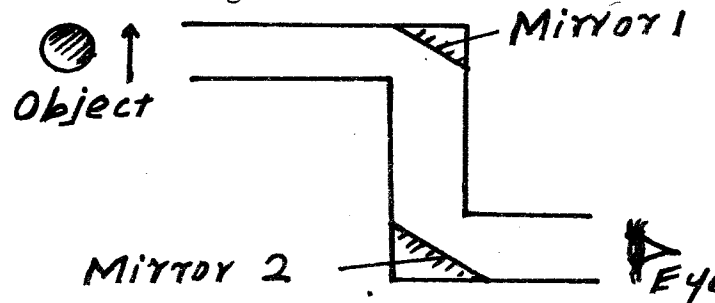
21. A certain animal has the following characteristic

- i) *has a varying body temperature*
- ii) *has external fertilization*
- iii) *lays eggs in water*

Which of the following animals does NOT have the above characteristics?

- A. Frog
- B. Chameleon
- C. Tilapia
- D. Salamander

22. The diagram below shows an instrument Std 6 pupils made during their science lesson



The above instrument works on the fact that:

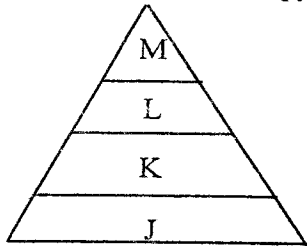
- A. Light travels in all directions
- B. Light changes speed as it moves from one medium to another
- C. Light travels on a straight line
- D. Light can be broken into different colours

23. The following statements about compost manure are true. Which one is NOT?

- A. The compost heap should be turned regularly to allow air circulation
- B. The composite heap should be kept wet for easy action of bacteria
- C. The compost heap should be covered during the rainy season
- D. A layer of top soil should be added to the compost

to introduce bacteria

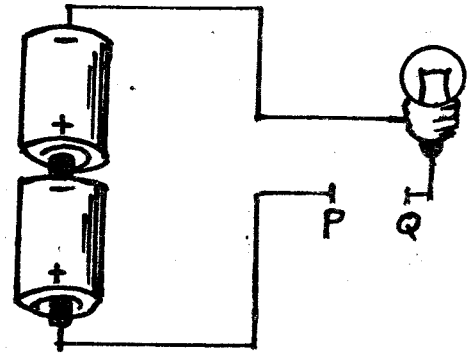
24. Which of the following shows the excretory products of the kidney?
- Urea, excess water, excess salt
 - Carbon dioxide, excess water, excess salts
 - Urea, excess salts, water vapour
 - Excess water, carbon dioxide, urea
25. Which one of the following statements does NOT show ways of conserving water?
- To harvest water for future use
 - To use all until exhausted
 - Improving the cleanliness of water
 - Practising good farming habits in the water catchments areas
26. The diagram below shows a food pyramid



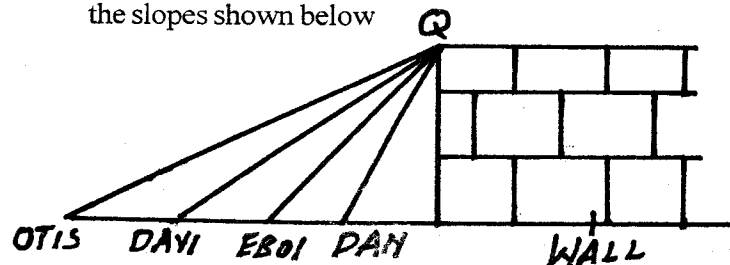
Which one of the following animals can fit at part marked L?

- | | |
|----------|----------|
| A. Lion | B. Cow |
| C. Zebra | D. Hyena |
27. Which of the following groups consists of non-magnetic materials only?
- Iron, cobalt and steel
 - Nickel, alnico and aluminium
 - Copper, aluminium and silver
 - Steel, iron and aluminium
28. Which one of the following is NOT correct about digestion?
- The stomach absorbs vitamins and glucose
 - The rectum stores undigested food
 - The ileum absorbs water and mineral salts
 - The stomach digests milk and eggs
29. Which one of the following shows animals of the same group?
- Shark, mudfish, lizard, turtle
 - Salamander, newt, chameleon, tilapia
 - Toad, newt, frog, salamander
 - Lizard, frog, newt, chameleon
30. Three of the following statements are true about images in a plane mirror EXCEPT:
- they are formed on the surface of the mirror
 - they are always equal to the object
 - they are always upright
 - they are always literally inverted
31. The pistil of a flower is made up of:-
- anther, stigma, filament and style
 - style, stigma, ovary and ovules
 - ovules, ovary, anther and stigma
 - petals, style, sepals and stigma

Standard seven pupils made the circuit shown below



32. Which of the following is compound fertilizer?
- Double ammonium phosphate
 - Sulphate of ammonia
 - Sodium Nitrate
 - Blood meal
33. Which of the following materials when placed between P and Q will not make the bulb light?
- | | |
|----------------|---------------|
| A. salty water | B. Carbon rod |
| C. Graphite | D. Glass rod |
34. Aluminium and not iron is used when making cooking pans. Which of the statements below shows the reason?
- Iron is more expensive than aluminium
 - Aluminium cooking pans last longer and are lighter
 - Aluminium is cheaper than iron and lasts longer
 - Aluminium does not rust easily and is a good conductor of heat
35. Which one of the following is NOT a function of the placenta?
- Protects the baby from shock
 - Provide nourishment to the foetus
 - Transports oxygenated blood to the embryo
 - Transport waste products from the embryo
36. Which of the following ways can help in preventing food poisoning?
- Re-heating cooked food
 - Eating freshly cooked food
 - Eating raw food
 - Adding salt to food
37. Std. 7 pupils from Mwisho wa Lami Primary made the slopes shown below



If the pupils climbed the wall using the slopes shown above to Q it is NOT correct to say

- Dan used the greatest effort
- Otis did the least amount of work
- Dan had the shortest effort distance
- Davi applied less effort than Eboi

38. During infant immunization schedule, which vaccines are given at birth?
- Polio and measles vaccines
 - DPT and polio vaccines
 - TB and polio vaccines
 - Measles and TB vaccines

39. Below are characteristics of a sexually transmitted infection;

- pain when passing urine*
- pus comes out of penis or vagina*
- difficulty in passing urine*
- pregnant mother pass it to foetus leading to child's blindness*


The disease described above is likely to be:

- Gonorrhoea
 - Chancroid
 - Syphilis
 - Herpes
40. Daina wanted to separate a mixture of sugar from sand. Which of the following processes should she follow?
- Dissolve in water, decant, filter and evaporate
 - Filter, decant then evaporate
 - Dissolve in water, filter then evaporate
 - Dissolve in water, filter, evaporate then decant

41. Which one of the following shows a pair of parasites which can be controlled by a dosing gun?

- Roundworms and fleas
- Tsetseflies and threadworms
- Mites and ticks
- Liver fluke and tapeworm

42. The diagram below shows an experiment standard five pupils carried out during their science lesson



The methods of heat transfer that will make the wax melt are _____ respectively

- radiation and conduction
 - conduction and radiation
 - convection and conduction
 - convection and radiation
43. The following happen during inhalation except
- lungs get deflated
 - Diaphragm gets flattened
 - ribs move upwards
 - pressure in the thorax decreases
44. Std. six pupils were asked by their science teacher to give names to the planets with the following characteristics:
- The planet with two moons*
 - The planet with beautiful ring*

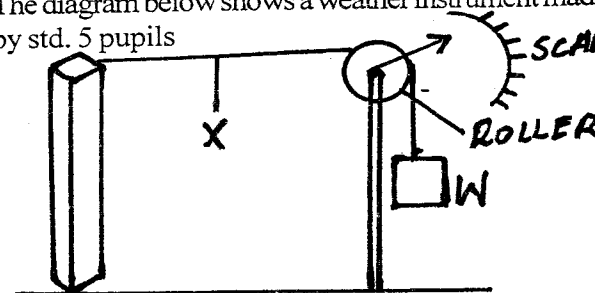
iii) *The planet which takes the longest time to go round the sun*

Among the following pupils who was correct?

- Mureithi - Mars, Saturn and Mercury
 - Jamleck - Venus, Mercury and Jupiter
 - Kibera - Mars, Saturn and Mercury
 - Drogba - Pluto, Saturn and Mars
45. The following are signs of ill health in crops. Which one is NOT?
- High rate of transpiration
 - Discolouration of leaves
 - Curled leaves
 - Wilting
46. The following is a description of a certain weed
- It is short*
 - It has sharp thorns on the stem*
 - It has purple flowers*
 - Its fruits are yellow when ripe*

Which of the following weeds is described above?

- Datura
 - Sodom Apple
 - Mexican marigold
 - Black jack
47. Which group below consists of translucent material only?
- Clean glass, dirty water, oiled paper and frosted glass
 - Dirty water, frosted glass, oiled paper and film
 - Mirror, wood, plastic ruler and cardboard
 - Window pane, magnifying glass, mirror and frosted glass
48. The diagram below shows a weather instrument made by std. 5 pupils



When the amount of moisture increases all the following take place EXCEPT:

- the part marked x expands
 - the part marked w goes down
 - the pointer moves upwards
 - the roller moves clockwise
49. Which of the following describes the function of urethra in male reproductive system?
- Produces semen in which sperms swim through
 - Produces male sex cells
 - Allows the sperms to pass from the testis
 - Carries urine and sperms outside the body
50. A bird that has a webbed feet is also likely to have
- a long thin curved beak
 - a short, strong and sharp beak
 - serrated long flat beak
 - sharp, strong curved claws

GOLDEN SERIES

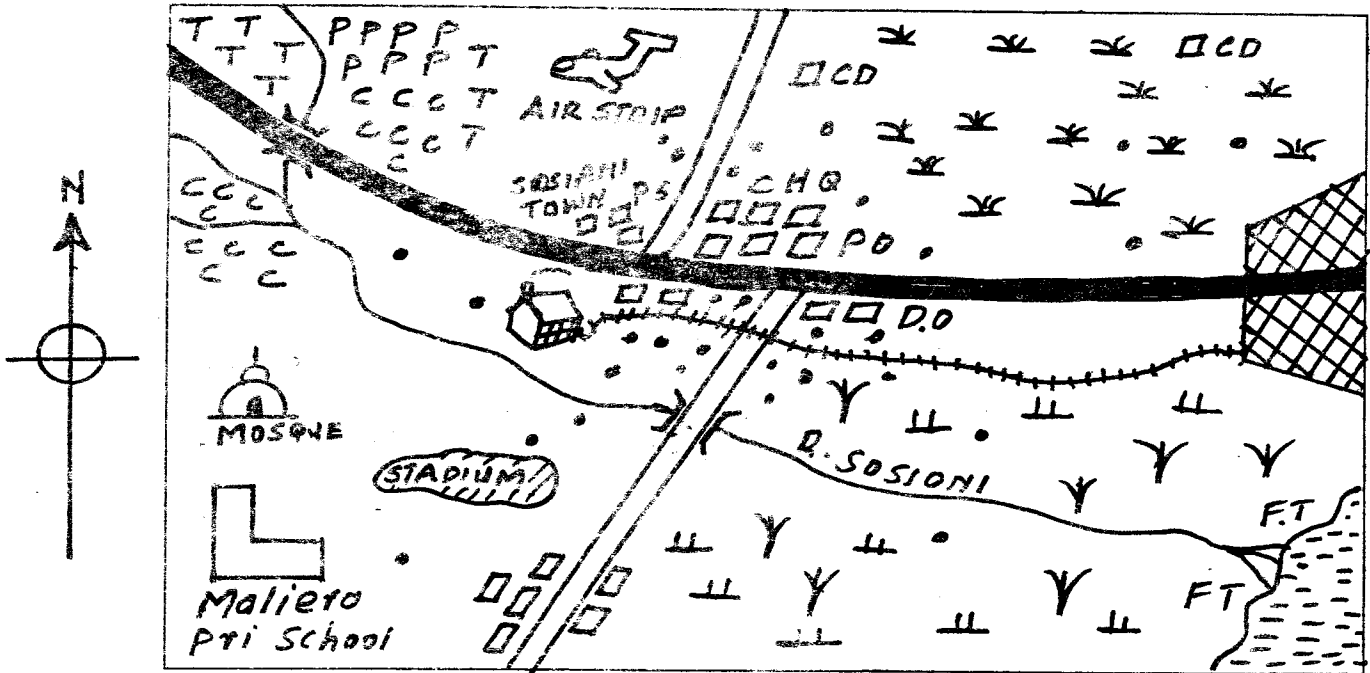
STANDARD EIGHT - 2014

KRY
007

SOCIAL STUDIES & CRE

TIME: 2HRS 15 MINS

SOSIANI AREA



KEY SCALE: 1CM REP 10KM

	Sisal processing factory		Tarmac road	<i>PS</i>	Police Station
	Scrubs	<i>CCC</i>	Coffee	<i>P.O</i>	Post Office
	Scattered dry trees	<i>PPP</i>	Pyrethrum	<i>••</i>	Settlement
	Sisal estate	<i>TTT</i>	Tea	<i>D.O</i>	District Office
	Grass	<i>FT</i>	Fish trap	<i>C.D</i>	Cattle Dip
	Permanent buildings	<i>CHQ</i>	County headquarters		

Use the map of Sosiani Area to answer questions 1-7

- The land of Sosiani Area rises from _____.
A. North West B. South West
C. North East D. South East
- The population around Sosiani town is generally high. This has been mainly influenced by _____.
A. good transport B. conducive climate
C. job opportunities D. road junction
- The climate in the Eastern part of the map is generally _____.
A. hot and dry B. cool and dry
C. hot and wet D. cool and wet
- The cheapest method of transporting sisal from the

estate to the factory is by _____

- road B. railway line
 - air D. water
- Three of the following economic activities are practised in Sosiani Area. Which one is not?
A. Communication B. Mining
C. Trade D. Fishing
 - The chief administrator of Sosiani Area is likely to be:-
A. Chief B. County Commission
C. Governor D. President
 - The leader of Sosiani Area wants to improve social services in the area. Which social service would the

citizens suggest first?

- A. Health
- B. Security
- C. Recreation
- D. Education

8. The following are communities found in Africa. Which one is found in Southern Africa?

- A. Shona
- B. Mande
- C. Griqua
- D. Beduins

9. Below are descriptions of a certain personality

- i) he came from Scotland
- ii) came looking for the sources of R. Nile
- iii) discovered Victoria Falls
- iv) died around L. Benguela in Central Africa

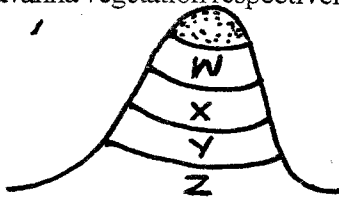
Who was he? _____

- A. Dr. David Livingstone
- B. Richard Burton
- C. John Speke
- D. Samuel Baker

10. Three of the following are positive effects of colonial rule in Africa. Which one is not?

- A. Improved social services in Africa
- B. Provision of modern education
- C. Development of infrastructure
- D. Loss of African culture

11. The diagram below represents a type of vegetation. Which vegetation bands represent bamboo and savanna vegetation respectively?



- A. w and z
- B. x and y
- C. w and y
- D. x and z

12. Which of the following is the main function of settlement schemes in Kenya?

- A. To reduce population pressure
- B. To settle the landless people
- C. To increase food production
- D. To increase agricultural output

13. The main role of every citizen in Kenya is to _____

- A. participating in project work
- B. supporting the government always
- C. obeying the laws
- D. reporting all law breakers

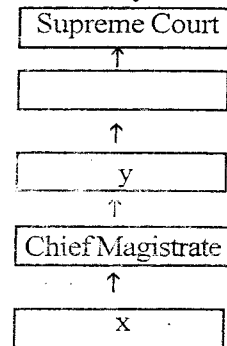
14. The greatest effects of HIV and AIDs on population growth of a country is that _____

- A. it affects more women than men
- B. it affects even the unborn babies
- C. many people are likely to die before the age of 40 years
- D. many young people die before they can reproduce

15. Three of the following are forms of human abuse. Which one would affect the life of a girl most?

- A. Exposing her to female genital mutilation
- B. Insulting her
- C. Denying her the right to express herself
- D. Denying her the right to join a political party

16. Below is a chart showing part of an organization of the court system in Kenya.



The courts represented by x and y respectively are

- A. Supreme court and court of Appeal
- B. Principal Magistrates Court and High Court
- C. Resident Magistrate Court and District Magistrate Court
- D. Court martial and High Court

17. Which one of the following is true about age group?

- A. Members belong to the same clan
- B. Members were born in the same period
- C. Members share common ancestors
- D. Members share the same house

18. E. A. C. promotes trade among member countries mainly by _____

- A. using a common currency
- B. removing taxes on locally produced goods
- C. lifting trade barriers such as taxes and tariffs
- D. encouraging production of identical goods

19. Workers can exercise their freedom to demonstrate only if _____

- A. they have been permitted by the police
- B. they want salary increase
- C. they demonstrate at their place of work
- D. they are peaceful and unarmed

20. Germans mainly live in urban areas because _____

- A. most people work in industries
- B. rural areas are not developed
- C. most people are educated
- D. majority of people are aged

21. Which one of the following factors has contributed most to the growth of Thika town?

- A. Many foreign investors in the town
- B. Setting up of industries in the town
- C. Presence of a railway line in the town
- D. Conducive climate for agriculture

22. Tourist who visit J. Nakuru ...

- D. Introduction of plantation farming
56. Which of the following communities had a dispersal point at Pubungu Pakwach during their migration?
- A. Cushites B. Highland Nilotes
C. Plain Nilotes D. River-Lake Nilotes
57. The following are statement about banana growing in Uganda. Which one is correct?
- A. They are grown under natural conditions
B. They are mainly for export
C. They are grown in the Northern parts of Uganda
D. Irrigation method is commonly used
58. The main factor influencing location of a bread making industry is _____
- A. presence of raw materials
B. good transport
C. high demand for breads
D. availability for cheap labour
59. The following statements are true about fishing in Japan except one. Which one?
- A. It has a large market for fish
B. There is ornamental use of some fish that are bred
C. Eels and trouts are bred in fish ponds and dams
D. There are no co. operatives as fishermen sell their fish individually
60. Three of the following officials are elected during the general election. Who is not?
- A. Governor
B. Youth Representative
C. County Representative
D. President

C.R.E.

61. According to the creation story, how was the earth in the beginning when God was creating the universe?
- A. It was good and perfect
B. It was spherical
C. It was without form, desolate and engulfed in darkness
D. It was full of water
62. The main reason why Noah built the ark was to make him able to _____
- A. fulfil God's wish B. worship God there
C. keep the animals D. hide his family
63. Abraham travelled to the land of _____ where he was going to offer sacrifice to God.
- A. Midian B. Moriah
C. Cannan D. Haran
64. Why did the Israelites eat bitter herbs on the night of Passover?
- A. To show they were in a hurry to leave
B. To show that they were God's people

- C. To show that God was with them
D. To remind them of their suffering
65. Why is the commandment of "love" known as the greatest?
- A. It is the gift of the Holy Spirit
B. It sums up the Ten commandments
C. It was given by Jesus
D. It was given by Moses
66. Which of the following became one of the kings of Israel?
- A. Jesse B. Jeroboam
C. Samson D. Samuel
67. "Your people shall be my people and your God, my God" who said these words and in which book of the Bible?
- A. Naomi in the book of Ruth
B. Naomi in the book of Esther
C. Ruth in the book of Ruth
D. Ruth in the book of Esther
68. Prophet Elisha told the Shunamite woman that she was going to have a son because she _____
- A. was a kind person
B. was a famous person
C. was a hardworking woman
D. she had asked for miracle
69. Which prophet prophesied the coming of The Holy Spirit?
- A. Micah B. Isaiah
C. Jeremiah D. Joel
70. Jesus was born and laid in a manger mainly because _____
- A. there was no room in the house
B. it was a Jewish tradition
C. the Angel instructed Mary to do so
D. it is not well known
71. Jesus had twelve disciples, who among the following were brothers?
- A. James and Andrew
B. Thomas and Matthew
C. Simon and Andrew
D. Bartholomew and Philip
72. Which of the following actions of Jesus shows that a leader is a servant?
- A. Washing the disciples feet
B. Visiting Lazarus home
C. Feeding the five thousand
D. Sharing the last supper
73. Jesus taught his disciples that they should deny themselves for the sake of the Gospel. This means _____
- A. They should endure suffering and sacrifice for the sake of Jesus

- B. They should not marry and have children
 C. They should abandon their family and not own property
 D. They should spend their time reading the Bible
74. Which of the following did Jesus **NOT** like the kingdom of heaven with?
 A. The Great banquet B. The ten virgins
 C. The sower D. The mustard seed
75. When Jesus healed the blind man, he told him to go and wash in the pool of _____
 A. Siloam B. Jericho
 C. Bethsaida D. Cana
76. "I find no reason to condemn this man" (Luke 23:4) who among the following people said this during the trial of Jesus?
 A. Herod B. Pilate
 C. Caiphas D. The Sanhedrin
77. The two disciples on the way to Emmaus recognized the risen Christ when He _____
 A. entered the house with them
 B. broke the bread
 C. explained the scriptures to him
 D. asked them what they were talking about
78. I am a God fearing man from Philippi, a dealer in purple cloth, I welcomed Paul and his friends. Who am I?
 A. Aeneas B. Tabitha
 C. Lydia D. Priscilla and Aquilla
79. In Acts 4:32-35, the early church prepared for the coming of the Holy Spirit by doing all the following EXCEPT?
 A. Worshipping together
 B. Helping one another
 C. Praying
 D. Judging sinners
80. According to the Christian teaching, the main purpose of marriage is to _____
 A. provide companionship
 B. have children
 C. gain status in the society
 D. avoid immorality
81. One of the following activities does not promote cultural development. Which one is it?
 A. Telling traditional stories
 B. Visiting cultural centers
 C. Participating in cultural activities
 D. Visiting our friends
82. In some traditional African Communities, initiates lived in seclusion in order to be _____
 A. taught their duties B. take their duties
 C. marry D. punished
83. Which of the following traditional African practices is **NOT** acceptable to Christianity?
 A. Singing and dancing
 B. Sharing meat
 C. Forgiving one another
 D. Visiting diviners for help
84. Which one of the following ways of worshipping God is found in both Christianity and African Traditions?
 A. Singing and dancing
 B. Reading the Bible
 C. Singing using immoral gestures
 D. Sacrificing animals
85. Which one of the following statements best describes the practice of nepotism?
 A. Showing love and favoritism to our relatives
 B. Providing community service to an orphanage
 C. Giving food and clothes to the poor in our church
 D. Providing services to the people in our community
86. After Helena, a standard 8 pupil has bought a kg of sugar, the shopkeeper refuses to give her the correct change. As a Christian, the best action to take is _____
 A. cry about it B. forget about it
 C. ask for it D. shout for help
87. Your classmate Naaman does not carry lunch. As a Christian, which is the best action to take?
 A. Share your food with him
 B. Pray for him
 C. Tell the whole class about it
 D. Inform the teacher
88. You are in the middle of a cross country race and in position number two when suddenly you notice your opponent who is number one has fallen down and is in need of attention because he is badly hurt. What would you do as a Christian?
 A. I would stop and lay him on the road side and continue with the race
 B. I would stop to offer first aid thereafter seek medical support
 C. I would stop and start crying
 D. I would pass and pretend not to have noticed
89. We can show service to God through work by
 A. working in churches
 B. doing our work sincerely
 C. waiting for Him to tell us when to begin
 D. only working for money
90. According to Mathew 28:19-20, Jesus told his disciples to go everywhere in the world doing all the following except _____
 A. baptizing B. judging
 C. teaching D. converting people

presence of _____


- A. sandy beaches B. wildlife
C. hot springs D. pre-historic site
23. Which of the following events took place first?
A. Outbreak of Mau Mau
B. Nomination of Eliud Mathu to the Legislative Council
C. End of second world war
D. First Lancaster House conference
24. The shedding of leaves by trees before the coming of Europeans meant that:-
A. Dry season was beginning
B. Planting season was beginning
C. Drought was approaching
D. Cold season was about to start
25. Three of the following statements about road accidents in Kenya are true. Which one is not?
A. Accidents have effects on economy
B. Most accidents are caused by human error
C. Expansion of roads has led to decrease in accidents
D. Careless use of roads by pedestrians cause accidents

26. Which of the following fish farming areas is correctly matched with country it is located _____

Fish farming Area	County
A. Sagana	Kisumu
B. Kibos	Mombasa
C. Bamburi	Kirinyaga
D. Borabu	Nyamira

27. It is the duty of the Kenyan Police Service to _____
A. arrest law breakers
B. punish law breakers
C. rehabilitate criminals
D. convict law breakers
28. Pipeline was constructed from Mombasa to Kisumu to transport petroleum products in order to _____
A. ensure the product reaches Kisumu fast
B. reduce the cost and make oil transport fast
C. ensure the product is not stolen
D. save roads from destruction

Use the diagram below to answer questions 29

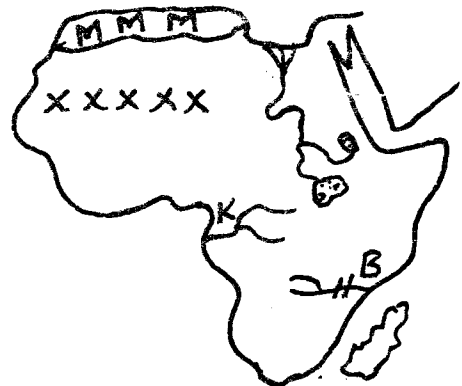


29. Which of the following lakes was not formed as a result of the above process?

- A. Lake paradise B. Catherine
C. Gallery D. Teleki


30. The following leaders are formed African presidents. Who among them was a great poet who wrote in support of African culture?
A. Kwame Nkuruma B. Jomo Kenyatta
C. Leopold Sedar Singhor D. Haile Selassie
31. The best way of learning about the origin of human beings is by _____
A. reading the history of the early visitors
B. learning from old people
C. reading story books
D. preserving human remains in museums
32. All cabinet meetings are chaired by _____
A. Head of civil service
B. Attorney General
C. President
D. Speaker of National Assembly
33. The most effective way of fighting corruption in Kenya is by _____
A. setting up open desks to report corruption
B. raising salaries of all civil servants
C. educating people on the effects of corruption
D. passing strict rules on corruption

Use the map to answer questions 34-37



34. Three of the following facts are correct about the river marked K except _____
A. it is the largest river in Africa
B. it has the greatest number of tributaries
C. its source is from Katanga plateau
D. it drains into Atlantic Ocean through delta
35. The main economic activity in the place marked xxxxx is _____
A. mining B. pastoralism
C. crop farming D. tourism
36. The climatic region marked mmm receives most of its rainfall in _____
A. summer B. autumn
C. winter D. spring
37. The river project marked B on the map was

- established mainly to _____
- A. boost agricultural production
 B. modifying the climate of the area
 C. attracting tourist in the country
 D. stimulate industrial development in the country.
38. Three of the following towns are served by the railway line except:-
 A. Voi
 B. Mtito Andei
 C. Gilgil
 D. Machakos
39. Three of the following are developments taking place in the pastoral areas. Which one is not?
 A. Advising them to increase their livestock
 B. Building boarding schools
 C. Sinking boreholes
 D. Providing veterinary services
40. The following are duties of the school committee in public primary schools. Which one is not?
 A. Assisting in admission of new pupils in school
 B. To employ more teaching staff
 C. Maintaining school traditions
 D. To initiate physical development
41. The following are results of the presence of Portuguese along East African Coast. Which one is not?
 A. Building of Fort Jesus
 B. Introduction of new crops
 C. Spread of Islamic religion in the area
 D. Destruction of some towns along the Coast
42. Who is the chairperson of the county Executive committee in a country _____
 A. Senator
 B. County representative
 C. Governor
 D. Member of parliament
43. The European powers used the following methods to establish colonial rule in Africa except _____
 A. persuading Africans to accept colonial rule
 B. Signing treaties with African leaders
 C. Use of force
 D. Use of company rule in colonies
44. The Kenyan parliament is a good example of a _____ democracy.
 A. direct
 B. indirect
 C. presidential
 D. nomination
45. Three of the following are conditions favouring dairy farming. Which one is not?
 A. Cool temperature
 B. Adequate and flat land
 C. Adequate pasture and fodder
 D. Tsetsefly free area
46. The following are descriptions of a mineral mined in Africa
 i) mineral using dredging method
 ii) used to manufacture papers

- iii) once exhausted it is naturally replenished
 The mineral described above is mined at _____
 A. Bamburi
 B. Kerio Valley
 C. Kariandusi
 D. L. Magadi
47. The following areas in Tanzania are known for large scale maize production. Which one is not?
 A. Arusha
 B. Moshi
 C. Handeni
 D. Mpwapwa
48. The following is a type of vegetation found in Africa beach, cork oak, fir and pine. Which vegetation region are we likely to find it _____
 A. Mediterranean
 B. Tropical Savannah
 C. Temperature high veld
 D. Mountain region
49. Which of the following communities migrated and settled around Mt. Kilimanjaro in Tanzania?
 A. Chagga
 B. Fipa
 C. Yao
 D. Wanyamwezi
50. The population distribution in Africa is mainly influenced by _____
 A. economic factor
 B. physical factor
 C. social factor
 D. religious factor
51. The organization which brings together countries that were colonized by British is _____
 A. United Nations
 B. Commonwealth of Nations
 C. East Africa community
 D. African Union
52. The road sign below warns the driver of _____

 A. slippery road
 B. animal crossing
 C. sharp bend ahead
 D. road narrowing ahead
53. The following statements are correct about equatorial vegetation. Which one is not?
 A. Trees are of medium height and forms a canopy
 B. There is little or no undergrowth
 C. Most trees have buttress roots
 D. Trees grow close together
54. Ghanians in their struggle for independence used the following methods except:-
 A. Organizing strikes and boy cotts
 B. Forming political parties
 C. Presenting their grievances in international meetings
 D. Waging guerilla warfare
55. The main factor that led to development of towns in Kenya during colonial period was _____
 A. construction of Kenya-Uganda railway
 B. establishing of processing industries
 C. Expansion of mining activities