

MAKUENI COUNTYPENPLUS
MAKUENI**STD 4 - TERM 3****ENGLISH**

Time 1 Hr 40 Mins

Read the passage below. It contains blank spaces numbered 1 to 15. For each blank space, choose the best answer from the choices given.

Hailu 1 a fifteen 2 old 3 lived 4 Ethiopia. His father was 5 and 6 boy lived with 7 mother. Both 8 them 9 very poor. Hailu 10 wondered 11 and 12 they 13 get 14 to 15.

1. A. is B. was C. have D. has
2. A. yearers B. years C. year D. yeary
3. A. whom B. who C. which D. whose
4. A. in B. on C. at D. of
5. A. die B. death C. died D. dead
6. A. a B. an C. the D. at
7. A. him B. his C. her D. it
8. A. of B. off C. over D. by
9. A. has B. is C. are D. were
10. A. rarely B. often C. hardly D. never
11. A. what B. where C. how D. which
12. A. where B. were C. there D. their
13. A. could B. would C. should D. but
14. A. nough B. enogh C. enough D. enugh
15. A. eating B. eats C. ate D. eat

Complete the below similes correctly.

16. As big as _____
A. an elephant B. the earth
C. a rock D. the sun
17. As quick as _____
A. runner B. marathon
C. fire D. lightning
18. As clear as _____
A. oil B. crystal
C. water D. mucus

Write the past tense of the given words.

19. Come _____
A. comed B. coming
C. came D. comes

20. Teach _____
A. teached B. taught
C. teach D. teaching
21. Laugh _____
A. laugh B. laughing
C. laughed D. laughter

Choose the plural of the given words.

22. Brush - _____
A. brushs B. brushing
C. brushes D. brush
23. Key - _____
A. key B. keys
C. keyis D. keyies
24. Chief - _____
A. chiefs B. chieves
C. cheif D. chieve

Which one is the odd one out.

25. A. paper B. plate
C. desk D. pen
26. A. motorcycle B. train
C. boat D. bus
27. A. sister B. aunt
C. niece D. bachelor
28. The young one of a lion is a _____
A. lioness B. lamb
C. cub D. calf
29. Hurry hurry has no _____
A. love B. arrival
C. blessings D. good
30. A person who sells milk is a _____
A. dairy B. milkman
C. milker D. dairyman

Read the passage below and then answer questions 31-40.

Out in the forest, a mother was gathering firewood. Soon, she planned to go home and prepare food for her family. She found some sticks and tied them together. Then she put them on her head. Her little baby was on her back. How she loved her little one! Yes, it took time to feed him. Sometimes he cried in the night. And always she had to watch him to see that he did not roll into the fire. But now he was close to her and it was good to feel him on her back.

The woman started down the path. She must hurry for already it was getting late. She wanted to cook maize for her family and they would all eat it together.

31. What was the mother doing in the forest?
A. Gathering firewood
B. Cooking maize
C. Meeting a lion
D. Looking after her baby
32. What did the woman do to the sticks she found?
A. She threw them away
B. She left them
C. She tied them together
D. She cut them
33. Where did the woman put the sticks? On her ____
A. Back B. Hands C. Chest D. Head
34. According to the passage the woman _____ her little one.
A. loved B. beat
C. hated D. cheered
35. The baby was a _____.
A. girl B. boy
C. man D. not told
36. She carried her baby on her _____.
A. head B. hands C. back D. legs
37. When did the baby cry?
A. During the day B. At night
C. In the morning D. In the evening
38. The woman wanted to cook _____ for the family.
A. beans B. rice C. maize D. ugali
39. The mother was gathering sticks in the _____.
A. woods B. forest
C. clearing D. plain
40. The **BEST** title for the passage is _____.
A. The mother and her baby
B. Collecting firewood
C. A good baby
D. In the forest

Read the passage below and then answer questions 41-50.

Long ago in the country of Kenya a teacher was travelling from Kisii to Kamagambo. "I do not want to walk all those fourteen miles," said the teacher to himself. "It is late in the afternoon and down by the river there are lions and hyenas. I can never reach home before dark.

"I am also afraid of people down there," the man continued "for I have heard that sometimes they kill people who walk by. Surely there will be one more bus today. At least one more bus. If I can get that bus, then everything will be alright". So the teacher stood by the road and waited and waited. But no bus came. The man listened closely, but he could not hear any bus. The sun was going down behind the hills and the birds were going to the trees to sleep. Still the teacher waited.

41. Which country is mentioned in the passage?
A. Tanzania B. Uganda
C. Kenya D. Mozambique
42. Who was travelling from Kisii to Kamagambo?
A. A doctor B. A driver
C. A nurse D. A teacher
43. How many miles was the person going to walk?
A. 16 B. 14 C. 10 D. 8
44. What time was the person travelling?
A. Afternoon B. Evening
C. Night D. Morning
45. Which animals were found down the river?
A. Hyenas B. Cheetahs
C. Elephants D. Snakes
46. A similar word for **afraid** is:-
A. loved B. used
C. tired D. scared
47. How many buses did the person think were remaining that day?
A. Two B. One
C. None D. Three
48. Where did the person stand to wait for the bus?
A. By the road B. At the road
C. Off the road D. On the road
49. Where were the birds going to sleep?
A. In holes B. On trees
C. In houses D. In bushes
50. The **BEST** title for the passage is:-
A. The birds B. The bus
C. The traveller D. The hyenas

WILAYA YA MAKUENI

DARASA LA NNE MUHULA WA TATU

PENPLUS
MAKUENI

KISWAHILI

Muda: Saa 1 Dakika 40

Chagua jibu linalofaa kujaza mapengo yalivoachwa wazi kutoka nambari 1-15.

Maisha ya 1 yalimfurahisha sana Kizito. Aliringa kama 2 kwa rafiki 3. Alicheka na kila 4 aliyemwona. Siku moja, Kizito 5 darasani aliulizwa aeleze punda ni 6. Kwanza alicheka 7 akasema 8 uchangamfu kuwa "punda ni noti 9 zikifungwa pamoja, yaani punda la noti". Kila mtu darasani 10 kicheko kama radi.

1. A. shule B. shuleni
C. kwa shule D. kwenye shule
2. A. teusi B. kasuku C. tausi D. tauni
3. A. wake B. wao C. wetu D. zake
4. A. moja B. watu C. mmoja D. kitu
5. A. akiwa B. akikuwa C. akikua D. awe
6. A. nani B. nini C. gani D. wapi
7. A. kisha B. kisa C. kicha D. alafu
8. A. na B. wa C. ni D. kwa
9. A. mingi B. mengi C. nyingi D. vingi
10. A. aliagua B. aliangua
C. aliungua D. aliugua


Mtoto 11 aliacha mchezo 12 alikuwa 13 na akafuata maneno 14 15.

11. A. ule B. yule C. wale D. vile
12. A. yake B. zake C. wake D. lake
13. A. anayo B. nalo C. nako D. nao
14. A. aliyokuwa B. aliokuwa
C. alizokuwa D. alilokuwa
15. A. akiifuata B. akizifuata
C. akiyafuata D. akiufuata

Kutoka swali la 16-30 chagua jibu sahihi kulingana na maagizo.

16. Neno maradhi liko katika ngeli gani?
A. YA - YA B. LI - YA
C. KI - VI D. U - YA
17. Tegua kitendawili. Mama nieleke. _____
A. Kitanda B. Usingizi C. Gari D. Mimba
18. _____ niazime kalamu yako, yangu imepotea.
A. Pole B. Tafadhali
C. Niwie radhi D. Samahani
19. Jaza pengo.
Niazime maziwa _____ niyanywe.
A. chache B. madogo
C. kidogo D. mingi

20. Chagua sentensi sahihi.
A. Mimi ndimi nilimsaidia
B. Mimi ndiye niliyomsaidia
C. Mimi ndimi niliyemsaidia
D. Mimi ndiye nilimsaidia
21. Kanusha sentensi hii.
Umekula nilichokupikia.
A. Hujakula ulichonipikia
B. Hujala ulichonipikia
C. Hujakula nilichokupikia
D. Hujala nilichokupikia
22. Ni jina lipi halifai kati ya haya?
A. Shubaka B. Shajara C. Zulia D. Kochi
23. Ni upi si mmea?
A. Mbuni B. Shayiri C. Ndizi D. Mchai
24. Nitamwitaje mke wa mtoto wangu?
A. Shemeji B. Mavyaa
C. Kining'ina D. Mkazamwana
25. Thumuni huandikwaje?
A. $\frac{1}{7}$ B. $\frac{1}{5}$ C. $\frac{1}{8}$ D. $\frac{1}{4}$
26. Mbung'o huambukiza maradhi ya _____
A. kifafa B. ukoma
C. safura D. malale
27. Andika wingi wa "uso mfupi"
A. Nyuso fupi B. Mausofupi
C. Nyuso fupi D. Nyuso mfupi
28. Umbo hili ni _____



- A. duara
- B. mche
- C. pia
- D. hiramu

29. Kipofu yule alikuwa na nywele _____
A. ndefu B. refu C. ndevu D. mrefu
30. Mimi ni vazi la kike linalovaliwa ndani ya rinda.
Basi mimi ni _____
A. shimizi B. kitenge
C. bombo D. kanchiri

Soma taarifa ifuatayo kisha ujibu maswali ya 31-40.

Nyuki huishi ndani ya mzinga. Kila nyuki huwa na kazi maalumu ambayo huwa amegaiwa. Kuna wale ambao huenda kwenye maua kutafuta asali, kuna wale ambao huenda kutafuta maji, wengine huwa askari na kadhalika. Mzinga wa nyuki huwa na asali ambayo ni chakula cha nyuki wachanga. Watu wanapojaribu kwenda kuichukua asali kutoka kwenye mzinga, nyuki huwama.

Asali ya nyuki hutumiwa kama chakula na binadamu. Ni tamu sana. Watu wanapotaka kuonyesha kuwa kitu ni kitamu, husema ni kitamu kama asali. Siku hizi, nyuki hufugwa. Kuna shule ambazo hujipatia pesa nyingi kwa kuwaweka nyuki katika mashamba ya shule. Wanafunzi wanapokwenda kuchukua asali, huvaa nguo za kujizua wasiumwe na nyuki. Mtu akiumwa na nyuki wengi anaweza kufariki.

Siku za mababu zetu asali ilitumiwa kutengeneza pombe, kulika kama chakula na hata kutibu magonjwa.

31. Makao ya nyuki ni _____
A. nje ya mzinga B. ndani ya mzinga
C. katika maua D. kando ya mzinga
32. Nyuki wote huwa na _____
A. kazi fulani B. maji mengi
C. asali nyingi D. maua mengi
33. Ndani ya mzinga hupatikana:-
A. maua B. asali
C. maji D. askari pekee
34. Tunaposema kitu ni kitamu kama asali, tuna maana kuwa:-
A. ni kizuri sana B. ni kitamu sana
C. si kitamu D. kinapendeza
35. Nyuki hufugwa _____
A. nyumbani B. katika majumba ya shule
C. jikoni D. katika mashamba ya shule
36. Wanafunzi wanapokwenda kuchukua asali
A. Hawavai nguo za kujizua wasiumwe na nyuki
B. Huvaa nguo za kujizua wasiumwe na nyuki
C. Huvaa nguo zote
D. Hujipaka mafuta ili wasiumwe na nyuki
37. Mtu akiumwa na nyuki wengi anaweza:-
A. kufa B. kunona
C. kupata usingizi D. kucheka sana
38. Asali hutumiwa kwa njia gani?
A. Kuoga B. Kula C. Kufagia D. Kulala
39. Tamu kama _____
A. asali B. sukari C. chakula D. muwa
40. Kichwa cha hadithi hii ni:-
A. Ufugaji wa nyuki B. Asali ya nyuki
C. Kuumwa na nyuki D. Kula asali

Soma taarifa ifuatayo kisha jibu maswali ya 41-50.

Kasuku ni ndege wa ajabu sana. Ana uwezo wa kuyarudisha maneno anayosikia yakisemwa na watu kwa mfano, ukisema "Jambo", kasuku atakujibu, "Jambo". Hadija na wenzake walikuwa wakicheza na Kasuku wao, walipousikia mlio wa gari nje ya nyumba yao. Watu wanne walitoka na kuanza kuinyemelea nyumba yao.

"Mwizi! mwizi! Kasuku alisema. Kulisikia onyo hilo. Hadija alikimbia na kuufunga mlango. Baada ya kufunya hivyo, yeye na mwenzake walijifungia ndani ya kabati na kunyamaza kimya kabisa. "Fungua," mmoja wa wezi hao aliamuru. Kasuku ali-mjibu "fungua." Jibu hilo liliwakasirisha wezi hao.

"Mtaufungua mlango au mnataka tuingie kwa nguvu?" Mwizi huyo aliuliza kwa hasira kwa vile kasuku hakuweza kuyambuka yote yaliyosemwa alirudia sehemu ya mwisho kusema, "...mnataka tuingie kwa nguvu?" Mazungumzo haya yalipokuwa yakiendelea, wazazi wa Hadija walifika na kuwakamata wezi hao. Walipoelezwa kuwa kasuku ndiye aliyewasaidia wazazi walifurahi sana. Walimwendea na kumwambia "Asante sana". Naye aliwajibu kwa sauti nyororo na kusema "Asante sana."

41. Kasuku ni ndege wa ajabu kwa sababu:-
A. huweza kuruka
B. ana mbio sana
C. hana uwezo wa kusema
D. ana uwezo wa kusema
42. Hadija na wenzake walipousikia mlio wa gari, walikuwa:-
A. wakisikiliza
B. wanacheza
C. wakiwangojea wazazi
D. wakiwangojea wazazi wao
43. Waliokuja na gari walikuwa watu:-
A. watano B. watatu C. wanane D. wanne
44. Aliyesema "mwizi! mwizi" ni _____
A. kasuku B. Hadija
C. wenzake Hadija D. Hadija na wenzake
45. Baada ya kufunga mlango, Hadija na wenzake:-
A. walitoroka B. walitoka nje
C. walijificha D. waliingia garini
46. Kasuku alipowajibu wezi na kuwaambia "fungua", wezi hao:-
A. walifurahi B. walifungua mlango
C. walicheka D. walikasirika
47. Wezi hao walitisha:-
A. kuingia kwa nguvu
B. kwenda zao
C. kuwapiga Hadija na mwenzake
D. kumpiga kasuku
48. Mwenzake Hadija aliitwa _____
A. Rehema B. Amina C. Hatujaambiwa D. John
49. Tunasema siku za mwizi ni _____
A. Thelathini B. Arubaini C. Saba D. Kumi
50. Kichwa mwafaka cha ufahamu huu ni:-
A. Uzuri wa Kasuku B. Ubaya wa Kasuku
C. Wezi nyumbani D. Hadija na mwenzake

MAKUENI COUNTY


PENPLUS
MAKUENI

STD 4 - TERM 3

MATHEMATICS

Time: 2 Hours

- What is the thirty seven thousand four hundred and eight in symbols?
A. 3748 B. 37408
C. 37480 D. 374008
- 56 is a multiple of 7. What is the next multiple of seven?
A. 63 B. 49 C. 60 D. 70
- In a county, there are 36284 children 23996 women and 17805 men. How many people are there altogether?
A. 78109 B. 78019
C. 78009 D. 78.085
- At a game park there are 78032 animals. If 43751 are female, how many male animals are there?
A. 121,783 B. 33281
C. 34281 D. 34181
- What is 38×50 ?
A. 1900 B. 1800 C. 2000 D. 1905
- Work out:- $736 \div 9$
A. 80 rem 7 B. 81 rem 7
C. 82 rem 7 D. 81 rem 6
- What is a seventh of 84?
A. 91 B. 13 C. 72 D. 12
- What fraction is shaded?



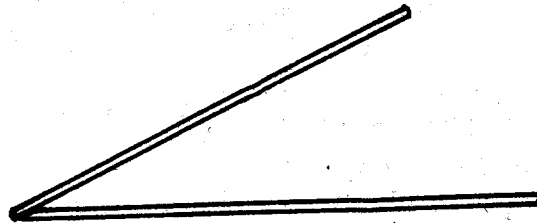
- A. $\frac{9}{15}$ B. $\frac{6}{15}$ C. $\frac{7}{15}$ D. $\frac{15}{15}$
- What is $\frac{9}{13}$ in words?
A. Nine thirteen B. Thirteen ninth
C. Nine thirteenth D. Nine fifteenth
 - What is the missing number if $\frac{5}{7} = \frac{10}{?}$?
A. 5 B. 21 C. 14 D. 17
 - Work out:- $\frac{7}{16} + \frac{6}{16} =$ _____
A. $\frac{15}{16}$ B. $\frac{12}{13}$ C. $\frac{13}{16}$ D. $\frac{13}{32}$
 - What is 0.09 as a fraction.
A. $\frac{9}{10}$ B. $\frac{9}{100}$ C. $\frac{9}{1000}$ D. $\frac{0.9}{100}$

13. Work out:-

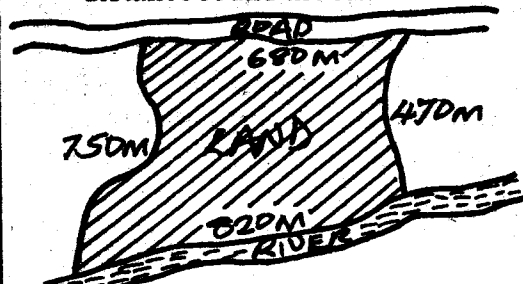
Weeks	Days
11	6
+ 4	5
<hr/>	

- A. 15wks 11days B. 15wks 4days
C. 16wks 3days D. 16wks 4days

- Using a ruler measure the length in centimeters.





- A. 8cm B. 7cm C. 13cm D. 15cm
- Convert 705cm into metres.
A. 7.5 B. 7.50 C. 70.5 D. 7.05
 - This is a map of a piece of land. What is the distance round the farm?




- A. 2720m
B. 2820m
C. 2620m
D. 2730m

- The bucket was filled by the jug.




- How many jugs were used?
A. 10 B. 40 C. 20 D. 30
- How many $\frac{1}{4}$ kg are there in 12kg?
A. 6 B. 16 C. 48 D. 38
 - What is the side of a square whose perimeter is 52cm?
A. 13 B. 208 C. 26 D. 32
 - What is $\frac{1}{5}$ of 35?
A. 175 B. 7 C. 6 D. 8
 - Work out:- $32 \overline{)992}$
A. 41 B. 29 C. 30 D. 31
 - Work out:- $\begin{array}{r} 43 \\ \times 8 \\ \hline \end{array}$
A. 244 B. 344 C. 334 D. 324
 - A trader sold 3275 litres of milk on March, 2879 litres on April and 2392 litres on May. How many more litres were sold on March than on May?
A. 8546 B. 396 C. 873 D. 883
 - Work out: $\frac{5}{16} + \frac{4}{16} + \frac{6}{16}$
A. $\frac{15}{16}$ B. $\frac{15}{48}$ C. $\frac{15}{32}$ D. $\frac{14}{16}$

25. What is forty point zero seven in symbols?
 A. 40.007 B. 40.7 C. 40.070 D. 40.07
26. Work out:- $44.44 + 4.42 + 0.01$
 A. 48.77 B. 88.65 C. 48.87 D. 47.87
27. Find the perimeter of the figure below.



- A. 132cm
 B. 264cm
 C. 254cm
 D. 284cm


28. Convert Sh 15 into cents.
 A. 1500 B. 150 C. 15000 D. 105
29. Christine had 2 - two hundred shilling notes. She changed the money into fifty shilling notes. How many fifty shilling notes did she get?
 A. 8 B. 4 C. 450 D. 10
30. Joel had Sh 500. He bought sugar for Sh 120 and maize flour for Sh 104. How much balance did she remain with?
 A. Sh 224 B. Sh 808 C. Sh 276 D. Sh 256
31. What is the time shown by the clock-face?



- A. 6:40
 B. 10:30
 C. 5:50
 D. 6:50


32. Work out:- $\frac{13}{16} - \frac{6}{16} =$ _____
 A. $\frac{7}{16}$ B. $\frac{7}{32}$ C. $\frac{6}{16}$ D. $\frac{8}{16}$
33. What is the next number in the pattern?
 16, 20, 24, 28, _____
 A. 30 B. 34 C. 36 D. 32

34. How many small squares are in the figure below?



- A. 40
 B. 35
 C. 34
 D. 30

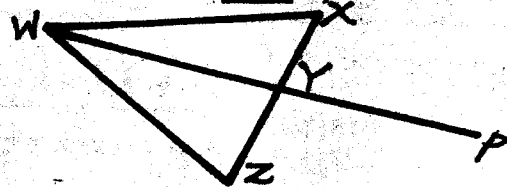
35. Tracy converted 28 months into years and months. What was the correct answer?
 A. 3 years 4 months B. 2 years 4 months
 C. 1 year 4 months D. 4 years 24 months
36. Which of the below angles is an obtuse angle?



- A. 20°
 B. 60°
 C. 100°
 D. 80°

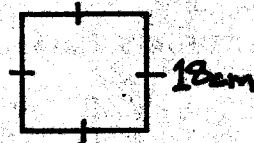
37. Convert 3hrs 40 minutes into minutes.
 A. 340 B. 190 C. 210 D. 220

38. Which one is NOT a point of intersection?



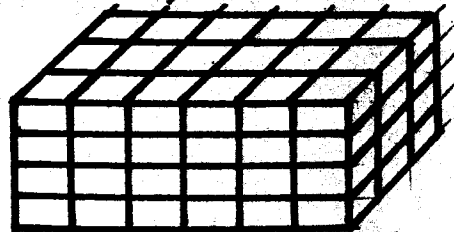
- A. W
 B. X
 C. Y
 D. P

39. In a school all the pupils are z. If boys are y, how many girls are there?
 A. $y - z$ B. $y + z$ C. $z - y$ D. $z + y$
40. Work out:- $5 \overline{) \text{Sh } 72 \text{ } 10 \text{ct}}$
 A. Sh 14 210cts B. Sh 14 42cts
 C. Sh 15 42cts D. Sh 13 42cts
41. The figure below is a square. What is its perimeter?



- A. 324cm
 B. 54cm
 C. 72cm
 D. 90cm

42. How many days are there in the first five months of a leap year?
 A. 152 B. 151 C. 150 D. 149
43. What is the most LIKELY mass of a Std 4 girl?
 A. 1kg B. 5 kg C. 30 kg D. $\frac{3}{4}$ kg
44. How many small cubes are there?




- A. 57
 B. 74
 C. 70
 D. 72

45. Work out:-

m	cm
4	46
x	4

 A. 16m 184cm
 B. 17m 84cm
 C. 18m 84cm
 D. 18m 84cm
46. Work out:- $\begin{array}{r} 32.4 \\ - 5.82 \\ \hline \end{array}$ A. 26.58 B. 25.58
 C. 26.62 D. 20.48

47. What is the value of $\frac{3}{4} \times 12$?
 A. $3\frac{3}{4}$ B. 6 C. 9 D. 36
48. What is the fraction of the shaded squares in the figure below?



- A. $\frac{17}{30}$
 B. $\frac{18}{30}$
 C. $\frac{16}{30}$
 D. $\frac{13}{20}$

49. What is the total value of digit 5 in the number 56307?
 A. 50 B. 500 C. 5000 D. 50000

50. Which one of the following is the CORRECT tally marks for 17?

A.

B.

C.

D.

MAKUENI COUNTY

PENPLUS
MAKUENI

STD 4 - TERM 3

SCIENCE

Time 1Hr. 40Min.

1. The wide chisel - shaped teeth found in the front of the jaws are

- A. Incisors B. Canines
C. Premolars D. Molars

2. A person who treats our teeth is called:-

- A. A nurse B. A pharماسist
C. A dentist D. An optician

3. The type of tooth shown below is called:-



- A. Molar
B. Premolar
C. Incisor
D. Canine

4. The ability of the body to fight against diseases is called:-

- A. Vaccination B. Immunity
C. Immune D. Injection

5. AIDS is caused by a virus called _____

- A. Parasite B. Bacteria
C. HIV D. Vector

6. Which of the following fluids is **NOT** a characteristic of animals?

- A. They feed B. They reproduce
C. They move D. They make food

7. Plants which grow where **NOT** needed are called:-

- A. Seedlings B. Weeds
C. Vegetables D. Fruits


8. Barley is used in the _____ industry.

- A. Bread B. Juice
C. Clothing D. Beer

9. Which of the following weeds has got yellow flowers?

- A. Mexican marigold B. Black jack
C. Oxalis D. Pigweed

10. The simple tool shown below is called:-

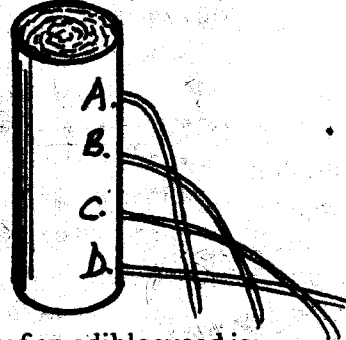


- A. Sickle B. Spade
C. Hammer D. Secateurs

11. Which of the following **DOES NOT** sink in water?

- A. Coin B. Pin
C. Plastic bottle D. Stone

12. Which of the following holes will throw water to the furthest?



13. An example of an edible weed is:-

- A. Oxalis B. Pigweed
C. Mexican maligold D. Wandering jew

14. The condition of the atmosphere of a given place at a particular time is called:-

- A. Temperature B. Humidity
C. Weather D. Sky

15. Which of the following animals moves by crawling?

- A. Snake B. Grasshopper
C. Kangaroo D. Snail


16. Which one of the following products is got from a goat?

- A. Pork B. Wool C. Mohair D. Hides

17. Which of the following is **NOT** a recreation use of water?

- A. Boat racing B. Surfing
C. Swimming D. Irrigation

18. Pupils in Machakos Primary set up an experiment shown in the figure below. What were they trying to find out.



- A. Soil contains humus B. Soil contains air
C. Soil contains water D. Soil contains animals

19. Which of these clouds are associated with fair weather?

- A. Nimbus B. Stratus
C. Cirrus D. Cumulus

20. Birds that are kept for meat are called:-

- A. Layers B. Broilers
C. Beef D. Poultry

21. The weed shows below is called:-



- A. Black jack
- B. Oxalis
- C. Pigweed
- D. Sodom apple

22. The loosening and falling off of the teeth is called:-

- A. Primary teeth
- B. Decay
- C. Shedding
- D. Falling

23. Which of the following is **NOT** a method of controlling weeds?

- A. Digging out
- B. Using herbicides
- C. Uprooting
- D. Watering

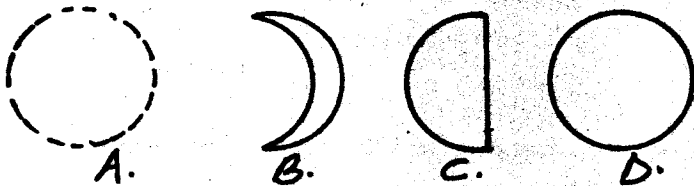
24. The type of movement used by a snake is:-

- A. Crawling
- B. Walking
- C. Slithering
- D. Flying

25. The component of soil which is made of by dead plants and animals is called:-

- A. Minerals
- B. Humus
- C. Mineral salts
- D. Sub-soil

26. Which of the following represents full moon?



27. A _____ stings its enemy in order to protect itself.

- A. Locust
- B. Snail
- C. Wasp
- D. Snake

28. Food that keeps the body healthy and free from diseases are:-

- A. Protective foods
- B. Body building food
- C. Energy giving foods
- D. Nutrients

29. An object that is used to make another one float is a:-

- A. Liquid
- B. Sinker
- C. Floater
- D. Solid


30. _____ is applied on tools in order to prevent them from rusting.

- A. Clay
- B. Grease
- C. Water
- D. Air

31. Which of the following is **NOT** a source of heat?

- A. Sun
- B. Candle
- C. Moon
- D. Electricity

32. Kamau carried out the experiment below.



The bubbles showed that soil contains:-

- A. Humus
- B. Air
- C. Living things
- D. Water

33. Sunflower is put in the group of _____ crops.

- A. Fibre
- B. Oil
- C. Beverage
- D. Legume

34. The _____ is the main source of heat and energy.

- A. Sun
- B. Stars
- C. Moon
- D. Meteors

35. The type of teeth that is used for tearing and gripping is:-

- A. Molars
- B. Premolars
- C. Canines
- D. Incisors

36. Which of the following food will give the body energy to work?

- A. Chapati
- B. Spinach
- C. Fish
- D. Green-grams

37. Dark grey clouds which bring rain are called:-

- A. Nimbus
- B. Cumulus
- C. Stratus
- D. Cirrus

38. Which of the following is a special sound?

- A. Baby crying
- B. People laughing
- C. Hooting
- D. Whistling

39. Which of the following plants is found in dry places?

- A. Cactus
- B. Arrowroot
- C. Sukuma-wiki
- D. Mangoes

40. The young one of a fish is called:-

- A. Fingerling
- B. Tadpole
- C. Cub
- D. Kid

41. A chameleon protects itself from the enemy by:-

- A. Coiling
- B. Changing colour
- C. Running away
- D. Stinging

42. The type of weed shown below is called:-



- A. Oxalis
- B. Black jack
- C. Sunflower
- D. Wandering jew

43. HIV/AIDS test is carried out at a:-

- A. Mosque
- B. V.C.T. Centre
- C. Market
- D. Church

44. The following are all soil components **EXCEPT**:-

- A. Water
- B. Air
- C. Humus
- D. Papers

45. The fish breath through the:-

- A. Lung
- B. Nose
- C. Skin
- D. Gills

46. Water is used at home for the following **EXCEPT**:-

- A. Drinking
- B. Washing
- C. Cooking
- D. Transporting

47. Chemicals used to control weeds are called:-

- A. Pesticides
- B. Insecticides
- C. Herbicides
- D. Painkillers

48. A true insect has _____ legs.

- A. 6
- B. 3
- C. 8
- D. 10

49. Meat from a pig is called:-

- A. Beef
- B. Mutton
- C. Layers
- D. Pork

50. In AIDS, which letter means **Acquired**?

- A. I
- B. D
- C. S
- D. A

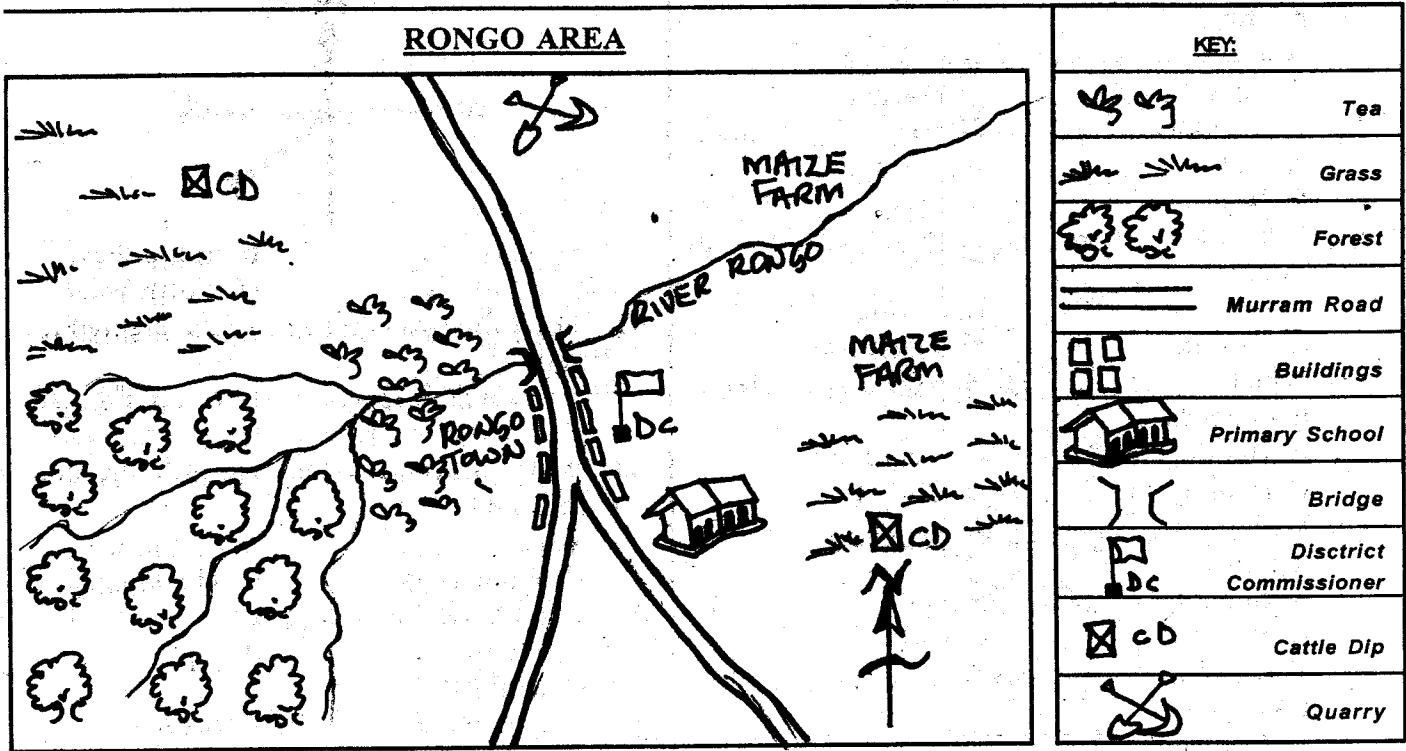
MAKUENI COUNTY

PENPLUS
MAKUENI

STD 4 - TERM 3

SOCIAL STUDIES/C.R.E.

Time: 2 Hrs 15 Mins

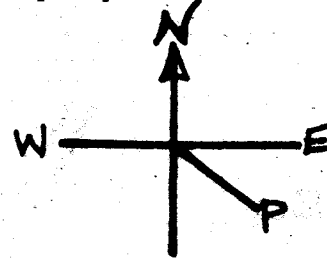


Use the map of Rongo area to answer questions 1 - 7.

1. River Rongo flows towards:-
A. South East B. South West
C. North West D. North East
2. River Rongo has _____ tributaries.
A. Three B. Two
C. Five D. Four
3. Mining is an economic activity done to the _____ of the map.
A. East B. West C. South D. North
4. It is true to say that the people in Rongo area are:-
A. Pagans B. Muslims
C. Christians D. Hindus
5. The people Rongo practise:-
A. Cash crop farming
B. Subsistence farming
C. Arable farming
D. Mixed farming
6. Which economic activity is **NOT** done in the area?
A. Cash crop farming
B. Subsistence crop farming
C. Mining
D. Tourism
7. What is the direction of the maize farm from the forest?
A. North East B. South West
C. South East D. North West
8. Which one of the following is **NOT** a major language group in our country?
A. Nilotes B. Semites C. Cushites D. Bantus
9. A thermometer is marked in units known as:-
A. Kilometres B. Centimetres
C. Degree Celsius D. Litres
10. There are _____ counties in Kenya.
A. 30 B. 47 C. 10 D. 210
11. _____ was a traditional method of transport.
A. Buses B. Plane
C. Donkey D. Train
12. Dowry in African tradition was paid in form of:-
A. Money B. Cars
C. Food D. Animals
13. What form of transport is **MOSTLY** used in our county?
A. Railway B. Air
C. Road D. Water
14. The type of vegetation that grows on its own is called _____ vegetation.
A. Man-made B. Planted
C. Forest D. Natural

15. People cut down trees for their own use. This is called:-
 A. Afforestation B. Reafforestation
 C. Deforestation D. Lumbering
16. Which of the following is **NOT** an example of poultry?
 A. Geese B. Chicken
 C. Turkeys D. Ostrich
17. Forest grow in areas that receive _____ rainfall.
 A. Low B. Average
 C. High D. Little
18. Which of the following crops is grown for its flowers?
 A. Tea B. Coffee
 C. Cotton D. Pyrethrum
19. Which of the following was **NOT** taught to boys in olden days?
 A. Herding B. Blacksmithry
 C. Hunting D. Child care
20. Which of these is **NOT** an example of physical features?
 A. Buildings B. Plains
 C. Beaches D. Hills
21. Three of the following are trees in natural forest **EXCEPT:-**
 A. Meru oak B. Mvule
 C. Cypress D. Podo
22. Which of the following was **NOT** a ceremony among members of African societies?
 A. Initiation B. Naming
 C. Birth D. Baptism
23. Large farms for beef animals are called:-
 A. Ranches B. Plots
 C. Shamba D. Range
24. Illegal hunters of wild animals are known as:-
 A. Poachers B. Killers
 C. Hunters D. Wild animals
25. Rivers end up in three of the following areas **EXCEPT:-**
 A. Swamps B. Lakes
 C. Mountains D. Oceans
26. Artificial application of water to crops is known as:-
 A. Irrigation B. Mulching
 C. Sprinkling D. Watering
27. In the traditional African community, rules of good behaviour were called:-
 A. School rules B. Good manners
 C. Moral laws D. Society rules
28. Which of the following will **NOT** cause conflict in a society?
 A. Political stability B. Poor governance
 C. Tribalism D. Religious differences


29. In the past people were treated by:-
 A. Nurses B. Medicinemen
 C. Doctors D. Teachers
30. The compass point marked P is called:-



- A. North East B. South West
 C. South East D. North West
31. There are two types of forests, planted forests and _____
 A. Baobab forests B. Natural forests
 C. Acacia forests D. Grass forests
32. Which instrument is used to show the direction of wind?
 A. Rain-gauge B. Compass
 C. Wind-vane D. Thermometer
33. The capital city of Kenya is:-
 A. Mombasa B. Nairobi
 C. Nakuru D. Kisumu
34. Which of these was **NOT** used for agricultural in traditional African Society?
 A. Tractors B. Hoes
 C. Knives D. Digging sticks
35. Which of the following is **NOT** natural vegetation?
 A. Papyrus B. Riverine
 C. Scrub D. Eucalyptus
36. People who were traditionally initiated together formed:-
 A. An age group B. A clan
 C. A generation D. A village
37. Three of the following are qualities of a good citizen **EXCEPT:-**
 A. Respecting other people
 B. Being honest
 C. Being irresponsible
 D. Taking part in community activities
38. Which one of the following is **NOT** a human right?
 A. Right to life
 B. Right to fresh air
 C. Right to mistreatment
 D. Right to shelter
39. Areas where many people live are said to be:-
 A. Sparsely populated
 B. Thinly populated
 C. Scarcely populated
 D. Densely populated

40. The colour of the flag that symbolises our rich agricultural land is:-
 A. White B. Black
 C. Green D. Red
41. Papyrus reeds is a kind of vegetation that grows in:-
 A. Hilly areas B. Swamps
 C. Dense forests D. Mounteneous areas
42. A place where a river begins is its:-
 A. Mouth B. Source
 C. Distributary D. End
43. Which one of the following skills was taught through apprenticeship?
 A. Blacksmithing B. Herding
 C. Cooking D. Building
44. The head of a county is the:-
 A. County Representative
 B. Senator
 C. Member of Parliament
 D. Governor
45. The national census in our country is carried out after every _____ years.
 A. Ten B. Five C. Three D. Two
46. The type of rain that falls in areas near large lakes and oceans is known as:-
 A. Lake rainfall B. Ocean rainfall
 C. Convectional rainfall D. Relief rainfall
47. One of the following is **NOT** an importance of vegetation. Which one?
 A. It helps to stop soil erosion
 B. Helps in formation of rain
 C. Creates room for thieves to hide
 D. Reduces water loss through evaporation
48. A group of many families from one ancestor form a:-
 A. Community B. Clan
 C. Society D. Age-set
49. Who among the following communities were traditionally known for cattle keeping?
 A. Abagusii B. Kikuyu
 C. Abaluhya D. Maasai
50. The governor is elected by _____
 A. Voters B. President
 C. MPs D. Chief Justice
51. In the past, people used to worship in the:-
 A. Mosques B. Churches
 C. Shrines D. Synagogues
52. Areas set aside for wildlife to live in are known as:-
 A. Homes B. Game parks
 C. Orphanage D. Game warden
53. Beaches at the coast are usually covered with:-
 A. Trees B. Reeds
 C. Sand D. Stones

54. Which one of the following is **NOT** a member of the county assembly?
 A. Nominated members
 B. The governor
 C. Parliament
 D. Member of Parliament
55. The rules governing the country are known as:-
 A. Order B. Laws
 C. Morals D. Referendum
56. The fastest means of transport is:-
 A. Air B. Road
 C. Railway D. Pipeline
57. A good citizen should **NOT** be:-
 A. Obedient B. Corrupt
 C. Honest D. Responsible
58. The following methods of communication were used in the past **EXCEPT**:-
 A. Beating of drums
 B. Blowing of horns
 C. Using smoke signals
 D. Using mobile phones
59. A low lying area is called a:-
 A. Plain B. Valley
 C. Plateau D. Lake
60. The road sign below shows:-



- A. A round about B. A road junction
 C. No entry D. Bumps ahead

C.R.E.

61. Which Biblical book explains how the world began?
 A. Mathew B. Genesis
 C. Exodus D. Isaiah
62. God saved Noah and his people during the time of the:-
 A. Fire outbreak B. Great famine
 C. Great flood D. Temptation
63. Jesus was tempted by the devil three times in the:-
 A. Sea
 B. River Jordan
 C. Wilderness
 D. Garden of Gethsemane

64. Moses received the ten commandments on Mount:-
 A. Mt. Kenya B. Carmel
 C. Moriah D. Sinai
65. Who among the following people made a wrong choice?
 A. Peter and John
 B. Ananias and Saphira
 C. Mary and Joseph
 D. Elkana and Hannah
66. Jesus was born in:-
 A. Bethlehem B. Bethany
 C. Judea D. Samaria
67. Aaron was a brother to:-
 A. Jethro B. Terah
 C. Moses D. Caleb
68. Levi was a disciple of Jesus. He was also known as:-
 A. Philip B. Mathew
 C. Peter D. Simon
69. In Antioch the followers of Jesus were first called:-
 A. Christians B. Believers
 C. Holy people D. Saved people
70. Who among the following kings of Israel was the wisest?
 A. Ahab B. David
 C. Saul D. Solomon
71. The story of the good Samaritan teaches us on:-
 A. Prayer
 B. Helping the needy
 C. Forgiveness
 D. The kingdom of God
72. Which of the following is an example of African Independent Church?
 A. Methodist Church
 B. African Brotherhood Church
 C. African Inland Church
 D. Legio Maria Church
73. Which one of the following qualities CANNOT promote harmony in a community?
 A. Hatred B. Forgiveness
 C. Peace D. Love
74. Jesus wept during the raising of:-
 A. Dorcas
 B. Lazarus
 C. Jairus' daughter
 D. Son of the widow of Nain
75. In order to feed the five thousand people, Jesus used:-
 A. 5 fish and 2 loaves
 B. 5 loaves and many fish
 C. 1000 fish and 3000 loaves
 D. 2 fish and 5 loaves
76. Which prophet was sent to king David when he took Uriah's wife?
 A. Nathan B. Isaiah
 C. Ezekiel D. Elijah
77. At Cana in Galilee Jesus:-
 A. Raised Lazarus
 B. Was arrested
 C. Turned water into wine
 D. Met Zaccheaus
78. Selfish people are:-
 A. Kind B. Happy
 C. Unkind D. Go to heaven
79. Which one of the following is a quality of a good leader?
 A. Peaceful B. Selfish
 C. Unkind D. Impatient
80. I climbed a sycamore tree so that I could see Jesus. Who am I?
 A. Job B. Zacchaeus
 C. Jacob D. Lazarus
81. God created the world in _____ days.
 A. 12 B. 6 C. 7 D. 8
82. Which of the following is a way of caring for the environment?
 A. Cultivating our shambas
 B. Keeping many cows
 C. Planting trees
 D. Praying all the time
83. Who among the following was a son of Isaac?
 A. Lazarus B. Esau
 C. Samuel D. Laban
84. Jesus fasted in the wilderness for:-
 A. 24 days B. 7 days
 C. 40 days D. 30 days
85. Who among the following was one of Naomi's daughter in law?
 A. Deborah B. Mary
 C. Martha D. Ruth
86. Jacob was the father of:-
 A. Esau B. Isaac C. Joseph D. David
87. Believers of Jesus received the Holy spirit on the day of:-
 A. Pentecost B. Crucification
 C. Christmas D. Second coming of Jesus
88. The first woman to be created by God was:-
 A. Sarah B. Deborah
 C. Eve D. Miriam
89. Who among the following calmed the storm?
 A. Jesus B. Peter C. Lazarus D. Solomon
90. Which one is NOT a way of sharing?
 A. Abusing others
 B. Visiting the sick
 C. Feeding the hungry
 D. Praying with others

MAKUENI COUNTY

PENPLUS
MAKUENI

STD 4 - TERM 3

MARKING SCHEME

ENGLISH		MATHS		KISWAHILI		SCIENCE		S/STUDIES		C.R.E.
1. B	31. A	1. B	31. C	1. B	31. B	1. A	31. B	1. D	31. B	61. B
2. C	32. C	2. A	32. A	2. C	32. A	2. C	32. B	2. D	32. C	62. C
3. B	33. D	3. D	33. D	3. D	33. B	3. A	33. A	3. D	33. B	63. C
4. A	34. A	4. C	34. B	4. C	34. B	4. B	34. C	4. C	34. A	64. D
5. D	35. B	5. A	35. B	5. A	35. D	5. C	35. C	5. D	35. D	65. B
6. C	36. C	6. B	36. C	6. B	36. B	6. D	36. A	6. D	36. A	66. A
7. B	37. B	7. D	37. D	7. A	37. A	7. B	37. A	7. A	37. C	67. C
8. A	38. C	8. A	38. D	8. D	38. B	8. D	38. C	8. B	38. C	68. B
9. D	39. B	9. C	39. C	9. C	39. A	9. A	39. A	9. C	39. D	69. A
10. B	40. A	10. C	40. B	10. B	40. A	10. B	40. A	10. B	40. C	70. D
11. C	41. C	11. C	41. C	11. B	41. D	11. C	41. B	11. C	41. B	71. B
12. A	42. D	12. B	42. A	12. C	42. B	12. D	42. B	12. D	42. B	72. D
13. A	43. B	13. D	43. C	13. D	43. D	13. B	43. B	13. C	43. A	73. A
14. C	44. A	14. C	44. D	14. A	44. A	14. C	44. D	14. D	44. D	74. B
15. D	45. A	15. D	45. B	15. C	45. C	15. D	45. D	15. C	45. A	75. D
16. A	46. D	16. A	46. A	16. A	46. D	16. C	46. B	16. D	46. C	76. A
17. D	47. B	17. B	47. C	17. A	47. A	17. D	47. C	17. C	47. C	77. C
18. B	48. A	18. C	48. A	18. B	48. C	18. C	48. A	18. D	48. C	78. C
19. C	49. B	19. A	49. D	19. C	49. B	19. D	49. D	19. D	49. D	79. A
20. B	50. C	20. B	50. B	20. C	50. A	20. B	50. D	20. A	50. A	80. B
21. C		21. D		21. D		21. B		21. C	51. C	81. B
22. C		22. B		22. B		22. C		22. D	52. B	82. C
23. B		23. D		23. C		23. D		23. A	53. C	83. B
24. A		24. A		24. D		24. D		24. A	54. C	84. C
25. B		25. D		25. C		25. B		25. C	55. B	85. D
26. C		26. C		26. D		26. D		26. A	56. A	86. C
27. D		27. B		27. C		27. C		27. C	57. B	87. A
28. C		28. A		28. B		28. A		28. A	58. D	88. C
29. C		29. A		29. A		29. C		29. B	59. A	89. A
30. B		30. C		30. A		30. C		30. C	60. B	90. A

COMPOSITION/INSHA MARKING SCHEME

MARKING CRITERION

- The composition will be assessed according to the following general guidelines
 - The maximum mark will be 40 and the minimum mark 01
 - Does the script show that the candidate can communicate accurately, fluently and imaginatively in English

Accuracy (16 marks)

- | | |
|----------------------------------------------------|------------------------------------------|
| (a) Correct tense and agreement of verbs (4 marks) | (b) Accurate use of vocabulary (4 marks) |
| (c) Correct spelling (4 marks) | (d) Correct punctuation (4 marks) |

Fluency (16 marks)

- | | |
|-----------------------------------------|--------------------------------------------------|
| (a) Work in the correct order (4 marks) | (b) Sentences connected and paragraphs (4 marks) |
| (c) Correct spelling (4 marks) | (d) Ideas developed in logic sequence (4 marks) |

Imagination (8 marks)

- | |
|----------------------------------------------------------------|
| (a) Unusual but appropriate use of words and phrases (4 marks) |
| (b) Variety of structure (4 marks) |

NB: Please, teachers are requested to scrutinize this marking Scheme before use, it is worth.