

NANDI COUNTY**STD 4 - TERM 3**PENPLUS
NANDI**ENGLISH**

Time: 1 hrs 40 mins

Read the passage below. It contains blank spaces numbered 1 - 15. For each of the blank space, choose the best alternative.

Once upon 1 time, 2 was 3 old woman 4 had 5 children. She lived 6 in 7 house. It was 8 of timber 9 iron sheets. She was pretending 10 be friendly to children 11 she wasn't. One evening she was cooking 12 porridge. She 13 voices of children coming to her house. She 14 picked up the hot pot. 15 she was placing it on a shelf it dropped down spilling hot porridge on her whole body.

- | | | | |
|------------------|-----------|-------------|-------------|
| 1. A. a | B. an | C. the | D. for |
| 2. A. their | B. they | C. there | D. them |
| 3. A. un | B. the | C. a | D. an |
| 4. A. she | B. who | C. which | D. he |
| 5. A. any | B. no | C. some | D. many |
| 6. A. a lone | B. harun | C. lonely | D. alone |
| 7. A. their | B. his | C. her | D. she |
| 8. A. built | B. build | C. made | D. bilt |
| 9. A. and | B. then | C. as | D. out |
| 10. A. and | B. for | C. to | D. of |
| 11. A. so | B. and | C. as | D. but |
| 12. A. any | B. some | C. no | D. many |
| 13. A. heard | B. had | C. herd | D. hand |
| 14. A. hurriedly | B. slowly | C. hurridly | D. huryedly |
| 15. A. Then | B. What | C. When | D. That |

Choose the correct alternative to complete the sentences.

- | | |
|--|---|
| 16. A lion roars. What do ducks do?
A. Bellow
B. Bleat
C. Quack
D. His | 18. Asha was as black as _____
A. snow
B. coat
C. dark
D. soil |
| 17. Sitting on a sofa set is _____ comfortable than a chair. | 19. The dog ran away _____ the fence.
A. on
B. over
C. through
D. above |

20. Joan was the _____ girl in her class.

- A. most beautiful B. beautiful
C. more beautiful D. beauty

21. A carpenter makes furniture. What does a conductor do?

- A. issues tickets
B. flies an aeroplane
C. drives a nissan
D. drives a bus

Fill in the blank with where, what or who.

22. The classteacher couldn't remember _____ he had kept her register.

- A. what B. who
C. where D. whom

23. What is the opposite of the word 'shallow'?

- A. Narrow B. Depth
C. Wide D. Deep

24. As hard as _____

- A. coal B. blackboard
C. sky D. stone

25. What is a young one of a rabbit called?

- A. Kid B. Doe
C. Buck D. Calf

Read the passage below then answer questions 26 - 38.

A long time ago, there was an old peasant. He lived with his wife and children. The children were called Odongo and Akinyi. The house in which they lived was built of bricks. One day Muthoni, the mother of the children fell sick. Odero, the father of the children took her to a nearby hospital. She was admitted. After two days, the woman passed away.

26. What was the old man?

- A. Farmer
B. Doctor
C. Teacher
D. Carpenter

27. The type of family mentioned was likely to be _____

- A. nuclear
B. extended
C. single
D. rich

28. The son of the old man was called _____

- A. Akinyi
B. Odongo
C. Muthoni
D. Odero

29. Bricks are made of _____

- A. cement
B. wood
C. soil
D. metal

30. The mother of the children died _____

- A. at home
B. in a dispensary
C. in the garden
D. in a hospital

31. What was the name of Muthoni's husband?
- A. Odongo
B. Odero
C. Akinyi
D. We are not told
32. The story in the passage above can be described as _____
- A. pleasant
B. interesting
C. shocking
D. boring
33. A person who treats sick in a hospital is called a _____
- A. doctor
B. patient
C. mason
D. matron
34. After two days, the woman passed away. This means the same as _____
- A. she died
B. she delivered
C. she went ahead
D. she past
35. The word 'old' is mentioned in the passage. The opposite of old as used in the passage is _____

- A. ancient
B. new
C. young
D. knew
36. Muthoni was sick _____
- A. for a long time
B. for a short time
C. for a week
D. for a while
37. The mother of the children fell sick. The present tense of the word fell is _____
- A. falling
B. feel
C. fall
D. feeling
38. The family mentioned above was _____
- A. rich
B. strong
C. wealthy
D. ordinary
39. The BEST title for this passage could be _____
- A. The old peasant
B. The orphans
C. Muthoni
D. Odero

Read the following passage carefully then answer questions 40 - 50.

One day Musa's grandfather found Musa on a tree in the orchard. He said, "Why do you like playing on trees? Don't you remember that Mwangi, the son of Gicheche fell from a tree, his leg got broken and he almost died? You must stop it."

"I remember very well. I'm very sorry. I'll not repeat it," Musa said. After fortnight Musa was up on another tree again. He had forgotten the warning. He stepped on a thin

branch. It got broken and he fell down. He broke his hand and cried in great pain.

The grandfather found him crying and said, "Musa! Didn't I warn you? Do you see what has happened to you now?"

- | | |
|---|---|
| <p>40. Why do you think Musa was on the tree?</p> <ul style="list-style-type: none">A. To playB. To pick fruitsC. To danceD. To look for firewood <p>41. Who is said to have almost died?</p> <ul style="list-style-type: none">A. MusaB. MwangiC. GichecheD. Grandfather <p>42. The character of Mwangi was LIKELY to be _____</p> <ul style="list-style-type: none">A. obedientB. honestC. trustedD. disobedient <p>43. Mwangi fell down because he _____</p> <ul style="list-style-type: none">A. slippedB. sleptC. jumpedD. played <p>44. Mwangi cried because he _____</p> <ul style="list-style-type: none">A. broke his legB. was beatenC. fell painD. was dishonest <p>45. The word '<u>fortnight</u>' means _____</p> <ul style="list-style-type: none">A. one weekB. one month | <ul style="list-style-type: none">C. two weeksD. one year <p>46. Which warning had Mwangi forgotten?</p> <ul style="list-style-type: none">A. Not to playB. Not to fall downC. Not to eat fruitsD. Not to climb trees <p>47. Who had fallen from a tree earlier?</p> <ul style="list-style-type: none">A. MusaB. GichecheC. GrandfatherD. Beat Mwangi <p>48. What do you think Musa's grandfather did?</p> <ul style="list-style-type: none">A. Took Mwangi to hospitalB. MwangiC. Took Mwangi to the headteacherD. Killed Mwangi <p>49. The passage above helps us to know the importance of _____</p> <ul style="list-style-type: none">A. desplineB. deceplaneC. disciplineD. disipline <p>50. The BEST title for the passage is _____</p> <ul style="list-style-type: none">A. The grandfatherB. The naughty boyC. MwangiD. Musa |
|---|---|

WILAYA YA NANDI**DARASA LA NNE MUHULA WA TATU**PENPLUS
NANDI**KISWAHILI**

Muda: Saa 1 Dakika 40

Jaza mianya kwa majibu sahihi kwa swali 1-15.

Kuku 1 mayai 2 sana. Mayai hayo yaliwekwa kwenye choto kisha 3 kwa muda wa 4 matatu hivi kisha 5 vifaranga 6 walikuwa na rangi tofauti. Kuku alilinda vifaranga 7 wasiliwe na 8.

Siku 9 kuku aliwaficha vifaranga kwenye mbawa 10. Mwewe naye alifanya ujanja na kuangusha punje 11 mahindi karibu. Kuku 12 na kuangukia kwenye mlo wake. Kuku huyo 13 mahindi kwa furaha bila kufahamu ujanja wa mwewe. Mwewe aliwavamia vifaranga na kumchukua 14. Kuku alimlilia kifaranga wake lakini kilio si 15.

- | | | | |
|--------------------|----------------|---------------|----------------|
| 1. A. alizaa | B. aliangua | C. alitaga | D. aliteka |
| 2. A. mengi | B. mingi | C. wengi | D. mwingi |
| 3. A. aliyalalia | B. akayaatumia | C. akayavamia | D. akayakalia |
| 4. A. wiki | B. juma | C. miezi | D. majuma |
| 5. A. yakaanguliwa | B. yakaliwa | C. yakatolewa | D. yakatozwa |
| 6. A. ambavyo | B. ambayo | C. ambaye | D. ambao |
| 7. A. wake | B. vyake | C. vyao | D. zao |
| 8. A. jogoo | B. mbuni | C. mwewe | D. njiwa |
| 9. A. mmoja | B. kimoja | C. moja | D. mocha |
| 10. A. yake | B. zake | C. yao | D. lao |
| 11. A. la | B. ya | C. za | D. wao |
| 12. A. alipuruka | B. alianguka | C. alidandia | D. alizama |
| 13. A. alitafuna | B. alikekela | C. aliyadona | D. aliyagegeda |
| 14. A. kimoja | B. mmoja | C. moja | D. wamoja |
| 15. A. kizuri | B. dawa | C. tatizo | D. kibaya |

Jibu maswali nambari 16 - 30 kwa**kufuata maagizo yaliyotolewa.**

16. Andika sentensi hii katika wingi;
Ubao utavunjika.
A. Bao zitavunjika
B. Mabao yatavunjika
C. Bao yataavunjika
D. Mbao zitavunjika

17. Kanusha; Sisi hula asubuhi.

- A. Sisi hatukuli asubuhi.
B. Sisi hatulangi asubuhi
C. Sisi hatuli asubuhi.
D. Sisi hukula asubuhi

18. Alinunua kalamu _____ wino mwekundu.

- A. chenye B. mwenye
C. lenye D. yenye

19. Chagua kiulizi sahihi;
Amefunga mlango kwa ufunguo _____?

- A. upi B. lipi
C. ipi D. zipi

20. Daktari huitwa tabibu au _____

- A. muuguzi B. nesi
C. mganga D. mchawi

21. Chagua kiambishi sahihi.

Chungu _____ ko mekoni.

- A. i B. li C. u D. ki

22. Jaza pengo;

Wayo ni kwa mwanadamu, _____ ni
kwa ng'ombe.

- A. kiatu B. mguu
C. teke D. kwato

23. Kamilisha methali ifuatayo.

Baada ya kisa ni _____

- A. faraja B. kifo
C. mkasa D. kitendo

24. Jina 'dawati' liko katika ngeli gani?

- A. LI-YA B. I-ZI
C. U-ZI D. YA - YA

25. Tumia idadi ifaayo;

Wakulima _____ watasafiri.

- A. wasita B. kumi na moja
C. wakumi D. wanane

26. Kinda ni mtoto wa _____

- A. ndege B. kuku
C. nyoka D. mbwa

27. Taja jina la umbo hili;



- A. Moyo B. Roho
C. Mapenzi D. Kopa

28. Mtu asiyeweza kusikia huitwaje?

- A. Kipofu B. Kiwete
C. Kibyongo D. Kiziwi

29. Tunaliitaje jiko la makaa?

- A. Meko B. Stima
C. Serehani D. Dohani

30. Tegua kitendawili kifuatacho.

Nyumba ya baba ina wageni wengi.

- A. Soko B. Kanisa
C. Shule D. Ulimwengu

Soma taarifa ifuatayo kisha ujibu maswali 31 - 40.

Hapo zamani wanyama walikuwa wakishiriki katika michezo mbalimbali mara moja kwa mwaka. Wakati huu wa michezo, kila mnyama, ndege na hata samaki walikuwa wanaalikwa na mfalme tembo.

Wanyama hawa walikuwa wanashiriki katika michezo mbalimbali kama vile kushindana mbio, kuogelea, kupigana ngumi na mateke na michezo mingineyo.

Pundamilia alikuwa anashinda kila mara katika mchezo wa kupigana mateke. Mbuni naye alikuwa akishindana mbio zote. Rekodi ya papa katika kuogelea iliwashinda wengi kuivunja.

Kila mwaka, mheshimiwa kinyonga alikuwa akialikwa kuja kushabikia mchezo wake wa kupigana ngumi na mateke. Alikuwa akiupenda kama chanda na pete. Katika mchezo huu, kinyonga alipata maarifa mengi hasa siku ile. Pundamilia alimshinda simba kwa kumpiga teke lililomuumba.

Michezo ilipofika kikomo saa kumi na moja siku hiyo, washindi wakatangazwa na katibu bwana Ngiri na kutuzwa zawadi kochokocho.

31. Wanyama walikuwa wakifanya michezo mara ngapi kwa mwaka?
 A. Mbili
 B. Moja
 C. Tano
 D. Kumi
32. Kulingana na taarifa ni mchezo upi ambao haukupendwa na wanyama?
 A. Kuogelea
 B. Mbio
 C. Kupigana
 D. Kuimba
33. Ni nani aliyekuwa mshindi katika mchezo wa kupigana mateke?
 A. Pundamilia
 B. Simba
 C. Kinyonga
 D. Papa
34. Kulingana na hadithi, makao yake papa ni wapi?
 A. Mitini
 B. Nyumbani
 C. Majini
 D. Mwituni
35. Ni wakati gani katika michezo ambao kinyonga alipata maarifa mengi?
 A. Pundamilia alipomshinda simba
 B. Simba alipomshinda pundamilia
 C. Papa alipoogelea akashinda
 D. Mbuni alipomshinda ngiri.
36. Mbuni alipokea zawadi kwa kushinda mchezo upi?
 A. Kuogelea
 B. Mbio
 C. Kuimba
 D. Kucheza
37. Neno 'kochokocho' limetumika katika ufahamu. Neno hii lina maana ya _____
 A. chache
 B. ndogo
 C. kwa wingi
 D. tele
38. Ni nani aliyekuwa katibu wa mchezo mwaka huo?
 A. Papa
 B. Kinyonga
 C. Ngiri
 D. Ndovu
39. Neno lenye maana sawa na 'tembo' ni _____
 A. ndovu
 B. simba
 C. mbuni
 D. papa
40. Kichwa mwafaka cha hadithi hii ni _____
 A. Hapo zamani
 B. Wanyama na mbuni
 C. Siku ya michezo ya wanyama
 D. Kupigana mateke

Soma kifungu hiki kisha ujibu maswali 41 - 50.

Nyoteyo ni msichana mwenye umri wa miaka kumi na miwili. Ana bidii sana masomoni, hata wanafunzi wanzake humwita 'nyota'.

Nyoteyo hana wazazi, yeye ni yatima. Yeye ni mwanafunzi katika shule ya msingi ya Naelewa. Wazazi wake waliaga dunia walipovamiwa na wezi nyumbani kwao miaka mitatu iliyopita. Yeye huishi na mjomba wake.

Nyoteyo hupenda rafiki safi. Hapendi kukaa na watoto wachoyo, wachafu, wanaonuka kama beberu, wezi na wasiofanya kazi za walimu. Hupenda kusoma vitabu vingi vya kiswahili na hadithi nzuri. Yeye husema kuwa akimaliza masomo yake angependa kuwa mhubiri ili awahubirie watu amani. Jambo hili ni tofauti na mahitaji ya wenzake.

Kwa kweli hapendi vita. Yeye ni mpole kama mwanakondoo. Huwauliza walimu wake maswali katika masomo yake. Sasa Nyoteyo ndiye kiranja wa darasa lake la tano. Alichaguliwa na mwalimu wake Bwana Furaha kwa sababu ya tabia zake za kuwapendeza wengi. Ni wangapi wangetamani kuwa na tabia kama za Nyoteyo?

- | | |
|--|---|
| <p>41. Nyoteyo alikuwa na miaka mingapi wazazi wake walipokufa?</p> <p>A. Kumi na miwili
B. Sita
C. Tisa
D. Kumi</p> <p>42. Ni akina nani waliowaua wazazi wa Nyoteyo?</p> <p>A. Majabazi
B. Wezi
C. Wachawi
D. Askari</p> <p>43. Nyoteyo hapendi _____</p> <p>A. wanafunzi wanaofanya kazi ya mwalimu.
B. wanafunzi wanaonukia
C. wanafunzi wasiooga
D. wanafunzi wanaowatii walimu wao</p> <p>44. Kulingana na hadithi hii ni kweli kuwa _____</p> <p>A. Nyoteyo ni msomaji bora wa vitabu vya kiswahili.
B. Nyoteyo si yatima.
C. Nyoteyo anaishi peke yake kwake
D. Nyoteyo hupenda kukaa na wanafunzi wachoyo</p> <p>45. Nyoteyo ni mpole kama _____</p> <p>A. maji B. mwanakondoo
C. yatima D. wazazi wake</p> | <p>46. Tunamaanisha nini tunaposema kuwa "Nyoteyo ni yatima"?</p> <p>A. Hapendi wanafunzi wabaya
B. Yeye ni mwerevu na hana hatia
C. Anasoma kwa bidii
D. Hana wazazi</p> <p>47. Nyoteyo anatamani kuwa nani atakapomaliza masomo yake?</p> <p>A. Daktari
B. Mwimbaji
C. Msomaji
D. Mhubiri</p> <p>48. Nani aliyemchagua Nyoteyo kuwa kiongozi wa darasa lake?</p> <p>A. Wanafunzi
B. Bwana Furaha
C. Kiranja
D. Wazazi</p> <p>49. Nyoteyo alikuwa akiishi kwa _____ wake.</p> <p>A. rafiki B. mjomba
C. mwalimu D. wanafunzi</p> <p>50. Hadithi hii inatufundisha nini?</p> <p>A. Usiposoma utapita.
B. Tuwe na upendo na amani maishani.
C. Kila mwanafunzi ni yatima.
D. Tusiwaulize walimu maswali mengi darasani</p> |
|--|---|

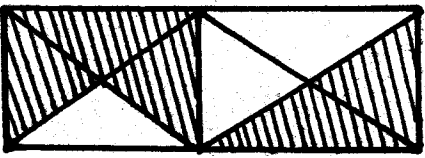
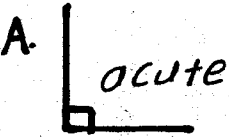

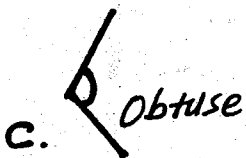

NANDI COUNTY

STD 4 - TERM 3

PENPLUS
NANDI

MATHEMATICS

Time: 2 hrs

1. Write five thousand six hundred and ten in numerals.
A. 5610 B. 50610
C. 50006010 D. 506010
2. What is the place value of digit 6 in 3607?
A. Tens B. Hundreds
C. One D. Thousands
3. Which of these numbers is NOT divisible by both 2 and 5?
A. 1010 B. 1000
C. 1005 D. 2040
4. What is the total value of digit 3 in 3607?
A. 300 B. 30
C. 3 D. 3000
5. Which number comes after 4999?
A. 4090 B. 5000
C. 4990 D. 5001
6. What fraction is shaded?

A. $\frac{5}{8}$ B. $\frac{8}{8}$ C. $\frac{1}{8}$ D. $\frac{3}{8}$
7. In a certain village, there are 4921 men, 3684 women and 9601 children. How many people are there altogether?
A. 20481 B. 18205
C. 18206 D. 16982
8. What is an eighth of 96?
A. 12 B. 14
C. 10 D. 16
9. How many quarter litres of milk are there in 25 kg?
A. $4\frac{1}{6}$ B. 100
C. 50 D. $6\frac{1}{4}$
10. Four pupils of Mugunda Primary School were each given $\frac{1}{5}$ of an orange. What fraction of the orange did they eat altogether?
A. $\frac{1}{5}$ B. $\frac{4}{5}$
C. $\frac{3}{5}$ D. $\frac{2}{5}$
11. What is the next number in the sequence?
12, 14, 16, 18, 20, _____
A. 24 B. 23
C. 21 D. 22
12. Which of these angles is CORRECTLY matched.
A.  acute
B.  reflex
C.  obtuse
D.  right angle
13. $\frac{3}{7} + \frac{2}{7} =$
A. $\frac{5}{7}$ B. $\frac{1}{7}$
C. $\frac{4}{7}$ D. 0

14. Seventy two books were issued to eight new boys of a certain school. How many books did each boy receive?

- A. 8 B. 7
C. 64 D. 9

15. $5609 + \square = 9899$

- A. 5390 B. 5290
C. 4290 D. 15418

16. Weeks Days

3	4
x	4
<hr/>	


Wks days

- A. 13 2
B. 14 2
C. 14 6
D. 13 6

17. $\frac{1}{3}$ of $\square = 8$

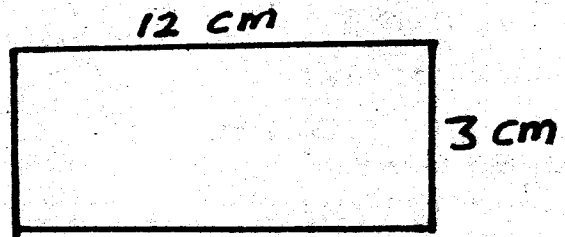
- A. $2\frac{2}{3}$ B. 24
C. 16 D. $\frac{3}{8}$

18. How many small squares can you count?



- A. 32 B. 36 C. 28 D. 9

19. Find the perimeter of the figure below



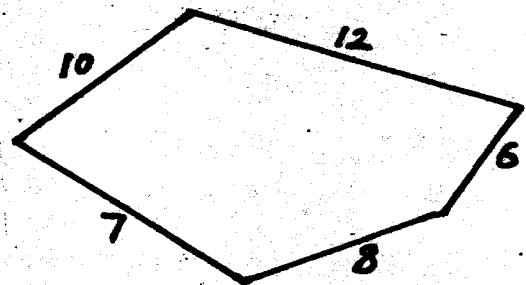
- A. 48 cm B. 15 cm
C. 24 cm D. 30 cm

20. Work out;

$$\begin{array}{r} 9621 \\ + 588 \\ \hline \end{array}$$


- A. 10209 B. 10109
C. 9167 D. 11109

21. Waihenya ran round the figure drawn twice. How many metres did he cover?



- A. 43 m B. 86 m C. 64 m D. 72 m

22. What is the time?



- A. Twenty minutes to one
B. Eight o'clock
C. 5 minutes past eight
D. Twenty minutes past one

23. Work out;

$$\begin{array}{r} 3 \\ \times 90 \\ \hline \end{array}$$

- A. 270 B. 273
C. 27 D. 93

24. One biscuit costs sh. 3. I want to buy 5 biscuits. How much shall I pay for the biscuits?

- A. sh. 18 B. sh. 2
C. sh. 15 D. sh. 8

25. Convert sh. 9 into cents.

- A. 9000 cts B. 9 cents
C. 900 cts D. 90 cts

26. What is the place value of digit 7 in the number 96.07?

- A. 7 tens B. Ones
C. Hundredths D. Tenths

27. Work out;

$$\begin{array}{r} 6.1 \\ - 4.52 \\ \hline \end{array}$$

- A. 2.48 B. 2.42
C. 0.58 D. 1.58

28. Convert 10 m 65 cm into centimeters.

- A. 10065 m B. 1605 m
C. 165 m D. 1065 m

29. Change 4 h 15 min to minutes.

- A. 415 minutes B. 245 minutes
C. 255 minutes D. 240 minutes

30. How many hours are there in 195 minutes?

- A. $2\frac{3}{4}$ hrs B. $3\frac{1}{4}$ hrs
C. 4 hrs D. 3 hrs

31. How many kg are there in 24 quarter kilograms?

- A. 6kg B. 48 kg
C. 96 kg D. 12 kg

32. $\frac{1}{4}$ of 12 =

- A. 6 B. 3
C. 48 D. 4

33. Weeks Days

$$\begin{array}{r} 12 \quad 4 \\ - 5 \quad 6 \\ \hline \end{array}$$

- A. 7 wks 1 day
B. 6 wks 8 days
C. 6 wks 5 days
D. 7 wks 2 days

34. The cost of 3 books is sh. 99. What is the cost of such one book?

- A. sh. 96 B. sh. 297
C. sh. 33 D. sh. 23

35. Wangeci had sh. 200.60. She used sh. 100.80. How much money did she remain with?

- A. 96.80 B. 301.40
C. 98.20 D. 99.80

36. Write 0.8 as a fraction.

- A. $\frac{10}{8}$ B. $\frac{8}{10}$ C. $\frac{8}{10}$ D. $\frac{2}{10}$

37. Which of the years below is not a leap year?

- A. 2004 B. 2008
C. 2010 D. 1016

38. $\frac{3}{4} = \frac{\square}{12}$

- A. 9 B. 8
C. 6 D. 6

39.
$$\begin{array}{r} \text{Sh.} \quad \text{cts} \\ 16 \quad 60 \\ \times \quad 5 \\ \hline \end{array}$$

- A. 83.00 B. 80.00
C. 80.30 D. 82.00

40. Work out;

$$\begin{array}{r} \text{m} \quad \text{cm} \\ 8 \quad 36 \\ \times \quad 7 \\ \hline \end{array}$$

$$\begin{array}{r} \text{m} \quad \text{cm} \\ 58 \quad 52 \\ \hline \end{array}$$

- A. 58 52
B. 57 52
C. 58 42 56 42

41. How many days are there in the month of June, July and September?

- A. 90 B. 91
C. 92 D. 89

42. Halima bought $\frac{2}{4}$ kg of sugar, $\frac{1}{4}$ kg of tea and $\frac{1}{4}$ kg of rice. What was the total mass of the items?

- A. $\frac{1}{4}$ kg B. $\frac{3}{4}$ kg
C. 1 kg D. $\frac{1}{2}$ kg

43. How many litres are there in 24 litres?

- A. 96 B. 6
C. 12 D. 72

44. How many $\frac{1}{4}$ hours are there in 6 days?

- A. 124 B. 132 C. 144 D. 72

45. Work out;

$$6 \overline{)78}$$

- A. 13 B. 18
C. 14 D. 6

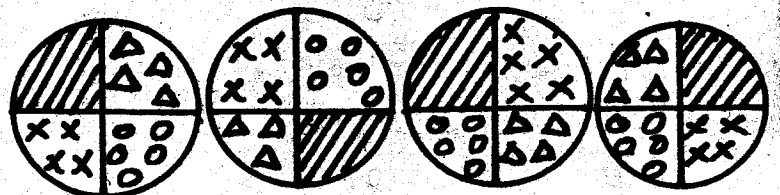
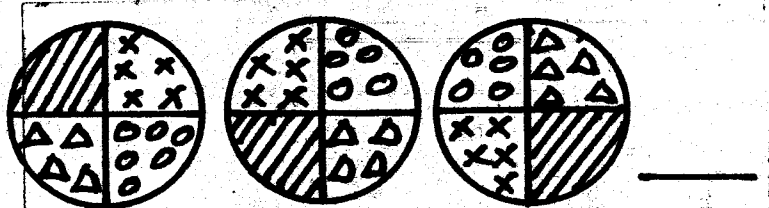
46. What is the perimeter of a square whose side is 35 cm?

- A. 35 cm B. 120 cm
C. 70 cm D. 140 cm

47. What is the approximate mass of a hen?


- A. $\frac{1}{4}$ kg B. 1 kg
C. 4 kg D. 35 kg

48. What is the next pattern?



- A. B. C. D.

49. How many triangles can you count?



- A. 7 B. 6 C. 4 D. 5

50. Convert 50.100 as a decimal.

- A. 5.0 B. 0.05
C. 5.00 D. 0.50

NANDI COUNTY

STD 4 - TERM 3

PENPLUS
NANDI

SCIENCE

Time: 1hr 40 mins

1. Which of the following is NOT a type of teeth?

- A. Jaw
- B. Canine
- C. Premolar
- D. Molar

2. _____ teeth have 3 roots.

- A. Premolar
- B. Incisor
- C. Molar
- D. Canine

3. The first teeth grow when a child is _____

- A. 6 years
- B. 6 months
- C. 1 year
- D. 6 weeks

4. The tooth shown below is a _____



- A. premolar
- B. molar
- C. canine
- D. incisor

5. AIDs can affect _____

- A. adults only
- B. men only
- C. all people
- D. women only

6. AIDs is caused by _____

- A. syndrome
- B. immunity
- C. deficiency
- D. HIV

7. Air in motion is called _____

- A. water
- B. temperature
- C. smoke
- D. wind

8. The sending back of light by a mirror is called _____

- A. reflection
- B. shining
- C. reflector
- D. echo

9. Light helps one to _____ things.

- A. see
- B. smile
- C. shine
- D. reflect

10. People weed during the _____ season.

- A. dry
- B. rainy
- C. windy
- D. wet

11. A snake moves by _____


- A. crawling
- B. walking
- C. slithering
- D. leaping

Use the weather chart below to answer questions 12 - 15.

Day	Morning	Afternoon
Monday		
Tuesday		
Wednesday		
Thursday		
Friday		

12. Which day was the BEST to carry an umbrella?

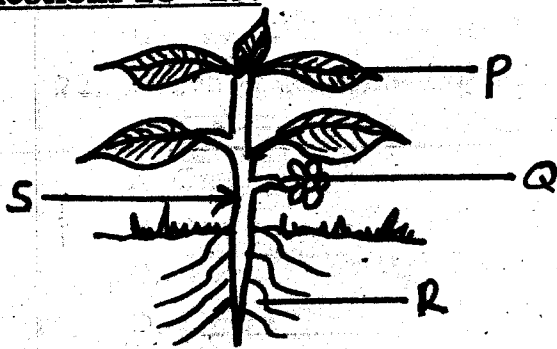
- A. Thursday B. Friday
C. Wednesday D. Monday
18. Which day was the BEST to wash clothes?
A. Friday B. Wednesday
C. Tuesday D. Monday
14. On which day did it rain throughout?
A. Thursday B. Monday
C. Tuesday D. Friday
15. Windy condition was observed on _____
A. Wednesday morning
B. Wednesday afternoon
C. Thursday morning
D. Monday afternoon
16. Which of these plants are legumes?
A. Groundnuts and peas
B. Sorghum and maize
C. Coffee and cocoa
D. Spinach and coconut
17. Which one of the following is NOT a cash crop?
A. Sunflower
B. Coffee
C. Maize
D. Tea
18. In the table below which group of food crops is NOT correctly matched with its example?
- | <u>Group</u> | <u>Example</u> |
|---------------|----------------|
| A. Tubers | Arrowroot |
| B. Cereals | Groundnuts |
| C. Vegetables | Spinach |
| D. Fruits | Apple |
19. The two MAIN types of crops are _____
A. food crops and oil crops
B. food crops and cash crops
C. farm crops and cash crops
D. food crops and farm crops
20. The BEST type of soil for farming is

- A. sand
B. clay
C. none
D. loam
21. The BEST soil for making ribbons is _____
A. loam
B. sand
C. all
D. clay
22. Which of the following plants is NOT a spice?
A. Cinamon
B. Garlic
C. Neem
D. Gloves
23. The diagram below shows one of the problems related to teeth. Which problem is it?

A. Cavity B. Tooth decay
C. Bad smell D. Bleeding gums
24. The ability of the body to fight against diseases is called _____
A. acquired
B. syndrome
C. deficiency
D. immunity
25. In HIV the letter V stands for _____
A. vain
B. virus
C. volume
D. value
26. Which one of the following is NOT a weed?
A. Black jack
B. Oxalis
C. Sweet potatoes
D. Sodom apple

27. Which weed has small thorns on the stem, purple flowers and yellow fruits when ripe?

- A. Pigweed
- B. Mexican marigold
- C. Oxalis
- D. Sodom apple

Study the diagram below and answer questions 28 - 29.



28. Which part produces seeds?

- A. P
- B. Q
- C. R
- D. S

29. The part marked R is the _____

- A. leaves
- B. roots
- C. stem
- D. flower

30. The following are ways of maintaining healthy teeth. Which one is NOT?

- A. Eating sugary foods
- B. Eating a balanced diet
- C. Visiting a dentist regularly
- D. Brushing the teeth after meals

31. An adult person has _____ premolar.

- A. 2
- B. 4
- C. 8
- D. 32

32. Unwanted crops in a farm are known as _____

- A. weeds
- B. food crops
- C. cash crops
- D. cereals

33. We can separate mud from water by _____

- A. boiling
- B. pouring
- C. transporting
- D. filtering

34. Water can be stored in the following containers EXCEPT _____

- A. baskets
- B. drums
- C. pots
- D. tanks

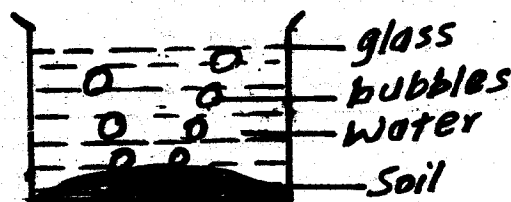
35. Which of the following is NOT a special sound?

- A. Siren
- B. Whispering
- C. Screaming
- D. Bell ringing

36. The way we behave when taking meals is called _____

- A. food manners
- B. house manners
- C. tea manners
- D. table manners

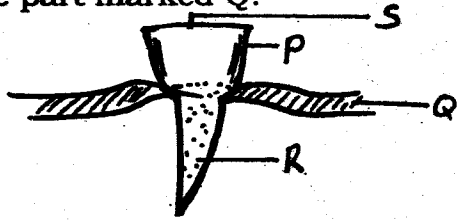
37. A standard 4 pupil carried out the experiment shown below.



From the experiment, it is TRUE to say that _____

- A. soil has bubbles
- B. soil has animals
- C. soil has water
- D. soil has air

38. Study the diagram below and name the part marked Q.




- A. Crown B. Root
C. Gum D. Enamel

39. Bees defend themselves by _____

- A. biting
B. hitting
C. stinging
D. barking

40. Which wheel will move easily?



41. When a person CANNOT talk he can use _____

- A. smell
B. gestures
C. taste
D. sight

42. Coffee, tea and cocoa are _____

- A. beverages
B. tubers
C. weeds
D. legumes

43. Which one of the following is NOT obtained from fibre crops?

- A. Oil
B. Clothes
C. Ropes
D. Thread


44. The removal of weeds growing among crops is called _____

- A. digging
B. uprooting
C. weeding
D. pulling

45. _____ is NOT needed for good health.

- A. Food
B. Sweets
C. Exercise
D. Rest

46. The structure shown below is built by a _____



- A. mosquito B. bee
C. fly D. spider

47. Which of the following is NOT a simple machine?

- A. Bicycle
B. Hammer
C. Saw
D. Spade

48. Bleeding gum is also known as _____

- A. cavity
B. gingivitis
C. tooth decay
D. toothache

49. We make water safe for drinking by _____

- A. filtering
B. cooling
C. heating
D. boiling

50. Which colour is at the top of a rainbow?

- A. Green
B. Black
C. Red
D. White

NANDI COUNTY

STD 4 - TERM 3

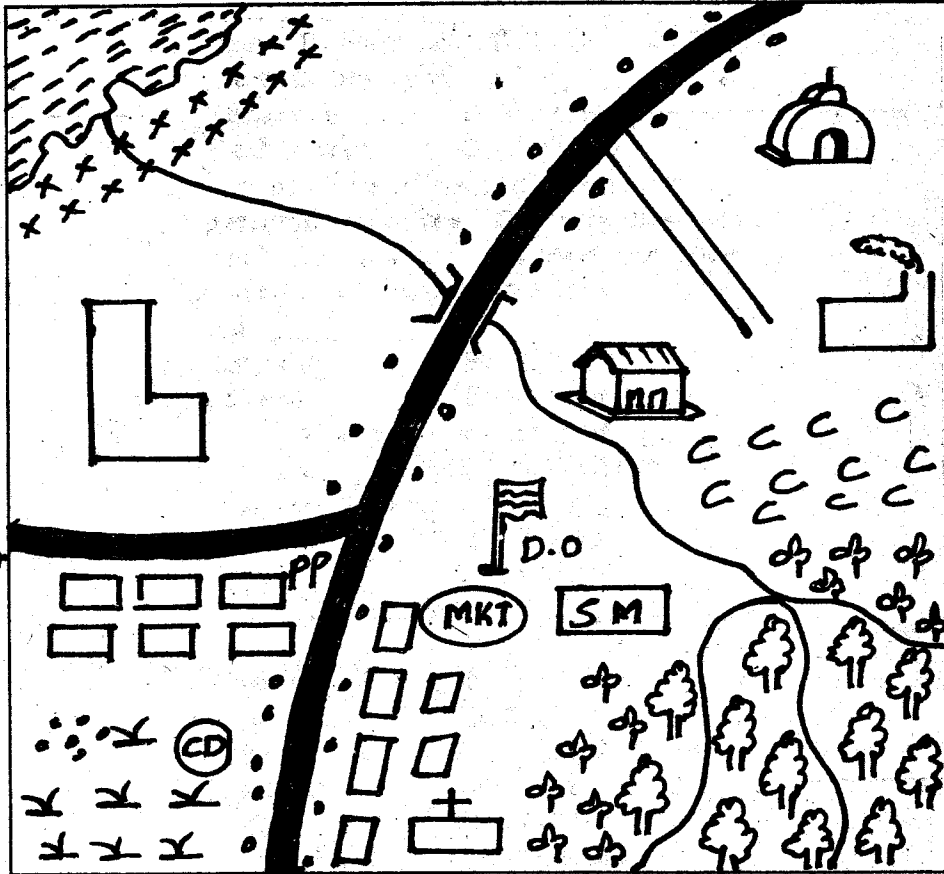
PENPLUS
NANDI

SOCIAL STUDIES/C.RE.

Time: 2 hrs 15 mins

Study the map of Kiahuria Area below and answer questions 1 - 7.

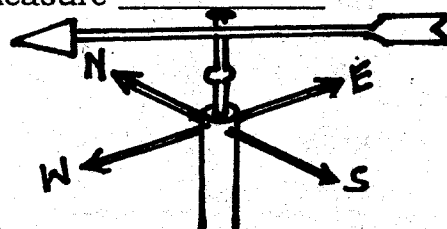
KIAHURIA AREA.



KEY	
	Tea
	Forest
	Tarmac road
	Murrum road
MKT	Market
S.M	Saw mill
C C	Coffee
	Swamp
	Coffee factory
	Tea factory
D.O	District Officer Office
	Shrubs
	River and bridge
	Settlements
	Church
	Mosque
	Permanent buildings
P.P	Police post
	School
	Lake
C.D	Cattle Dip

- What is the direction of the mosque from the cattle dip?
A. North East B. North West
C. South East D. North
- People from the North East of Kiahuria East are LIKELY to be _____
A. Hindus B. Christians
C. Kavonokia D. Muslims
- The head of administration of Kiahuria area is LIKELY to be a _____
A. Chief B. D.O C. D.C D. Elder
- The highest area of Kiahuria area is LIKELY to be _____
A. South East B. North
C. North East D. West
- Which service is LIKELY to lack in Kiahuria area?
A. Education B. Hospital
C. Transport D. Religion
- If a thief was caught at a market in Kiahuria area he is LIKELY to be taken to the _____

- A. market B. D.O office
C. church D. police post
- Which is the major means of transport at Kiahuria area?
A. Road B. Railline C. Air D. Water
- Most rivers in Nyeri county are _____
A. big B. permanent C. seasonal D. small
- A person who belongs to a particular country is called a _____
A. native B. shujaa C. citizen D. refugee
- Which of the following lakes is NOT found in Nyeri county?
A. L. Victoria B. L. Teleki
C. L. Gallery D. L. Hidden
- The instrument below is used to measure _____



- A. the direction of the wind
B. the speed of the wind
C. the amount of rainfall
D. the strength of the wind
12. Cutting down the trees without planting others is _____
A. agro forestry B. deforestation
C. afforestation D. re-afforestation
13. Areas with many people are said to have _____
A. high population density
B. a population
C. low population density
D. a big town
14. Cloud, sunshine, wind and rainfall are the _____ of weather.
A. problems B. elements
C. things D. climate
15. Pigs are MAINLY kept for _____
A. wool B. mutton
C. pork D. beef
16. Which one of the following is NOT a human right?
A. Right to life
B. Right to own property
C. Right to education
D. Right to corruption
17. Sick people can be treated by the following people EXCEPT _____
A. witch doctor B. doctor
C. herbalist D. surgeon
18. The following are Cushites apart from _____
A. Kikuyu B. Somali
C. Rendile D. Oromo
19. Which of the following is NOT grown in Nyeri county?
A. Coffee B. Tea
C. Wheat D. Cocoa
20. The activity where people travel from one place to another for pleasure is called _____
A. visiting B. wildlife
C. tourism D. travelling
21. People who speak in a similar way and use words that are related to each other are called _____
A. communities B. language group
C. Bantus D. Nilotes
22. _____ is a beverage crop.
A. Coffee B. Sisal
C. Pyrethrum D. Wheat
23. Fishing in Nyeri county is carried out in the following rivers EXCEPT _____
A. R. Sagana B. R. Gura
C. R. Thuti D. R. Chania
24. The colour of our flag that represents the blood that was shed during the struggle for independence is _____
A. black B. white
C. red D. green
25. The origin homeland of the Bantu is believed to be _____
A. Congo B. Kenya
C. Somali D. Uganda
26. North, South, East and West are in one word called _____
A. direction B. cardinal points
C. windvane D. places
27. A place that has tall grasses and few scattered trees is called _____
A. forest B. savanna
C. riverine D. mangrove
28. Which one is NOT a way of resolving conflicts in a school?
A. Apologizing
B. Fighting
C. Involving other people
D. Finding the cause of disagreement.
29. The way of life of a certain community is their _____
A. food B. culture
C. place D. cloth
30. Supplying water to the plant is called _____
A. rainfall B. tap
C. irrigation D. fishing
31. Which one is found in the dry area?
A. Cactus B. Bamboo
C. Riverine D. Flowers
32. One of the forms of communication was used in the past. Which one is it?
A. Letters B. Mobile phones
C. Email D. Drum beating
33. Hills, mountains, rivers and valleys are all _____ features.
A. national B. physical
C. direction D. cardinal
34. Most people in our county are _____
A. teachers B. farmers
C. fishermen D. doctors
35. The MAIN source of water is _____
A. lakes B. forest
C. rain D. taps
36. Clothes are made from _____

- A. wood B. timber
C. wool D. clay
37. A long period without rain is called ____
A. floods B. drought
C. cloudy D. windy
38. The name of our deputy president is _____
A. Raila B. Uhuru
C. Kalonzo D. Ruto
39. There are _____ counties in Kenya.
A. 45 B. 47 C. 8 D. 10
40. Which one is the fastest means of transportation?
A. Road B. Railway
C. Air D. Water
41. Vegetation that grows on its own is called _____ vegetation.
A. natural B. planted
C. desert D. mountain
42. Short grass, short trees and scattered thorny bushes are referred to as _____ vegetation.
A. savannah B. scrub
C. desert D. woodland
43. The amount of rainfall is measured in _____ units.
A. millimetres B. millilitres
C. degree D. kilogrammes
44. Cotton, coffee, sisal and pyrethrum are examples of _____ crops.
A. food B. cash
C. subsistence D. fibre
45. Wedding and child naming ceremonies are _____ social activities.
A. happy B. sad C. ugly D. bad
46. Things that we use to make our lives better are called _____
A. natural B. resources
C. man-made D. activities
47. People who kill wildlife animals are called _____
A. killers B. game rangers
C. poachers D. ivory
48. People with special needs have _____
A. disabilities B. abilities
C. security D. money
49. _____ is the buying and selling of goods and services.
A. Hawking B. Fishing
C. Farming D. Trading
50. Removing dead parts of plants is called _____

- A. weeding B. cutting
C. pruning D. harvesting
51. The sun rises in the _____ and sets to the _____
A. West, East B. South, East
C. East, West D. East, North
52. Kamau is facing North. Where is his back facing?
A. North B. East C. South D. West
53. People who keep animals only are called _____
A. shepherds B. pastoralists
C. fishermen D. wildlife
54. On 1st June we celebrate _____ day.
A. Mashujaa B. Jamhuri
C. Labour D. Madaraka
55. The physical feature shown below is a _____



- A. mountain
B. river
C. valley
D. plain
56. A person who runs away from his country due to fighting is called a ____
A. orphan B. refugee
C. athlete D. tourist
57. This is a house of _____
A. Kikuyu
B. Maasai
C. Turkana
D. Pokomo



58. The head of a county is called a ____
A. senator B. governor
C. prime minister D. president
59. Many trees growing together form a _____
A. deforestation B. afforestation
C. forest D. resources
60. Things that are round us form _____
A. environment B. people
C. houses D. air

C.R.E

61. How many lepers were healed by Jesus?
A. 12 B. 11 C. 10 D. 3
62. The following were sons of Noah EXCEPT _____
A. Japheth B. Cain
C. Shem D. Ham
63. When Jesus fed 5,000 people, the small boy brought _____

- A. five loaves of bread and two fish
 B. two loaves of bread and five fish
 C. twelve loaves of bread and two fish
 D. two loaves of bread and twelve fish
64. What did Judas Iscariot do?
 A. Mocked Jesus B. Betrayed Jesus
 C. Denied Jesus D. Crucified Jesus
65. God is happy when we live in _____ with our schoolmates.
 A. hatred B. dishonest
 C. cruelty D. harmony
66. Which of the following is NOT a way of worship?
 A. Singing praises to God.
 B. Praying for a meal
 C. Dreaming about heaven
 D. Saying a prayer in the morning
67. Jesus was crucified in mount _____
 A. Calvary B. Olive
 C. Moriah D. Sinai
68. Young people serve the church by ____
 A. cleaning their home
 B. leading the Sunday school
 C. taking part in school drama
 D. being obedient
69. God made Adam and Eve and put them in the Garden of _____
 A. Moriah B. Adam
 C. Babylon D. Eden
70. God told Moses that His name was ____
 A. I AM B. King
 C. Great D. Immanuel
71. The father of Esau and Jacob was ____
 A. Joseph B. Moses
 C. Isaac D. Abraham
72. The Bible says that God sent Elijah to the town of _____
 A. Bethlehem B. Zarephath
 C. Haran D. Cyrene
73. What work did Levi do before meeting with Jesus?
 A. Tax collector B. Disciple
 C. Apostle of Jesus D. Teaching
74. Christians celebrate resurrection of Jesus Christ during _____
 A. Christmas B. Sabbath
 C. Easter D. Lord's day
75. A good leader and helper should NOT be _____
 A. of good character B. honest
 C. mature in faith D. a lover of money
76. _____ was the son of king David.
 A. Simon B. Joseph
 C. Nathan D. Solomon
77. Which of the following is an importance of sharing work?
 A. It makes working difficult
 B. It promotes unity
 C. It makes working boring
 D. I don't know
78. Abraham and Sarah got a baby called _____
 A. Esau B. Samuel C. Isaac D. Philip
79. Jesus was brought up in _____
 A. Nazareth B. Egypt
 C. Bethlehem D. Jericho
80. Simon of Cyrene helped Jesus to ____
 A. perform miracles B. carry the cross
 C. heal the sick D. feed the poor
81. The arrival of an important person is called _____
 A. birthday B. holy day
 C. advent D. sabbath day
82. "..... wherever you go I will go; where you live. I will live" These words were said by _____
 A. Ruth B. Naomi
 C. Orpha D. Mahlon
83. God tested Abraham's _____ by asking him to sacrifice his only son.
 A. wisdom B. pride
 C. love D. faith
84. Moses led the people of Israel from Egypt to the promised land called _____
 A. Judah B. Galilee
 C. Jerusalem D. Canaan
85. Goliath belonged to the _____ army.
 A. Jews B. Philistines
 C. Romans D. Pharaohs
86. The following are commands of Jesus Christ to His disciples EXCEPT _____
 A. cast out demons
 B. preach the gospel
 C. punish sinners
 D. heal the sick
87. God punished king Ahab and Jezebel for being _____
 A. good B. honest C. unfair D. kind
88. The Masaai call their God _____
 A. Enkai B. Nyasaye
 C. Asis D. Were
89. God is happy when we are _____
 A. poor B. obedient C. lazy D. rude
90. _____ is a very bad skin disease.
 A. HIV/AIDS B. Common cold
 C. Malaria D. Leprosy

NANDI COUNTY

STD 4 - TERM 3

MARKING SCHEME

<u>MATHS</u>		<u>ENGLISH</u>		<u>KISWAHILI</u>		<u>SCIENCE</u>		<u>S/STUDIES</u>		<u>C.R.E.</u>
1. A	31. A	1. A	31. B	1. C	31. B	1. A	31. C	1. A	31. A	61. C
2. B	32. B	2. C	32. C	2. A	32. D	2. C	32. A	2. D	32. D	62. B
3. C	33. C	3. D	33. A	3. B	33. A	3. B	33. D	3. B	33. B	63. A
4. D	34. C	4. B	34. A	4. D	34. C	4. A	34. A	4. A	34. B	64. B
5. B	35. D	5. B	35. C	5. A	35. A	5. C	35. B	5. B	35. C	65. D
6. A	36. C	6. D	36. B	6. D	36. B	6. D	36. D	6. D	36. C	66. C
7. C	37. C	7. C	37. C	7. A	37. D	7. D	37. D	7. A	37. B	67. A
8. A	38. A	8. A	38. D	8. C	38. C	8. A	38. A	8. B	38. D	68. B
9. B	39. A	9. A	39. A	9. C	39. A	9. A	39. C	9. C	39. B	69. D
10. B	40. A	10. C	40. B	10. B	40. C	10. A	40. C	10. A	40. C	70. A
11. D	41. B	11. D	41. B	11. C	41. C	11. C	41. B	11. A	41. A	71. C
12. C	42. C	12. B	42. D	12. A	42. B	12. B	42. A	12. B	42. B	72. B
13. A	43. A	13. A	43. A	13. C	43. C	13. B	43. A	13. A	43. A	73. A
14. D	44. C	14. A	44. C	14. B	44. A	14. D	44. C	14. B	44. B	74. C
15. C	45. A	15. C	45. C	15. B	45. B	15. A	45. B	15. C	45. A	75. D
16. B	46. D	16. C	46. D	16. A	46. D	16. A	46. D	16. D	46. B	76. D
17. B	47. B	17. D	47. D	17. C	47. D	17. C	47. A	17. A	47. C	77. B
18. B	48. D	18. B	48. A	18. D	48. B	18. B	48. B	18. A	48. A	78. C
19. D	49. D	19. C	49. C	19. A	49. B	19. B	49. D	19. D	49. D	79. A
20. A	50. D	20. A	50. B	20. A	50. B	20. D	50. C	20. C	50. A	80. B
21. B		21. A		21. D		21. D		21. B	51. C	81. C
22. A		22. C		22. D		22. D		22. A	52. C	82. A
23. A		23. D		23. C		23. B		23. C	53. B	83. D
24. C		24. D		24. A		24. D		24. C	54. D	84. D
25. C		25. B		25. D		25. B		25. A	55. B	85. B
26. C		26. A		26. A		26. C		26. B	56. B	86. C
27. D		27. A		27. D		27. D		27. B	57. B	87. C
28. D		28. B		28. D		28. B		28. B	58. B	88. A
29. C		29. C		29. C		29. B		29. B	59. A	89. B
30. B		30. D		30. D		30. A		30. C	60. A	90. D

COMPOSITION / INSHA MARKING SCHEME MARKING CRITERION

1. - The composition will be assessed according to the following general guidelines.
 - The maximum mark will be 40 and the minimum mark 01
 - Does the script show that the candidate can communicate accurately, fluently and imaginatively in English

Accuracy (16marks)

- (a) Correct tense and agreement of verbs (4 marks)
- (b) Accurate use of vocabulary (4 marks)
- (c) Correct spelling (4 marks)
- (d) Correct punctuation (4 marks)

Fluency (16 marks)

- (a) Work in the correct order (4 marks)
- (b) Sentences connected and paragraphs (4 marks)
- (c) Correct spelling (4 marks)
- (d) Ideas developed in logic sequence (4 marks)

Imagination (8 marks)

- (a) Unusual but appropriate use of words and phrases (4 marks)
- (b) Variety of structure (4marks)

NB. Please, teachers are requested to scrutinize this marking scheme before use, it is worth.