



005

SOLUTION TRIAL EXAMS 2014 Standard Three

NAME SCHOOL DATE.....

MATHS

1. $7 + 2 + 2 + 3 =$

2. Write 809 in words.

3. $14 - 8 =$

4. $19 - 6 =$

5. 7385 = _____ thousands _____ hundreds _____ tens _____ ones

6. $24 + 31 =$

7. $95 = 11 +$

8. $8 \times 8 =$

9.
$$\begin{array}{r} 845 \\ -146 \\ \hline \end{array}$$

10.
$$\begin{array}{r} 17 \\ -17 \\ \hline \end{array}$$

11. Take away 7 from 16.

12. 3 weeks is the same as _____ days

13. $\frac{1}{2}$ of 20 =

14. $\frac{5}{7} - \frac{2}{7} =$

15. $\frac{1}{4}$ of 20

16. 7 days = _____ weeks

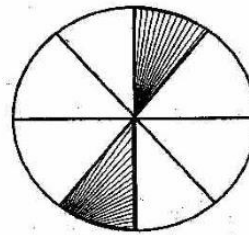
17. $9 \times 8 =$

18. $31 + 320 =$

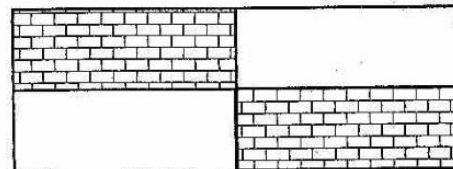
19. 520 = _____ hundreds _____ tens _____ ones.

20. Which fraction is bigger, $\frac{1}{2}$ or $\frac{1}{4}$?

21. What fraction is unshaded?



22. What fraction is shaded?



23. Share 36 mangoes among 9 pupils

24.
$$\begin{array}{r} \text{Weeks} \quad \text{Days} \\ 2 \quad 6 \\ +1 \quad 8 \\ \hline \end{array}$$

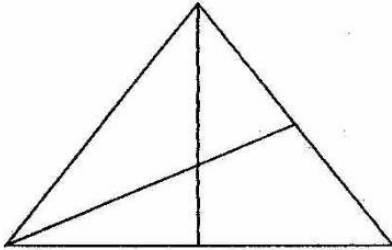
25.
$$\begin{array}{ccccccc} \bigcirc & \bigcirc & \bigcirc & \bigcirc & \bigcirc & & \\ \bigcirc & \bigcirc & \bigcirc & \bigcirc & \bigcirc & & \\ \bigcirc & \bigcirc & \bigcirc & \bigcirc & \bigcirc & & \\ \bigcirc & \bigcirc & \bigcirc & \bigcirc & \bigcirc & & \end{array}$$

_____ x _____ = _____

26. Kamau got 48 marks in English. If he got 32 marks in Maths, how many marks did he get altogether?

27. $2\sqrt{24}$

28. How many triangles are in this figure?



29. $17 + \square = 69$

30. $\square \times 6 = 42$

31. Arrange from the largest to the smallest. 137, 151, 261, 146, 292

32.
$$\begin{array}{r} 80 \\ - 3 \\ \hline \end{array}$$

33.
$$\begin{array}{r} 827 \\ -298 \\ \hline \end{array}$$

34. $5\sqrt{45}$

Write the next number in the series

35. 5, 8, 12, 17 _____

36. 28, 35, 42, 49 _____

37. A year has _____ months

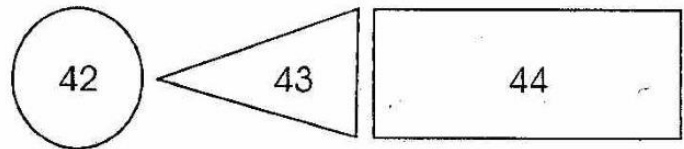
38. The month of April has how many days _____

39. $96 \text{ kg} - 17 \text{ kg} =$

40. $36 \div 9 =$

41. $72 \div 9 =$

Write the names of the shapes



42. _____

43. _____

44. _____

45. $\square - 40 = 12$


46. $9 \times 2 =$

47. $9 \square 7 = 2$

48. $18 \square 10 = 8$

49. Mwangi bought a book for sh.10 and a pencil for sh. 5. How much will he get as a change from sh. 20?

50. $28 - 8 =$



005

SOLUTION TRIAL EXAMS 2014 Standard Three

NAME SCHOOL DATE.....

ENGLISH

Dictation

1. _____
2. _____
3. _____
4. _____
5. _____

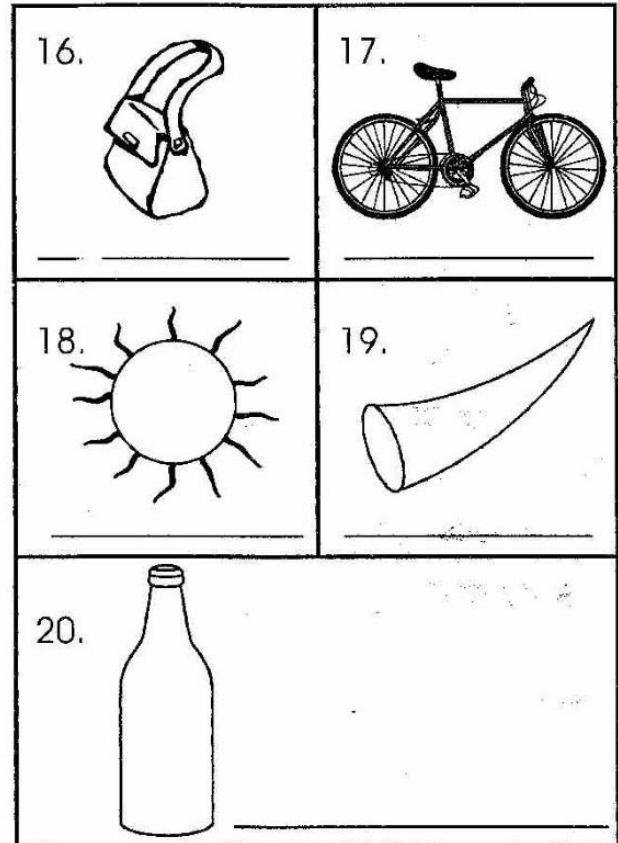
Complete the words.

6. C ___ unt ___ y
7. ___ mbrell ___
8. Ma ___ ke ___
9. Ch ___ ldr ___ n
10. Th ___ ev ___ s

Write well

11. cooslamsr _____
12. wolyle _____
13. iwndwo _____
14. cteubk _____
15. peehs _____

Name the pictures below.



Write the opposite of the underlined words.

21. Kamau's food was hot.
22. Her name was at the bottom.
23. I was the last one to attend.
24. My mother is a teacher.
25. The bottle is full.

Today (present)

yesterday (past)

- 26. Fight _____
- 27. Come _____
- 28. Forgive _____
- 29. Go _____
- 30. Bring _____

Complete correctly.

- 31. As happy as a _____
- 32. As tall as a _____
- 33. As fat as a _____
- 34. As easy as _____
- 35. As cold as _____


Use 'on', 'in', 'under', 'between'.



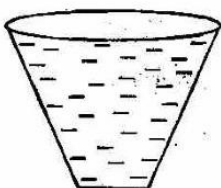
36. The boy is _____ the tree.




37. The ball is _____ the basin.



38. The cup is _____ the table.



39. There is some water _____ the glass.



40. The tree is _____ two ovals.


Write the plurals.

- 41. Story _____
- 42. Glass _____
- 43. Year _____
- 44. Shelf _____
- 45. Church _____

Read the following story and answer questions 46 - 50.

Two weeks ago Kim and his family visited their relatives in the upcountry. By the time they came back it was very late in the evening. His father went to open the front door but was shocked to find it open. "I am sure I locked the door before we left." They got inside and switched on the lights.

- 46. Who was the family going to visit? _____
(Grandmother, Relatives, Cousins)
- 47. It was _____ weeks ago.
(three, two, four)
- 48. They came back late in the _____.
(morning, after lunch, evening)
- 49. They found their front door _____
(open, locked, clean)
- 50. Who went to open the door?
(Kim, His father, His teacher)



005

SOLUTION TRIAL EXAMS 2014

Darasa la Tatu

JINA..... SHULE TAREHE.....

KISWAHILI

Imla

1. _____
2. _____
3. _____
4. _____
5. _____

Panga herufi vizuri uunde maneno sahihi.

6. koafi _____
7. kiginosi _____
8. sakani _____
9. peunye _____
10. mukala _____

Jibu maamkizi yafuatayo.

11. Hujambo? _____
12. Hodi? _____
13. Habari? _____
14. Mtu akiwa mgonjwa utamwambia _____
15. Umeshindaje? _____

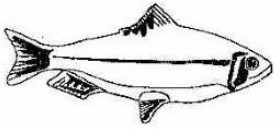




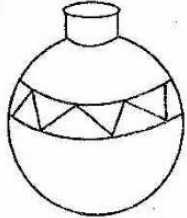
Chora maumbo haya.

16. Mstatili	17. Pembe tatu
18. Duara	19. Mraba
20. Zigizagi	

Kamilisha sentensi hizi.

21. Ng'ombe ana macho _____
22. Kuku hutaga _____
23. Mwalimu wangu anaitwa _____
24. Ninakunywa chai kwa _____
25. "ko darasa la _____
(tatu, mkate, mayai, mawili, manne)

Andika majina

26. 	27. 
28. 	29. 
30. 	31. 

Andika kwa umoja.

32. Meno _____
33. Vikapu _____
34. Teo _____
35. Nyuzi _____
36. Mayai _____
37. Wazungu _____

Andika kwa herufi kubwa.

38. mkanda _____
39. sanduku _____
40. bendera _____

41. hamsini _____

42. ndugu _____

Andika kwa wakati uliopita.

43. Anaenda shuleni leo.

44. Mama yake anaenda sokoni.

Soma taarifa kisha ujibu maswali 45-50.

Hapo zamani paka hakukaa nyumbani na watu. Aliishi msituni. Paka na sungura walikuwa marafiki wa chanda na pete. Paka alikuwa akistaajabia werevu wa rafiki yake. Siku moja mnyama aitwaye funo aligombana na sungura. Wakapigana hata funo akamuua sungura kwa pembe zake. Sungura alitoweka msituni akaenda kuishi na wanadamu.

45. Paka aliishi wapi? _____
(Nyumbani, Msituni, majini)

46. Paka alikuwa rafiki wa nani? _____
(Sungura, Funo, Simba)

47. Kina nani waligombana?
_____ (Paka na sungura, Sungura na Funo, Funo na Paka)

48. Walikuwa marafiki wa _____ na _____

49. _____ alikuwa na pembe.
(Sungura, Paka, Funo)

50. _____ alikufa.
(Funo, Paka, Sungura)



SOLUTION TRIAL EXAMS 2014
Standard Three

NAME SCHOOL DATE.....

READING

Read these words:

- | | | | |
|--------------|--------------|-----------------|--------------|
| 1. Carpenter | 6. Berries | 11. Compound | 16. King |
| 2. Scientist | 7. Sugarcane | 12. Playground | 17. Prison |
| 3. Condition | 8. Mosquito | 13. Surrounding | 18. Gestures |
| 4. Urinal | 9. Crawls | 14. Happiest | 19. Healthy |
| 5. Common | 10. Safe | 15. Chief | 20. Mice |

Read these sentences:

21. The farmer is preparing the land.
22. She is my class teacher.
23. Write the words using capital letters.
24. You may go home now.
25. Do not talk to strangers.

KUSOMA

Soma maneno haya:

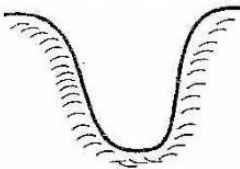
- | | | | |
|-------------|-----------------|-----------------|---------------|
| 1. Samahani | 6. Vitendawili | 11. Jedwali | 16. Taarifa |
| 2. Samawati | 7. Mazingira | 12. Muanzilishi | 17. Thumni |
| 3. Dawati | 8. Ameambukizwa | 13. Sonara | 18. Dhooofika |
| 4. Sakafuni | 9. Kisigino | 14. Rejelea | 19. Pikika |
| 5. Maradhi | 10. Dhamira | 15. Parafujo | 20. Kusimulla |

Soma sentensi hizi:

21. Fedha zote zimeibiwa.
22. Kuna chanjo leo.
23. Mazungumzo kati ya wazazi na walimu.
24. Mkutano utaisha wakati wa jioni.
25. Mtegemea cha nduguye hufa maskini.

NAME SCHOOL DATE.....

SOCIAL STUDIES

1. A _____ is a man-made feature.
(river, mountain, bridge)
2. _____ is the president of Kenya.
(Kibaki, Uhuru, Ruto)
3. Buying and selling goods is called _____.
(market, business, trade)
4. _____ is a cash crop.
(Coffee, Maize, Sorghum)
5. _____ help children in school.
(Teachers, Parents, Guardians)
6. Musliims worship in a _____.
(temple, mosque, koran)
7. This is a _____

 (hill, valley, mountain)
8. Pedestrians cross the _____ at the Zebra-crossing. (bridge, valley, road)
9. Moving air is called _____.
(sunlight, cloud, wind)
10. The four points of a compass are called _____.
(cardinal, direction, compass)

11. Separating husks from grains is called _____.
(digging, farming, winnowing)
12. A funeral is a _____ ceremony.
(sad, happy, good)
13. A _____ is a group of people living together. (family, community, class)
14. The _____ heads a district.
(D.C, D.O, Chief)
15. On our national flag _____ stands for people. (white, red, black)

Match correctly.

Tribe	Name of God
16. Kikuyu	Mulungu
17. Nandi	Enkai
18. Meru	Ngai
19. Maasai	Asis
20. Kisii	Murungu
21. Kamba	Enkoro
22. A maasai house is called _____ (hut, manyatta, Enkai)	
23. Too much rain causes _____ (thirst, floods, drought)	

24. When there is too much wind we say the weather is _____ (rainy, calm, windy)

25. Colour orange in the traffic light means _____ (stop, go, get ready).

26. Most people who live near lakes are _____ (teachers, farmers, fishermen)

27. Houses made of stones and iron-sheets as the roof are said to be _____ (temporary, permanent houses)

28. Rainfall is measured in _____ (m, km, mm)

29. Rivers that have water only during the rainy season are called _____ rivers. (permanent, seasonal, part time)

30. Long ago, people used to send messages by _____ a horn. (beating, blowing)

C.R.E.

31. Moses talked to _____ near a burning bush. (Satan, God, Abraham)

God created.

32. _____

33. _____

34. _____

35. _____

36. _____ obeyed God by building an ark. (Moses, Eli, Noah)

37. Baby Jesus was laid in a _____ (bed, cot, manger)

38. _____ killed his brother. (Abel, Noah, Cain)

39. Goliath was killed by _____ (God, David, John)

40. The first people to see baby Jesus were the _____ (wisemen, shepherds, angels)

41. Children should _____ their parents. (dislike, obey, abuse)

42. Jesus was born in _____ (Nazareth, Judea, Bethlehem)

43. "Give us this day our daily bread" is found in _____. (our Lord's prayer, the apostles creed)

44. Jesus attended a _____ in Cana of Galilee. (funeral, wedding, weeding)

45. _____ is telling the truth always. (Fair, Lie, Honesty)

46. The second book in the new testament is _____. (Matthew, Exodus, Luke, Mark)

47. Our ancestors worshiped in a _____ (shrine, temple, church)

48. God created everything in _____ days. (8, 6, 7)

49. The forefathers of Israel are called _____ (saviour, patriarchs, disciples)

50. Jesus died on _____ (Monday, Tuesday, Sunday, Friday)



005

SOLUTION TRIAL EXAMS 2014

Standard Three

NAME SCHOOL DATE.....

SCIENCE

- Animals kept by farmers are called:-
(cattle, wild, domestic)
- Gestures are _____ that people make with their bodies to tell others something.
(eyes, words, movements)
- The ability to _____ is the sense of sight.
(hear, see, smell, breath)
- Men and boys use _____ for short calls.
(toilets, urinals, latrines)
- _____ is poured around the pit latrine.
(Soap, Water, Ash)
- Fish live in _____
(houses, rooms, water)
- Weather is recorded in a _____
(booklet, weather chart, bible)
- Unwanted plants are called _____
(seedlings, seeds, weeds)
- A _____ spreads malaria.
(tsetsefly, louse, mosquito)
- Dirty _____ keep lice.
(feet, hair, nails)
- Nails should be kept _____ and clean.
(short, long, coloured)
- _____ disease has no cure.
(Malaria, Typhoid, Aids)
- A _____ does not crawl.
(snail, lizard, frog)
- Our ears help us to _____ sound.
(produce, hear, see).

- A mango is a type of a _____
(vegetable, food, fruit).
- An avocado has _____ seed (2, 3, 1)
- A normal person has _____ senses.
(2, 5, 6).

Use this weather chart to answer the questions below.

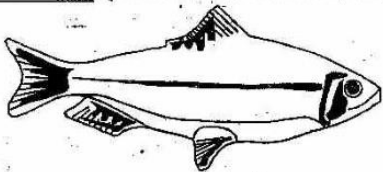
Day	Morning	Afternoon
Monday		
Tuesday		
Wednesday		
Thursday		
Friday		
Saturday		
Sunday		

- It was _____ on Sunday afternoon.
(windy, cloudy, sunny)
- The best day for washing clothes was _____
(Monday, Wednesday, Thursday).
- Which day was rainy throughout? _____
(Monday, Sunday, Tuesday)
- Which day was windy in the morning? _____
(Sunday, Saturday, Friday)
- Which day was cold throughout? _____
(Saturday, Friday, Monday)
- _____ was the hottest day.
(Sunday, Wednesday, Thursday)

Draw a plant and name the parts mentioned below.


24. Flower
25. Stem
26. Leaves
27. Roots
28. Fruits
29. The sun sets in the _____
(East, North, West, South)
30. The sun rises in the _____
(East, North, West, South)

31. A place where animals live is their _____
(habitat, home, bush)

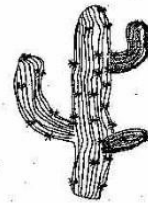


32. The animal shown above is a _____
(tadpole, fish, snake)
33. It lives in _____ (water, home, mud)
34. It moves by _____
(swimming, flying, crawling)
35. Removing sand from water using a piece of cloth is called _____
(pouring, filtering, boiling)
36. Animals which do not live at home are called _____ animals.
(tamed, wild, domestic)
37. Big wheels turn _____ than small wheels.
(faster, slower, same)

38. Plates and spoons must be _____ before serving food.
(cooked, washed, wiped)
39. Which food can be eaten raw? _____
(Meat, Githeri, Fruits)



40. This is a _____
(propeller, balloon, kite)
41. This plant is called _____



- (acacia, maize, cactus)
42. The above plant grows in _____ areas.
(wet, dry, muddy)
43. Trees give us _____
(gas, sun, charcoal)
44. We boil water to kill _____
(air, mosquitoes, germs)
45. A _____ treats sick animals.
(farmer, veterinary, dentist)
46. Milk is _____ in colour.
(red, green, white)

Draw.

47. Hand
48. Panga
49. Carrot
50. Hen