

KIRINYAGA COUNTY



STD 6 - TERM 3

ENGLISH

TIME: 1 hr 40 Min

Read the following passage and answer questions 1 - 15.

"I've just 1 marking your papers. I've 2 to return them to 3 immediately so that you 4 your work before evening. I told you I would 5 most of the work we 6 this year. You should always 7 everything you've 8 taught. There was one 9 of the question which 10 of you found hard. It was about the use of 11 and commas. Those 12 got few marks on this question did not do 13 they were 14 and made a lot of 15 mistakes.

- | | | | |
|-------------------|---------------|-------------|---------------|
| 1. A. finishing | B. finished | C. finish | D. found |
| 2. A. deciding | B. decide | C. decided | D. dicided |
| 3. A. you | B. us | C. them | D. it |
| 4. A. correet | B. collects | C. collect | D. correct |
| 5. A. taste | B. test | C. gave | D. testing |
| 6. A. does | B. done | C. did | D. do |
| 7. A. revise | B. revicce | C. revicce | D. revisse |
| 8. A. be | B. done | C. bat | D. been |
| 9. A. part | B. answer | C. question | D. place |
| 10. A. more | B. most | C. much | D. least |
| 11. A. full stops | B. foolstops | C. fulscaps | D. foolscaps |
| 12. A. which | B. whom | C. who | D. whose |
| 13. A. has | B. as | C. at | D. this |
| 14. A. instruccte | B. instracted | C. instruct | D. instructed |
| 15. A. stupidity | B. errors | C. careful | D. careless |

For questions 16 - 17, find the opposite of the underlined word.

16. The pupils were forbidden to eat the unripe fruits.
 A. accept B. permitted
 C. accepted D. denied
17. Mr. Kipruto is a very humble businessman.
 A. cruel B. kind
 C. good D. proud

For questions 18 - 20, add the correct question tag.

18. A lion eats bones, _____?

- A. isnt it B. is it
 C. does it D. doesn't it
19. My mother likes fish, _____?
 A. doesn't she B. does she
 C. isn't it D. will she
20. Stand up, _____?
 A. shall you B. won't you
 C. will you D. can't you

For question 21, re-arrange the sentence to get a sensible paragraph.

- 21.(i) No wonder everybody has turned to it.
 (ii) Besides, many people prefer it to other means

(iii) Electricity is the fastest means of cooking.

(iv) It is also very economical.

- A. ii,iv,iii,i
- B. iii,iv,ii,i
- C. i,ii,iii,iv
- D. iv,i,ii,iii

For questions 22 - 23, choose the word which correctly fits into the sentence.

22. John hopes _____ his examinations.
- A. failing
 - B. passing
 - C. to passing
 - D. to pass
23. I always _____ when I hear music.
- A. will dance
 - B. danced
 - C. dance
 - D. will dance

For questions 24 - 25, choose the correct pronoun.

24. _____ were rescued by a passing ship near the lonely island.
- A. Our
 - B. Me
 - C. We
 - D. Us
25. Mother and _____ collected sea shells at the sea shore.
- A. me
 - B. I
 - C. we
 - D. they

For question 26, choose the correct sentence.

26. _____
- A. Your name is Mr. Welle?
 - B. Is your name Mr. Welle?
 - C. You are called how?
 - D. Are you Mr. Welle?

Read the passage below and then answer questions 27 to 38.

One Monday morning, Jack and Juma were walking to school when they found three one-thousand shilling notes. Juma picked the money. The boys had never come across so much money before. "What shall we do with this money?" Juma asked. "Share it of course," Jack replied, "You take one thousand five hundred and I take the same. If we buy sweets with it, we can give more than twenty to each of our classmates."

"And then what should we do if someone claimed the money afterwards?" Juma asked. "Who would know that we were the ones who found the money?" Jack asked impatiently, "No one saw us!"

They walked on and met their friends at the school gate. "Listen friends," Jack announced. "This is just the luckiest day for us." He shouted. "We have just found three thousand shillings. We will buy sweets for you everyday for more than two weeks," he said hoping the other boys would help him persuade Juma. But Juma decided to take the money to the headteacher.

The headteacher thanked Juma for his honesty and promised to find the owner of the money. Just after the lessons had started, Njuguna the shopkeeper walked into the headteacher's office. "Good morning Mr. Njenga," Njuguna greeted the headteacher. "Has any of your pupils reported finding any money on their way to school. I remember seeing two boys behind me!"

The headteacher told him about the money Juma brought to the office. He took the money from the drawer and gave it to Njuguna. Juma was called to the office. Njuguna thanked him and promised to buy him two storybooks.

27. What did the boys find on their way to school?
- A. A monkey
 - B. A lion
 - C. A lorry
 - D. Three-one thousand shilling notes

28. Who found the money?
- A. Jack and Juma
 - B. Jack and Njuguna
 - C. Juma and Njuguna
 - D. Njuguna and headteacher

29. What did the boys want to buy with the money?
 A. Toys
 B. Pencils
 C. Sweets
 D. Calender
30. What is the singular of the underlined word friends?
 A. Friends
 B. Enemy
 C. Friend
 D. Fried
31. What did Juma do with the money?
 A. Took the money to his mother
 B. Took the money to the headteacher
 C. Took the money to the nearby police station
 D. Bought a pair of shoes.
32. What was the name of the headteacher?
 A. Juma
 B. Njenga
 C. Jack
 D. Mr. Mwigie
33. Why did the shopkeeper come to the school?
 A. To pay school fees for his children.
 B. To learn
 C. To greet the teacher
 D. To ask whether anyone found the lost money
34. What was the name of the person asking for money?
 A. Njuguna
 B. Jack
 C. Njenga
 D. Juma
35. What is the opposite of the underlined word in the fourth paragraph?
 A. Dishonesty
 B. Obedience
 C. Good
 D. Truthful
36. We can say that Juma and Jack were _____
 A. classmates
 B. brothers
 C. thieves
 D. enemies
37. According to the passage who are we told that he picked that money?
 A. Njuguna
 B. Jack
 C. Juma
 D. Njenga
38. What is the BEST title for the passage?
 A. A school day
 B. Honesty
 C. School boys
 D. Lost keys

Read the following passage and answer questions 39 -50.

Crocodiles are the largest of all reptiles. They are very old animals related to dinosaurs. The first one appeared about 180 million years ago. Since then they have hardly changed. Their front legs are shorter than their back legs just like dinosaurs.

Crocodiles are water animals. They live in lakes and rivers in many parts of the world. In Kenya they are found in fresh water lakes such as L. Baringo, L. Victoria and L. Turkana and in big rivers like R.Tana and Galana. They breathe through their noses, so they often float in water with only the nose and eyes showing.

Crocodiles have long, strong jaws with many teeth used for tearing food. Their skin are very thick and tough. Their backs are covered with hard scales on their long tails. Their tails are used for swimming and for killing their prey. Crocodiles lay eggs with hard white shells. A female lays about 70 eggs and buries them in the sand or in the soil She

then guards the eggs against enemies such as monitor lizard until they hatch about 4-6 weeks later.

Nearly hatched crocodile grows by about 30 cm a year for the first six years, then moves slowly. A crocodile can live for as long as a man and some special species can grow up to 4 metres long. Very young crocodile eat insects and tadpoles. Later they eat fish and frogs. Fully grown crocodile feed on fish, water birds, small animals and even people. They hunt both by day and night. They usually hide in water, swim near their prey and attack it with their tails and their teeth.

39. Crocodiles legs _____
- A. front are long than hind legs
 - B. are like those of a snake
 - C. are like those of a dinosaur
 - D. both front and back are equal
40. In which of these lakes is crocodile not likely to be found?
- A. Lake Turkana
 - B. Lake Victoria
 - C. Lake Baringo
 - D. L. Magadi
41. Crocodile is the family of _____
- A. hippo
 - B. fish
 - C. water buck
 - D. snake
42. Why would the crocodile eggs be hidden in the sand or soil?
- A. To separate the male and the female
 - B. For easy hatching
 - C. For warmth
 - D. For cooling
43. Why would crocodile be seen with only one nose and eye showing?
- A. Swimming techniques
 - B. To enable it to breathe
 - C. It is a hiding method
 - D. To keep cool on hot days
44. A young crocodile can grow by about _____ a year.
- A. 30 mm
 - B. 30 m
 - C. 30 cm
 - D. 70 kg
45. Which of these is NOT the work of the crocodile tail?
- A. Balancing
 - B. Swimming
 - C. Competition
 - D. Killing their prey
46. The crocodiles that usually hide in water and swim near their prey are _____
- A. the young ones
 - B. the enemies
 - C. animals that live in water
 - D. grown up crocodile
47. Crocodiles are believed to be related to _____ due to their appearance.
- A. dinosaur
 - B. tortoise
 - C. elephant
 - D. chameleon
48. It is TRUE to say that crocodiles _____
- A. are 80 million years old
 - B. have changed
 - C. first appeared about 180 million years ago
 - D. are as old as dinosaur
49. Crocodile eggs are in danger of being eaten by _____
- A. hippos
 - B. monitor lizards
 - C. fish
 - D. vultures
50. The BEST title for the passage would be _____
- A. Funny reptiles
 - B. Crocodile eggs
 - C. Dinosaurs succeed by crocodile
 - D. The largest reptiles

WILAYA YA KIRINYAGA

DARASA LA SITA MUHULA WA TATU

PENPLUS
KIRINYAGA

KISWAHILI

Muda. Saa 1 Dakika 40

Chagua maneno mwafaka ujazie mapengo 1 - 15.

Siku 1 vibaya 2 mvua, ngurumo na makeke 3 umeme. Kwa hali 4 kila mtu alilazimika kwenda kulala 5 ya wakati wa kawaida. Mmuliko 6 ulipenya nyumbani 7 mkawa mweupe 8. Dakika 9 nilisikia mnazi 10 na mbele barazani kitu kikichugachuga, 11 kilikuwa kikibari mvua. Dhana 12 ziliniambia 13 ni nyamaume mawindoni 14 nikaupinda mgolole wangu kutoka unyagoni hadi 15 na mara nikalala kabisa.

- | | | | |
|-------------------|---------------|---------------|--------------|
| 1. A. ilikuchwa | B. ilikucha | C. imekucha | D. ilikuta |
| 2. A. kuwa | B. kua | C. kwaa | D. kwa |
| 3. A. la | B. za | C. ya | D. wa |
| 4. A. hilo | B. hicho | C. hilo | D. hiyo |
| 5. A. baada | B. kabla | C. mwisho | D. mwanzo |
| 6. A. mmoja | B. umoja | C. moja | D. kimoja |
| 7. A. kwangu | B. yangu | C. mwangu | D. pangu |
| 8. A. che! | B. pe! | C. til | D. mwa! |
| 9. A. lile lile | B. ule ule | C. ile ile | D. yale yale |
| 10. A. unaanguka | B. ikianguka | C. imeanguka | D. ukianguka |
| 11. A. kikituhumu | B. nikituhumu | C. sikituhumu | D. ukatuhumu |
| 12. A. yangu | B. wangu | C. zangu | D. changu |
| 13. A. kua | B. kuua | C. kwa | D. kuwa |
| 14. A. baadaye | B. basi | C. alafu | D. ilhali |
| 15. A. utosi | B. kichwa | C. utosini | D. wayoni |

Katika maswali 16 - 30, jibu kulingana na maagizo.

16. Nyambua kitenzi imba katika kauli ya kutendwa.
A. imbiwa B. imbana
C. imbisha D. imbwa
17. Maana ya neno meza ni aina ya samani. Maana ya pili ya neno hili ni _____
A. tafuna kitu
B. tia kitu mdomoni
C. ramba kitu
D. pitisha kitu kooni hadi tumboni
18. Andika sentensi hii katika umoja;
Nyanja zenye nyasi ni hizi.

- A. Uwanja wenye kinyasi ni huu.
B. Uwanja wenye nyasi ni huu.
C. Uwanja wenye unyasi ni huu.
D. Uwanja wenye unyasi ni hizi.
19. Shairi lenye mishororo mitano katika kila ubet linaitwa _____
A. tathnia B. takhmisa
C. tasadisa D. tarbia
20. Tumia "-nyewe" vyema.
Kufaana _____ kunafaa.
A. enyewe B. mwenyewe
C. chenye C. kwenyewe
21. _____ ni chombo kinachotumiwa na seremala kutobolea mashimo katika mbao.

- A. Kinu B. Msumeno
C. Keekee D. Nyundo
22. Kanusha sentensi hii;
Kuandika kwake kunavutia.
A. Kuandika kwenye hakuvuti.
B. Kutoandika kwako kunavutia.
C. Kutoandika kwao kakuvutii
D. Kutoandika kwake hakuvutii
23. Meli ya kivita ambayo hupitia chini ya bahari huitwaje?
A. Nyambizi B. Manowari
C. Mashua D. Majahazi
24. Tumia a _ unganifu sahihi.
Vyerehani _____ babu.
A. za B. vya C. cha D. la
25. Tumia ndi - kwa ushahihi.
Makazi yetu _____ yalivamiwa.
A. ndiyo B. ndizo
C. ndio D. ndilo

26. Kamilisha methali;
Mwenye macho haambiwi _____
A. tazama B. afumbe macho
C. atoroke D. karibu
27. Neno soko liko katika ngeli gani?
A. U - I B. A - WA C. LI - YA D. U - ZI
28. Tegua kitendawili. Nameza lakini sishibi.
A. Mate B. Maji C. Chakula D. Jua
29. Uganisha sentensi hizi mbili.
Huyu si mwizi. Huyu ni mnyang'anyi.
A. Huyu si mwizi ila mnyang'anyi.
B. Huyu si mwizi na mnyang'anyi.
C. Huyu ni mwizi si mnyang'anyi.
D. Huyu si mwizi wala mnyang'anyi.
30. Simba huishi pangoni. Je, konokono anaishi wapi?
A. Mchangani B. Kombeni
C. Mashimoni D. Zizini

Soma habari ifuatayo kisha ujibu maswali 31.40.

Askari wa Shirika la Huduma kwa Wanyamapori alijeruhiwa jana baada ya kuangukiwa na ndovu aliyekuwa akisafirishwa kutoka hifadhi ya wanyama ya Shimba Hills hadi mbuga ya Tsavo. Ililazimu Bi. Elsie Wairimu Maina kusafirishwa kwa halikopta hadi hospitalini, jijini Mombasa. Bi. Wairimu aliangukiwa na ndovu mwenye uzani wa kilo elfu tano aliyekuwa katika trela tayari kuhamishwa. Bi. Wairimu ambaye ni mtaalamu wa maabara alikuwa akimkagua ndovu huyo wakati alipoteleza na kuanguka.

Kulingana na mtayarishi wa shughuli hiyo Bw. Moses Litoroh, ndovu huyo alikuwa wa tano kuhamishwa. Bw. Litoroh alisema ajali hiyo ilisababishwa na utelezi uliotokana na mvua kubwa iliyonyesha katika sehemu hiyo. Bi. Wairimu alilazwa katika hospitali ya Aga Khan Mombasa. Shughuli hiyo ya kuwahamisha ndovu ni ya awamu ya pili na ilianza mnamo Jumamosi. Shirika la Huduma kwa wanyamapori linatarajia kuwahamisha ndovu 250 katika awamu ya pili kutoka Shimba Hills. Katika awamu ya kwanza ndovu 150 walihamishwa.

31. Ni shughuli ipi iliyokuwa ikitelelezwa katika hifadhi ya wanyamapori ya Shimba Hills?
A. Kuwatibu ndovu
B. Kuwasaka ndovu
C. Kuwauwa ndovu
D. Kuwahamisha ndovu
32. Jina la askari aliyejeruhiwa ni _____
A. Bi. Elsie Wambui

- B. Bi. Elsie Wairimu
C. Bw. Lotodo
D. Bw. Moses Litoroh
33. Ndovu aliyemuumiza askari alikuwa amewekwa wapi?
A. Chini ya gari
B. Juu ya trela
C. Nje ya trela
D. Katika trela

34. Ni kitu gani kilichosababisha ajali hiyo?
 A. Tope jingi
 B. Utelekezaji
 C. utekelezaji
 D. Utelezi
35. Ndovu aliyemjeruhi askari alikuwa na uzito wa kilo ngapi?
 A. Nne
 B. Tano
 C. Eflu tano
 D. Eflu mbili
36. Askari aliyejeruhiwa alikimbizwa katika hospitali ya Aga Khan katika mji wa _____
 A. Mombasa
 B. Nairobi
 C. Taita Taveta
 D. Voi
37. Ndovu wanaohamishwa Shimba Hills wanapelekwa wapi?
 A. Tsavo
 B. Maasai Mara
 C. Amboseli
 D. Mlima Kenya
38. Ikiwa awamu ya pili itakamilika basi ni ndovu wangapi kwa jumla watakuwa wamehamishwa?
 A. Mia tano
 B. Mia nne
 C. Mia tatu na tano
 D. Mia tatu
39. Kutoka pale ajali ilipotokea hadi hospitalini, mwathiriwa alisafirishwa namna gani?
 A. Kwa trela
 B. Kwa gari
 C. Kwa trakta
 D. Kwa helikopta
40. Kutokana na makala haya, ni dhahiri shahiri kuwa ajali haina kinga _____
 A. wala kafara
 B. wala tiba
 C. wala kaburi
 D. wala kizuizi

Soma makala haya kisha ujibu maswali 41 - 50.

Ilikuwa siku ya Jumamosi. Mzee Katululu alizua ghasia na kuwaamsha wanakitongoji cha Kanzokea. Mayowe katika nyumba ya mzee Katululu yalikitithiri. Ulikuwa wakati wa alfajiri. Wake kwa waume, wazee kwa vijana na mabibi kwa mabwana wote walielekea kwa mzee Katululu.

“Mume wangu Aah! mume wangu ataniua. Ta - fa - dhal nio - nee huruma !,” Aziza, bibiye mzee Katululu alilia kwa uchungu. Punde wanakijiji walipofika, walikumbana na mayowe ya Aziza. Mzee Katululu alikuwa ameufunga mlango ndi huku akimpiga mkewe mateke na ngumi.

“Fungua hapa ama tuuvunje mlango,” Babu Sokomoko, mmoja wa majirani alifoka. Mzee Katululu aliufungua mlango. Lo! Alikuwa amelewa chopi. “Nyinyi, ngoja nitawaonyesha mchezo wangu,” alichukua sime na kutoka nje ambapo alikabiliana na umati wa watu. Kabla hajafanya lolote, alipokonywa upanga huo na kuzabwa makofi na wanakijiji. “Basi yametosha. Nimesikia. Msiniuue,” aliomba.

“Inuka bwege wewe. Siku nyingi umetuchosha. Unampiga Aziza kama punda ukisingizia ulimaliziwa chakula kwani ulilala wapi? Hata chakula chenyewe hununui. Umekuwa panya wa nyumbani. Hapo pako umaskini umezidi kwa kuwa umekataa kuacha pombe. Hebu watazame wanao! Wanavaa mararu na wamefukuzwa shuleni! Kisa na maana, huwashughulikii tena. Leo utakiona cha mtemakuni,” Babu Sokomoko alieleza. Wale wazee wenzake walishirikiana bega kwa bega kumfungua mzee Katululu mikono na

miguu kwa kamba. Ilibidi mzee huyo katili apelekwe mbele ya baraza la wazee ili apewe adhabu.

- | | |
|--|---|
| <p>41. Siku ya tukio ilikuwa Jumamosi wakati wa _____</p> <p>A. alasiri
B. aduhuri
C. mapambazuko
D. jioni</p> <p>42. Wanakijiji ni wenye kujali, kwa sababu _____</p> <p>A. walielekea kwa mzee Katululu, Aziza alipopiga mayowe.
B. walipuuza mayowe ya Aziza
C. Mzee Katululu alikuwa hajijui kwa ulevi
D. Aziza alilia kwa uchungu</p> <p>43. Ni nani aliyekuwa akipiga kamsa?</p> <p>A. Aziza
B. Wanawe mzee Katululu
C. Mzee Katululu
D. Furu</p> <p>44. Ni tanakali ipi ya sauti ambayo imetumiwa katika habari hii?</p> <p>A. Lala fofofo
B. Funga mlango ndi
C. Lia kwi kwi kwi
D. Teleza prrr</p> <p>45. Kwa nini mzee Katululu aliufungua mlango?</p> <p>A. Aliamrisha na wanakijiji
B. Alitii
C. Alimwonea Aziza huruma
D. Alitaka kupigana na wanakijiji</p> <p>46. Upanga wenye makali pande zote mbili huitwa _____</p> | <p>A. jambia
B. kisu
C. sime
D. podo</p> <p>47. Ni kitu gani kilichomfanya Aziza kupigwa?</p> <p>A. Alikataa kumbakishia mumewe chakula
B. Alikataa kumpikia mumewe chakula
C. Alikuwa mkaidi kwa mumewe
D. Alitaka kuachana na mumewe</p> <p>48. Wanawe mzee Katululu walivaa mararu kwa sababu _____</p> <p>A. baba yao aliwapiga
B. baba yao hakuwanunulia nguo nzuri
C. baba yao alikuwa mkali
D. baba yao alitumia pesa zote ulevini</p> <p>49. Kitendo cha mzee Katululu kuzua fujo kilikuwa _____</p> <p>A. cha siku moja
B. cha mara tatu kwa wiki
C. adimu
D. jambo alilozoea kufanya siku nyingi</p> <p>50. Ni methali ipi ambayo ingeafiki hali ya mzee Katululu kupelekwa kwa baraza la wazee?</p> <p>A. Macho hayana pazia.
B. Mtaka cha mvunguni sharti ainame
C. Amaji haiji ila kwa ncha ya upanga.</p> |
|--|---|

KIRINYAGA COUNTY

PENPLUS
KIRINYAGA

STD 6 - TERM 3 MATHEMATICS

Time: 2 hours

1. Write six million seventy five thousand, eight hundred and thirty seven in symbols.

A. 6,075,837 B. 60750873
C. 60758370 D. 60750873

2. What is the place value of digit 6 in the product of 0.08 and 0.08?

A. Tenths B. Thousandths
C. Thousands D. Hundredths

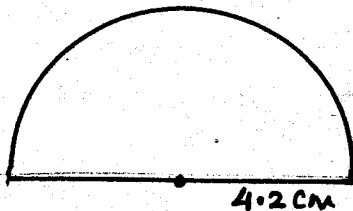
3. Round off 596485 to the nearest thousand.

A. 590000 B. 597000
C. 600,000 D. 596000

4. Express 0.086 and as a percentage.

A. 86% B. 8.6%
C. 0.86% D. 0.086%

5. What is the perimeter of the semi-circle below? ($\pi = \frac{22}{7}$)

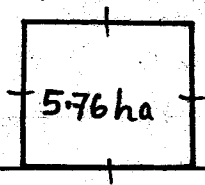


A. 13.2 cm B. 13.86 cm
C. 21.6 cm D. 44 cm

6. Find the G.C.D of 15, 18 and 24.

A. 72 B. 90
C. 3 D. 15

7. The area of the square below is 5.76 ha. Calculate the perimeter.



A. 960 m B. 240 m
C. 24 m D. 480 m

8. Arrange the following fractions in ascending order.

$\frac{5}{8}, \frac{4}{9}, \frac{1}{3}, \frac{3}{4}$

A. $\frac{3}{4}, \frac{5}{8}, \frac{4}{9}, \frac{1}{3}$

B. $\frac{1}{3}, \frac{4}{9}, \frac{5}{8}, \frac{3}{4}$

C. $\frac{1}{3}, \frac{5}{8}, \frac{4}{9}, \frac{3}{4}$

D. $\frac{1}{3}, \frac{3}{4}, \frac{4}{9}, \frac{5}{8}$

9. What is the square root of $12\frac{1}{4}$?

A. $1\frac{3}{4}$ B. $3\frac{1}{2}$

C. $3\frac{1}{4}$ D. $3\frac{2}{3}$

10. How many $\frac{1}{4}$ kg packets of tea leaves can be packed from a 50 kg bags?

A. 100 B. 25

C. 200 D. 150

11. Express 0.65 as a fraction to the simplest form.

A. $\frac{65}{100}$

B. $\frac{13}{20}$

C. $\frac{13}{50}$

D. $\frac{6.5}{100}$

12. Komu has sh. 432376 in his account while Ondieki has sh. 384496 in his account. How much money do they have altogether?

A. 47880

B. 816872

C. 817772

D. 47880

13. Work out

$3\frac{2}{5} + 3\frac{1}{8} - 1\frac{1}{4}$

A. $5\frac{11}{40}$

B. $5\frac{1}{10}$

C. $7\frac{11}{40}$

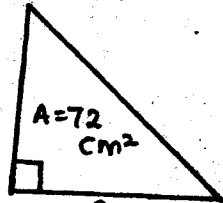
D. $3\frac{11}{40}$

14. Work out;

$720048 \div 24$

- A. 320 B. 3002
C. 30020 D. 30002

15. Find the height of the triangle below if its area is 72 cm^2 .



- A. 24 cm B. 18 cm
C. 32 cm D. 12 cm

16. Change 72 km/hr to m/sec .

- A. 12 m/s B. 20 m/s
C. 18 m/s D. 200 m/s

17. A tank has a capacity of 15500 dl . What is the capacity of the tank in litres?

- A. 15.5 L B. 155 L
C. 1550 L D. 15500 L

18. Use $<$, $=$ or $>$ to make statement correct.

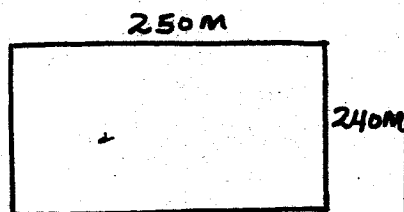
$\frac{1}{4}$ of 20 _____ 8

- A. = B. None
C. > D. <

19. Fatuma took 480 seconds to walk from home to market. How many minutes does she take to walk from home to market?

- A. 48 min B. 8 min
C. $1\frac{1}{2}$ min D. 6 min

20. What is the area of the figure below in ares?



- A. 600 B. 6
C. 60 D. 6000

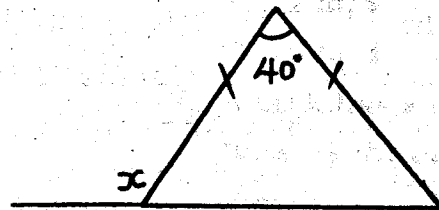
21. The price of Nissan matatu is sh. 1,258,000 and a van is sh. 1,805,000. By how much is the matatu cheaper than van?

- A. 1,258,000 B. 57,400
C. 1,805,000 D. 547,000

22. Work out the sum of XXIV and XCV.

- A. 110 B. 119
C. 95 D. 109

23. In the diagram below, what is the size of angle marked X?



- A. 70° B. 110° C. 40° D. 140°

24. Express $\frac{1}{4}$ as a percentage.


- A. 25% B. 0.25%
C. 40 D. 0.025

25. Work out;

Hrs	min	sec
15	30	31
-5	20	15

- A. 10 hrs 10 min 16 sec
B. 20 hrs 50 min 45 sec
C. 20 hrs 10 min 16 sec
D. 10 hrs 16 sec

26. How many triangles are in the figure below?

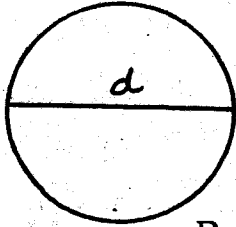


- A. 8 B. 6 C. 9 D. 10

27. Convert $4\frac{1}{5} \text{ kg}$ into grams.

- A. 420 g B. 4200 g
C. 42000 g D. 0.42 g

28. Find the diameter of the circle whose circumference is 88 cm. (Take $\pi = \frac{22}{7}$)



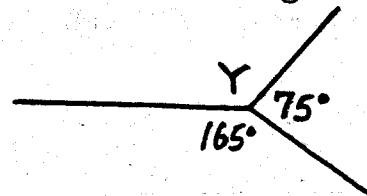
- A. 20 cm B. 28 cm
C. 14 cm D. 7 cm
29. Work out $3\frac{1}{8} + 6\frac{1}{4}$
A. 8 B. 4
C. $\frac{1}{2}$ D. $1\frac{1}{2}$
30. What is the supplementary angle of $14\frac{1}{2}^\circ$
A. $65\frac{1}{2}^\circ$ B. $75\frac{1}{2}^\circ$
C. $165\frac{1}{2}^\circ$ D. $126\frac{1}{2}^\circ$
31. Wanyiri bought a cow for sh. 35,000. He later sold it at sh. 60,000. What was the percentage profit?
A. $70\frac{3}{7}\%$ B. 70%
C. $71\frac{3}{7}\%$ D. 71%
32. Solve for x;
 $\frac{2}{3}(6x - 12) = 2x + 4$
A. 3 B. 12
C. $1\frac{1}{3}$ D. 6
33. Wanderi slept at 9.30 pm and woke up the following morning at 6.30 am. How many hours had he been sleeping?
A. 9 hrs 50 min
B. 9 hrs
C. 9 hrs 36 min
D. 9 hrs 30 min
34. Which one of the following fractions is not a recurring decimal?
A. $\frac{10}{13}$ B. $\frac{16}{20}$
C. $\frac{11}{15}$ D. $\frac{2}{7}$

35. Janet bought the following items from a shop;

- 2 kg sugar @ sh. 90
 $4\frac{1}{2}$ kg unga @ sh. 80
1 bar soap for sh. 140


If she paid using a two five hundred shilling note, what was her balance?

- A. sh. 220 B. sh. 320
C. sh. 540 D. sh. 680
36. What is $(2.4)^2$?
A. 5.76 B. 480
C. 4.8 D. 57.6
37. Calculate the distance covered by a car moving at a speed of 80 km/hr in 1 hr.
A. 140 km B. 70 km
C. 80 km D. 80 m
38. The scale used in a map is 1 cm represent 50 m. What will be the drawing length for 350 m?
A. 300 cm B. 400 cm
C. 7 cm D. 10 cm
39. What is the next number in the series; 1.21, 1.44, 1.69, 1.96, _____
A. 2.25 B. 3.24
C. 1.96 D. 1.86
40. Find the product of faces and edges of a closed cuboid.
A. 18 B. 48
C. 96 D. 72
41. What is $7\overline{)1}$ correct to 3 decimal places?
A. 0.143 B. 0.140
C. 0.142 D. 0.1429
42. Find the size of the angle marked Y.



- A. 240° B. 120°
 C. 105° D. 15°

43. How many cubes are in the stack below?



- A. 56 B. 45 C. 54 D. 50

44. Work out;


- 6t 45 kg 20 g + 4
 A. 1 t 511 kg 055 g
 B. 1 t 501 kg 255 g
 C. 1 t 511 kg 255 g
 D. 1 t 510 kg 225 g

45. Work out the following;

$$\begin{array}{r} 74 \overline{)30192} \end{array}$$

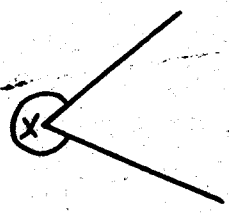
- A. 40008 B. 408
 C. 48 D. 4008

46. What is the area of the figure below?



- A. 28 B. 180 cm^3
 C. 180 cm D. 180 cm^2

47. The angle marked X is _____



- A. acute B. right angle
 C. reflex D. obtuse

48. The weight of 6 pupils in a class are as follows; 40 kg, 35 kg, 48 kg, 39 kg, 38 kg and 40 kg. What was their average weight?

- A. 40 kg B. 30 kg
 C. 45 kg D. 39 kg

The table below shows the number of people who attended a party in Golden Hotel Nyeri. Use it to answer questions

49 - 50.

	Men	Women	Children
No. of people	750	340	420

49. If the total number of people invited was 1600, how many people failed to turn up?

- A. 420 B. 90
 C. 1510 D. 1090

50. How many more men than women attended the party?

- A. 730 B. 330
 C. 340 D. 410

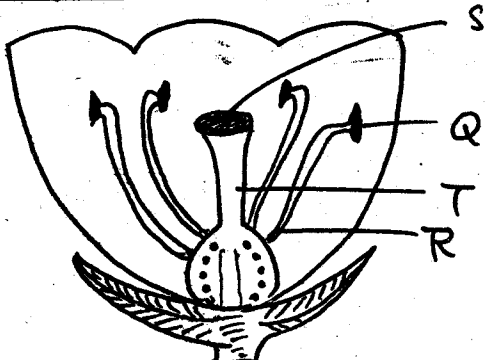
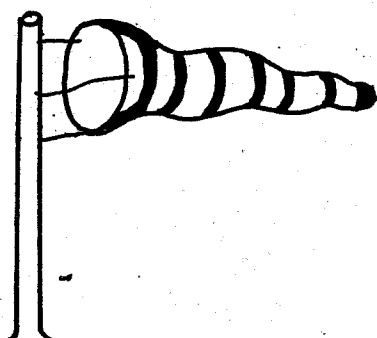
KIRINYAGA COUNTY

PENPLUS
KIRINYAGA

STD 6 - TERM 3

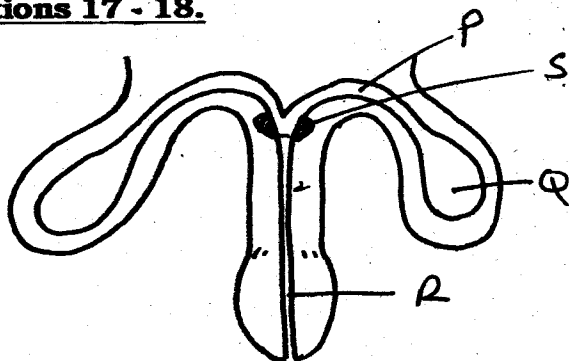
SCIENCE

Time: 1hr 40 min

- Which one of the following heavenly bodies is NOT a member of solar system?
A. Moon B. Comets
C. Sun D. Star
 - Which one of the following sets consists of only green non-flowering plants?
A. Mould, cedar, fern
B. Algae, pine, puffball
C. Fern, lichen, moss
D. Toadstool, mould, algae
 - Which part of a flower has the same function as ovum in female human being?
A. Pistil B. Ovary
C. Ovules D. Pollen grains
- The diagram below shows parts of a flower. Study it and then answer questions 4 - 5.**
- 
- Which two parts represent the stamen?
A. Q and R B. S and T
C. Q and S D. T and R
 - Which of the labelled parts receive the male cells during pollination?
A. Q B. R
C. T D. S
- B.C.G vaccine is given to immunize someone against _____
A. tuberculosis B. malaria
C. polio D. measles
 - Which one of the following is NOT a factor that influence the rate of soil erosion?
A. The steepness of the land
B. Presence of ground cover
C. Size of soil particles
D. Rainfall intensity
 - All the following are rotational grazing methods EXCEPT _____
A. paddocking B. herding
C. strip grazing D. tethering
 - Which of the following shows the correct order of change of state?
A. Ice - vapour - water
B. Vapour - ice - water
C. Ice - water - vapour
D. Water - ice - vapour
 - Which of the following items can its mass be measured in tonnes?
A. Bicycle B. Test book
C. Lorry D. Goat
 - The weather instrument below will measure the following EXCEPT _____
- 

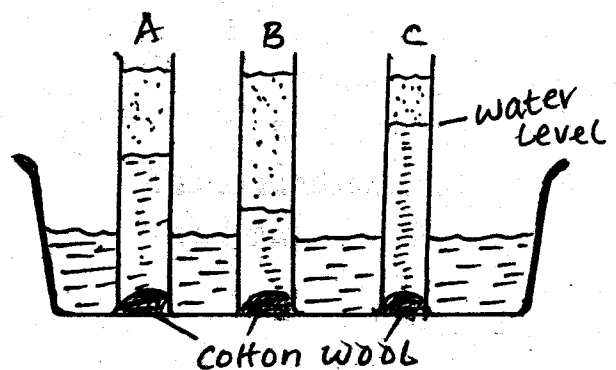
- A. measure wind strength
 - B. show direction of wind
 - C. temperature of wind
 - D. give an idea of wind speed
12. Some goats have their skin covered with long hair. The long hair is called _____
- A. wool
 - B. merino hair
 - C. fur
 - D. mohair
13. All mammals do not _____
- A. give birth
 - B. have mammary glands
 - C. have hairy bodies
 - D. have a constant body temperature
14. Name the first digestive juice.
- A. Insulin
 - B. Bile
 - C. Intestinal juice
 - D. Saliva
15. _____ is both a traditional and a modern method of food preservation.
- A. Refrigeration
 - B. Canning
 - C. Use of honey
 - D. Drying
16. Which of the following planets are in the second, fifth and eighth position respectively from the sun?
- A. Venus, Jupiter, Neptune
 - B. Uranus, Jupiter, Neptune
 - C. Mars, Saturn, Uranus
 - D. Earth, Saturn, Uranus

Use the following diagram to answer questions 17 - 18.



17. Name the part marked S.
- A. Glands
 - B. Testis
 - C. Penis
 - D. Urethra
18. What is the function of the part marked P?
- A. Allow semen to pass the testis to the urethra.
 - B. Allow sperms to pass from the testis to the urethra
 - C. Produce sperms
 - D. Produce semen fluids
19. Which one of the following is NOT a part of loam soil?
- A. Humus
 - B. Clay
 - C. Gravel
 - D. Sand
20. Which of the following diseases is LIKELY to occur in adolescent girls?
- A. Marasmus
 - B. Anaemia
 - C. Rickets
 - D. Kwashiorkor
21. Typhoid fever affects the _____
- A. intestines
 - B. stomach
 - C. lungs
 - D. heart

Study the diagram below and answer the questions 22 - 23.



22. What is the purpose of cotton wool?
- A. To absorb water
 - B. To filter the water
 - C. To prevent soil from dropping out of the tube.
 - D. To separate water from the soil

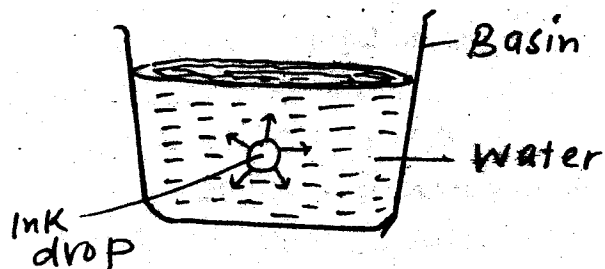
23. What type of soil is LIKELY to be in tube C?
 A. Gravel B. Clay
 C. Sand D. Loam
24. Clouds are grouped according to the following EXCEPT _____
 A. shape B. height
 C. appearance D. time
25. The pressure exerted by liquids depend on the _____
 A. volume B. height
 C. type of liquid D. depth
26. Which planet can easily be seen early in the morning in the East?
 A. Venus B. Pluto
 C. Earth D. Mars
27. The following physical changes take place in boys only EXCEPT _____
 A. increase in weight and height
 B. chest broaden
 C. beards grow
 D. experience wet dreams
28. The parasite that cause malaria is called _____
 A. anopheles mosquito
 B. curex mosquito
 C. plasmodium
 D. bacteria
29. During germination, the following steps take place. Which is the third step?
 A. Radicle comes out.
 B. The seed coat bursts
 C. The seed absorbs water
 D. The seed swells
30. Which of the following methods of livestock feeding contributes to soil erosion?

- A. Paddockling B. Stall feeding
 C. Herding D. Tethering

31. The second D.P.T vaccine is given at _____

- A. 10 weeks B. birth
 C. 9 months D. 6 weeks

32. A std 5 pupil dropped ink in a glass of water as shown below.



Which one of the following explains how the ink drop spread in water?

- A. Radiation B. Osmosis
 C. Capillarity D. Diffusion

33. Which of the following sources of water are human - made?

- A. Well, stream, pond
 B. Pond, borehole, spring
 C. Dam, well, borehole
 D. Spring, dam, well


34. To preserve food in areas with no electricity, one can use a _____

- A. deep freezer B. cold room
 C. charcoal cooler D. refrigerator

35. Which is the MOST effective way of preventing AIDS among unmarried people?

- A. Using condoms
 B. Abstinence
 C. Having sex with one partner only
 D. Attending AIDS seminars

36. The diagram below shows a method of feeding livestock.



The method shown is _____

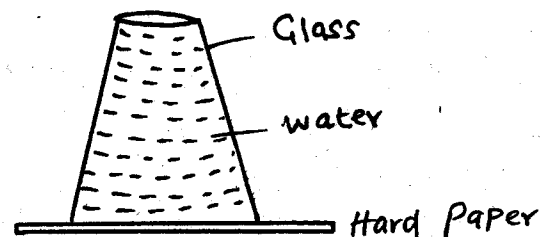
- A. strip grazing B. paddocking
 C. tethering D. stall feeding
37. Rain drops bring about _____ erosion.
 A. rill B. splash
 C. sheet D. gully
38. Which form of energy causes matter to increase in volume?
 A. Light B. Heat
 C. Sound D. Electricity
39. A person infected with HIV/AIDS lacks natural protection against diseases. This is known as _____
 A. acquired B. deficiency
 C. syndrome D. immunity
40. Which one of the following materials can be used as a pesticides?
 A. Cow dung B. Sand
 C. Wood ash D. Saw dust
41. In the table below, which food is NOT matched with the method of preservation?

	Food	Method of preservation
A	Beans	Drying
B	Tea leaves	Smoking
C	Fish	Freezing
D	Meat	Use of honey

42. Which of the following is NOT a use of heat?
 A. To dry grains B. To iron clothes
 C. To light a house D. To cook

43. Which of the following parts of a flower does NOT belong to pistil?
 A. Ovary B. Stigma C. Style D. Sepal.
44. Which of the following is NOT a colour of the spectrum?
 A. Indigo B. Violet C. Purple D. Red
45. The planet that takes the shortest time to complete its revolution is _____
 A. Earth B. Saturn
 C. Venus D. Mercury
46. Which one of the following pair of processes requires an increase in temperature?
 A. Melting and freezing
 B. Freezing and condensation
 C. Melting and evaporation
 D. Melting and condensation
47. Wearing protective clothing while walking in swampy area will prevent _____
 A. cholera B. malaria
 C. bilharzia D. typhoid
48. The organ that produces bile is _____
 A. liver B. gall bladder
 C. pancreas D. duodenum

Study the diagram below and answer question 49.



49. The experiment shows that air _____
 A. occupies space B. exerts pressure
 C. has weight D. has mass
50. Materials through which light cannot pass are said to be _____
 A. transparent B. opaque
 C. mirror D. translucent

KIRINYAGA COUNTY

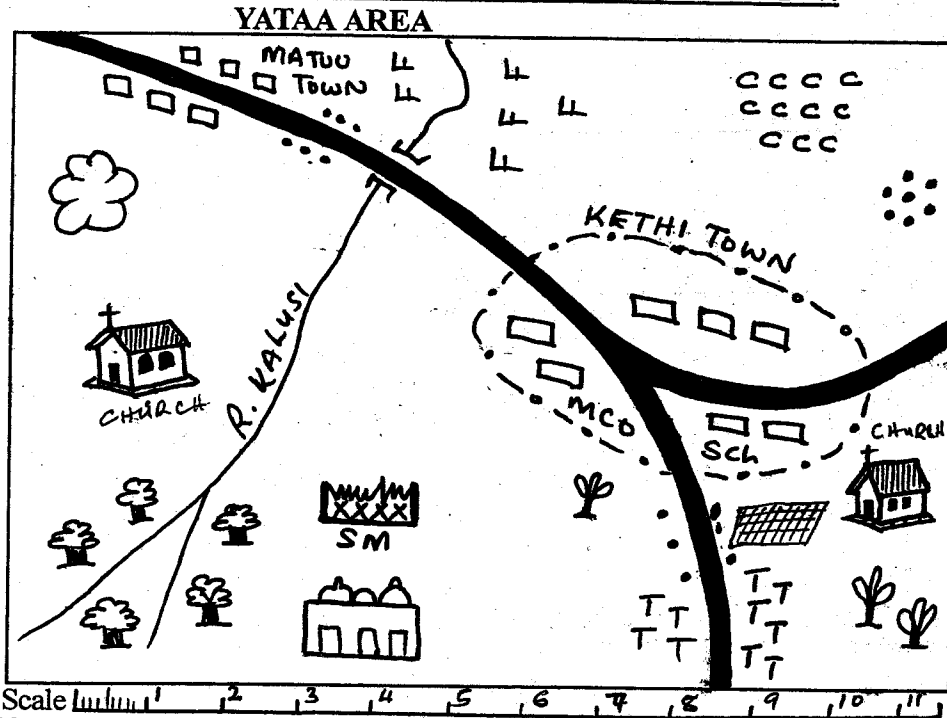
PENPLUS
KIRINYAGA

STD 6 - TERM 3

SOCIAL STUDIES / C.R.E.

Time: 2 hrs 15 min

Study the map of Yatta Area below and answer questions 1 - 7.




KEY	
	Permanent buildings
	Huts
	Forest
	Mosque
	Scrub and grass
	Tea
	District Education Office
	Cotton
	Post Office
	Quarry
	Saw mill
	Wattle trees
	District Commissioner
	Municipal Council Offices
	Tarmac Road
	Police Station
	Cotton farm

Scale 1 2 3 4 5 6 7 8 9 10 11

- River Kalusi flows from _____
A. South West B. South East
C. North West D. North East
- The climate of the Southern part of Yatta area can be described as _____
A. hot and wet B. cool and dry
C. cool and wet D. hot and dry
- Most of people in Yatta area belongs to _____ religion.
A. Muslims B. Christianity C. pagans D. Hinduism
- Which one of the following is NOT an economic activity carried out in Yatta area?
A. Mining B. Farming C. Lumbering D. Fishing
- The head of Karithi town is a _____
A. mayor B. chairman C. chief D. D. O
- What is direction of the quarry from the cotton farm?
A. North East B. South West
C. South East D. North West
- Which one of the following industries is NOT likely to get raw materials in Yatta area?
A. Ginnery B. Tannery
C. Vehicle assembling D. Tea processing
- The following are qualities of a good map. Which one is NOT?
A. Key B. Scale C. Shape D. Frame
- The latitude marked 0° passes through the following town in Kenya EXCEPT
A. Maseno B. Timboroa C. Accra D. Nyahururu
- Which one is ODD one out?
A. Usambara B. Ruwenzori
C. Pare D. Ngorongoro
- The following are exports from Eastern Africa. Which one is NOT?
A. Canned beef B. Salt
C. Electronic goods D. Coffee
- Lake Teleki, lake Michelson and L. Catherine are examples of _____ lakes.
A. lava dammed B. crater
C. tarn D. Rift Valley
- The MAIN problem facing trade among the Eastern African countries is _____
A. production of similar goods B. poor roads
C. political differences D. political instability
- Atmospheric pressure is measured in units called _____
A. knots B. degrees C. millibars D. millimeters
- The MAIN lake ports on lake Tanganyika are _____ and _____
A. Kisumu and Jinja B. Kigoma and Ujiji
C. Mwanza and Bukoba D. Musoma and Kigoma
- Mogadishu town in Somalia is near the Indian Ocean but receives little rainfall because of _____
A. Alshabab annoys God B. shape of the coastline
C. altitude D. winds
- Which of the following countries in Eastern Africa has no railway network?

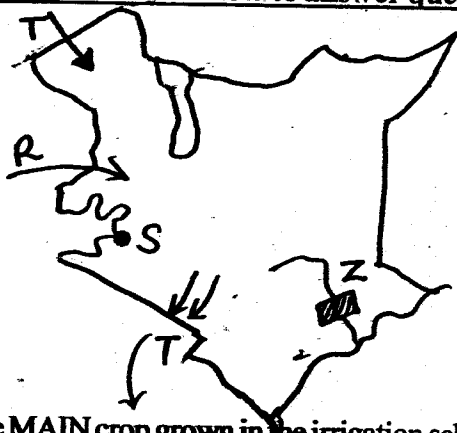
18. Which of the following climatic region experiences rainfall throughout the year?
A. Tropical B. Equatorial C. Desert D. Semi-Arid
19. The message sent by facsimiles are called _____
A. E-mail B. letter C. faxes D. internet
20. The MOST effective means of communication in Kenya to reach many people is _____
A. mobile phone B. radio
C. television D. newspaper

Use the diagram below and answer questions 21 - 22.



21. Which one of the following factors influences the above distribution?
A. Rainfall B. Altitude C. Latitude D. Soils
22. The MOST profitable economic activity to be carried out at part marked T is _____
A. pastoralism B. lumbering
C. beekeeping D. mining
23. The biggest river in Kenya has its mouth at _____
A. Mt. Kenya B. L. Victoria
C. Mediterranean D. Indian Ocean
24. Before coming of the Europeans the Abawanga of Western Kenya were ruled by _____
A. kings B. paramount chiefs
C. council of elders D. emperors
25. Which one of the following is the MAIN factor affecting vegetation distribution in the city of Nairobi?
A. Temperatures B. Human settlements
C. Pollution from industries D. Traffic jams

Use the map of Kenya below to answer questions 26 - 29.



26. The MAIN crop grown in the irrigation scheme labelled Z is _____
A. rice B. cotton C. watermelons D. sugarcane
27. Which of the following community migrated through route marked T and proceeded Southwest of Tanzania?

28. The town marked S is _____
A. Butere B. Kakamega C. Siaya D. Kisumu
29. Which one of the following communities did NOT use the route marked R when entering Kenya?
A. Luo B. Abaluhya C. Ababusii D. Turkana
30. The MAIN trade barrier between Kenya and Somalia is _____
A. production of similar goods
B. insecurity
C. poor transport network
D. lack of common currency
31. Which one of the following is NOT a use of the mineral mined at Mwadui?
A. Making ornaments B. Making cement
C. Making drilling tools D. Making grinding tools
32. The capital city of Eritrea is located at _____
A. Addis Ababa B. Djibouti
C. Asmara D. Khatoum
33. Which group is composed of only rivers which have their mouths in the floor of great Rift Valley?
A. Sondu, Yala, Kerio
B. Yala, Ewaso Nyiro North, Tana
C. Kerio, Turkwel, Malewa
D. Athi, Voi, Nzoia
34. The European nation that was defeated by emperor Menelik II at the battle of Adowa was _____
A. Germany B. Britain C. Italy D. France
35. The parliamentary debate in Kenya are chaired by _____
A. The president B. The clerk of the parliament
C. The speaker D. The prime minister
36. Three of the following conditions favour the growing of tea. Which one does NOT?
A. High rainfall of about 1200 mm
B. Deep well drained volcanic soil
C. Warm temperatures above 21°C
D. Highland area
37. Which of the following communities does NOT belong to the Southern Cushites?
A. Buringu B. Iraqw C. Rendile D. Mbugu
38. The capital of Tanzania was relocated to Dodoma because it is _____
A. far from the enemies B. centrally located
C. does not have a port D. a residential centre
39. Tourists come into Kenya because of all the following EXCEPT _____
A. wildlife B. beautiful scenery
C. climate D. longitudes
40. Which of the following is a service industry?
A. Bakery B. Tea C. Insurance D. Paper
41. The earliest explorer to come in Eastern Africa was _____
A. John Speke B. Vasco da Gama
C. Ludwig Kraft D. Dr. Livingstone
42. The MAIN problem facing sea fishing in Kenya and Tanzania is _____

- A. small market for fish
B. leaking oil tankers which cause pollution
C. inadequate storage facilities
D. lack of capital
43. Which is NOT a factor that promote peace?
A. Religious division B. Tolerance
C. Dialogue D. Games and sports
44. A child who is less than eight years, is found in Kenya and the parents are NOT known. This child became a Kenyan citizen by _____
A. registration B. birth C. seeing D. living
45. The HIGHEST court in Kenya is _____
A. High court B. Kadhi
C. Supreme D. Court martial
46. The law governing Kenya are made by the _____
A. Legislature B. Executive C. Judiciary D. Cabinet
47. The Giriama resisted the British rule because of all the following EXCEPT _____
A. they were forced to pay taxes
B. British interfered with the Kayas
C. British took away fertile land
D. The Arabs traded with them
48. Nairobi began as _____
A. an agricultural centre B. an industrial centre
C. a transport centre D. a tourist centre
49. Which one of the following is NOT human right that a Kenyan citizen is entitled to?
A. Right to life
B. Right to own property
C. Right to say anything you want including incitement
D. Right to education.
50. What do Magadi, Athi river, Kasese and Kimwarer have in common?
A. They are connected by a railway line.
B. They are tourist destinations.
C. They are mining towns.
D. They are capital cities
51. Which one of the following communities did not take part in long distance trade with the Arabs?
A. Agikuyu B. Wanayamwezi C. Yao D. Akamba

Use the map below of Eastern Africa to answer questions 52 - 55.



52. The part marked M is MAINLY inhabited by _____
A. Bantus B. Nilotes C. Cushites D. Semites
53. Which crop is grown around the region marked D which is the MAIN export from the county?
A. Cotton B. Sisal C. Coffee D. Cloves
54. The country marked T was colonised by _____
A. Italians B. British C. Spaniards D. Germans
55. Which of the following communities did NOT migrate into Eastern Africa and settle in their present homelands in Tanzania through the route marked R?
A. Wanyamwezi B. Wahehe
C. Wazaramo D. Wagogo
56. Peace, love and unity are the principles of _____ philosophy in Kenya.
A. Harambee B. Nyayo
C. African socialism D. PanAfricansim
57. Maize in both Kenyan and Tanzanian is grown _____
A. as human food B. as animal feed
C. under irrigation D. for making corn oil
58. How does a doctor find out if a patient infected with HIV?
A. By feeling the patient's skin.
B. By testing the patient's urine.
C. By advising patient to abstain from sex.
D. By testing the patient's blood
59. Objects or decorations made by our ancestors especially one of historical importance and known as _____
A. museum pieces B. ornament
C. artifacts D. things
60. Who among the following European explorers discovered the source of river Nile?
A. David Livingstone B. John Speke
C. Ludwig Kraft D. H. M Stanley
- C.R.E**
61. There are similarities between the African creation stories and biblical stories. Which one is NOT?
A. God is the creator
B. God created everything
C. The first parents were Adam and Eve
D. God created the first woman and man
62. The Bible is made up of _____ books.
A. 66 B. 27 C. 39 D 56
63. Which one of the following is NOT a fruit of the Holy Spirit?
A. Peace B. Faith C. Generosity D. Patience
64. According to 1 Timothy 3:1-7 a good leader should NOT be _____
A. co-operative B. hardworking
C. dishonest D. gentle
65. In the parable of the good Samaritan, who did as what Jesus requires us to do?
A. Pharisee B. Samaritan C. Levite D. Jebusite
66. Which one of the following is a prophetic book in the New Testament?
A. 1 Corinthians B. Matthew
C. Jeremiah D. Revelation

67. Elikanah and Hannah visited Samwel in the temple after a period of _____
 A. six months B. 5 years
 C. 3 months D. 1 year
68. Joseph refused to do an immoral thing with Potiphar's wife. Joseph had developed one of the following qualities. Which one?
 A. Decision making
 B. Assertiveness
 C. Critical thinking skill
 D. Creative thinking skill
69. According to John 15:13 the greatest love a person can give for his friends is to _____
 A. die for them B. live together with them
 C. give his life for them D. resurrect for them
70. In Mark 9:14-29 what did Jesus do to the boy who was brought to him?
 A. Commanded the evil spirit to leave the boy
 B. Touched his ears and tongue
 C. Smearred mud on his eyes and ears
 D. Prayed for the boy
71. The Holy Spirit appeared to the disciples of Jesus which they were waiting for him at _____
 A. Bethlehem B. Antioch
 C. Jerusalem D. Gethsemane
72. One of the following was a TRUE brother of Joseph son of Jacob. Who was he?
 A. Reuben B. Judah C. Simon D. Benjamin
73. Irresponsible sexual behaviour may lead to all the following EXCEPT _____
 A. getting HIV/AIDS
 B. dropping out of school
 C. becoming pregnant
 D. repecting our bodies as temples of God
74. Judges 6:1b. The Lord assured one of the following men that he would help him to crush Midianites. Who was he?
 A. Jefitha B. David
 C. Gideon D. Moses
75. In Matthew 25:26-29 the servant in the parable of the talent's was punished because of _____
 A. he was jealous of the other servants
 B. he insulted his master
 C. he was lazy
 D. he did not make use of the talent
76. We acquire socially acceptable behaviours by _____
 A. confessing our sins
 B. going to school
 C. playing with our friends
 D. learning from our parents and others
77. As Christians we all share all the following EXCEPT _____
 A. one father B. one denomination
 C. one Lord D. one spirit
78. The Holy Spirit inspired the writers of the Bible. This means that they were _____
 A. filled with the Holy Spirit
 B. whispered to by the Holy Spirit
 C. didn't listen to the Holy Spirit
 D. guided by the holy spirit
79. All Christian churches are striving to work towards unity: This is called _____
 A. togetherness B. charismatic
 C. ecumenism D. communion
80. The man who went to Jesus at night to ask whether he would inherit the kingdom of God was called _____
 A. Paul B. Peter C. Simon D. Nicodemus
81. Which one of the following is NOT one of the agencies that promote peace?
 A. Prison Department B. Market place
 C. The church D. Police force
82. After resurrection, Jesus appeared to His disciples and said these words. Which ones?
 A. Don't be afraid B. Peace be with you
 C. Love one another D. You shall go to heaven
83. Which one of the following is CORRECT concerning work in Traditional African Society?
 A. Girls to look after cattle.
 B. People who work hard are disliked
 C. Men and women do the same work
 D. Everyone is expected to work
84. The parable of the Good Samaritan in St. Luke Gospel teaches us to help those in need, such as the following EXCEPT _____
 A. the rich B. the orphans
 C. the widow D. the strangers
85. The book of law that tells about the story of the movement of Israelites from Egypt to Canaan is called _____
 A. Genesis B. Deuteronomy
 C. Exodus D. Revelation
86. In order to stop the spread of HIV/AIDS Christians should do all the following EXCEPT _____
 A. kill those who are infected.
 B. comfort those affected
 C. pray to God to help the sick
 D. educate the people on how to avoid HIV/AIDS
87. The man who helped Jesus to carry the cross was called _____
 A. Simon of Cyrene B. Simon Peter
 C. Judas Iscariot D. Joseph of Arimathea
88. The Bible is useful for teaching us all the following EXCEPT _____
 A. truth B. rebuking error
 C. correcting faults D. fighting our enemies
89. Solomon the wiseman was son of _____
 A. Abraham B. David
 C. Isaac D. Ruth
90. In the story of the rich man and Lazarus, who was accepted in heaven?
 A. David B. The poor man
 C. The rich man D. Isaac

KIRINYAGA COUNTY

**PENPLUS
KIRINYAGA**

STD 6 - TERM 3

MARKING SCHEME

MATHS	ENG	KISWA	SCI	SS
1.A	1.B	1.B	1.B	1.A 51.A
2.B	2.C	2.D	2.C	2.C 52.D
3.D	3.A	3.C	3.C	3.B 53.C
4.B	4.D	4.D	4.A	4.D 54.A
5.C	5.B	5.B	5.D	5.A 55.A
6.C	6.C	6.A	6.A	6.D 56.B
7.A	7.A	7.A	7.B	7.C 57.A
8.B	8.D	8.B	8.B	8.C 58.D
9.B	9.A	9.C	9.C	9.C 59.C
10.C	10.B	10.D	10.C	10.D 60.B
11.B	11.A	11.C	11.C	11.C 61.C
12.B	12.C	12.C	12.D	12.C 62.A
13.A	13.B	13.D	13.A	13.A 63.B
14.D	14.D	14.B	14.D	14.C 64.C
15.A	15.D	15.C	15.D	15.B 65.B
16.B	16.B	16.D	16.A	16.B 66.D
17.C	17.D	17.D	17.A	17.A 67.D
18.D	18.D	18.C	18.B	18.B 68.B
19.B	19.A	19.B	19.C	19.C 69.C
20.A	20.C	20.D	20.B	20.B 70.A
21.D	21.B	21.C	21.A	21.B 71.C
22.D	22.D	22.D	22.C	22.B 72.D
23.B	23.C	23.A	23.B	23.D 73.D
24.A	24.C	24.B	24.D	24.A 74.C
25.A	25.B	25.A	25.D	25.B 75.D
26.D	26.D	26.A	26.A	26.B 76.D
27.B	27.D	27.C	27.A	27.C 77.B
28.B	28.A	28.A	28.C	28.D 78.D
29.C	29.C	29.D	29.B	29.D 79.C
30.B	30.C	30.B	30.C	30.B 80.D
31.C	31.B	31.D	31.A	31.B 81.B
32.D	32.B	32.B	32.D	32.C 82.B
33.B	33.D	33.D	33.C	33.A 83.D
34.B	34.A	34.D	34.C	34.C 84.A
35.B	35.A	35.C	35.B	35.C 85.C
36.A	36.A	36.A	36.A	36.C 86.A
37.C	37.C	37.A	37.B	37.C 87.A
38.C	38.E	38.E	38.B	38.B 88.D
39.A	39.C	39.L	39.B	39.D 89.B
40.D	40.D	40.A	40.C	40.C 90.B
41.A	41.A	41.D	41.B	41.B
42.B	42.E	42.A	42.C	42.D
43.C	43.B	43.A	43.D	43.A
44.C	44.C	44.B	44.C	44.B
45.B	45.C	45.A	45.D	45.C
46.D	46.D	46.C	46.C	46.A
47.C	47.A	47.A	47.C	47.D
48.A	48.C	48.D	48.A	48.C
49.B	49.B	49.D	49.B	49.C
50.D	50.D	50.C	50.B	50.C