

TURNING POINT STANDARD EIGHT 2014 COMPOSITION

Series
008

Time: 40 Minutes


Powered By: www.eeducationgroup.com

YOUR INDEX NUMBER		
YOUR NAME		
NAME OF YOUR SCHOOL		

READ THESE INSTRUCTIONS CAREFULLY

1. In the spaces provided above write your full index number, your Name and Name of your school.
2. Now open this paper, read the composition subject carefully and write your composition on the lines provided.

This Question Paper consists of 4 printed pages.



TURNING POINT STANDARD EIGHT 2014 ENGLISH

Series
008

Time: 1hr 40 Mins

READ THESE INSTRUCTIONS CAREFULLY

1. You have been given this question booklet and a separate answer sheet. The question booklet contain 50 questions.
2. Do any necessary rough work in this booklet.
3. When you have chosen your answer, mark it on the **ANSWER SHEET**, not in the question booklet.

HOW TO USE THE ANSWER SHEET

4. Use an ordinary pencil.
5. Make sure that you have written on the answer sheet:
YOUR INDEX NUMBER
YOUR NAME
NAME OF YOUR SCHOOL
6. By drawing a **dark line** inside the correct numbered boxes mark your full index Number (i.e. School Code Number and the three-figure Candidate's Number) in the grid near the top of the answer sheet.
7. Do not make any marks outside the boxes.
8. Keep your answer sheet as clean as possible and do not fold it.
9. For each of the Questions 1 - 50 four answers are given. The answers are lettered A, B, C, and D. In each case only **ONE** of the four answers is correct. Choose the correct answer.
10. On the answer sheet the correct answer is to be shown by drawing a **dark line** inside the box in which the letter you have chosen is written.

Example

For questions 18 choose the **BEST** alternative to complete the sentence.

19. John has _____ some points on the paper.

- A. put down
- B. put off
- C. put about
- D. put across

On the answer sheet:

18 (A) (B) (C) (D) **19** (A) (B) (C) (D) **22** (A) (B) (C) (D) **23** (A) (B) (C) (D)

In the set of boxes numbered 21, the box with the letter C printed in it is marked

11. Your **dark line** **MUST** be within the box
12. For each question **ONLY ONE** box is to be marked in each set of four boxes.

Read the passage below, it contains blank spaces numbered 1-15. For each blank space, choose the best alternative from the choices given.

Most of our towns are greatly ___1___ by the rising ___2___ of insecurity. Barely does a day ___3___ before one hears of burglary ___4___ or car jacking there. Majority of the victims are innocent citizens ___5___ have worked ___6___ years to acquire the property they have.

What is particularly ___7___ is the fact that these ___8___ do not seem to be ending soon. Although the police ___9___ has come up with the idea of community policing, ___10___ still remains to be done. This may even call ___11___ people to reveal the identity of the ___12___ even if they are members of their families. This is the only way we can ___13___ the bad elements from our society. ___14___ this happens, we will always ___15___ over spilt milk

- | | A. | B. | C. | D. |
|-----|------------|-------------|------------|-----------|
| 1. | influenced | attacked | affected | spoilt |
| 2. | rate | manner | fear | ways |
| 3. | passes | pass | passed | past |
| 4. | wave | around | about | here |
| 5. | who | whom | which | whose |
| 6. | since | for | from | in |
| 7. | amazing | interesting | disturbing | known |
| 8. | attack | attacks | attacking | attackers |
| 9. | station | force | mission | officers |
| 10. | much | many | more | a lot |
| 11. | for | on | over | out |
| 12. | culprits | officers | victims | guilty |
| 13. | root off | root over | root out | root all |
| 14. | However | When | Since | Unless |
| 15. | talk | quarrel | cry | argue |

39. Which one of the following is true about the man who appeared in the village?
A. He came from the city
B. He bought a thousand monkeys at sh. 1000
C. He bought monkeys at varied prices
D. He cheated that he would buy monkeys at sh.2000
40. "This resulted in renewed efforts....." The phrase means that _____
A. people were encouraged to look for more monkeys
B. people brought all monkeys from the forest
C. people became discouraged as the number of monkeys reduced
D. the man bought monkeys at sh 2000
41. Seeing of monkeys became difficult at one point mainly because _____
A. they ran away to avoid being caught
B. they had all been caught
C. their number in the forest had reduced
D. they became wild and dangerous to people.
42. The assistant of the monkey buyer helped his master in the following way. Which one?
A. Buying monkeys on his behalf
B. Selling back the monkeys to the people
C. Accepting to remain behind on his behalf
D. Ensuring that the villagers made a profit
43. According to the passage, which one of the following is true about the savings of the villagers?
A. They earned all of it from the sale of the monkeys
B. They used all of it to buy back the monkeys
C. They made good, profit from it
D. Each villagers had a total savings of sh 5000
44. When the assistant talked to the villagers in a conspiring tone, it means that he
A. talked to them quietly then loudly
B. ordered them on what to do
C. cheated them
D. planned with them on how to cheat
45. Monkeys in the passage were bought at the following prices except _____
A. sh 3500 B. sh. 5000
C. sh 2500 D. sh 2000
46. Which one of the following best describes the assistant of the monkeys buyer?
A. Brave, Obedient, untruthful
B. Brave, honest, unselfish
C. Truthful, unhelpful, brave
D. Helpful, honest, humble
47. Which one of the following happened on the last buying and selling of the monkeys?
A. They were sold at sh 3000
B. The villagers made good profit
C. More monkeys were brought from the forest
D. The villagers paid more per monkey than they had sold
48. The word "loitering" has been underlined in the passage. It can best be replaced by
A. hanging about
B. wondering about
C. matching about
D. waiting eagerly
49. The following is true about the boss and his assistant. Which one is it?
A. They bought and went with many monkeys
B. They did not trust each other
C. They both went to the city
D. They both lied to the villagers
50. The best title for the passage would be?
A. Buying monkeys
B. Monkeys business
C. Village monkeys
D. The villagers' profit

In question 16 to 18, choose the alternative that best fits in the blank space

16. The problem is not only with Oinya _____
A. but also John
B. but it is also with John
C. but also with John
D. but John also

17. The son is very hot. It looks _____
burning the Earth
A. like it was
B. as though it was
C. as though it were
D. like it were

18. My father is a teacher _____ my mother
is a nurse.
A. while
B. but
C. and
D. whereas

Supply the correct question tag for the following questions in 19 and 30

19. We have to work hard this term _____?
A. don't we
B. haven't we
C. isn't it
D. shall we

20. She used to do well in English _____?
A. wasn't she
B. isn't she
C. didn't she
D. weren't she

For questions 21 to 23, choose the alternative that means the opposite of the underlined

21. The suspect gave vague answers to the
police
A. wrong
B. genuine
C. correct
D. definite

22. It was a narrow win for Kipkosgei at
Daegu
A. abroad
B. a clear
C. a big
D. a tough

23. Andrea was appointed by the
headteacher
A. demoted
B. praised
C. disappointed
D. criticised

In questions 24 and 25, fill in the blank spaces with the best alternative

24. Her _____ behaviors are both funny
and enjoyable
A. childish
B. childlike
C. childhood
D. childline

25. The _____ was forwarded to the
headteacher to look into
A. complain
B. complainant
C. complaint
D. complaining

Read the following passage carefully then answer questions 26-38

Moving to a new place can be an exciting experience. In a new environment, you somehow feel more alive: seeing new people, eating new food, hearing the foreign sounds of a new language and feeling a different climate. As the days pass however, this good feeling becomes difficult and stressful. The new experiences turn to be boring rather enjoyable.

In the first stage, you are excited by your new environment. You experience some simple difficulties such as trying to socialize but you consider these as small challenges that you can quickly overcome. Your feelings about the new culture are positive, so you are eager to make contact with people and to try new food. Soon, the difference in behavior and customs become more noticeable to you. This may make it difficult for you to find new friends since you don't know the social customs of the new culture. For instance, you may not understand how to make "small talk" so it is hard to carry out a casual conversation

One day in the school, you overhear a conversation and you understand the meaning. Why is everyone laughing? Are they laughing at you or at some jokes that you do not understand? Also you aren't always sure how to act while shopping. If you buy a sweater in the wrong size, can you exchange it?

Within no time, you will realize that you no longer have positive feelings about the new place. You feel that you or your parents made a mistake in going there. Making of friends hasn't been easy so you begin to feel lonely and isolated. Now you want to be with familiar people and eat familiar food. You begin to have negative feelings about everything and you want to go back home.

Gradually, as your language skills of the area improves, you begin to have some success in meeting people. You are now able to exchange the sweater that was too small and you can successfully chat about the weather with a stranger on a bus. Your self confidence grows. After realizing that you cannot change your surroundings, you begin to accept the difference and tolerate them. For example, the food will never be as tasty as that in your home area but you are now able to eat and sometimes even enjoy many dishes. You may equally not like the way some people there dress or behave in public but you do not regard their clothes and behaviour as wrong but just different

Adopted from
We observed and learnt
by Ninian and Terry

26. Moving to a new place can be exciting mainly because
- One feels happy in a new place
 - there are a lot of new things
 - it is a new environment
 - it will soon be boring
27. According to the passage, how does one become more alive in a new environment?
- you experience good feelings there
 - you are away from home
 - it is always like that at first
 - you are in a different climate
28. The challenges which one can overcome quickly as given in the passage are:
- all difficulties experienced during socialization
 - soon forgotten when we have a positive feelings
 - ment to make one feel positive about the new place
 - all found only in the first stage
29. According to the passage, what makes it difficult to find friends in a new place?
- One cannot understand "small talks"
 - The noticeable customs and behaviour
 - It is not easy to carry out a conversation
 - The differences in social customs and culture
30. The word "casual" has been underlined in the passage. It can best be replaced by
- exciting
 - serious
 - informal
 - good
31. Why would it be difficult to understand the meaning of a laughter or some jokes in a new place?
- One understands the words but not the meaning
 - The laughter may be about you
 - There could be social misunderstanding
 - Because you don't like the behavior
32. According to the passage, when do we stop having positive feelings about a new place?
- When you realize that you no longer like the place
 - When you feel that you or your parent made mistake
 - When making of friends and understanding the culture becomes difficult
 - When you begin to have negative feelings about everything
33. One of the following is not true about our home areas as given in the passage. Which one?
- You are with families people in most cases
 - The food eaten is always good and delicious
 - One can easily socialize and make friends
 - It is a familiar environment with a usual climate
34. The expression "..... Your self confidence grows" means the same as
- you begin to become older
 - you start speaking the new language
 - you start eating the new food
 - you begin talking freely and bravely
35. "You are now able to exchange the sweater that was too small...." this mainly shows that one has
- known the new language
 - started liking the new environment
 - got the area language skills and become confident
 - realized that he can't change the environment
36. After realizing that one cannot change his surrounding _____
- he gradually learns the new language
 - he tries to successfully chat with the people
 - the differences in customs becomes more noticeable to him
 - his confidence grows as he tries to tolerate the difference
37. Why do we need to accept the way others dress and talk?
- Their ways may only be different from ours
 - Their ways may be better than ours
 - Their ways are not to be regarded as wrong
 - Their ways must be tolerated
38. The best summary for the passage would be _____
- do not judge others so that you are not judged
 - East of west, home is the best
 - We should learn how to live with others
 - Do not disrespect other people

Read the following passage and answer questions 39-50

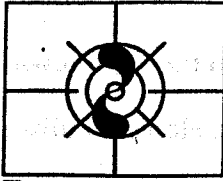
Once upon a time, a man appeared in a village and announced to the villagers that he would buy monkeys for sh. 1,000. The villagers, seeing an opportunity went out in the forest and caught many monkeys. The man bought thousands of monkeys at shs 1000 and as the supply started to diminish and the villagers relaxed in their effort, he announced that he would buy monkeys at sh. 2000

This resulted in renewed efforts and the villagers started catching monkeys again. Soon, the supply diminished even further and people started going back to their farm. The offer rate increased to sh 2500 and the supply of monkeys became so low that it was an effort to even see a monkey, let alone catch it.

The man now announced that he would buy at sh 5000! However, since he had to go to the city on some business, the man said his assistant would buy the monkey on his behalf.

Since there were very few monkeys left in the forest for the villagers to catch and sell, when his boss left, the assistants told the villagers in a conspiring tone: look at all these monkeys in the big cage that the man has collected. I will sell them to you at sh 3500 and when the man comes back, you can sell each monkey to him for sh 5000. The villagers queued up with all their savings to buy the monkeys with the aim of making a big profit.

After they had bought all the monkeys, the assistant disappeared and nobody heard from him or his boss. All that remained in the village were monkeys, monkeys and more monkeys loitering everywhere.



TURNING POINT

008

KISWAHILI

SEHEMU YA PILI:

INSHA

JARIBIO LA NNE K.C.P.E

DARASA LA NANE 2014

Time: 40 minutes

Muda: Dakika 40

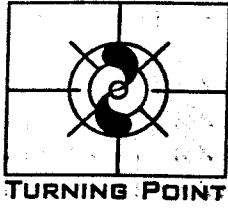
Powered By: www.eeducationgroup.com

NAMBA YAKO YA MTHANI		
JINA LAKO		
JINA LA SHULE YAKO		

SOMA MAAGIZO HAYA KWA MAKINI

1. Kwenye nafasi zilizoachwa hapo juu andika namba yako kamili ya mtihani, jina lako na jina la shule yako
2. Sasa fungua karatasi hii, soma kichwa cha insha kwa makini na uandike insha yako kwenye nafasi uliyochiwa.

Kijitabu hiki kina kurasa 4 zilizopigwa chapa.



TURNING POINT DARASA LA NANE 2014 KISWAHILI

Toleo la 008

Muda: Saa 1 dakika 40

SOMA KWA MAKINI MAAGIZO YAFUATAYO

1. Umepeva kijitabu hiki cha maswali na karatasi ya kujibu. Kijitabu hiki kina maswali 50.
2. Ikiwa utataka kuandika chochote ambacho si jibu andika kijitabu hiki.
3. Ukisha chagua jibu lako lionyeshe katika **KARATASI YA MAJIBU** na wala siyo katika kijitabu hiki cha maswali.
4. Tumia penseli ya kawaida.
5. Hakikisha ya kwamba yafuatayo yameandikwa katika karatasi ya majibu:

JINSI YA KUTUMIA KARATASI YA MAJIBU

NAMBA YAKO YA MTIHANI

JINA LAKO

JINA LA SHULE YAKO

6. Kwa kuchora kistari katika visanduku vyenye namba zinazokuhusu, onyesha namba yako kamili ya mtihani (yaani namba ya shule na zile namba tatu za mtahaniwa) katika sehemu iliyotengwa mwanzo wa karatasi ya majibu.
7. Usitie alama zozote nje ya visanduku.
8. Iweke safi karatasi yako ya majibu.
9. Kwa kila swali 1-50 umepeva majibu manne. Majibu hayo yameonyeshwa kwa herufi A, B, C, D. Ni jibu MOJA tu kati ya hayo manne ambayo ni sahihi. Chagua jibu hilo.
10. Kwenye karatasi ya majibu, jibu sahihi lionyeshe kwa kuchora kistari katika kisanduku herufi uliyochagua kuwa ndilo jibu.

Mfano:

Katika karatasi ya majibu

24. Ni sentensi gani mwafaka

A. Ana mali nyingi

B. Ana mali mengi

C. Ana mali mingi

D. Ana mali jingi

Jibu sawa ni (B)

Katika karatasi ya majibu:

23 A B C D

24 A B C D

25 A B C D

26 A B C D

Katika visanduku vinavyoonyesha majibu ya swali namba 24, kisanduku chenye herufi A ndicho

kilichochorwa kistari

11. Chora kistari chako vizuri. Kistari chako kiwe cheusi na kisijitokeze nje ya kisanduku
12. Kwa kila swali, chora kistari katika kisanduku kimoja tu kati ya visanduku vinne ulivyopewa.

Jaza nafasi 1-15, kwa majibu sahihi

Pigo lisilokipimo ___1___ binadamu, hutokanalo na kutokuwa na matumaini, ni maisha ya ___2___. Insi yuyu huyu kutangamana na wenzake huwa ni vigumu. Hii ni kwa sababu ya woga ___3___ hisiani ___4___ dhidi ya marafikize. Kumbuka nasaha za wavyele kuwa, "upweke ni uvundo." Elewa tosha kuwa ___5___ hajifunzi ___6___ mara moja. Kujaribu kwake mara ___7___ ndiko humfanya kuwa stadi ___8___ kwenda juu angani

- | | | | |
|------------------------|---------------------|--------------------|------------------|
| 1. A. la | B. na | C. kwa | D. ya |
| 2. A. ukata | B. upweke | C. ulemavu | D. usiri |
| 3. A. aliojipachikia | B. aliojipachikisha | C. aliojipachisha | D. aiiojipachika |
| 4. A. pake | B. kwake | C. yake | D. mwake |
| 5. A. kindu | B. kinegwe | C. mbuni | D. eropleni |
| 6. A. kuburuka | B. kupuruka | C. kubruka | D. kupapatika |
| 7. A. kadhaa wa kadhaa | B. kadha | C. kadhaa wa kadha | D. kadhaa |
| 8. A. wa | B. kwa | C. ya | D. kwenye |

___9___ Nsizai kule hospitalini Malezi ___10___ amelazwa. Sisi hufanya vivyo hivyo mmoja wetu ___11___ hospitalini. Kilichonistaajabisha licha ya kunikera hadi ___12___ ni idadi ya wagonjwa ___13___ kutokana na ajali ya moto.

"Asilimia kubwa ya ajali ya moto husababishwa na utumiaji ___14___ wa nguvu za umeme." Daktari alitudokezea kwa visa hivi ___15___ wananchi wasipohamasishwa kutafuta njia aila ya utumiaji wa nguvu za umeme kutoka kwa maafisa husika kwani nishati hii inaenea kote nchini.

- | | | | |
|---------------------|------------------|------------------|-------------------|
| 9. A. Nilimtembelea | B. Walimtembelea | C. Tulimtembelea | D. Alimtembelea |
| 10. A. alikokuwa | B. alipokuwa | C. alimokuwa | D. aliyekuwa |
| 11. A. alazwako | B. alazwapo | C. alazwamo | D. amelazwa |
| 12. A. nikakereketa | B. nikakerua | C. nikakereka | D. nikakeruka |
| 13. A. waliogonjeka | B. waliogonjwa | C. waliouguwa | D. waliogojeka |
| 14. A. mbaya | B. baya | C. mabaya | D. ubaya |
| 15. A. vitakidhiri | B. vitadidimia | C. vitadumaa | D. vitapita mpaka |

41. Kwa nini wakazi wa tarafa hiyo hupewa pongezi?
 A. Kwa sababu ya ushirikiano wao
 B. Kwa sababu ya bidii yao
 C. Kwa sababu ya kuwafunza wanafunzi vizuri
 D. Kwa sababu ya matokeo mema katika mtihani wa kitaifa
42. Kulingana na aya ya pili, mwandishi anandika kuwa mjinga ni yule
 A. ambaye hatafakari kwa nini mwenzake anazidi kushinda
 B. ambaye hataki kushindwa na kumwonea mwenzake aliyeshinda wivu
 C. ambaye hakai chini na kutulia tuli
 D. ambaye anachukua anayeshinda kuwa ni mwizi
43. Wanaotajwa kuwa hodari katika elimu wanazingatia nini hasa?
 A. Ufanisi katika mtihani wa kitaifa kwa mwanafunzi
 B. Ufanisi katika mtihani wowote kwa wanafunzi wao
 C. Maadili ya wanafunzi na kupasi kwao katika mtihani wowote
 D. Ushirikiano wao wote, ufanisi kwa wanafunzi katika mtihani na bidii
44. Ufanisi wa wanatarafa hawa elimuni unatokana na haya yote ila?
 A. Motisha inayotolewa na wazazi na viongozi kwa walimu na wanafunzi
 B. Wanafunzi kuadhibiwa vikali ili kuwa na adabu vilevile wanafunzi kupewa mtihani mingi kufanya
 C. Mashindano (mtihanini) ya hali ya juu ya wao kwa wao
 D. Wanafunzi na walimu kuchukua muda mwingi shuleni kwa sababu ya masomo
45. Mtafutaji hachoki, akichoka keshapata. Methali hii inaangazia nini kulingana na habari hii?
 A. Kulala kwa wanafunzi shuleni ili kurudiarudia
 B. Kulala kwa walimu, na wanafunzi ili kusoma
 C. Kwenda shuleni alfajiri na mapema na kurudi nyumbani jioni baada ya jua kuzama
 D. Kutumia pesa nyingi katika kuwanunulia walimu na wanafunzi vitabu vya shule na kuwalisha (walimu)
46. Hii ni baadhi ya motisha ambayo imetajwa ila:
 A. Kuwapeleka walimu na wanafunzi katika maonyesho ya kilimo
 B. Kuwaandalia walimu kishuka na staftahi shuleni
 C. Kuwaajiri walimu wa ziada shuleni na kununua mitihani mbalimbali shuleni
 D. Kuwanunulia walimu na wanafunzi vitabu vya ziada na kiada licha ya serikali kugharamia
47. Yakini, ufanisi katika elimu unahusisha;
 A. Wanafunzi, wazazi, serikali na walimu
 B. Walimu viongozi, washika dau na pesa
 C. Wanafunzi, wazazi, nchi za nje na viongozi
 D. Wanafunzi, walimu, viongozi na wazazi
48. Badala ya neno **Kukurukakara** kama ilivyotumika katika habari, mwandishi asingetumia kisawe kipi?
 A. Shagalabaghala
 B. Hekaheka
 C. Pilkapilka
 D. Shamrashamra
49. Ni fani gani ya lugha ambayo haijatumiwa katika sentensi ya kwanza ibara ya pili?
 A. Semi
 B. Tankali ya sauti
 C. Tashbihi
 D. Methali
50. Ufahamu huu unaongea hasa kuhusu?
 A. Ufanisi elimuni
 B. Umuhimu wa kushirikiana
 C. Jinsi ya kupata ufanisi katika elimu
 D. Pongezi wanazopata wakati wa majengo

Kutoka swali 16-30 jibu kila swali kulingana na maagizo uliyopewa

16. Ni sentensi gani yenye dosari?
A. Dawa nyingine zilipewa mgonjwa
B. Madau yepi yanayotumiwa katika uyuvi?
C. Miti mengine mengi ilichanjwa na mpishi
D. Jembe jingine limepatikana bustanini
17. Kamilisha sentensi hii kwa o-ote na ote kwa njia mufti ili ilete maana ya kueleweka Chumvi _____ ikimwagika katika donda _____ huwasha _____ mwilini
A. zote, yoyote, wowote
B. yote, lote, mwote
C. zozote, yoyote, popote
D. yoyote, lolote, kote
18. Sentensi yenye mstari ina maana ya majibu yote ila:
Mzee Baraza anafanyia mbuzi
A. Mzee Baraza anafanya kwa niaba ya mbuzi
B. Mzee Baraza anamtunza mbuzi
C. Mzee Baraza anafanya kwa minajili ya kupata mbuzi
D. Mzee Baraza ni mwajiriwa wa mbuzi
19. Wizara gani inahusika na kustawisha maendeleo ya nchi?
A. Wizara ya Biashara na Viwanda
B. Wizara ya Ardhi na makao
C. Wizara ya Serikali za wilaya
D. Wizara ya mipango ya kiuchumi
20. Mfanyakazi yupi ambaye hajalengwa na kazi yake?
A. Mhasibu — Hufundisha hisabati benkini
B. Kandawala — Huendesha garimoshi
C. Mzegamzega — Huua maji kwa kutumia toroli.
D. Ngariba — Hutahiri katika jando
21. Kabla ya kwenda mhadani, dalali alitulia na kuwaza huku akiwazua kuhusu mipango ya siku hiyo. Kwa hivyo ali _____
A. tia akilini
B. piga alinacha
C. zunguka mbuyu
D. piga darubini
22. Panga maneno haya ili yaunde sentensi iliyo /zilizo na maana
(i) Kwa kumwibia simu na pesa mfukoni
(ii) Huku akiwa kitandani pake
(iii) Alipolazwa kwa ulevi wa pombe ya chang'aa
(iv) Aliwazomea wanawe wanne
(v) Waliokuwa na hasira za mkizi na
- A. (i), (ii), (iii), (iv), (v)
B. (iv), (ii), (i), (v), (iii)
C. (iii), (iv), (i), (ii), (v)
D. (ii), (iii), (iv), (v), (i)
23. Ni neno lipi ambalo halipatikani katika ngeli ya U-YA?
A. Umbo
B. Umbeleko
C. Ugonjwa
D. Unyoya
24. Ni Kiungo kipi mwilini mwa binadamu kilicho na kazi hizi ni: - Kurekebisha kiwango cha sukari mwilini
- Kutoa nyongo inayoyeyusha chakula
- Kupigana na sumu mwilini
A. Figo
B. Mara
C. Mate
D. Ini
25. Mpira una umbo wa _____ ilhali mche uliokatwa mara mbili kwenye tako huunda umbo la _____
A. duara, nusu mche
B. mviringo, tufe
C. tufe, hori
D. tiara, hori
26. Kanusha moja wa sentensi hii
Wanapokuja kwenu huyavalia marinda
A. Kama hawakuji kwangu havaa bwelasuti
B. Kama hakuji kwao halivali bwelasuti
C. Kama asipokuja kwake havali bwelasuti
D. Kama haji kwako halivali bwelasuti
27. Kamilisha sentensi hii kwa neno lililomo mabanoni kwa njia mwafaka
Sharubuti _____ vyema na mtoto (nywa)
A. Sharubuti zizi hizi zinakunyweka vyema na mtoto
B. Sharubuti hii inakunyuliwa vyema na mtoto
C. Sharubuti hii inanyweka vyema na mtoto
D. Sharubuti zizi hizi inanyweka vyema na mtoto
28. Neno lipi ambalo limeambatanishwa na kisawe chake?
A. Bughdha — Radsha
B. Tahayuri — Ogofya
C. Nui — Aini
D. Fadhaha — Fazaa
29. Kitenzi kutokana na nomino "ushujaa" ni
A. Shujaisha
B. Shajiisha
C. Shajira
D. Shajari
30. Ni lipi si kanyagio la mnyama?
A. Wayo
B. Gando

Soma taarifa hii kisha ujibu maswali 31 hadi 40

Niliamka siku hiyo nikiwa mchangamfu na mwenye ari ya kazi. Baada ya maandalizi yangu ya kila asubuhi kabla ya kujonyesha nyumba kisogo, nilikaa chini na kuanza kuandika ratiba yangu ya kazi siku hiyo. Kitendo hiki kwangu ni kama ibada kwa Ndugu aliye na imani kabisa katika dini tukufu la Islamu siku ya Ijumaa. Ni kitendo ambacho humfanya yeyote kutamalaki vyema muda aliopewa. Ndiko kujipanga. Nilikiweka kijitabu changu mfukoni na kung'oa nanga.

Kilichonialika kazini kilikuwa ni ibura. Bosi alinirundikia kazi ambayo ingechukua muda wangu wote wa mchana huo. Ratiba ya bosi ilikuwa tofauti kabisa na yangu; ambayo ilifuata ratiba ya kila siku. Nilikaa chini afisini, nikashika tama huku nikipiga kidoko takribani kila baada ya dakika mbili mawazo nayo yakiwa ja mwendo wa duma.

"Suluhisho ni kuzamia lulu." Nilijipata najisemea. Bila lili wala lile huku nikitawaliwa na hasira na hisia ya kishetani, nilijipenyeza uani na kutokomea.

Saa tatu juu ya alama, nilikuwa shambani pangu. Nilivaa gwanda langu mararuraru na kuanza gange niliyofanywa kinyume cha sheria. Kadri nilivyokuwa nikiendelea na kazi ndivyo nguvu ilivyozidi kuongezeka mwilini. Nilipendezwa. Azma yangu sasa ikawa ni kumaliza upaliliaji wa shamba hilo.

Hakika, tamaa mbele mauti nyuma. Nilihisi mwasho ulioambatana na ubaridi katika kidole cha mguu wa kulia, nikaacha mpini wa kiserema ili niitikie mwasho huo. Kabla hata kunyanyuka, mguu huo ukawa unakufa ganzi kama kwamba ulidungwa dawa ya kufisha ganzi. Nilijifunga kibwebwe mpaka nikanyanyuka. Kujaribu kukiendea kiserema changu ndiko kilifanya kaa ainue gando.

"Nimeumwa na" nilijisemea huku nguvu ikididimia mwilini.

Nilipoangalia chini, karibu na kiserema, nilikuwa mdomo wazi. Nyoka mweusi alikuwa akijikunjua huku akinikondolea vijicho vyake vidogo. Kupiga kwangu kamsa na kutokomea kwa nyoka huyo Izraili ilifanyika kwa sadfa.

Nilipopata fahamu siku iliyofuata, nilijipata hospitalini huku nikiliwazwa na yule yule bosi niliyemwasi. Yakini, heshima si utumwa.

Masikato

31. Mwandishi asingejianda vipi asubuhi hiyo kulingana na maoni yako?
- A. Kupiga mswaki na kusukutua meno
 - B. Kwenda hamamuni
 - C. Kupiga viatu rangi na kuandika shajara
 - D. Kula kishuka na kuoga
32. Kulingana na mwandishi, katika aya ya kwanza, kujipanga ni:
- A. Kufanya jambo la maana kila asubuhi
 - B. Kuratibisha kazi yako kulingana na muda uliopewa
 - C. Kuwa na imani ya dini kabla ya kuanza kazi
 - D. Kujiandaa vilivyo kabla ya kutoka kwenda kazini
33. Kulikuwa na ratiba ngapi zote siku hiyo?
- A. 3
 - B. 1
 - C. hatujaambiwa
 - D. 2
34. Utata ulitokana na
- A. ratiba ya kila siku kutofuatwa na mwandishi
 - B. ratiba ya kila siku kutozingatiwa na boshi na mwandishi
 - C. ratiba ya kila siku kutofuatwa na boshi
 - D. ratiba ya boshi kufuatwa
35. Kwa nini mwandishi anasema; gange iliyofanywa kinyume cha sheria?
- A. Kazi isiyokubalika na serikali
 - B. Kazi ambayo haikufanywa wakati uliopangwa
 - C. Kazi ambayo isingefanywa na afisi mheshimiwa
 - D. Kazi ambayo haikuandikwa kwenye ratiba
36. Katika ibara ya nne, mwandishi aliitikia vipi?
- A. Kwa kujikuna
 - B. Kwa kupiga kamsa
 - C. Kwa kujisemea
 - D. Kwa kuचेchemea
37. Kwa jumla, si kweli kwamba;
- A. Boshi hakumchukia mwandishi
 - B. Kuumwa kwa mwandishi na nyoka kulikuwa ni malipo kwa ubaya aliyotenda
 - C. Kupigwa kwa kamsa na kutokomea kwa nyoka kulifanywa wakati mmoja.
 - D. Mwandishi alikuwa ni mtu ambaye nazingatia mipango iliyowekwa
38. Dawa ya kufisha ganzi huitwa _____
- A. dongekinga
 - B. klorofomu
 - C. piritor
 - D. nusukaputi
39. Mwandishi alifanya hivi vyote kuonyesha hasira zake ila:
- A. Kwenda shambani pake kulima
 - B. Kupiga kidoko na kujisemea peke yake
 - C. Kujipenyeza uani na kutokomea
 - D. Kukaa chini afisini na kushika tama
40. Funzo kubwa katika taarifa hii ni:
- A. Tuvae viatu shambani ili tusiumwe na nyoka
 - B. Tujihadhari sana siku ikiwa njema sana
 - C. Tuwape heshima kubwa wakubwa wetu kazini
 - D. Tukikasirishwa na yeyote, tusionyeshe

Soma kifungu hiki kisha ujibu maswali 41 hadi 50

Mkono wangu wa-tuhania nawaelekezea wanafunzi, wazazi na hata wafadhili ainati elimuni wa farafa ya Majengo wilayani Songa mbele. Tarafa hii imeonyesha ugwiji wake katika elimu. Takribani miaka minne sasa, matokeo ya mtihani wa kitaifa yatangazwapo jina hilo ndilo huwa juu orodhani. Hakika waledi wenye hekima mithili ya mfalme Solomoni wa Bibilia hawakutuhadaa wala kupaka mafuta mgongoni pa chupa walipolonga na kulongua kuwa chanda chema huvikwa pete.


Je, umewahi kukaa kitako na kutulia tuli ja maji mtungini na kupiga ubongo kwa nini kitendo hicho kinafanyika? Kama bado, basi tafadhali jiipe shughuli. Mshindani mwema akishindwa, hujaribu kupata sababu za kushindwa kwake ili kujirekebisha. Si kuwa na singizio mfano wa; kuna wizi wa mtihani huko! Enda mbali na fikra hizo chafu ambazo zitakufanya uzembe kiasi cha kuburuta mkia kila mwaka matokeo hayo yatangazwapo. Ni muhimu kutilia maanani wosia na nasaha ya wahenga..... ukiona vyaelea vimeundwa.

Kila muhusika elimuni katika tarafa hiyo anaelewa licha ya kujua kipaumbele cha elimu (ujanisi katika mtihani wowote ule na maadili kwa wanafunzi) Wana lengo linalopiganiwa na yeyote awaye. Mashindano ya wao kwa wao elimuni yamekuwa ni kama mashindano ya mchezo wa kandanda wa kuwania kombe la dunia. Ukinishinda leo, natafuta bila wivu jinsi ya kukucharaza kesho. Hali hii imeleta Kukurukukara ili kujiona unashikilia nafasi ya mbele. Wanafunzi na walimu wao wanarauka mithili ya jogoo kichaa. Wanatifua vumbi kuelekea shuleni. Takribani kila shule ina taa ya gesi. Kutoka kwao shuleni ni wakati jua linapozama. Lo! Mtafutaji hachoki akichoka keshapata. Na kuku wa mkata hatagi na akitaga haangui na akiangua vifaranga huliwa na mwewe.

Wazazi ambao wanaunga mkono shughuli zote za kielimu wanawapa walimu na wanafunzi motisha. Ama kweli, ada ya mja hunena mwungwana ni kitendo. Wanajikakamua kutoa shuleni kwao, kwa njia ya mchango, fulusi ili walimu wasichukuwe muda mwingi kwenda nyumbani kupata kishuka au hata kutayarisha staftahi. Wanahiari hata kuwanunulia watahiniwa mtihani mbalimbali ya majaribio. Wanawaajiri walimu wa ziada ili wawe na walimu wa kutosha shuleni. Ni dhahiri kuwa, kidole kimoja hakivunji chawa. Majengo ya shule katika eneo hilo ni ya kudumu, nazo dawati na vitabu vya ziada na viada si haba si duni. Hii hutokana na mchango wa wazazi.

Viongozi mbalimbali nao pia hawajaachwa nyuma. Washika dau elimuni ni kama koo na vifaranga wao na walimu wote. Viongozi wa kidini nao hawajaachwa nyuma katika kuomba kudumu kwa ushirikiano na utendaji kazi bora kwa kila mhusika

Yakini, umoja ni nguvu utengano ni udhaifu. Pia ukiona vyaelea vimeundwa. Waidha mja huvuna apandacho.



TURNING POINT STANDARD EIGHT 2014 MATHEMATICS

SERIES 008

Time: 2 hours

READ THESE INSTRUCTIONS CAREFULLY

READ THESE INSTRUCTIONS CAREFULLY

1. You have been given this question booklet and an answer sheet below. This booklet contains 50 questions.
2. When you have chosen your answer, mark it on the ANSWER SHEET, not on the questions.

HOW TO USE THE ANSWER SHEET

3. Use only an ordinary pencil.
4. Make sure that you have written on the answer sheet;

YOUR INDEX NUMBER

YOUR NAME

NAME OF YOUR SCHOOL

5. By drawing a dark line inside the correct numbered boxes mark your full Index Number (i.e. School Code Number and the three-figure Candidate's Number) in the grid near the top of the answer sheet.
6. Do not make any marks outside the boxes.
7. Keep the sheet as clean as possible and do not fold it.
8. For each of the questions 1-50 four answers are given. The answers are lettered A, B, C, and D. In each case only ONE of the four answers is correct. Choose the correct answer.
9. On the answer sheet below the correct answer is to be shown by drawing a dark line inside the box in which the letter you have chosen is written.

Example

In the Question Booklet:

39. Which one of the following is 40 minutes past midnight in 24 hour clock system?

- A. 2440hrs
- B. 1240hrs
- C. 4000hrs
- D. 0040hrs

The correct answer is D (0040hrs)

On the answer sheet

37. A B C D

38. A B C D

39. A B C D —

49. A B C D

10. Your dark line MUST be within the box.

11. For each question ONLY ONE box is to be marked in each set of four boxes.

1. Which one of the following is 70,707,007.007 in words
 - A. Seventy million seven hundred and seven thousand and seven and seventh
 - B. Seventy Million, seven thousand and seven thousandth
 - C. Seventy million seven hundred and seven thousand and seven and seven thousandths
 - D. Seven hundred and seven thousand seven thousand and seven and seven hundredths

2. What is the place value of digit 2 in the product of $\sqrt{256}$ and 24^2
 - A. Thousands
 - B. Ten thousands
 - C. Tens
 - D. Hundreds

3. What is the product of the L.C.M of 15, 20 and 30 and the G.C.D of 12, 15 and 18
 - A. 60
 - B. 180
 - C. 360
 - D. 90

4. How many times will the total value of digit 7 greater than the total value of digit 4 in the number 17384296
 - A. 1750
 - B. 17.5
 - C. 175
 - D. 17500

5. What is the next number in the sequence below
 $2\frac{1}{5}, 3\frac{3}{5}, 4\frac{2}{5}, 5\frac{1}{5}, \underline{\hspace{2cm}}$
 - A. 6
 - B. $6\frac{0}{5}$
 - C. $6\frac{4}{5}$
 - D. $6\frac{1}{5}$

6. What is the value of $\frac{0.48 \times 0.0135}{0.016}$
 - A. 40.5
 - B. 4.05
 - C. 0.405
 - D. 0.0405

7. In a cupboard there are pencils, books and rulers. The number of pencils is 20 more than that of rulers. The number of books is two times that of rulers. If the number of pencils is P, which one of the following expression below represent the total number of items in the cupboard
 - A. $4p - 60$
 - B. $4p + 60$
 - C. $4p + 20$
 - D. $4p - 20$

8. Kilo tea factory produced 18282 packets of tea leaves of these 7680 were 100g, packets 2472 were 250g packets, 1317 were 500g packets, 1kg packets were 100 fewer than the 250g packets. The rest were 50g packets. How many 50g packets were there?
 - A. 6341
 - B. 4441
 - C. 2941
 - D. 12941

9. The decimals 0.04621, 0.04261, 0.04216, 0.04126 are to be written from the smallest to the largest. Which one of the following is the correct order
 - A. 0.04126, 0.04216, 0.04261, 0.04621
 - B. 0.04216 0.04126 0.04261 0.04621
 - C. 0.04621 0.04261 0.04216 0.04126
 - D. 0.04126 0.04261 0.04216 0.04621

10. James had a string measuring 56cm. He made a right angled triangle using the whole string. What were the possible measurements of the triangle
 - A. 5cm, 12cm, 13cm
 - B. 7cm 24cm 24cm
 - C. 12cm 17cm 27cm
 - D. 8cm 21cm 27cm

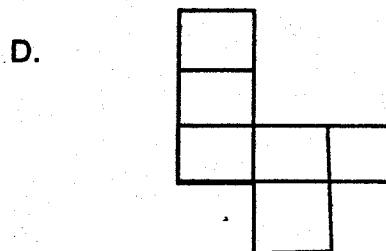
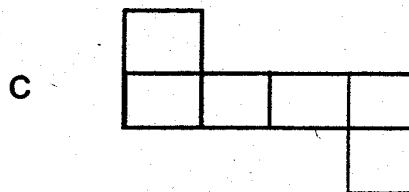
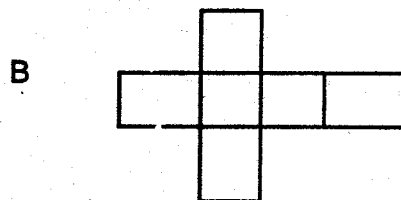
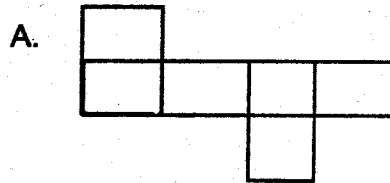
11. A shopkeeper had money in the form of notes as follows

Value of Notes in Shs.	1000	500	200	100	50
Number of notes	1	5	3	8	7

- A. 44
B. 36
C. 22
D. 42
46. The length of the road to the chief's office is 0.528km from the main road. Trees are planted on both sides of the road. If the tree were planted 8 metres apart, how many tree were planted altogether
- A. 132
B. 66
C. 134
D. 67
47. On a map whose scale is 1:200000 a rectangular piece of land measures 5cm by 4cm, what is the area of this piece of land in hectares
- A. 80000 ha
B. 8000 ha
C. 800 ha
D. 80 ha
48. The temperature of milk in a deep freezer is -9°C . After the milk was heated, the temperature rose to 54°C . What was the rise in temp
- A. 45°C
B. 63°C
C. 54°C
D. 36°C
49. The ratio of boys to girls in a class are 4:2. If there are six more boys than girls How many pupils are there altogether?
- A. 6
B. 12
C. 10
D. 18

How long did it take to travel from town C to town F at an average speed of 80km/h

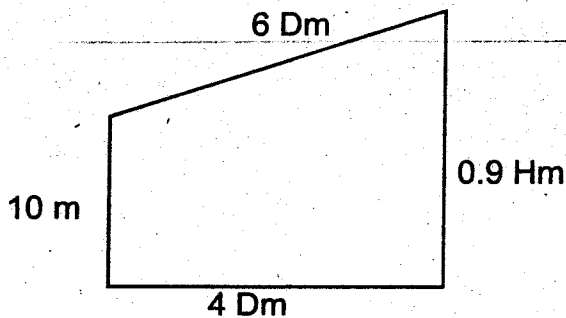
- A. $4\frac{1}{2}\text{h}$
B. $1\frac{1}{2}$
C. 2h
D. 3h
50. Which one of the four shapes shown below CANNOT be folded to form a cube



If he changed all the money into equal number of sh.5, sh. 10 and sh. 20 coins, how much money was in the form of sh. 5 coins

- A. sh. 750
- B. sh. 1500
- C. sh. 3000
- D. sh. 2500

12. The figure below represents Tom's piece of land



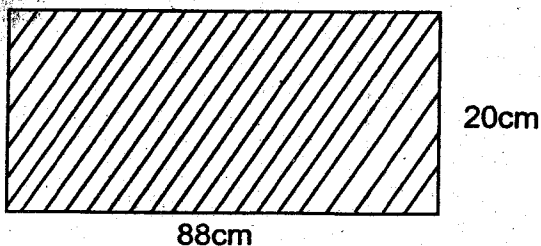
What is the perimeter of the garden in metres?

- A. 200m
- B. 119m
- C. 209m
- D. 2000m

13. Construct a triangle ABC in which AB = 5cm, AC = 4.5cm and BC = 4.5cm. Draw a circle inside the triangle measure its radius

- A. 3.5cm
- B. 2.4cm
- C. 4.5cm
- D. 1.2

14 The figure below represents a peice of cardboard which was used to wrays the curved side of a cylinder. Whose height is 20cm.



What is the radius of the cylindrical tin?

- A. 7cm
- B. 44cm
- C. 28cm
- D. 14cm

15. The table below shows how pupils scored in a mathematic test

Scores	90	80	70	30	20	10
Frequency	2	3	6	5	2	2

What was the mean score for the test

- A. 70
- B. 15
- C. 52.5
- D. 50

16. The surface area of an open pipe is 1232cm^2 . If its length is 28cm, what is its radius

- A. 14cm
- B. 44cm
- C. 7cm
- D. 22cm

17. The charges of sending a telegram are sh. 15 for up to ten words, sh 1.50 is paid for each extra word. A tax of 20% of the

total is also charged. The total payment is rounded to the nearest 50 cents. How much will Abdi pay for sending the following telegram to his brother.

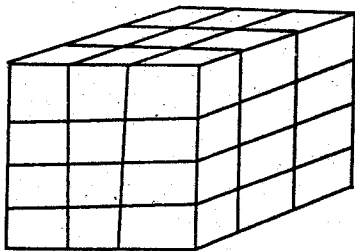
TOM ABDI BOX 7072 NAIROBI COME FOR FEES IMMEDIATELY SISTER SANDARA ZAO

- A. sh. 18.00
- B. sh. 21.00
- C. sh. 22.00
- D. sh. 16.50

18. A tank is $\frac{2}{5}$ full of water. After 270 litres have been draw off, it is $\frac{1}{7}$ full. Find the capacity of the tank when full

- A. 675 l
- B. 189 l
- C. 1050 l
- D. 1000 l

19. The figure below is made by building 4 layers of cubes. The outside of the cuboid is painted black



How many cubes have only 2 black faces

- A. 16
 B. 20
 C. 24
 D. 12
20. The ratio of the weight of two boys is 2:3. If the lighter boy weights 36kg what is the difference in the weights of the two boys
- A. 18kg
 B. 12kg
 C. 54 kg
 D. 90kg
21. Thirty five men can construct a road in 8 months. How many more men are needed to construct the same road in one month less
- A. 10
 B. 5
 C. 40
 D. 15
22. A coffee factory processed 2.4 tonnes of Coffee. The Coffee was then packed into 250g and 500g packets. The number of 250g packets was four times as many as those of 500g packets. How many 250g packets were packed
- A. 1600
 B. 6400
 C. 8000
 D. 16000

- 23 The following are properties of rhombus which one is NOT
- A. All sides are equal
 B. Daigonals are equal
 C. Opposite sides are parallel

D. Digonal bisect at right angles

24. A bucket when full of water weighs 12kg. When it is exactly $\frac{1}{3}$ full it weighs 6kg. Find the weight of the bucket when empty.
- A. 6kg
 B. 2kg
 C. 3kg
 D. 4kg

25. Tom had just enough money to buy 3 nylon shirts or 5 cotton shirts. A nylon shirt costs sh. 100 more than a cotton shirt. How much money paid Tom
- A. 1250
 B. 1000
 C. 750
 D. 850

26. A train took 3h 15min to travel from Nairobi to Nakuru. If it reached Nakuru at 0200h on Sunday, at what time had it left Nairobi
- A. 2245h Saturday
 B. 1825hr Monday
 C. 1515h Sunday
 D. 1045h Saturday

27. A matatu travelled from Kericho to Kisumu a distance of $38\frac{1}{2}$ km in 35 minutes. What was the matatu's average speed in kilometres per hour
- A. 35km/h
 B. 45km/h
 C. 66km/h
 D. 70km/h

The table below shows how the number of eggs a farm collected during one week use it to answer question 28 and 29

Days of the week	Sun	Mon	Tue	Wed	Thur	Fri	Sat
Number of eggs	54	55	52	58	56	59	51

28. On which two consecutive days was the total number of eggs collected the highest
- A. Thursday and Friday
 B. Sunday and Monday
 C. Tuesday and Wednesday

D. Wednesday and Friday

29. What was the median number of eggs collected

- A. 58 eggs
- B. 54 eggs
- C. 55 eggs
- D. 59 eggs

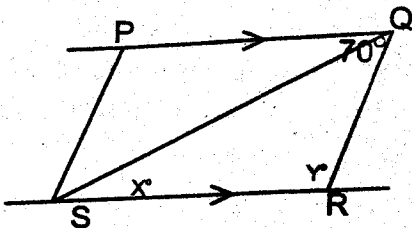
30. Kamau spent 150 in buying 24kg carrots, 16kg cabbages and 20kg tomatoes. He also spent sh. 10 on transportation. He sold the carrots at sh. 2 per kilogram, cabbages at sh 1.50 per kg and tomatoes at 4 per kg. What was his percentage loss

- A. 8%
- B. 5%
- C. $5\frac{1}{3}\%$
- D. $1\frac{1}{3}\%$

31. During one month a kiosk owner made a profit of sh. 6180. The next month his profit increased to sh. 8240. What is the percentage profit increase

- A. 25%
- B. $33\frac{1}{3}\%$
- C. 75%
- D. $133\frac{1}{3}\%$

32. In the figure below PQ is parallel to SR angle PQR = 70°



Which of the following statement is TRUE about angle y?

- A. $x = y$
- B. $x = 35^\circ$
- C. $x + y = 70$
- D. $y = 70^\circ - x$

33. Wahome split a cylindrical log whose length was 34cm and a diameter of 21cm into equal halves. What was the surface area of each piece?

- A. 2550.50
- B. 1255.25
- C. 2182.5cm^2

D. 3465cm^2

34. The table below shows the cost of sending letters by post up to a maximum weight of 2kg

Letters		sh	cts
Climate of Weight 2kg	Not over 20g	6	00
	Not over 50g	7	00
	Not over 100g	8	00
	Not over 250g	12	00
	Not over 500g	20	00
	Not over 1kg	32	00
Not over 2kg		47	00

Kenya farmers association sent five letters to its directors. Two of them weighed 350g each, the other one weighed 475g. Another one weighed 860g, and the last one weighed 1250g. How much money did they pay for postage

- A. sh. 139.00
- B. sh. 179.00
- C. sh. 164.00
- D. sh. 167.00

35. Kioko deposited sh. 10,000 in a bank which paid compound interest at the rate of 10% p.a. At the end of one year, he withdrew sh. 4000. What amount did he have in the bank at the end of two years.

- A. sh. 7000
- B. sh 7700
- C. sh 1700
- D. sh. 8100

36. Wanderi and Wanjara decided to share equally the cost of fencing the 0.65 km boundary between their shambas. The fence consists of posts 5m apart and 3 strands of barbed wire. The barbed wire is sold in full rolls of 390metres at a cost of sh. 690 each. How much will each pay towards the cost of this fence

- A. sh. 6965
- B. sh. 6925
- C. sh. 10480
- D. sh. 8450

37. Maina set out to drive from Nairobi to Kisumu after traveling for $1\frac{1}{2}$ hrs he had tyre puncture which took him 30minutes to repair. He continued for 3 hours before he reached Kisumu. If his average speed for the whole journey was 72km/h. How far is Kisumu from Nairobi
- 324km
 - 360km
 - 216km
 - 432 km

38. A trader ordered 0.4 tonnes of 50gm tea leaves packets. How many packets were these
- 800
 - 8000
 - 80000
 - 80

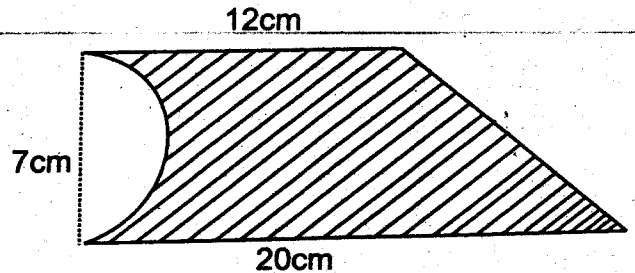
39. A salesman is paid a salary of 15,000 per month plus a commission of $2\frac{1}{2}\%$ on the sales of goods above sh. 20,000. In one month he earned a total of sh. 18000 How much was the sales of goods
- sh. 120,000
 - sh. 720 000
 - sh.140 000
 - sh. 740 000

40. The money received at a concert attended by 300 people is sh. 12500. Tickets cost sh. 50 each but children were admitted at half price. How many adults attended the concert
- 100
 - 150
 - 200
 - 250

41. Construct triangle EFG with EF = 6.2cm angle FEG = 40° , EFG = 60° . Draw a perpendicular from G to meet line EF at H. What is the measure of line EH
- 5.4cm
 - 3.5cm
 - 4.1cm
 - 2.1cm

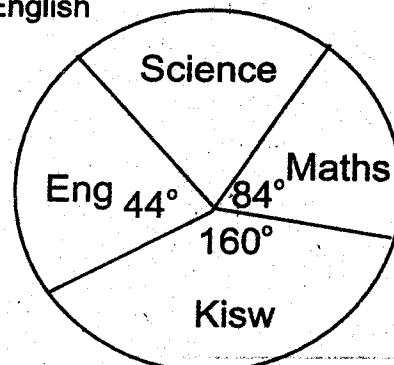
42. In the year 2000, February was Saturday. What day was March 6th the same year
- Sunday
 - Monday
 - Tuesday
 - Wednesday

43. The figure below shows a semi-circle cut out of trapezium.



Find the area of the shaded region

- 112cm^2
 - 19.25cm^2
 - 92.75cm^2
 - 73.5cm^2
44. The marked price of a T.V set was sh. 4500. The hire purchase price is 20% more than the marked price. Kamau bought the ratio on hire purchase terms. He paid the deposit of sh. 1080 and the rest in equal monthly instalments of sh. 360 each. How many months did he pay the balance.
- 12
 - 7
 - 15
 - 10
45. The pie chart below shows Peter's scores in his four subject. If he scored 80 marks in Kiswahili, how many marks did he score in English






TURNING POINT STANDARD VIII 2014

Series 008

MAKING SCHEME

MATHS	ENGLISH	KISWAHILI	SCIENCE	SOCIAL STUDIES	CIRE	IRE
1. C	1. C	1. C	1. D	1. G	51. G	1. C
2. D	2. A	2. B	2. B	2. A	52. C	2. A
3. B	3. B	3. A	3. C	3. D	53. B	3. A
4. A	4. D	4. D	4. C	4. D	54. B	4. D
5. A	5. A	5. A	5. C	5. C	55. A	5. D
6. C	6. B	6. B	6. D	6. D	56. C	6. B
7. A	7. C	7. D	7. D	7. C	57. A	7. B
8. B	8. B	8. A	8. C	8. D	58. C	8. B
9. B	9. B	9. C	9. C	9. B	59. C	9. I, II, III
10. D	10. D	10. A	10. C	10. B	60. A	10. C
11. A	11. A	11. B	11. A	11. B	61. B	11. C
12. A	12. A	12. C	12. B	12. A	62. A	12. B
13. D	13. C	13. C	13. D	13. A	63. D	13. C
14. D	14. D	14. A	14. D	14. B	64. A	14. D
15. B	15. C	15. D	15. A	15. C	65. B	15. B
16. C	16. C	16. C	16. A	16. B	66. D	16. D
17. C	17. C	17. D	17. C	17. B	67. B	17. A
18. C	18. D	18. B	18. B	18. A	68. B	18. D
19. A	19. A	19. D	19. D	19. B	69. A	19. C
20. A	20. C	20. A	20. C	20. A	70. G	20. A
21. B	21. D	21. B	21. C	21. C	71. D	21. C
22. B	22. B	22. D	22. D	22. A	72. A	22. A
23. B	23. A	23. B	23. D	23. D	73. C	23. A
24. C	24. A	24. D	24. A	24. B	74. A	24. C
25. C	25. C	25. C	25. D	25. D	75. A	25. B
26. A	26. B	26. D	26. D	26. C	76. D	26. C
27. C	27. A	27. C	27. A	27. A	77. D	27. D
28. A	28. B	28. C	28. C	28. D	78. C	28. A
29. C	29. D	29. B	29. C	29. C	79. D	29. C
30. B	30. C	30. C	30. A	30. A	80. A	30. C
31. B	31. C	31. D	31. D	31. A	81. A	
32. D	32. C	32. B	32. B	32. D	82. C	
33. B	33. B	33. A	33. B	33. D	83. D	
34. A	34. D	34. C	34. B	34. C	84. C	
35. B	35. C	35. B	35. C	35. D	85. B	
36. A	36. D	36. A	36. D	36. C	86. C	
37. B	37. A	37. B	37. C	37. A	87. D	
38. B	38. C	38. D	38. A	38. C	88. B	
39. C	39. C	39. A	39. B	39. B	89. G	
40. G	40. A	40. C	40. C	40. D	90. A	
41. A	41. C	41. D	41. D	41. A		
42. D	42. C	42. A	42. B	42. A		
43. C	43. B	43. C	43. C	43. C		
44. A	44. D	44. B	44. D	44. A		
45. C	45. B	45. C	45. B	45. C		
46. C	46. A	46. A	46. A	46. C		
47. B	47. D	47. D	47. B	47. C		
48. B	48. A	48. A	48. C	48. D		
49. D	49. D	49. D	49. C	49. A		
50. D	50. B	50. C	50. C	50. B		



TURNING POINT STANDARD EIGHT 2014 SCIENCE

Series 008

Powered By: www.eeducationgroup.com

Time: 2 hours

READ THESE INSTRUCTIONS CAREFULLY

1. You have been given this question booklet and an answer sheet below. This booklet contains 50 questions.
2. When you have chosen your answer, mark it on the **ANSWER SHEET**, not on the questions.

HOW TO USE THE ANSWER SHEET

3. Use only an ordinary pencil.
4. Make sure that you have written on the answer sheet;

YOUR INDEX NUMBER

YOUR NAME

NAME OF YOUR SCHOOL

5. By drawing a dark line inside the correct numbered boxes mark your full Index Number (i.e. School Code Number and the three-figure Candidate's Number) in the grid near the top of the answer sheet.
6. Do not make any marks outside the boxes.
7. Keep the sheet as clean as possible and do not fold it.
8. For each of the questions 1-50 four answers are given. The answers are lettered A, B, C, and D. In each case only **ONE** of the four answers is correct. Choose the correct answer.
9. On the answer sheet below the correct answer is to be shown by drawing a dark line inside the box in which the letter you have chosen is written.

Example

In the Question Booklet:

30. Which one of the following is a way of reducing friction

On the answer sheet

A. Heating

B. Oiling

C. Magnetization

D. Burying in the soil

4. [A] [B] [C] [D] 14. [A] [B] [C] [D] 24. [A] [B] [C] [D] 30. [A] [B] [C] [D]

In the second set, the box with the letter B printed in it marked.

10. Your dark line **MUST** be within the box.
11. For each question **ONLY ONE** box is to be marked in each set of four boxes.

1. Which one of the following organs is NOT Correctly matched with its excretory product?

Organ	Product
A. Lungs	Carbondioxide
B. Skin	Sweat
C. Kidney	Urea
D. Colon	Faeces

2. Which one of the following is NOT a function of amniotic fluid in reproduction?
- It helps the developing embryo float freely
 - It supplies the developing embryo with oxygen and food
 - It protects the embryo
 - It keeps the embryo moistened

3. Which one of the following shows the CORRECT order of blood flow in the heart?

- Right ventricle → left auricle → left ventricle → right auricle
- left auricle → left ventricle → right ventricle → right auricle
- Right auricle → right ventricle → left auricle → left ventricle
- left ventricle → left auricle → right auricle → right ventricle

4. During adolescence the following changes appear:
- Pimples may occur on the face
 - Hair grows under the armpits
 - Pubic hair grows
 - The uterus develops
- Which of these changes occur in both boys and girls?
- (i) (ii) (iv)
 - (i) (iii) (iv)
 - (i) (ii) (iii)
 - (ii) (iii) (iv)

5. Which one of the following shows the second and third stages of development of HIV/AIDS?
- Window and asymptomatic
 - Full blown and symptomatic
 - A symptomatic and symptomatic
 - Window and symptomatic

6. Which one of the following diseases has booster given after every 10 years?
- Polio
 - Diphtheria
 - T.B
 - Tetanus

7. Ngei observed a child with the following symptoms
- Brownish thin hair
 - Swollen body parts
 - Loose skin
 - Sores at corners of the mouth
- Which one of the following diseases was the child suffering from?
- Marasmus
 - Anaemia
 - Rickets
 - Kwashiorkor

8. Which one of the following disease is correctly matched with its mode of transmission?

Disease	mode of transmission
A. HIV/AIDS	Bacteria
B. Measles	Mosquitoes
C. Bilharzia	Snails
D. Typhoid	Plasmodium

9. Which one of the following pairs does not include childhood immunizable diseases?
- Polio and measles
 - Whooping cough and tetanus
 - Diphtheria and Malaria
 - TB and Polio


At which point does it possess the maximum kinetic energy when swinging

- A. P
- B. Q
- C. R
- D. S

46. Which one of the following factors DOES NOT affect the rate of evaporation of a liquid?

- A. Amount of liquid
- B. Surface area
- C. Temperature
- D. Air movement

47. Which one of the following pairs of machines belongs to the same group as the one drawn below?



- A. Bottle opener and wheelbarrow
- B. seesaw and pliers
- C. claw hammer and nutcracker
- D. ladder and wheelbarrow

48. Which one of the following groups of substances consists of only metals which are NOT attracted by magnet?

- A. copper cobalt and silver
- B. Iron, nickel, steel
- C. Brass, copper, aluminium
- D. Steel, silver, iron

49. A std 7 pupil mixed the following liquids in a glass

- i) spirit
- ii) kerosene

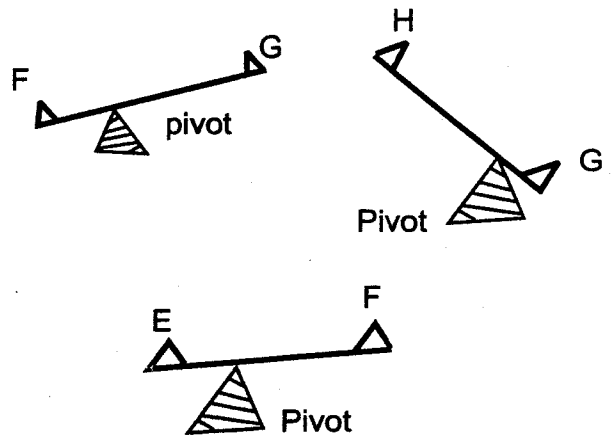
iii) water

iv) oil

How many layers were formed

- A. 4 layers
- B. 3 layers
- C. 2 layers
- D. 1 layer

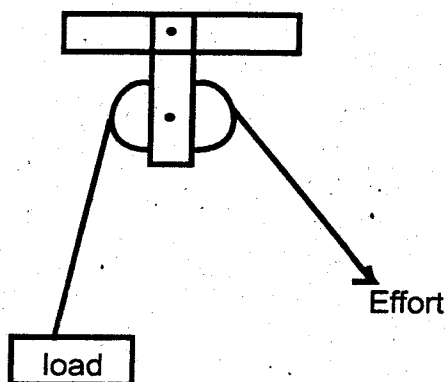
50. Kwach wanted to compare the weight of four different objects E, F, G and H. He placed them on a beam balance as shown below



Which one of the four objects was the **LIGHTEST**

- A. G
- B. E
- C. H
- D. F

10. Which one of the following pairs of planets are the smallest and largest respectively?
- A. Jupiter, mercury
 - B. Mercury, pluto
 - C. Mercury, jupiter
 - D. Mercury, saturn
11. Which one of the following consists of only substances that are all sources of commercial animal feeds?
- A. Oats, cotton seeds, salt licks
 - B. Hay, maize germ, green fodder
 - C. Legumes, banana stems, fruits
 - D. Crushed bones, grasses, wheathusks
12. The diagram below represents a set-up that is used to lift a load



- Where can the above simple machine be applied?
- A. carrying timber
 - B. raising a flay
 - C. climbing a mountain
 - D. measuring mass
13. Which one of the following is a modern method of food preservation?
- A. salting
 - B. smoking
 - C. use of honey
 - D. using low temperature

14. Which of the following pairs of tools have load between the fulcrum and the effort?
- A. Scissors, hammer, door hinges
 - B. Spade, fishing rod, forearm
 - C. See-saw, crowbar, broom
 - D. Bottle opener, nutcracker, wheelbarrow
15. Most improved charcoal jikos conserve energy mainly because _____
- A. Heat loss is reduced by the clay lining insulator
 - B. They have small air spaces on the charcoal holder
 - C. They have small charcoal space
 - D. They last longer than the traditional jikos

16. The following are liquid added together in glass bottles labeled P Q R and S by some pupils
- P - Cooking oil and diesel
 - Q - Kerosene and spirit
 - R - Petrol and lemon juice
 - S - Water and petrol

Which glass bottle contains liquids that CANNOT be separated by decanting?

- A. P
 - B. Q
 - C. R
 - D. S
17. Which one of the following groups consists of flowering plants only?
- A. beans, maize, pine
 - B. fern, cabbage, algae
 - C. grass, cabbage, sugarcane
 - D. moulds, algae, pine

18. Which one of the following consists of livestock internal parasites only?

- A. mites, flea, ticks
- B. flukes, tapeworms, hookworms
- C. tapeworms, mites, flukes
- D. leeches, tapeworm, tsetseflies

19. The following is a food chain

Grass ——— Gazelle ——— Lion

If all the gazellels were killed what would be the long term effect?

- A. The lion would eat grass
- B. The grass would decrease
- C. The lions would increase
- D. The lion would became extinct

20. Which one of the following is TRUE for both chickens and frogs? Both

- A. have a constant body temperature
- B. have scales
- C. breathe through the lungs
- D. feed on insects only

21. Which method of feeding livestock requires a lot of capital to start and maintain the structure?

- A. tethering
- B. paddock grazing
- C. zero grazing
- D. strip grazing

22. Birds which feed on grains have beaks that are?

- A. strong, short and curved
- B. strong, short and copped
- C. long, sharp and pointed
- D. strong, short and straight

23. Three of the following are examples of recycling. Which one is NOT?

- A. making new bottles from broken bottles

- B. using waste paper to make tissues
- C. melting plastics and remoulding them
- D. using jam packing cans and jars to store other products such as sugar

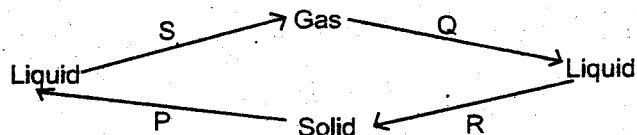
24. Which of the following properties of soil does not depend on the size of its particles?

- A. Colour
- B. Drainage
- C. Texture
- D. Water retention

25. What fraction of air is rare gases?

- A. $\frac{4}{5}$
- B. $\frac{1}{5}$
- C. $\frac{3}{100}$
- D. $\frac{1}{1000}$

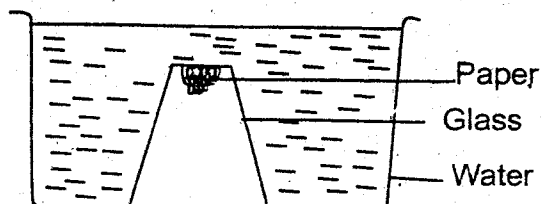
26. The diagram below shows how matter can be changed from one state to another



Which one of the following represents P,Q, R and S?

- | | | | |
|-------------|----------|--------|-----------|
| P | Q | R | S |
| A. freeze | condense | melt | evaporate |
| B. condense | freeze | melt | evaporate |
| C. condense | melt | freeze | evaporate |
| D. melt | condense | freeze | evaporate |

27. The diagram below represents a set-up that was used to demonstrate a certain property of matter



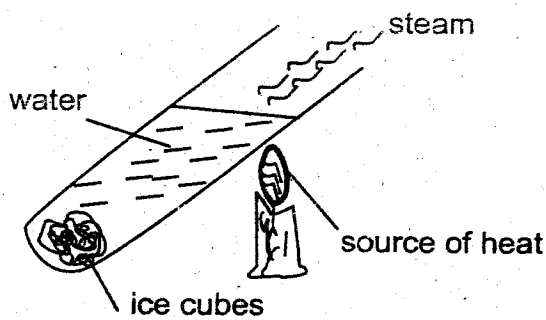
The property demonstrated was _____

- A. air occupies space
- B. water exerts pressure
- C. air has mass
- D. water occupies space

28. A 100g particle of sand sinks in water but a 100g block of wood floats in the same water. This is because both differ in?

- A. Weight
- B. Mass
- C. Type of material used
- D. Volume

29. The set-up below demonstrates that



- A. air is a poor conductor of heat
- B. ice melt when heated
- C. water is a poor conductor of heat
- D. water is a good conductor of heat

30. Which one of the following statements is TRUE about diffused reflection?

- A. All the light is reflected in different direction
- B. Occur when light passess through water drops
- C. All the light is reflected in the same direction
- D. light bounces off the smooth and rough surface at the same time

31. Which one of the following shows the correct order of energy transfer that occur


in an electric bell when in use

- A. chemical — Electrical — magnetic — kinetic
- B. chemical — kinetic — magnetic electrical — sound
- C. electrical — kinetic — magnetic chemical — sound
- D. electrical — kinetic — chemical magnetic — sound

32. Which one of the following statements is not a safety practice when dealing with electric appliances?

- A. Dry hands before touching a switch
- B. Use one socket for many appliances
- C. Repair electrical appliances when unplugged
- D. Do not insert objects into electric sockets

33. The diagram below shows an electric bulb



The part marked x is used to convert

- A. chemical to heat energy
- B. electrical to heat energy
- C. heat to electrical energy
- D. electrical to magnetic energy

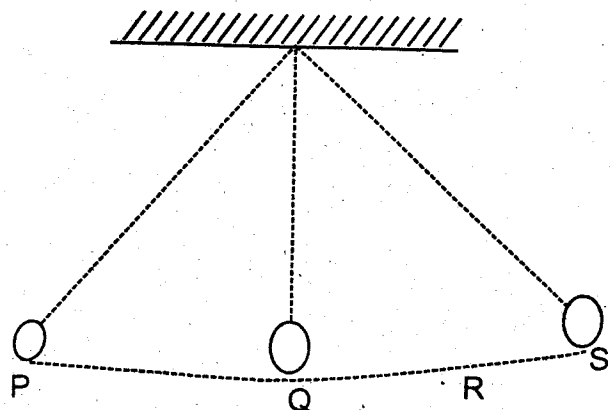
34. Which one of the following is NOT a reason for cooking food?


- A. for easy digestion
- B. add nutrients
- C. killing germs
- D. adding flavour

35. John and James took a common breakfast consisting of the following food. Hot water, banana and cassava. What else did they require in the breakfast in order to take a balanced diet?
- Orange
 - Sweet potato
 - Sausage
 - Mango juice
36. Which one of the following statements is the best description of what energy is?
- The force that opposes motion
 - The gravitational pull of the earth
 - Force exerted over a given surface area
 - Ability to do work
37. The type of soil erosion whereby small channels are formed on gentle sloping land is called _____
- splash
 - galley
 - rill
 - sheet
38. Which one of the following plants is a cereal?
- maize
 - sunflower
 - peas
 - beans
39. Which of the following plants does not produce flowers?
- Onion
 - Cedar
 - Cactus
 - Grass
40. Which of the following would be the most effective method of controlling mites in livestock?
- Dusting
 - Dosing

- Dipping
- Deworming

41. Which one of the following is not a safety precaution when dealing with electricity?
- Don't overload electric socket
 - Do not place objects over electric wires
 - Avoid putting sticks and pencils in sockets
 - Touch bare wires with dry hands only
42. Rainfall is measured in _____
- litres
 - millimetres
 - cubic centimetres
 - millilitres
43. Condensation occurs when _____
- liquid changes to a solid
 - a gas changes to a solid
 - gas changes to a liquid
 - solid changes to a gas
44. Which one of the two things will pass through a vacuum?
- magnetism and sound
 - magnetism and light
 - light and sound
 - light and heat
45. The diagram below represents a pendulum when in use





TURNING POINT STANDARD EIGHT 2014 SOCIAL STUDIES

Series
008
Time: 2h 15 Mins

READ THESE INSTRUCTIONS CAREFULLY

1. You have been given this question booklet and a separate answer sheet. The question booklet contains 50 questions.
2. Do any necessary rough work in booklet
3. When you have chosen your answer, mark it on the ANSWER SHEET, not in the question booklet.
HOW TO USE THE ANSWER SHEET
4. Use only an ordinary pencil.
5. Make sure that you have written on the answer sheet:
YOUR INDEX NUMBER
YOUR NAME
NAME OF YOUR SCHOOL
6. By drawing a dark line inside the correct numbered boxes mark your full Index Number (i.e. School Code Number and the three-figure Candidate's Number) in the grid near the top of the answer sheet.
7. Do not make any marks outside the boxes.
8. Keep your answer sheet as clean as possible and DO NOT FOLD IT.
9. For each of the Questions 1 - 90 four answers are given. The answers are lettered A, B, C, D in each case only ONE of the four answers is correct. Choose the correct answer.
10. On the answer sheet the correct answer is to be shown by drawing a dark line inside the box in which the letter you have chosen is written.

Example

In the Question Booklet:

43. Who among the following is an ex-officio member of parliament
- A. The chief Justice
 - B. The president
 - C. Attorney General
 - D. Sergeant - at - arms

The correct answer is C (Attorney General)

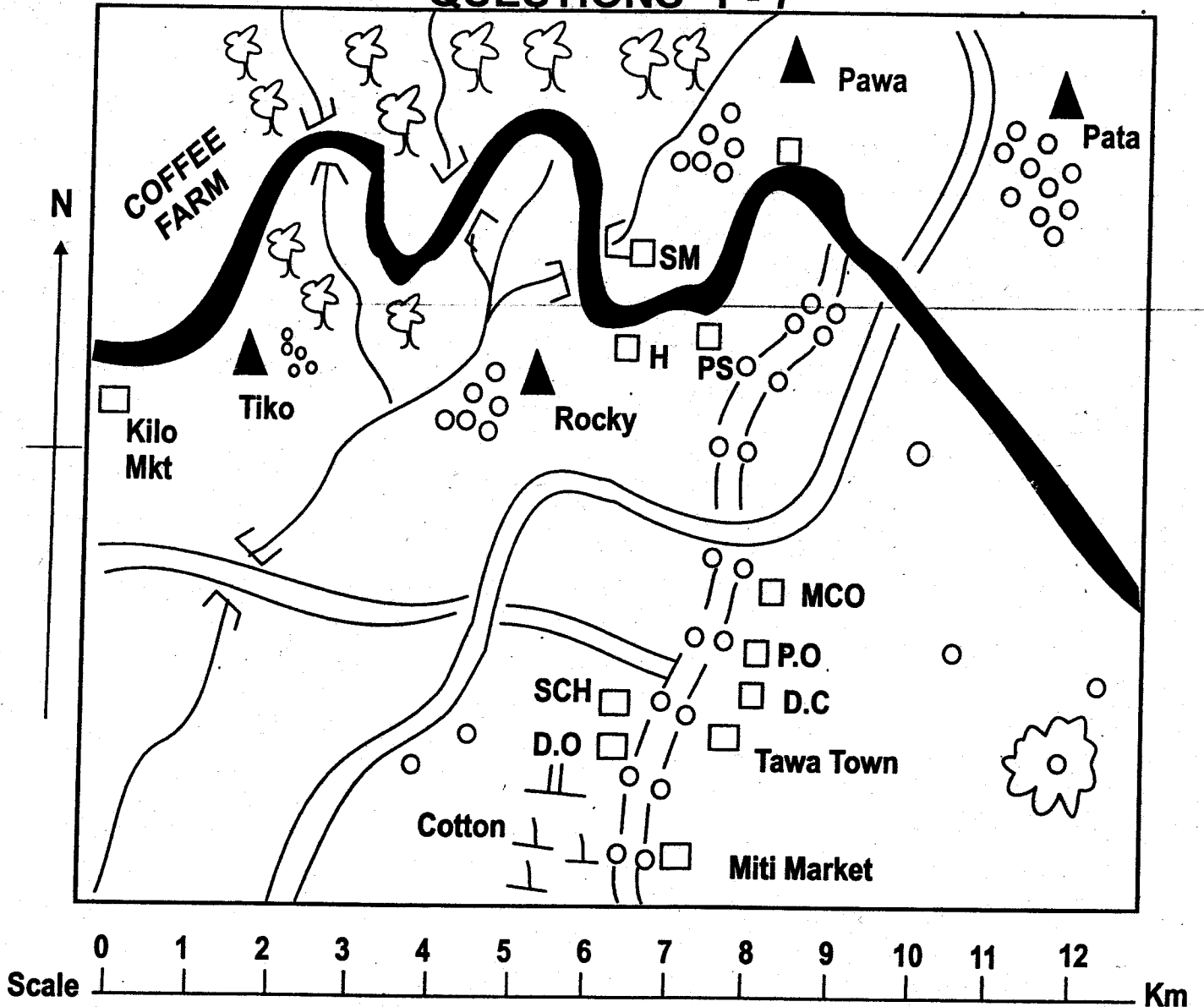
On the answer sheet

A B C D A B C D A B C D A B C D

11. Your dark line MUST BE within the box.
12. For each question ONLY ONE box is to be marked in each set of four boxes.

This question paper consists of 10 printed pages

STUDY THE MAP OF PAWA AREA AND ANSWER QUESTIONS 1 - 7

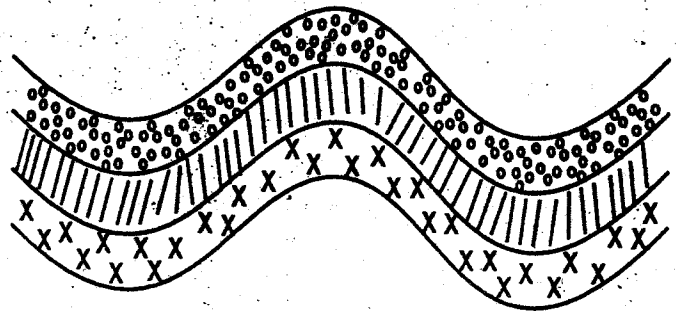


KEY

- ▲ Hill
- H Hospital
- P.S Police Station
- D.C District Commission
- ☁ Forest
- ↔ River & Bridge
- P.O Post Office
- MCO Municipal Council Office
- ⊥ Shrubs
- ⊙ Settlement
- ☼ Quarry
- SM Saw Mill
- D.O District Officer
- SCH School

1. What is the direction of Tiko hill from the Quarry?
 - A. North East
 - B. South West
 - C. North West
 - D. South East
2. Which one of the following is most densely populated. The area around?
 - A. Pata Hill
 - B. Rocky Hill
 - C. Tiko Hill
 - D. Pawa Hill
3. What is true about this tarmac road between Kilo market and the Saw mill. The road is _____
 - A. on the plain region
 - B. avoiding settlement
 - C. constructed at the lowland areas
 - D. on the ridge
4. The climate of Pawa area to the southern part is likely to be: _____
 - A. hot and wet
 - B. cool and wet
 - C. cool and dry
 - D. hot and dry
5. The school in Tawa town wishes to expand its compound. Which of the government offices should the school management committee approach for more land?
 - A. The chief's office
 - B. The District Education office
 - C. The municipal Council office
 - D. The District officer's office
6. Which of the following is true about the forest in Pawa area? it is used _____
 - A. To settle the landless people in the area
 - B. For wildlife conservation
 - C. For medicinal purpose

- D. As water catchment area
7. Three of the following economic activities are carried out in the region. Which One is NOT?
 - A. Trading
 - B. Mining
 - C. Fishing
 - D. Crop farming
8. Which of these pre-historic sites in Eastern Africa is correctly matched with the country it is found?
 - A. Olorgesailie - Tanzania
 - B. Engaruka - Ethiopia
 - C. Hadar - Kenya
 - D. Nsongezi - Uganda
9. Which of the combination of rivers below drain into Indian ocean?
 - A. Cunene, Limpopo, Cuanza
 - B. Rufiji, Zambezi, Juba
 - C. Senegal, Gambia, Cunene
 - D. Congo, Chari, Ubangi
10. Which of the following minerals is associated with the largest province in Kenya?
 - A. Gold
 - B. Tin
 - C. Fluorspar
 - D. Carbondioxide
11. The diagram below represents a mountain which was formed as a result of



- A. the process of erosion
 - B. folding
 - C. volcanicity
 - D. faulting
12. Which one of the following crops is used to flavour food?
- A. Cloves
 - B. Pyrethrum
 - C. Cocoa
 - D. Cashwnuts
13. The following are characteristics of a certain leader
- (i) He was crowned in 1895
 - (ii) He was captured by British
 - (iii) He was both a prophet and spiritual leader
 - (iv) Led his people in opposing the construction of the railway on their land
- The leader described above was?
- A. Koitalel Arap Samoei
 - B. Mekatilili wa Menza
 - C. Masaku
 - D. Nabongo mumia
14. The method of mining soda ash around lake magadi is commonly known as
- A. Panning
 - B. Dredging
 - C. Drilling
 - D. Shaft
15. The time at town Y 60°E is 4.20pm. If it is 2.20 p.m in town z on what longitude is town z?
- A. 30°W
 - B. 90°E
 - C. 30°E
 - D. 90°W
16. Below are three communities in Eastern Africa
- i) Boran
 - ii) Somali

iii) Rendile

The true statement about the communities listed above is that they

- A. were the last communities to settle in Eastern Africa
- B. migrated into Eastern Africa from the North East
- C. migrated from the central Africa region
- D. first settled around the lake Turkana

17. One of the achievements of Nelson Mandela is that _____

- A. he took part in making the first constitution in south Africa
- B. he was the first black president in South Africa
- C. he led the demonstration at sharpeville town in South Africa
- D. he formed the party that fought for south Africa's independence

18. Below are factors that influenced the origin of town in Kenya

- i) Availability of clean water
- ii) Central position along the Uganda railway
- iii) Existence of flat land

The town whose origin was influenced by the factors listed above is?

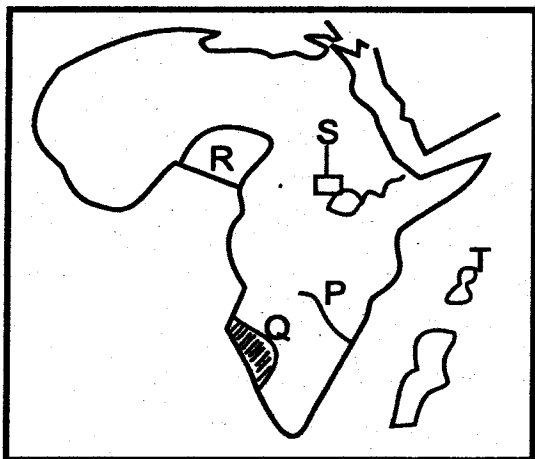
- A. Nairobi
- B. Kisumu
- C. Eldoret
- D. Thika

19. Who among the following officers chairs the District Education board meetings

- A. District Education Officer
- B. District Commissioner
- C. Minister of Education
- D. Chairperson of Kenya National Union of teachers

20. Three of the following are functions of the independent electoral and Boundaries commission. Which one is not?
- Nominating candidates for various political parties
 - Appointing election officials
 - Registering voters
 - Providing civic education
21. Which one of the following was a recreational activity conducted among African communities during the pre-colonial days?
- Playing football
 - Traditional weddings
 - Wrestling matches
 - Circumcision ceremonies
22. Three of the following are business opportunities in Kenya. Which one is NOT
- Diamond and Copper mining?
 - M-pesa business
 - Farming
 - Road construction

Use the map below to answer questions 23



23. The main reason for the establishment of the river project marked P was
- create a lake for fishing
 - provide water for irrigation
 - control floods
 - provide HEP

24. The countries marked R and S were colonized by
- British
 - German
 - Portugal
 - Italy
25. The Island marked T is
- Mauritius
 - Zanzibar
 - Madagascar
 - Seychelles
26. The Ocean current that influences the climate of the area Q is
- Ganary
 - Guinea
 - Benguela
 - Mozambique
27. Three of following are effects of cattle rustling in Kenya. Which is NOT?
- loss of land
 - lack of peace among communities involved
 - loss of livestock
 - displacement of communities
28. According to the new constitution a province will be replaced by a county. The county will be headed by a _____
- deputy public prosecutor
 - senator
 - chief justice
 - governor
29. Which is the main problem facing sisal production in Kenya?
- pest and diseases
 - inadequate rainfall
 - competition from synthetic fibres
 - cheap imported clothes

30. Which one of the following groups consists of crops grown in Kenya during the pre-colonial period?
- A. Cassava and sorghum
 - B. Rice and sisal
 - C. Wheat and coffee
 - D. Tea and sugarcane

31. The table below represents rainfall and temperature figures for station Africa. Use it to answer question 31

Month	Jan	Feb	Mar	Apr	May	June	July	Aug	Sep	Oct	Nov	Dec
Temp in c°	28	28	28	27	26	26	26	27	27	27	27	28
R/fall in mm	41	69	150	201	206	206	66	84	193	226	150	40

Which one of the following statements correctly describes the climate of the station?

- A. The station is hot and wet throughout the year
 - B. The station has one wet season and one dry season
 - C. The station is cold throughout the year
 - D. The station receives most of the rain at the beginning of the year
32. Three of the following are elements of the Kenya's constitution. Which one is NOT?
- A. Executive
 - B. Education
 - C. Citizenship
 - D. The public service
33. A plateau reduced to almost a plain is called a
- A. range
 - B. mountain
 - C. residual hill
 - D. peneplain
34. The following dams are found in East Africa
- I) owen fall

- ii) kaburu
- iii) hale
- iv) kindaruma
- v) kabale
- vi) masinga

Which of the following are found on River Tana

- A. I), (iii) and (iv)
- B. I), (iv) and (v)
- C. ii), (iv) and (vi)
- D. I), (iv) and (vi)

35. The presence of a large water body may influence a certain type of rainfall which one?

- A. Relief type
- B. Equatorial type
- C. Cyclonic type
- D. Convection type

36. Which of the following is NOT a function of the legislature in Kenya

- A. To pass laws
- B. To debate bills
- C. To enforce the law
- D. To control government finance

37. The following are some industries found in certain town in Eastern Africa

- i) shoe-making
- ii) plastic -making
- iii) soap - making
- iv) textile -making

The industries given above are _____

- A. manufacturing industries
- B. jua kali industries
- C. service industries
- D. processing industries

38. Which of the following groups of products consists of exports from the economic community of west Africa states? (ECOWAS) region

- A. vehicles, chemical and ships
- B. cement, glass and hides
- C. petroleum, coal and palm oil

D. electronics, horticultural crops and wheat

39. The main achievement of Kwame Nkrumah of Ghana was that _____
- A. he was a well educated leader
 - B. he was the leader of CPP which fought for Ghana's independence
 - C. he had met many great leaders of the world
 - D. He had supported successful strikes in Ghana

40. Inland fishing grounds in Tanzania include
- A. lakes Bangweulu, chad and Tanganyika
 - B. river congo, lake george and lake victoria
 - C. lake kariba, lake edward and river tana
 - D. lake tanganyika and victoria and malagarasi swamp

41. Which one of the following relief regions of Kenya is correctly matched with its climatic conditions

Relief region	Climate conditions
A. Nyika plateau	Hot and dry
B. Highland region	Hot and wet
C. lake region	Cool and wet
D. coastal plains	Hot and cool

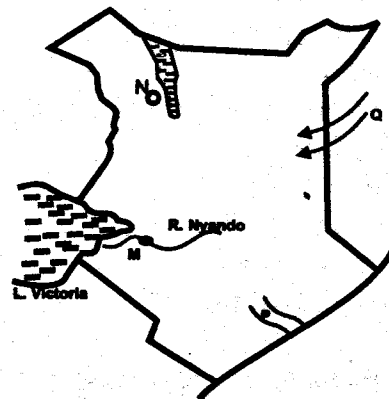
42. Three of the following are problems facing settlement schemes in Kenya. Which one is Not?
- A. Low population in the schemes
 - B. Poor maintenance of equipment
 - C. Failure by farmers of repay loans
 - D. Poor transport networks
43. Which one of the following is the main factor that contributed to the growth of Eldoret Town?
- A. Presence of many industries
 - B. Presence of international report
 - C. The function of the town as a collection centre for agricultural produce
 - D. Presence of maning activities

44. The most common economic activity carried out in the savannah and semi-arid areas of Africa
- A. Pastoralism
 - B. Mining
 - C. Substence farming
 - D. Sisal farming

45. The MAIN road that runs from cape Town to Cairo is known as
- A. the great south-North road
 - B. The trans-Africa Highway
 - C. The great North road
 - D. The trans-saharan highway

46. Which one of the following statements is true about Juvenile courts in Kenya
- A. They deal with criminnal cases
 - B. They deal with traffic offence cases
 - C. They deal with cases of children who are below 18 years
 - D. The deal with cases related to election disputes

Use th e map to answer questions 47 - 50



47. The irrigation scheme marked M is useful for the growing of
- A. cotton
 - B. sugarcane
 - C. rice
 - D. water melon
48. The pre-historic site marked N is
- A. Fort Tenana
 - B. Koobi farm
 - C. Olorgesaille
 - D. Naikotome

49. The source of river marked P is
- Ngong hills
 - Aberdare ranges
 - Indian ocean
 - Mount Kenya
50. The people who migrated into Kenya following the route marked Q were mainly?
- Traders
 - Pastoralists
 - Cultivators
 - Hunters and gather
51. Authority for the government to spend public money is given by
- The Central Bank of Kenya
 - The Ministry of Finance
 - The National Assembly
 - The President
52. The following is the process of conducting general elections in Kenya.
- Declaration of parliamentary seats vacant
 - Nomination of candidates by political parties
 - Dissolution of parliament
 - voting
- The correct order in which the process takes place is
- (iv) (ii) (I) (iii)
 - (iii) (iv) (I) (ii)
 - (iii) (I) (ii) (iv)
 - (iii) (iv) (I) (ii)
53. The following are fish caught in marine fishing grounds. Which one is NOT?
- Tuna
 - Nile perch
 - Lobster
 - Kingfish
54. Which one of the following groups of communities belongs to the semitic language group?
- Iteso, Acholi, Lango
 - Arabs, Tigreans, Amharus
 - Boran, Somali, Galla
 - Agikuyu, Aembu, Ameru
55. Which one of the following was not a title of an officer in the traditional kingdom of Buganda?
- | Title | Officer |
|--------------|----------------|
| A. Mtuale | Army officer |
| B. Omulamuzi | Chief justice |
| C. Katikiro | Prime minister |
| D. Omuwanika | Treasurer |
56. Which one of the following factors contributed to the collapse of tourism industry in Uganda in 1970's?
- Pampant poaching
 - Terrorism
 - Political instability
 - Environmental challenges
57. In which year did Mozambique achieve her independence?
- 1975
 - 1964
 - 1980
 - 1992
58. A foreigner qualifies to apply for Kenya citizenship after living in the country for _____
- Two years
 - Five years
 - Seven years
 - Ten years
59. Which one of the following is an economic right?
- Right to life
 - Right to education
 - Right to work
 - Right to privacy
60. Who adjourns parliament?
- speaker
 - Attorney General
 - President
 - Prime Minister

CHRISTIAN RELIGIOUS EDUCATION

61. Which of the following actions of Adam shows he had power over the creation
- Planting the land
 - Naming the animals
 - Marrying Eve
 - Eating the fruits
62. One of the following prophets was referred to as the prophet of hope. Who was he?
- Isaiah
 - Elijah
 - Ezekiel
 - Hosea
63. What happened to Abraham when he was living in Haran
- His wife Sarah gave birth to Isaac
 - He was circumcised
 - He was separated with lots
 - He was called by God
64. Which one of the following was an achievement of King Solomon. He
- put ark of covenant in the temple
 - brought covenant box to Jerusalem
 - defeated the Jebusites
 - wrote the book of Psalms
65. Jesus read the book of Isaiah in a synagogue saying he had come to set the captives free at
- Bethlehem
 - Nazareth
 - Jerusalem
 - Bethany
66. The main lesson Christians learn from the miracle of healing a Roman officer's servant is to
- be generous
 - be obedient
 - be thankful
 - have faith
67. Jesus ascended back to heaven at
- Mt. Herob
 - Mt. Olives
 - Mt. Bethany
 - Mt. Sinai
68. In Traditional African Society it was believed that people who died went to
- Paradise
 - Spirit world
 - The tomb
 - Heaven
69. Kamau is a very rich man who is living with poor neighbours. As a Christian Kamau should
- Employ the poor neighbours
 - Move away from the poor neighbours
 - Donate money to the church
 - Build a school
70. During the Passover feast, the Israelites were to do the following activities EXCEPT
- Killing the lamb without spot
 - Eating bitter herbs
 - Eating bread with yeast
 - Eat while standing
71. Tom your desk mate hides her lunch from you as a Christian what action would you take
- report her to the prefect
 - run away from the desk
 - stop talking to her
 - teach him about sharing
72. What accusation was made by the Jews against Jesus before the high priest
- saying he would destroy the temple of Jerusalem
 - claiming to be the king
 - stopped people to pay taxes
 - mixing with sinners
73. Which one of the following is a fruit of the Holy Spirit
- Miracles
 - Healing
 - Faithfulness
 - Prophecy
74. Which one is a Historical book found in the New Testament
- Acts
 - Revelation
 - Matthew
 - Colossians

5. Who among the following people were not specialists in traditional African Community
- Deacons
 - Magician
 - Herbalists
 - Warriors
6. The second last book in the old Testament is
- Malachi
 - Ezra
 - Jude
 - Zachariah
7. One of the following elements of prayer means supplication for oneself. Which one is it?
- Thanksgiving
 - Worship
 - Intercession
 - Petition
8. The Christian event celebrated to mark Christ victory over death is?
- Good Friday
 - Pentecost
 - Easter
 - Ascension
9. Who among the following people was in the temple. When Jesus was being dedicated to God
- Sapphira
 - John
 - Hosea
 - Simeon
10. Which one of the following took place last
- Crucifixion of Jesus?
 - Last supper
 - Turning water into wine
 - Triumphant entry
11. In which language was the New Testament First written
- Hebrew
 - Italian
 - Greek
 - Latin
12. Your classmate bill wandera has asked you on how best he would spend his leisure time what advise would you gave him as a christian
- Going to disco
 - Reading interesting story books
 - Visit the sick
 - Going to the cinema
13. Moses was willing to go back to Egypt when he was sent by God after
- His Father-in-law Jethro blessed him
 - Realizing that the Pharoah who knew him had died
 - Marrying zipporah as his wife
 - Being given a rod to guide him.
84. The main reason why people in both traditional African societies and Christianity work is to _____
- be praised
 - became popular.
 - continue God's work
 - Earn money
85. Work in traditional African society was mainly defined according to
- gender and family
 - gender and ability
 - family and wealth
 - ability and background
86. Which one of the following is the main effect of drug abuses in Kenya?
- Addiction
 - Poor Family relationships
 - Increased criminal activities
 - Famine and hunger
87. Which one of the following is a demonstration of gift of the Holy Spirit?
- Helping the needy
 - Being patient with everybody
 - Visiting a children's home
 - Preaching the Gospel
88. Who among the following is referred to as apostle to the Non-jews
- Peter
 - Paul
 - John
 - James
89. In traditional African societies, Community possessions were shared among _____
- clan members in the clan
 - brothers in the family
 - all members in the community
 - the rich in the community
90. Every year Elkanah and his family went to worship and offer sacrifice to God at a place called
- Shloh
 - Shechem
 - Jerusalem
 - Canaan

61. The following are names of suratul Fatiha. Which one means the seven repeated verses?
- Fatihatul Kitab
 - Ummul Qur'an
 - Suratul Mathani
 - Suratul Hamd
62. In suratul Quraish, Allah mentions some of the favours accorded to the Quraish of Makkah. The favours were as a result of a Dua said by?
- Prophet Muhammad (saw)
 - Nabii Adam (A.S)
 - Prophet Ibrahim A.S
 - Banu Hashim clan
63. How many verses does surah Inshirah contain?
- 8
 - 11
 - 9
 - 13
64. Where was surah Dhuha revealed?
- Madina
 - Abyssinia
 - Egypt
 - Makkah
65. Which surah of the Quran warns the enemies of the Prophet (SAW) that they shall be the final losers?
- Dhuha
 - Inshirah
 - Kafirun
 - Kawthar
66. Complete the hadith, "Nobody will be a true believer until....."
- he is kind to his neighbour
 - his hobbies are inline with my teachings
 - he joins his relatives
 - he gives zakah
67. Which one of these agreements was signed by the prophet and the Jews of Madina?
- The Madina constitution
 - The first pledge of Aqabah
 - The treaty of Hudaibiyah
 - The treaty of makkah
68. Which one is not a cause for major hadath?
- Giving birth
 - Going for Friday prayer
 - Sexual intercourse
 - Death
69. Which one of the following has the correct order of the event?
- Pledge of Aqaba

- Conquest of Makkah
- Boycott
- Hijjatul-Widda
- Hijra
- Madinan constitution.

From the list above, which events took place in Makkah?

- iii, iv, v
 - v, i, ii, iii,
 - v, vi, ii, iv
 - iii, ii, i, iv
70. North Eastern has experienced drought for a long time. Which prayer will they perform to ask Allah to change the situation?
- Istikhara
 - Kusuf
 - Istisqai
 - Tahajud
71. For how long did the period of secret call last?
- 13 years
 - 10 years
 - 3 years
 - 23 years
72. The second part of the kalimah teaches us to?
- avoid shirk
 - follow the prophet
 - be good Muslims
 - pray every day
73. *Amiinul Wahyi* was a title given to Angel?
- Mikail
 - Israfil
 - Jibril
 - Ridhwan
74. Which one of these did not take place in Ashura?
- Firaun was drowned
 - The ark of Nabii Nuh landed on dry land
 - Imam Hussein was killed
 - The battle of Badr was fought
75. Which one of these is NOT true about Islamic teachings on parents?
- Obedying parents is better than going for Jihad
 - A father is three times the status of the mother
 - Paradise is under the feet of the mother
 - We should not raise our voices higher than that of our parents

- C. Paradise is under the feet of the mother
D. We should not raise our voices higher than that of our parents
76. Jawahir is a pilgrim from Kenya, she will put ihram at?
A. Qarnal Manazil
B. Raabigh
C. Dhul Hulaifa
D. Yalamlam
77. What was the miracle performed by Nabii Swāle?
A. He drove a camel from a rock
B. He told people what they had eaten
C. He was swallowed by a fish
D. He brought a table of food from heaven
78. Zanawiah is a business man who buys local sugar, repacks it on packets marked 'imported' and sells them at a higher price. This act is known as?
A. Hoarding
B. Ghush
C. Nepotism
D. Ihtikaar
79. Which one is common to Eid and Jum'ah prayers?
A. Time of prayers
B. Number of takbirahs
C. Number of Khutbah
D. Adhan and Iqamah
80. Which one of these is NOT among the ash'hurul Hurum?
A. Ramadhan
B. Dhul Hijja
C. Muharram
D. Dhul Qaada
81. Which one is a common characteristic of prophets and Angels?
A. They were created from light
B. They never disobey Allah
C. They were sent to mankind with a common message
D. They are mentioned by names in the Quran
82. Which coastal state cooperated with the Portuguese when they first came to the East Coast of Africa?
A. Mombasa
B. Banadir
C. Pate
D. Malindi
83. Which one of these will not nullify udhu?
A. Fainting
B. Urinating
C. Eating
D. Touching private parts
84. Which of these surahs is termed as the heart of the Quran?
A. Ikhlas
B. Yasin
C. Faatiha
D. Ayatul Qursy
85. Who among these women wanted Nabii Yusuf against his will?
A. Asya
B. Maryam
C. Zulekha
D. Hajar
86. Four people spent their zakah as shown:
Salim: building a mosque
Yahya: bought a plane ticket for a stranded traveler
Murtaza: built and ran an orphanage
Imran: Paid his neighbour's debt for a saloon car.
Who did not spend his zakah money correctly?
A. Salim
B. Imran
C. Murtaza
D. Yahya
87. Khadija has 50 acres of land on which he grows maize through irrigation. What percentage of his production should he give as zakah?
A. 2.5%
B. 10%
C. 7.5%
D. 5%
88. Hamza was being advised by his friends on dressing. Who gave the BEST advice?
A. Waliid: You should have a special dress for Friday prayers
B. Al-aqmar: You can put on your golden watch
C. Abdi: Silk dress is allowed for men
D. Issa: You should only put on a kanzu
89. Three of the following are conditions for the one washing the dead. Which one is not? He should be:
A. an adult Muslim
B. sane
C. a relative of the deceased
D. honest and trustworthy
90. The attribute of Allah Al Baari means?
A. The Creator
B. The forgiver
C. The inventor
D. The designer