

STEGA SERIES TERM 3 - 2014

3RD CODE

KISWAHILI NURSERY

JINA _____ TAREHE _____

Imla

1. _____
2. _____
3. _____
4. _____
5. _____


Jaza pengo

bab _____
rul _____
mez _____
j _____ t _____


Unganisha haya maneno

ba + ba = _____
ru + ka = _____
so + ma = _____
u + a = _____
ki + ta + bu = _____


Chora picha




kuku



meza






kalamu



kitabu

Andika majina



STEGA SERIES TERM 3 - 2014

3RD CODE

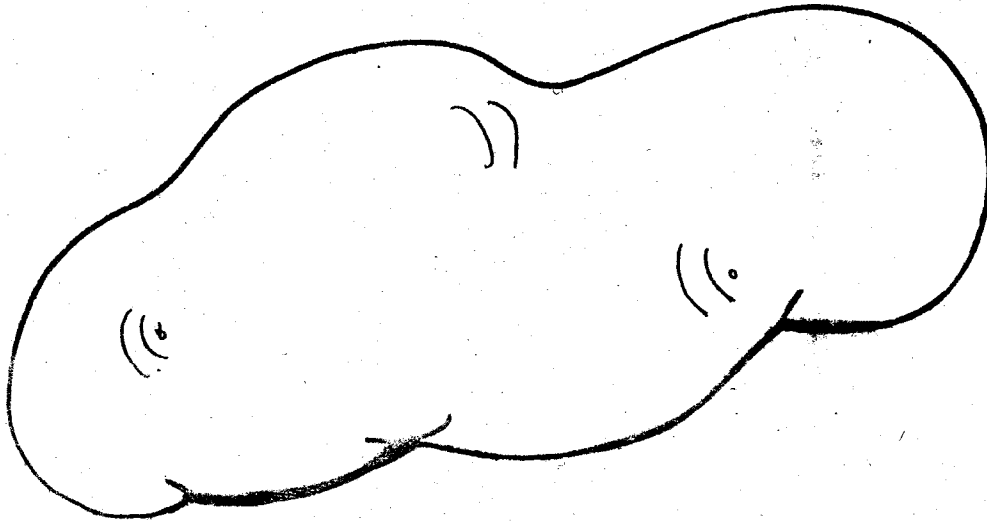
CREATIVE

NURSERY

NAME _____

DATE _____

Colour the potato



Complete the pattern



y y y

h h h

V : V : V

s s s

STEGA SERIES TERM 3 - 2014

3RD CODE

LANGUAGE NURSERY

NAME _____ DATE _____

Fill in the missing capital and small letters


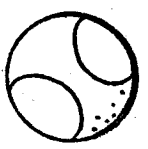
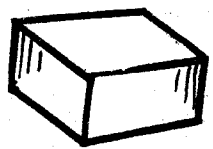
Aa _____ Ee _____ Gg _____
ll _____

_____ Zz

Fill in

B _____ k
_____ is
j _____ g
p _____ t

Name the pictues



(tree, egg, ball,

Make words

s - _____
a - _____
ee - _____
ii - _____

Draw the pictures

pencil book

hut dot

STEGA SERIES TERM 3 - 2014

3RD CODE

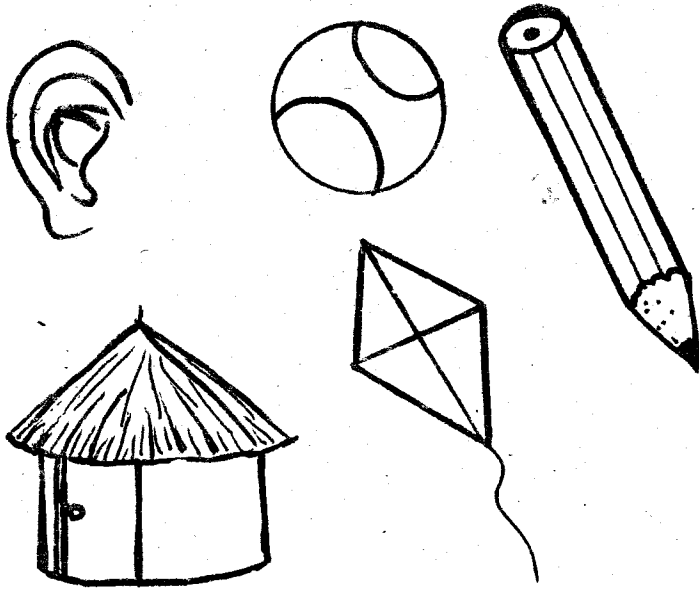
READING / KUSOMA

NURSERY

NAME _____

DATE _____

Read the pictures




Read the words

gun dress ball
man tree sock
girl cook apple

Read the sentences

1. My neck has tick.
2. It is a hot pot.
3. A cop hit a boy.
4. I can fix a zip.

Soma picha



Soma majina

kaka beba homa
kioo rula babu
sana lala wewe
moja usiku kuku

Soma sentensi

Soma na dada sasa.
Mimi ni mtoto.
Wewe ni nani?
kuna jua.

STEGA SERIES TERM 3 - 2014

3RD CODE

MATHEMATICS

NURSERY

NAME _____

DATE _____

Fill in the missing numbers

2, 3, _____, _____, _____, _____, 8

11, 12, _____, _____, _____, _____

_____, _____, 6, 7, 8, _____, _____

Draw the objects

12 = _____

10 = _____

9 = _____

14 = _____

Add

$2 + 4 =$ _____

$7 + 3 =$ _____

$0 + 4 =$ _____

$2 + 1 + 4 =$ _____

$5 + 3 + 2 =$ _____

Count the objects

○○○○○○○○○○○
○○○○○○○○○○○ = _____

○○○○○○○○○○○ = _____

○○○○○○○○○ = _____

○○ = _____

Take away (-)

$6 - 4 =$ _____

$5 - 2 =$ _____

$7 - 7 =$ _____

$2 - 1 - 0 =$ _____

$4 - 3 - 1 =$ _____

STEGA SERIES TERM 3 - 2014

3RD CODE



SCIENCE

NURSERY

NAME _____

DATE _____

Name the weather chart



(cloudy day, windy day, sunny day, calm day, rainy day)

Complete the sentences orally

I have _____ fingers (5, 10)

I smell with my _____ (nose, mouth)

I see with my _____ (ears, eyes)

I walk with my _____ (hands, legs)

My hair is colour _____

STEGA SERIES TERM 3 - 2014

3RD CODE

SOCIAL & CRE NURSERY

NAME _____

DATE _____

Name four classroom objects (orally)

1. _____

2. _____

3. _____




4. _____

Name and draw the family members

father



mother

brother



sister

baby






C.R.E.

Draw the God's creations

sun

moon

man



Stars

Girl

baby

