

Powered By: www.eeducationgroup.com

Menu:

1. Social
2. Science
3. Mathematics
4. English
5. Kiswahili
6. Reading

TRIAL SERIES

STD 3 - TERM 3 - 2014

SOCIAL STUDIES / C.R.E.

PENPLUS
NPS-3

Name School

1. North, South, East and West are called _____ points.
(cardinal, direction, wind)
2. The _____ is the head of a school. (pastor, headteacher, watchman)
3. To be neat and tidy in a class is a _____ (game, rule, play)
4. The green traffic light means _____ (go, stop, wait)
5. Muslims go to worship in the _____ (temple, church, mosque)
6. All pupils in my _____ are my classmates. (school, class, church)
7. The father of my father is my _____ (uncle, grandfather)
8. Crops grown for sale are called _____ crops. (food, cash, potatoes)
9. Our district is called _____
10. Two or more Divisions make a _____ (Division, County, District)
11. When there are clouds in the sky the weather is _____ (rainy, windy, cloudy)
12. Sunshine, clouds and rain are element of _____ (rain, climate, weather)
14. When it is too cold we wear _____ clothes. (light, heavy, dirty)
15. Things that make our life better are called _____ (activities, resources, food)
16. Farmers irrigate their farms when it is _____ (cold, dry, rainy)
17. Farmers in our District form a _____ community. (farming, trading, religious)
18. People who stay in other people's houses pay _____ (fees, rent, fare)
19. The first colour in our national flag is _____ (white, red, black)
20. Doing wrong things to children is called child _____ (labour, abuse, right)
21. Long rains start from _____ to _____ (March to May, June to July, October to March)
22. Churches, Mosques and Shrines are places of _____ (singing, dancing, worship)
23. The **MAIN** community living in our district is _____ (Bantus, Nilotes, Cushites)
24. A very wet land is called a _____ (forest, swamp, hill)

25. Grass thatched houses are good in places with _____ weather. (cold, hot, rainy)
26. A community's way of life is _____ (community, culture)
27. Rivers flow from _____ (mountains, valleys, lakes)
28. The sides of hills are known as _____ (slopes, valleys)
29. A _____ is not a man-made feature. (bridge, hill, roads)
30. A map can be used to _____ a place. (grow crops in, guide people to, change)

C.R.E.

31. She lived in Philippi and used to make expensive clothes. Her name was _____ (Sarah, Lydia, Dorcas)
32. Genesis means _____ (God, Bible, beginning)
33. Jesus went to pray in the garden of _____ (Gethsemane, Eden, Golgotha)
34. _____ were the greater leaders of Israel. (Elders, Patriarchs, Pastors)
35. The Sabbath day is also called _____ (Sunday, church day)
36. The _____ call their God Nyasaye. (Maasai, Luo, Nandi)

37. Abraham, Isaac and Jacob are forefathers of the _____ people. (Israelites, Christians)
38. Mathew, Mark, John and Luke are the first four books of the _____ (old testament, new testament)
39. _____ was the mother of Samuel. (Penninah, Hannah, Mary)
40. Ananias and Saphira were **NOT** _____ to God. (honest, good, greedy)
41. The father of John the baptist was called _____ (Zachariah, Samuel, Abraham)
42. _____ taught the Lord's prayer. (John, God, Jesus)
43. Jesus' father was a _____ (teacher, carpenter, doctor)
44. Jesus was born during the rule of King _____ (Pilate, Cain, Herod)
45. The son of Isaac was _____ (Jacob, Abraham, David)
46. Jesus was _____ years old when he went to Jerusalem. (16, 14, 12)
47. David killed _____ (Paul, Goliath, Satan)
48. Joseph had _____ brothers. (10, 11, 12)
49. Jesus was baptized in river _____ (Tana, Chania, Jordan)
50. I will _____ God for giving me my body. (thank, hate, kill)

TRIAL SERIES

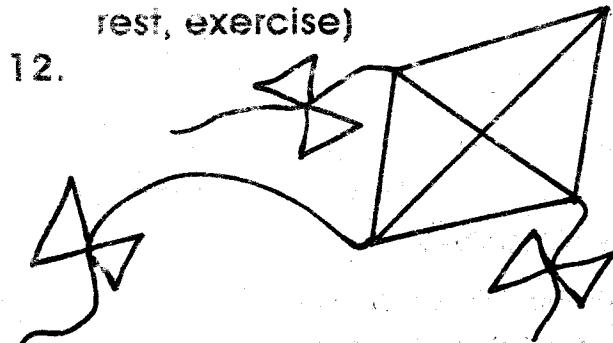
STD 3 - END TERM 3 - 2014

SCIENCE

PENPLUS
NPS.3


Name School

1. _____ causes diseases.
(Plants, Rain, Germs)
2. The sun is a natural source of _____
(water, light, food)
3. We eat the _____ of a mango.
(seed, leaves, fruits)
4. To make soil fertile we add _____
(manure, stones, charcoal)
5. Light travels in a _____ line.
(straight, curved)
6. _____ grows in deserts.
(Maize, Cactus, water lilly)
7. Which of the following animals protects itself by hiding inside its shell? _____
(Bee, Cockroach, Tortoise)
8. Filtering water removes _____
(colour, germs, dirt)
9. A _____ is a place where a plant grows well. (habitat, forest, source)
10. Cockroaches live in _____ corners of the house. (bright, dark, hot)
11. To strengthen our body muscles we need _____ (water, rest, exercise)




This is a _____

13. An animal that can cause diarrhoea is _____
(tick, housefly, spider)
14. Disinfectant is something that kills _____
(animals, germs, insects)
15. To kill germs and flies in a pit latrine we use _____ (animals, germs, ash)
16. The body of a fish is covered with _____
17. A deaf person has a problem with the sense of _____
(smelling, talking, hearing)
18. We get sugar from _____
(sugarcanes, lemons, oranges)
19. We take _____ when we fall sick. (tea, medicine, beer)
20. _____ is passing of message without speaking. (Talking, Whispering, Gestures)



21. The weather is _____
22. Heavy rain causes _____
(floods, drought)
23. Drums produce sound when _____
(hit, blown, plucked)
24. _____ is an annoying sound.
(Noise, Music, Drum)

Name the parts.




25. _____
 26. _____
 27. _____
 28. _____

(Eye, Antennae, Abdomen, Thorax)

29. _____ is the biggest bird.
 (Turkey, Goose, Ostrich)
 30. A doctor who checks our teeth is called _____ (nurse, an optician, a dentist)
 31. A _____ is a small animal.
 (elephant, bee)


Draw

32.



A leaf

33.



Roots

34. Leaves are _____ in colour.
 35. Papers and books are made from _____ (sisal, reeds, wood)

Name three insects.


36. _____
 37. _____
 38. _____

39. A bee gives us _____ (sugar, wax, water)
 40. A bird has a _____ instead of a mouth. (bill, beak, teeth)
 41. _____ are found inside a fruit. (Seeds, Leaves, Flowers)

42. _____ soil is good for modelling. (Clay, Sand, Loam)
 43. Fruits should be _____ before eating. (cooked, dried, washed)

44. Clean teeth are _____ (weak, unhealthy, healthy)

45.



This plant grows in _____

46. Most snakes are _____ (useful, good, poisonous)
 47. Which of the following is not a good form of exercising? _____ (Playing football, Fighting, Swimming)
 48. A baby has _____ senses. (4, 3, 5)
 49. Pyrethrum is used for making _____ (fertilizers, manure, insecticides)
 50. We feel through our _____ (skin, ears, eyes)

TRIAL SERIES

STD 3 - END TERM 3 - 2014

MATHEMATICS

PENPLUS
NPS-3

Name School

Add

1.
$$\begin{array}{r} 532 \\ + 87 \\ \hline \end{array}$$

2.
$$\begin{array}{r} 365 \\ + 212 \\ \hline \end{array}$$

3.
$$\begin{array}{r} 825 \\ + 184 \\ \hline \end{array}$$

4. $10 + \square = 24$

5. $6 + 5 + 9 = \underline{\hspace{2cm}}$

Subtract

6.
$$\begin{array}{r} 700 \\ - 300 \\ \hline \end{array}$$

7. $538 - 16 = \underline{\hspace{2cm}}$

8. $276 - 42 = \underline{\hspace{2cm}}$

9.
$$\begin{array}{r} 624 \\ - 42 \\ \hline \end{array}$$

Write in words

10. 214 - $\underline{\hspace{2cm}}$

11. 629 - $\underline{\hspace{2cm}}$

12. $42 + 48 = \underline{\hspace{2cm}}$

13. $71 - 21 = \underline{\hspace{2cm}}$

14. 1 hundreds 0 tens 8 ones =
 $\underline{\hspace{2cm}}$

15. 659 = $\underline{\hspace{1cm}}$ hundred $\underline{\hspace{1cm}}$
tens $\underline{\hspace{1cm}}$ ones.

16. $400 = \underline{\hspace{1cm}}$ hundreds $\underline{\hspace{1cm}}$
tens $\underline{\hspace{1cm}}$ ones

17. $951 = 900 + \square + \square$

18. What is the sum of 5, 20 and 4?
 $\underline{\hspace{2cm}}$

Multiply

19. $2 \times 4 = \underline{\hspace{2cm}}$

20. $5 \times 5 = \underline{\hspace{2cm}}$

21. $6 \times 4 = \underline{\hspace{2cm}}$

What is the missing numbers in each pattern?

22. 70, 80, $\underline{\hspace{1cm}}$, 100

23. 122, $\underline{\hspace{1cm}}$, 124, 125, $\underline{\hspace{1cm}}$

Write in figures

24. Fifty nine = $\underline{\hspace{2cm}}$

25. Twelve = $\underline{\hspace{2cm}}$

26. Thirty two = $\underline{\hspace{2cm}}$

27.
$$\begin{array}{r} 9 \\ \times 2 \\ \hline \end{array}$$

28.
$$\begin{array}{r} 2 \\ \times 3 \\ \hline \end{array}$$

29.
$$\begin{array}{r} 4 \\ \times 3 \\ \hline \end{array}$$

30. $0 + 70 + 2 = \underline{\hspace{2cm}}$

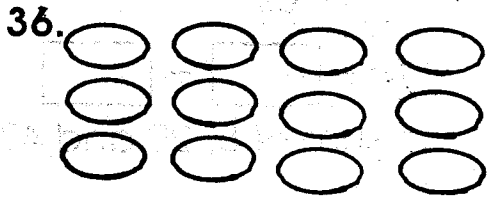
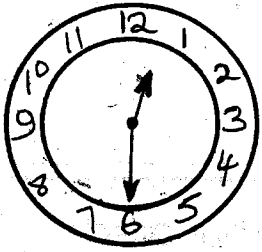
31. $200 + 10 + 3 = \underline{\hspace{2cm}}$

32.
$$\begin{array}{r} 60 \\ + 16 \\ \hline \end{array}$$

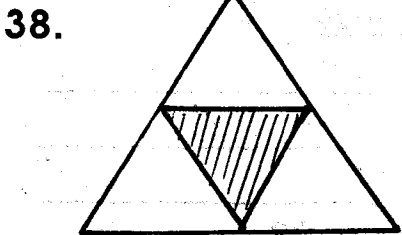
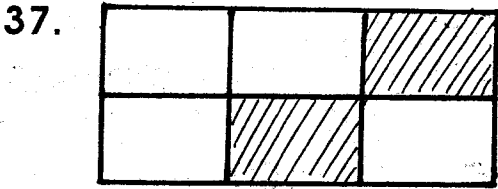
33. $24 \div 4 =$ _____

34. $30 \div 6 =$ _____


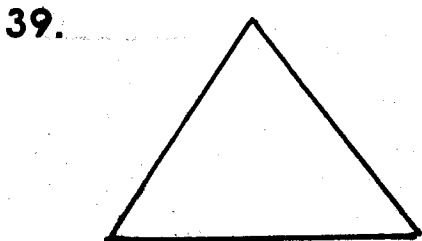
35. What is the time?




_____ x _____ = _____
What is the shaded fraction?




Name the shapes



41. _____





42. _____



43. Three weeks have _____ days.

44. Which one holds more water?

A or B _____



45. There are 426 boys and 349 girls in a school. How many pupils are there altogether? _____

46. Peter had 60 camels, 20 goats and 15 cows. How many animals does Peter have altogether? _____

47. A shopkeeper bought 160 eggs, 16 broke. How many eggs was he left with? _____

48. Divide 14 by 7 = _____

49. 1 hour have 60 minutes
3 hours has _____ minutes

50. A half of eighteen is _____

TRIAL SERIES

STD 3 - END TERM 3 - 2014

ENGLISH

PENPLUS
NPS-3

Name School

Dictation

1. _____
2. _____
3. _____
4. _____
5. _____

Fill the missing letters

6. Br _____ k
7. Ru _____ er
8. Slipp _____ r _____
9. Radi _____
10. C _____ bb _____ g _____
11. Amb _____ la _____ ce

Write the plurals of these words

12. Tomato - _____
13. Berry - _____
14. Donkey - _____
15. Chief - _____

Write the opposite.

16. Stand - _____
17. Dry - _____
18. Cold - _____
19. New - _____
20. Cheap - _____

Use the words below to fill the gaps.

(from, out of, in, has, or have)

21. Mary is coming _____ school.
22. My mother _____ gone to the market.
23. A frog has jumped _____ a pond.
24. Ben's father works _____ the police station.
25. I _____ finished my work.

Write correctly.

26. obok - _____
27. blefa - _____
28. seohu - _____
29. act - _____
30. therfa - _____

Join these words.

31. Arm - _____
32. Hand - _____
33. Head - _____

(teacher, chair, ball, pot)

Use (is, an, a, are)

34. This is _____ umbrella.
35. These lorries _____ very old.
36. The baby _____ crying.
37. Tom and John _____ friends.
38. Give me _____ pen.

Make a doing word by adding "ing" in the words in the brackets.

39. We are _____ (cut) sugarcane.
40. Juma is _____ (clean) the house.
41. I am _____ (drink) milk.
42. Jane is _____ (dance)

Write the young ones.

43. Sheep - _____
44. Dog - _____
45. Cat - _____

(kitten, puppy, lamb)

Read the story and answer the following questions.

A cat is a small animal. It can be kept as a pet. It gives birth to kittens. Kittens like playing with their mother. Their mother catches rats and bring to them.

46. The small animal is called a _____
47. Kittens like doing what? _____
48. The mother of the kitten catches what? _____
49. Cats can be kept as _____
50. The cat gives birth to _____

TRIAL SERIES

DARASA LA TATU MUHULA WA TATU - 2014

PENPLUS
NPS-3

KISWAHILI

Jina..... Shule.....

Imla

1. _____
2. _____
3. _____
4. _____
5. _____

Jaza pengo

6. B _ r _ b _ ra
7. K _ fy _ k _ o
8. M _ p _ m _
9. T _ t _ m _ k _

Andika kwa umoja.

10. Kalamu zenu zinaandika vizuri. _____
11. Hawa ni wanafunzi. _____
12. Mbao hizi ni ndefu. _____
13. Haya ni maembe. _____

Andika kinyume

14. Bomoa - _____
15. Inuka - _____
16. Rudi - _____
17. Nyamaza - _____

(Inama, Enda, Jenga, Sema)

Andika vizuri

18. taab - _____
19. nigem - _____
20. ngapa - _____

Chagua jibu sahihi.

21. Yai _____ lilitunjwa na mtoto. (hii, hilo)
22. Kuni _____ zitatumika kupika. (hii, hizo)
23. Mimea _____ inapendeza. (hii, hizo)
24. Mzazi _____ mefika. (a, wa)
25. Barabara _____ zitajengwa. (hii, hizi)

Tumia 'li' 'na' 'ta'

26. Walimu wa _____ fika shuleni jana.
27. Vyoo hivyo vi _____ safishwa jioni.
28. Mama o _____ pika chakula sasa hivi.

Jaza nafasi

29. Vlaki hivi ni _____
(tamu, vitamu)
30. Yal hili ni _____
(bovu, mbovu)
31. Mawaziri hao ni _____
(wengi, mingi)
32. Bakuli hili ni _____
(likubwa, kubwa)

Andika wingi

33. Kisu hiki ni kikubwa.

34. Barua hii inapendeza.

35. Jembe lako lina makali.

36. Utaenda kumuona.

Andika kwa maneno

37. 98 - _____
38. 102 - _____
39. 207 - _____
40. 337 - _____

Andika kwa herufi kubwa au ndogo

41. baba amefika bondeni.

42. nairobi ni mji mkuu wa kenya.

43. TUTAENDA SHULENI KESHO.

Kamilisha sentensi hizi

44. _____ ni mzazi wa kiume.
45. Ndugu wa kiume wa mama huitwa _____
46. Msimu wa jua kali huitwa:-

47. Mwezi wa sita huitwa _____

- (Juni, kiangazi, baba, mjomba)

Soma hadithi hii na ujibu maswali.

Swara ni mnyama mwenye mbio sana. Yeye hukimbia sana wakati anapofukuzwa na wanyama kama Simba. Yeye hukimbia ili aokoe maisha yake.

48. _____ ni mnyama mwenye mbio sana.
49. Swara hufukuzwa na wanyama kama _____
50. Swara hukimbia ili aokoe _____ yake.

TRIAL SERIES

STD 3 - END TERM 3 - 2014

READING

PENPLUS
NPS-3

Name School

Read the words.

- | | | | |
|-------------|-------------|----------------|---------------|
| 1. Home | 5. Assembly | 9. Ticket | 13. Bathroom |
| 2. Polite | 6. Hospital | 10. Ambulance | 14. Housewife |
| 3. Grateful | 7. Bandage | 11. Playground | 15. Wound |
| 4. Polite | 8. Sausage | 12. Bucket | |

Read these sentences.

- | | |
|--|--|
| 1. Kombo had to weed the flowers herself. | 3. When you sleep under a mosquito net you keep away mosquitoes. |
| 2. The villagers had to carry stones themselves. | 4. Boil water before drinking. |
| | 5. The boys crossed the road carefully. |

KUSOMA

Soma maneno haya

- | | | | |
|------------|------------|---------------|----------------|
| 1. Bendera | 5. Redio | 9. Mbalamwezi | 13. Hudhurungi |
| 2. Kilima | 6. Ngao | 10. Chutama | 14. Samaki |
| 3. Chombo | 7. Ng'ambo | 11. Foronya | 15. Cheti |
| 4. Jambo | 8. Filamu | 12. Bendera | |

Soma sentensi zifuatazo

- | | |
|--------------------------------------|---|
| 1. Kwake kumefungwa sungura wengi. | 5. Akienda atampata mwalimu mkuu. |
| 2. Bati lao hupiga kelele. | 6. Tutaenda shuleni wakati wa alfajiri. |
| 3. Yeye ni mwenyekiti wa chama chao. | 7. Watoto wanacheza uwanjani. |
| 4. Wao ni watu wazuri. | 8. Darasa letu lina wanafunzi wengi. |