

Powered By:

www.eeducationgroup.com

Menu:

[social](#)

[science](#)

[mathematics](#)

[kiswahili](#)

[insha](#)

[composition](#)

[marking scheme](#)

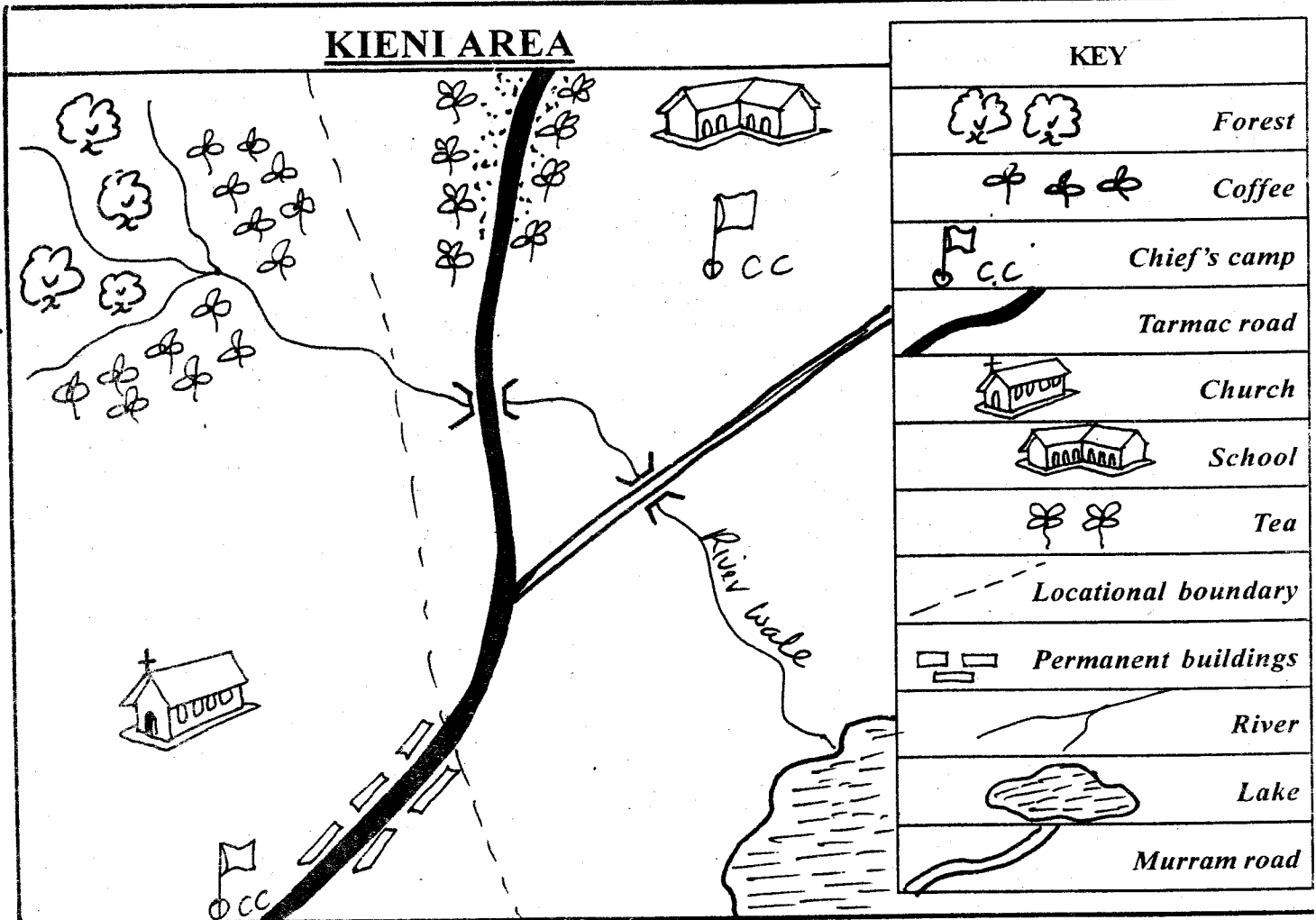
TRIAL SERIES

STD 4 - END TERM 3 - 2014

SOCIAL STUDIES / C.R.E

Time 2 Hrs 15 Mins

PENPLUS
NPS-3



Study the map of Kieni area and answer questions 1-7.

- River Wale flows from:-
A. North to South
B. North West to South East
C. West to East
D. South East to North West
- The climate of Kieni area is:-
A. Cool and wet
B. Cool and dry
C. Hot and wet
D. Wet and dry
- How many bridges are in Kieni area?
A. 1
B. 2
C. 4
D. 3
- How many locations are in Kieni area?
A. 3
B. 2
C. 1
D. 5
- The **MAIN** religion in the area is:-
A. Islam
B. Christianity
C. Hindu
D. Buddhism
- Which of the following is a physical feature found in the area?
A. Lake
B. School
C. Bridge
D. Chief's camp
- Which of the following is the highest area in the map?
A. South West
B. North East
C. North West
D. West
- Our country Kenya has _____ counties.
A. 8
B. 47
C. 9
D. 3
- Which one of the following is the **MAIN** tourist attraction in our country?
A. Good roads
B. Fishing
C. Farming
D. Wildlife
- The four points of a compass are called _____ points.
A. Cardinal
B. Total
C. True
D. Direction

11. Rivers, hills, swamps and mountains are called _____ features.

- A. Nature B. Physical
C. Man-made D. Artificial

12. A train moves on the:-

- A. Air B. Metals C. Road D. Rail

13. Which of the following is a traditional method of sending message?

- A. Road B. Telephone
C. Television D. Messengers

14. The right of one being a citizen is known as:-

- A. Birth B. Registration
C. Citizenship D. Democracy

15. _____ cattle are kept for meat.

- A. Beef B. Pastoral C. Dairy D. Domestic

16. Jua kali artisans use _____ available materials to make their wares.

- A. Exported B. Imported
C. Locally D. Kenya

17. In Kenya the president is elected after every _____ years.

- A. 4 B. 7 C. 10 D. 5

18. The green colour in traffic lights means:-

- A. Stop B. Get ready
C. Go D. Wait

19. The officer incharge of a Division is:-

- A. Chief B. Elder C. D.O D. OCPD

20. In the past, boys were taught the following **EXCEPT:-**

- A. Looking after cattle B. Hunting
C. Cooking D. Making traps

21. The work of the police is to:-

- A. Beat criminals B. Teach people
C. Keep law and order D. Shoot thieves

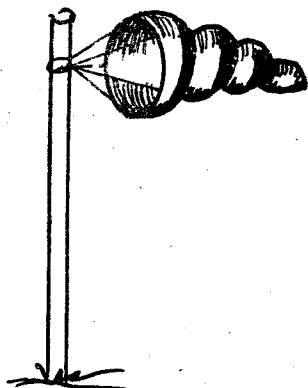
22. The current deputy President of Kenya is:-

- A. Kalonzo Musyoka B. William Ruto
C. Joseph Murumbi D. Raila Odinga

23. Uhuru Kenyatta is the _____ president of Kenya since independence.

- A. First B. Second C. Third D. Fourth

24.



The instrument above is used to measure:-

- A. Speed of wind B. Temperature
C. Strength of wind D. Amount of rainfall


25. A flat land is called:-

- A. Plain B. Hilly
C. Rift valley D. Slope

26. National parks are managed by:-

- A. Schools B. Town council
C. K.W.S D. M.P.s

27. The road sign below means:-



- A. Road closed B. Road junction
C. Hospital D. Danger ahead

28. Which one is **NOT** a language group in Kenya?

- A. Bantu B. Cushites
C. Nilotes D. Khoikhoi

29. The first vice-president of Kenya was:-

- A. Daniel Arap Moi B. Oginga Odinga
C. Raila Odinga D. Kalonzo Musyoka

30. Areas with few people have _____ rainfall.

- A. Low B. High
C. Much D. Adequate

31. When a place has many people we say it is _____ populated.


- A. Sparsely B. Full
C. Densely D. Congested

32. _____ is the growing of flowers, fruits and vegetables.

- A. Mixed farming B. Floriculture
C. Horticulture D. Subsistence

33. Vegetables and flowers are best transported by:-

- A. Road B. Water
C. Air D. Railway



What kind of rainfall is shown above?

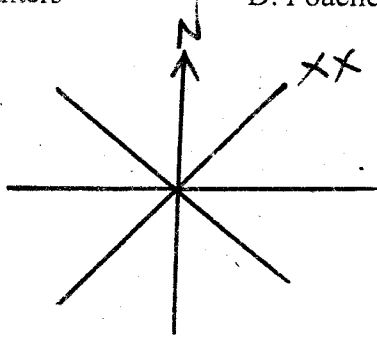
- A. Relief B. Frontal
C. Conventional D. Inland

35. The side marked **B** is called:-

- A. Wind ward B. Rainshadow
C. Windwide D. Rain shadow

36. Beef cattle are reared in big farms called:-
 A. Ranches B. Paddocks
 C. Zero-grazing D. Free-range
37. What is poaching?
 A. Illegal trading B. Illegal hunting
 C. Legal hunting D. Legal trade
38. People who kill wildlife without permission are called:-
 A. Animal eaters B. Meat eaters
 C. Hunters D. Poachers

39.



The direction marked XX is:-

- A. E.N B. S.W
 C. N.E D. S.E
40. The vegetation that grows along the river is:-
 A. Bamboo B. Bush
 C. Riverine D. Thicket
41. The trade carried by our fore fathers was called:-
 A. Barter trade B. Bi-lateral trade
 C. Foreign trade D. Cash trade
42. Peace is important in the society because people:-
 A. Fight B. Steal
 C. Run away D. Trade
43. Who is the head of a county?
 A. President
 B. Senator
 C. Governor
 D. Member of parliament
44. Which of the following is a traditional game?
 A. Football B. Wrestling
 C. Netball D. Cricket
45. Three of the following are elements of weather **EXCEPT:-**
 A. Soil B. Wind
 C. Sun D. Rain
46. Dairy farming in Kenya is mainly practised in the:-
 A. Plateaus B. Plains
 C. Highlands D. Lowlands
47. Which one of the following is **NOT** a cause of road accidents in Kenya?
 A. Over-speeding B. Overloading
 C. Driving D. Careless driving
48. Pyrethrum is processed to produce:-
 A. Flowers B. Insecticides
 C. Cattle feeds D. Oil

49. Clearing forests without planting other trees is called:-
 A. Forestry B. Afforestation
 C. Deforestation D. Cutting
50. Modern trade where money is used in buying and selling is called:-
 A. Currency trade B. Barter trade
 C. Exchanger D. Banking
51. Which one of the following is **NOT** a resource?
 A. Sky B. Sun
 C. Soil D. Water
52. Work we do to get money is called:-
 A. Religious activity
 B. Social activity
 C. Political activity
 D. Economic activity
53. For one to register as a voter in Kenya, he/she must be:-
 A. 15 years B. 21 years
 C. 18years D. 35years
54. Which crop is used to make clothes?
 A. Banana B. Maize
 C. Cotton D. Pyrethrum
55. Air in motion is known as:-
 A. Sun shine B. Weather
 C. Wind D. Rainfall
56. The green colour in our national flag stands for:-
 A. Vegetation B. People
 C. Blood D. Peace
57. Long ago people worshipped God in places called:-
 A. Caves B. Church
 C. Market D. Shrines
58. Vegetation which grows on its own is known as:-
 A. Forests B. Man-made
 C. Planted D. Natural
59. Moral laws tell us how to _____ properly.
 A. Play B. Protect
 C. Sing D. Behave
60. People living with HIV and AIDS should be:-
 A. Loved B. Isolated
 C. Killed D. Laughed at

C.R.E.

61. God wants us to care for his creation by:-
 A. Throwing rubbish into river
 B. Taking care of plants
 C. Attacking bees
 D. Killing birds that live in the forest
62. By feeding the five thousand people, Jesus showed power:-
 A. To forgive us
 B. To heal
 C. Over death
 D. Over nature

63. God promised Abraham a son. The son was known as:-
 A. Isaac B. Noah
 C. Ishmael D. Jacob
64. Instead of offering his son for sacrifice, God provided a:-
 A. Cow B. Ram
 C. Goat D. Heifer
65. Apart from Hannah, Elikanah's other wife was called:-
 A. Sarah B. Leah
 C. Ruth D. Penninah
66. God appeared to Moses in form of a burning:-
 A. House B. Bush
 C. School D. Vehicles
67. The promised land for the Israelites was known as:-
 A. Canaan B. Galilee
 C. Syria D. Jordan
68. According to the story of king Solomon, we should ask God for:-
 A. Wealth B. Land
 C. Money D. Wisdom
69. A good leader should not be:-
 A. Merciful B. Honest
 C. Corrupt D. Helpful
70. Which brother of Moses acted as his spokesman before Pharaoh?
 A. Aaron B. Jacob C. Ahab D. Esau
71. Disciples were _____
 A. Enemies of Jesus B. Follower's of Jesus
 C. Opposers of Jesus D. The priest
72. During the time of Noah God used _____ to destroy the earth.
 A. Plants B. Drought
 C. Boat D. Rainfall
73. Jesus has power to:-
 A. Forgive sins
 B. Hate people
 C. Mislead people
 D. Misunderstand people
74. For thirty pieces of silver, Judas:-
 A. Prepared the last supper
 B. Bought scrolls for synagogue
 C. Betrayed Jesus
 D. Bought a boat for Jesus
75. Anannias and Sapphira died because they chose to be:-
 A. Generous B. Peaceful
 C. Impatient D. Selfish
76. Jesus was born of:-
 A. A young woman
 B. An old woman
 C. An Egyptian woman
 D. A roman woman
77. Jesus washed his disciples' feet to show:-
 A. Service B. Kindness
 C. Holiness D. Bitterness
78. Who begged Jesus to heal his servant to Carpenaum?
 A. The blind man B. The centurion
 C. Jairus D. Lazarus of Bethany
79. Who was Joseph's father?
 A. Isaac B. Abraham
 C. Jacob D. Esau
80. Who was the mother of John the baptist?
 A. Mary B. Elizabeth
 C. Magdalene D. Salome
81. Jesus teaches that our love for him should be:-
 A. Genuine B. Fake
 C. For pretence D. Only for a while
82. Jesus followers were first called Christians at;
 A. Samaria B. Jerusalem
 C. Judea D. Antioch
83. Jesus walked on water on lake;
 A. Galilee B. Capernaum
 C. Caspian D. Naivasha
84. Samuel stayed with priest Eli at _____
 A. Jerusalem B. Shiloh
 C. Nazareth D. Bethany
85. How many times was Jesus tempted by the devil?
 A. Two times B. Four times
 C. Five times D. Three times
86. Who taught the lord's prayer to the disciples?
 A. Jesus B. God
 C. Holy spirit D. Peter
87. Before Jesus was arrested, he had prayed at the garden of:-
 A. Eden B. Gethsemane
 C. Tigris D. Bethsaida
88. A good leader should have the following qualities **EXCEPT:-**
 A. Humility
 B. Gentleness
 C. Readiness to serve
 D. Readiness to get rich
89. We can respond to Jesus' salvation by doing three of the following **EXCEPT:-**
 A. Loving others
 B. Being humble to others
 C. Hating others
 D. Helping others
90. Who was resurrected back to life after having been dead for four days?
 A. Jairus daughter
 B. Zacchaeus
 C. Dorcas
 D. Lazarus

TRIAL SERIES

STD 4 - END TERM 3 - 2014

PENPLUS
NPS-3

SCIENCE

Time 1 Hr 40 Mins

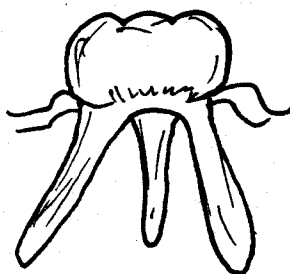
1. Wide chisel-shaped teeth found in the front of the jaw are:-

- A. Incisors B. Canines
C. Premolars D. Molars

2. Person who treats our teeth is called:-

- A. Nurse B. Pharmacist
C. Dentist D. Optician

3. The type of tooth shown below is called:-



- A. Molar B. Incisor
C. Premolar D. Canine

4. The ability of the body to fight against diseases is called:-

- A. Vaccination B. Immunity
C. Immune D. Injection

5. AIDS is caused by a virus called:-

- A. Parasite B. Bacteria
C. HIV D. Vector

6. Which of the following is NOT a characteristic of animals?

- A. They feed
B. They reproduce
C. They move
D. They make food

7. Which of the following weeds has got yellow flowers?

- A. Mexican marigold
B. Black jack
C. Oxalis
D. Pigweed


8. Plants which grow where they are not needed are called:-

- A. Seedlings
B. Weeds
C. Vegetables
D. Fruits

9. Barley is used in the _____ industry.

- A. Bread B. Juice
C. Clothing D. Beer

10. The simple tool shown below is called:-

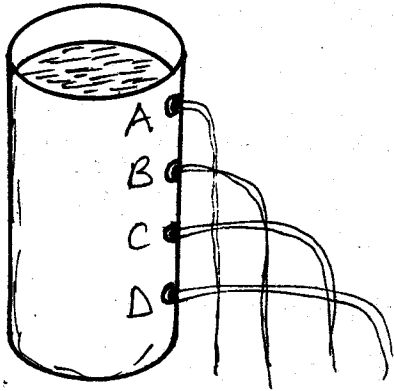


- A. Sickle B. Spade
C. Hammer D. Secateurs

11. Which of the following DOES NOT sink in water?

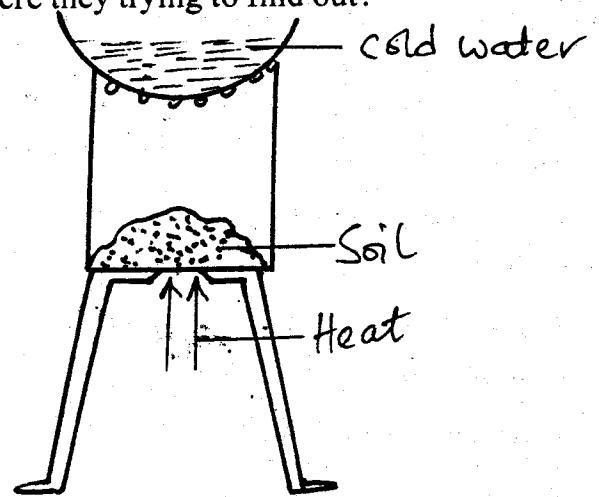
- A. Coin B. Pin
C. Plastic bottle D. stone

12. Which of the following holes will throw water to the furthest?




13. An example of an edible weed is:-
- Oxalis
 - Pigweed
 - Mexican marigold
 - Wandering jew
14. The condition of the atmosphere of a given place at a given place is called:-
- Temperature
 - Humidity
 - Weather
 - Sky
15. Which of the following animals moves by crawling?
- Snake
 - Grasshopper
 - Kangaroo
 - Snail
16. Which of the following products is got from a goat?
- Pork
 - Wool
 - Mohair
 - Hides
17. Which of the following is **NOT** a recreation use of water?
- Boat racing
 - Surfing
 - Swimming
 - Irrigation

18. Pupils in Kahuhu primary school set up an experiment shown in the figure below. What were they trying to find out?


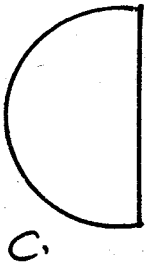

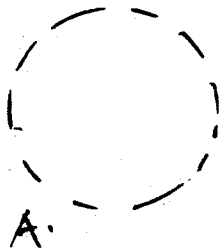


- Soil contains humus
 - Soil contains air
 - Soil contains water
 - Soil contains animals
19. Which of these clouds are associated with fair weather?
- Nimbus
 - Stratus
 - Cirrus
 - Cumulus
20. Birds that are kept for meat are called;
- Layers
 - Broilers
 - Beef
 - Poultry
21. The weed shown below is called:




- Black jack
- Oxalis
- Pigweed
- Sodom apple

22. The loosening and falling off of the teeth is called:-
- A. Primary teeth B. Decay
C. Shedding D. Falling
23. Which of the following is **NOT** a method of controlling weeds?
- A. Digging out
B. Using herbicides
C. Uprooting
D. Watering
24. The type of movement used by a snake is:-
- A. Crawling B. Walking
C. Slithering D. Flying
25. The component of soil which is made of dead plants and animals is called:-
- A. Minerals
B. Mineral salts
C. Humus
D. Subsoil
26. Which of the following represents full moon?



27. A _____ stings its enemy in order to protect itself.
- A. Locust B. Snail
C. Wasp D. Snake

28. Foods that keep the body healthy and free from diseases are:-
- A. Protective foods
B. Body building foods
C. Energy giving foods
D. Nutrients
29. An object that is used to make another one float is a:-
- A. Liquid B. Sinker
C. Floater D. Solid
30. _____ is applied on tools in order to prevent them from rusting.
- A. Clay B. Grease
C. Water D. Air
31. Which of the following is **NOT** a source of heat?
- A. Sun B. Moon
C. Candle D. Electricity
32. Kamau carried out the experiment below.



The bubbles showed that soil contains;

- A. Humus B. Air
C. Living things D. Water
33. Sunflower is put in the group of _____ crops.
- A. Fibre B. Oil
C. Beverage D. Legume

34. The _____ is the main source of heat and energy.

- A. Sun
B. Stars
C. Moon
D. Meteors

35. The type of teeth that is used for tearing and gripping is:-

- A. Molars
B. Premolars
C. Canines
D. Incisors

36. Which of the following foods will give the body energy to work?

- A. Chapati
B. Spinach
C. Fish
D. Green-grams

37. Dark grey clouds which bring rain are called:-

- A. Nimbus
B. Cumulus
C. Stratus
D. Cirrus

38. Which of the following is a special sound?

- A. Baby crying
B. People laughing
C. Hooting
D. Whistling

39. Which of the following plants is found in dry places?

- A. Cactus
B. Arrowroot
C. Sukumawiki
D. Mangoes


40. The young one of a fish is called:-

- A. Fingerling
B. Tadpole
C. Cub
D. Kid

41. A chameleon protects itself from the enemy by:-

- A. Coiling
B. Changing colour
C. Running away
D. Stinging

42. The type of weed shown below is called:-



- A. Oxalis
B. Black jack
C. Sunflower
D. Wandering jew

43. HIV/AIDS test is carried out at a:-

- A. Mosque
B. V.C.T centre
C. Market
D. Church

44. The following are all soil components

EXCEPT:-

- A. Water
B. Air
C. Humus
D. Papers

45. The fish breath through the:-

- A. Lung
B. Nose
C. Skin
D. Gills

46. Water is used at home for the following

EXCEPT:-

- A. Drinking
B. Washing
C. Cooking
D. Transporting

47. Chemicals used to control weeds are called:-

- A. Pesticides
B. Insecticides
C. Herbicides
D. Painkillers

48. A true insect has _____ legs.

- A. 6
B. 3
C. 8
D. 10

49. Meat from a pig is called:-

- A. Beef
B. Mutton
C. Layers
D. Pork

50. In AIDS which letter means Acquired?

- A. I
B. D
C. S
D. A

TRIAL SERIES

STD 4 - END TERM 3 - 2014

PENPLUS
NPS-3

MATHEMATICS

Time 2 Hrs

- Write 600107 in words;
 - Six million one thousand and seven.
 - Sixty thousand one hundred and seven.
 - Six hundred one thousand and seven.
 - Six hundred thousand one hundred and seven.
- Round off 898 to the nearest hundred;
 - 1000
 - 890
 - 900
 - 990
- What is the place value of digit 4 in the number 64321?
 - Tens
 - Hundreds
 - Ones
 - Thousands
- Work out:

Hr	Min	Sec
8	41	20
- 7	55	45
<hr/>		

- 0 hr 45 min 35 sec
- 15 hr 46 min 35 sec
- 16 hr 36 min 05 sec
- 0 hr 36 min 35 sec

- What is the approximate weight of your class teacher?
 - 80g
 - 70 kg
 - 70 tonnes
 - 20 kg
- What is the difference of $12731 - 998$?
 - 13729
 - 11733
 - 11833
 - 11843
- Convert 970 cents into shillings;
 - Sh 970
 - Sh 97
 - Sh 9.70
 - Sh 9700
- How many days were there in January 2008?
 - 30
 - 31
 - 28
 - 29
- Write the numbers just after 8888.
 - 8899
 - 8887
 - 8889
 - 8898
- Work out: $83949 + 28 + 34625 =$
- Mr. Njoroge had Sh 46000. He gave Sh 24500 to the children's home. How much was he left with?
 - Sh 21500
 - Sh 22500
 - Sh 70500
 - Sh 21600
- Which of the following fractions is equivalent to $\frac{1}{3}$?
 - $\frac{3}{6}$
 - $\frac{3}{9}$
 - $\frac{3}{12}$
 - $\frac{3}{15}$
- Work out the fraction below:-

$$\frac{2}{4} + \frac{1}{4} + \frac{1}{4} = \underline{\hspace{2cm}}$$
 - $\frac{4}{4}$
 - 1
 - $\frac{4}{12}$
 - $\frac{2}{4}$
- What is the next number in the pattern?

100, 90, 80, 70,

 - 50
 - 60
 - 40
 - 340
- Work out: $\frac{1}{2}$ of 100
 - 100
 - 200
 - 50
 - $100\frac{1}{2}$

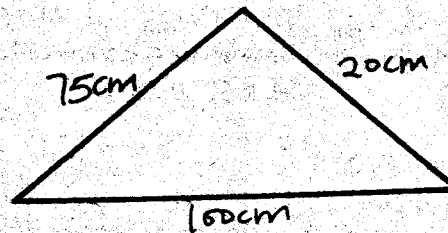
- Solve the sum of:- $37.03 + 0.02 + 100.3$
 - 137.35
 - 127.53
 - 137.25
 - 137.75
- What is the total value of digit 7 in the number 78609?
 - Tens of thousands
 - 70000
 - 7000
 - Thousands

18. Work out:-

Sh	Cts
28	85
- 7	90
<hr/>	

- Sh 35 05 cts
- Sh 21 05 cts
- Sh 35 95 cts
- Sh 20 95 cts

19. Find the perimeter of the figure below.



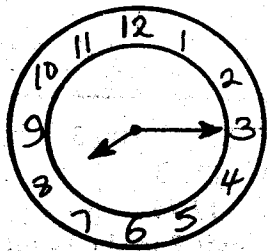
- 175cm
- 195cm
- 120 cm
- 100cm

- Work out:- $10 \overline{)720}$
 - 72
 - 70 rem 2
 - 702
 - 7 rem 20
- What is the sum of 675 and 6785 to the nearest 100?
 - 7460
 - 7400
 - 7500
 - 7000
- Which of the following numbers is divisible by 2 and 5?
 - 20
 - 25
 - 16
 - 32
- Work out the following:- $8026 + 82 + 627 =$
 - 8735
 - 8108
 - 8725
 - 87135
- Which is smaller in the following fractions?

$\frac{1}{2}$ or $\frac{1}{8}$?


 - $\frac{1}{2}$
 - $\frac{1}{8}$
 - None
 - Both
- Write in words:- 90005
 - Ninety five thousand
 - Nine thousand and five
 - Ninety thousand and five
 - Nine zero zero zero five
- There are 45 pupils in std 4 in Rongai primary. The teacher gave each pupil 6 exercise books. How many books did the teacher give out?
 - 240
 - 2400
 - 270
 - 140

27. Give two factors of 56
 A. 8, 8 B. 8, 7 C. 8, 5 D. 8, 6
28. What is the time according to the clockface below?



- A. Quarter past eight
 B. Quarter to eight
 C. 3.40
 D. 8.40

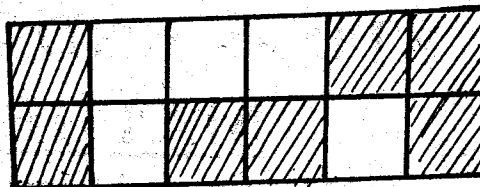
29. Work out: $6 \overline{)336}$
 A. 54 B. 56 C. 506 D. 65
30. Calculate the area of the figure below in square units.



- A. 12
 B. 36
 C. 24
 D. 18


31. Write the following decimal into fraction 0.5
 A. $\frac{5}{10}$ B. $\frac{5}{100}$ C. $\frac{5}{1000}$ D. $\frac{5}{1}$
32. Which of the following numbers are products of 8?
 A. 24, 32, 45 B. 60, 70, 80
 C. 48, 56, 64 D. 8, 24, 33
33. Work out:- 614×21
 A. 13895 B. 12894 C. 13894 D. 12804
34. A std 4 teacher decided to share some money with the class. If he had Sh 1000 to be shared among 20 pupils, how much did each get?
 A. Sh 20000 B. Sh 100
 C. Sh 50 D. Sh 200
35. What is 503.63 in words?
 A. Five hundred and three point six three
 B. Five hundred and three point sixty three
 C. Fifty three point six three
 D. Fifty three point sixty three
36. Work out: $\frac{1}{2}\text{kg} + \frac{1}{2}\text{kg} + \frac{1}{2}\text{kg} + \frac{1}{2}\text{kg}$
 A. 1kg B. 2kg C. 3kg D. 4kg
37. Fill the missing number x. $\frac{2}{20} = \frac{4}{x}$
 A. 50 B. 10 C. 30 D. 40
38. Which of these numbers is divisible by 10?
 A. 228 B. 678 C. 238 D. 570
39. What is the product of 10 and 96?
 A. 106 B. 86 C. 196 D. 960
40. How many litres of milk are there in four quarter litres of milk?
 A. 40 B. 10 C. 1 D. 2
41. What is the place value of digit 3 in 34201?
 A. Tens of thousands
 B. Ones
 C. Thousands
 D. Hundreds of thousands

42. What fraction is shaded?

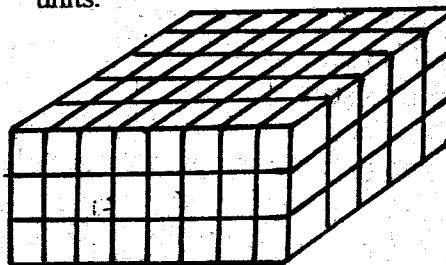


- A. $\frac{7}{12}$
 B. $\frac{5}{12}$
 C. $\frac{3}{12}$
 D. $\frac{2}{12}$

43. The figure below is called a _____



- A. Square B. Triangle
 C. Rectangle D. Rhombus
44. How many cm are there in $2\frac{1}{2}$ metres?
 A. 25cm B. 500cm C. 250cm D. 1000cm
45. Calculate the volume of the cuboid below in cubic units.



- A. 96
 B. 180
 C. 120
 D. 16

46. Kamau had 375 chicken in his farm. 50 of them died. How many chicken were left?
 A. 325 B. 225 C. 425 D. 175
47. What is $2569 + 34 + 8678$?
 A. 14647 B. 19340
 C. 28111 D. 11281
48. An even number is _____
 A. A number ending with 2
 B. A number divisible by 2 or 3
 C. A number divisible by 2
 D. A number ending with either 2 or 0

49. Work out:-

<u>m</u>	<u>cm</u>	
5	93	
-1	15	

- A. 4m 82 cm
 B. 4m 78 cm
 C. 4m 88 cm
 D. 3m 87 cm

50. Work out:-

<u>Weeks</u>	<u>Days</u>	
3	6	
+ 7	5	

- A. 10 weeks 11 days
 B. 11 weeks 4 days
 C. 11 weeks 11 days
 D. 10 weeks 4 days

TRIAL SERIES

STD 4 - END TERM 3 - 2014

PENPLUS
NPS-3

ENGLISH

Time 1 Hr 40 Mins

Read the passage below and fill in the blank spaces numbered 1-15 with the appropriate words from the ones given.

1 upon a time 2 was a boy 3 used to 4 his fathers goats. All day the goats 5 run and play 6 the green grass. They 7 the leaves and bushes 8.

On 9 way home one evening the goats ran 10 a maize field. The boy 11 to chase them 12 but he could not. He sat down and cried. While he 13 sitting there, a hare came past, "14 are you crying 15" he asked. "I am crying because I cannot get the goats out of the maize field," said the boy.

1. A. Ones B. Once C. One D. Ounce
2. A. the B. there C. their D. them
3. A. which B. whose C. whom D. who
4. A. look after B. look for
C. look to D. look with
5. A. will B. can C. should D. would
6. A. in B. on C. and D. to
7. A. ate B. eat C. eats D. eating
8. A. far away B. across C. nearby D. neatly
9. A. to B. then C. there D. the
10. A. upon B. into
C. across D. opposite
11. A. try B. tries C. tied D. tried
12. A. off B. of C. to D. by
13. A. is B. are C. was D. and
14. A. when B. why C. while D. but
15. A. ! B. , C. . D. ?

Choose the CORRECT word that is the opposite of the underlined word.

16. His grandmother is in the hospital.
A. Father B. Mother
C. Grandfather D. Uncle
17. The king had died.
A. Price B. Prince C. Queen D. Princess
18. I am his nephew.
A. Sister B. Niece
C. Nice D. Daughter

For questions 19 - 21 choose the word that is CORRECTLY spelt.

19. A. Childrens B. Uniform
C. Puppies D. Ansers
20. A. Baskets B. Baskirts
C. Baskets D. Burkets

21. A. Clapped B. Showd
C. Flyed D. Elephat

Write the CORRECT word to fill in the missing blank spaces

22. When Allan was sick his mother _____ him to hospital.
A. take B. took
C. taken D. taked
23. A dog stays in a _____
A. cage B. kennel
C. sty D. home
24. Joy and Sheila _____ gone to church.
A. has B. was C. were D. have
25. As agile as a _____
A. elephant B. lion
B. pig D. monkey

Choose the BEST adjective to fill in the missing blank spaces.

26. My sister is the _____ girl in her class.
A. younger B. youngest
C. taller D. young
27. Mary's car is _____ than Peter's car.
A. beautiful B. more beautiful
C. beautifully D. most beautiful
28. The sun is the _____ star.
A. bright B. brightest
C. brighter D. most bright

Choose the singular of the following words.

29. Thieves
A. Thief B. Thiefs
C. Thieves D. Thieve
30. Geese
A. Goos B. Goose
C. Gose D. Geese

Read the passage below and answer questions number 31-40.

Once there lived a camel and a fox in the park. They were good friends whenever they got time. They used to sit under a tree near a stream and passed time happily by talking on different topics.

One day when the fox was roaming he saw nice grapes in the farm on the other side of the stream. As the stream was deep, it was not possible for him to cross it. The following day when he met the camel, he told him about the grapes. The camel agreed to take him back to the other side of the stream.

After crossing the stream the camel and the fox entered the farm and started eating the grapes. While camel was eating the grapes, the fox told him it was his habit to sing after having his lunch. The owner of the farm heard the noises and rushed there immediately. The camel who could not run as fast and the fox was thoroughly beaten by the owner of the grapes.

31. Which animals are mentioned in the story?
A. The fox and the camel
B. The grapes and the stream.
C. The fox and the farmer
D. The camel and the hare
32. The camel and the fox were:-
A. Enemy B. Friends
C. Bad friends D. Not told
33. The two animals lived in the;
A. Forest B. Park
C. Farm D. By stream
34. Which animal could not cross the stream?
A. Hyena B. Camel C. Fox D. Grapes
35. What was the habit of the fox?
A. Singing while crossing the river.
B. Singing while roaming the forest.
C. Climbing on camel's back.
D. Singing after having his lunch.
36. The word "roaming" is underlined in the passage it means;
A. Moving about B. Feeding
C. Shouting D. Resting
37. According to the passage the fox was a:-
A. Good friend B. Bad friend
C. A friend in deed D. Trustworthy friend
38. Do you think the friendship of the two animals continued?
A. Yes B. No C. I don't know D. Not
39. Why was camel beaten?
A. The owner trusted him
B. The camel could run fast
C. The fox told the owner to beat camel
D. The camel could not run as fast as the fox
40. It is true to say the fox was _____ animal.
A. Cunning B. Honesty
C. Trustworthy D. Loyal

Read the following passage and answer the question that follow.

A Manyatta may have one family or many families. In time of danger many families live together.

Around the Manyatta, there is a wall made of branches from the thorn trees. Inside, there are houses for the families and safe place for their animals. Sometimes there are dogs but not many. Their work is to look after the Manyatta at night. If thieves come, the dogs chase them away. The houses in a Manyatta are often built of sticks and cow dung. These houses are usually built by women.

41. The Manyatta may have many families during;
A. The rainy season B. The time of danger
C. The drought D. The night
42. What surrounds the Manyatta?
A. Dog B. People
C. Thorn tree D. Cow dung
43. Which of the following is not found inside a Manyatta?
A. Dogs B. People C. Thorn trees D. Animals
44. Where do the animals live?
A. Near the fence B. In a safe place
C. Near the dogs D. Inside the houses
45. What is the work of the dogs in the Manyatta?
A. To provide security during the night
B. To call the thieves
C. To build the house
D. To look after the families
46. What is used to build Manyatta houses?
A. Sticks and mud
B. Sticks and grass
C. Sticks and cow dung
D. Mud and grass
47. Who build the houses in the Manyatta?
A. Young men B. Men
C. Young girls D. Women
48. The people who live in a Manyatta are _____
A. Farmers B. Pastoralist
C. Hunters D. Traders
49. Who chases the thieves during the night?
A. The animals B. The women
C. Wild animals D. The dogs
50. The BEST title for the passage is:-
A. The Manyatta B. The thorn trees
C. The animals D. The dogs

