

Powered By: www.eeducationgroup.com

Menu:

1. Social
2. Science
3. Mathematics
4. English
5. Kiswahili
6. Reading

TARGET SERIES

STD 2 TERM III 2014

SOCIAL STUDIES & C.R.E.

NAME: _____

SCHOOL: _____

1. The sister of my mother is my _____
(uncle, aunt)
2. Our main source of water is _____
(tap, borehole, rain)
3. _____ is not a basic family
need. (shelter, food, radio)

Match symbol and the weather

4.  Cloudy

5.  Sunny

6.  Rainy

7.  Windy


8. A place where we live is called _____
(hole, home, hut)

9. A _____ is used to cut things
in the house.
(apron, knife)

10. Dirty food can make us _____
(sick, healthy)

11. Treating children badly is called
child _____
(right, abuse, growing)

12. Working together means _____
(hate, abuse, cooperation)

13.  This is a _____
(manyatta, hut, tree)

14. _____ people live in the
above picture.

(Luo, Agikuyu, Maasai)

15. On a rainy day we should wear
_____ and carry

16. _____
(blouses, raincoats, umbrellas,
slippers)

17. A long period with alot of rain
causes _____

(drought, floods, sunshine)

A nuclear family is made up of

18. _____

19. _____

20. _____

21. A _____ is a kitchen utensil.
(spade, spoon, pen)

22. Keep _____ away by draining
stagnant water and clearing
bushes. (cats, dogs, mosquitoes)

23. Pillows and beds are found in the
_____. (store, bedroom,
kitchen)

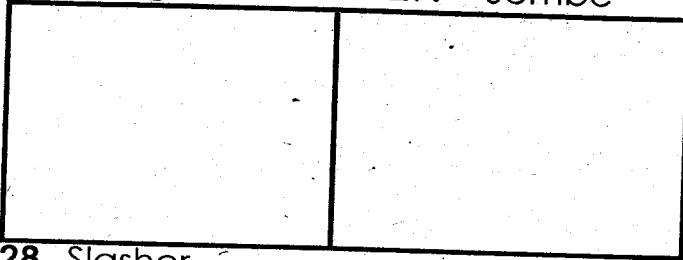
24. Many huts built together make a _____.(school, homestead, hospital)

25. A funeral is a _____ occasion. (sad, happy, joy)


Draw the following farm tools

26. Panga

27. Jembe




28. Slasher



Name the road signs

29.



30.



(children crossing, hospital, bumps)

C.R.E

31. God created everything in _____ days. (1,6,4)

32. The people who live near us are our _____ (friends, neighbours, nieces)

33. Samuel had a step mother called _____ (Ruth, Hannah, Peninah)

34. The Bible is divided into _____ parts. (66,2,3)

Match what God gave me and uses.

35. Eyes To breathe

36. Ears To walk

37. Legs To see

38. Nose To hear

Three wisemen brought baby

Jesus 39. _____, 40. _____

and 41. _____.

42. Jesus healed _____ lepers. (2, 10, 5)

43. _____ the baptist baptised Jesus in river Jordan.

(Peter, Paul, John)

44. The other name of Tabitha was _____ (Dorcas, Mary, Joppa)

45. _____ brought Tabitha back to life.(Paul, Jesus, Peter)

46. Blind _____ could not see. (Peter, Paul, Bartimaeus)

47. Joseph was sold to _____ (Israel, Egypt, Nazareth)

48. The king of Egypt was called _____ (David, Saul, Pharaoh)

49. Mary and Martha were sisters of _____ (John, Lazarus, James)

50. Elikana and _____ were the parents of Samuel. (Sarah, Hannah, Mary)

TARGET SERIES

STD 2 TERM III 2014

SCIENCE

NAME:

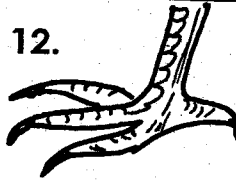
SCHOOL:

1. A baby has _____ senses
(6, 10, 5)
2. You cannot see air but you can _____ it.
(hold, feel, touch)
3. Rain comes from _____
(clouds, sun, moon)
4. Long dirty nails keep _____
(germs, health, food)
5. To clean a plastic plate we use _____
(warm soapy water, salt)

Name the weather symbol



- _____
- (calm, sunny, rainy)
8. Plants get water from _____
(rock, sun, soil)
 9. We eat the stem of a _____
(carrot, maize, sugarcane)
 10. Which of the following is an insect? (dog, ladybird, donkey)
 11. Removing soap from clothes is called _____
(drying, dusting, rinsing)



This is a leg of a _____ (hen, donkey, cow)

13. Dirty hair has _____
(lice, flies, jiggers)
14. Fish moves by _____
(flying, walking, swimming)
15. We taste with our _____
(nose, tongue, mouth)
16. Lions and elephants are _____ animals.
(domestic, wild, tamed)

Match

- | | |
|-----------|--------|
| 17. Pig | beef |
| 18. Sheep | fillet |
| 19. Fish | pork |
| 20. Cow | mutton |

21. This is the leaf of a _____
(maize, bean, sugarcane)


22. A snail has _____ legs.
(6, 0, 4)
23. Torches, sun, fire are _____ of light. (uses, sources, causes)
24. Every home must have a _____
(tv, toilet, car)
25. A salted fish has a _____ taste.
(sour, bitter, salty)
26. A _____ spreads malaria.

(cat, mosquito, wasp)


Draw sources of water.

27. Well


28. Lake



29. River

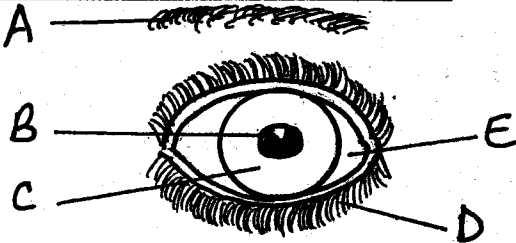


30. To remove mucus from a dirty handkerchief we need warm _____ water. (dirty, salty, sugary)

31.  This balloon is full of _____ (juice, air, milk)

32. A cow does not have a _____ (stem, tail, horn)

Name the parts of the eye.



33. A _____

34. B _____

35. C _____

36. D _____

37. E _____

(pupil, eye lashes, eyebrows, white part, iris)

38. We should drink alot of _____ (water, medicine, mud)

39. Fruits should be _____ before eating. (cooked, washed, boiled)

40. A tick has _____ legs. (6,7,8)

41. Earthworms and snails have no _____ (body, life, legs)

42. When it is cold we wear _____ clothes. (light, heavy, dirty)

43. A _____ is a useful insect. (dog, tick, bee)

44. We model with _____ soil. (loam, clay, sand)

45. Moving air is called _____ (dust, floods, wind)

46. A bicycle has _____ wheels. (1,2,3)

47. Rotten food smells _____ (bad, good, better)

48. A _____ has many seeds. (avocado, mango, tomato)

49. After collecting all rubbish we should _____ (keep, burn, hide)

50. A porcupine lives in a _____ (hole, basket, kennel)

TARGET SERIES

STD 2 TERM III 2014

MATHEMATICS

NAME: _____

SCHOOL: _____

1. $\square \div 5 = 6$

2. $7 \times 8 =$

3. $84 - 4 =$

4. The twelve month of the year is

| 5. Sh. | Cts. |
|--------|------|
| 2 | 30 |
| + 1 | 30 |
| | |

6. 195

7. 840

$- 14$

$- 130$

8. $9 \times 3 =$

9. $88 - 4 =$


10. $10 \times 1 =$

Fill the missing numbers

11. 102, 104, 106, 108, _____, _____

12. 80, 70, 60, _____, _____

13. The first day of the week is



14. How many triangles can you see?

15. 46

16. 426

$+ 5$

$+ 163$

Multiply

17. $99 \times 0 =$

Write in words

18. $63 =$ _____

19. $300 =$ _____

20. $89 =$ _____

21. Sh. Cts

12

52

$- 10$

10

22. 560

$- 230$

Put (+, x, -, ÷)

23. $6 \square 3 = 3$

24. $10 \square 5 = 15$

25. $2 \square 3 = 6$

26. $9 \square 3 = 3$

27. Peter had 30 pencils. Ten got lost
How many pencils remained?

28. September comes before

Arrange from the smallest to the biggest.

29. 55, 21, 13, 76, 64

30. 126, 144, 160, 150.

31. 5

6

+ 2

32. $16 + 22 + 44 =$

33. $\square + 8 = 30$

34. $9 + \square = 48$

35. Which number is smaller 609 or

906 = _____

Complete

36. 510, 610, 710, _____, _____

37. Paul had 10 oranges and John 15
oranges. How many oranges did

they have altogether? = _____

38. $88 + 10 =$ _____

39. Mary had Sh.100. She bought a
dress for Sh. 80. How much did she
remain with? = _____

40. From 90 subtract 15 = _____

41. $18 = 9 + \square$

42. $60 =$ _____ tens.

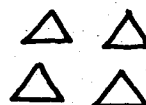
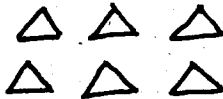
43. How many tails do ten monkeys
have? = _____

44. $60 - \square = 20$

45. Which one holds more?

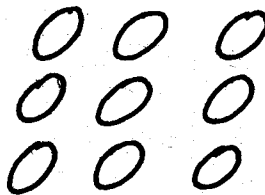


46. Divide 30 by 10 = _____



47. _____ + _____ =

48. $76 - 42 =$



49. _____ x _____ =

50. Draw a rectangle.

TARGET SERIES
STD 2 TERM III 2014
ENGLISH

NAME:

SCHOOL:

Dictation.

- 1. _____
- 2. _____
- 3. _____
- 4. _____
- 5. _____

Fill the missing

- 6. C__w
- 7. elb__w
- 8. Br__cket
- 9. P__st

Add (-ing) to words in brackets

- 10. I like (dig)

- 11. She is (bake) a cake

- 12. That man is (clean) the car.

13. I am (skip) with a rope.

14. The clothes are (dry) on the
clothe line.

15. A cat is (drink) milk





Spell correctly

- 16. useho _____
- 17. ihve _____
- 18. ngoma _____
- 19. aet _____
- 20. neh _____

Write in plural

- 21. Fox _____
- 22. Lorry _____
- 23. Chief _____
- 24. Arrow _____

Name the pictures



Write opposite of the underlined

word.

31. The stars are shining brightly

32. Her hair is black

33. All boys were late

34. Keep your class clean

35. Don't sit down.

Write in words

36. 396 _____

37. 73 _____

38. 600 _____

Use 'a', 'an' or 'the'

39. _____ earth is round.

40. She has _____ smart dress.

41. I ate _____ egg for supper.

42. It is _____ big bird.

43. Peter has _____ umbrella.

Complete the sentences

44. A horse stays in the _____

(sty, stable, hutch)

45. A cat _____ (brays, moos, purrs)

46. A baby pig is called a _____

(piglet, lamb, calf)

Use this, these

47. _____ is a big hat.

48. _____ are my fingers.

49. Is _____ your pencil?

50. _____ are our boxes.

TARGET SERIES

DARASA LA PILI MUHULA WA TATU 2014

02

KISWAHILI

JINA:

SHULE:

Imla

1. _____
2. _____
3. _____
4. _____
5. _____

Jaza pengo

6. _____ nywele.
7. Ki ___ ta
8. Sh ___ v ___
9. Ny ___ ki
10. Nd ___ vu

Andika wingi

11. Chungwa _____
12. Uteo _____
13. Kisu _____
14. Kalamu _____

15. Mtoto _____

Andika majina vizuri

16. ayaim _____
17. otom _____
18. ava _____
19. hasani _____
20. papi _____

Jibu maamkizi

21. Hamjambo _____
22. Alamsiki _____
23. Habari _____
24. Shikamoo _____
25. Hujambo _____

Andika kwa maneno

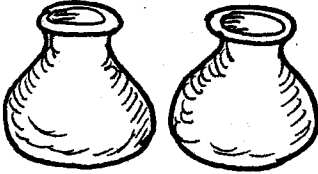
26. 25 _____
27. 100 _____
28. 11 _____

29. 53 _____

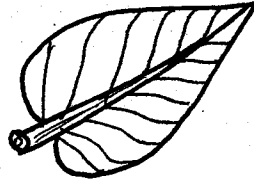
30. 80 _____

Andika majina

31.




32.



33.



34.



Andika ni ngapi

35. Ma'inda (5)

36. Wazulana (8)

Kanusha

37. Anatembea _____

38. Ingia _____

39. Mtoto anacheka _____

40. Andika _____

Tumia 'ya' 'la' 'wa' 'cha'.

41. Kiatu _____ mama kimepotea.

42. Gari _____ baba limekuja.

43. Huu ni mkoba _____ nyanya.

44. Maji yamo ndani _____ bitauri.

Kamilisha methali na vitendawili.

45. Pole pole ndio _____

46. Bendera hufuata _____

47. Kuku wangu hutagia miibani

(upepo, nanasi, mwendo)

Kamilisha sentensi

48. Jina langu ni _____

49. Shule yangu ni _____

50. Mwalimu wangu mkuu anaitwa

02

TARGET SERIES

STD 2 TERM III 2014

READING

NAME:

SCHOOL:

Read these words.

- | | |
|-------------|--------------|
| 1. Flask | 11. Choir |
| 2. Porridge | 12. Medicine |
| 3. Antelope | 13. Trolley |
| 4. Windy | 14. Shirt |
| 5. Foxes | 15. Animal |
| 6. Curtains | 16. Bar |
| 7. Umbrella | 17. Mare |
| 8. Ruler | 18. Feathers |
| 9. Radio | 19. Awake |
| 10. Plate | 20. Dripping |

Read the sentences

21. Yesterday was Sunday.
22. My niece is coming today.
23. The hunter caught a mouse.
24. Can you draw a giraffe?
25. These pupils must read carefully.

TARGET SERIES

DARASA LA PILI MUHULA WA TATU 2014

KUSOMA

JINA:

SHULE:

Soma haya maneno.

- | | |
|-------------|--------------|
| 1. Bilauri | 11. Alasiri |
| 2. Daftari | 12. Mwenzake |
| 3. Binamu | 13. Shavu |
| 4. Ukurasa | 14. Penya |
| 5. Mioyo | 15. Mvuvi |
| 6. Wayo | 16. Daktari |
| 7. Kikaango | 17. Mgongo |
| 8. Uteo | 18. Pengo |
| 9. Sketi | 19. Heshima |
| 10. Paja | 20. Pipa |

Soma sentensi hizi

21. Paka alikula panya
22. Watu wote wako salama
23. Mwambie Juma alete maji.
24. Kiranja anafuta ubao.
25. Lazima tuongee ukweli.