

Powered By: [www.eeducationgroup.com](http://www.eeducationgroup.com)

Menu:

1. Social
2. Science
3. Mathematics
4. English
5. Kiswahili
6. Reading

# TARGET SERIES

## STD 3 TERM III 2014

### SOCIAL STUDIES & C.R.E.

NAME: \_\_\_\_\_

SCHOOL: \_\_\_\_\_

1. A family that has a father, mother and children is called \_\_\_\_\_

**(extended, single, nuclear)**

2. Shelter is another name for \_\_\_\_\_  
**(house, school)**

3. An example of a domestic animal is \_\_\_\_\_ and a wild animal is \_\_\_\_\_

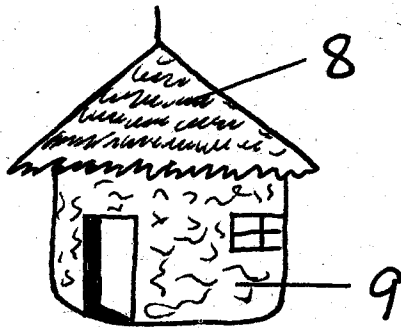
4. \_\_\_\_\_

**Name three sources of water**

5. \_\_\_\_\_ 6. \_\_\_\_\_

7. \_\_\_\_\_

**Name the parts**



8. \_\_\_\_\_ 9. \_\_\_\_\_

10. The walls of the above house is made of \_\_\_\_\_

**Write 'true' or 'false'**

11. Traffic rules prevent accidents  
\_\_\_\_\_

12. Bread is made from maize flour  
\_\_\_\_\_

13. Roads make transport difficult.  
\_\_\_\_\_

14. The children of my uncle are my \_\_\_\_\_ . **(aunts, sisters, cousins)**

15. A place where there are many trees growing is called \_\_\_\_\_  
**(forest, home, desert)**

16. The sun rises in the \_\_\_\_\_ and sets in the 17. \_\_\_\_\_.

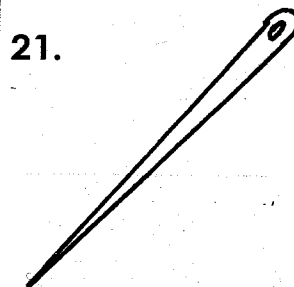
18. A \_\_\_\_\_ treats sick animals.  
**(nurse, optician, veterinary)**

19. Clothes keep our bodies \_\_\_\_\_  
**(cold, warm)**

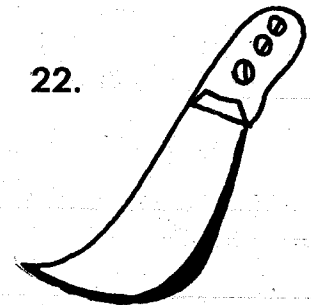
20. Moving air is called \_\_\_\_\_  
**(gas, heat, wind)**

**Name dangerous objects found**

**at home**

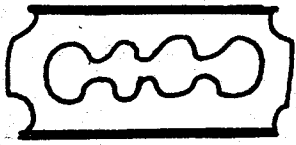


21. \_\_\_\_\_

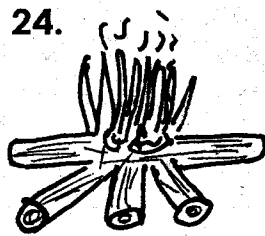


22. \_\_\_\_\_

23.




24.



\_\_\_\_\_ (Razorblade, needle, fire, panga)

25. A compass has \_\_\_\_\_ cardinal points. (3, 4, 5)

26. The chief is in charge of a \_\_\_\_\_ (division, location, sub- location)

27.  This drawing is a symbol of \_\_\_\_\_ weather

28. A long period without rain causes \_\_\_\_\_ (floods, drought)

29. A \_\_\_\_\_ grows crops. (farmer, tailor, doctor)

30. In child naming ceremony a child is given a \_\_\_\_\_ (name, book chair)

C.R.E

31. David killed \_\_\_\_\_ (Moses, Goliath, Abel)

32. Emmanuel means \_\_\_\_\_ (God with us, Son of God)


33. God gave us \_\_\_\_\_ to think (stomach, mind, head)

34. The body of Jesus was buried by \_\_\_\_\_

35. John and James were sons of \_\_\_\_\_

\_\_\_\_\_ ( Zebedee, Jesus, Simeon)

36. Jesus washed his disciples \_\_\_\_\_ (shoes, feet, face)

37.  The bible has \_\_\_\_\_ books. (66, 96, 16)

38. Jesus was baptised in river \_\_\_\_\_ (Nile, Jordan, Tana)

Match the correct name

**Community**                      **Name of God**

39. Akamba                              Nyasaye

40. Luo                                      Asis

41. Nandi                                      Mulungu

42. Kikuyu                                      Enkai

43. Maasai                                      Ngai

44. \_\_\_\_\_ has two daughters in law (Naomi, Ruth, Orpha)

45. A good leader should be \_\_\_\_\_ (short, honest, rich)

46. God told Abraham to \_\_\_\_\_ his only son. ( hung, cut, sacrifice)

47. Jesus stayed in the tomb for \_\_\_\_\_ days. (7,3,4)

48. Samuel was living with a priest called \_\_\_\_\_ (Elikana, Enock, Eli)

Name two disciples of Jesus.

49. \_\_\_\_\_ 50. \_\_\_\_\_

# TARGET SERIES

## STD 3 TERM III 2014

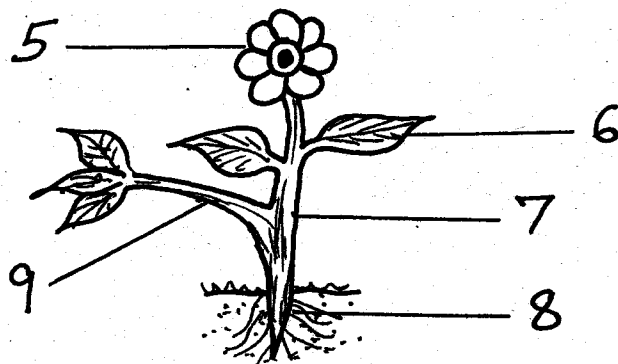
### SCIENCE

NAME: \_\_\_\_\_

SCHOOL: \_\_\_\_\_

1. Nose is to smell as tongue is to \_\_\_\_\_  
(eat, taste, swallow)
2. We should \_\_\_\_\_ food before swallowing it.  
(eat, chew, taste)
3. Floods are caused by too much \_\_\_\_\_  
(rain, sun, soil)
4. Talking with food in the mouth is \_\_\_\_\_ manners.  
(good, bad)

Name parts of the plant.




5. \_\_\_\_\_
6. \_\_\_\_\_
7. \_\_\_\_\_
8. \_\_\_\_\_
9. \_\_\_\_\_
10. Smooth and shiny things are \_\_\_\_\_ reflectors. (good, bad)
11. A dog barks when there is a \_\_\_\_\_  
(puppy, stranger)
12. Exercise help our bodies to \_\_\_\_\_  
(rest, relax)

13. Mats, sacks and baskets are made from \_\_\_\_\_  
(rubber, sisal, cotton)
  14. When a baby needs food , he \_\_\_\_\_  
(laughs, cries, sings)
- Draw and name two fruits.

15.	16.
-----	-----

17. Plants can grow on land and on \_\_\_\_\_  
(water, air)

Name the weather symbols



21. Baskets can be made from \_\_\_\_\_  
(sisal, wood, glass)

22. A rainbow has \_\_\_\_\_ colours.  
(8, 7, 6)

**Name two wild animals**

23. \_\_\_\_\_ 24. \_\_\_\_\_

25. Coffee beans give us \_\_\_\_\_  
drink (tea, coffee)

**Match an animal with the way it  
protects itself**

26. Tortoise                      running away

27. Millipede                    biting

28. Bee                            hiding in its  
shell

29. Mosquito                    coiling

30. Rat                            flying

31. Spider                        stinging

**Name the foods below.**



36. A doctor who treats eyes is called  
an \_\_\_\_\_ (optician, dentist)

37. When the body is working well,  
we are \_\_\_\_\_ (healthy, sick)

**Write 'true' or 'false'**

38. Dark clouds bring rain \_\_\_\_\_

39. The best soil for growing crops is  
\_\_\_\_\_ (loam, clay, sand)

40. Farmers plant when the \_\_\_\_\_  
season begins.  
(dry, windy, rainy)

41. A butterfly, mosquito, housefly are  
all \_\_\_\_\_. (fish, birds, insects)

42. Water lily grows in \_\_\_\_\_  
(soil, air, water)

43. The passing of message without  
speaking is called \_\_\_\_\_  
(talking, gestures)


44. A deaf person does not have the  
sense of \_\_\_\_\_  
(speaking, hearing, looking)

45. When you beat drum it produces  
\_\_\_\_\_ (heat, light, sound)

46. To remove dirt in water we should  
\_\_\_\_\_ (heat, cool, filter)

47. Garlic is an example of a \_\_\_\_\_  
(spice, fruit, vegetable)

**Name the parts**



48. \_\_\_\_\_ 49. \_\_\_\_\_

50. \_\_\_\_\_

# TARGET SERIES

## STD 3 TERM III 2014

### MATHEMATICS

02

NAME: \_\_\_\_\_

SCHOOL: \_\_\_\_\_

**Fill in the missing numbers.**

1. 68, 58, 48, 38, \_\_\_\_\_
2. 1015, 1025, 1035, \_\_\_\_\_
3. Add 87 to 352 \_\_\_\_\_
4. Subtract 800 from 1500 \_\_\_\_\_
5. Which fraction is bigger  $\frac{1}{8}$  or  $\frac{1}{4}$ ?  
\_\_\_\_\_

**Write in words**

6.  $520 =$  \_\_\_\_\_
7.  $889 =$  \_\_\_\_\_
8.  $409 =$  \_\_\_\_\_
9. 
$$\begin{array}{r} 682 \\ + 503 \\ \hline \end{array}$$
10. 
$$\begin{array}{r} 978 \\ - 38 \\ \hline \end{array}$$

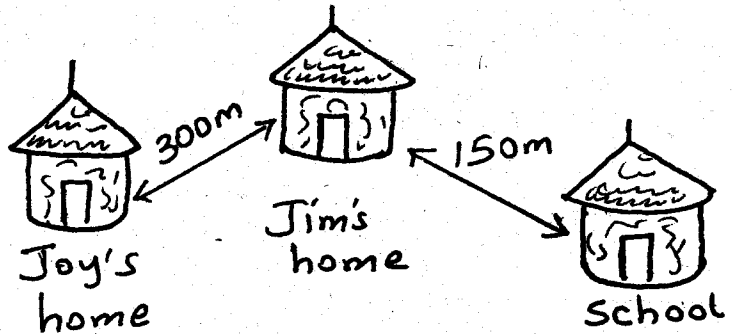
**What is**

11.  $\frac{1}{4}$  of 12
12.  $\frac{1}{3}$  of 15
13. 

Sh	Cts.
35	70
+ 10	10
_____	_____
14. 

Sh	Cts
9	50
- 7	30
_____	_____
15. 3 half litres + 3 half litres = \_\_\_\_\_  
half litres:
16.  $32 \text{ metres} \div 4 =$     m
17.  $972 =$  \_\_\_\_\_ hundreds \_\_\_\_\_  
tens \_\_\_\_\_ ones.

**Use the digram below to answer questions 18 -19**



18. What is the distance between Joy's home to Jim's home?  
\_\_\_\_\_
19. Joy walked from home to Jim's home then to school . What distance did she cover?  
\_\_\_\_\_ m + \_\_\_\_\_ m = \_\_\_\_\_ m.

20.  $274 \text{ metres}$   
 $- 32 \text{ metres}$   
\_\_\_\_\_

21.  $7 \times$      $= 49$
22.     $\times$      $= 9$

23.  $3 \overline{) 21}$       24.  $9 \overline{) 81}$

**What fraction is unshaded?**

- 25.
- 26.

27. Weeks	Days
3	1
+ 3	4
<hr/>	

28. Weeks	Days
9	2
- 7	1
<hr/>	

29. A tick has 8 legs . 8 ticks will have have \_\_\_\_\_ legs.

30. Which is the 8th month of the year?  
\_\_\_\_\_

**complete the pattern**

31. 2, 4, 6, \_\_\_\_\_, \_\_\_\_\_  
\_\_\_\_\_

32. 3, 6, 9, \_\_\_\_\_, \_\_\_\_\_, \_\_\_\_\_

33. 100, 90, 80, \_\_\_\_\_, \_\_\_\_\_

34.  $39 + \square = 69$       35.  $\square + 10 = 40$

36.  $49 - \square = 9$       37.  $\square - 30 = 30$

38.  $40 \div \square = 10$

39.  $6 + 5 + 9 =$


40.  $\frac{1}{8} + \frac{4}{8} =$  \_\_\_\_\_

**Match the fractions with its name.**

41.  $\frac{1}{8}$       a quarter

42.  $\frac{1}{4}$       an eighth


**Mary's shop price list**




Bread Sh 40



Milk Sh 30



Bar of Soap Sh 20



Soda Sh 25

43. Awour bought bread bar of soap and milk . How much did she spend? \_\_\_\_\_

44. Rehema bought two bottles of soda. How much did she spend?  
\_\_\_\_\_

45. Njeri bought a bottle of soda, bread and milk. She gave the shopkeeper Sh. 100. How much balance was she given? \_\_\_\_\_

**Write in figures**

46. Nine hundred and thirty one  
\_\_\_\_\_

47. Two hundred and one.  
\_\_\_\_\_

48. 496


49. 966

132

- 821

+ 400

50. What is the time?



# TARGET SERIES

STD 3 TERM III 2014

## ENGLISH

02

NAME: \_\_\_\_\_

SCHOOL: \_\_\_\_\_

### Write in plural or singular

One

Many

1. \_\_\_\_\_ teeth
2. Womam \_\_\_\_\_
3. Wolf \_\_\_\_\_
4. \_\_\_\_\_ sheep.
5. Echo \_\_\_\_\_

### Write the past tense

6. Draw \_\_\_\_\_
7. Clean \_\_\_\_\_
8. Put \_\_\_\_\_
9. Take \_\_\_\_\_
10. Wake \_\_\_\_\_

### Write 'is' 'am' 'are'

11. I \_\_\_\_\_ a clever girl.
12. They \_\_\_\_\_ very busy.
13. This \_\_\_\_\_ a bucket.
14. Mary \_\_\_\_\_ very sick.
15. We \_\_\_\_\_ late.

### Underline the odd one out

16. Pig, Camel, Dog, Lion

17. Pawpaw, Rice, Orange, Mango

18. Yellow, Sun, Red, Blue

19. Spoon, desk, knife, cup,

20. Mother, girl, lady, father

### Choose the word which is correctly

spelt

21. Surprise, Suprise, Surprese, Sarprise.
22. Becouse, Becourse, Because.
23. Queue, Queu, Qeueu.
24. Carot, Carrot, Calot, Croot.
25. Coming, Caming, Comming.

### Add - ing or - ed to complete the

words in brackets

26. Cats enjoy \_\_\_\_\_ rats (chase)
27. Parents should be \_\_\_\_\_ (obey)
28. No one \_\_\_\_\_ the policemen to catch the thieves. (call).
29. My grandmother is tired of \_\_\_\_\_ the whole day. (sit)
30. Can you stop \_\_\_\_\_ (shout)



Write the babies of animals

31. Leopard \_\_\_\_\_  
32. Donkey \_\_\_\_\_  
33. Pig \_\_\_\_\_  
34. Fish \_\_\_\_\_  
35. Bird \_\_\_\_\_

Choose the correct word from the brackets

36. \_\_\_\_\_ are many girls .(Their, There)  
37. I am nine \_\_\_\_\_ old.(ears, years)  
38. The \_\_\_\_\_ is very hot today. (Son,Sun)  
39. I saw a \_\_\_\_\_ (hair, hare) in the forest.  
40. The chair is made of \_\_\_\_\_ (wood, would)

Use ; "Ourselves" "himself"

"herself" "yourself"

41. Did you clean the house \_\_\_\_\_ ?  
42. ~~We~~ swept the classroom \_\_\_\_\_ .  
43. She painted the picture \_\_\_\_\_ .

Read the paragraph and answer the questions

Victor lived with his mother and father. He was an only child of his parents. He was an obedient boy who was always willing to help his parents in the farm. In the farm they kept cows, goats and poultry. They also grew crops like maize, beans and sorghum. His father had a car which he used to transport the farm produce to the market .

44. Victor lived with his \_\_\_\_\_ (mother, grandmother, parents)  
45. In the farm they kept cows, goats and \_\_\_\_\_ .  
46. His father used \_\_\_\_\_ to transport food to the market.  
47. Victor had \_\_\_\_\_ brothers. (none, 3, 5)

Give the opposite of the underlined words.

48. It is hard to climb Mt. Kenya. \_\_\_\_\_  
49. The hair is black. \_\_\_\_\_  
50. The glass is full. \_\_\_\_\_

# TARGET SERIES

## DARASA LA TATU MUHULA WA TATU 2014

### KISWAHILI

**02**

JINA:


SHULE:

**Andika wingi wa sentensi hizi**


1. Huyu ni nyanya  
\_\_\_\_\_
2. Huu ni mkebe  
\_\_\_\_\_
3. Hiki ni kiatu  
\_\_\_\_\_
4. Huyu ni punda.  
\_\_\_\_\_

**Chora picha hizi**


5. Mpira




6. Macho



7. Daftari



8. Mkebe



**Andika kinyume**

9. Nje \_\_\_\_\_
10. Furaha \_\_\_\_\_
11. Mvulana \_\_\_\_\_
12. Kataa \_\_\_\_\_
13. Shuka \_\_\_\_\_

**Tumia "ana" "mna" "una" "ina"**

**"wana"**

14. Mikate yote \_\_\_\_\_ uzwa.
15. Uzi huo \_\_\_\_\_ rangi nzuri.
16. Wanafunzi \_\_\_\_\_ vitabu.
17. Mama \_\_\_\_\_ rinda nzuri.
18. Baba \_\_\_\_\_ mshipi mrefu.

**Andika kwa maneno au tarakimu**

19. 433 \_\_\_\_\_
20. 969 \_\_\_\_\_
21. Mia mbili na hamsini \_\_\_\_\_
22. Hamsini na tatu \_\_\_\_\_
23. Kumi na mbili \_\_\_\_\_

**Kamilisha methali na Vitendawili**

24. Bendera hufuata \_\_\_\_\_
25. Mchimba kisima huingia \_\_\_\_\_
26. Kuku wangu hutagia miibani  
\_\_\_\_\_
27. Haba na haba hujaza \_\_\_\_\_
28. Bubu anayesema \_\_\_\_\_


**(mwenyewe, kibaba, kalamu, nanasi, upepo)**


**Kamilisha sentensi**


29.



Kikombe kiko \_\_\_\_\_  
meza. (ndani ya, juu  
ya)

30.  Kijiko kimo \_\_\_\_\_  
ya kikombe. (chini,  
ndani, juu)

31.  Mtoto yuko \_\_\_\_\_  
ya mti. (chini, ndani,  
kati)

32.  Umbo hili ni \_\_\_\_\_  
(duara, mstatili,  
mraba)

### Kamilisha

33. Vijiti ni \_\_\_\_\_ (ndefu, virefu,  
mrefu)

34. Kanga ni jina jingine la \_\_\_\_\_  
(shimizi, lesu, nguo)

### Kamilisha

35. Hujambo? \_\_\_\_\_  
(Sijambo, Hatujambo)

36. Shikamoo? \_\_\_\_\_  
(Marahaba, njema, Hamjambo)

### Kanusha sentensi hizi kwa wakati wa

(ta)

37. Yai linaliwa kesho  
\_\_\_\_\_

38. Sanduku linafungwa kwa kufuli.  
\_\_\_\_\_

39. Ndoo hili linatiwa maji.  
\_\_\_\_\_

### Jibu maswali haya

40. Baba yake baba yako utamwita  
nani? \_\_\_\_\_

41. Mama yake mama yako  
utamwita nani? \_\_\_\_\_

42. Ndugu yako wa kiume ni ?  
\_\_\_\_\_

(Kaka, babu, nyanya)

### Soma na ujibu

Jana Hamisi 43 mtoni kuvua  
samaki. Alirusha mshipi 44. Mara ya  
kwanza 45 samaki 46. Alirusha  
mshipi wake mara ya pili. Mshipi  
wake ulikamata kijiti kikubwa.

43. (tukaenda, alienda, akaenda)

44. (wao, wake, wangu)

45. (akiona, alimwona, ona)

46. (kikubwa, mkubwa, kubwa)

### Andika kwa wakati uliopita (jana)

47. Nguo zinafuliwa zote.  
\_\_\_\_\_

48. Mama atateka maji.  
\_\_\_\_\_

49. Mzee analala.  
\_\_\_\_\_

50. Mjomba atauza ng'ombe .  
\_\_\_\_\_

**02**

# TARGET SERIES

STD 3 TERM III 2014

## READING

NAME:

SCHOOL:

### Read these words.

- |                 |                |
|-----------------|----------------|
| 1. Stream       | 11. Towel      |
| 2. Movement     | 12. Hatch      |
| 3. Environment  | 13. Slippers   |
| 4. Hippopotamus | 14. Sometimes  |
| 5. Engineer     | 15. Playground |
| 6. Return       | 16. Suddenly   |
| 7. Trouble      | 17. Drew       |
| 8. Scratch      | 18. Down       |
| 9. Christmas    | 19. Frown      |
| 10. Danger      | 20. Heavy      |

### Read the passage.

I looked through the window and sure the sun was already up. The sun's rays were bright all over. I knew it would be a bright and sunny day.

# TARGET SERIES

DARASA LA TATU MUHULA WA TATU 2014

## KUSOMA

JINA:

SHULE:

### Soma haya maneno.

- |              |             |
|--------------|-------------|
| 1. Dereva    | 11. Ukumbi  |
| 2. Wasichana | 12. Mfereji |
| 3. Nahodha   | 13. Kiuno   |
| 4. Karama    | 14. Paja    |
| 5. Kiranja   | 15. Chatu   |
| 6. Uteo      | 16. Mzuri   |
| 7. Mwuguzi   | 17. Kipepeo |
| 8. Mchuuzi   | 18. Msumari |
| 9. Uyoga     | 19. Daraja  |
| 10. Chovya   | 20. Cheo    |

### Soma hadithi.

Makonde alizaliwa siku ya Jumatatu. Akapewa jina siku ya Jumanne. Akagonjeka siku ya Jumatano. Alhamisi akapelekwa hospitali. Akatibiwa siku ya Ijumaa. Akafa siku ya Jumamosi. Akazikwa siku ya Jumapili.