

Powered By: www.eeducationgroup.com

Menu:

1. Social
2. Science
3. Mathematics
4. English
5. Kiswahili
6. Insha
7. Composition
8. Marking scheme

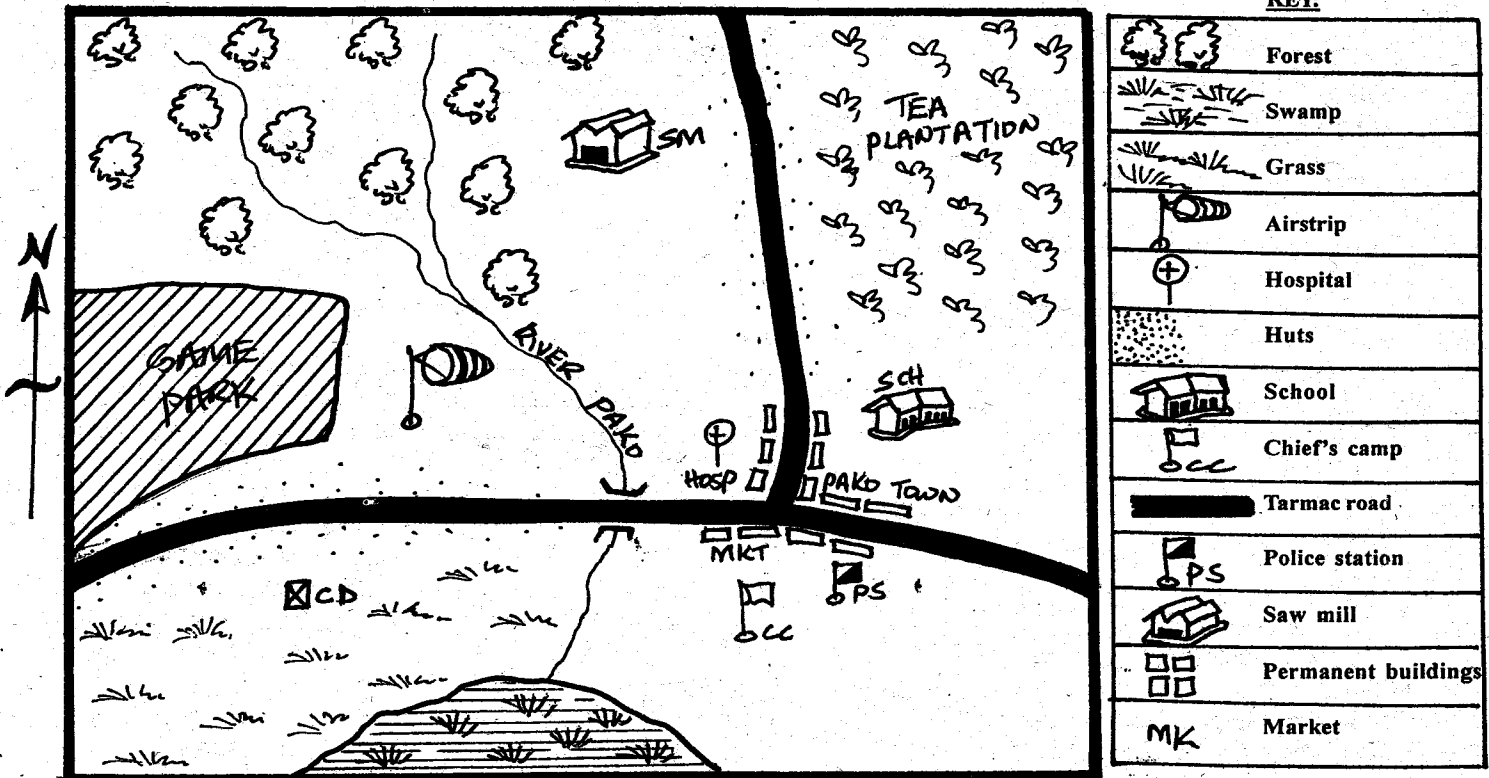
TARGET SERIES

STD 4 TERM III 2014

SOCIAL STUDIES & C.R.E.

TIME: 2HRS 15MIN

PAKO AREA



KEY:


	Forest
	Swamp
	Grass
	Airstrip
	Hospital
	Huts
	School
	Chief's camp
	Tarmac road
	Police station
	Saw mill
	Permanent buildings
	Market

Use the map of Pako area to answer questions 1-7.

- What is the direction of the school from the saw mill?
A. North West B. North East
C. South West D. South East
- River Pako flows towards the _____
A. tea plantation B. forest
C. Swamp D. Game park
- Most of the huts found in Pako area are found
A. along the tarmac road
B. along the river
C. around the swamp
D. around the Chief's camp
- Who is the head of Pako area?
A. Police officer B. Chief
C. Assistant chief D. Governor
- Which economic activity is NOT practised in Pako area?
A. Mining B. Farming
C. Trading D. Cattle keeping
- A thief was found breaking into a shop in Pako town. The thief should be
A. burnt to death B. taken to church
C. taken to police station D. taken to hospital
- The climate of the North Western region of Pako area is
A. cool and dry B. Cool and wet
C. hot and wet D. hot and dry
- A person who belongs to a country is called a
A. leader B. patriot
C. chairperson D. citizen
- One of the directions is a cardinal point of the compass. Which one is it?
A. North West B. North East
C. East D. South West
- Most of the rivers found in the counties of Kenya rise from the
A. highlands B. lakes
C. oceans D. plains
- Which of these pairs of crops are used as beverages?
A. tea and coffee B. tea and sisal
C. sisal and cotton D. coconuts and sorghum


12. One of these moral laws reminds us to tell the truth always. Which one is it?
 A. Love B. Honesty
 C. Fairness D. Respect
13. The following are needy people in the community **EXCEPT**
 A. the orphans B. the wealthy
 C. the widows D. the visually impaired
14. Which of these cultural practices should **NOT** be preserved?
 A. Teaching moral values to the children
 B. Encouraging female circumcision
 C. Respect for the elders
 D. Traditional songs and dances
15. In traditional African community medicine was **MAINLY** obtained from
 A. herbs B. livestock
 C. birds D. hospitals
16. The type of cows kept for meat production are known as
 A. dairy cattle B. beef cattle
 C. Zebu D. short horned cattle
17. One of these crops was **NOT** grown before the coming of Europeans in Kenya. Which one is it?
 A. Wheat B. Yams
 C. Sorghum D. Millet
18. Three of the following are resources. Which one is **NOT**?
 A. Fish B. Water
 C. Soil D. Mining
19. What is deforestation?
 A. Replacing trees that have been cut
 B. Cutting down trees
 C. Planting of trees where they never existed
 D. Planting trees together with crops
20. Cod liver oil is used as medicine. It is obtained from
 A. sheep B. cow
 C. nuts D. fish
21. Which colour of our national flag shows that Kenya is a united and peaceful nation?
 A. Black B. Green
 C. White D. Red
22. The following are traditional industries. Which one is **NOT**?
 A. Pottery B. Basketry and weaving
 C. Vehicle assembly D. Iron working
23. The following are drainage features **EXCEPT**
 A. swamps B. plateaus
 C. rivers D. lakes
24. A measuring cylinder and a funnel are parts of one of the following weather instruments. Which one is it?
 A. Windvane B. Rain gauge
 C. Anemometer D. Windsock
25. A steep slope found on the side of a valley is known as
 A. a lake B. a hill
 C. a range D. an escarpment
26. Which one of the following make us equal at school?
 A. Uniform B. School bus
 C. Classrooms D. Teachers

27. The type of rainfall shown below is known as



- A. relief B. frontal
 C. convectional D. cyclonic
28. When many hills are joined they form a
 A. lake B. plateau
 C. range D. plain
29. A piece of land that is completely surrounded by water is known as
 A. an island B. a desert
 C. a semi desert D. a hill
30. During the dry months our people _____ their farms which provide enough water for crops to grow
 A. weed B. irrigate
 C. prepare D. harvest
31. Which one of the following is a sad occasion?
 A. wedding ceremony B. burial ceremony
 C. birthday ceremony D. naming ceremony
32. We donate food to support people affected by the following **EXCEPT**
 A. floods B. drought
 C. fire D. enough food
33. Which is **NOT** a basic need?
 A. Food B. Vehicle
 C. Shelter D. Clothes
34. Crops which are grown for food are known as
 A. food crops B. cash crops
 C. coffee D. tea
35. In our county, people who get medicine from the forest to treat people are known as
 A. doctors B. nurses
 C. herbalists D. clinical officers
36. Which of the following is **NOT** a good social activity?
 A. Swimming B. Playing
 C. Abusing D. Singing
37. Which of the following is **NOT** a form of modern communication?
 A. Smoke B. Letters
 C. Radio D. Mobile phones
38. Which one of the following forms of transport is used **mostly** in our county?
 A. Air B. Road
 C. Railway D. Water
39. Farmers keep pigs **mainly** for _____
 A. beef B. mutton
 C. wool D. pork

40. The road sign below shows



- A. Bump ahead B. Animals crossing
C. Accident ahead D. Slow down
41. Which holiday is celebrated on 1st June every year?
A. Jamhuri day B. Mashujaa day
C. Madaraka day D. Labour day
42. The fastest means of transport is _____
A. road B. air
C. railway D. water
43. The National Anthem has _____ Stanzas
A. Three B. Five
C. Two D. Four
44. The following are elements of weather **except** one.
Which is it?
A. Clouds B. Climate
C. Sunshine D. Rainfall
45. Which one of the following human activities is **NOT**
affected by weather?
A. Farming activities
B. The houses we build
C. The clothes we put on
D. The number of children in a family
46. The **MAIN** work of the police in our county is that
of
A. protecting wild animals
B. punishing people who break the laws
C. maintaining law and order
D. killing thieves
47. Three of the following are examples of moral values.
Which one is **NOT**?
A. Working hard B. Respecting others
C. Obeying parents D. Gossiping about others
48. Which one of the following is **NOT** an importance
of rivers?
A. Building houses
B. For transport
C. Providing fish
D. Providing irrigation water
49. Which one of the following is a use of the vegetation
found in swamps?
A. For making clothes
B. Use for making mats
C. Used for making furniture
D. Used for grazing animals
50. Keeping of birds such as chicken, ducks and geese
for meat and eggs is known as
A. dairy farming B. beef farming
C. poultry farming D. livestock farming
51. Which one of the following is an example of a tree
found in natural forest?
A. Camphor B. Pine
C. Eucalyptus D. Cypress

52. Activities people carry out in order to earn money
are known as
A. resources B. economic activities
C. farming D. agriculture
53. Most tourists visit our country to see _____
A. good hotels
B. graves of leaders
C. wildlife
D. storey building
54. Who is the Deputy President in Kenya?
A. Hon. Mwai Kibaki
B. Hon. Kalonzo Musyoka
C. Hon. Raila Odinga
D. Hon. William Ruto
55. A good citizen of Kenya should
A. disobey the laws B. go to church
C. be rich D. respect other people
56. Our country Kenya is divided into _____ counties.
A. 8 B. 290
C. 47 D. 18
57. Who among the following is **NOT** a member of
county executive?
A. Senator
B. Governor
C. Deputy governor
D. County executive members
58. The following are causes of disagreement in our
school. Which one is **NOT**?
A. Failure to respect teachers
B. Poor academic performance
C. Lateness to school
D. Observing school rules
59. The law breakers are punished by the courts and
sent to _____ to serve their jail terms
A. schools B. prisons
C. churches D. police station
60. Allen's parents have stopped her from going to
school so that she can sell in their kiosk. Which one
of the following right is he being denied?
A. Right to life
B. Right to security
C. Right to education
D. Right to own property

C.R.E.

61. The creation story is recorded in the book of _____
A. Exodus B. Genesis
C. Matthew D. Numbers
62. Who among the following committed murder?
A. Cain B. Abel
C. Abraham D. Adam
63. Why did God save Noah from the great floods?
A. He was poor
B. He was generous
C. He was righteous
D. He was patient
64. Who among the following was a nephew of
Abraham?
A. Terah B. Nahor
C. Jacob D. Lot

65. What was Moses doing when God called him at Midian?
 A. He was fighting with an Egyptian
 B. He was singing
 C. He was burning incense in the temple
 D. He was taking care of his father-in-law's sheep
66. Moses was given the ten commandments at mount
 A. Sinai
 B. Nebo
 C. Moriah
 D. Ararat
67. The first king of Israel was called _____
 A. Ahab
 B. David
 C. Saul
 D. Solomon
68. King David's father was known as
 A. Isaac
 B. Jesse
 C. Abraham
 D. Terah
69. Which prophet prophesied that a prince of peace would be born by a young virgin?
 A. Isaiah
 B. Jeremiah
 C. Micah
 D. Ezekiel
70. Jesus was conceived in the womb of Mary by
 A. the doctors
 B. power of the holy spirit
 C. Joseph
 D. himself
71. Jesus was born during the time of king _____
 A. Augustus
 B. Saul
 C. David
 D. Herod
72. Who among the following people baptised Jesus christ?
 A. John the baptist
 B. Ananias
 C. Phillip
 D. Peter
73. Which of the following parables teaches about humility in prayers?
 A. Ten lepers
 B. Pharisee and tax collector
 C. Prodigal son
 D. Good samaritan
74. Who among the following disciples of Jesus was the most loved?
 A. Peter
 B. James
 C. Andrew
 D. John
75. Which disciple of Jesus was a tax collector before his call by Jesus?
 A. Simon
 B. John
 C. Matthew
 D. Andrew
76. Which of these miracles shows that Jesus had power to give life?
 A. Raising of Jairus daughter
 B. Healing of the ten lepers
 C. Walking on water
 D. Healed the paralysed man
77. Jesus was crucified in a place called
 A. Galilee
 B. Capernaum
 C. Golgotha
 D. Bethlehem
78. When do christians celebrate the resurrection of Jesus?
 A. Easter holiday
 B. Christmas
 C. Pentecost
 D. New year
79. On the day of pentecost Peter preached and _____ people got converted.
 A. 2000
 B. 5000
 C. 3000
 D. 4000
80. A person with the Holy spirit does the following **except**
 A. believes in Jesus Christ
 B. lives a holy life
 C. hates his enemies
 D. believes in God
81. Which of the following is a gift of the Holy spirit?
 A. Humility
 B. Joy
 C. Healing
 D. Faithfulness
82. The **MOST** important commandment is _____
 A. loving your God
 B. loving your neighbour
 C. loving man
 D. loving the church
83. The **BEST** time to pray is _____
 A. when we are in problems only
 B. always
 C. when taking meals only
 D. when going to bed only
84. Which of the following was **NOT** a way of expressing peace in traditional African society?
 A. Talking to each other
 B. Abusing others
 C. Sharing meals
 D. Shaking hands
85. The **BEST** thing to do when we hurt others is
 A. run away
 B. ignore the issue
 C. ask the hurt person to shut up
 D. ask for forgiveness
86. Which of the following can destroy good relationship among friends?
 A. Trust
 B. Love
 C. Kindness
 D. Gossip
87. Who among the following harm people in traditional African society?
 A. Priests
 B. Elders
 C. Witches
 D. Prophets
88. Which of these books is found in the old testament?
 A. Acts
 B. Revelation
 C. Luke
 D. Genesis
89. Jennifer a class four girl saw twenty shillings in the school compound. As a christian what should she do with the money?
 A. Buy sweets for herself
 B. Take money home to her parent
 C. Share the money with friends
 D. Take the money to the teacher on duty
90. HIV/AIDS can be spread through the following ways **EXCEPT**
 A. sharing sharp objects
 B. kissing
 C. sexual activities with infected people
 D. sharing spoon with infected people

TARGET SERIES

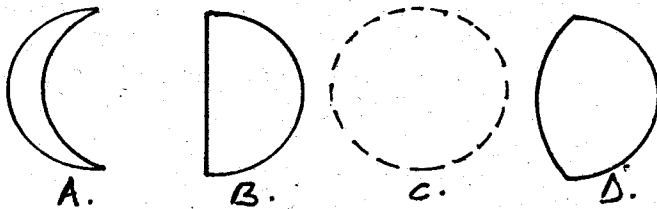
STD 4 TERM III 2014

SCIENCE


Time: 1hr 40min

02


- An object which makes another one float on water is called a
 - sinker
 - swimmer
 - floater
 - upthrust
- _____ is a star.
 - Moon
 - Comet
 - Meteors
 - Sun
- Body building and repair foods are also called
 - proteins
 - fats
 - carbohydrates
 - vitamins
- Which one of the following animals is **NOT** kept for dairy purposes?
 - Goat
 - Camel
 - Sheep
 - Cattle
- Which of the four phases of the moon is called new moon?



- Which one of the following plants is a cereal?
 - Peas
 - Millet
 - Coffee
 - Sunflower
- The sun rises in the _____.
 - West
 - East
 - North
 - South
- Bees, wasps, houseflies are called _____.
 - birds
 - animals
 - insects
 - ants
- The animal drawn below moves by _____.
 - slithering
 - gliding
 - crawling
 - walking



- Which one of the following materials can you use to model clouds?
 - Cotton wool
 - Mud
 - Charcoal
 - Manilla paper
- Using clean utensils when preparing food prevents
 - wastage of food
 - spread disease
 - time wasting
 - flies
- Plants that grow where they are **NOT** wanted are called
 - bad plants
 - unwanted plants
 - vegetables
 - weeds
- Std 4 pupils of Kiambu primary school carried out the following experiment below.



What were they investigating?

- Air in the soil
 - Soil in water
 - Air in water
 - Soil contains water
- The substances in food that make us grow healthy are called
 - food
 - nutrients
 - body building
 - nutrition
 - Water is used in the farm for all the following **EXCEPT**
 - feeding animals
 - watering plants
 - cleaning farm tools
 - cooling machine
 - Which of the following animals is **NOT** correctly matched with its young one?
 - Cow - calf
 - Horse - foal
 - Hen - chick
 - Goat - lamb
 - Which one of the following **DOES NOT** produce heat?
 - Burning candle
 - Burning stove
 - Charcoal jiko
 - Torch
 - The following tool is used to drive a nail into a piece of wood.
 - Hammer
 - Saw
 - Axe
 - Knife
 - The fruit shown below is called _____



- Avacado
- Pawpaw
- Pineapple
- Mango

- One of the following **DOES NOT** make work easier. Which one?
 - Climbing a tall building using a ladder
 - Carrying a sack on your back
 - Pushing a bag on a hand cart
 - Hitting nail using a hammer
- Which one of the following pairs of plants is used as medicinal plants?
 - Aloevera and sisal
 - Ginger and neem
 - Neem and aloevera
 - Cotton and aloevera
- Oliech wanted to cut a piece of banana to his friend. Which teeth did he use to cut the banana?
 - Premolars
 - Canines
 - Molars
 - Incisors

23. The following are all characteristics of animals. Which one is **NOT**?

- A. Adapt to changes in the environment
- B. Remove waste
- C. Feed with meat
- D. Reproduce young ones

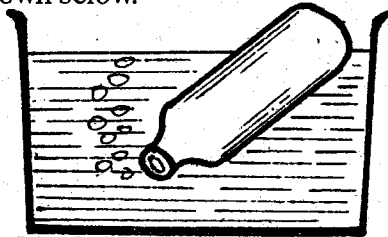
24. Dead animals and plants rot. This waste matter is known as

- A. humus
- B. components
- C. soil
- D. nutrients

25. The process of controlling weeds where dry grass is spread around the plant is known as

- A. slashing
- B. mulching
- C. uprooting
- D. dripping

26. Std 4 pupils were doing a certain experiment using water as shown below.



Which one of the following conclusion did they make?

- A. There is air in water
- B. There was water in the bottle
- C. There was air in the bottle
- D. There was water in the bottle

27. Which one of the following is **NOT** an effect of moving air?

- A. Blow soil away
- B. Falling trees
- C. Sailing boats
- D. Blowing roofs off


28. Which one of the following is odd one out?

- A. Jembe
- B. Rake
- C. Slasher
- D. Hammer

29. The ability of the body to fight diseases is called

- A. immunity
- B. syndrome
- C. immunodeficiency
- D. deficiency

30. The diagram below is used to



- A. dig holes
- B. dig
- C. cut
- D. remove nails

31. The **BEST** soil for modelling is

- A. clay
- B. sand
- C. loam
- D. ballast

32. A housefly moves by

- A. hopping
- B. coiling
- C. flying
- D. crawling

33. Living things excrete. This means that they

- A. walk on foot
- B. get rid of waste matter
- C. use oxygen
- D. produce young ones

34. The common beverage crops grown in Kenya are

- A. tea and sugarcane
- B. coffee and beans
- C. coffee and cocoa
- D. tea and coffee

35. Which of the following chemicals is **WRONGLY** matched?

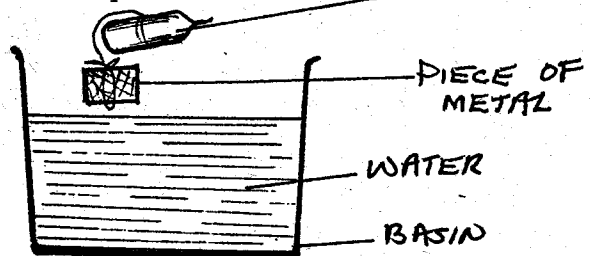
- A. Pesticides - pests
- B. Weedicides - weeds

C. Herbicides - weeds D. Insecticides - insects

36. The hair from goats is called

- A. wool
- B. skin
- C. mohair
- D. fur

37. A std 4 boy set up the experiment below. What was the use of piece of metal.



- A. Acted as a floater
- B. Acted as a sinker
- C. For balancing
- D. It is a solid

38. It is important to sharpen the tools used for cutting. The tool used for this purpose is known as

- A. file
- B. saw
- C. sharpener
- D. jembe

39. The soil that contains very fine particles is

- A. loam soil
- B. clay soil
- C. sandy soil
- D. organic matter

40. People are **NOT** able to see the stars during the day because of the presence of the

- A. moon
- B. sky
- C. sun
- D. clouds

41. Which part of the tooth supports it on the gum?

- A. Enamel
- B. Cavity
- C. Root
- D. Jaw

42. Crops that are grown by a farmer for sale are called

- A. cash crops
- B. subsistence crops
- C. oil crops
- D. food crops

43. Which of the following types of weeds is poisonous to human beings and animals?

- A. Thorn apple
- B. Wondering jew
- C. Oxalis
- D. Pigweed

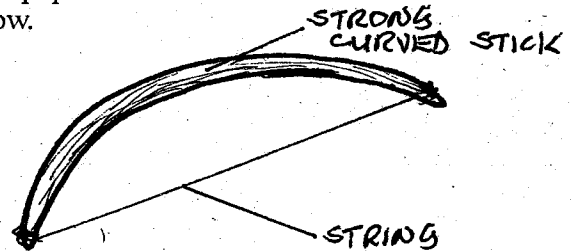
44. Rulers of cleanliness are called

- A. safety
- B. clean
- C. hygiene
- D. dirty

45. During the sunny weather people wear ___ clothes

- A. heavy clothes
- B. gumboots
- C. hats
- D. light clothes

46. Std 2 pupils made a musical instrument as shown below.



Which one of the following is **TRUE** about how sound was produced?

- A. By plucking
- B. By bowing
- C. By hitting
- D. By blowing

47. A permanent set of teeth has ___ teeth

- A. 42
- B. 20
- C. 32
- D. 30

48. A snake moves by

- A. walking
- B. crawling
- C. flying
- D. slithering

49. Chicken kept for meat are called

- A. beef
- B. broilers
- C. layers
- D. poultry

50. A place where plants grow well is called

- A. habitat
- B. farm
- C. home
- D. field

TARGET SERIES

STD 4 TERM III 2014

MATHEMATICS

Time: 1hr 40min

02

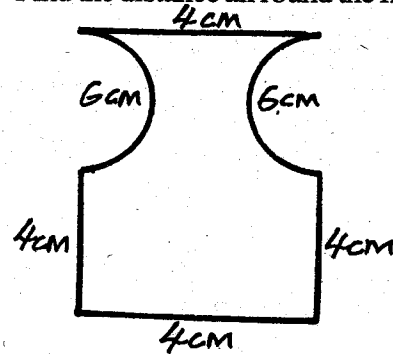
- Write four hundred and three thousand and eighty nine.
 - 430089
 - 403089
 - 43089
 - 400389
- What is the place value of 4 in 374908?
 - Thousands
 - Ten hundreds
 - Ten thousands
 - Hundreds thousand
- Find the L.C.M. of 20, 42, 54.
 - 540
 - 315
 - 3780
 - 420
- Multiply; $6\frac{3}{4} \times \frac{4}{9}$
 - 6
 - 3
 - 9
 - 12
- Work out;- 17.12×23
 - 3.9376
 - 39.376
 - 393.76
 - 3937.6
- Which one of these numbers is divisible by 2, 5 and 10?
 - 15
 - 17
 - 100
 - 252
- Convert 240 minutes into hours.
 - 8 hours
 - 10 hours
 - 4 hours
 - 40 hours
- What is the next number? 1, 3, 6, 10, 15, _____
 - 19
 - 24
 - 20
 - 21
- $1 - \frac{8}{12} =$ _____
 - $\frac{5}{12}$
 - $\frac{6}{12}$
 - $\frac{4}{12}$
 - $\frac{7}{12}$
- How many $\frac{1}{4}$ litres tins can fill 7 litres container?
 - 14
 - $1\frac{3}{4}$
 - 28
 - 4
- How many single squares are in the figure?

 - 19
 - 18
 - 280
 - 36

- A square plot has an area of $196m^2$. What is the perimeter of the square?
 - 28m
 - 14m
 - 56m
 - 784m
- Find the distance all round the figure below.

4cm
6cm
6cm
4cm
4cm
4cm

 - 38
 - 28
 - 18
 - 48



- Willis bought the following from a 'duka'
 - $1\frac{1}{2}kg$ of sugar @ Sh 200
 - $\frac{1}{2}kg$ of tomatoes for Sh 50
 How much did he pay?
 - Sh 250
 - Sh 450
 - Sh 300
 - Sh 350
- Work out;-

Week	days
3	4
- 1	5
-----	-----

 - 4 weeks 1day
 - 4 weeks 9days
 - 2 weeks 6days
 - 1 week 6days

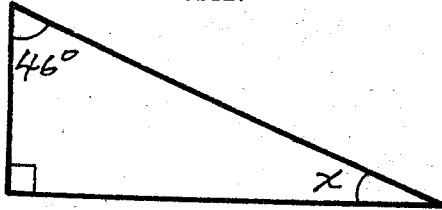
- $32 + 51 =$ _____ number
 - even
 - odd
 - prime
 - none
- Divide;- $5 \overline{) 780}$
 - 165
 - 180
 - 156
 - 128

- $\sqrt{\frac{49}{64}}$
 - $\frac{7}{8}$
 - $\frac{14}{16}$
 - $\frac{5}{8}$
 - $\frac{6}{8}$
- Find the product of $8701 \times 523 =$ _____
 - 9224
 - 244103
 - 403523
 - 4550623

- Work out;- $\frac{4}{9} \div \frac{2}{6}$
 - $\frac{4}{27}$
 - $\frac{4}{3}$
 - $1\frac{1}{3}$
 - 41.3
- Solve the value of y.

$$9y - 5y = 28$$
 - 14
 - 112
 - 7
 - 9

24. What is the value of X?



- A. 44°
- B. 40°
- C. 120°
- D. 134°

25. Write down 98 in roman numbers.

- A. LXXIII
- B. XCVIII
- C. LXLVIII
- D. ILVIII

26. What is the total value of digit 7 in 48.378?

- A. 70
- B. 07
- C. 0.07
- D. 700

27. Round off 28.629 to 2 decimal places.

- A. 27.63
- B. 29.62
- C. 28.63
- D. 28.62

28. A school had four hundred and twenty seven pupils. Each pupil contributed three hundred and twenty shillings. How much money was contributed altogether?

- A. Sh 135540
- B. Sh 125540
- C. Sh 136640
- D. Sh 124640

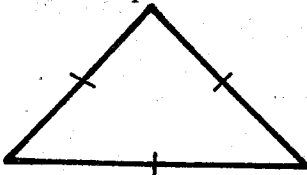
29. Jackie ate 0.12 of the sugarcane he had. What fraction of the sugarcane did he eat?

- A. $\frac{12}{1000}$
- B. $\frac{3}{25}$
- C. $\frac{1}{4}$
- D. $\frac{7}{20}$

30. What is the next two numbers in the pattern?

- 25, 36, 49, _____, _____
- A. 56, 76
 - B. 66, 89
 - C. 58, 91
 - D. 64, 81

31. Which fraction is equivalent to the unshaded part?



- A. 4
- B. $\frac{2}{3}$
- C. $\frac{4}{12}$
- D. $\frac{1}{3}$

32. What is $7\frac{4}{5} - 4\frac{3}{4}$?

- A. $3\frac{11}{20}$
- B. $3\frac{1}{20}$
- C. $3\frac{1}{5}$
- D. $\frac{1}{20}$

33. Work out:-

Litres	ml
312	644
+ 26	840
<hr/>	

- A. 388L
- B. 339L 484ml
- C. 314L 283ml
- D. 285L 796ml

34. Find an equivalent fraction to $\frac{2}{5}$

- A. $\frac{3}{10}$
- B. $\frac{4}{10}$
- C. $\frac{4}{5}$
- D. $\frac{3}{5}$

35. The length of the field is 45m, what is the length in centimetres?

- A. 4.5cm
- B. 45000cm
- C. 4500cm
- D. 450cm

36. Add $\frac{1}{3}$ to the difference of $5\frac{2}{3}$ and $4\frac{3}{4}$

- A. $1\frac{1}{3}$
- B. $10\frac{3}{4}$
- C. $1\frac{1}{4}$
- D. $\frac{2}{3}$

37. What is $7\frac{3}{4}$ written into improper fraction?

- A. $\frac{31}{4}$
- B. $\frac{29}{4}$
- C. $\frac{4}{31}$
- D. $\frac{4}{29}$

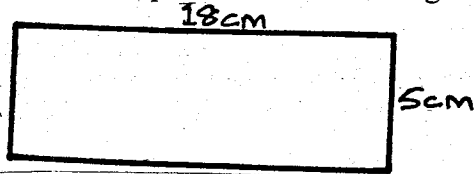
38. A teacher had 300 exercise books. He distributed the exercise books to 32 pupils equally. How many exercise books remained?

- A. 9
- B. 108
- C. 12
- D. 6

39. How many days are there in the months of June, July and August altogether?

- A. 92
- B. 90
- C. 93
- D. 91

40. Find the perimeter of the rectangle below.

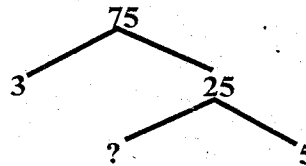


- A. 90cm
- B. 90cm²
- C. 23cm
- D. 46cm²

41. What is 0.04 as a fraction?

- A. $\frac{4}{10}$
- B. $\frac{0.04}{100}$
- C. $\frac{40}{10}$
- D. $\frac{4}{100}$

42. Complete the factor below.



- A. 2
- B. 5
- C. 3
- D. 7

43. Which of the following numbers is divisible by 5?

- A. 215
- B. 151
- C. 106
- D. 162

The table below shows the number of pupils present in a class for a period of 5 days. All the pupils were present on Wednesday. Use it to answer question 44 - 46.

Day	Mon	Tue	Wed	Thur	Fri
Boys	24	25	28	22	27
Girls	24	27	30	28	29

44. How many pupils were absent on Tuesday?

- A. 58
- B. 6
- C. 52
- D. 60

45. How many more girls than boys were in that class?

- A. 30
- B. 28
- C. 2
- D. 58

46. How many pupils altogether were present on Friday?

- A. 50
- B. 58
- C. 52
- D. 56

47. Convert 3 days into hours.

- A. 36 hours
- B. 72 hours
- C. 54 hours
- D. 108 hours


48. Atieno bought p oranges and y pawpaw. How many fruits did she buy altogether?

- A. py
- B. p - y
- C. p ÷ y
- D. p + y

49. Simplify; $16c + 3t - 5c + 9t$

- A. $21c + 12t$
- B. $23c + t$
- C. $12c + 11t$
- D. $11c + 12t$

50. What is the next pattern?



A. B

B. B

C. B

D. B

TARGET SERIES

STD 4 TERM III 2014

02

ENGLISH

Time: 1hr 40min

Fill in the blank spaces with the given words.

When 1 the classroom, I was shocked by 2 appearance. A heap of old books, 3 of papers and broken pencils 4 on the dirty 5. The faded whitewash 6 the walls was streaked 7 brown colour and in the ceiling a gaping 8 showed 9 some of the iron sheets had 10 away. Although the day was bright outside, only a 11 light came through the layer of dust and cobwebs 12 covered 13 tiny window. The furniture consisted 14 some old broken desks and a 15 blackboard.

- | | | | |
|---------------|-----------|-----------|------------|
| 1. A. got | B. went | C. enter | D. entered |
| 2. A. our | B. their | C. its | D. it's |
| 3. A. bits | B. bites | C. bit | D. pits |
| 4. A. layed | B. laid | C. lain | D. lay |
| 5. A. flour | B. floor | C. ground | D. place |
| 6. A. at | B. in | C. on | D. over |
| 7. A. with | B. from | C. which | D. also |
| 8. A. whole | B. hole | C. well | D. throw |
| 9. A. why | B. when | C. how | D. where |
| 10. A. lasted | B. rusted | C. rust | D. rasted |
| 11. A. little | B. few | C. many | D. less |
| 12. A. and | B. still | C. which | D. where |
| 13. A. the | B. a | C. an | D. some |
| 14. A. from | B. of | C. about | D. with |
| 15. A. fine | B. good | C. bad | D. worn |

Complete the following group terms.

16. A flock of _____
A. sheep B. ships
C. people D. animals
17. A library of _____
A. cubs B. tables
C. books D. cattle
18. A pack of _____
A. camels B. donkeys
C. cows D. wolves

In place of the underlined word, choose a word which has a similar meaning.

19. The teacher will assist me with this sum.
A. check B. help C. do D. mark
20. The shepherd's dwelling was a small cottage
A. camp B. site C. school D. home
21. The sailor said farewell to his wife and children.
A. goodbye B. good night
C. welcome D. come again

Write the missing word in each sentence.

22. Kayoro wanted to swim _____ his mother said it was too cold.
A. and B. but C. so D. also

23. Sahra went to bed early _____ she was not feeling well.
A. why B. but C. because D. us
24. The robber did not know that he had been _____
A. saw B. seeing C. sew D. seen

Provide the opposites of the underlined words.

25. The baker had no fresh loaves, only _____ ones.
A. good B. stale
C. old D. left over
26. Sally looks pretty when she smiles but _____ when she frowns.
A. ugly B. brave C. beautiful D. smart
27. Please take this cold tea away and _____ me some milk.
A. bring B. buy C. send D. give

Complete these sentences with the correct similes.

28. The oranges were as _____ as honey.
A. cold B. sweet C. sweat D. cool
29. My friend is as _____ as gold
A. good B. expensive
C. slow D. grey
30. This train is as slow as a _____
A. giant B. rake C. snail D. mouse

Read the passage then answer questions 31 to 40.

Bears have an excellent sense of smell, and very keen hearing and scent the faintest odour from a great distance. This is fortunate for them, as they are very short-sighted. A breeze arose wafting the odour of something sweet towards Mishook, the bear cub. What could it be? The cub did not know, but his mother and the elder ones recognised the aroma of honey. With hurried steps the whole bear family set off in search of the prize. They trotted along for about a kilometre before they reached the old decayed tree-trunk where the bees had taken up their abode. The poor bees saw the plunderers, and immediately sounded an alarm. They then defended their store of honey by fiercely stinging the

bears.

But the mother bear and her cubs calmly continued their feast of honey, their thick fur protecting them against the attacks of the bees. One angry bee, however, plunged its sting into Mishook's nose. He growled furiously, shook his head, jumped, snorted, turned round like a spinning-top and it was with great difficulty that he managed to beat off the troublesome insect with his paws. But this repulse did not by any means prevent him from tasting his share of the honey, of which he immediately became very fond.

- | | |
|--|---|
| <p>31. Which two excellent senses does a bear have?
A. Smell and aroma
B. Sweet smell
C. Smell and keen hearing
D. Keen hearing</p> <p>32. Where had the bees taken up their abode?
A. A tree-trunk B. A hole
C. A pit D. A nest</p> <p>33. Bears are fortunate in having these two senses because they are
A. long-sighted B. honey eaters
C. good at hearing D. short-sighted</p> <p>34. How did the bees defend their store of honey?
A. They trotted on the bears
B. Fiercely stinging the bears
C. Licking the noses of the bears
D. By snorting</p> <p>35. When the poor bees saw the bears, it immediately sounded the
A. bell B. clock
C. alarm D. shout</p> | <p>36. Which of the bear family was stung by an angry bee?
A. Baby bear B. Mishook
C. A cub D. Mother bear</p> <p>37. With hurried steps, the whole bear family set off in search of
A. aroma B. their cubs
C. bees D. honey</p> <p>38. What was the smell which the breeze blew towards Mishook?
A. Bad odour B. Honey comb
C. Sweet aroma of honey D. Smell of paws</p> <p>39. Mishook got rid of the troublesome insect by ____
A. running away
B. eating it
C. beating it off with its paws
D. by stinging it</p> <p>40. The bear family trotted along for about
A. two kilometres B. one kilometre
C. three kilometres D. a half kilometre</p> |
|--|---|

Read the passage below and answer questions 41 to 50.

There was a time long ago when men did not build houses in which to live. Their homes were caves and wide burrows in the earth. They usually chose the sides of hills, and this allowed them to cluster together. There they found shelter from the sun, the wind, and the rain. These people lived almost like the wild animals, which they hunted to provide themselves with food and clothing.

In countries where canes and long grasses grew in abundance, the natives made huts by weaving the reeds and hanging the woven mats from poles. In some parts of the world these huts were built in the trees.

- | | |
|---|---|
| <p>41. Long time ago men lived in ____
A. caves and burrows B. hole
C. tree - trunk D. soil</p> <p>42. The men usually chose the sides of ____
A. mountains B. rivers
C. lakes D. hills</p> <p>43. There was a time long ago men did not know how to build
A. towns B. roads
C. bridges D. houses</p> <p>44. The animals men hunted provided them with
A. food and clothing
B. food only
C. clothing and shoes
D. clothing only</p> <p>45. In some countries _____ and _____ grew in abundance.
A. grass, maize B. grass, cane
C. cane, maize D. food, millet</p> | <p>46. In some parts of the world people built houses in the
A. soil B. branches
C. holes D. trees</p> <p>47. Some natives made huts by weaving ____
A. the reeds B. grass
C. cane D. modelling clay</p> <p>48. The side of the hills allowed men to cluster
A. away B. between
C. themselves D. together</p> <p>49. Long ago, people lived almost like the ____
A. domestic animals
B. wild animals
C. pigs
D. the hunters</p> <p>50. The BEST title for the passage is ____
A. Caves and burrows
B. Home and animals
C. The dwellings of man
D. An old man's house</p> |
|---|---|

TARGET SERIES

DARASA LA NNE MUHULA WA TATU 2014

02

KISWAHILI

Muda: Saa 1 Dakika 40

Soma kifungu kifuatacho kisha uchague kiteuzi kifaacho kujaza pengo.

Siku 1 nilifika 2 nikiwa nimechoka 3. Nilikuwa nikitoka 4 mwilini. Nilielekea 5 na kuoga 6 maji yaliyokuwa 7. Baada 8 hayo nilienda 9 palipokuwa pameandaliwa 10 mtamu sana. Mama 11 alikuwa 12 mzuri na kila mara tulipomaliza chakula 13 jioni sisi sote, wazazi 14 ndugu zangu tuliramba 15 vyetu kwa ajili ya utamu wa chakula.

- | | | | |
|----------------|-----------|-------------|------------|
| 1. A. mmoja | B. moja | C. kimoja | D. limoja |
| 2. A. mji | B. nyumba | C. nyumbani | D. shamba |
| 3. A. zana | B. kidogo | C. mwisho | D. sana |
| 4. A. chasho | B. jacho | C. vumbi | D. jasho |
| 5. A. hamamuni | B. bafu | C. uwanjani | D. shuleni |
| 6. A. na | B. kwa | C. ni | D. pia |
| 7. A. kali | B. baridi | C. ghali | D. chini |
| 8. A. ya | B. la | C. cha | D. kwa |
| 9. A. huko | B. pale | C. mle | D. kwa |
| 10. A. mno | B. mro | C. mloo | D. mlo |
| 11. A. chetu | B. wangu | C. changu | D. yangu |
| 12. A. mpisi | B. mwiko | C. mpishi | D. mpiki |
| 13. A. wa | B. cha | C. la | D. chao |
| 14. A. la | B. na | C. kwa | D. mwa |
| 15. A. kidole | B. miguu | C. vidole | D. ulimi |

Jibu swali 16 - 30 kwa kufuata maagizo.

16. Mbung'o huleta ugonjwa upi?
A. Malale B. Ukimwi C. Malaria D. Kipindupindu
17. Vyura _____ wameruka.
A. vyote B. chote C. wote D. lote
18. **Tegua kitendawili kifuatacho.**
Baba katoka bafuni na mapovu kichwani _____
A. nyayo B. mwiko C. kisigino D. majira
19. **Andika kwa wingi**
Uteo huu ni wangu.
A. Mateo haya ni yangu B. Viteo hivi ni vyetu
C. Teo hizi ni zangu D. Teo hizi ni zetu
20. Nomino saa inapatikana katika ngeli ya _____
A. LI - YA B. U - YA
C. I - ZI D. I - I
21. Ni mnyama yupi hajalinganishwa na kikembe chake ipasavyo?
A. Chui - kisuse B. Mamba - Kigwena
C. Mbu - kiluwiluwi D. Simba - shibli
22. Umbo hili ni _____
A. zigizagi B. wimbi
C. mstari sulubu D. mstari sambamba
23. Dada yake mama utamwita _____
A. mjomba B. shangazi C. wifii D. hale
24. Mti unaotupa kahawa huitwa _____
A. mparachichi B. mbuni
C. mchai D. mgomba
25. Nyuni huishi _____
A. kiotani B. mzingani
C. kizimbani D. pangoni
26. **Kanusha.**
Mimi huenda shuleni
A. Mimi huwa siendi shuleni
B. Mimi sijaenda shuleni
C. Mimi siendi shuleni
D. Mimi hutoka shuleni
27. Taka hutupwa kwenye _____
A. ndoo B. biwi C. jaa D. bomba
28. Ni sentensi ipi iliyoakifishwa vizuri?
A. Je u hali gani B. Je! u hali gani?
C. Je? u hali gani? D. Je, u hali gani?
29. "Shaibu alikata kamba" yaani _____
A. alishuka B. alifariki C. alikufa moyo D. alichoka
30. **Andika kwa maneno;** Watalii 696.
A. Watalii mia sita tisini na wasita
B. Watalii mia tisa sitini na sita
C. Watalii sitini na tisa na sita
D. Watalii mia sita tisini na sita

Soma ufahamu ufuatao kisha ujibu maswali 31- 40.

Musembi alikuwa na tabia mbaya ya kuvunja vikombe nyumbani. Kila alipotiliwa chai, alikunywa na baadaye anavunja kikombe. Mama yake alijaribu kumkanya asifanye hivyo lakini aliendelea na tabia hiyo. Siku moja, Musembi alitiliwa chai lakini kabla ya kuinywa ilijimwaga. Alimwendea mama yake huku akilia. "Mama, mama! Chai yangu

imemwagika!" Mama yake hakusema lolote. Alimtilia chai nyingine lakini ikajimwaga tena. Alipomwendea mama yake mara ya pili, mama alikasirika na kuuchukua ufito.

"Nimechoshwa na hii tabia yako ya kuvunja vikombe na kumwaga chai. Sasa utaniona," alisema kwa hasira. Alimshika Musembi tayari kumtia adabu. Lakini kabla hajaanza kumpiga, kikombe kilianza kusema.

"Nimechoka! Nimechoka! Nimechoka! Kila ukinitumia, wanivunja! Kila ukivunja wanitaka! Sitaki! Sitaki! Sitaki!" Maneno haya yalimshangaza Musembi na mama yake. Walikuw hawajasikia kikombe kikizungumza. Lakini Musembi alipata funzo na tangu siku hiyo, hajarudia kuvunja kikombe tena.

- | | |
|---|--|
| 31. Tabia mbaya ya Musembi ilikuwa ya kufanya nini?
A. Kuvuja vikombe B. Kuvunja vikombe
C. Kunywa chai D. Kumtusi mamake | C. Kusikiliza uchungu wa kikombe
D. Mama ni mkali |
| 32. Chai ya Musembi ilipojimwaga, mama yake alitaka kufanya nini?
A. Kumchapa B. Alimyamaza
C. Kunywa chai D. Kumfukuza | 36. "Alimshika Musembi tayari kumtia adabu." Ni nani huyu?
A. Mwalimu B. Kikombe
C. Mzee D. Mama |
| 33. Musembi alipomwendea mama yake kwa mara ya pili, chai ilipojimwaga, mama alitaka nini?
A. Kutomheshimu B. Kumwombea
C. Kumtia adabu D. Kukasirika | 37. Nimechoka! Nimechoka! Ni nani aliyasema maneno haya?
A. Mama B. Kikombe
C. Musembi D. Hatujaambiwa |
| 34. Kikombe kilipozungumza
A. Musembi alitoroka
B. Mama alilia
C. Musembi alilia
D. Mama na Musembi walishangazwa | 38. Neno ufito limetumiwa. Liko katika ngeli gani?
A. A - WA B. LI - YA
C. U - I D. U - ZI |
| 35. Maneno ya kikombe yalikuwa na funzo gani kwa Musembi?
A. Kwamba ni vizuri kutojihadhari
B. Kutovunja kikombe tena | 39. Mtu akifanya makosa huambiwa "utakiona cha ____"
A. mwalimu B. jitu
C. askari D. mtema kuni |
| | 40. Methali inayofaa ufahamu huu ni;
Ukistaajabu ya Musa utayaona ya _____
A. Firauni B. Filauni
C. mengi D. mageni |

Soma taarifa kisha ujibu maswali 41 -50.

Kobe alitamani kubadili maskani yake. Basi, akamwomba Tai amchukue mpaka kwenye maskani yake mapya. Kobe aliahidi Tai kumpa malipo yake. Tai akakubali akamkata kobe gamba lake akapaa naye juu sana. Njiani wakakutana na kunguru. Akamwambia Tai, "Bwana wee, huna habari, huyo kobe anafaa sana kuwa chakula chako."

Tai akajibu akamwambia, "Ndiyo, bwana, lakini gamba lake ni gumu mno." Kunguru akamwambia, "Hilo si neno." Mwamba waweza kulipasua mara moja." Basi Tai akafuata shauri la kunguru, akambwaga kobe penye mwamba mkali. Ndipo wale ndege wawili wakafurahia kula chakula chao ndicho kobe.

- | | |
|--|--|
| 41. Kobe alitamani _____
A. kuhamia maskani mapya
B. kuhamia maskani mapya
C. kuchukuliwa na Tai
D. kuruka angani | C. Kucha za Tai D. Jiwe ndogo |
| 42. Ni ahadi gani kobe alimpatia Tai?
A. Kumpa gamba
B. Kumficha kwenye gamba
C. Kumlipa baada ya kumfikisha
D. Kuwa rafiki yake | 46. Maskani ni sawa na _____
A. pango B. makao
C. kiota D. umaskini |
| 43. Njiani kobe na Tai walikutana na _____
A. Heroe B. Kunguru
C. Kipanga D. Tai mwengine | 47. Ngozi inayomfunika kobe huitwa
A. ngamba B. mwamba
C. gamba D. bawa |
| 44. Kunguru na Tai _____
A. wanaishi pamoja
B. ni ndege wanaozaa watoto
C. ni ndege wasioruka
D. wote ni ndege | 48. Ndege kama vile Tai huruka kwa kuwezesha na
A. bwawa B. mabawa
C. pawa D. mbawa |
| 45. Mwamba ni nini?
A. Jiwe kubwa B. Aina ya mti mgumu | 49. Kamilisha kitendawili.
Anatembea na nyumba yake _____
A. kunguru B. tai
C. kobe D. mbwa |
| | 50. Hadithi hii inatufunza
A. Kobe ni mnyama mjinga
B. Usimwamini adui wa kitambo hata kama una shida
C. Tai ni ndege mwenye nguvu
D. Kunguru ana akili kuliko Tai |

NAME	
NAME OF YOUR SCHOOL	

TARGET SERIES

02

SECTION B: COMPOSITION

STD 4 TERM III 2014

Time: 40 minutes

Write an interesting story about:-

MY FAVOURITE FOOD.

JINA LAKO	
JINA LA SHULE YAKO	

02

TARGET SERIES

SEHEMU YA PILI: INSHA

DARASALANNE MUHULA WA TATU 2014

Muda: Dakika 40

Andika insha kuhusu;

MAZINGIRA.