

SCHOOL BASED

EVALUATION TEST STANDARD FOUR

4

TERM II 004

Time : 1 hr 45min

SCIENCE

Use the tooth shown below to answer questions

1-3



1. Name the parts marked 'X' and 'Z'.

X Z

- | | |
|----------|-------|
| A. gum | root |
| B. crown | root |
| C. neck | crown |
| D. neck | gum |

2. The tooth shown above is called _____

- | | |
|-------------|-----------|
| A. incisor | B. canine |
| C. premolar | D. molar |

3. What is the function for the above shown tooth?

- | | |
|------------------|------------------|
| A. Grinding food | B. Crushing food |
| C. Tearing food | D. Cutting food |

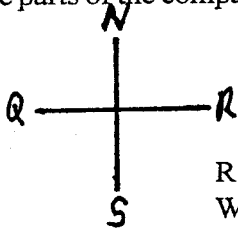
4. Which of the following food crop is an example of a cereal?

- | | |
|-----------|------------|
| A. Millet | B. Kales |
| C. Peas | D. Lettuce |

5. Which of the following is not a type of weather?

- | | | | |
|----------|----------|----------|----------|
| A. Sunny | B. Windy | C. Rainy | D. Muddy |
|----------|----------|----------|----------|

6. Name the parts of the compass shown below.



Q

R

S

- | | |
|----------|------|
| A. East | West |
| B. North | West |
| C. South | East |
| D. West | East |

7. In which direction does the sun set?

- | | | | |
|---------|----------|---------|----------|
| A. West | B. South | C. East | D. North |
|---------|----------|---------|----------|

8. Name the shape of the moon shown below.



- | |
|--------------|
| A. New moon |
| B. Full moon |
| C. Gibbous |
| D. Crescent |

9. Which of the following animals feed on plants only?

- | | |
|------------|------------|
| A. Jackals | B. Hyenas |
| C. Zebra | D. Leopard |

10. How does the animal shown below move?



- | |
|-------------|
| A. Swimming |
| B. Crawling |
| C. Flying |
| D. Walking |

11. Animals reproduce. This means that they _____

- | | |
|-------------------|-----------------------------|
| A. feed on plants | B. give birth to young ones |
| C. pass out food | D. breath in |

12. Very cold water that has changed to solid is called

- | | |
|------------|-----------|
| A. block | B. fringe |
| C. mineral | D. ice |

13. AIDS is caused by virus called _____

- | | | | |
|----------|-------------|--------|--------|
| A. germs | B. parasite | C. HIV | D. sex |
|----------|-------------|--------|--------|

14. We can maintain strong teeth by doing the following except _____

- | |
|---|
| A. eating a balanced diet |
| B. using a toothpaste that has flouride |
| C. giving the teeth exercise |
| D. Eating sugary foods |

15. The following are problems related to teeth. Which one is not?

- | | |
|-----------------|------------------|
| A. Sweet breath | B. Bleeding gums |
| C. Tooth decay | D. Dental caries |

16. How many types of teeth are there?

- | | | | |
|------|-------|-------|------|
| A. 4 | B. 32 | C. 20 | D. 6 |
|------|-------|-------|------|

17. AIDS stands for _____

- | |
|--|
| A. Acquired Immune Disease Syndrome |
| B. Active Immune Deficiency Syndrome |
| C. Acquired Immune Deficiency Syndrome |
| D. Active Immune Deficiency Sex |

18. Plants which have seeds in pods are referred to as

- | | |
|--------------|------------|
| A. cereals | B. legumes |
| C. beverages | D. beans |

19. Weeds are plants that grow where _____

- | | |
|------------------------|----------------------|
| A. they are wanted | B. they are required |
| C. they are not needed | D. they are planted |

20. The color of a clear sky is _____

- | | |
|--------------|--------------|
| A. sky green | B. sky white |
| C. sky red | D. sky blue |

21. Too much rain causes _____

- | | | | |
|------------|----------|----------|------------|
| A. drought | B. flood | C. river | D. harvest |
|------------|----------|----------|------------|

22. Natural home of a plant is called _____


- | | |
|---------------|-----------|
| A. habitat | B. forest |
| C. vegetation | D. garden |

23. The shapes of the moon are also called _____
 A. phases B. crescents
 C. quarters D. pieces
24. Which of the following clouds gives us rain?
 A. Nimbus B. Cumulus
 C. Cirrus D. Stratus
25. Shedding of teeth starts when the baby is _____
 A. 20 years B. 6 years
 C. 15 years D. 32 years
26. We breath in _____
 A. carbon dioxide B. nitrogen
 C. smoke D. oxygen
27. How many legs does an insect have?
 A. 18 B. 7 C. 3 D. 6
28. The basket below is a product of _____




- A. beverage crops
 B. oil crops
 C. sisal plant
 D. barley plant

29. Which of the following examples of weed have hooks?
 A. Sodom apple B. Pigweed
 C. Blackjack D. Wandering jew
30. Which of the animals below produces mohair?
 A. Sheep B. Pig C. Cow D. Goat
31. The part of the moon shown below is known as



- A. road B. air C. orbit D. planet
32. Water can be used for the following purposes except
 A. recreation B. irrigation
 C. lighting fire D. transport
33. The experiment shown below was done to find out whether _____




- A. soil contains water B. water contains air
 C. soil contains air D. water contains soil
34. Decayed organic matter is called _____
 A. humus B. fertility
 C. alluvial D. manure
35. The weather is _____



- A. cloudy
 B. rainy
 C. sunny
 D. windy

36. In the weather above people would buy one of the following items most. Which one is it?
 A. Cups B. Umbrellas
 C. Shoes D. Sandals
37. Rules of cleanliness is called _____
 A. constitution B. hygiene
 C. act D. science
38. Flowers make a place look _____
 A. ugly B. dull
 C. beautiful D. insecure
39. We measure rainfall in _____
 A. km B. mm C. cm D. metres
40. What kind of clothes can be worn during the weather shown below?




- A. Light
 B. Heavy
 C. Strong
 D. Thick

41. An insect has _____ body parts.
 A. 2 B. 4 C. 3 D. 1
42. Which of the following is not an example of poultry?
 A. Geese B. Turkey
 C. Hens D. Scorpion
43. Cow is to beef as sheep is to _____
 A. pork B. chicken C. meat D. mutton
44. Scientists who study weather are called _____
 A. science teacher B. forecast
 C. meteorologists D. compass
45. Moving air is called _____
 A. rain B. wind C. trees D. insects
46. Drinking water should be _____ before drinking to kill germs.
 A. stored B. sold C. boiled D. packed
47. This shape below shows a _____ seed.



- A. carrot
 B. sugarcane
 C. maize
 D. bean

48. Ear is a sense of _____
 A. smell B. feeling
 C. sight D. hearing
49. Mosquitoes feeds on _____
 A. meat B. blood C. grass D. seeds
50. Which soil is used for modelling?
 A. Loam B. Sand C. Clay D. Rocks



SCHOOL BASED EVALUATION TEST

4

DARASA LA NNE
MUHULA WA PILI


KISWAHILI: INSHA

Dakika: 40

Jina Lako	
Jina la Shule Yako	

Andika insha ya kupendeza juu ya:

SIKU YA MICHEZO SHULENI



SCHOOL BASED

EVALUATION TEST
STANDARD FOUR

4

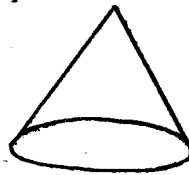
MUHULA WA PILI
MUDA : Saa moja dkt 45

KISWAHILI LUGHA

Jaza nafasi zilizo wazi

Walikuwapo wavulana 1 waliopendana kama chanda na pete. Mvulana 2 aliitwa Sembo na wa 3 Tumbolile. Walikuwa wakiishi 4 kijiji 5 karibu sana na mto 6. Siku moja jioni, walipita kwenye kiwanja 7 kujengea choo 8. Waliona miti 9 iliyokaribia kukauka. Wakachukua maji wakaimwagia miti 10 zisikauke. Hao ni vijana wazuri wanaopenda mazingira.

- | A. | B. | C. | D. |
|-----------|--------|--------|---------|
| 1. wapili | wawili | mbili | wambili |
| 2. mumoja | moja | mmoja | kimoja |
| 3. mbili | upili | pili | bili |
| 4. kwa | katika | kuwa | kua |
| 5. moja | kubwa | kimoja | ndogo |
| 6. mkubwa | refu | kubwa | ndefu |
| 7. ya | cha | wa | la |
| 8. chao | yao | lao | zao |
| 9. nyingi | mingi | mengi | vingi |
| 10. ile | ule | zile | yale |
-
- | | | | | | | | | | | |
|---|---|--|---|---|---|---|--|---|---|---|
| 11. Ugonjwa wa kuanguka na kuzimia huitwa _____
A. kichaa
B. kifafa
C. kichocho
D. kifaduro | 12. Dada wa mama huitwa _____
A. binamu
B. halati
C. shangazi
D. mpwa | 13. Mtoto wa ng'ombe huitwa _____
A. shibli
B. ndama
C. kinda
D. kifaranga | 14. Nyumba ya mchwa huitwa _____
A. mzinga
B. zizi
C. kichuguu
D. kiota | 15. Kamilisha methali: Mtaka yote hukosa _____
A. nini
B. nyoka
C. yote
D. vyote | 16. Andika jina la umbo.
A. mstatili
B. pembe tatu
C. pia
D. hiramu | 17. Mwenda _____ shuleni leo.
A. hajakuja
B. hakuji
C. hakukuja
D. haji | 18. Kwa nini wewe _____ kitabu kama hiki?
A. hauna
B. hakina
C. hana
D. huna | 19. Sitaki maji ambayo _____ uchafu.
A. yako na
B. ina
C. una
D. yana | 20. Nilimwona mjomba akiwa na mbwa _____
A. nyingi
B. wengi
C. zake
D. hizi | Kanga ni <u>21</u> wa mwituni <u>22</u> ni jamii <u>23</u> kuku. Ana <u>24</u> ya rangi <u>25</u> na nyeusi mwilini.
21. A. viumbe
B. mdudu
C. ndege
D. mti
22. A. ambao
B. ambaye
C. ambavyo
D. ambayo
23. A. wa
B. ya
C. za
D. kwa
24. A madoadoa
B. doadoa
C. doa
D. madoa
25. A. nyeupe
B. jeupe
C. meupe
D. weupe
26. Akisami $\frac{1}{6}$ huitwa _____
A. subui
B. sudusi
C. humusi
D. nusu
27. Wageni huketi _____
A. jikoni
B. bafuni
C. sebuleni
D. stoo
28. Unataka kula chakula _____?
A. upi
B. kipi
C. zipi
D. ipi
29. Milango _____ ilivunjika ni mibovu.
A. ambayo
B. ambamo
C. ambaye
D. ambalo
30. Upande wa dira ulioonyeshwa huitwa _____
A. kaskazini
B. mashariki
C. kusini
D. magharibi |
|---|---|--|---|---|---|---|--|---|---|---|



Soma taarifa ifuatayo na ujibu maswali 31-40

Anita alishikwa na kikohozi. Usiku wa siku hiyo alikohoa sana. Kesho yake mama yake alimpeleka hospitali. Daktari alimkagua na kumpa dawa iliyokuwa katika chupa. Daktari alimwambia Anita awe akitingiza chupa kabla ya kunywa dawa hiyo.

Baada ya siku mbili, Anita alikunywa dawa hiyo bila kutingiza chupa. Mara tu alipokumbuka masharti ya daktari alimuita dada yake. Alimwamuru dada yake amutingize kama chupa ya dawa.

Mama yao aliingia nyumbani humo na akawauliza ni kwa nini Anita alikuwa akitingizwa. Anita alimjibu mama yake ya kwamba ni kwa vile alisahau kutingiza chupa ya dawa, ndipo akaamua kutingizwa ili dawa ichanganyike tumboni.

Mama yake alimwonya asifanye hivyo tena, kwa sababu kusahau masharti ya daktari kunaweza kusababisha madhara kwa afya yake.

31. Mgonjwa alikuwa nani?
A. Daktari B. Mama
C. Anita D. Dada
32. Alipokuwa akitoka shuleni alipatwa na nini?
A. Kizunguzungu B. Kukohoa
C. Kusokotwa na nini D. Kuumwa na kichwa
33. Daktari alimfanyia nini kabla ya kumpa dawa?
A. Alimdunga sindano B. Alimkagua
C. Alimtibu D. Alimtazama
34. Kwa nini Anita alitingizwa na dadake?
A. Alisahau kutingiza dawa
B. Alisahau kunywa dawa
C. Alikuwa anacheza
D. Alikuwa anakohoa sana
35. Anita alisahau kutingiza dawa baada ya siku ngapi?
A. Mbili B. Moja C. Tatu D. Nne
36. Mtu aliyesahau masharti ya daktari anaweza kufanya nini?
A. Kufariki
B. Kudhuru wengine
C. Kuleta maangamizi kwa jamii
D. Kudhuru afya yake zaidi
37. Ni nani aliyekuwa akimtingiza Anita?
A. Babake B. Dada yake
C. Mama yake D. Kaka yake
38. Alipoanza kukohoa msichana alikuwa akitoka wapi?
A. Hospitalini B. Hatujaambiwa
C. Kanisani D. Skulini
39. Anita hakufuata _____ ya daktari.
A. mapendekezo B. maoni
C. barua D. maagizo
40. Ni kweli kwamba dawa ilichanganyikana tumboni?
A. Ndio B. Labda
C. La hasha D. Hatujui

Soma habari ifuatayo kisha ujibu maswali 41-50


Hapo zamani za kale katika kijiji cha Malipo, paliishi mzee aliyetwa Hussein.

Mzee huyu alikuwa akifuma na kusuka vikapu vya mkeka. Watu wengi katika kijiji chao walishangaa sana kumuona mzee Hussein akiishi maisha ya upweke. Mzee hakutaka kuoa.

Hakuna mtu hata mmoja aliye wahi kumwona mzee Hussein akipika au akila chakula. Kila aliyekwenda kumsalimia kwake nyumbani, iwe mchana au usiku alimkuta mzee Hussein akisuka mkeka.

Mzee Hussein alikuwa akipika wakati wa usiku mkuu. Anapokuwa akila alafu mtu abishe hodi, yeye kwanza huficha chakula mvunguni mwa kitanda kabla ya kujibu karibu. Mgeni akiingia atakaribishwa vizuri na wataongea kwa muda wa kutosha. Mara tu mgeni aondokapo, mzee hutoa chakula chake na kuendelea kula.

41. Je, mzee huyu alikuwa na familia?
A. Ndiyo B. La
C. Labda D. Sijui
42. Mzee Hussein alikuwa na tabia gani?
A. Utengano B. Urafiki
C. Uchoyo D. Ukirimu
43. Mtu alipobisha kwa mzee Hussein wakati wa chakula alifanya nini?
A. Alimkaribisha wakala pamoja
B. Alipika chakula na kupakulia wageni
C. Alimwambia asubiri
D. Alificha chakula mvunguni mwa kitanda
44. Mzee Hussein alikuwa akiishi katika kijiji cha _____
A. Majasho B. Matopeni
C. Malipo D. Matangazo
45. Kazi ya mzee Hussein ilikuwa nini?
A. Kupika chakula B. Kusuka mkeka
C. Kuishi upweke D. Kulisha mifugo
46. Kwa nini wanakijiji hawakuwahi kupata Hussein akila?
A. Alikuwa na kazi nyingi
B. Hakupenda chakula
C. Hakuwa akipika wakati wa kawaida
D. Hakuwahi kupika
47. Mtu ambaye husuka mkeka anaweza kuitwa _____
A. mtengenezaji B. msusi
C. mwokaji D. mtekaji
48. Neno lingine lenye maana sawa na kijiji ni _____
A. kitongoji B. mtaa
C. eneo D. kambi
49. Mzee Hussein alikuwa akiishi _____
A. na wenzake B. peke yake
C. na wanawe D. na mke wake
50. Kazi ya kusuka ni ya _____
A. ofisi B. mikono
C. michezo D. kupiga ramli



SCHOOL BASED EVALUATION TEST

ENGLISH: COMPOSITION

4


STANDARD 4
TERM II

Time: 40 Minutes

Your Name	
Name of your School	

Write an interesting composition about:-

MY ENGLISH TEACHER



SCHOOL BASED
EVALUATION TEST
STANDARD FOUR

4

TERM II 004
Time : 1 hr 45min

ENGLISH LANGUAGE

It was 1 dark as I 2 home. I would 3 wanted to run 4 couldn't 5 clearly. I saw dark forms 6 towards me. "Are 7 trees or animals?" I 8 myself. I thought I saw 9 that looked like 10 human being I stood 11 one spot wondering 12 to do. I don't know how long I 13 there. At last, I told 14 I had to 15 brave for I had to get home.

- | | | | |
|------------|-----------|-----------|-----------|
| A. | B. | C. | D. |
| 1. but | so | too | very |
| 2. wake | walks | walk | walked |
| 3. hard | has | have | had |
| 4. from | but | very | for |
| 5. see | saw | seen | sow |
| 6. coming | comes | came | come |
| 7. that | these | those | this |
| 8. tell | asks | asked | ask |
| 9. someone | a thing | some | something |
| 10. on | an | at | a |
| 11. into | onto | on | in |
| 12. whose | what | when | who |
| 13. stood | stand | walks | stands |
| 14. myself | ourself | mine | them |
| 15. this | be | is | was |

Choose the best answer for numbers 16-20

16. This is _____ orange.
 A. an B. a C. those D. these
17. _____ books are yours.
 A. This B. These C. That D. Who
18. Mary lost _____ toy in the bush.
 A. his B. hers C. her D. them
19. James wants _____ bicycle repaired.
 A. her B. himself C. yours D. his
20. The woman bought _____ of bread.
 A. a loaf B. a leave
 C. a block D. a loaf

Change the following sentences into singular

21. These are cities.
 A. these is a city B. This is a city
 C. This is cities D. This are a city
22. Our dogs are big.
 A. My dogs is bigs B. My dog are big
 C. My dog is big D. Your dog is big

Use the correct tense to answer the following questions

23. She _____ you in washing dishes.
 A. helping B. have helped
 C. could helping D. helped
24. Rhoda _____ your book tomorrow.
 A. is brought B. will bring
 C. have bring D. bringing
25. The fishermen _____ plenty of fish.
 A. caught B. catching
 C. catch D. court

Choose the correct answer

26. This is the teacher _____ teaches us English.
 A. which B. whom C. who D. is
27. That is the bag _____ got lost.
 A. who B. is C. whom D. which
- Write the opposite of the underlined word**
28. My brother bought a ball.
 A. sister B. father C. uncle D. cousin
29. She was the last one to come to school.

- A. middle
- C. second
- B. first
- D. third

30. The **king** is here today.

- A. emperor
- C. queen
- B. princess
- D. prince

Read the following passage and answer questions 31-40

Nunga formed a habit of stealing things from supermarkets. One day he picked socks and handkerchiefs at Kwetu supermarket, removed all the security tags and pushed them into his shirt pockets. He then tucked the clothes into his shorts pockets. As he walked out, the alarm at the security door went off. Security guards arrested Nunga and found the clothes and tags in his pockets!

31. What is the name of the character in the story?

- A. Nunga
- C. John
- B. Kwetu
- D. Brian

32. Where did he steal from?

- A. Kwetu
- C. Kwetu supermarket
- B. Supermarket
- D. In school

33. What did he steal?

- A. Sweets
- C. Handkerchief
- B. Chocolate
- D. Soap

34. What did the boy do with the item stolen? He

- A. ran away with it
- B. gave it to his friend
- C. gave it to the police
- D. removed the security tags

35. Where did he hide the item stolen?

- A. In the socks
- C. In the short pockets
- B. In the shoes
- D. In the shirt pockets

36. What detected Nunga as a thief?

- A. Security alarms
- C. The teacher
- B. The cashier
- D. The class prefect

37. Where was the siren placed?

- A. At the door
- C. On the floor
- B. In the item stolen
- D. At the roof

38. Where did Nunga tuck his shirt? Into the _____

- A. shorts pockets
- C. trousers pockets
- B. shirts pockets
- D. a jacket pocket

39. Which other item did the boy steal?

- A. Socks
- C. An ink
- B. A pen
- D. Bread

40. What should one not do when in a supermarket?

- A. Look at things
- C. Pay for what you pick
- B. Steal items
- D. Take things and pay

Read the passage below and answer questions 41-50

A language group refers to people who speak related languages. The people of Eastern province mainly belong to the Bantu language group. The languages in the Bantu language group are closely related and their speakers understand each other although their languages have slight differences. Examples of Bantu language groups in our province include; the Ameru, the Akamba, Ambeere and the Aembu. We also have the Nilotes and the Cushites language groups. In a language group we have communities. A community is a group of people who speak the same language.

41. What is a language group?

- A. People who speak related language
- B. People learning how to speak
- C. People who knows not how to speak
- D. People who are related

42. Which people are talked about in the passage?

- People _____
- A. of Western province
- C. of Coastal province
- B. of Eastern province
- D. of Nyanza province

43. The group of people referred in the passage are

- A. Bantu
- C. Nilotes
- B. Cushites
- D. Semites

44. The common thing with the language group mentioned is _____

- A. they live together
- C. they learn together
- B. they eat together
- D. they understand each other

45. Which language group is not mentioned in the passage?

- A. Semites
- C. Nilotes
- B. Bantu
- D. Cushites

46. How many language groups are mentioned in the passage?

- A. Two
- B. One
- C. Three
- D. Four

47. What do we have in a language group?

- A. Communities
- C. Clans
- B. Villages
- D. Homes

48. _____ is a group of people who speak the same language.


- A. A clan
- C. Village
- B. Community
- D. An area

49. 'We' as underlined in the passage is a _____

- A. pronoun
- C. verb
- B. noun
- D. adverb

50. The best title for this passage is _____

- A. Language group
- C. Language
- B. Groups
- D. Provinces



SCHOOL BASED

EVALUATION TEST STANDARD FOUR

4

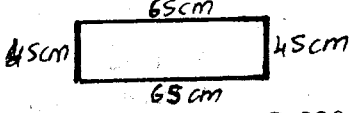
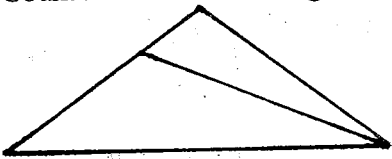
TERM II 004

Time : 2hrs

MATHEMATICS

- Write 23050 in words.
A. Twenty three thousand and fifty
B. Two thousand three hundred and fifty
C. Two three thousand and fifty
D. Twenty three thousand and five
- Fill in the box.
 $\square \times 4 = 60$
A. 20 B. 15 C. 56 D. 64
- What is the total value of digit 4 in 14382?
A. Tens B. Thousands
C. 400 D. 4000
- Which of the following numbers is divisible by 10?
A. 30 B. 25 C. 104 D. 98
- Work out:
$$\begin{array}{r} 325 \\ + 878 \\ \hline \end{array}$$

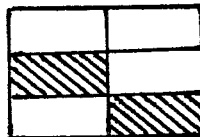
A. 1203 B. 1193 C. 1293 D. 1103
- Which of the following numbers is even?
A. 189 B. 98 C. 33 D. 107
- In an exam Wangechi scored 83 in Maths, 46 in English, 72 in Kiswahili. How many marks did she get in the three subjects?
A. 201 B. 101 C. 150 D. 200
- Work out:
$$\begin{array}{r} 4284 \\ - 1490 \\ \hline \end{array}$$

A. 3212 B. 5780 C. 2788 D. 3788
- What is the place value of the digit 2 in 5230?
A. Hundreds B. 200
C. Tens D. Thousands
- What is the distance round the figure?

A. 130cm B. 175cm C. 220cm D. 260cm
- What is $\frac{1}{7}$ of 56?
A. 7 B. 8 C. 49 D. 63
- Work out: $\frac{4}{5} - \frac{2}{5} =$
A. $\frac{2}{5}$ B. $\frac{2}{10}$ C. $\frac{6}{10}$ D. $\frac{2}{5}$
- Count the number of triangles in the figure below.

A. 2
B. 4
C. 1
D. 3


- Multiply:
$$\begin{array}{r} 54 \\ \times 2 \\ \hline \end{array}$$

A. 56 B. 98 C. 108 D. 52

- What fraction of the figure below is shaded?



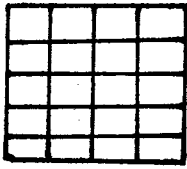
- A. $\frac{2}{6}$
B. $\frac{4}{6}$
C. $\frac{2}{3}$
D. $\frac{1}{6}$

- Write $\frac{15}{100}$ as a decimal.
A. 0.015 B. 1.5
C. 0.0015 D. 0.15
- Which of the following numbers is odd?
A. 46 B. 327 C. 1020 D. 960
- Which is the next number in the pattern below?
3, 7, 11, 15, _____
A. 16 B. 19 C. 26 D. 20
- Write $\frac{1}{3}$ in words.
A. Third B. Thirteen
C. Thirty one D. One three
- Work out: $4 \overline{) 64}$
A. 16 B. 60 C. 68 D. 256
- Which of the fractions below is less than the others?
A. $\frac{1}{2}$ B. $\frac{1}{6}$ C. $\frac{1}{12}$ D. $\frac{1}{10}$
- Which of the fractions below is equal to one whole?
A. $\frac{3}{6}$ B. $\frac{9}{9}$ C. $\frac{8}{10}$ D. $\frac{5}{7}$
- Measure the line below in centimetres.


- Work out: $42.83 - 20.41 =$
A. 22.42 B. 20.42
C. 62.42 D. 63.24
- Work out:
$$\begin{array}{r} \text{M} \\ 30 \\ - 12 \\ \hline \end{array}$$

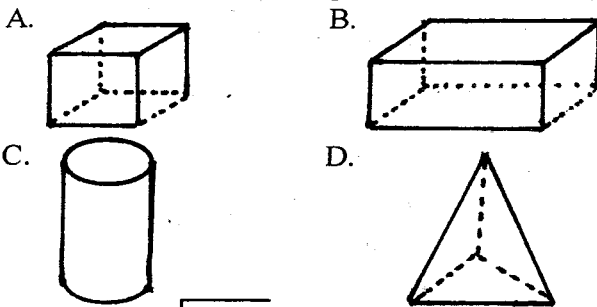
A. 22m 28cm B. 22m 12cm
C. 18m 28cm D. 18m 12cm

26. How many small squares are there in the figure below?



- A. 4
B. 40
C. 20
D. 16

27. Which of the following shapes is a cube?



28. Work out: $33 \overline{)864}$

- A. 26 rem 6 B. 2
C. 25m rem 39 D. 26 rem 8

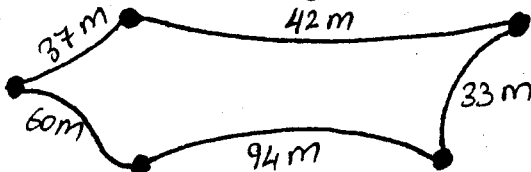
29. Work out: $0.8 + 0.1 + 0.4 =$

- A. 0.94 B. 0.814 C. 0.13 D. 1.3

30. Write three fifths in figures.

- A. 35 B. $\frac{5}{3}$ C. $\frac{3}{5}$ D. $1\frac{3}{5}$

31. Kamau went round the figure below.



What distance did he cover?

- A. 266m B. 233m C. 172m D. 206m

32. Fill in the blanks. $8 \times \square = 96$

- A. 12 B. 88 C. 14 D. 104

33. Complete the following statement.

$$\frac{2}{7} = \frac{?}{14}$$

- A. 3 B. 4 C. 8 D. 12

34. Which of the following numbers is divisible by 5?

- A. 53 B. 605 C. 128 D. 558

35. Which of the following digits is the numerator in the fraction $\frac{7}{8}$?

- A. 7 B. 8 C. both D. none

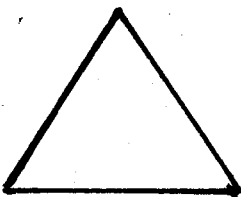
36. What is $\frac{1}{10}$ of 40?

- A. 4 B. 400 C. 30 D. 50

37. Work out: $\frac{3}{10} + \frac{1}{10} + \frac{2}{10}$

- A. $\frac{6}{30}$ B. $\frac{6}{10}$ C. $\frac{6}{1000}$ D. $\frac{5}{10}$

38. Name the shape shown below.



- A. oval
B. rectangle
C. packet
D. triangle

39. Multiply $5 \times \frac{3}{20} =$

- A. $\frac{53}{20}$ B. $\frac{15}{20}$ C. $\frac{35}{20}$ D. $\frac{5}{60}$

40. Write 0.7 as a fraction.

- A. $\frac{7}{10}$ B. $\frac{7}{100}$ C. $\frac{1}{7}$ D. $\frac{7}{15}$

41. Write three point one four.

- A. 3.41 B. 13.41 C. 3.14 D. 13.14

42. Work out: $0.7 - \square = 0.4$

- A. 1.1 B. 0.3 C. 1.3 D. 0.1

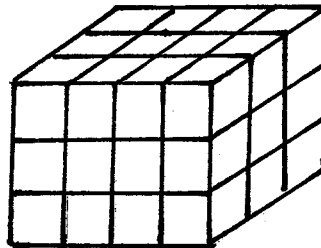
43. Add:

Shs	cts
15	40
+ 7	70
<hr/>	

A. sh 22 110cts B. sh 22 10 cts

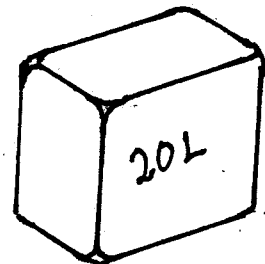
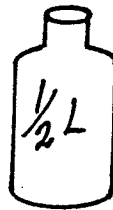
C. sh 33 10 cts D. sh 23 10 cts

44. How many small cubes have been used to make the stack below?



- A. 36
B. 60
C. 18
D. 24

45. How many small bottles will fill the debe?



- A. 10 B. 40 C. 22 D. 18

46. 8 quarter-kilograms will make _____ kilograms.

- A. 12 B. $3\frac{1}{4}$ C. 2 D. 4

47. Kanyeki bought the following:-

- an exercise book sh 20
- a pencil sh 15
- a rubber sh 3

How much did he pay?

- A. sh 38 B. sh 35
C. sh 18 D. sh 48

48. Std four class has 34 girls and 28 boys. How many pupils are in the class?


- A. 66 B. 52 C. 62 D. 72

49. A trader has 604 packets. He sold 179. How many baskets remained?

- A. 425 B. 525 C. 783 D. 773

50. What is the next multiple of 6 after 24?

- A. 25 B. 26 C. 30 D. 36



SCHOOL BASED

EVALUATION TEST

MARKING SCHEME

(4)

STANDARD FOUR
TERM II

ENGLISH		MATHS		KISWAHILI		SCIENCE		SOCIAL STUDIES & CRE		
1. D	31. A	1. A	31. A	1. B	31. C	1. B	31. C	1. A	31. A	61. C
2. D	32. C	2. B	32. A	2. C	32. B	2. A	32. C	2. C	32. C	62. D
3. C	33. C	3. D	33. B	3. C	33. B	3. D	33. C	3. D	33. A	63. B
4. B	34. D	4. A	34. B	4. B	34. A	4. A	34. A	4. B	34. D	64. C
5. A	35. D	5. A	35. A	5. C	35. A	5. D	35. B	5. C	35. A	65. A
6. A	36. A	6. B	36. A	6. A	36. D	6. D	36. B	6. B	36. C	66. D
7. B	37. A	7. A	37. B	7. B	37. B	7. A	37. B	7. D	37. A	67. A
8. C	38. A	8. C	38. D	8. A	38. B	8. D	38. C	8. D	38. B	68. B
9. D	39. A	9. B	39. B	9. B	39. D	9. C	39. B	9. D	39. A	69. B
10. D	40. A	10. C	40. A	10. A	40. C	10. A	40. A	10. D	40. C	70. C
11. C	41. A	11. B	41. C	11. B	41. B	11. B	41. C	11. C	41. B	71. D
12. B	42. B	12. D	42. B	12. B	42. C	12. D	42. D	12. A	42. B	72. A
13. A	43. A	13. D	43. D	13. B	43. D	13. C	43. D	13. C	43. A	73. B
14. A	44. D	14. C	44. A	14. C	44. C	14. D	44. C	14. A	44. B	74. A
15. B	45. A	15. A	45. B	15. C	45. B	15. A	45. B	15. D	45. A	75. B
16. A	46. C	16. D	46. C	16. C	46. C	16. B	46. C	16. B	46. C	76. D
17. B	47. A	17. B	47. A	17. D	47. B	17. C	47. D	17. D	47. B	77. B
18. C	48. B	18. B	48. C	18. D	48. A	18. B	48. D	18. C	48. B	78. A
19. D	49. A	19. A	49. A	19. D	49. B	19. C	49. B	19. D	49. B	79. D
20. A	50. A	20. A	50. C	20. B	50. B	20. D	50. C	20. C	50. A	80. D
21. B		21. C		21. C		21. B		21. D	51. D	81. D
22. C		22. B		22. B		22. A		22. D	52. B	82. A
23. D		23. B		23. B		23. A		23. D	53. C	83. B
24. B		24. A		24. A		24. A		24. C	54. A	84. C
25. A		25. D		25. A		25. B		25. C	55. D	85. A
26. C		26. C		26. B		26. D		26. C	56. A	86. D
27. D		27. A		27. C		27. D		27. A	57. C	87. B
28. A		28. A		28. B		28. C		28. A	58. D	88. A
29. B		29. D		29. A		29. C		29. D	59. C	89. D
30. C		30. C		30. B		30. D		30. C	60. D	90. C



COMPOSITION MARKING SCHEME

MARKING CRITERIA

1. The composition will be assessed according to the following guidelines:

- The maximum mark will be 40 and the minimum mark 01

- Does the script show that the candidate can communicate accurately fluently and imaginatively in English?

Accuracy

(8 marks)

(a) Correct tenses and agreement of verbs (4 marks)

(b) Accurate use of vocabulary (4 marks)

(16) (c) Following a sequence (4 marks)

(d) Correct punctuation

(8 marks)

(4 marks)

(8 marks)

Fluency

(8 marks)

(a) Words in the correct order (4 marks)

(b) Sentence connected and paragraphs (4 marks)

(b) Correct spelling (4 marks)

(d) Ideas developed in logical sequence (4 marks)

Imagination


(8 marks)

(a) Unusual but appropriate use of words and phrases

(4 marks)

(b) Variety of structure (4 marks)

NB: Please, teachers are requested to scrutinize this marking scheme before use. It is worth.



SCHOOL BASED

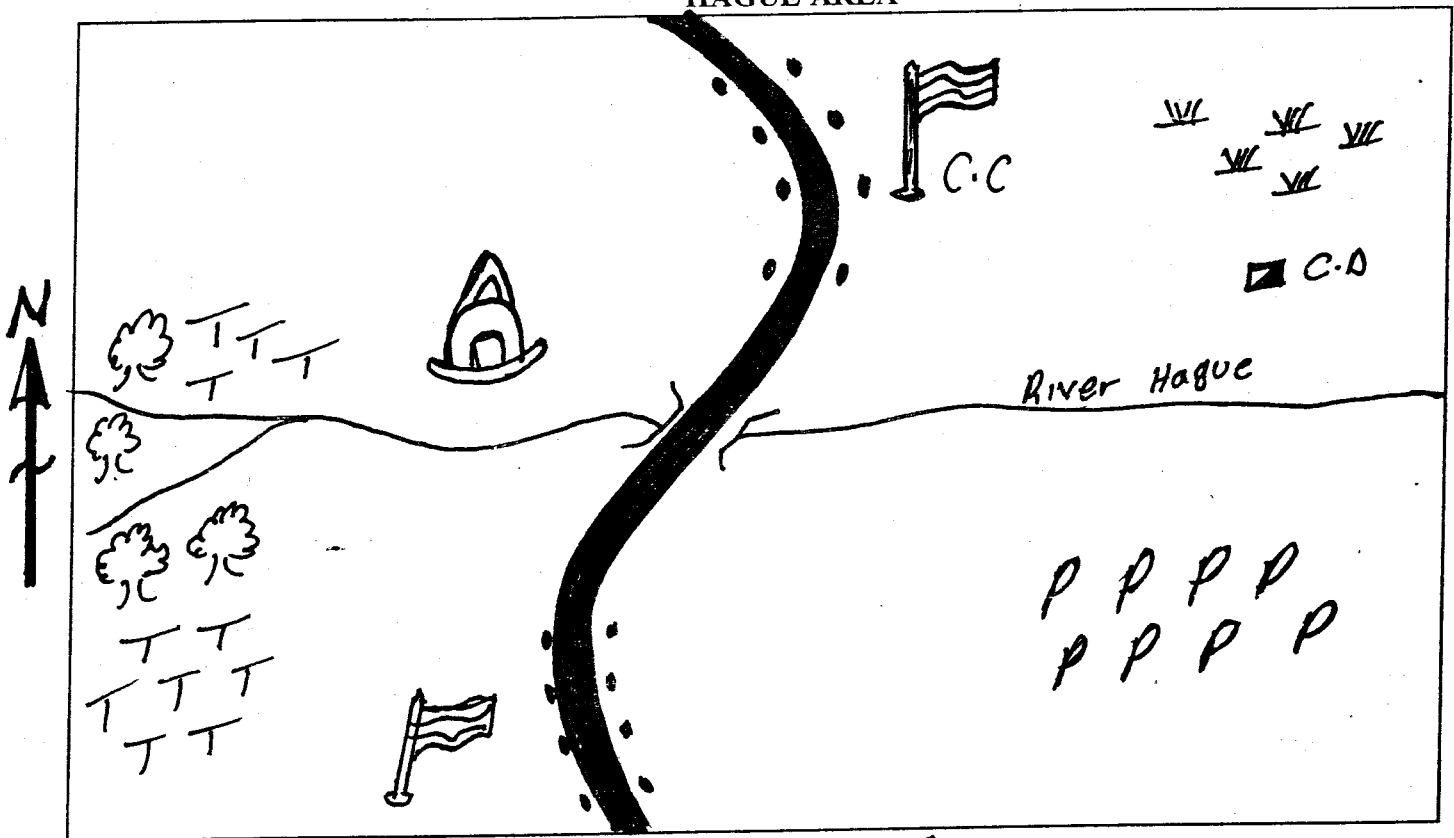
EVALUATION TEST
STANDARD FOUR

4

TERM II 004
Time : 2 hr 15min

SOCIAL STUDIES

HAGUE AREA



KEY: Forest TT = Tea Tarmac Mosque Houses
 CC = Chief's Camp CD = Cattle Dip PP = Potatoes Bridge


Use the map of Hague area to answer questions

1-7

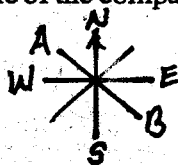
- Hague area has how many locations?
A. 2 B. 4 C. 3 D. 1
- River Hague is flowing from _____ to _____
A. North to South B. West to North
C. East to West D. West to East
- Which cash crop is grown in Hague area?
A. Potatoes B. Coffee
C. Maize D. Tea
- Most houses in Hague area are constructed near the
A. school B. road
C. river D. chief's camp
- The people of Hague area are mainly _____
A. Pagans B. Hindus
C. Muslims D. Christians

- The grass found in Hague area is used to feed ____
A. birds B. livestock
C. pupils D. worshippers
- Which subsistence crop is grown in Hague area?
A. Maize B. Beans
C. Rice D. Potatoes
- The head of a province is called _____
A. District commissioner
B. District officer
C. Chief
D. Provincial commissioner
- Today we no longer have districts. They are called
A. locations B. divisions
C. senate D. counties
- Which language group is not mostly found in Kenya?

11. Which of the following human rights are provided free to children in Kenya?
- A. Shelter
B. Balanced diet
C. Education
D. Clean water
12. _____ is said to be a system of government in which people elect their leaders freely.
- A. Democracy
B. Rule
C. Moral laws
D. Church
13. The weather instrument shown below is used to measure _____



- A. milk
B. temperature
C. rainfall
D. water
14. The weather instrument above is called _____
- A. rain gauge
B. speed of wind
C. rainfall
D. barometer
15. The Deputy President of Kenya is _____
- A. Raila
B. Kalonzo
C. Uhuru
D. Ruto
16. Three of the following are early forms of communication. Which one is not?
- A. Wailing
B. Sending letters
C. Use of horns
D. Use of drums
17. The needle of the compass always points _____



- A. South
B. East
C. West
D. North
18. The points marked A and B are respectively called
- A. NE and SW
B. SW and NW
C. NW and SE
D. W and E
19. Three of the following are items used in traditional trade except _____
- A. cattle bells
B. sandals
C. pots
D. basin
20. Which one of the following is not an element of weather?
- A. Rain
B. Wind
C. Water
D. Sunshine
21. The below road sign means _____ ahead.



- A. hill
B. school
C. zebra crossing
D. bumps
22. Which of the following things is not needed in a school?
- A. Playground
B. Desks
C. Classrooms
D. Wardrobe
23. The following are physical features. Which one is not?
- A. Lake
B. Mountain
C. Hill
D. Church
24. The most common tree in a scrub vegetation is _____
- A. pine
B. cypress
C. acacia
D. jacaranda
25. Which one of the following insects is not harmful?
- A. Bees
B. Ant
C. Grasshopper
D. Wasp
26. Goods which are brought to our country from other countries are called _____
- A. imports
B. exports
C. customs
D. trade goods
27. The diagram shows the weather is _____



- A. forested
B. windy
C. calm
D. sunny
28. What do we call a group of people living in the same place?
- A. Community
B. Clan
C. Location
D. Church
29. "Haki iwe ngao" The words are found in the _____ stanza of the National Anthem.
- A. 4th
B. 3rd
C. 2nd
D. 1st
30. The capital city of our country is called _____
- A. Kisumu
B. Mombasa
C. Nairobi
D. Eldoret
31. The two types of forests are man-made and _____
- A. natural
B. big
C. shrubs
D. bushland
32. The rearing of chicken, turkeys, geese and duck is called _____
- A. zero grazing
B. dairy farming
C. poultry farming
D. cash crop farming
33. The four main points of a compass are called _____
- A. cardinal points
B. compass
C. directions
D. compass points
34. People who walk along the road are called _____
- A. drivers
B. passengers
C. motorists
D. pedestrians
35. Which one was not taught to young boys and girls in traditional societies?

C.R.E.

61. Who among the following helped Jesus to carry the cross?
A. Judas B. Joseph Arimathea
C. Simon of Cyrene D. Peter
62. A good leader should not be _____
A. kind B. honest
C. humble D. jealous
63. Jesus is our saviour because he saves us from ____
A. death B. sin
C. war D. fire
64. Jesus was baptised in river _____
A. Nazareth B. Nile
C. Jordan D. Bethlehem
65. Ananias and _____ cheated the Holy spirit.
A. Sapphira B. Hannah
C. Martha D. Mary
66. Jesus was crucified on a _____
A. tree B. pole
C. plus D. cross
67. When do we celebrate death and resurrection of Jesus christ? During _____
A. Easter B. Christmas
C. Madaraka D. New year
68. A person who refuses to share what he or she has with others is said to be _____
A. immoral B. selfish
C. greedy D. peaceful
69. Jesus prayed to God until he sweat blood in the garden of _____
A. Jordan B. Gethsemane
C. Eden D. Nazareth
70. The devil tempted Jesus _____ times.
A. two B. fourty
C. three D. twelve
71. We celebrate the birth of Jesus on which month?
A. April B. January
C. September D. December
72. Which book do christians use as their guide?
A. Bible B. Quran
C. One in christ D. Dictionary
73. Who led the Israelites to Canaan?
A. Jesus B. Moses
C. Pharaoh D. Noah
74. Lazarus stayed dead for how many days?
A. Four B. Three
C. One D. Two
75. Christians pray in _____

- A. Mosques B. Churches
C. Synagogues D. Caves
76. We should _____ when we are faced by problems.
A. cry B. fight
C. play D. pray
77. Jesus died and He _____ from death.
A. was baptised B. resurrected
C. was born D. paid
78. Animals went in two by two in the ____ ark.
A. Noah's B. Moses
C. Canaan D. God's
79. Moses was told by God to remove his shoes because
A. they were muddy
B. they could get burnt
C. they were worthless
D. he was stepping on a Holy ground
80. Jesus calmed the _____
A. river B. lake
C. boat D. storm
81. Who among the following do not spread the gospel?
A. Pastor B. Priest
C. Nun D. Robber
82. God expects us to _____ of the environment.
A. take care B. destroy
C. leave D. keep
83. An orphan is child whose parents _____
A. have divorced B. have died
C. have gone abroad D. have separated
84. Our first parents were _____ and _____
A. Mary and Joseph B. Lazarus and Martha
C. Adam and Eve D. Ananias and Saphira
85. We should _____ sick people.
A. help B. hate
C. beat D. abuse
86. Maasai call their God _____
A. Mulungu B. Jesus
C. Mwathi D. Enkai
87. Jesus had _____ disciples.
A. 10 B. 12 C. 33 D. 5
88. Who among the following made the write choice?
A. Ruth B. Saphira
C. Cain D. Anania
89. Jesus changed water into _____
A. juice B. tea
C. milk D. wine
90. God provided a _____ to be sacrificed by Abraham instead of Isaac.
A. cow B. goat
C. ram D. camel