

MAKUENI COUNTY MOCKS

2014

**ENGLISH
SECTION B
COMPOSITION**

TIME: 40 MINUTES

STD 8

INDEX NUMBER.....

YOUR NAME

NAME OF YOUR SCHOOL

READ THESE INSTRUCTIONS CAREFULLY

- 1. IN THE SPACES PROVIDED ABOVE, WRITE YOUR FULL NAMES, INDEX NUMBER, YOUR SCHOOL NAME**
- 2. NOW OPEN THIS PAGE, READ THE HEADING OF THE COMPOSITION CAREFULLY AND WRITE YOUR COMPOSITION ON THE LINES PROVIDED.**

MAKUENI COUNTY MOCKS

2014

ENGLISH

STD 8

SECTION A
LANGUAGE

TIME 1HR 40 MIN

READ THESE INSTRUCTIONS CAREFULLY.

1. You have been given this booklet and a separate answer sheet. The question booklet contains 50 questions.
2. Do any necessary rough work in this booklet.
When you have chosen your answer, mark it on the Answer sheet, not in this question booklet.

HOW TO USE THE ANSWER SHEET

4. Use only an ordinary pencil.
5. Make sure that you have written on the answer sheet:
YOUR INDEX NUMBER
YOUR NAME
NAME OF YOUR SCHOOL
6. By drawing a dark line inside the correct numbered boxes mark your full Index Number (i.e. School Code Number and the three-figure Candidate's number) in the grid near the top of the answer sheet.
7. Do not make any marks outside the boxes.
8. Keep the sheets as clean as possible and do not fold it.
9. For each of the questions 1-50 four answers are given. The answers are lettered A, B, C and D. In each case only ONE of the four answers is correct. Choose the correct answer.
On the answer sheet the answer is to be shown by drawing a dark line inside the box in which the letter you have chosen is written.

Example

In the Question Booklet:

9. For question 9, choose the alternative that best completes the sentence
She passed her exams very well, _____ ?
A. is it B. did she C. didn't she D. isn't it

The correct answer is C.

On the answer sheet:

9. [A]. [B]. ~~[C]~~ [D].
In the set of boxes numbered 9, the box with the letter C printed in it is marked.
11. Your dark line **MUST** be within the box.
12. For each question **ONLY ONE** box is to be marked in each set of four boxes.

Turn over

Read the passage below. It contains blank spaces numbered 1 - 15. For each blank space, choose the best alternative from the choices given.

At first glance, Mary _____ 1 _____ tell that things were not as they should be. Something was definitely _____ 2 _____. When she left _____ 3 _____ morning, she had left her house under lock and _____ 4 _____ . _____ 5 _____ on her return, she noticed that the door was slightly _____ 6 _____ when she was at the gate. She quickly called her brother who had a spare key to check _____ 7 _____ he had been to her home. He said that he had not been there. She opened the gate, and then pushed the door open.

She was shocked beyond _____ 8 _____. The _____ 9 _____ that greeted her eyes was shocking. Her sitting room had been swept clean. "My goodness _____ 10 _____ who could _____ 11 _____ this to me?" She wondered aloud. The bedroom was no different _____ 12 _____ what she was wearing, there were no other clothes in her bedroom. _____ 13 _____ was there a bed in the room. Her heart _____ 14 _____ as she stood speechless. She covered her face _____ 15 _____ her hands and sobbed with pain.

- | | A | B | C | D |
|-----|-----------|-------------|----------------|----------|
| 1. | would | must | could | might |
| 2. | right | amiss | eerie | weird |
| 3. | this | these | which | that |
| 4. | padlock | chain | door | key |
| 5. | However | In addition | Even | Also |
| 6. | closed | a jar | locked | shut |
| 7. | weather | whether | anywhere | aware |
| 8. | images | words | thoughts | feelings |
| 9. | site | sit | sited | sight |
| 10. | | ; | ! | , |
| 11. | have done | do | have been | done |
| 12. | Beside | Apart from | in addition to | Besides |
| 13. | Also | As well | Either | Neither |
| 14. | sunk | sink | sinking | sank |
| 15. | in | with | against | inside |

For questions 16 and 17 select the alternative that best fill the blank spaces in the sentence

16. Let us play another game, _____ ?
A. will we B. won't we
C. shan't we D. shall we

17. She is absent today, _____ ?
A. is she B. didn't she
C. isn't she D. did she

Choose the alternative that has the same meaning as the underlined words.

18. Kalonji took cover behind the tree
A. ran B. hid
C. climbed D. sat

19. I was surprised when the visitor made away with most of the groceries.
A. stole B. escaped
C. borrowed D. took

For questions 20 - 21 choose the alternative that best completes the sentence

20. I prefer tea _____
A. or coffee B. for coffee
C. to coffee D. than coffee

21. Wanjiru was _____ in the shade reading a storybook.
A. laid B. lain
C. lying D. lied

Complete the sentence with the correct words

22. He was a _____ man.
A. humble, African, tall
B. African, humble, tall
C. humble, tall, African
D. tall, African, humble

23. My son's birthday is _____ January.
A. on B. in
C. at D. of

24. It was not until the teacher punished him _____
A. when he learnt to respect her
B. because he learnt to respect her
C. so he learnt to respect her
D. that he learnt to respect her

25. In question 25, choose the best arrangement of the given sentence to make a sensible paragraph.

i) soon the bus left the station
ii) The struggle at the bus door was tough
iii) Five o'clock found me at the bus station
iv) I was lucky to have found a seat
A. iii, ii, iv, i B. iii, iv, ii, i
C. iii, i, ii, iv D. iii, iv, i, ii

Read the following passage and answer questions 26 to 38.

By the time my father left for Nairobi, I was attending Nakeel school. I was in standard eight in the same class with Kilunda my step brother. Kilunda was such a naughty and proud boy. He had been pampered. He liked using abusive language and he always provoked others to fighting even at school. Because of that behaviour, he was constantly punished by teachers. Sometimes they made him water the newly planted plants. Other times he would be ordered to run around the play ground while mooing, to indicate that he was as stupid as a cow. There were other times Kilunda absented himself from school. He would spend the day gambling with some boys who didn't go to school.

Kilunda was a very stupid boy in class. He usually scored zero mark in Mathematics. In terminal tests, he was always the last. One of his worst subjects was English. But he was the best pupil in sports. In running competitions, he would sprint like an antelope, leaving the whole school behind him. He ran in a very funny way, holding up like a lump and rolling very fast.

I think his mother hated me because I was a better pupil in class. In my class I was always between number three and five. Kilunda started hating me just as much as his mother did. He always obtained pleasure from insulting me and beating me on our way to school. There were times, too, when he would throw soil into my eyes and call me a mongoose. He would beat me up and warn me. "You little mongoose, dare you go and report this to the teacher then I'll kill you on our way home!"

One day Kilunda deliberately stepped on a wounded toe I was nursing. I hurt the toe while running in the field, looking after the livestock. God, I had never experienced such pain. In the evening, I reported him to his mother. When she asked him whether that was true, Kilunda cracked. "That is a pure lie by this thing people call Mwende." I am telling her the truth, mother," I said. Kilunda turned and looked at me, made faces at me and then screamed, "You thing, is it not you who provoked me?"

26. From the first paragraph we can tell that the children
- A. were in standard eight by the time their father left to Nairobi
 - B. joined standard eight when their father left for Nairobi
 - C. Were attending Nakeel school in standard six.
 - D. were in standard eight but in different schools
27. Which of the following best describes Kilunda
- A. bright and proud
 - B. polite and generous
 - C. rude and arrogant
 - D. funny and respectful
28. Which one of the following is not a way in which Kilunda was punished
- A. moo like a cow
 - B. watering newly planted trees
 - C. run round the play ground
 - D. gambling with other boys
29. The expression "sprint like an antelope" means
- A. slow speed
 - B. very quickly
 - C. very confidently
 - D. without being noticed
30. According to the passage it is correct to say that the writer
- A. was the best in his class
 - B. was the best pupil in sports

- C. in terminal tests, he was last
 - D. was hated by Kilunda
31. We can tell that Kilunda did not like the writer because he
- A. reported him to his mother
 - B. threw soil into her mouth
 - C. insulted and beat her
 - D. pampered her too much
32. What caused the wound at the writers toe
- A. attack by livestock
 - B. got hurt while running
 - C. attack from Kilunda
 - D. hit by a lump
33. How many people are mentioned in the passage by name?
- A. two
 - B. four
 - C. three
 - D. five
34. Which one of the following is closest in meaning to the word deliberately as used in the passage
- A. accidentally
 - B. willingly
 - C. usually
 - D. unfortunately
35. Which one of the following subjects did Kilunda perform poorly?
- A. Mathematics and Science
 - B. English and Kiswahili
 - C. Mathematics and English
 - D. English and Social Studies

36. It is correct to say that mother was
 A. loving B. caring
 C. considerate D. unkind
37. Who is the writer of the passage?
 A. Kilunda B. Mwendu
 C. Mother D. teacher

38. The most important lesson we learn from this passage is that
 A. it is good to be kind
 B. mistreating others is good
 C. you should hate our sisters
 D. fight back when provoked

Read the passage below and answer questions 39 - 50

Knowledge is power. One of the best ways of acquiring knowledge is reading. The more one reads the more knowledge one gains. Some people say that a person who can read has armed himself or herself with a shield against stupidity.

It is important for children to develop an interest in reading early in life. This is because reading is a lifelong activity, there simply is no end to it. Knowledge is being created everyday at an incredible speed.

At such, there is no point at which any one person can claim to have read all that there is to read. Apart from reading, for academic purposes as learners in school we also need to read for other purposes such as self-improvement and enjoyment. We may read about how to improve our relationships with the people around us. We may also read humorous stories as a way of relaxation. It is through reading that children learn basic things about life such as eating a balanced diet, morality and religious facts. Thus, there is a lot to be gained from books even when we are not reading for an examination. Reading also helps us to express ourselves and communicate well with other people.

It is often said that Kenyans do not read as much as they should. They are known to be aggressive on other field of life such as athletics and business. But how successful would an athlete be if he or she did not bother to read about strategies that can help him or her to excel in athletics? What business person would not want to read business articles that will help him or her to market his or her goods to achieve better results?

The truth is that to excel at what we are doing we must be inquisitive so that we can learn how to improve. In short, when we read we increase the likelihood of coming across information that will be useful to us. That information would be hidden from us completely if we did not know how to read.

Everybody should be involved in promoting the development of a reading culture in our country. The challenge, therefore, not only goes to teachers but also to parents, readers, and other members of the society.

They should ensure that children are exposed to different types of reading materials. These include simple textbooks, storybooks, magazines and newspapers. Pupils have responsibility to take an active role in becoming good readers. They should take up every opportunity to read whatever useful material is available for them. They should also read widely and not restrict themselves to one type of reading material such as storybooks.

39. According to the passage, knowledge is acquired through
 A. dancing
 B. weeping
 C. reading
 D. talking

40. The phrase "knowledge is power" as used in the passage means
 A. the more you know, the rich you become
 B. the more you learn, the more you know
 C. the more you learn, the powerful you are
 D. the more opportunities you have, the more you study

41. From the first paragraph, we conclude that anyone who does not read is
- A. fearful B. foolish
C. literate D. talking
42. Which one of the following is not a reading material
- A. newspaper B. radio
C. textbook D. magazine
43. Which one of the following statements is true according to the passage
- A. Kenyans are aggressive in business, athletics and reading
B. Kenyans have a well-developed reading culture
C. reading is good for self-improvement and enjoyment
D. reading is the only way to acquire knowledge.
44. The word inquisitive can be replaced by
- A. clever B. cautious
C. noisy D. curious
45. Who do you think should enhance the reading culture
- A. The government and its people
B. Either parents and teachers
C. Both the parents and teachers
D. All the parties concerned.
46. According to the last paragraph pupils have the responsibility to
- A. restrict themselves to one type of reading material
B. wait to become good readers
C. make every opportunity to read all types of useful material
D. Expose different types of reading materials
47. Which one of the following statements is true
- A. reading determines economic status
B. through reading children learn basic religious facts
C. reading helps to conceal foolishness
D. reading erodes moral values
48. We expose ourselves to a lot of reading so as to find out what is hidden in a book
- A. to be able to make achievements
B. to get more knowledge from books
C. to be able to upgrade our living standards
49. A reading culture can be developed by:
- A. exposing children to different types of reading materials
B. restricting children to one type of reading materials
C. reading humorous stories only
D. reading serious books
50. Which one of the following is the best title for the above passage
- A. The bookshop
B. Study Skills
C. The importance of reading
D. Acquisition of Knowledge.

MAKUENI COUNTY MOCKS

2014

DARASA LA NANE

**KISWAHILI
SEHEMU YA PILI
INSHA**

MUDA: DAKIKA 40

NAMBA YAKO YA MTHANI

JINA LAKO

JINA LA SHULE YAKO

MAAGIZO KWA MTAHINIWA

SOMA KWA MAKINI MAAGIZO YAFUATAYO

- 1. KWENYE NAFASI ZILIZOACHWA HAPO JUU ANDIKA NAMBA YAKO KAMILI YA MTHANI, JINA LAKO NA LA SHULE YAKO.**
- 2. SASA FUNGUA KARATASI HII, SOMA KICHWA CHA INSHA KWA MAKINI NA UANDIKE INSHA YAKO KWENYE NAFASI ULIOACHIWA.**

MAKUENI COUNTY MOCKS

2014

KISWAHILI

SEHEMU YA KWANZA

LUGHA

DARASA LA NANE

Muda Saa 1 dakika 40

**MAAGIZO KWA WATAHINIWA
SOMA KWA MAKINI MAAGIZO YAFUATAYO:**

1. Umepewa kijitabu hiki cha maswali na karatasi ya kujibia maswali. Kina maswali 50.
2. Ukisha chagua jibu lako lionyeshe katika **KARATASI YA MAJIBU** na wala sio katika hiki cha maswali
JENSI YA KUTUMIA KARATASI YA MAJIBU
3. Tumia penseli ya kawaida.
4. Hakikisha ya kwamba umeandika yafuatayo katika karatasi ya majibu.

**NAMBA YAKO YA MTHANI
JINA LAKO
JINA LA SHULE YAKO**

5. Kwa kuchora kistari katika visanduku vyenye namba zinazokuhusu, onyesha namba yako kamili ya mthani (yaani namba ya shule, na zile namba tatu za mtahiniwa) katika sehemu iliyitengwa mwanzo wa karatasi ya majibu.
6. Usitie alama zozote nje ya visanduku.
7. Iweke safi karatasi yako ya majibu na usiikunje
8. Kwa kila swali 1 - 50 umepewa majibu manne. Majibu hayo yameonyeshwa kwa herufi A, B, C, D, Nijibu MOJA tu kati ya hayo manne ambalo ni sahihi. Chagua jibu hilo.
9. Kwenye karatasi ya majibu, jibu sahihi lionyeshwe kwa kuchora kistari katika kisanduku chenye herufi uliyochagua kuwa ndilo jibu.

Mfano:

23 'Tunakimbiana' maana yake ni?

A. tunaogopana

B. tunahepana

C. tunasaidiana

D. tunachukiana

jibu sahihi ni B.

Katika karatasi ya majibu:

23. [A.] [B.] [C.] [D.]

10. Chora kistari chako vizuri. kiwe cheusi na kisijitokeze nje ya kisanduku
11. Kwa kila swali, chora kistari katika kisanduku kimoja tu kati ya visanduku vinne ulivyopewa.

Soma kifungu kifuatacho kisha uchague jibu sahihi kujaza nafasi za 1 - 15:-

Mwanzoni 1 mwezi wa Mei mwaka 2 mvua 3 4 zote
 ndhini. Madaraja yalisombwa, nyumba ziliangushwa 5 majumba kujaa maji yenye 6 ya
 taka ungedhani watu walikuwa 7 kwenye 8 ya ng'ombe. Nyumba zilinuka
9! Wapangaji mijini walihangaika wasijue pahali 10 kufanyia mapishi yao. Kila mahali
 palikuwa pameloa 11. Ama kwa 12, mvua ya 13 huwa na 14
 chungu nzima; ndiposa wahenga walisema 15.

A	B.	C.	D.
1. ya	katika	mwa	wa
2. huu	hii	hiyo	huo
3. ilitamalaki	ilitawanyika	ilitanda	ilitia fora
4. janibu	upande	mijini	maupande
5. miongoni mwa	fauka ya	hata pengine	seuze
6. rundo	mabunda	mafunda	mabiwi
7. wameguria	wameishi	wametoka	wanaishi
8. mabomba	makaazi	mazizi	malisho
9. pu	fe	nhh	mff
10. ya	pa	kwa	za
11. chepe chepe	chopi	chapachapa	lowalowa
12. yamkini	yumkini	sababu	yakini
13. mchoo	kifuku	mashika	mei
14. mathara	madhara	adhari	adhiri
15. hakuna mvua isiyokuwa na usubi	hakuna refu lisilokuwa na mwisho	penye urembo ndipo penye ulimbo	heri nusu ya shari kuliko shari kamili

Kuanzia swali la 16 - 30, jibu kulingana na maagizo

16. **Kanusha sentensi ifuatayo:**
Mgeni amewasili na kulakiwa kwa shangwe.
A. Mgeni hakuwasili na kulakiwa kwa shangwe
B. Mwenyeji ameondoka na kuagwa kwa shangwe
C. Mgeni hajawasili wala kulakiwa kwa shangwe
D. Mgeni hakuwasili wala kulakiwa kwa shangwe
17. Chagua sentensi iliyo katika kauli ya kutendewa
A. Ajuza amelimiwa shamba lake lote
B. Alininunulia shati jingine jeusi
D. Kasisi alituomba tuwe na mustakabali mwema
D. Mtoto alimlilia mzazi wake kwa njaa
18. Chagua sentensi iliyotumia kiwakilishi cha nafsi ya pili katika umoja
A. Nilimwona mlipokuwa mkicheza uwanjani
B. Nilikukumbuka nilipoambiwa jina lako
C. Wasingalituona wasingalisimama
D. Ukosefu wa maadili ulimpeleka pabaya
19. Bainisha sentensi iliyotumia wakati tegemezi hali iliyopita
A. Mgeni anakuja kukutembelea
B. Ningalikuwa mkwasi ningaliwatilia upondo maskini
C. Ukila utashiba
D. Mayai yangeanguka yangevunjika
20. **Chagua usemi wa taarifa wa sentensi hii**
"Baba yangu ataenda ughaibuni kesho," mtoto alisema
A. Mtoto alisema kwamba baba yangu angeenda ughaibuni kesho
B. Mtoto alisema kwamba baba yake angeenda ughaibuni kesho
C. Mtoto alisema kuwa baba yake angeenda ughaibuni siku iliyofuatia
D. Mtoto alisema kuwa baba yake ataenda ughaibuni siku iliyopita
21. Chagua orodha yenye viingizi pekee
A. tititi, bwebwebwe, fofofu, kikiki
B. karibu na, mkabala wa, ukingoni mwa, mbele ya
C. Ebo! shabash! huree! pukachaka
D. seuze, sana, do!, ijapokuwa
22. Chagua sentensi yenye 'na' ya hali
A. Bw. Mkwasi ana magari tele
B. Bi. Bahati ana furaha kwa kujishindia shilingi laki mbili
C. Chakula hiki kilipikwa na mpishi hodari
D. Nguo hii ina rangi ya binti mrembo
23. Mtoto alisokotwa na tumbo kwa kulila tunda _____
A. mbichi
B. labichi
C. bichi
D. libichi
24. Maana ya semi 'kuwa waya' ni _____
A. kukonda sana
B. kuishiwa na pesa
C. kuwa mgumu sana
D. kuelewa mambo kwa haraka
25. Sehemu ya ardhi iliyolimwa tayari kwa upanzi ni
A. weu
B. kitalu
C. matuta
D. sesa
26. Chagua orodha iliyoambatanisha kiumbe cha kiumbe na cha kike sawasawa?
A. Jimbi - Tembe
B. Pora - Tembe
C. Fahali - Mori
D. Pora - Koo
27. Ni sentensi ipi imetumia shada kati ya zifuatazo?
A. Wanafunzi walitulia tuli wakiungojea mtihani
B. Chakula hiki ni sumu kwa mtoto mchanga
C. Mgonjwa huyu amelemewa na maradhi hayo sana, amekuwa si hayati si mamati
D. Mtoto wa jirani yangu amekuwa sikio la kufa ambalo halisikii dawa

28. Watu ambao ni _____ hawaonyeshi _____
kwa taifa lao.
- A. ufisadi, uzalendo B. mafisadi, uzalendo
C. wafisadi, uzalendo D. fisadi, uzalendo

29. Kamilisha kitendawili: Hawa wanaingia hawa
wanatoka.
- A. siafu B. nyuki
C. pumzi D. wasafiri

30. Kiungo cha mwili kinachosafisha damu huitwa _____
- A. uso B. moyo
C. kongosho D. ini

Soma kifungu kifuatacho, kisha ujibu maswali kutoka 31- 40:-

Maisha ya binadamu huanza akiwa tumboni mwa mama yake. Hukua kutoka utotoni hadi akafikia uzeeni na hapo ndipo mapenzi ya Mungu hutimizwa.

Wakristo huamini kuwa mtu akifa, kiwiliwili chake hubaki hapa hapa duniani. Lakini roho yake hutoka na kurudi kwa Muumba. Kweli duniani tuko matembezini.

Waumini wengine huamini kuwa roho ya mtu akifa huenda kuzimu na kukaa huko mpaka siku ya kiamama ambapo Mungu ataamua ziende motoni au paradiso.

Kulingana na mila na utamaduni katika makabila ya kiafrika, roho ya mtu aliyekufa huwa haiendi mbali. Waafrika wanaamini kuwa roho hii hukaa katika maeneo ya jamii na huweza kuwatokea hasa wazee na kuwapa mashauri au maonyo.

Katika hali hii, mtu huishi kama pepo. Hadithi za watu waliokuwa wagonjwa zaidi na "kufa", lakini baadaye "kufufuka" zaeleza kuwa mtu anapokufa humwona nduli aliyetumwa ili kuja kumchukua. Katika safari hii, viumbe hivi huvuka bonde, milima na mito na kufika kwa wakuu wake. Izraili huyu hukaripiwa na kuulizwa kwa nini ameleta mtu ambaye hakutumwa na kuamrisha kumrudisha. Hapo ndipo mtu hupata nafuu na kusimuliwa kuwa "amefufuka".

Jamii ya wahindi huona maisha kama dira. Mtu aliyekufa huweza kuzaliwa tena katika umbo tofauti kutegemea matendo vake alipokuwa hai. Hivyo watu wema huweza kuzaliwa kama watu, bali mtu muwi huzaliwa kama mnyama, aweza kuwa punda, paka, mbwa na kadhalika.

Wazo la waliokufa kuzaliwa upya limo katika waafrika pia. Mtu aliyekufa, hasa akiwa mzee huweza kuzaliwa upva kupitia vizazi vake. Sisemi mtoto atafanana na marehemu kama reale kwa ya pili. La! Lakini vitendo, sura, sauti na kadhalika zaweza kuthibitika kuwa zafanana na marehemu.

Ni hayana kuwa viumbe wote wenye uhai wana roho. Lakini swali muhimu kwetu ni hili. Je, roho za binadamu ni sawa na roho za viumbe wengine?

31. Kulingana na taarifa hii, ni kweli kusema kuwa _____
- A. waumini wote huamini kuwa roho ya mtu akifa huenda kuzimu
B. maisha ya binadamu huanza punde anapozaliwa
C. hukumu ya Mungu hutolewa pale binadamu anapoaga dunia
D. makabila mengine huamini kuwa roho za walioaga huishi pamoja nao

32. Mwandishi anaposema kwamba duniani tuko matembezini anamaanisha _____
- A. binadamu hawezi kutulia mahali pamoja bila kutembea
B. kutembea kwingi ni kuona mengi
C. maisha ya hapa duniani ni marefu kama safari
D. maisha ya mwanadamu yana mwanzo na mwisho wake kama ilivyo safari

33. Kulingana na mwandishi wa makala haya, swali lenye utata ni _____
- A. zinakoenda roho za waliofariki
B. hatima ya roho za viumbe wengine isipokuwa binadamu
C. chanzo cha maisha ya binadamu
D. uhakika wa maisha baada ya kifo

34. Katika aya ya kwanza, mwandishi ametumia kifungu "na hapo ndipo mapenzi ya Mungu hutimizwa" anamaanisha _____
- A. Mungu anayalinda maisha ya mtoto hadi anapozaliwa
B. mtoto hukua hadi kuwa mzee kwa ulinzi wake Mungu
C. hapo ndipo binadamu huenda na ulele ngoma
D. maisha ya binadamu huwa yamefika uzeeni

35. Kulingana na taarifa hii, siku ya kiama ni _____
 A. siku ya waliokufa wafufuke
 B. siku ya mwisho wa dunia
 C. siku ambayo dunia itaangamizwa kwa moto
 D. siku ya watu kupelekwa metoni kama adhabu ya Mungu

36. Mtu mzee aliyekufa huweza kuzaliwa upya kupitia kwa _____
 A. wazazi wake B. vizazi vyake
 C. mazingira yake D. marafiki zake

37. Kamilisha methali hii : Mwana muwi _____
 A. huwa mwema
 B. ni dawa ya mlango
 C. huzaliwa kama mnyama
 D. siandamane naye

38. Tofauti iliyoko kati ya imani ya waafrika na wahindi kuhusu maisha baada ya kifo ni _____
 A. maisha ya wahindi ni duara ilhali ya waafrika ni kama reale
 B. maisha ya wahindi baada ya kifo hutegemea matendo ilhali ya waafrika hutegemea vizazi vinavyofuata
 C. wahindi huzaliwa tena kama wanyama ilhali waafrika huzaliwa tena wakiwa tu binadamu
 D. waafrika hawaamini kuhusu maisha baada ya kifo wahindi wayaamini

39. Mwandishi asema kuwa viumbe wote wenye uhai wana _____
 A. nguvu B. roho
 C. pepo D. hofu

40. Kichwa mwafaka kwa taarifa hii ni _____
 A. Maisha ya binadamu
 B. Imani za wahindi
 C. Maisha baada ya kifo
 D. Maisha kabla ya kifo.

Soma kifungu kifuatacho, kisha ujibu maswali ya 41- 50:-

Ugonjwa wa ukimwi ni ugonjwa hatari sana. Umewaangamiza vijana kwa wazee, wanaume kwa wanawake. Ukongo huu husababishwa na virusi vya ukimwi kwa kuambukizana.

Kuna njia mbalimbali ambazo zinaweza kufanya mtu aupate. Njia hizo ni kama kushiriki ngono na mtu aliyeambukizwa bila kutumia kinga, kutumia vitu vyenye makali kwa ushirika, kuongezwa damu iliyoambukizwa na virusi, mama mjamzito kwa mtoto wake na kunyonyesha mtoto.

Kama walivyosema wahenga, tabadhari kabla ya hatari. Kuna njia muhimu za kuzuia kuambukizwa kama kutumia kinga wakati wa kufanya mapenzi, kutotumia vifaa vyenye makali pamoja na wengine.

Jambo muhimu zaidi ni kila mtu ajitokeze ili kufanyiwa uchunguzi kujua hali yake. Ni vyema kwa sababu ukijua kuwa huna ugonjwa huu utachukua mwelekeo fulani ili usiambukizwe. Wale ambao matokeo yao yameonyesha kuwa wameambukizwa, wasikate tamaa bali waanze mara moja kutumia dawa ambazo zinapunguza makali ya ugonjwa huu. Mazoezi pia ni muhimu na kula vyakula bora. Wakifanya hivyo wataweza kuishi kwa miaka mingi bila tatizo.

Nataka ifahamike kuwa wakati mwingi ukimwi haumwui mtu. Kinachoua haraka ni mawazo na kubaguliwa na jamii kwa sababu wagonjwa hao wanaonekana kama walienda kujitafutia ukongo. Tuache unyanyapaa na kuwa waathiriwa. Tuwatunze na kuwapa tumaini kuwa wana muda mrefu wa kuishi endapo watajitunza.

Tunapaswa kushirikiana ili kuushinda ugonjwa huu la sivyo kizazi hiki kipo safarini kutoweka!
 Kabla hujaanza kuwakashifu na kuwatusi wenzako nenda ufanyiwe uchunguzi. Huenda ukawa wewe ni mmoja wao.

41. Kati ya zifuatazo, ni ipi si njia hakika ya kupata ukimwi?
 A. kushiriki ngono na mtu asiyeambukizwa
 B. kuongezwa damu yenye virusi
 C. mama mwenye virusi anapojifungua kwa njia isiyofaa
 D. kutumiwa vitu vyenye makali kwa ushirika na wenye virusi

42. Njia mufti ya kujikinga kutokana na ukimwi kwa wenye ndoa ni _____
 A. kutumia kinga wakati wa kufanya mapenzi
 B. kutotumia vifaa vyenye makali pamoja

C. kuwa mwaminifu
 D. mama mjamzito kujifungulia hospitalini

43. Ukimwi ni hatari kwa mujibu wa taarifa hii kwa sababu _____
 A. husababishwa na virusi
 B. umewaangamiza vijana
 C. huambukizwa kwa urahisi
 D. umewaangamiza wengi bila ubaguzi

44. Ni dhahiri katika aya ya nne kuwa mwandishi anapendekeza kuwa _____
 A. watu wajichunge wasiambukizwa ukimwi

- B. watu waanze kutumia lawa za kupanguza makali
- C. watu wamimwe ili kizijua hali zao kama kuchukua hatua kuhusu maisha yao
- D. watu wa'anyiwe uchunguzi
45. Kiungu "walienda kujitafutia ukongo" kinaleta dhana kuwa wanaorejelewa
- A. walijiingiza katika mfuska
- B. walitahadhari kabla ya hatari
- C. walijitakia kuambukizwa ukimwi
- D. walifanya tabia mbaya
46. Agha abu marwele wa ukimwi husafiri jongomeo kuto cana na
- A. unyanyapaa B. afya nzuri
- C. ukimwi D. maumivu makali
47. Ni njia ipi inayoweza kuhakikisina kutoambukizwa ukimwi?
- A. Kutoshiriki kabisa kuhanya ngono kabla na nje ya ndoa
- B. Kutumia mipira ya Miga wakati wa kufanya mapenzi
- C. Kutumia vifaa vyenye makali na watu wa familia pekee
- D. Kuwa na wapenzi wachache tu nje ya ndoa
48. Unahitaji wa kupimwa kama una virusi vya ukimwi ni _____
- A. kufahamu hali yako na jinsi ya kuendelea na maisha yako
- B. kumsaidia mja kufanya mazoezi na kula chakula kizuri
- C. walioambukizwa wakijua hali yao hawawezi kukata tamaa
- D. kuwasaidia wale ambao hawajaambukizwa
49. Mwandishi wa taarifa hii anapendekeza kuwa _____
- A. tuwakashifu wenye ukimwi baada ya kujua hali zetu
- B. tushirikiane ili kuuangamiza ugonjwa huu wa kizazi
- C. tuwatumze na kuwapa tumaini walio na virusi kwamba wataishi muda mrefu wasipojitunza
- D. waathiriwa wa ukimwi wanafaa kuchukuliwa kama wagonjwa wengine tu
50. Kichwa kinachofaa taarifa hii ni _____
- A. Athari za ukimwi
- B. Njia za kukabiliana na goniwa la ukimwi
- C. Tahadhari kabla ya hatari
- D. Zimwi la ukimwi

MAKUENI COUNTY MOCKS

2014.

TIME 2HRS

MATHEMATICS

STD 8

READ THESE INSTRUCTIONS CAREFULLY

1. You have been given this booklet and a separate answer sheet. The question booklet contains 50 questions.
2. Do any necessary rough work in this booklet
When you have chosen your answer, mark it on the Answer sheet, not in this question booklet.

HOW TO USE THE ANSWER SHEET

4. Use only an ordinary pencil.
5. Make sure that you have written on the answer sheet:
YOUR INDEX NUMBER
YOUR NAME
NAME OF YOUR SCHOOL
6. By drawing a dark line inside the correct numbered boxes mark your full Index Number (i.e School Code Number and the three -figure Candidate's number) in the grid near the top of the answer sheet.
7. Do not make any marks outside the boxes.
8. Keep the sheets as clean as possible and do not fold it
9. For each of the questions 1-50 four answers are given. The answers are lettered A, B, C and D. In each case only ONE of the four answers is correct. Choose the correct answer.
On the answer sheet the answer is to be shown by drawing a dark line inside the box in which the letter you have chosen is written.

Example

In the Question Booklet:

9. What 7999580 rounded off to the nearest ten thousands
A. 7,000,000 B. 8,000,000 C. 799,000 D. 800,000

The correct answer is B.

On the answer sheet:

9. [A.] [B.] [C.] [D.]
In the set of boxes numbered 9, the box with the letter B printed in it is marked.
11. Your dark line **MUST** be within the box.
12. For each question **ONLY ONE** box is to be marked in each set of four boxes.

Turn over

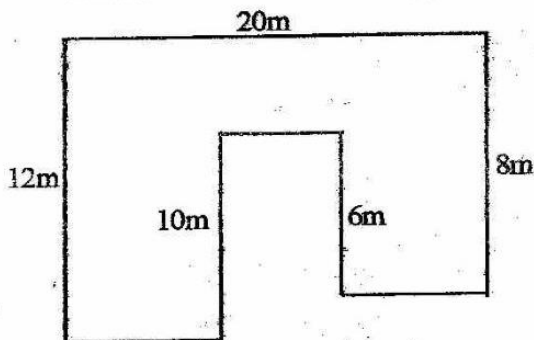
1. From three quarters of a million subtract two hundred and twenty five thousand one hundred and seventy five
- A. 524,924 B. 524,825
C. 774,825 D. 149,825

2. What is the value of

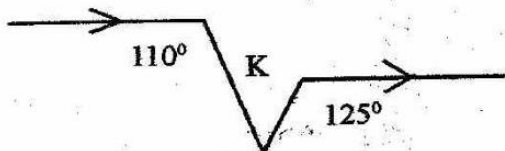
$$\frac{0.45 \times 1.8 \times 0.006}{0.9 \times 0.27}$$

- A. 2.0 B. 0.002
C. 0.2 D. 0.02

3. Rudisha went round this field twice on a certain day as he trained for world marathon. What distance did he cover in km?

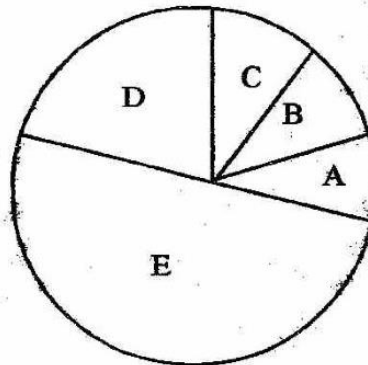


- A. 0.076 B. 1.52
C. 76 D. 760
4. In the figure below find the size of the angle marked K



- A. 80° B. 55°
C. 100° D. 25°
5. Simplify
- $$\frac{2}{3} (24y + 12z) - \frac{3}{4} (16y - 4z)$$
- A. 4y + 11z
B. 12y + 3z
C. 13 - 4y - 11z
D. 4y + 5z

6. The pie chart below represents five partners in a Land buying Sacco. Eliud has the greatest share, Dominic and Brian have equal shares. Fredrick has more share than Dominic, Brian has more share than Hamina. What portion represent Fredrick?

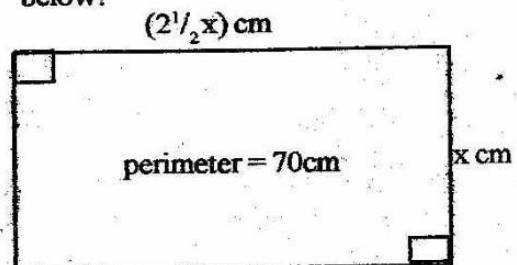


- A. B B. D
C. C D. E

7. A mason was given a plan of a house by the owner which showed the scale of 1:300. If the length and width of the house were 4cm and 3cm, what was the real distance round the house?
- A. 210m B. 4.20m
C. 21m D. 42m

8. 6 men can paint a classroom in 30 days. If the work is to be finished 10 days. How many more men will the contractor have to employ
- A. 12 men B. 6 men
C. 10 men D. 15 men

9. What is the length of the rectangle below?



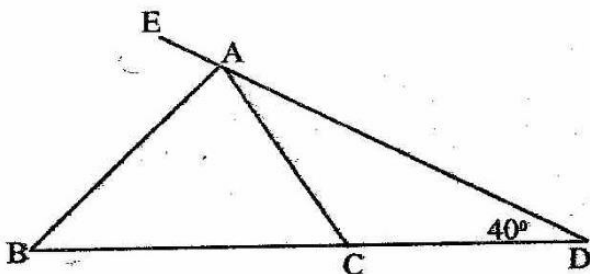
- A. 10cm B. 20cm
C. 50cm D. 25cm

10. A labourer is paid Ksh. 30 a day for every over time hour he worked. He was also paid Kshs. 900 in a month of 30 days. He worked for 22 days, and he was paid Kshs. 870. How many overtime hours did he work?
- A. $94\frac{1}{3}$ hrs B. 7 hrs
C. $28\frac{3}{10}$ hrs D. $38\frac{13}{22}$ hr

11. In the year 2010, 22nd of July was a Thursday. Which day was 14th September the same year?
- A. Monday
B. Friday
C. Wednesday
D. Tuesday

12. What is the area of a semi-circle whose perimeter is 36cm
- A. 77cm^2 B. 44cm^2
C. 154cm^2 D. 36cm^2

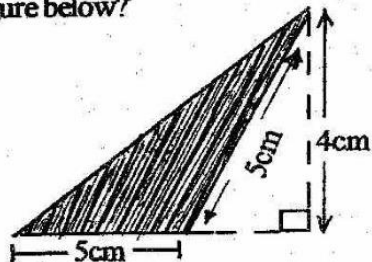
13. In the figure below find the size of angle BAE, given that lines BC = CD = CA and $\angle CDA = 40^\circ$



- A. 80° B. 40°
C. 90° D. 100°
14. Simplify $2x^2 - y^2 + 2yz$ if $x = 4$, $y = 1$ and $z = 3$
- A. 25 B. 37
C. 39 D. 32
15. On a map of scale 1:2500 000 the distance between two towns A and B is 15.3cm. Find the actual distance in km?

- A. 382.5km B. 38.25km
C. 153km D. 380km

16. Find the area of the shaded part of the figure below?

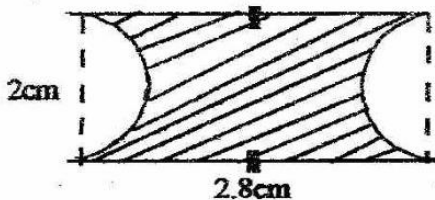


- A. 20cm^2 B. 16cm^2
C. 10cm^2 D. 12cm^2
17. In preparation for her wedding ceremony Nyawira hired seven hundred and nine thousand two hundred and three chairs. Only half a million people attended the party. How many chairs were not occupied?
- A. 20924 B. 29203
C. 290797 D. 209203
18. A mother shared oranges among her 33 children all got equal share except two children who got 7 oranges each. If each of the two children got half of what each of the other children got, how many oranges had the mother?
- A. 200 B. 212
C. 206 D. 448
19. The area of a triangle is 28cm^2 . Its height is $3\frac{1}{2}\text{cm}$ Find the length of the base?
- A. 16cm B. 8cm
C. 98cm D. 4cm
20. The table below shows bus fare between Nyeri - Nairobi - Nakuru route. Njogu travelled from Karatina to Gilgil via Nairobi while Njoki travelled from Nakuru to Nairobi via Naivasha. How much more did Njogu pay than Njoki?

			Nrb				
		Thika	7	Limuru			
	Sgna	11	17	14	Nvsha		
Krt	5	15	23	19	7	Gilgil	
Nyt	4	8	19	26	21	12	5
							Nkr

- A. Ksh 3 B. Ksh 13
C. Ksh 8 D. Kshs. 17

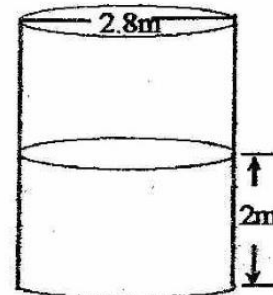
21. Solve the equation
 $\frac{2x+1}{3} = \frac{x+8}{4}$
A. 5 B. 2
C. 3 D. 4
22. A plot of land measured 400m by 200m. If it's increased on both lengths by 10%, what is its new area in hectares
A. 9.68 ha B. 6.48 ha
C. 8 ha D. 8.8 ha
23. In the number pattern what is the next number 2,3,5,8,13,21,34,55, _____
A. 110 B. 89
C. 92 D. 21
24. Calculate the area of the shaded part (pie = 3.14) give your answer correct to one demimal place



- A. 5.6cm² B. 2.6cm²
C. 3.1cm² D. 2.5cm²
25. The information below represents approximate areas in km² of five major land masses of the world
- | | |
|--------------|----|
| Africa | 30 |
| N. America | 25 |
| South Africa | 20 |
| Europe | 25 |
| Asia | 20 |
- If Tanzania is approximately 2.5km² it will be represented by how many

- degrees on a world pie chart?
A. 30° B. 7.5°
C. 7.5° D. 1.7°

26. The price of a suit was Kshs. 4000. During sale the price was reduced by 25%. In what ratio was the price reduced?
A. 4:3 B. 1:3
C. 3:4 D. 1:4
27. A litre of paint covers an area of 16m². How many litres will be required to paint four walls and ceiling of a school hall 12m long 8m wide and 4m high?
A. 18 B. 16
C. 12 D. 11
28. A rectangular tank measuring 3m by 1.5m by 1.5m can hold water for a cow to drink. If the cow can consume 50 litres of water daily how long would the tank run the cow, with water?
A. 27 days B. 270 days
C. 135 days D. 13¹/₂ days
29. A cylindrical tank with internal diameter of 2.8m contains water to a level of 2m. Find the surface area of the wet surface in m²



- A. 23.76 B. 6.16
C. 17.6 D. 29.92
30. The following are high jumps made by seven boys 57cm, 101cm, 69cm, 79cm, 91cm, 70cm and 54.5cm. What was the median jump?
A. 57 B. 70
C. 75 D. 74.5

31. Work out

$$(2.5)^2 - (1\frac{1}{2})^2$$

$$\sqrt{0.64}$$

- A. 50 B. 0.05
C. 0.5 D. 5

32. A TV set is sold under hire purchase on a deposit of Kshs 300 and 9 monthly instalments of Kshs. 400. Calculate the hire purchase price of the set

- A. 3600 B. 3900
C. 3200 D. 700

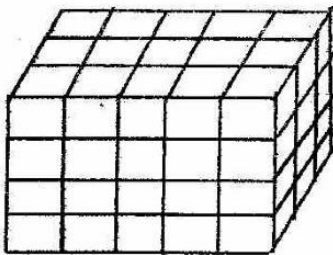
33. Mr. Gathamba is paid a basic salary of 1800 per month by Sterling Company and a commission of 4% of the value of items he sells. In one month he sold goods worth Kshs. 52400. How much money did he earn that month?

- A. 2096 B. 1872
C. 3896 D. 54200

34. In 1950, 2000 people were killed on the roads in Kenya. In 1991 the number had increased to 2054. What percentage rise is this?

- A. 927% B. 2.7%
C. 18.54% D. 9.27%

35. A std 3 pupil in Kithyoko primary school arranged some match boxes to make a cuboid. He later decided to shade all the six faces from the cuboid below. How many boxes were not shaded at all?



- A. 6
B. 8
C. 20
D. 60

36. Work out

$$5.6 + 2.4 \times 5$$

$$5.5 \div 0.5$$

- A. 16 B. 1.6
C. 11 D. 6.1

37. The length of a path joining the headteacher's office and school gate is 0.648km. The headteacher planted trees on both sides of the path. If the trees were 9 meters apart how many trees were planted altogether?

- A. 146 B. 144
C. 72 D. 73

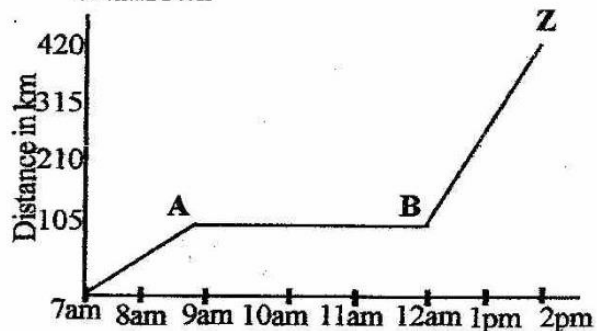
38. Draw triangle ABC with AB = 5cm, AC = 3cm and CB = 4cm. Draw a circle to run through the vertices. What is twice the radius of the circle

- A. 2.6cm B. 5 cm
C. 5.3cm D. 2.7cm

39. Stacy paid Kshs. 3654 for a bicycle after being allowed a discount of 13%. Find the marked price of the bicycle

- A. Kshs. 3954 B. Kshs. 4746
C. Kshs. 3108 D. Kshs. 4200

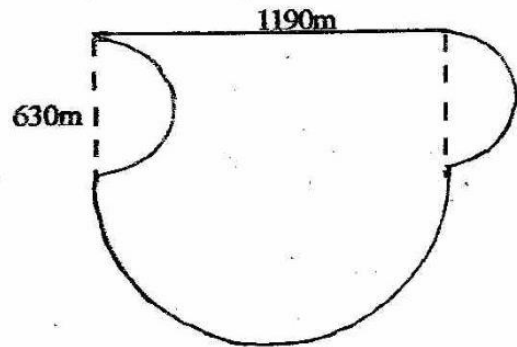
40. Find the average speed of the vehicle which covered a distance of 420km as shown below. The vehicle travelled for $1\frac{1}{2}$ hours before it had a mechanical breakdown



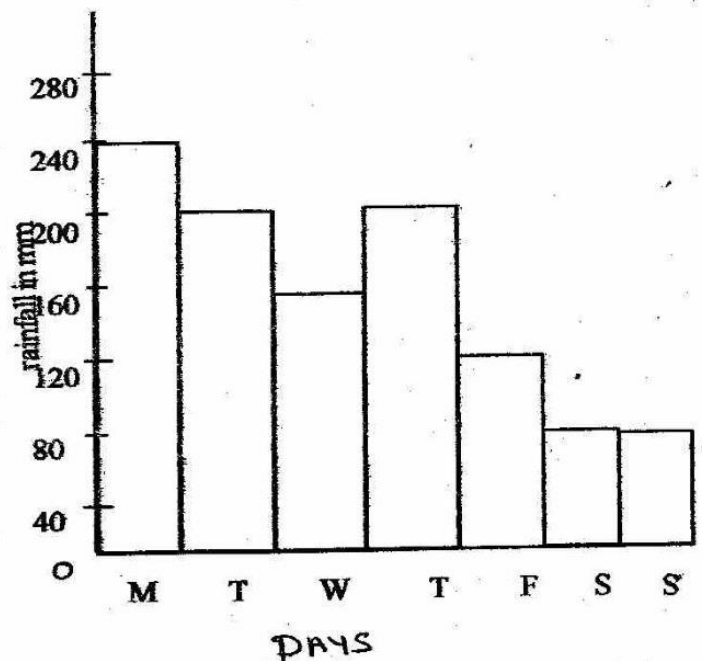
- A. $3\frac{1}{2}$ hrs B. 60km/hr
 C. 36km/hr D. 120km/hr
41. Njenga bought the following items. Two kilograms of sugar @ 43.50, 3kg of meat for Kshs. 240 and a packet of salt for shs. 8. What balance did he get after giving the shopkeeper two five hundred shillings notes
- A. Kshs. 165 B. Kshs. 365
 C. Kshs. 665 D. Kshs. 708.50
42. My watch loses 5 seconds for every one hour. If it was set right at 12.00 noon, on Monday, what time will it show at the same time on Wednesday that week?
- A. 11.56am B. 12.04pm
 C. 11.54am D. 11.54pm
43. Langat bought two hundred oranges at Kshs. 400. He later sold them at Kshs. 15 for every 4 oranges. Calculate the percentage profit
- A. Kshs. 250
 B. Kshs. 87.5%
 C. Kshs. $46\frac{2}{3}$ %
 D. Kshs. 125%
44. The temperature of ice was recorded as 1°C in the morning. In the afternoon it read 41°C . Find the rise in temperature
- A. 40° B. 42°
 C. 43° D. 41°

45. Find the product of prime numbers between 61 and 69
- A. 4087 B. 282003
 C. 67 D. 4221

46. Son of Catherine Ndereva ran round the track shown below twice in a day. What distance round the figure did he cover in two days?



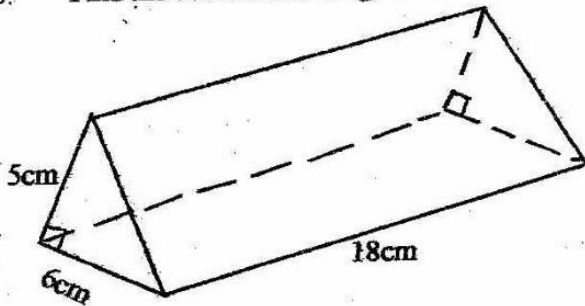
- A. 5.04km B. 20.16km
 C. 4680m D. 32.402km
47. The graph below shows the amount of rainfall in Nakuru in one week. Find the average for the first three days



- A. 210mm
C. 132mm

- B. 140mm
D. 70mm

48. Find the volume of the figure below



- A. 540cm^3
C. 216cm^3

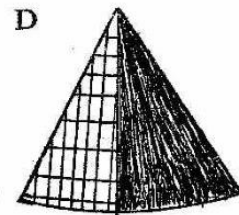
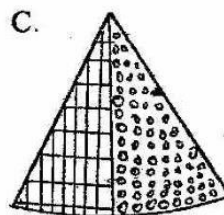
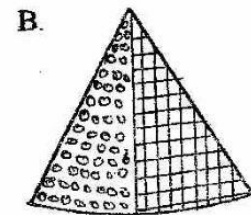
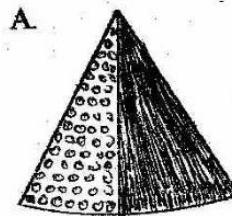
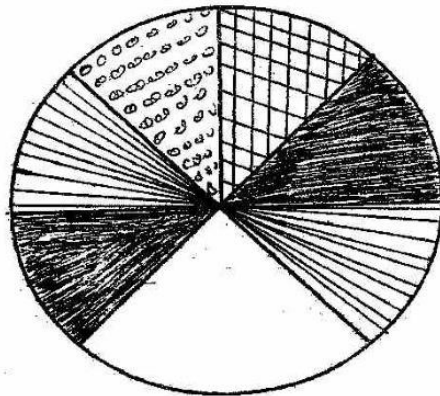
- B. 162cm^3
D. 270cm^3

49. The cost of sending telegram is as follows Kshs. 6 for the first ten words. Any word above ten words is charged 65cents. There is an additional government tax of 11% Find the cost of sending the telegram below to the nearest five cent ODHIAMBO BOX 408 KISUMU , SEND MY IDENTITY CARD PETER GITHINGITHIA

- A. Kshs. 6.65
C. Kshs. 7.40

- B. Kshs. 6.70
D. Kshs. 7.35

50. Which pattern below could be used to complete the board given?



MAKUENI COUNTY MOCKS

2014 STD 8

MARKING SCHEME

8

<u>MATHS</u>		<u>ENG</u>		<u>KISWA</u>		<u>SCI</u>		<u>SOCIALS/C.R.E</u>		
1. B	26. B	1. C	26. A	1. C	26. A	1. C	26. A	1. A	31. A	61. B
2. D	27. B	2. B	27. C	2. D	27. B	2. B	27. A	2. B	32. D	62. D
3. B	28. C	3. D	28. D	3. A	28. C	3. D	28. C	3. D	33. D	63. B
4. B	29. A	4. D	29. B	4. A	29. B	4. B	29. D	4. B	34. B	64. D
5. A	30. B	5. A	30. D	5. B	30. C	5. C	30. D	5. B	35. A	65. D
6. B	31. D	6. B	31. C	6. D	31. D	6. A	31. D	6. C	36. C	66. C
7. D	32. B	7. B	32. B	7. A	32. D	7. A	32. A	7. C	37. B	67. B
8. A	33. C	8. B	33. A	8. C	33. D	8. D	33. C	8. D	38. D	68. B
9. D	34. B	9. D	34. B	9. B	34. C	9. D	34. A	9. A	39. A	69. C
10. B	35. A	10. C	35. C	10. B	35. B	10. C	35. A	10. A	40. C	70. B
11. D	36. B	11. A	36. C	11. C	36. B	11. A	36. C	11. A	41. A	71. C
12. A	37. A	12. B	37. B	12. D	37. B	12. B	37. D	12. D	42. B	72. A
13. C	38. B	13. D	38. A	13. B	38. B	13. B	38. D	13. B	43. D	73. C
14. B	39. D	14. D	39. C	14. B	39. B	14. C	39. D	14. D	44. D	74. C
15. A	40. B	15. B	40. B	15. A	40. A	15. A	40. A	15. B	45. B	75. B
16. C	41. C	16. D	41. B	16. C	41. A	16. C	41. A	16. C	46. A	76. A
17. D	42. A	17. C	42. B	17. A	42. C	17. B	42. B	17. A	47. B	77. B
18. D	43. B	18. B	43. C	18. B	43. D	18. C	43. D	18. B	48. B	78. C
19. A	44. A	19. A	44. D	19. B	44. C	19. A	44. D	19. D	49. C	79. D
20. D	45. C	20. C	45. D	20. C	45. A	20. C	45. C	20. B	50. D	80. D
21. D	46. B	21. C	46. C	21. C	46. A	21. C	46. C	21. A	51. A	81. C
22. A	47. D	22. C	47. A	22. B	47. A	22. C	47. B	22. C	52. C	82. A
23. B	48. D	23. B	48. C	23. C	48. A	23. B	48. B	23. B	53. B	83. D
24. D	49. C	24. D	49. A	24. B	49. B	24. C	49. B	24. D	54. B	84. A
25. B	50. C	25. A	50. C	25. B	50. D	25. C	50. C	25. B	55. A	85. C
								26. B	56. C	86. B
								27. A	57. C	87. C
								28. A	58. A	88. D
								29. D	59. B	89. B
								30. A	60. C	90. D

COMPOSITION/INSHA MARKING SCHEME

MARKING CRITERION

- i. - The Composition will be assessed according to the following general guidelines.
 - The maximum mark will be 40 and minimum mark 01
 - Does the script show that the candidate can communicate accurately, fluently and imaginatively in English.

Accuracy (16 marks)

- | | |
|--|--|
| (a) Correct tense and agreement of verbs (4 mks) | (b) Accurate use of vocabulary (4 marks) |
| (c) Correct spelling (4 marks) | (d) Correct punctuation (4 marks) |

Fluency (16 marks)

- | | |
|---|--|
| (a) Work in the correct order (4 marks) | (b) Sentences connected and paragraphs (4 marks) |
| (c) Correct spelling (4 marks) | (d) Ideas developed in logic sequence (4 marks) |

Imagination (8 marks)

- (a) Unusual but appropriate use of words and phrases (4 marks)
- (b) Variety of structure (4 marks)

MAKUENI COUNTY MOCKS

2014

SCIENCE

STD 8

TIME: 1 HR 40 MINS

READ THESE INSTRUCTIONS CAREFULLY

1. You have been given this booklet and a separate answer sheet. The question booklet contains 50 questions.
 2. Do any necessary rough work in this booklet.
- When you have chosen your answer, mark it on the Answer sheet, not in this question booklet.

HOW TO USE THE ANSWER SHEET

4. Use only an ordinary pencil.
5. Make sure that you have written on the answer sheet:
YOUR INDEX NUMBER
YOUR NAME
NAME OF YOUR SCHOOL
6. By drawing a dark line inside the correct numbered boxes mark your full Index Number (i.e. School Code Number and the three-figure Candidate's number) in the grid near the top of the answer sheet.
7. Do not make any marks outside the boxes.
8. Keep the sheets as clean as possible and do not fold it.
9. For each of the questions 1-50 four answers are given. The answers are lettered A, B, C and D. In each case only ONE of the four answers is correct. Choose the correct answer.
On the answer sheet the answer is to be shown by drawing a dark line inside the box in which the letter you have chosen is written.

Example

In the Question Booklet:

9. Which of the following components of blood is involved in clotting after injury?
A. plasma B. white blood cell C. red blood cell D. platelets

The correct answer is D

On the answer sheet

9. [A.] [B.] [C.] [~~D~~]

In the set of boxes numbered 9, the box with the letter D printed in it is marked.

11. Your dark line **MUST** be within the box.
12. For each question **ONLY ONE** box is to be marked in each set of four boxes.

1. Which one of the following processes does NOT take place while exhaling?

- A. Lungs get deflated
- B. Diaphragm forms a dome shape
- C. Chest cavity increases in size
- D. Ribs move inwards and downwards

2. Which of the following methods is best of separating suspended impurities from water?

- A. hand picking
- B. filtration
- C. use of magnet
- D. evaporation

3. Birds that have short, straight and thick beaks are _____

- A. filter feeders
- B. nectar feeders
- C. flesh feeders
- D. grain feeders

4. A person intends to push a drum of oil along an inclined plane into a platform. Decreasing the slope of the inclined plane would

- A. decrease effort applied
- B. decrease effort distance
- C. decrease load distance
- D. decrease the work done

5. The following are steps followed by pupils when making a certain tool

- i. hitting the pointed end nail until it is flat
- ii. cutting off the tip using hacksaw blade
- iii. sharpening the edge of flattened end by rubbing it against a hard tought stone or a file

The tool is _____

- A. Hammer
- B. Drill
- C. Chisel
- D. Saw

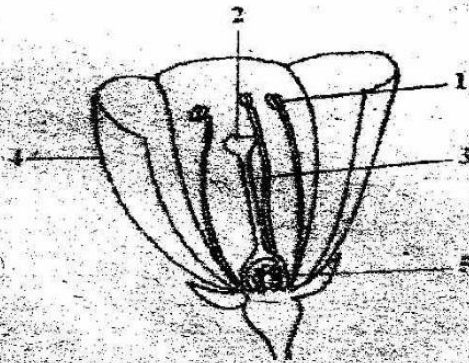
6. Std 8 pupils of Juija academy visited Nairobi national reserve. They observed a tiger killing a deer. Which one of the following adaptation is common in both animals

- A. fast movement in both animals
- B. type of teeth in both animals
- C. type of food eaten by both animals
- D. body size of the animals

7. Which of the following will NOT affect the pitch of a stringed instrument

- A. force used to pluck
- B. thickness of the string
- C. height of the string
- D. tightness of the string

8. The diagram below shows reproductive part of a plant. In which part will germination of pollen grains and fertilisation take place respectively



- A. 5 and 2
- B. 1 and 3
- C. 2 and 5
- D. 3 and 5

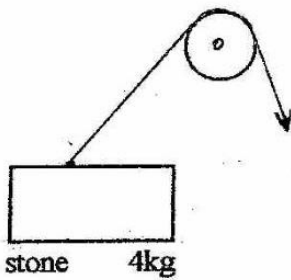
9. Which one of the following parts of a flower are used to attract insects for pollination

- A. sepals
- B. style
- C. stigma
- D. petals

10. Which one of the following is one of the functions of fibre in the diet?

- A. helps in digestion
- B. helps in absorption
- C. helps in emptying our bowels
- D. improves water content in the body

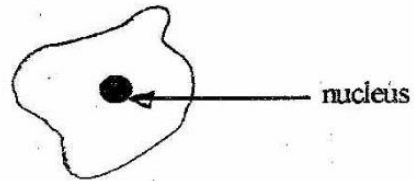
11. A std 8 pupil wanted to lift a stone weighing 4kg using the machine drawn below. Which of the following will be equal to the force applied by the load?



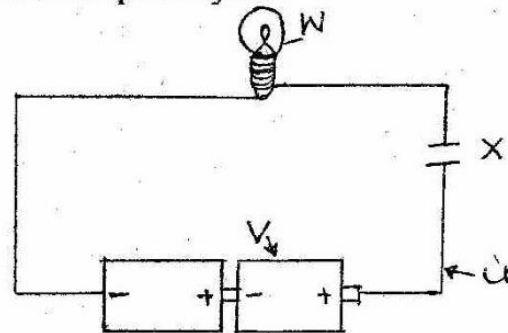
- A. Effort B. Distance
C. Work D. Density

12. Which one of the following pests have biting and chewing mouth parts?
A. stalkborer and cutworm
B. weevils and cutworm
C. white ants and army worms
D. stalkborer and aphids
13. Which one of the following appliances use the heat effect of electricity?
A. electric radio
B. electric kettle
C. electric television
D. electric battery
14. Which one of the following animal feeds supplies livestock with water?
A. bone meal
B. legumes
C. green fodder
D. sunflower seeds
15. Which one of the following are both non-renewable sources of energy?
A. paraffin and diesel
B. coal and saw dust
C. firewood and natural gas
D. petrol and charcoal
16. Which one of the following is NOT a correct food chain
A. grass → grasshopper → lizard → snake
B. moss → small fish → big fish → king fisher
C. zebra → grass → lion → hawk
D. grass → cow → man → leopard

17. The following are characteristics of the blood components shown below except?



- A. fight diseases
B. made in red bone marrow
C. is irregular in shape
D. less than red blood cells
18. The group below shows the causes of sexually transmitted infections Which one is wrongly matched?
A. syphilis - bacteria
B. genital herpes - virus
C. gonorrhoea - virus
D. chancroid - bacteria
19. Which parasite is correctly matched with the part of body where it is found?
A. liverfluke - lung, large intestines
B. tape worm - brain, small intestine, lungs
C. round worms - small intestine, liver
D. lungworm - brain, lungs, stomach
20. The diagram below represents a simple electric circuit. The parts labelled U, V, W and X respectively are



- A. wire, bulb, cell, cell, switch
B. wire, switch, cell, bulb
C. wire, battery, bulb, switch
D. wire, bulb, switch, cell


21. Which one of the following shows the correct path taken by urine from the kidney?
- A. urethra - bladder - ureter
 - B. urethra - ureter - bladder
 - C. ureter - bladder - urethra
 - D. ureter - bladder - urethra

22. Which one of the following drugs have the characteristics listed below ?
- i. stimulant
 - ii. discolours teeth
 - iii. lose of sleep
 - iv. stomach ulcers
- A. Alcohol
 - B. Tobacco
 - C. Khat
 - D. Heroine

23. Which one of the following vaccines are given to a pregnant mother?
- A. BCG
 - B. DPT
 - C. Anti measles
 - D. Anti polio

24. Which one of the following components of a compost manure introduces bacteria to the heap?
- A. dry leaves
 - B. maize stalks
 - C. top soil
 - D. kitchen refuse

25. Which one of the following bird below has a beak like the one below



- A. flamingo
- B. sunbird
- C. hawk
- D. ostrich

26. Which of these plants cannot make their own food?

- A. mould and yeast
- B. moss and lichens
- C. ferns and mushrooms
- D. puffballs and pine

27. Which one of the following pair constitutes of health effects of drugs abuse?
- A. fits and withdrawal
 - B. truancy and poor health
 - C. addiction and drug induced accidents
 - D. loss of income and rape

28. Which one of the following methods is the most suitable for controlling parasites in chickens?
- A. spraying
 - B. dipping
 - C. dusting
 - D. drenching

29. Which one of the following groups is made up of a balanced diet?
- A. Eggs, tomatoes, lemon, juice
 - B. Potato chips, chicken, groundnuts
 - C. Chapati, beef, potatoes
 - D. ugali, beans, spinach

30. The following are characteristics of a cloud observed in the sky
- i. horizontal base
 - ii. had uneven shape
 - iii. thick and feathery
 - iv. looked like cauliflower
- The above clouds were most likely to indicate
- A. fine weather
 - B. heavy rainfall
 - C. thunderstorms
 - D. bad weather

31. Std 6 pupils of Kenol primary school listed methods of grazing below. Which method of grazing are pasture separated, with permanent fences?
- A. strip grazing
 - B. tethering
 - C. herding
 - D. paddocking

32. The following statements explains what happens during the birth process. Which statements is false?

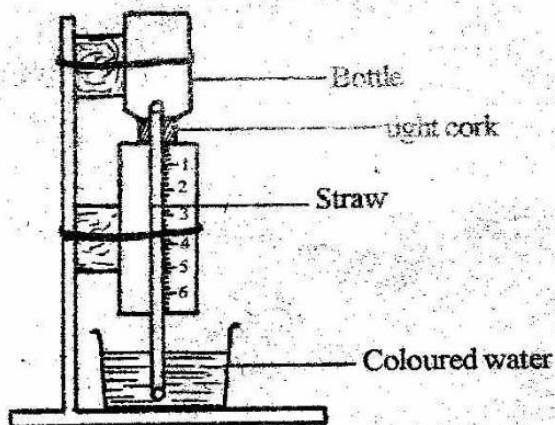
- A. Contraction of uterus pushes the baby out through the vagina
- B. The amniotic fluid is released from the uterus after birth
- C. The body moves out of the birth canal head first
- D. The umbilical cord is cut to separate the baby from the mother

33. Hard water does not
- A. form scum
 - B. scale the pipes
 - C. lather easily
 - D. clog the heaters

34. Which one of the following is NOT a common characteristic of all mammals
- A. they give birth to the young ones
 - B. they suckle their young ones
 - C. they breathe by means of lungs
 - D. have constant body temperatures

35. A rice farmer studied the following signs and symptoms
- i. Urinating frequently
 - ii. Itching in the bowels
 - iii. Blood in urine and stool
 - iv. Fever
- Which one of the following diseases was the farmer likely to suffer from
- A. Bilharzia
 - B. Cholera
 - C. Typhoid
 - D. Malaria

36. The diagram below represents a simple weather instrument



The instrument works under the principle that

- A. air has motion
- B. liquid occupies space
- C. matter expands or contracts when heated or cooled.
- D. air expands when heated

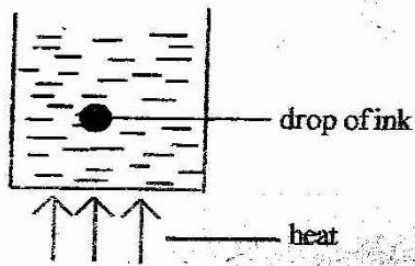
37. Which one of the following is true about a single fixed pulley?
- A. changes direction of load
 - B. reduces the weight of the load
 - C. has no mechanical advantage
 - D. reduces the force used

38. Which one of the following would be the best method of controlling weaver birds and quelea birds
- A. hand picking
 - B. pruning
 - C. spraying
 - D. scaring

39. Which one of the following is NOT a reason why newborn babies should be fed on colostrum?
- A. has necessary food nutrients
 - B. improves the bond between the mother and the baby
 - C. enhance babies immunity
 - D. prevents foetus from contracting diseases

40. Which of the following are characteristics of gases only?
- A. have mass and size
 - B. have no volume but have mass
 - C. have definite size and shape
 - D. have no definite size and mass

41. The following experiment was set up by pupils of Muthaiga primary school. The experiment below was set to investigate



- A. convection in liquids
 B. convection in gases
 C. radiation in gases
 D. conduction in solids
42. Which one of the following is NOT a problem related to teeth?
 A. bleeding gum
 B. shedding of teeth
 C. tooth decay
 D. bad smell
43. Which of the following animals belong to the same group of invertebrates as an ant?
 A. scorpion B. mite
 C. crabs D. tsetse fly
44. Which one of the following components of environment is found in almost all environments
 A. soil B. water
 C. animal D. air
45. Which of the following is NOT a sign of unhealthy crop?
 A. curled leaves B. wilting
 C. lower yield D. streaks
46. The following are traditional methods of preserving food except?
 A. drying
 B. use of honey
 C. canning
 D. use of low temperatures
47. The soil that is best in drainage
 A. makes the longest ribbons
 B. has large air spaces
 C. used for farming
 D. is sticky when wet
48. Which one of the following is least considered when choosing a method of separating mixtures
 A. solubility
 B. colour
 C. size of particles
 D. type of material
49. Which of the following is a useful non-green plant
 A. Moss B. yeast
 C. toadstool D. ringworm
50. Which of the following least conserves soil?
 A. Mulching
 B. terracing
 C. contour farming
 D. planting cover crops

MAKUENI COUNTY MOCKS

2014

**SOCIAL STUDIES AND
RELIGIOUS EDUCATION**

STD 8

TIME: 2HRS 15 MINS

READ THESE INSTRUCTIONS CAREFULLY

1. You have been given this booklet and a separate answer sheet. The question booklet contains 90 questions.
2. Do any necessary rough work in this booklet.
When you have chosen your answer, mark it on the Answer sheet, not in this question booklet.

HOW TO USE THE ANSWER SHEET

4. Use only an ordinary pencil.
5. Make sure that you have written on the answer sheet:
YOUR INDEX NUMBER
YOUR NAME
NAME OF YOUR SCHOOL
6. By drawing a dark line inside the correct numbered boxes mark your full Index Number (i.e School Code Number and the three -figure Candidate's number) in the grid near the top of the answer sheet.
7. Do not make any marks outside the boxes.
8. Keep the sheets as clean as possible and do not fold it.
9. For each of the questions 1-50 four answers are given. The answers are lettered A, B, C and D. In each case only ONE of the four answers is correct. Choose the correct answer.
On the answer sheet the answer is to be shown by drawing a dark line inside the box in which the letter you have chosen is written.

Example

In the Question Booklet:

9. Which of the following groups of people belong to a nuclear family?
A. Mother, Son, Grandfather
B. Father, Son, Uncle
C. Father, Daughter, Son
D. Grandmother, Father, Daughter

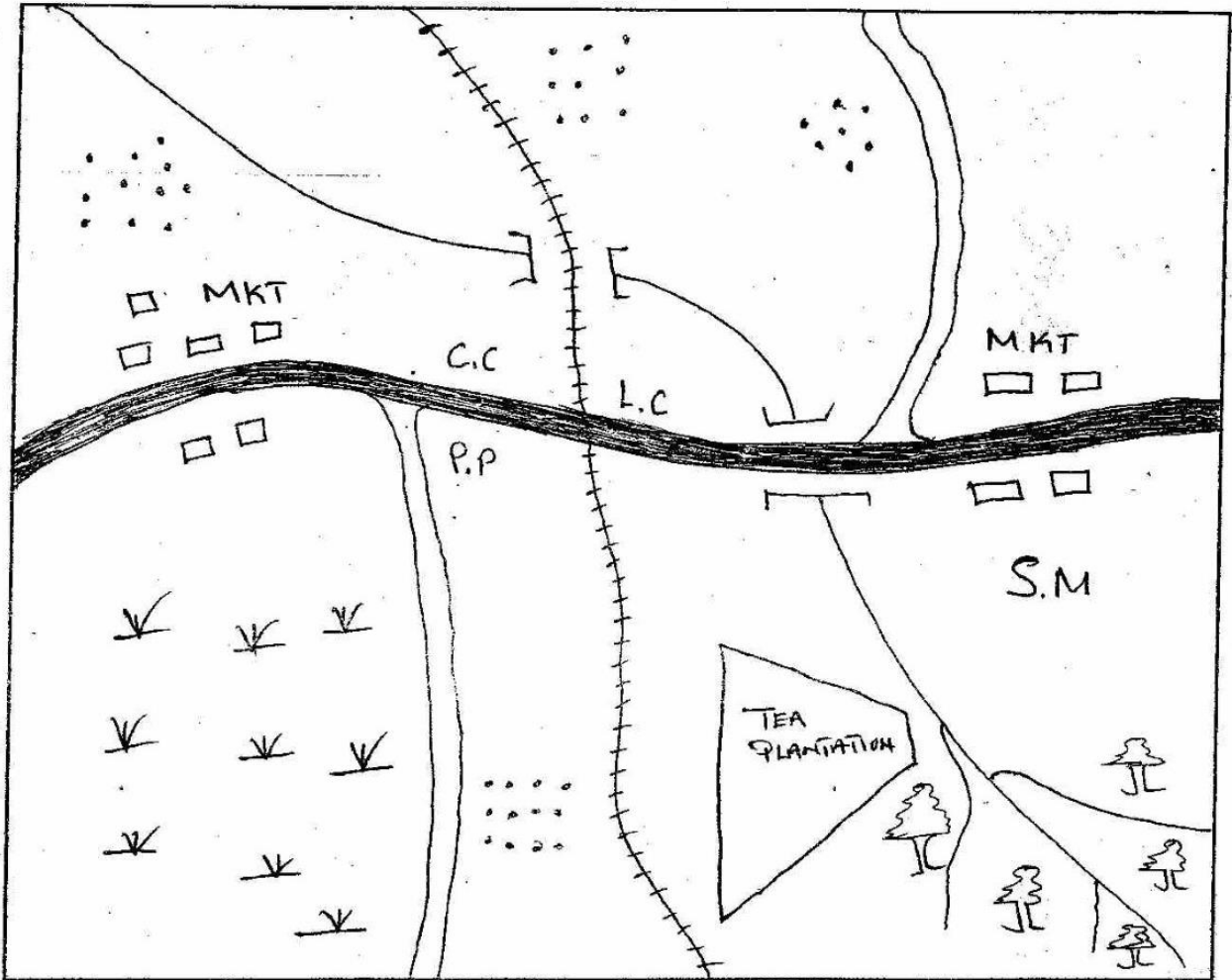
The correct answer is C.

On the answer sheet:

9. [A]. [B]. [C]. [D]
In the set of boxes numbered 9, the box with the letter C printed in it is marked.
11. Your dark line **MUST** be within the box.
12. For each question **ONLY ONE** box is to be marked in each set of four boxes.

TURN OVER

TIKOLO AREA



1CM REPRESENTS 2 KM

KEY			
	Railway		Settlement
	Murram road		Market
	Tarmac road	L.C	Level crossing
	River	C.C	Chiefs Camp
S.M	Sawmill	P.P	Police Post
	Scrub		Forest

1. The length of the railway from the level crossing of the edge of the map South Eastwards is approximately _____
 A. 18.5km B. 21.8km
 C. 8.5km D. 32 km
2. The general direction of flow of river Reko is _____
 A. North East to South
 B. South East to North - West
 C. North to South
 D. West to East
3. The main means of transport in Tikolo area is _____
 A. railway transport
 B. water transport
 C. air transport
 D. road transport
4. The main cash crop grown in Tikolo area is _____
 A. Coffee B. Tea
 C. Cotton D. Sugarcane
5. The main factor that may influence the location of a saw mill is _____
 A. presence of water
 B. presence of the forest
 C. fertile land
 D. a good climate
6. What is the climate to the south west of Tokolo area _____
 A. cool and wet
 B. hot and wet
 C. hot and dry
 D. hot and cool
7. Tikolo town has received money for development. Which project should they consider first
 A. a police station
 B. sinking a borehole
 C. building a school
 D. building a stadium
8. Three of the following are Mijikenda communities except

- A. Chonyi B. Jibana
 C. Duruma D. Pokomo
9. The following titles were used among the Nyamwezi during the pre-colonial period. Which one is correctly matched with his duty
 A. Mtwale - tax officer
 B. Kikoma - army officer
 C. Mganwe - religious leader
 D. Minule - information officer
10. Which one of the following groups consists of horticultural crops only grown in Kenya
 A.

French beans
Onions
Roses

 B.

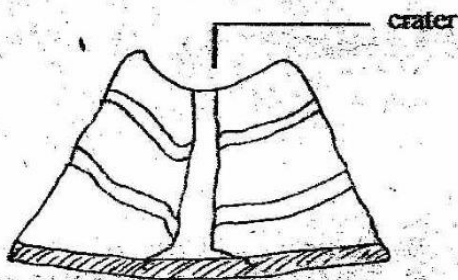
Bananas
Arrow roots
Pyrethrum
- C.

Pine apples
Coconut
Wheat

 D.

Sugarcane
Seed maize
Tomatoes
11. Which one of the following lakes is a fresh water lake.
 A. L. Tana B. L. Chad
 C. L. Bangweulu D. L. Chala
12. Which of the following seasons in Northern Africa is not well matched with the time it occurs
 A. Summer - June to August
 B. Spring - September to November
 C. Winter - December to February
 D. Autumn - January to March
13. The following statements describes a type of climate in Africa
 i. There are two distinct seasons
 ii. The average rainfall is 1,200 mm
 iii. Rain decreases as you move from the equator
 iv. Temperature ranges from 15°C to 25°C
 The type of climate is _____
 A. Equatorial climate
 B. Tropical climate
 C. Desert
 D. Mediterranean

14. Which one of the following lists shows Kenya's major imports?
- Cotton, sugarcane and tea
 - Coffee, tea and soda ash
 - Cocoa, sugarcane and fish
 - Petroleum, textile and electronics
15. The state of emergency in Kenya was declared in the year _____
- 1960
 - 1952
 - 1978
 - 1963
16. Three of the following are services provided by schools. Which one is NOT
- Skills for communication
 - Spreading knowledge and information
 - Provision of security facilities
 - Provision of guidance and counselling
17. The diagram below represent the formation of a feature known as



- Volcanic mountain
 - Crater mountain
 - Residual mountain
 - Fold mountain
18. The British used indirect rule in Northern Nigeria by allowing traditional ruler to
- lead the protectorate as they followed
 - Maintain law and order in the emirates
 - Listen to some kinds of cases in their territories
 - Abolish desirable practices among citizens

19. The statement below describes a marriage systems in Kenya
- Couple exchange vows
 - Takes place at the brides home
 - Conducted by a government employee
 - Marriage certificate is issued
 - Allows men to marry more than one wife
 - A 21 day public notice is issued
 - Conducted by a religious leader
- Which combination of the above statements describe a marriage conducted through civil marriage ceremony?
- v, iv, ii
 - vii, iv, ii
 - i, iv, vii
 - iii, i, vi
20. Below are rivers which forms deltas at their mouths. Which one does not?
- River Nile
 - River Congo
 - River Okavango
 - River Niger
21. Which crop requires the following conditions for its growth?
- Deep fertile well drained soils
 - Heavy well distributed rainfall
 - High temperatures
 - Protection from strong winds
 - Support during maturity
- Bananas
 - Sisal
 - Coffee
 - Maize
22. On temperate grassland the height of grass is mainly depended on _____
- the altitude
 - the longitude
 - the rainfall
 - the soil fertility
23. Soil is formed through the process called
- warping
 - weathering
 - eroding
 - decomposition
24. Which practice did the Bantu adopt from the interaction with the Cushites?

46. The following regulatory sign on our roads means



- A. the speed limit is fifty km/hr
 B. No driving below fifty km/hr
 C. only driving at 50 is allowed
 D. You should not drive below fifty km/hr
47. In Kenya flourspar is mined through _____
 A. deep shaft method
 B. open cast method
 C. panning
 D. drilling
48. Which one of the following statements is true of both Julius Nyerere of Tanzania and Haile Selassie of Ethiopia
 A. they led their countries to independence
 B. they were founder members of OAU
 C. They were forced out of power by the army
 D. They introduced socialism in their countries
49. Which one of the following tourist attractions in Africa is correctly matched with the country where it is found?
- | <u>Tourist attraction</u> | <u>Country</u> |
|---------------------------|----------------|
| A. pyramids | - Tunisia |
| B. Gedi ruins | - South Africa |
| C. Victoria falls | - Zimbabwe |
| D. Sandy beaches | - Egypt |
50. A foreigner living in Kenya may enjoy the following rights except
 A. right to life
 B. right to own property
 C. right to fair trial
 D. right to vote during general elections

51. Which one of the following was used to pass information to distant places in traditional Africa societies
 A. sending a messenger
 B. sending smoke signal
 C. beating drums
 D. blowing a horn
52. The main problem facing the horn of Africa is
 A. under development
 B. natural disasters
 C. disunity and civil wars
 D. pollution
53. Before the coming of the Europeans, the Khoikhoi were ruled by _____
 A. Kings B. Chiefs
 C. President D. Prime minister
54. Which one of the following is not a reason that led to Samori Toure's defeat
 A. The British had superior weapons
 B. He lacked support from non-muslims
 C. The colonizers interfered with trade
 D. the empire's main source of wealth was interfered with
55. The main cause of pollution of water in rivers of Kenya is _____
 A. industrial waste
 B. soil particles
 C. sewerage
 D. chemical from farms
56. The government of Ethiopia is headed by a _____
 A. King B. President
 C. Prime minister D. Queen
57. The budget of the National Government is usually approved by _____
 A. the president
 B. the cabinet secretary for finance
 C. members of parliament
 D. the cabinet

58. The national assembly is composed of
A. 350 members in total
B. 290 members in total
C. 68 members in total
D. 110 members in total

59. Which one of the following is the main source of revenue for the government of Kenya
A. Fines B. Taxes
C. Loans D. Licences

60. Libya was colonized by
A. Britain B. Spain
C. Italy D. Belgium

C.R.E

61. According to the stories of creation in Genesis chapter 1 and 2 human beings were to care for the environment by ____
A. Naming the animals
B. Tilling the land
C. Building shelters
D. Building shrines
62. The story of Noah and the flood mainly teaches christians that
A. They should protect their lives
B. Families are important
C. They should protect their animals
D. Those who sin are punished
63. The Shunamite woman welcomed prophet Elijah into her house by ____
A. Giving him clothes
B. Giving him a place to stay
C. Pouring oil on his feet
D. Washing his clothes
64. The main lesson christians learn from the miracle of the miraculous catch of fish is that they should ____
A. Be committed to their work
B. Work with others
C. Be ready to serve God
D. Obey God's word

65. When David was anointed by prophet Samuel he was
A. Going to fight with Goliath
B. Taking food to his brothers
C. Playing music to King Saul
D. Herding the father's sheep

66. King Herod wanted to kill baby Jesus because
A. Jesus was born in Bethlem
B. Jesus was born in a poor family
C. He feared that Jesus would become famous
D. Jesus came from the house of David

67. Which one of the following events took place on the eighth day after Jesus was born
A. The angel appeared to Mary
B. Jesus was circumcised
C. The angel appeared to the sherpherds
D. Jesus was dedicated

68. What was Saul going to do in Damascus when he was blinded by a strong light?
A. meet with Anamians
B. persecute the believers
C. be baptised
D. meet with the gentiles

69. What did Simeon say about baby Jesus when he was presented in the temple
A. He would feed the hungry
B. His name would be holy
C. He would be a light to the gentiles
D. He would show mercy to the people

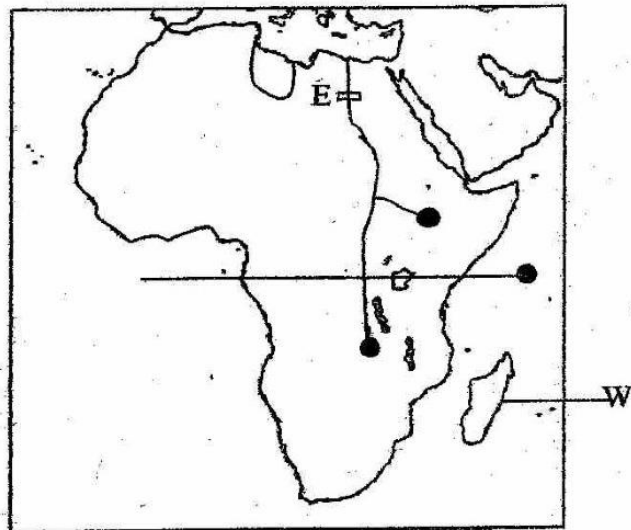
70. Moses was hesitating to accept the call of God to go and liberate the Israelites from Egpyt because he ____
A. was a coward
B. was not a good spokesman
C. killed an Egyptian
D. was busy shepherding Jethro's sheep

- A. livestock keeping
B. blacksmith skills
C. farming
D. circumcision
25. Citizens of a country may fail to respect laws due to the following reasons EXCEPT.
A. Tribalism
B. enacting anti - corruption agencies
C. lack of employment
D. religious differences
26. The meaning of climate is _____.
A. the daily weather condition of a place over a long period of time
B. the average weather condition of a place over a long period of time
C. the daily temperature records of given place
D. the amount of moisture in the atmosphere
27. What is the time in Accra on longitude 0° when the time in Nyeri on longitude is 35°E is 2pm.
A. 11:40am B. 8:45am
C. 2:00pm D. 4:20pm
28. Nomadic pastoralists keep large numbers of cattle mainly because _____.
A. they depend on cattle for their livelihood
B. they have large tracks of grazing land
C. they use the cattle to pay bride price
D. they are likely to lose some of the cattle through diseases
29. The revolution of the earth causes _____.
A. changes in the direction of wind
B. day and night
C. formation of clouds
D. the four seasons
30. Countries that experience mediterranean climate mainly receive rainfall during _____

- A. Winter B. Summer
C. Autumn D. Springs

31. European countries scrambled for colonies in Africa in the nineteenth century mainly to _____.
A. obtain raw materials
B. stop slave trade
C. explore the continent
D. spread christianity

Use the map Africa to answer questions 32 - 33



32. Which crop is mainly grown in the area marked W?
A. Cocoa
B. Sugarcane
C. Pyrethrum
D. Cloves
33. The river project marked E was mainly started for
A. generating water for H.E.P
B. Tourist attraction
C. Domestic and industrial use
D. Provide water for irrigation
34. Below are methods of weather observations
i. Use of weather observations instrument
ii. Observing the clouds
iii. Croaking of the frogs
iv. Migration of birds and animals

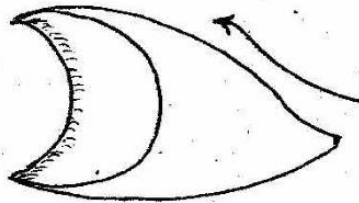
Which one of the following combinations can be used in modern days

- A. ii, iii B. i, ii
C. ii, iv D. i, iv

35. The following are benefits of interaction among communities. Which one is not?

- A. creating misunderstanding among people
B. learning new skills and ideas
C. easier exchange of goods
D. reduction of insecurity among communities

36. The diagram below is found mainly in _____



- A. plains B. highlands
C. deserts D. plateaus

37. Which one of the following political parties below was formed before 1945

- A. Kenya People's Union
B. Kikuyu Central Association
C. African People's Party
D. Kenya African National Union

38. The main action the government should take to control the destruction of forests in Kenya is

- A. punish those who cut trees
B. fence forested areas
C. enforce laws to protect forest
D. educate citizens on importance of forests

39. The main tourist attraction in Kenya is _____

- A. wildlife B. sandy beaches
C. good weather D. indian ocean

40. The main reason for establishment of settlement schemes in Kenya was to solve the problem of _____

- A. land fragmentation
B. land consolidation
C. landlessness
D. land disputes

41. Which one of the following is not exported by Kenya?

- A. crude oil
B. soda ash and salt
C. wheat and sugar
D. tea

42. The government of Kenya ensures that the goods in the market are of acceptable standards through the _____

- A. Kenya Anti-Corruption Commission
B. Kenya Bureau of Standards
C. Department of weights and measures
D. Ministry of trade.

43. The Senior most Civil Servant in a ministry is

- A. The Clerk
B. Cabinet Secretaries
C. The President
D. The Principal Secretary

44. The main function of the Kenya Defence Force is to _____

- A. promote peace in the country
B. they ensure there is good governance
C. to ensure safety of tourist
D. defend the nation against external attack

45. The main reason why Kenya trades with other countries is to _____

- A. promote friendly relations
B. earn foreign exchange and obtain necessary goods
C. promote cultural exchange
D. obtain machinery

71. Christians can best show respect to authority by _____
- voting for leaders
 - taking part in development of projects
 - Obeying the laws of the land
 - Praying for the leadership of their countries
72. The following happened in the night of the passover except
- the Israelites ate boiled meat
 - the Israelites ate unleavened bread
 - the Israelites ate bitter herbs
 - the Israelites ate in haste
73. Who appeared to Jesus during the transfiguration?
- Isaiah and Micah
 - Nathan and Samuel
 - Elijah and Moses
 - Ezekiel and Isiah
74. Why is Jesus referred to as the lamb of God?
- was led to death like a lamb that takes away the sins of the world
 - he died during the passover
 - he is the sacrificial lamb that takes away the sins of the world
 - he is the victim who bears the sins of the world
75. People in the traditional African Society were encouraged to marry mainly to _____
- have a companion
 - get children
 - Avoid sexual misuse
 - to avoid loneliness
76. Which among the following did the missionaries not create?
- recreation centres
 - religious centres
 - health facilities
 - formal education
77. The two followers of Jesus walking to Emaus came to know that he was the risen lord when he _____
- asked them what they were talking about
 - shared bread with them
 - accepted to stay with them
 - explained to them the written word
78. The virtue of self - control is best shown by christians when they _____
- honour those in authority
 - obey rules of the society
 - tolerate those who mistreat them
 - care for the sick
79. "I inherited the vineyard from my ancestors" Naboth replied. "The lord forbid that I should let you have it" (1 Kings 21:3) From this incident of King Ahab and Naboth, christians learn that they should _____
- work as a team
 - enjoy the fruits of their labour
 - look after their gardens
 - be fair in their dealings
80. After angel Gabriel told Zechariah that his wife would bear him a son, Zechariah was unable to speak because he _____
- he was so shocked to hear the news
 - did not want anybody to know the message given
 - had been told not to tell anyone else
 - did not believe in the message
81. Which one of the following teachings from the creation stories is found in both christianity and traditional African communities? Human beings _____
- were created on the sixth day
 - were created on the image of God
 - should take care of the creation
 - should offer sacrifices to God

82. When people were wealthy in Traditional African Societies, the main explanation given was that they were
- blessed by God
 - hard working
 - generous
 - wise
83. Which one of the following activities by Christians today is an example of the gift of the holy spirit?
- reading the bible
 - collecting the offering
 - cleaning the church
 - healing the sick
84. Which one of the following acts were performed by elders in traditional African society during worship?
- sacrificing animals
 - baptising members
 - reciting the creed
 - serving the holy communion
85. Kamanda found two class seven boys fighting. What should be the BEST thing for Kamanda to do?
- report the matter to the class teacher
 - help the weaker boy to fight the other
 - talk to them on the dangers of fighting
 - Inform their parents
86. You have noticed that your friend Ruth is being used to sell Chang'aa after classes in the evening without the teacher's knowledge. What advice would you give Ruth? She should
- sell the drink but not to take it
 - stop selling it and seek counselling
 - save the money that she is paid
 - ensure that she is not arrested by the police
87. After completing the Kenya Certificate of Primary education, Otung'olo donated his primary school textbooks to the needy pupils. Which one of the following fruits of the holy spirit is Otung'olo portraying
- Joy
 - Faith
 - Charity
 - Love
88. Christine a standard eight pupil realizes that she forgot her Mathematics home work a few minutes before the teacher comes in class. The right action for Christine to take is to _____
- rush home and complete the homework
 - leave the class until the mathematics lesson is over
 - quickly copy the homework from another pupil
 - go and apologise to the teacher and promise to present the homework later
89. Kamencu refuses to sweep the classroom. He should be taught the value of being
- hardworking
 - responsible
 - honest
 - faithful
90. Timothy a standard seven pupil has been asked to give money to the games captain so as to be allowed to play in the school football team. As a Christian, which action should he take?
- pay the money required and keep quiet
 - tell him it is wrong
 - announce it to the others in the assembly
 - report the matter to the games teacher