

GATUNDU DISTRICT
ASSESSMENT TEST END OF TERM II 2014
STD. 4 ENGLISH

Fill in the blank spaces for questions 1-15

The bride was in a 1 white 2. The handsome bridegroom 3 very smart in his 4 suit and polished 5 The black shoes really 6 with the black suit. 7 the bride and the bridegroom 8 9 into the 10. Everybody watched the 11 walking hand in hand. All their 12 and relatives had 13. The 14 was full to capacity. Everybody was in a 15 mood.

- | | |
|----------------|--------------|
| 1. A. beatiful | B. Beutiful |
| C. beautifull | D. beautiful |
| 2. A. dress | B. shirt |
| C. blouse | D. pyjama |
| 3. A. were | B. was |
| C. are | D. is |
| 4. A. black | B. brack |
| C. blake | D. bruck |
| 5. A. shoe | B. shoes |
| C. sheoses | D. sheos |
| 6. A. marched | B. matched |
| C. matching | D. march |
| 7. A. Also | B. All |
| C. and | D. both |
| 8. A. walk | B. walking |
| C. walked | D. worked |
| 9. A. slowly | B. slow |
| C. slowerly | D. slowest |
| 10. A. chuch | B. church |
| C. chursh | D. churches |
| 11. A. two | B. too |
| C. to | D. tow |
| 12. A. frends | B. fliends |
| C. freinds | D. friends |
| 13. A. came | B. comed |
| C. come | D. comes |
| 14. A. church | B. churches |
| C. search | D. chulch |
| 15. A. happily | B. happy |
| C. happiest | D. huppy |

Complete the following

- | | |
|-------------------------|--------------|
| 16. As brave as a _____ | |
| A. goat | B. sheep |
| C. cow | D. lion |
| 17. As happy as a _____ | |
| A. king | B. soldier |
| C. failure | D. carpenter |
| 18. As hot as _____ | |
| A. water | B. smoke |
| C. fire | D. rain |

Write the feminine of the following

- | | |
|------------------|-----------|
| 19. Uncle _____ | |
| A. ant | B. auntie |
| C. aunt | D. mother |
| 20. Nephew _____ | |
| A. nice | B. niece |
| C. neece | D. niece |

21. Bull _____
 A. calf
 C. cow
 B. kid
 D. Bitch

Choose the correct word for the following

22. Tony keeps a large _____ of sheep for wool
 A. Bunch
 C. flock
 B. herd
 D. fleet
23. A _____ of players won the game
 A. spectators
 C. congregation
 B. team
 D. choir

Choose the opposites of the given words

24. Empty _____
 A. something
 C. full
 B. nothing
 D. filled
25. Right _____
 A. long
 C. correct
 B. wrong
 D. hard
26. Difficult _____
 A. cheap
 C. expensive
 B. easy
 D. fail

Write the young ones of the following

27. Cow _____
 A. kitten
 C. cub
 B. calf
 D. lamb
28. Lion _____
 A. lamb
 C. kitten
 B. calf
 D. cub

Write the plural of the following

29. chief _____
 A. chieves
 C. chief
 B. chiefs
 D. chieve
30. Ox _____
 A. oxes
 C. ox
 B. oxen
 D. oxs

Read the passage carefully and answer question 31-40

There once lived a giraffe and a fox in a park. They were good friends. Whenever they got time they used to sit under a tree near the stream and passed time happily by talking on different topics.

One day when the fox was roaming, he saw nice grapes in the farm on the other side of the stream. As the stream was **deep**, it was not possible for him to cross it. On the following day when he met the giraffe, he told him about the grapes. The giraffe agreed to take him on his back to the other side of the stream. After crossing the stream the giraffe and the fox entered the farm and started eating grapes. While eating the grapes, the fox started singing which made the owner of the grapes to come running. The fox ran out of the farm through a hole thereby making the giraffe be beaten thoroughly to an extent of breaking its back.

31. Two animals that used to pass their time were
 A. Fox and the owner
 B. Giraffe and the owner
 C. Giraffe and the fox
 D. Giraffe, owner and the fox

32. How were the animals passing time?
 A. They were good friends
 B. Sat under a tree
 C. Passes time happily
 D. Talking on different topics
33. What did the fox see?
 A. Stream
 B. Giraffe
 C. Nice grapes
 D. Other sides of the farm
34. What is the opposite of the word "deep"?
 A. Deep
 B. Shallow
 C. Wide
 D. Broad
35. Why was the fox unable to cross stream?
 A. Its cunning
 B. It was shallow
 C. It was deep
 D. The fox was lazy
36. How was the fox carried to the other side of the stream?
 A. Lifted up
 B. On giraffe's neck
 C. On giraffe's back
 D. Crossed over on foot
37. What happened after crossing over the river?
 A. The giraffe entered the farm
 B. The fox entered the farm
 C. They both entered to farm
 D. We are not told
38. Immediately after entering the farm the fox and the giraffe
 A. they entered the farm
 B. started eating the grapes
 C. the fox started singing
 D. the owner of the farm came
39. _____ came running when the fox started singing
 A. The owner of the farm
 B. The giraffe
 C. The fox
 D. Both the fox and giraffe
40. The best title of the story is
 A. The cunning fox
 B. The cunning fox
 C. The cunning fox
 D. The fox was sad how
41. How was the man?
 A. Young
 B. Old
 C. Youth
 D. Like a baby
42. The man lived with?
 A. His wife and four sons
 B. His sons only
 C. His wife only
 D. None of the above
43. The family was made up of _____ members
 A. six
 B. four
 C. five
 D. three
44. The man and his family lived in?
 A. Town
 B. Hospital
 C. Village
 D. Church
45. What was common among the four sons?
 A. playing
 B. singing
 C. fighting
 D. shouting
46. How did the old man feel about his sons behaviour?
 A. sad
 B. pleased
 C. unhappy
 D. excited
47. What was the name of the old man?
 A. Paul
 B. Peter
 C. James
 D. John
48. What did the old man own?
 A. farm
 B. shop
 C. car
 D. school
49. When Paul realised that he was going to die which action did he take?
 A. called his wife
 B. called his mother
 C. called his four sons
 D. called his father
50. What did the old man give the four sons after they came into his bedroom?
 A. piece of advice
 B. presents
 C. money
 D. Blessings

Read the following passage and answer questions

41-50

Once upon a time, there lived an old man with his wife. His name was Paul. He lived with his four sons in a village. He had a farm but the family was poor as the four sons were always busy in fighting instead of helping their father in cultivating the land. So the old man was very unhappy.

When Paul knew that he was going to die he called his four sons to his bedside and told them to sit down. He gave them a piece of advice and they changed.

41. How was the man?
 A. Young
 B. Old
 C. Youth

WILAYA YA GATUNDU
MHULA WA PILI 2014
DARASALANNE KISWAHILI

Soma kifungu kifuatacho, kina nafasi 1-15. Chagua jibu lifaalo kujaza pengo

Ajira 1 watoto ni kazi 2 fanywa na watoto 3 kupata malipo. kazi zifanywazo 4 watoto huwa 5 nyumba, shamba au kampuni. Wafanyapo kazi 6 muda 7 wengi 8 wananyimwa chakula, wanalipwa 9 ndogo na pia wanateswa. Ajira ya watoto 10 haki zao.

- | | |
|------------------|-------------|
| 1. A. na | B. ya |
| C. wa | D. za |
| 2. A. zinazo | B. inayo |
| C. wanayo | D. anayo |
| 3. A. ya | B. hili |
| C. ili | D. pia |
| 4. A. kwa | B. ya |
| C. na | D. wa |
| 5. A. miongoni | B. nyuma ya |
| C. mbele ya | D. katika |
| 6. A. na | B. kwa |
| C. wa | D. la |
| 7. A. mrefu | B. warefu |
| C. kirefu | D. urefu |
| 8. A. kwao | B. yao |
| C. wao | D. zao |
| 9. A. ujira | B. kijira |
| C. majira | D. ujiraji |
| 10. A. wanavunja | B. inavunja |
| C. zinavunja | D. anavunja |

Kuna aina 11 za michezo. Michezo huisaidia 12 yetu kukua vizuri na 13 na afya njema. Michezo pia huburudisha 14 zetu. Hebu natufurahie 15 wetu a kucheza.

- | | |
|---------------|---------------|
| A. tofauti | B. mbarimbari |
| C. mbalimbali | D. wengine |
| 2. A. mwili | B. miili |
| C. miili | D. mila |
| 3. A. kua | B. hua |
| C. huwa | D. kuwa |
| 4. A. hakili | B. halali |
| C. akiri | D. akili |
| 15. A. vijana | B. ujana |
| C. jana | D. kijana |

kutoka swali la 16- 30 jibu kila swali kulingana na maagizo uliyopewa.

16. Andika kwa wingi Mbuzi huyo anakula
A. mambuzi hayo yanakula
B. mbuzi hao wanakula
C. mbuzi hizo zinakula
D. mbuzi hawa wanakula
17. Kanusha sentensi hii Wewe umefika
A. wewe hukufika B. wewe hufiki
C. wewe hujafika D. wewe hautafika
18. Nyumba ya ndege huitwa _____
A. zizi B. kizimba
C. kuchuguu D. kiota
19. Tegua kitendawili hiki Achora lakini hajui achoracho

- | | |
|-------------|---------------|
| A. konokono | B. nyoka |
| C. chura | D. mwanafunzi |

20. Andika kwa tarakimu Mia tano thelathini na tatu
A. 583 B. 5083
C. 533 D. 50033

21. Kamilisha methali hii kawia _____
A. ushike B. sana
C. hajikwai D. ufike

22. Umbo hili huitwa _____
A. mche mraba
B. mche duara
C. mkebe
D. mche mstatili



23. karatasi _____ iliraruliwa
A. yote B. zote
C. lote D. chote

24. Babu yangu ananiita _____
A. mpwa B. binamu
C. mwana D. mjukuu

25. Nawa mikono _____ kula
A. kati ya B. kabla ya
C. kando ya D. juu ya

26. Nomino gari liko katika ngeli ipi?
A. LI-YA B. I-ZI
C. KI-VI D. U-YA

27. Jiwe limetumbukia majini _____
A. kubu B. chuu
C. chubwi D. pacha

28. Mama ali _____ nguo akitumia maji na sabuni
A. vaa B. fua
C. vaa D. faa

29. Mtu akikwambia pole utamjibu
A. shukrani B. karibu
C. nimeshapoa D. asante

30. Tumia amba- kukamilisha sentensi hii Mlango _____ ulivunjika ni huu
A. ambao B. ambayo
C. ambapo D. ambazo

Soma taarifa ifuatayo kisha ujibu maswali 31-40

Paliondokea mzee mmoja aliyetwa Boji. Mzee huyu alifanya kazi katika idara ya Reli. Aliishi pamoja na mkewe na wanao watatu.

Boji aliishi katika nyumba ndogo katika hifadhi ya wanyama pori ya Tsavo.

Aliwafundisha wanawe umuhimu wa utii. Nao watoto wa Boji waliyazingatia mashauri ya baba yao.

Sababu moja kubwa iliyomfanya mzee Boji kujuta ni kuwa yeye mwenyewe alikataa kumtii babaye hapo zamani. Alikataa kwenda shule na kufanya kazi ya kuchunga. Hata hivyo, aliona kuwa majuto ni mjukuu.

Karibu na reli, Boji na wenzake walilima vishamba vidogo. Walipanda mahindi, mbaazi na kunde.

31. Mzee Boji, alifanya kazi katika _____
A. wizara ya Reli
B. idara ya Reli
C. hifadhi ya wanyamapori
D. shirika la Tsavo

32. Mzee Boji alikuwa na watoto wangapi?
A. wawili B. mmoja
C. watatu D. watano
33. Nyumba ya Boji ilikuwa _____
A. kubwa B. nzuri
C. mbovu D. ndogo
34. Boji aliwafundisha wanawe _____
A. uti B. upole
C. heshima D. ujeuri
35. Sababu ya Boji kujuta ni _____
A. kukataa shule B. kusoma kwa bidii
C. kumti babaye D. kususia kazi
36. Badala ya kuelimika, Boji alifanya kazi gani?
A. kulima B. kuchunga
C. biashara D. ya reli
37. Majuto ni _____
A. mengi B. ya mungu
C. mjukuu D. hasara
38. Mzee Boji na wenzake walifanya Kazi gani nyingine?
A. ukulima B. kupika
C. ufundi D. kinyozi
39. Ni mimea ipi ambayo Boji na wenzake hawakupanda?
A. mahindi B. mbaazi
C. kunde D. maharagwe
40. Neno mashauri limepigiwa mstari maana yake ni _____
A. hadithi B. maonyo
C. kelele D. mawaidha

44. Ni nini kilichopunguza kasi ya magari?
A. mishipi ya usalama
B. idadi ya abiria
C. madereva wenye nidhamu
D. vidhibiti mwendo
45. Viti garini vilitiwa?
A. mishipi mieupe B. mavazi rasmi
C. vidhibiti mwendo D. mishipi ya usalama
46. Ni rahisi kuwatambua madereva na utingo kwa kuwa _____
A. wana nidhamu
B. wana vitambulisho
C. wamevaa mavazi rasmi
D. wanaheshimu abiria
47. Umma ni _____
A. sawa na uma B. watembezi
C. watu kwa jumla D. wasafiri
48. Abiria ni _____
A. mizigo B. watembezi
C. wateja D. wasafiri
49. "Wateja wao"- maneno haya kwa umoja ni _____
A. mteja wake
B. mteja wangu
C. mteja wako
D. mteja wao
50. Kichwa mwafaka cha habari hii ni _____
A. magari
B. usafiri
C. barabara
D. safari

Soma kifungu kifuatacho kisha ujibu maswali 41 -50

Kufikia mwishoni mwa mwaka wa 2003, ajali za barabarani zilikuwa zikisababisha maafa makubwa nchini mwetu. Lakini mwanzoni mwa mwaka wa 2004, serikali kupitia kwa waziri wa uchukuzi ikaimarisha sheria zote za barabarani. Mara sheria hizi zilipotiliwa mkazo na kuzingatiwa vidhibiti mwendo zikatiwa kwenye magari yote ya uchukuzi wa umma. Isitoshe kila kiti garini kilihitajika kiwe na mshipi wa usalama wa kutumiwa na abiria.

Magari yahitajika kubeba tu idadi ya abiria inayoruhusiwa kisheria. Nidhamu ya madereva na utigo wao uliimarishwa na walipaswa kuvaa mavazi rasmi na kuonyesha keshima kwa wateja wao wote.

Mambo hayo yalifanya ajali za barabarani kupungua kwa kiasi kikubwa, usafiri kuvutia na kuwa na utulivu na salama salimini.

41. Maafa yaliyotajwa katika aya ya kwanza yalitokana na _____
A. ajali za barabarani
B. ajali mbili
C. ajali mbaya
D. magari
42. Sheria za barabarani ziliimarishwa lini?
A. mwanzoni mwa mwaka
B. mwaka 2004
C. mwaka 2003
D. waziri wa uchukuzi
43. Nani aliyesaidia kuimarisha sheria hizi?
A. madereva
B. utingo
C. waziri wa uchukuzi
D. madereva na utingo wao

**GATUNDU DISTRICT
ASSESSMENT TEST END OF TERM II 2014
STD 4 MATHEMATICS**

- Which one of the following numbers is ten thousand, two hundred and two?

A. 100,202 B. 102,202
C. 10,202 D. 10,402
- What is the place value of digit 2 in the number 27108?

A. Ten thousands B. Thousands
C. Hundred thousands D. Millions
- What is the total value of digit 5 in the following number? 67532

A. 5000 B. 500
C. Hundreds D. 532
- A carton holds 18 bottles of a certain fruit juice. How many bottles are there in 216 such cartons?

A. 12 B. 3788
C. 2044 D. 3888
- In a school there are 371 boys and 348 girls. How many pupils are there altogether?

A. 348 B. 709
C. 719 D. 729
- Johnson had 303 fish. She sold 189. How many fish remained?


A. 114 B. 124
C. 214 D. 14
- A teacher received nine new pupils. She shared 72 exercise books among them equally. How many exercise books did each receive?

A. 7 B. 9
C. 6 D. 8
- Which among the following numbers are divisible by 2, 5 and 10?

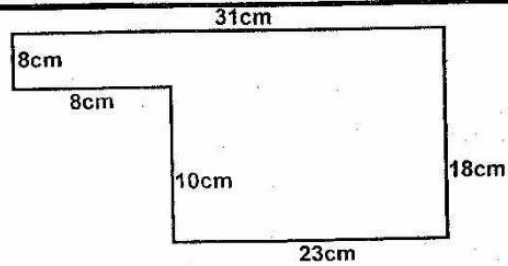
A. 20, 35, 100 B. 10, 30, 90
C. 4, 5, 10 D. 5, 8, 12.
- Find the missing number in the sequence 96, 48, 24, 12, ____, 3

A. 8 B. 4
C. 9 D. 6
- What fraction is shaded?

A. $\frac{4}{10}$ B. $\frac{3}{10}$
C. $\frac{6}{10}$ D. $\frac{5}{10}$


- Work out $33.33 + 33.3 + 333$

A. 39.99 B. 399.63
C. 3999 D. 39.963
- What is the perimeter of the figure shown?



- A. 134cm B. 124cm
C. 98cm D. 116cm
- A journey from Nairobi to Lamu is 2 days. How many hours are these?

A. 12hrs B. 24hrs
C. 36hrs D. 48hrs
- Work out

sh.	cts
7	35
+32	80
<u> </u>	<u> </u>
40	15

A. sh.30 15cts B. sh.40 15cts
C. sh.40 25cts D. sh.39 15cts
- A school has t boys, n girls and y teachers. How many people are there in the school?

A. $t+n-y$ B. $t+n+y$
C. tny D. $t-n-y$
- Work out:

Weeks	Days
43	5
+11	2
<u> </u>	<u> </u>
54	7


A. 55 wks 0 dys B. 45wks 7dys
C. 55wks 7dys D. 55wks 7wks
- Which of the following numbers are odd only?

A. 57, 43, 31 B. 30, 14, 18
C. 17, 19, 22 D. 26, 34, 45
- Alvon bought 6 half kilograms of rice, 5 half kilograms of sugar and 3 half kilograms of flour. What mass was he carrying altogether?

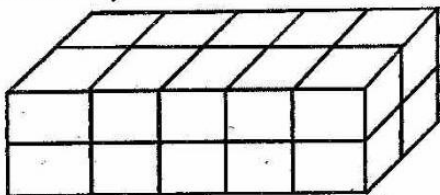
A. 14kg B. 7kg
C. $2\frac{1}{2}$ kg D. $\frac{1}{2}$ kg
- $4\sqrt{524}$

A. 130 rem 1 B. 132
C. 131 rem 1 D. 131
- What time is shown in the following clock face?

A. Quarter to 10 o'clock
B. Quarter to 4 o'clock
C. 20 minutes past 9 o'clock
D. 9 minutes past 4 o'clock




21. Write 0.97 as a fraction
 A. $\frac{97}{10}$ B. $\frac{97}{100}$
 C. $\frac{97}{1000}$ D. $\frac{97}{1}$
22. How many quarter litres are there in 10 litres?
 A. 9 B. $\frac{1}{4}$
 C. 20 D. 40
23. Work out $3k+3m+2m+3k$
 A. $6k+6m$ B. $11+k+m$
 C. $6k+5m$ D. $11k+m$
24. Wahinya drove 343 km from Nyeri to Kisumu. He then took a bus to Nakuru a distance of 247 km. How many kilometres did he travel altogether?
 A. 590km B. 96km
 C. 1343km D. 580km
25. Which of the following numbers is divisible by both 5 and 10?
 A. 455 B. 375
 C. 570 D. 545
26. If the date today is 12th April, what will be the date after a fortnight?
 A. 19th April B. 26th April
 C. 3rd May D. 10th May
27. Convert 800cts into shillings?
 A. sh 80 B. sh 800
 C. 8 sh D. 0.8 sh
28. Mrs Karanja's class has 35 pupils. Each pupil was given six exercise books. How many books did they receive altogether?
 A. 210 B. 200
 C. 180 D. 41
29. How many cubes form the stack below?



- A. 25 B. 5
 C. 10 D. 20
30. The angle drawn below is called _____
 A. obtuse angle B. Right angle
 C. Triangle D. Acute angle?
31. Find the area of the shaded part?



- A. 16cm^2 B. 32cm^2
 C. 12cm^2 D. 24cm^2
32. Work out: $\frac{1}{3}$ of 15?

- A. 45 B. 19
 C. 5 D. 12
33. How many points of intersections are there in the figure below?

 A. 3
 B. 2
 C. 4
 D. 5
34. How many $\frac{1}{2}$ kgs are there in 7kgs?
 A. 12 B. 7
 C. 14 D. 8
35. Work out $14.04+0.21+4.1=$
 A. 18.35 B. 14.25
 C. 14.66 D. 35.04
36. Arrange the following fractions from the greatest to the smallest.

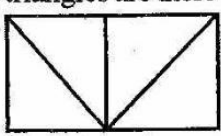
- A. $\frac{1}{8}, \frac{1}{7}, \frac{1}{5}, \frac{1}{3}$
 B. $\frac{1}{3}, \frac{1}{7}, \frac{1}{5}, \frac{1}{8}$
 C. $\frac{1}{8}, \frac{1}{7}, \frac{1}{3}, \frac{1}{5}$
 D. $\frac{1}{3}, \frac{1}{5}, \frac{1}{7}, \frac{1}{8}$

37. Work out:

Week	Days
8	3
-7	5

 A. 1 week 2 days B. 0 weeks 5 days
 C. 15 weeks 8days D. 0 weeks 8 days

38. What is the area of a square whose side measures 22 cm?
 A. 324cm^2 B. 524cm^2
 C. 444cm^2 D. 484cm^2
39. A packet of sweets has 10 sweets. How many sweets are there in 14 packets?
 A. 24 B. 140
 C. 120 D. 48
40. What is the sum of all even numbers between 9 and 21?
 A. 6 B. 80
 C. 90 D. 100

41. How many triangles are there in the figure below?

 A. 4 B. 5
 C. 6 D. 8
42. Which of the following fractions is equal to 1 whole?
 A. $\frac{17}{17}$ B. $\frac{9}{11}$

- C. $\frac{12}{13}$ D. $\frac{6}{5}$
43. Multiply $3 \times 0 \times 5 =$
 A. 0 B. 15
 C. 150 D. 5
44. What is the sum of 86416 and 13492?
 A. 99808 B. 72924
 C. 99908 D. 99808
45. Write $\frac{7}{11}$ in words
 A. Eleven sevenths
 B. Seven and eleven
 C. Eleven and seven
 D. Seven elevenths
46. How many 50 shillings notes are there in two hundred shillings?
 A. 100 B. 50
 C. 5 D. 4
47. Jane is 25 cm taller than John. If Jane is 1 m 53 cm tall. How tall is John?
 A. 78m B. 1m 28cm
 C. 1m 78cm D. 1m 32cm
48. Which number comes just before 21010
 A. 21009 B. 20,007
 C. 21011 D. 21099







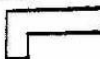
Use the table below to answer questions 49 and 50. It shows number of vehicles that passed on a certain day on a certain road.

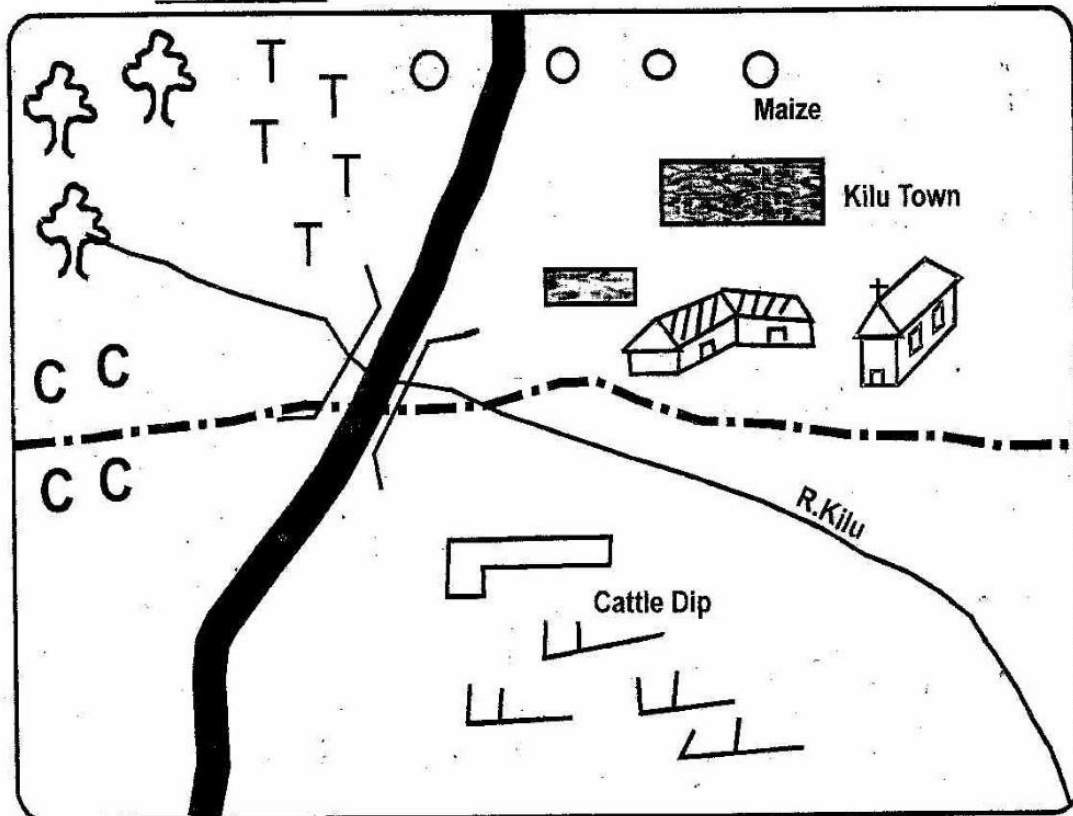
Vehicle	Tally Marks
Cars	
Buses	
Lorries	
Taxis	

49. The highest number of vehicles that passed in the road.
 A. Cars B. Taxis
 C. Lorries D. Buses
50. Which vehicles had 10 tally marks?
 A. Buses B. Cars
 C. Lorries D. Taxis

GATUNDU DISTRICT
ASSESSMENT TEST TERM II 2014
STD 4 SOCIAL STUDIES
KILU AREA

KEY

-  Forest
-  Tarmac Road
-  Grass
-  Locational Boundary
-  Kilu Town
- CC** Coffee
- TTT** Tea
-  Church
-  School



Use the map to answer questions 1 - 7

1. The main means of transport in Kilu area is _____
 A. Road B. Rail
 C. Water D. Air
2. Which is the direction of the school from the church?
 A. South West B. West
 C. East D. North East
3. The lowest side of Kilu is in the _____
 A. N.E B. S.W
 C. S.E D. N.W
4. The animals which are kept by the people of this area are likely to be _____
 A. Pigs B. Goats
 C. Camels D. Dairy cattle
5. Which crop is not grown in Kilu area?
 A. Coffee B. Tea
 C. Maize D. Sisal
6. Kilu area is under?
 A. One chief B. Three chiefs
 C. Two chiefs D. Four chiefs
7. The people of Kilu area are likely to be
 A. Pagans B. Christians
 C. Muslims D. Hindus
8. Dairy cattle are mainly kept for
 A. Meat B. Milk

9. Buying and selling of goods is known as _____
 A. Shopping B. Trade
 C. Transport D. Hawking
10. Children whose parents are dead are called
 A. Orphans B. Widows
 C. Refugees D. Disabled
11. The point of direction between East and South is called _____
 A. North West B. North East
 C. South East D. South West
12. The people who hunt wildlife without a licence are called _____
 A. Poachers B. Thieves
 C. Smugglers D. Robbers
13. Rules made by a community to guide the behaviour of people are _____
 A. Cultural laws B. Moral laws
 C. Restrictions D. Rules
14. Bees are kept for _____
 A. Meat B. Eggs
 C. Milk D. Honey
15. Our county is called
 A. Gatundu B. Kenya
 C. Kiambu D. Thika
16. The maasai called their God
 A. Ngai B. Enkai
 C. Asis D. Mulungu

17. Which one is not a traditional industry?
 A. Weaving B. Wood carving
 C. Pottery D. Car making
18. Areas with low population are said to be _____ populated
 A. Densely B. Many
 C. Fewer D. Sparsely
19. _____ measures the hotness or coldness of a place
 A. Thermometer B. Rain gauge
 C. Barometer D. Anemometer
20. Who is the head of a school?
 A. Secretary B. Classteacher
 C. Gateman D. Headteacher
21. _____ is a major industrial town in Kiambu county
 A. Kikuyu B. Gatundu
 C. Githunguri D. Thika
22. Crops grown to be eaten at home are called?
 A. Crops B. Cashcrops
 C. Food crops D. Weeds
23. When we are sick we go to _____
 A. School B. Hospital
 C. Church D. Toilet
24. The walls of the Rift valley are called
 A. Walls B. Escarpment
 C. Valley D. Plain
25. Broilers are kept for _____
 A. Meat B. Wool
 C. Eggs D. Milk
26. The height above sea level of a place is called _____
 A. Plain B. Plateau
 C. Hill D. Altitude
27. _____ is a person who belongs to a particular country.
 A. Citizen B. Patriotic
 C. Loyalist D. Obedient
28. Which one of the following is NOT a right of children
 A. Life B. Trade
 C. Good health D. Education
29. Many people in our county use _____ transport
 A. Road B. Railway
 C. Air D. Water
30. Who is the deputy president in Kenya?
 A. Kalonzo Musyoka B. Raila Odinga
 C. William Ruto D. Martha Karua
31. Areas where beef cattle are kept are called _____
 A. Ranches B. Cattle dip
 C. Cattle boma D. Cattle troughs
32. Which one of the following is not an importance of forests?
 A. Prevents soil erosion
 B. Provide timber
 C. Good areas for hiding poachers
 D. Make land look beautiful
33. Green houses are special sheds for growing _____
 A. Coffee B. Flowers
 C. Tea D. Pineapples
34. Which one among the following was not a traditional ceremony.
 A. Birth and naming B. Baptism
 C. Initiation D. Marriage
35. _____ is the main language group in Kiambu county
 A. Bantu B. Cushites
 C. Arabs D. Nilotes
36. National parks and game reserves are managed by government through _____
 A. Ministry of education
 B. Kenya wildlife service
 C. Kenya police
 D. Kenya army
37. Lake Olposat is found in _____ county
 A. Kiambu B. Nyandarua
 C. Murang'a D. Nakuru
38. The ruling party in Kenya is _____
 A. CORD B. TNA
 C. Jubilee D. URP
39. Democracy in school allows pupils to do all the following except _____
 A. Choosing leaders
 B. Sharing ideas
 C. Participating in games
 D. Forming tribal clubs
40. On every 20th October we celebrate national day known as _____
 A. Moi day B. Mashujaa day
 C. Republic day D. Madaraka day
41. Deforestation leads to _____
 A. Growing of large trees
 B. Desertification
 C. Good climate
 D. Permanent rivers
42. Air in motion is called _____
 A. Temperature B. Air pressure
 C. Wind D. Rainfall
43. The sun rises from the _____
 A. West B. East
 C. South D. North
44. The bottom colour of the national flag is _____
 A. White B. Red
 C. Black D. Green
45. A _____ gives us directions
 A. Key B. Symbol
 C. Compass D. Scale
46. People who treat sick animals are called _____ officers
 A. Medicine men B. Field
 C. Doctor D. Veterinary
47. Skills such as medicine and blacksmith were taught by _____ method.
 A. Reading B. Story telling
 C. Apprentice D. Learning
48. Vegetation that grows on its own is called _____

vegetation.

49. Trees give us _____
A. Natural
B. Artificial
C. Man-made
D. Planted
50. Watering crops is called _____
A. Paper
B. Grazing
C. Farming
D. Irrigation
51. The famous Agikuyu prophet was called _____
A. Wangari Maathai
B. Uhuru Kenyatta
C. Jomo Kenyatta
D. Mugo wa Kibiru
52. Removing minerals from the ground is called _____
A. Digging
B. Mining
C. Lumbering
D. Fishing
53. People's way of life is known as _____
A. Tradition
B. Behaviour
C. Culture
D. Action
54. People who come to our country to see wild animals are called _____
A. Tourists
B. Poachers
C. Wardens
D. Hunters
55. The red colour in our flag stand for _____
A. People
B. Blood
C. Vegetation
D. Peace
56. An area of wetland is called _____
A. Swamp
B. Plain
C. Forest
D. Valley
57. A person who walks on foot is called a _____
A. Motorist
B. Pedestrian
C. Footer
D. Cyclist
58. We get water from _____
A. Hill
B. Shamba
C. Forest
D. River
59. Which one of the following is not a member of poultry?
A. Pigs
B. Ducks
C. Turkey
D. Geese
60. Riverline forests are found along _____
A. Lakes
B. Mountains
C. Hills
D. Rivers

C.R.E.

61. Which of the following is NOT a good effect of weather?
A. Wind makes our clothes to dry faster
B. Sunshine is used in photosynthesis in plants
C. Water is used for irrigation
D. Wind can destroy buildings plants and cause soil erosion,
62. Among the following which is NOT a miracle performed by Jesus Christ?
A. Calling for fire from heaven
B. Raising of Lazarus
C. Feeding of the five thousand people
D. Walking on water

63. The sons of Isaac were _____ and _____
A. Joseph and Jacob
B. Jacob and Esau
C. Esau and Joseph
D. Moses and Aaron
64. The father of John the Baptist worked as a _____
A. Tax collector
B. Carpenter
C. Priest
D. Fisherman
65. When Abraham accepted to leave his people and go to a foreign land as ordered by God he demonstrated:
A. Love
B. Humility
C. Obedience
D. Patience
66. I am a disciple of Jesus, My other name is Cephas, who am I?
A. Andrew
B. James
C. John
D. Peter
67. "I tell you, I have never found anyone in Israel with this kind of faith" Jesus said these words to:
A. The centurion
B. The centurion servant
C. Peter
D. Mary and Martha
68. Prophet _____ prophesied the birth of Immanuel
A. Jeremiah
B. Isaiah
C. Samuel
D. Daniel
69. How many baskets of leftovers were collected during the feeding of the four thousand?
A. None
B. Twelve
C. Seven
D. Five
70. "So give me the wisdom I need to rule your people with Justice (1 Kings 3:9) Which king spoke these words?
A. Solomon
B. David
C. Saul
D. Ahab
71. Which one of the following is NOT an agency which work for peace?
A. United Nations
B. African Union
C. Police force
D. The children homes
72. Joseph and Mary went to _____ to register because they were ancestors of David.
A. Jerusalem
B. Bethlehem
C. Nazareth
D. Blessed
73. The parents of Jesus took him to the temple to be _____
A. Healed
B. Given names
C. Baptised
D. Blessed
74. The sons of Naomi were _____ and _____
A. Jacob and Esau
B. John and James
C. Andrew and Peter
D. Mahlon and Chilion

75. The last book in the New Testament is called _____
 A. Leviticus B. Malachi
 C. Revelation D. Lamentation
76. During the call of Moses, God appeared to Moses in form of _____
 A. Wind B. Floods
 C. Thunder D. Fire
77. Which one of the following is NOT a christian community in Kenya?
 A. Roman Catholic church
 B. Pure christians
 C. Pentecostal Assemblies of God
 D. Seventh Day Adventists Church
78. Sharing work helps christians in many ways. Which one is NOT a benefit?
 A. It makes the work harder
 B. Many hands makes work lighter
 C. Helps to improve talents and abilities
 D. We live in harmony and unity
79. Abraham went to sacrifice his son on mount
 A. Olives B. Sinai
 C. Moab D. Moriah
80. In the story of the Pharisee and the tax collector, why did God forgive the tax collector?
 A. He was proud
 B. He paid his tithe
 C. He was humble
 D. He thought he was useless
81. Samuel lived with priest Eli in the temple in a town called _____
 A. Shiloh B. Romah
 C. Jerusalem D. Nazareth
82. Who among the following did Jesus tell these words? "Your sins have been forgiven"
 A. The 5,000 people
 B. The centurion servant
 C. The paralysed man
 D. The good Samaritan
83. _____ sold his piece of land and handed over all the money to the apostles.
 A. Justus B. Barnabas
 C. Ananias D. Peter
84. I gave out my tomb for Jesus to be buried. Who am I?
 A. Joseph of Arimathea B. Lazarus
 C. Simon of Cyrene D. Pontius pilate
85. Which place was used for worship by the Agikuyu people?
 A. In the church
 B. In the forest
 C. In a cave
 D. Under a sacred tree
86. James likes taking other pupils things. What christian value does he lack?
 A. Forgiveness B. Selfishness
 C. Honesty D. Jealous
87. Who among the following are Jacob's wives?
 A. Ruth and Orpah
 B. Peninah and Hannah
 C. Leah and Racheal
 D. Mary and Elizabeth
88. Ann has been given more balance by Kamau the shopkeeper. As a christian she should _____
 A. Buy a book for herself
 B. Return the money to the shopkeeper
 C. Thank God for the blessings
 D. Share the money with her friend
89. _____ is the disciple of Jesus who did not want his feet washed.
 A. Peter B. John
 C. James D. Judas
90. In the traditional African communities work was shared according to
 A. A person's height
 B. A person's wealth
 C. A person's size
 D. Age and ability

GATUNDU DISTRICT ASSESSMENT TEST END OF TERM II 2014

STD. 4 ANSWERS

<u>MATHS</u>		<u>ENGLISH</u>		<u>KISWAHILI</u>		<u>SCIENCE</u>	
1. C	26. B	1. D	26. B	1. B	26. A	1. C	26. A
2. A	27. C	2. A	27. B	2. B	27. C	2. B	27. C
3. B	28. A	3. B	28. D	3. C	28. B	3. B	28. A
4. D	29. D	4. A	29. B	4. C	29. C	4. D	29. B
5. C	30. D	5. B	30. B	5. D	30. A	5. C	30. B
6. A	31. A	6. B	31. C	6. B	31. B	6. D	31. B
7. D	32. C	7. D	32. B	7. A	32. C	7. B	32. B
8. B	33. B	8. C	33. C	8. C	33. D	8. A	33. B
9. D	34. C	9. A	34. B	9. A	34. A	9. C	34. A
10. A	35. A	10. B	35. C	10. B	35. A	10. A	35. A
11. B	36. D	11. A	36. C	11. C	36. B	11. A	36. B
12. C	37. B	12. D	37. C	12. B	37. C	12. B	37. C
13. D	38. D	13. C	38. B	13. D	38. A	13. C	38. C
14. B	39. B	14. A	39. A	14. D	39. D	14. C	39. D
15. B	40. C	15. B	40. A	15. B	40. D	15. B	40. C
16. A	41. B	16. D	41. B	16. B	41. A	16. A	41. B
17. A	42. A	17. A	42. A	17. C	42. B	17. C	42. B
18. B	43. A	18. C	43. A	18. D	43. C	18. D	43. A
19. D	44. C	19. C	44. C	19. A	44. D	19. B	44. D
20. C	45. D	20. D	45. C	20. C	45. D	20. D	45. A
21. B	46. D	21. C	46. C	21. D	46. C	21. D	46. A
22. D	47. C	22. C	47. A	22. B	47. C	22. B	47. A
23. C	48. A	23. B	48. A	23. A	48. D	23. D	48. B
24. A	49. B	24. C	49. C	24. D	49. C	24. A	49. C
25. C	50. B	25. B	50. A	25. B	50. B	25. A	50. A

SOCIAL STUDIES

1. A	21. D	41. B	61. D	81. A
2. B	22. C	42. C	62. A	82. C
3. B	23. B	43. B	63. B	83. B
4. D	24. B	44. D	64. C	84. A
5. D	25. A	45. C	65. C	85. D
6. C	26. D	46. D	66. D	86. C
7. B	27. A	47. C	67. A	87. C
8. B	28. B	48. A	68. B	88. B
9. B	29. A	49. B	69. C	89. A
10. A	30. C	50. D	70. A	90. D
11. C	31. A	51. D	71. C	
12. A	32. C	52. B	72. B	
13. B	33. B	53. C	73. D	
14. D	34. B	54. A	74. D	
15. C	35. A	55. B	75. C	
16. B	36. B	56. A	76. D	
17. D	37. B	57. B	77. B	
18. D	38. B	58. D	78. A	
19. A	39. D	59. A	79. D	
20. D	40. B	60. D	80. C	