

ENGLISH LANGUAGE

YOUR NAME	
NAME OF YOUR SCHOOL	

Dictation

1. _____
2. _____
3. _____
4. _____
5. _____

Fill in the missing letters






6. U _ _ _ le
7. P _ _ nc _ _ l

8. B _ _ ck _ _ t
9. T _ _ _ e
10. J _ _ g

Write the words correctly

11. oldl - _____
12. tac - _____
13. shdi - _____




Name the pictures

14. 	15. 	16. 	17. 	18. 
--	--	--	--	--

Use 'this' or 'these' to fill in the blank spaces

19. _____ is an orange.
20. Are _____ books yours?
21. _____ is a house.
22. _____ bags are clean.
23. What is _____?

Draw the following

24.	25.	26.
		
Window	Chair	Dress

	<u>One</u>		<u>Many</u>
27.	Child	-	_____
28.	Ox	-	_____
29.	Door	-	_____
30.	Brush	-	_____
31.	Bell	-	_____

	<u>Word</u>		<u>Opposite</u>
32.	Aunt	-	_____
33.	Sir	-	_____
34.	Big	-	_____
35.	Laugh	-	_____
36.	Bitter	-	_____

	<u>Add 'ing'</u>
37.	Sleep - _____
38.	Swim - _____
39.	Pray - _____
40.	Sing - _____
41.	Come - _____

	<u>Today</u>	<u>Yesterday</u>
42.	Wash	- _____
43.	See	- _____
44.	Bake	- _____
45.	Walk	- _____
46.	Give	- _____

Complete

47. If today is Thursday yesterday was _____.
48. Which is the second day of the week? _____
49. Which day comes before Monday? _____
50. We go to school for _____ days in a week.

KISWAHILI LUGHA




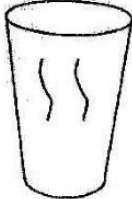

JINA LA KO	
JINA LA SHULE YAKO	

Imla

1. _____
2. _____

3. _____
4. _____
5. _____

Andika majina ya picha

6. 	7. 	8. 	9. 	10. 

Jaza pengo

11. Ch___k___
12. D___r___sha
13. Mb___z___
14. k___zi
15. P___ya

Andika kwa maneno au nambari

16. 37 - _____
17. Kumi na tisa - _____

18. 96 - _____
19. Themanini na nne - _____
20. 58 - _____
21. 0 - _____

Andika kwa wingi

22. Embe - _____
23. Msichana - _____
24. Chura - _____

25. Huyu ni mtoto

26. Hiki ni kiti

Andika kinyume cha maneno haya

27. Baba - _____

28. Simama - _____

29. Anika - _____

30. Funga - _____

31. Lala - _____

32. Mkubwa - _____

Unda maneno

33. da - _____

34. ke - _____

35. ny - _____

Andika maneno haya ipasavyo

36. lakucha - _____

37. nsepeli - _____

38. wada - _____

39. atuki - _____

Jibu maamkizi

40. Shikamoo - _____

41. Hujambo - _____

42. Habari - _____

Andika majina ya maumbo

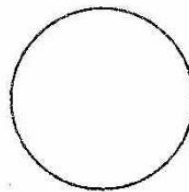
43.



44.




45.




46.



47.



Andika kuhusu picha hii



48. Huyu ni _____.

49. Yeye hutaga _____.

50. Mtoto wake huitwa _____.

(Kinda, Kifaranga)

KISWAHILI KUSOMA

JINA LAKO	
JINA LA SHULE YAKO	

Soma majina

- | | |
|--------------|---------------|
| 1. Ngazi | 11. Mahindi |
| 2. Nchi | 12. Shukrani |
| 3. Kamba | 13. Ngoma |
| 4. Rafiki | 14. Mwanangu |
| 5. Nguruwe | 15. Kwaheri |
| 6. Jongoo | 16. Vokali |
| 7. Kidole | 17. Mchana |
| 8. Sungura | 18. Manyoya |
| 9. Alhamisi | 19. Kifaranga |
| 10. Mstatili | 20. Mwiba |

Soma sentensi zifuatazo

21. Kofia ya babu iko juu ya meza.
22. Mapera haya yameiva sana.
23. Dada yake baba ni shangazi.
24. Twendeni kwa mchezo wa pete.
25. Wanafunzi watamwimbia mwalimu mkuu wimbo wa taifa.

MATHEMATICS

YOUR NAME	
NAME OF OUR SCHOOL	

How many are they?

1. ○○○○○○○○○ = _____

2. ////////////// = _____

3. ☆☆☆ + ☆☆☆ = _____

4. ΛΛΛ + ΛΛΛ + ΛΛΛ = _____

5. 0000000 = _____

Put together

6. $7 + 3 =$ _____

7. $10 + 4 =$ _____

8. $6 + 6 + 6 =$ _____

9. $0 + 9 =$ _____

10. $15 + 2 =$ _____

Write in words

11. 20 - _____

12. 17 - _____

13. 9 - _____

14. 4 - _____

15. 36 - _____

Take away

16. ////////////// - ////////////// = _____

17. ○○○○○○ - ○○ - ○○ = _____
○○○○○○

18. ☺☺☺☺☺ - ☺ = _____

19. $16 - 6 =$ _____

20. $\begin{array}{r} 13 \\ -9 \\ \hline \end{array}$

21. $\begin{array}{r} 11 \\ -6 \\ \hline \end{array}$

22. $\begin{array}{r} 10 \\ -1 \\ \hline \end{array}$

23. $\begin{array}{r} 4 \\ -0 \\ \hline \end{array}$

Write the missing numbers

24. $10 + \square = 13$

25. $\square - 3 = 7$

26. $16 + \square = 20$

27. $\square + 5 = 14$

28. $8 - \square = 0$

29. $\square - 3 = 3$

30.
$$\begin{array}{r} 57 \\ + 20 \\ \hline \end{array}$$

31.
$$\begin{array}{r} 68 \\ - 41 \\ \hline \end{array}$$

32.
$$\begin{array}{r} 14 \\ + 3 \\ \hline \end{array}$$

33.
$$\begin{array}{r} 90 \\ - 50 \\ \hline \end{array}$$

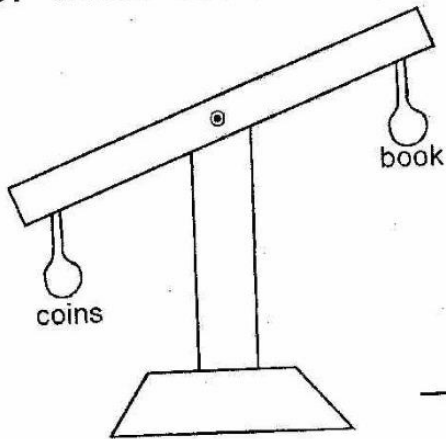
34. $28 + 30 = \underline{\hspace{2cm}}$

35. $77 - 14 = \underline{\hspace{2cm}}$

36. Tick the numbers more than 7
8, 2, 9, 6, 10

37. Tick the numbers less than 6
8, 0, 5, 10, 4

38. Which one is heavy?



39. 3 boys have $\underline{\hspace{1cm}}$ eyes.

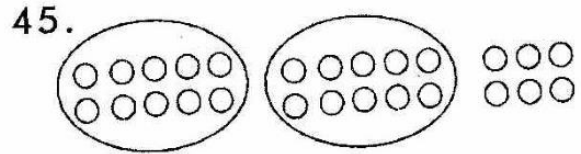
40. Two chairs have $\underline{\hspace{1cm}}$ legs.

41. How many days are there in one week? $\underline{\hspace{2cm}}$

42. 8 tens + 3 ones = $\underline{\hspace{2cm}}$

43. $\underline{\hspace{2cm}} = 0$ tens and 3 ones

44. What is the place value of number 4 in 34 $\underline{\hspace{2cm}}$

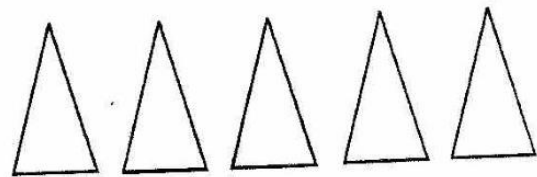


$\underline{\hspace{1cm}}$ tens + $\underline{\hspace{1cm}}$ ones =

46. $4 \underline{\hspace{1cm}} + 3 \underline{\hspace{1cm}} = 43$

47. $9 + 9 = \underline{\hspace{2cm}}$

48. How many sides do they have? $\underline{\hspace{2cm}}$



49. $60 - 20 = \underline{\hspace{2cm}}$

50. One year has $\underline{\hspace{2cm}}$ months.

ENGLISH READING

YOUR NAME	
NAME OF YOUR SCHOOL	

Read the words

- | | |
|----------|--------------|
| 1. Path | 11. Stand |
| 2. Smart | 12. Clock |
| 3. Dish | 13. Bucket |
| 4. Wood | 14. Elephant |
| 5. Feed | 15. Rabbit |
| 6. Ride | 16. Black |
| 7. Heavy | 17. Pillow |
| 8. King | 18. Shrink |
| 9. Lorry | 19. Speaking |
| 10. Pool | 20. Traffic |

Read the following sentences

21. My hen has eight chicks.
22. A farmer wanted to dig a big pit.
23. She wants to check on her weight.
24. Please pack your bags on the self.
25. You must have a strong string to tie the box.

SCIENCE

YOUR NAME	
NAME OF OUR SCHOOL	

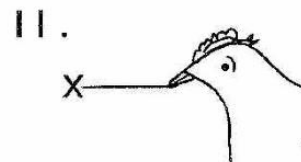
1. A bird has _____ wings(4, 2, 6)
2. Name two things we can share

3. _____
4. We use _____ and
5. _____ to wash our body.
6. Unripe tomato is _____ in colour.
7. _____ spoil our teeth.
(Sweets, Milk, Sugarcane)
8. The animal which gives us wool is called _____
(goat, sheep, donkey)

9. Which insect spreads malaria?

(Housefly, Mosquito, Bee)
10. Oranges, mangoes and avocados are known as

(vegetables, fruits, cereals)




The part marked X is called _____

12. Which animal gives us security at home? _____
(Cat, Dog, Camel)

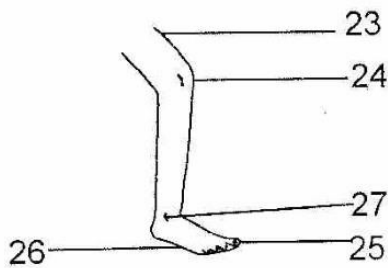
Draw four domestic animals

13.	14.	15.	16.

17. _____ is air in motion.
(Rain, Cloud, Wind)
18.  This is a _____ seed.
(maize, bean, peas)
19. Germs like staying in _____ places. (clean, dry, dirty)


20. We _____ water to kill germs.
(filter, boil, warm)
21. When it is going to rain we see _____
(stars, sun, clouds)
22. A train has _____ wheels.
(eight, ten, many)

Name the parts of a leg




23. _____
 24. _____
 25. _____
 26. _____
 27. _____
 (toes, knee, heel, ankle, thigh)
 28. We _____ and
 29. _____ using our nose
 30. Mary cut herself with a razor-
 blade, _____ came out.
 31. Unwell people go to _____
 (school, hospital, church)
 32. We should keep our finger
 nails _____ and
 33. _____

34. My father has _____ senses.
 (five, seven, six)

35.  We use this to make
 our hair _____
 (tidy, untidy, bad)

36. The body of a cow is covered
 with _____ (scales,
 hair, cotton)

37. Which balloon has air
 inside? _____



A.

B.





38. All plants have _____.
 (leaves, fruits, flowers)

39. The sun rises in the _____.
 (morning, evening, afternoon)

40. All plants need _____ to grow
 well. (salt, water, humus)

41. Clothes dry faster when it is
 _____ (rainy, sunny, cloudy)

Name the fruits we eat

42. 	43. 	44. 	45. 

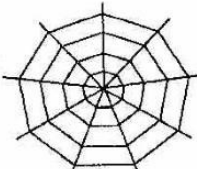
46. Wax is the dirt found in our
 _____ (nose, eyes, ears)

47. _____ are the beautiful
 parts of a plant. (Roots,
 Leaves, Flowers)

48. After bathing we dry our bodies
 with _____

(handkerchief, towel, lesa)

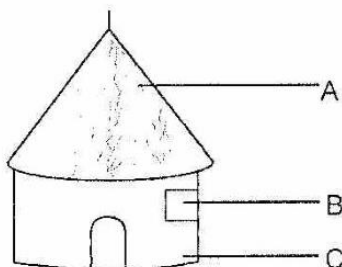
49. Inside the fruits we can find
 _____ (leaves, roots, seeds)

50.  This is a
 _____ (net, web, flower)

SOCIAL STUDIES

YOUR NAME	
NAME OF YOUR SCHOOL	

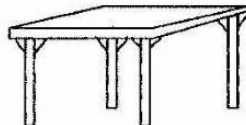

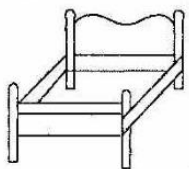


- _____ makes us look smart in school. (Flag, Uniform, Bags)
- _____ is a male parent and
- _____ is a female parent.



- The part marked A is made of _____
- The part marked B is made of _____
- The part marked C is made of _____
- A modern house is made of _____ (cowdung, stones, mud)
- Our country is called _____ (Kenya, Uganda, Nairobi)
- My sister's daughter is my _____ (nephew, daughter, niece)
- _____ raise the flag at school. (Prefects, Scouts, Teachers)
- We celebrate happy birthdays _____ per year. (twice, once, thrice)

- In the dinning room people _____ food. (cook, prepare, serve)
- We put on _____ clothes when it is hot.
- When it is _____, we put on heavy clothes.
- _____ is the head of the school. (Teacher, Head teacher, Senior teacher)

Match the following

- | | |
|---|---------------|
| 16.  | Bathroom |
| 17.  | Store |
| 18.  | Living room |
| 19.  | Kitchen |
| 20.  Geisha | Sleeping area |
| 21. A house protects us from _____ and _____ | |
| 22. _____ | |

Name three wild animals

23. _____
 24. _____
 25. _____

26.  This is a _____
 (saw, hammer, panga)

27. Father, mother and children make a/an _____ family.
 (immediate, extended, street)

28. The Government provides us with _____ (clothes, free education, shelter)

29. We should keep our animals _____ (healthy, bad, unhealthy)

30. Playing keeps our bodies _____ and _____




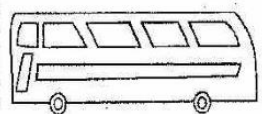


31. _____. (weak, strong, boring, healthy)

32. A ~~wedding~~ is a _____ ceremony. (sad, boring, happy)

33. Vehicles move on the _____ (air, railway, road)

34. We should put rubbish in the _____.

Name the following

35. 	36. 	37. 	38. 	39. 	40. 

41. The other name for kitchen is _____ (living room, cooking area, eating area)

42. We should not play on the _____ (road, field, playground)


43. My father's mother is my _____.

44. My mother's father is my _____.

45. Long grass can keep _____ (dogs, snakes, cats)

46. Who among the following is a member of an extended family? _____ (Father, Uncle, Sister)

47. A bridge helps us to cross the _____ (road, river, forest)

48.  The weather is _____

49. A person who guards our school is called _____ (cleaner, watchman, secretary)

50. A _____ is a basic need (radio, car, shelter)