



**NYERI COUNTY  
EVALUATION TEST**

**STD 4**

**END TERM 2**

**ENGLISH: LANGUAGE**

Time: 1hr 40min

**Read the passage below carefully and fill in the blank spaces for questions 1- 15**

One day 1 was 2 to the supermarket by 3 aunt. When she got there 4 she took a trolley. A basket 5 have been too 6 as she 7 buying 8 of things. 9 picked 10 in her 11 list from the 12 and the rest 13 the counter. Kakai then joined the queue so as 14 pay the 15.

	<b>A</b>	<b>B</b>	<b>C</b>	<b>D</b>
1.	Kakai	KAKAI	kakai	KAKai
2.	send	sending	sent	sends
3.	his	her	their	its
4.	.	?	,	"
5.	can	may	would	could
6.	smallest	smaller	more small	small
7.	is	was	were	less
8.	a lot	few	many	less
9.	He	They	It	She
10.	anything	everything	nothing	something
11.	shop	shopping	shoping	shops
12.	shelves	shelvs	shelvs	shelves
13.	of	from	in	between
14.	too	to	two	at
15.	cashier	customer	shopkeeper	trolley

**For questions numbered 16-50, answer each question according to the instructions given**

**Choose the best answer to fill in the spaces in questions 16 -22**

16. Please give me \_\_\_\_\_ cup of coffee.  
 A. these                      B. a  
 C. an                          D. two
17. She is \_\_\_\_\_ honest pupil.  
 A. a                              B. of  
 C. an                          D. those
18. The morning bell rings \_\_\_\_\_ eight o'clock.  
 A at                              B. on  
 C. in                             D. with
19. Faith came home \_\_\_\_\_ her friend.  
 A. and                          B. by  
 C. with                         D. on

20. The thief was found hiding \_\_\_\_\_ the bed.  
 A. through                      B. from  
 C. into                          D. under
21. The wedding ceremony lasted \_\_\_\_\_ six hours  
 A. since                         B. for  
 C. in                              D. starting
22. Mrs Mwaniki has been absent from school \_\_\_\_\_ last Tuesday.  
 A. for                             B. up to  
 C. since                         D. on

**For questions 23-25, select the adverb of manner in each sentence**

23. The parents listened patiently to the speech.  
 A. patiently                      B. listened  
 C. speech                         D. to
24. It rained heavily as the party continued.  
 A. rained                         B. party  
 C. continued                      D. heavily

25. The bride was smartly dressed.  
 A. dressed                      B. bride  
 C. smartly                        D. the

**For questions 26-27, select the noun in each sentence**

26. My ruler is longer than yours.  
 A. longer                        B. my  
 C. yours                         D. ruler
27. They swam in the deepest river.  
 A. river                         B. they  
 C. swam                        D. deepest

**Select a word that means the same as the underlined one**

28. My grandfather is a wealthy man.  
 A. healthy                      B. rich  
 C. poor                         D. sick

**Choose the sentence which means the same as the one below**

29. Janet ate the largest mango.  
 A. Janet is eating the largest mango.  
 B. The largest mango was eaten by Janet.  
 C. Janet gave me the largest mango.  
 D. The largest mango was eating Janet.
30. Choose the sentence that is correctly written  
 A. They measured length depth height.  
 B. They measured length, depth and height?  
 C. They measured length, depth and height.  
 D. They measured, length, depth, height.

**Choose the adverbs of time in the questions numbered 31- 32**

31. The education officer came to our school yesterday.  
 A. school                        B. came  
 C. yesterday                    D. education officer
32. Our headteacher will talk to us in the morning.  
 A. morning                      B. headteacher  
 C. talk                         D. us

**For questions 33-35 complete the sentences with the correct answer**

33. A \_\_\_\_\_ of monkeys destroyed all the maize in the farm.  
 A. gang                         B. herd  
 C. troop                        D. fleet
34. In our school there is a \_\_\_\_\_ of books.

- A. pupils                        B. library  
 C. class                         D. shoal

35. The fishermen at lake Baringo caught a \_\_\_\_\_ of fish.

- A. shoal                        B. swarm  
 C. herd                         D. pride

**For questions 36-38, complete each sentence using the best answer from the four choices given**

36. Bird is to nest as \_\_\_\_\_ is to hutch.  
 A. bee                         B. dove  
 C. rabbit                      D. dog
37. Soldier is to \_\_\_\_\_ as snail is to shell.  
 A. pen                         B. barrack  
 C. web                        D. nest
38. \_\_\_\_\_ is to den as horse is to stable.  
 A. Bird                        B. Parrot  
 C. Nun                        D. Lion

**Choose the best answer for each question from number 39 - 44**

39. Our neighbour's cock \_\_\_\_\_ early every morning.  
 A. roars                        B. crows  
 C. barks                       D. trumpets
40. The frogs were \_\_\_\_\_ near the pond.  
 A. crowing                    B. hissing  
 C. hooting                    D. croaking
41. Our goat has given birth to a black \_\_\_\_\_.  
 A. kid                         B. lamb  
 C. puppy                      D. calf
42. The dog played with its four \_\_\_\_\_.  
 A. kittens                     B. cubs  
 C. puppies                    D. foals
43. A \_\_\_\_\_ is a person who shaves our hair.  
 A. beggar                     B. barber  
 C. mason                     D. cobbler
44. A jockey is a person who \_\_\_\_\_.  
 A. rides bicycles  
 B. likes jokes  
 C. repairs machines  
 D. rides horses

**Choose the correctly spelt words in questions 45 and 46**

45. A. expencive                      B. shoping  
 C. messenger                        D. computer

46. A. secretary                      B. medicine  
C. desiese                            D. docter

**Choose the best answer for the questions below**

47. May I use your pencil? \_\_\_\_\_  
A. yes, you can't                      B. no, you can.  
C. yes, you may                        D. yes, no
48. They don't have \_\_\_\_\_ chicken.  
A. much                                  B. a lot  
C. a                                         D. many
49. Mwendu has seen her \_\_\_\_\_ car.  
A. mother's                              B. mother  
C. mothers                                D. parents
50. Choose the correctly written sentence from the four written below.  
A. tom and jack repaired the bicycle.  
B. Juma has started his journey to Malindi?  
C. My friends is playing with their toys.  
D. There are flower gardens around our school.

**Read the passage below carefully and answer questions 51 - 60**

Once, there lived a man who loved to eat honey, but he was a lazy man. He did not make his own hives. He often found holes in the trees where the bees lived or stole honey from hives which belonged to other people.

One, day he went to a forest which was a long way from his village. He saw huge trees and soon found one that had a big hole in its trunk. He put his hand inside at once.

He was greedy, lazy and also unlucky. The bees had left the hole a long time ago and a large poisonous snake had made its home there.

The snake bit the man's hand and the man ran home in great pain. His life was in danger for many days, and he could not ask anyone to help him because they would know he had been stealing again.

After a long time, he recovered from the snake bite. He built his own hives and kept his own bees. He took great care to see that no one stole honey from him and he never stole from anybody else again.

51. The man in the story loved to eat honey. Honey is made by \_\_\_\_\_  
A. bees                                      B. hives  
C. trees                                      D. holes
52. The lazy man did not make his own \_\_\_\_\_  
A. honey                                      B. holes  
C. hives                                        D. trees
53. What did the man see when he went to a forest?  
A. A big hole                                B. Bees  
C. Poisonous snake                        D. Huge trees
54. The man in the story was all the following except:-  
A. greedy                                      B. danger  
C. lazy                                         D. unlucky
55. Complete the following simile.  
As greedy as a \_\_\_\_\_  
A. man                                         B. bee  
C. hyena                                        D. wolf
56. For how many days was the man's life in danger according to the story?  
A. After a long time.  
B. A long time ago  
C. For many days  
D. We are not told
57. The man in the story did the following after he recovered except:-  
A. he built his own hives  
B. he kept his own bees.  
C. he took great care of the hives  
D. he stole honey from anybody
58. The word bit is underlined in the story. What is its present tense?  
A. Bite                                         B. Bit  
C. Bitten                                        D. Beat
59. The man in the story was stealing honey from other people. What do we call a person who steals?  
A. Stealer                                      B. Thief  
C. Stole                                         D. Man
60. What happened to the man that made him learn never to steal from anybody else again?  
A. He was bitten by a snake.  
B. He was stung by bees  
C. He was a long way from his village.  
D. He ran home in great pain.

**Read the following passage and then answer questions 61 - 70**

Going shopping can be an exciting activity. When you decide to go shopping, you should not get too excited. You should first relax and write down your **shopping list**. A shopping list will guide you and help you not buy things you do not need. If you do not write a list of things to buy, you may end up with things that are not necessary. This is because of buying without planning. Many people make a mistake of going to the supermarkets shelves without a shopping list and then pick other things that they do not really need. This makes one leave out important things needed or even use up all the money. Most people over-spend, which is not a good shopping habit. After picking items on your list, push the trolley towards the cashier. The cashier will calculate your bill and show you the total amount of money to pay.

If you are a wise shopper, you may get some change because of buying only the items you need. Some people do not balance the amount of money they have with the things to buy. They will fill their trolleys with everything they desire to buy but only come to find out that their money is very little when the bill is calculated. This leaves them very embarrassed. It is good to learn to be a wise shopper. Make sure you have a shopping list to guide you.

61. Going shopping can be an \_\_\_\_\_ activity.  
A. attracting                      B. exciting  
C. active                            D. advertising
62. You should write a \_\_\_\_\_ to guide you.  
A. trolley  
B. shopping basket  
C. shopping list  
D. cashier
63. If you go shopping without a shopping list, you may \_\_\_\_\_  
A. buy what you need.  
B. buy what is very necessary  
C. buy without planning  
D. buy many things to fill the trolley
64. The shopping basket that is pushed by shoppers in the supermarket is called a \_\_\_\_\_.  
A. trolley  
B. cashier  
C. over-spending  
D. shelves
65. The opposite of the word **buying** is \_\_\_\_\_.  
A. bought  
B. sold  
C. selling  
D. stealing
66. To overspend is a \_\_\_\_\_ habit.  
A. useful  
B. good  
C. better  
D. bad
67. Who calculates the customer's bill in a supermarket?  
A. The shopper  
B. The cashier  
C. The banker  
D. The guard
68. What is a shopping list?  
A. A list of things used in the house.  
B. A list of things found in the supermarket.  
C. A list of things you plan to buy  
D. The amount of money to spend on shopping
69. A \_\_\_\_\_ shopper may get some change.  
A. wise  
B. foolish  
C. dull  
D. cunning
70. The best title for this passage is \_\_\_\_\_.  
A. Shopping basket  
B. Wise shopping  
C. Shopping in the supermarket  
D. Exciting shopping



**NYERI COUNTY  
JARIBIO LA MTHANI**

**DARASA LA NNE  
MUHULA WA PILI**

**KISWAHILI:LUGHA**

Muda: Saa 1 Dak 40

**Soma kifungu hiki na ujaze nafasi wazi kutoka 1-15 kwa jibu sahihi**

Wambui ni msichana 1 shule 2. Ana adabu 3 na tabia 4 na kila mtu anampenda. Zaidi ya hayo, Wambui ni msichana 5 kuliko wote shuleni. Anaoga kila siku 6 maji safi. Nywele 7 ni fupi si 8. Huzichana vizuri akitumia kitana. Anapenda masomo 9 yanayofundishwa shuleni. Sisi 10 tunamfurahia Wambui.

<b>A</b>	<b>B</b>	<b>C</b>	<b>D</b>
1. kwa	ya	wa	na
2. letu	wetu	kwetu	yetu
3. zuri	nzuri	mzuri	kizuri
4. njema	jema	mwema	chema
5. msafi	chafu	safi	kubwa
6. na	kwa	ya	wa
7. zake	yake	wake	vyake
8. refu	ndefu	ndevu	mrefu
9. wote	zote	yote	vyote
10. zote	yote	wote	sote

Darasa 11 ni zuri. Lina 12 wengi. Wanafunzi 13 ni 14 na wengine ni wafupi. Wapo 15 na wembamba.

11. letu	yetu	mwetu	kwetu
12. mwanafunzi	mwanamke	wanafunzi	wanaume
13. ngine	mwingine	mchache	wengine
14. mrefu	mlefu	warefu	mlevu
15. mnono	wanene	mnene	kunenepa

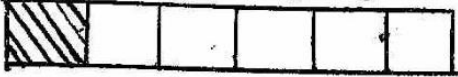

**Kutoka swali la 16-30, jibu maswali kulingana na maagizo**

16. Tumia kiashiria sahihi Msichana \_\_\_\_\_ ni hodari masomoni.  
A. hawa B. huyu  
C. hao D. wale
17. Je, nomino chandarua i katika ngeli ipi?  
A. A- WA B. U - I  
C. KI - VI D. LI - YA
18. Mama alitupikia \_\_\_\_\_ rojorojo.  
A. mjuzi B. mchuzi  
C. mjusi D. mchuzi
19. Jibu maamkizi haya;

**Habari ya jioni?**

- A. Njema B. Zuri  
C. Mzuri D. Sijambo
20. Kanusha sentensi ifuatayo:  
Chakula kilipikwa mapema.  
A. Chakula havijapikwa mapema.  
B. Chakula hakipikwi mapema.  
C. Chakula hakikupikwa mapema.  
D. Chakula kilikuliwa mapema.
21. Andika tarakimu hii kwa maneno: Mayai 994  
A. Mia tisa tisini na nne.  
B. Mia tisa tisini na manne.  
C. Mia tisa sitini na nne.  
D. Mia sita sitini na nne.

22. Ugonjwa wa kukohoa sana ambapo muwele anaweza kukohoa hata damu huitwa \_\_\_\_\_  
 A. kipindupindu B. ukambi  
 C. mba D. kifuakikuu
23. Kamilisha methali ifuatayo:  
 Mgaagaa na upwa hali wali \_\_\_\_\_  
 A. sana B. akashiba  
 C. mkavu D. tamu
24. \_\_\_\_\_ ni vazi linalovaliwa na wafanyikazi kama makanika.  
 A. Bwelasuti B. Gagro  
 C. Kabuti D. Kachiri
25. Gari limeng'oa nanga. Ni nini maana ya semi 'ng'oa nanga?'  
 A. Kamilisha safari  
 B. Anza safari  
 C. Haribu kifaa kinachoitwa nanga  
 D. Pumzika safarini
26. Tumia sifa -epesi-  
 Daftari \_\_\_\_\_ limeatguka.  
 A. epesi B. nyepesi  
 C. njepesi D. jepesi
27. Tegua kitendawili kifuatacho:-  
 Popoo mbili zavuka mto \_\_\_\_\_  
 A. macho B. daraja  
 C. safiri D. kaburi
28. Tumia kihusishi mwafaka :-  
 Mwanafunzi alijificha \_\_\_\_\_ darasa alipomwona mwalimu.  
 A. chini ya B. juu ya  
 C. nyuma ya D. katikati ya
29. Je, ndege wa pori mwenye madoadoa huitwa  
 A. mbayuwayu B. heroe  
 C. kanga D. chiriku
30. Tumia kiulizi 'gani?'  
 Wanafunzi \_\_\_\_\_ waliotuzwa zawadi?  
 A. wagani B. gani  
 C. mgani D. vigani
31. Chombo cha jikoni cha kupepetea nafaka huitwa \_\_\_\_\_  
 A. bilauri B. buli  
 C. mchi D. uteo
32. Andika wingi wa sentensi ifuatayo:-  
 Tunda lako limeliwa.

- A. Matunda yako yameliwa.  
 B. Matunda yenu imeliwa.  
 C. Matunda yao yameliwa.  
 D. Matunda yenu yameliwa
33. Akifisha sentensi hii:-  
 Lo \_\_\_\_\_ mtoto ni mgonjwa.  
 A. ! B. ,  
 C. . D. ?
34. Akisami iliyopakwa rangi ni gani?  
  
 A. Robo B. Subui  
 C. Sudusi D. Humusi
35. Je, jua huchomoza upande gani?  
 A. Kaskazini B. Mashariki  
 C. Kusini D. Magharibi
36. Tumia kiulizi "Pi"?  
 A. Umemwona kiranja \_\_\_\_\_?  
 A. wapi B. kipi  
 C. yupi D. vipi
37. Je, ni saa ngapi?  
  
 A. Saa saba na robo.  
 B. Saa tatu kasoro dakika ishirini na tano  
 C. Saa tisa kasoro dakika saba.  
 D. Saa moja na robo
38. Nyama zinazoshikilia meno huitwa \_\_\_\_\_  
 A. fizi B. taya  
 C. kinywa D. mapafu
39. Tumia neno sahihi kujazia sentensi.  
 Mtoto mkaidi \_\_\_\_\_ yai.  
 A. amefuja B. amevunja  
 C. amevuja D. amekunja
40. \_\_\_\_\_ ni myamapori mwenye kipusa usoni  
 A. Ngiri B. Nyati  
 C. Kifaru D. Tumbiri
41. Tumia sifa -pya- kwa usahihi:-  
 Jarida \_\_\_\_\_ limechapishwa.  
 A. mpya B. kipya  
 C. lipya D. jipya
42. Tumia kiambishi kifaacho:-



Mgonjwa ame \_\_\_\_\_ tunza mwenyewe.

- A. ji  
B. m  
C. wa  
D. ku

43. Aina ya kitambaa chepesi cha kusafishia jereha huitwa \_\_\_\_\_

- A. plasta  
B. pamba  
C. benedeji  
D. hanchifu

44. Je, hili ni umbo gani?



- A. Mraba  
B. Mche mstatili  
C. Mstatili  
D. Kopa

45. Tumia kiunganishi sahihi:-

Nilimwona \_\_\_\_\_ sikumsalimia.

- A. wala  
B. bila  
C. kwa sababu  
D. lakini

46. Kenya ni \_\_\_\_\_ ya amani.

- A. inchi  
B. jiji  
C. nchi  
D. taifa

47. Mtoto wa mwana wako utamwita \_\_\_\_\_

- A. mpwa  
B. mjukuu  
C. kitukuu  
D. umbu

48. Tumia kiulizi "ngapi"?

Umewaona vinyonga \_\_\_\_\_?

- A. wangapi  
B. vingapi  
C. ngapi  
D. mingapi

49. Tambua kinyume cha neno lililopigiwa mstari:-

Mwalimu ameandika neno ubaoni.

- A. amevuta  
B. ameharibu  
C. amechora  
D. amefuta

50. Chai ya mkandaa huwa na rangi ya \_\_\_\_\_

- A. samawati  
B. hudhurungi  
C. manjano  
D. nili

**Soma kifungu kifuatacho kisha ujibu maswali kutoka 51 - 60**

Mara nyingi redio na runinga zetu zimetangaza hatari za ulevi. Tumekanywa kuhusu dawa za kulevywa kama bangi, sigara na pombe. Vitu hivi ndivyo vinavyosababisha au kueneza maafa na matatizo makubwa kama vile wizi, ujambazi, uzururaji, wazimu na ugonjwa wa ukimwi. Mtu yeyote mwenye akili timamu lazima ajitunze na kujilinda ili awe na fya njema. Hasa

wewe mwanafunzi, ujilinde na ujichunge.

Usiyachezee maisha yako. La sivyo, utajuta na majuto ni mjukuu.

51. Redio na \_\_\_\_\_ hutangaza hatari za ulevi

- A. rungu  
B. wembe  
C. televisheni  
D. ngumi

52. Dawa za kulevywa zinazozungumziwa kwenye habari hii ni \_\_\_\_\_

- A. pombe, nafaka, sigara  
B. bangi, pombe, pipi  
C. sigara, bangi, bibo  
D. pombe, sigara, bangi

53. Kisawe cha neno 'maafa' kama lilivyotumika kwenye habari ni \_\_\_\_\_

- A. kisirani  
B. wema  
C. uzuri  
D. upole

54. Wazimu ni ugonjwa wa \_\_\_\_\_

- A. kuanguka  
B. akili  
C. viungo  
D. kuendesha

55. Mtu mwenye akili \_\_\_\_\_ lazima ajitunze.

- A. punguani  
B. kamilifu  
C. butu  
D. majununi

56. Mwanafunzi anatakiwa kufanya nini?

- A. Ajilinde na ajichunge  
B. Asume na apigane  
C. Awe mwizi na asome  
D. Ajute na azungumze

57. Ni methali gani inayolingana na maelezo haya "Usiyachezee maisha yako"?

- A. Haba na haba hujaza kibaba.  
B. Tahadhari kabla ya hatari.  
C. Mwenda pole hajikwai  
D. Panya wengi hawachimbi shimo.

58. Wingi wa dawa ni \_\_\_\_\_

- A. madawa  
B. dawa  
C. mandawa  
D. ndawa

59. Majuto ni \_\_\_\_\_

- A. mtukufu
- B. mkimbizi
- C. mjukuu
- D. kitukuu

60. Kichwa cha habari hii ni \_\_\_\_\_

- A. pombe
- B. sigara
- C. wanafunzi
- D. dawa za kulevya

**Soma ufahamu ufuatao kisha ujibu maswali kutoka 61 - 70**

Maisha katika kijiji cha Soweto yalikuwa magumu sana kutokana na hali ya umaskini. Watoto wengi waliacha masomo kutokana na ukosefu wa karo. Hali hii ilikithiri na kufikia kiwango cha kutisha cha watoto wengi kukata kamba kutokana na maradhi ya utapiamlo.

Hata hivyo, wazalendo wa kijiji hicho hawakukata tamaa bali waliendelea kufanya bidii katika kila shughuli huku wakiomba msaada kutoka kwa serikali.

Maafisa wa afya walizuru kijiji hicho na kuwashauri wananchi kupanda mboga na matunda mbalimbali ili kuinua kiwango cha afya. Pia, waliusiwa kufuga wanyama wadogo wadogo wakiwemo sungura, kuku na mbuzi. Wanyama hawa wangefaa kwa kuwapa nyama.

Kweli, penye nia pana njia. Wanakijiji walifuata mawaidha hayo na wakaweza kuyashinda magonjwa yaliyowasumbua. Kutokana na ushirikiano wao waliweza kupigana na umaskini. Kweli umoja ni nguvu utengano ni .....

61. Taarifa hii inarejelea kijiji cha .....

- A. Soweto
- B. Kibera
- C. Afya
- D. Mathare

62. Maisha yalikuwa magumu kutokana na:-

- A. ujambazi
- B. ukosefu wa elimu
- C. umaskini
- D. wazalendo

63. Je, ni nini maana ya semi kata kamba?

- A. Kuiharibu kamba
- B. Kosa raha
- C. Kuugua
- D. Kufa

64. Watoto katika kijiji hiki walihangaishwa na ugonjwa wa \_\_\_\_\_

- A. safura
- B. utapiamlo
- C. ukambi
- D. shurua

65. Wananchi waliomba msaada kutoka kwa:-

- A. majirani
- B. serikali
- C. wenzao
- D. wafugaji

66. Wanakijiji hawakushauriwa kufuga.....

- A. sungura
- B. ng'ombe
- C. kuku
- D. mbuzi

67. Kijiji hiki kilitembelewa na maafisa wa:-

- A. kilimo
- B. fedha
- C. elimu
- D. afya

68. Kwa nini watoto wengi wakaacha masomo?

- A. Kukosa karo
- B. Maradhi
- C. Kukosa uzalendo
- D. Kuchukia elimu

69. Wananchi hawa walipenda:-

- A. ushirikiano
- B. ugomvi
- C. umaskini
- D. magonjwa

70. Kamilisha methali hii: Umoja ni nguvu utengano ni \_\_\_\_\_

- A. dhambi
- B. udhaifu
- C. uthaifu
- D. maafa

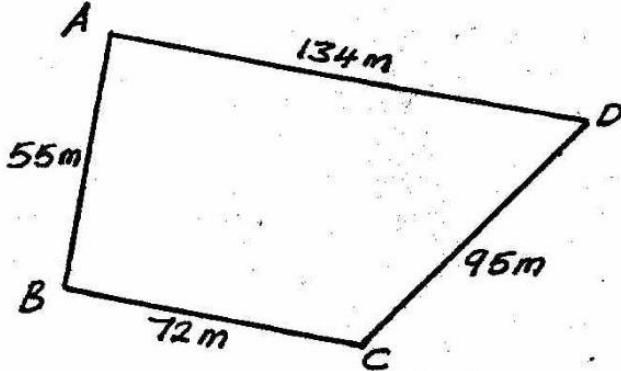
**NYERI COUNTY  
EVALUATION TEST**

**STD 4**

**END TERM 2**

**MATHEMATICS**

Time: 2hrs

1. Write in symbols: Forty seven thousand and one
- A. 47010                      B. 47100  
C. 47001                      D. 4701
2. Write the place value of digit 6 in the following 206731
- A. Thousands                      B. Hundreds  
C. Thousandth                      D. Ten thousands
3. Which of the following is an odd number?
- A. 462                      B. 101  
C. 86                      D. 100
4. Give fraction which is equivalent to the following  $\frac{5}{6}$
- A.  $\frac{2}{3}$                       B.  $\frac{5}{5}$   
C.  $\frac{6}{6}$                       D.  $\frac{30}{12}$
5. Kamau has 8 hens. Each hen laid 22 eggs. How many eggs did he get?
- A. 20                      B. 166  
C. 176                      D. 178
6. Write the place value of digit 3 in the following 10.131
- A. Thousandths                      B. Hundredths  
C. Tenths                      D. Tens
7. The length of a classroom is 10m 46cm. What is the length in cm?
- A. 146                      B. 56cm  
C. 46cm                      D. 1046cm
8. Work out:  $\square - 11.1 = 99.9$
- A. 111                      B. 110.0  
C. 11.1                      D. 88.8
9. Three pupils were each given  $\frac{3}{10}$  of an orange. What fraction of the orange did they get altogether?
- A.  $\frac{3^3}{10}$                       B.  $\frac{6}{10}$   
C.  $\frac{9}{10}$                       D.  $\frac{9}{30}$
10. Divide: 552 by 24=
- A. 21                      B. 24  
C. 23                      D. 25
11. Nyukit went round the figure below, what distance did he cover?
- 
- A. 222m                      B. 261m  
C. 366m                      D. 356m
12. Add:  $\frac{5}{12} + \frac{2}{12} + \frac{4}{12} =$
- A.  $\frac{11}{36}$                       B.  $\frac{11}{12}$   
C.  $\frac{14}{12}$                       D.  $\frac{7}{12}$

13. Work out: 57469

$$\begin{array}{r} +23486 \\ \hline \end{array}$$

- A. 80955                      B. 80945  
C. 70955                      D. 80855

14. Nyambura was in school for 5 weeks. How many days was she in school?

- A. 35 days                      B. 20 days  
C. 12 days                      D. 25 days

15. What is the length of the line below in cm?




- A. 7cm                              B. 10cm  
C. 8cm                              D. 6cm

16. In a village, there were 59529 people. Out of these 23683 are adults. How many children are in that village?

- A. 35846                      B. 83212  
C. 36946                      D. 36166

17. How many small squares are in the figure below?



- A. 11                              B. 12  
C. 24                              D. 32

18. Macharia had  $\frac{7}{11}$  of a sugarcane. He gave his friend  $\frac{2}{11}$  of the sugarcane. What fraction of the sugarcane was he left with?

- A.  $\frac{9}{11}$                               B.  $\frac{5}{11}$   
C.  $\frac{11}{5}$                               D.  $\frac{11}{11}$

19. How many days are there in May, June and July?

- A. 92                              B. 90  
C. 91                              D. 93

20. Work out: sh                      cts

$$\begin{array}{r} 55 \\ \times 4 \\ \hline \end{array}$$

$$\begin{array}{r} 55 \\ \times 4 \\ \hline 220 \\ \hline \end{array}$$

- A. sh220 360cents  
B. sh221 30cents  
C. sh 222 60cents  
D. sh 223 60cts

21. Which is the next number in the pattern.

36, 45, 54, 63, \_\_\_\_\_?

- A. 79                              B. 65  
C. 72                              D. 69

22. Which of the following fractions is greater?

$\frac{1}{8}$ ,  $\frac{1}{2}$ ,  $\frac{1}{3}$ ,  $\frac{1}{6}$

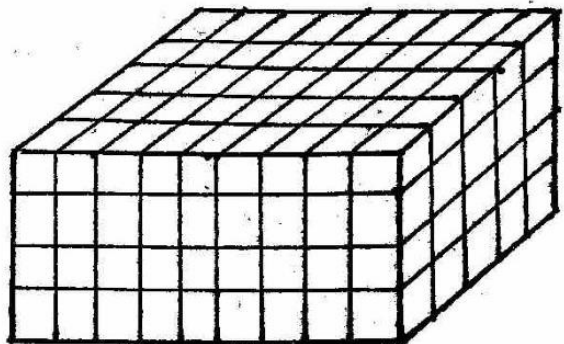
- A.  $\frac{1}{8}$                               B.  $\frac{1}{2}$

- C.  $\frac{1}{6}$                               D.  $\frac{1}{3}$

23. Add:  $\frac{1}{4}$ litres +  $\frac{1}{4}$ litres +  $\frac{1}{4}$ litres +  $\frac{1}{4}$ litres=

- A.  $\frac{1}{4}$  litres                      B.  $\frac{1}{2}$ litres  
C.  $\frac{1}{8}$ litres                      D. 1 litre

24. How many cubes are in the stack below?



- A. 90                              B. 45  
C. 135                              D. 180

25. M cm

6 45

x 5

A. 32m 25cm

B. 30m 225cm

C. 30m 25cm

D. 32m 52cm

26. Work out:  $388.2 + 31.25 + 4$

A. 419.49

B. 423.45

C. 601, 10

D. 4194.9

27. Which of the following are factors of 42?

A.  $7 \times 5$

B.  $6 \times 4$

C.  $7 \times 6$

D.  $6 \times 5$

28. Work out:  $23 \overline{)847}$

A. 35 rem 42

B. 36 rem 29

C. 26 rem 19

D. 36 rem 19

29. How many  $\frac{1}{2}$  kilograms are there in 15 kilograms?

A. 15

B. 20

C. 17

D. 30

30. What is the length of your classroom door?

A. 2cm

B. 2m

C. 2000cm

D. 20m

31. Which of the following numbers are divisible by 5 and 10?

A. 252, 450

B. 475, 340

C. 660, 440

D. 280, 325

32. Work out:  $\frac{5}{8} \times 40$

A.  $\frac{5}{320}$

B. 20

C. 30

D. 25

33. Muthoni went to the shop and bought 2 loaves of bread at sh45 each, 1 packet of maize flour for sh 140 and half kilogramme cooking fat for sh250. If she paid with a five hundred shilling note, how much balance did she get?

A. sh 65

B. sh 20

C. sh 30

D. sh 12

34. Work out:  $55 \times 10$

A. 550

B. 500

C. 5050

D. 5500

35. The perimeter of a rectangle is 90m. If its width is 20m, what is its length?

A. 20m

B. 50m

C. 25m

D. 40m

36. How many shillings and cents are there in 885 cents?

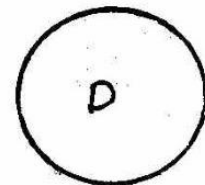
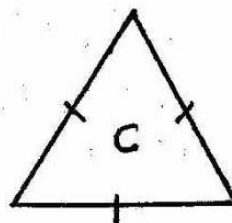

A. sh 8 85cts

B. sh 88 5 cts

C. sh8 58cts

D. sh 88 85cts

37. Which one of the following is a square?



38. A mother shared 96 oranges to her 4 children. How many oranges did each get?

A. 16

B. 14

C. 26

D. 24

39. Work out: 8 quarter litres - 5 quarter litres

A. 3 quarters

B. 5 quarters

C. 13 quarters

D. 4 quarters

40. Write 0.99 as a fraction

A.  $\frac{99}{100}$

B.  $\frac{9}{10}$

C.  $\frac{99}{10}$

D.  $\frac{100}{99}$

41. Add 46m 49cm to 51m 73cm

A. 97m 122cm

B. 98m 22cm

C. 97m 22cm

D. 971m 22cm

42. The width of a vegetable garden is 700cm.

What is the width in metres?

A. 0.7m

B. 7000m

C. 7m

D. 70m

43. Write down the following number: One hundred and four point zero seven.

A. 10.407

B. 104.7

C. 10407

D. 104.07

44. Write  $\frac{3}{8}$  words

A. Eight thirds

B. Three eighths

C. Three and eight

D. Eight three

45. Work out:  $5 \overline{) 18m \ 50cm}$

A. 3m 10cm

B. 3m 50cm

C. 3m 60cm

D. 3m 70cm

46. A boy bought 3kg of sugar. He fell down and  $\frac{1}{4}$ kg poured. How much sugar did he take home?


A.  $3\frac{1}{4}$ kg

B.  $2\frac{3}{4}$ kg

C.  $2\frac{3}{4}$ kg

D.  $\frac{2}{4}$ kg

47. What is the time shown on the clock?



A. Twelve minutes to eight

B. Twenty minutes past twelve

C. Twenty minutes to twelve

D. Eight minutes past twelve

48. Which group consists of even numbers only?

A. 472, 693, 4736, 700

B. 575, 377, 6497, 17

C. 436, 103, 829, 6619

D. 928, 634, 300, 9166

49. Work out:  $6 \overline{) \text{sh } 119 \ 70\text{cts}}$

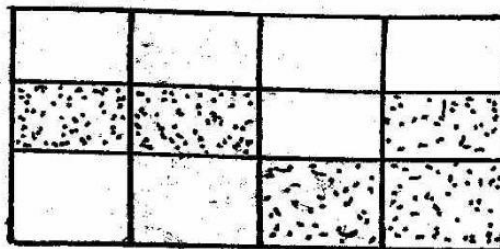
A. sh 19 95cts

B. sh18 95cts

C. sh 19 78cts

D. sh19 27cts

50. What is the fraction of the shaded part in the figure below?



A.  $\frac{7}{12}$

B.  $\frac{5}{7}$

C.  $\frac{4}{12}$

D.  $\frac{5}{12}$

# NYERI COUNTY EVALUATION TEST

# STD 4

## END TERM 2

# SCIENCE

Time: 1hr 40min

1. Kamau wanted to cut a piece of banana to his friend. Which teeth did he use to cut the banana?

- A. Premolars                      B. Canines  
C. Molars                          D. Incisors

2. Sisal and cotton are examples of \_\_\_\_\_ crops

- A. beverage                      B. fibre  
C. food                              D. cereal

3. Tomothy observed thick white featherly clouds. It had a flat base. The clouds indicates \_\_\_\_\_ weather.

- A. fine                              B. sunny  
C. cloudy                          D. windy

4. The following are all characteristics of animals. Which one is not?

- A. React to changes in the environment  
B. Remove waste  
C. Feed with meat  
D. Reproduce young ones

5. The following are uses of water in recreation. Which one is not?

- A. Fountains                      B. Swimming  
C. Boat rowing                      D. Skiing

6. Dead animals and plants rot. This waste matter is known as:-

- A. nutrients                      B. humus  
C. soil                                D. components


7. Which of the following are not an energy giving foods?

- A. Ugali, sugarcane  
B. Honey, maize  
C. Rice, green bananas  
D. Sardines, peas

8. The following are forms of matter .Which one is not?

- A. Swimming                      B. Solids  
C. Liquids                          D. Gases

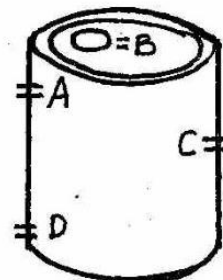
9. King Wanga placed a bottle top in water as shown below.



They later crushed the bottle top and found that it sank. The pupils were investigating about?

- A. Size                              B. Shape  
C. Material                          D. Colour

10. Tally made a tank as shown below.



The best point to fix a tap on the tank is \_\_\_\_\_

- A. D                      B. A                      C. B                      D. C

11. We cut napier grass using a \_\_\_\_\_

- A. knife                              B. saw  
C. jembe                              D. panga











12. The type of teeth shown below is known as:



- A. canine  
B. molar  
C. incisor  
D. premolar


13. Eye glasses should be given by \_\_\_\_\_  
 A. glasse doctors      B. head doctors  
 C. eye doctors      D. body doctors
14. A toilet is also called \_\_\_\_\_  
 A. pit latrine      B. water closet  
 C. water tank      D. a cleanser
15. These plants grow in water and near water except:-  
 A. mangrove tree      B. carrot plant  
 C. papyrus plant      D. water lily

**Use the weather chart below to answer the question below**

DAY	MORNING	AFTERNOON
Monday		
Tuesday		
Wednesday		
Thursday		
Friday		


16. Wednesday was a \_\_\_\_\_ and \_\_\_\_\_ day.  
 A. sunny , cloudy  
 B. windy , cloudy  
 C. sunny , windy  
 D. sunny , calm
17. The surrounding of an animal make up its \_\_\_\_  
 A. food      B. shelter  
 C. environment      D. reproduction
18. The broilers are chicken kept for meat. They are ready to be slaughtered after:-  
 A. one year      B. two months  
 C. 9 months      D. half an year
19. The soil that contains very fine particles is known as \_\_\_\_\_

- A. clay soil      B. sandy soil  
 C. loam soil      D. organic matter
20. Which one of the following groups of foods make a balanced diet?  
 A. Rice, sweet potatoes, meat  
 B. Bread, green bananas, sukuma wiki  
 C. Beans, fish, cabbages  
 D. Meat, potatoes, oranges
21. The following are forms of energy. Which one is not?  
 A. Light      B. Sky  
 C. Sound      D. Heat
22. The following are natural ways of lighting a house. Which one is not?  
 A. Sky lits      B. Windows  
 C. Doors      D. Electricity
23. The following are uses of heat. Which one is not?  
 A. Ironing      B. Drying clothes  
 C. Cooking      D. Taking Photographs
24. The following are types of foods which can cause tooth decay. Which one is not?  
 A. Cakes      B. Biscuits  
 C. Raw carrots      D. Sweets
25. Pupils from Muirungi Primary School were told by their teachers to name the crops grown around their school. They gave out the names of the following plants:- Coconut, sunflower. The pupils gave examples of \_\_\_\_\_ crops.  
 A. oil      B. fibre  
 C. beverage      D. vegetable
26. The diagram below shows \_\_\_\_\_ weed.



- A. wandering jew  
 B. mexican marigold  
 C. black jack  
 D. oxalis



27. The process of controlling weeds where dry grass is spread around the plant is known as  
 A. slashing                      B. mulching  
 C. uprooting                    D. dripping
28. Karimi observed the sky at night. For eight days he observed that the moon kept on changing shapes. The different shapes are called \_\_\_\_\_  
 A. phases of the sky  
 B. phases of the sun  
 C. phases of the moon  
 D. phases of the stars
29. A \_\_\_\_\_ has strong hind legs for hopping.  
 A. bee                              B. locust  
 C. mosquito                      D. ant
30. All the following transport water **except**:-  
 A. tap                              B. pipes  
 C. tankers                        D. cans
31. Wet soil from a riverbed feels \_\_\_\_\_ while wet soil from a building site loses water \_\_\_\_\_.  
 A. sticky, slowly  
 B. rough, quickly  
 C. sticky, quickly  
 D. little rough, quickly
32. We should always take \_\_\_\_\_ water everyday  
 A. plenty of                      B. little  
 C. a glass of                      D. two glasses of
33. When light bounces ~~off~~ the mirror we say light has been \_\_\_\_\_  
 A. refracted                      B. reflected  
 C. bent                              D. bounced
34. A tailor uses a \_\_\_\_\_ to cut out cloth and waiters in a hotel use \_\_\_\_\_ to open soda bottles.  
 A. knife, bottle opener  
 B. fishing rod, bottle crate  
 C. pair of scissors, bottle opener  
 D. pair of scissors, knife
35. Foods that protect our bodies against diseases are called:-  
 A. energy giving foods  
 B. herb foods  
 C. vitamins  
 D. ~~proteins~~
36. The following are uses of light. Which one is not?  
 A. Encourages pests  
 B. Plant use to make food  
 C. Taking of photographs  
 D. See clearly
37. The following are safety measures when one is using a hammer:-  
 i. Remove your hand  
 ii. Hold a nail upright on a piece of wood.  
 iii. Drive the nail into the wood  
 iv. Hit the nail slightly while still holding until it enters  
 Which of the following is correctly arranged?  
 A. i, ii, iii, iv                      B. iv, iii, ii, i  
 C. ii, iv, i, iii                      D. iii, iv, i, ii
38. Class four pupils made four holes along a height of a tin as shown:-  

- They poured water into the tin. Which hole produced the longest jet?
39. Oiling tools prevents them from:-  
 A. becoming blunt              B. decaying  
 C. drying                              D. rusting
40. The last four teeth to come out in adult life are known as:-

- A. permanent teeth
- B. wisdom teeth
- C. dentures teeth
- D. deciduous teeth

41. A special type of thread covered with wax that cleans between the teeth is known as:-

- A. dental carries      B. plaque
- C. dental cavities      D. dental floss

42. What is the meaning of the following initials H.I.V?

- A. Acquired Immunodeficiency Virus
- B. Acquired Immune deficiency Syndrome
- C. Human Immunodeficiency Virus
- D. Human Immuno Virus

43. The following are legumes. Which one is not?

- A. Kales                      B. Beans
- C. Greengrams              D. Peas

44. Wandering jew is a \_\_\_\_\_

- A. vegetable              B. crop
- C. weed                      D. cloth

45. The following are ways used in grouping the clouds. Which one is not?

- A. Size                      B. Height
- C. Appearance              D. Shape

46. The diagram below shows an animal.



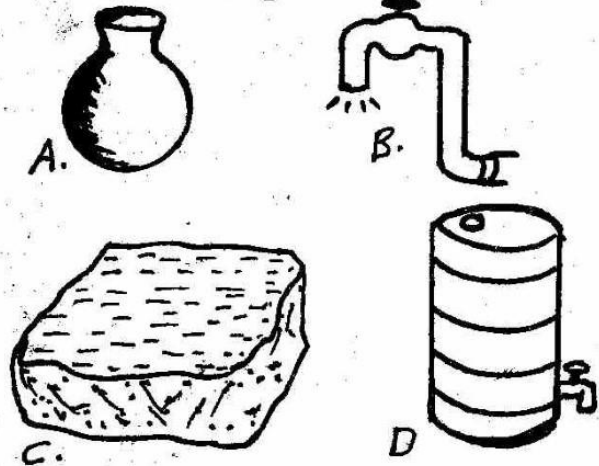
How does the animal drawn above move? It\_

- A. glides                      B. gallops
- C. crawls                      D. slithers

47. Pupils from Ruchu Primary went for a field study near their neighbour's farm. They found a dog with its tongue out. This is known as \_

- A. hunting                      B. panting
- C. gurdng                      D. fluffing

48. Pupils were given home work by their teacher to draw the diagrams shown below.

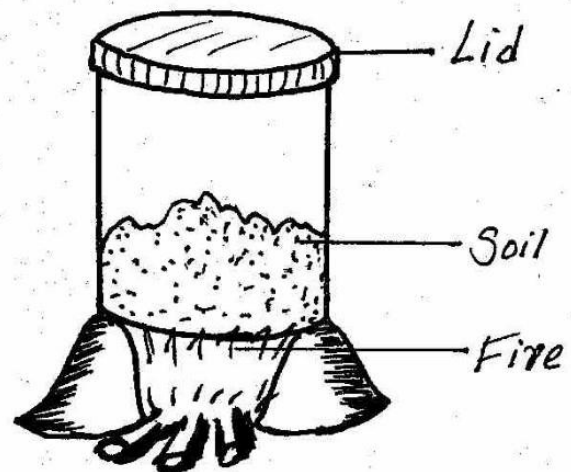


Which method shown above is not a way of storing water?

49. The following are uses of water in a farm. Which one is not?

- A. Irrigation                      B. Watering animals
- C. Rearing fish                      D. Boat racing

50. Pupils from Gichami Primary put some water in a tin and covered it with a small lid as shown below.



They later placed the tin on fire. After ten minutes they lifted the lid. What did they observe on the lid?

- A. Water droplets                      B. Mineral salts
- C. Bubbles                      D. Some insects

# NYERI COUNTY EVALUATION TEST

# STD 4

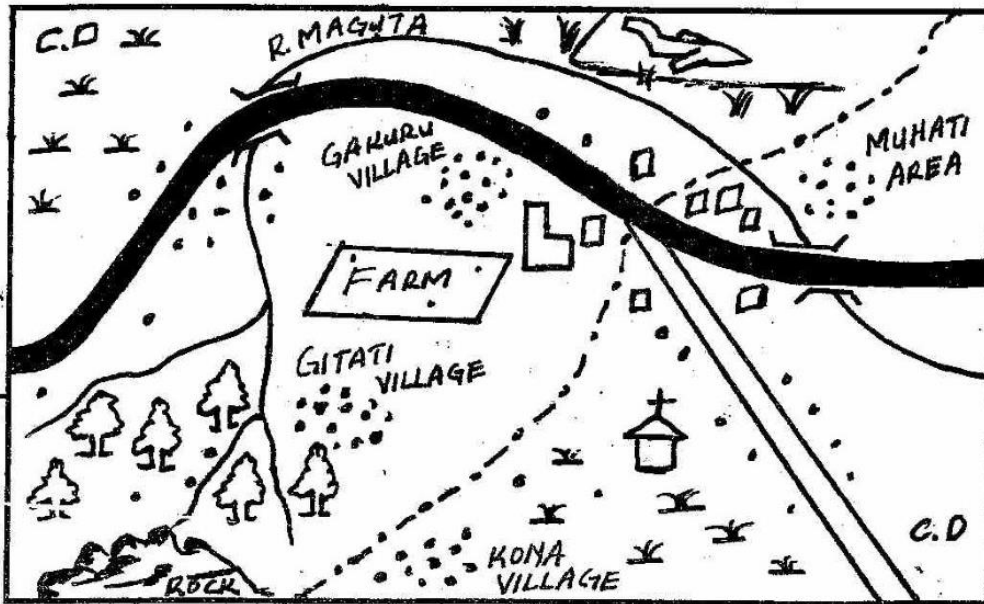
## END TERM 2

## SOCIAL STUDIES & CRE

Time: 2hrs 15min

Study the map below and answer Question 1-7.

### MAVUNO AREA

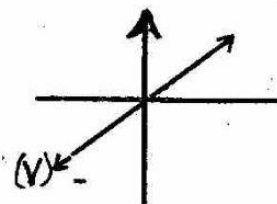


Key:-

C.D	Cattle dip
---	District boundary
~	River
==	All weather road
---	Dry weather road
□	School
•••	Settlement
□□	Permanent buildings
🌳	Forest
✳	Scrubs
✈	Air strip
⛪	Church

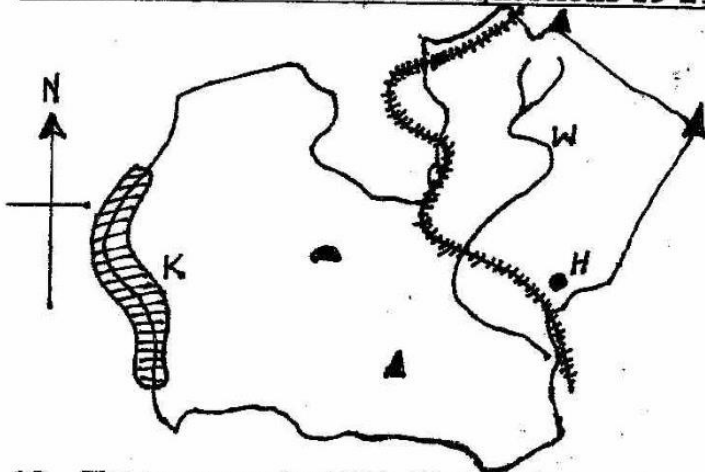
Scale:- 0 1 2 3 4 5 6 7 8 9 10 km

- Which is the lowest area in Mavuno area?  
A. Kona village      B. Gitati village  
C. Muhati area      D. Gakuru village
- Mavuno area is likely to be a \_\_\_\_\_.  
A. District      B. County  
C. Province      D. Country
- The airstrip in Mavuno area is likely to carry:  
A. cattle      B. tourists  
C. fruits      D. fish
- What is the direction of the airstrip from the church?  
A. South      B. East  
C. North      D. West
- River Maguta has \_\_\_\_\_ tributaries.  
A. four      B. one  
C. three      D. two
- People of Mavuno area are \_\_\_\_\_.  
A. christians      B. hindus  
C. muslims      D. pagans
- The main means of transport in Mavuno area is \_\_\_\_\_.  
A. water      B. road  
C. air      D. on foot
- A long chain of hills are called \_\_\_\_\_.  
A. aberdare      B. mountain  
C. ranges      D. forest
- The following rivers have their source in Aberdare ranges **except**:-  
A. Ragati      B. Moyok  
C. Honi      D. Chania
- The **main** type of trees found in Scrub vegetation is:-  
A. cactus      B. marshes  
C. baobab      D. acacia
- The County bordering Nyeri County to the East is \_\_\_\_\_.  
A. Murang'a      B. Kirinyaga  
C. Laikipia      D. Nyandarua
- The \_\_\_\_\_ part of Nyeri County is covered by grassland.  
A. Northern      B. Central  
C. Eastern      D. Southern
- The arrow of the windvane points where the wind is blowing \_\_\_\_\_.  
A. after      B. to  
C. from      D. against
- The compass direction marked **V** is \_\_\_\_\_.  
A. North East      B. South East  
C. South West      D. North West




15. Which one of the following is the odd one out?  
 A. Aembu                                      B. Abaluhya  
 C. Taita                                         D. Maasai
16. Areas that have high population like towns are said to be \_\_\_\_\_ populated.  
 A. thinly                                         B. densely  
 C. highly                                         D. sparsely
17. The way of life of people in different communities in the Country is called \_\_\_\_\_.  
 A. ceremonies                                 B. dressing  
 C. culture                                        D. moral values
18. The following are festivals **except**:-  
 A. drama                                         B. naming  
 C. harvest                                        D. music

**Use the map below to answer questions 19-21**



19. The town marked **H** is likely to be:-  
 A. Nyeri                                         B. Naromoru  
 C. Karatina                                     D. Othaya
20. The river marked **W** is \_\_\_\_\_  
 A. Thuti                                         B. Sagana  
 C. Honi                                         D. Gura
21. The shaded area marked **K** is \_\_\_\_\_  
 A. Kabiru -ini                                 B. Aberdare  
 C. Mt. Kenya                               D. Chinga dam
22. Which one of the following physical features is not found in our country?  
 A. Lake                                         B. Valley  
 C. Dam                                         D. Forest
23. Most of the rivers in our county drain to river \_\_\_\_\_  
 A. Gura                                         B. Thuti  
 C. Mathioya                                    D. Sagana
24. Tumutumumu hill is found in which district ?  
 A. Tetu                                         B. Mathira West  
 C. Mathira East                               D. Mukurwe-ini
25. Traditional ironworkers were called \_\_\_\_\_  
 A. carvers                                      B. blacksmiths  
 C. potters                                      D. traders
26. \_\_\_\_\_ materials are taken to the industries to make finished products.  
 A. Leather                                      B. Bad  
 C. Raw                                         D. Weaving

27. People used \_\_\_\_\_ to weave fabrics and to make baskets and ropes.  
 A. fibres                                         B. wood  
 C. clay                                         D. leather
28. The trade where people exchanged goods they had with the ones they did not have is called:-  
 A. modern trade                               B. giving trade  
 C. currency trade                              D. barter trade
29. Which one of the following is **not** a major trading centre in our county?  
 A. Kiganjo                                      B. Kiria-ini  
 C. Kiawara                                     D. Endarasha
30. People who are paid to carry goods are called \_\_\_\_\_  
 A. pack animals                                B. donkey  
 C. porters                                      D. taxi
31. Tourism is important because \_\_\_\_\_  
 A. visitors come to see us  
 B. farmers get money after selling their crops to tourist hotels  
 C. the wild animals get food  
 D. it helps us to learn English
32. Trading activities were conducted \_\_\_\_\_ in the past.  
 A. in shops  
 B. at the chief's office  
 C. in open-air markets  
 D. in shops
33. Game reserves are managed by \_\_\_\_\_  
 A. policemen  
 B. District Commissioners  
 C. Kenya wildlife Service [KWS]  
 D. Local County government
34. The natural homes of wildlife are called \_\_\_\_\_  
 A. habitats                                      B. forests  
 C. museums                                    D. game parks
35. Which one of the following is **not** an example of an airstrip or airfield in our County?  
 A. Karatina                                     B. Nyaribo  
 C. Gakawa                                     D. Mweiga
36. The road sign below means:-



- A. danger ahead                               B. no road ahead  
 C. hospital ahead                              D. road junction
37. Which one of the following traditional forms of communication is **not** non-verbal?  
 A. Fire and smoke  
 B. Ululations  
 C. Beating of drums  
 D. Blowing horns
38. Which one of the following tourist attractions is found in both Nyeri and Kirinyaga counties?

- A. Gura falls                      B. Aberdare  
C. Mount Kenya                D. Chania falls
39. Horticultural crops involves growing of flowers and \_\_\_\_\_  
A. vegetables                      B. wheat  
C. coffee                            D. pyrethrum
40. The following items were made from leather **except:-**  
A. sandals                          B. spears  
C. ropes                             D. clothes
41. \_\_\_\_\_ is a person who belongs to a particular Country.  
A. Society                          B. Dweller  
C. Citizen                          D. Kenyan
42. Which one of the following is **not** a traditional industry?  
A. Glass making                  B. Basketry  
C. Pottery                          D. Iron-working
43. Watering of plants where there is little or no rainfall is \_\_\_\_\_  
A. planting                         B. swamping  
C. drying                            D. irrigation
44. The waterfalls found in our County is \_\_\_\_  
A. Gikira falls                    B. Sagana falls  
C. Gura falls                      D. Thuti falls
45. Gourds for storing milk and water were made from:-  
A. Mungu                            B. calabash  
C. pumpkins                        D. clay
46. \_\_\_\_\_ is **not** a member of a nuclear family  
A. Father                            B. Mother  
C. Uncle                             D. Children
47. Chicken reared for meat are called \_\_\_\_\_  
A. poultry                          B. broilers  
C. beef farming                    D. layers
48. \_\_\_\_\_ is **not** a resource.  
A. Soil                                B. Water  
C. Wildlife                          D. Road
49. The headquarters of our County is in \_\_\_\_ town.  
A. Othaya                            B. Nairobi  
C. Nyeri                              D. Karatina
50. Traditional doctors who collect their medicines from different types of plants are called \_\_\_\_\_  
A. nurses                            B. herbalists  
C. doctors                            D. witchdoctors
51. Beef cattle are kept in large farms called \_\_\_\_\_  
A. zero grazing                    B. paddocks  
C. forests                            D. ranches
52. Rivers that dry up during the dry season are known as \_\_\_\_\_ rivers.  
A. permanent                      B. dry  
C. seasonal                         D. net
53. When we resolve our differences, we live \_\_\_\_  
A. in peace                         B. unhappily  
C. in poverty                        D. in sadness

54. The **main** tourist attraction in Aberdare national park is:-  
A. beautiful sites                B. wildlife  
C. traditional food                D. traditional dances
55. The **major** cause of road accident in most roads of our county is \_\_\_\_\_  
A. poor roads  
B. use of unroadworthy vehicles  
C. careless use of the roads  
D. careless traffic officers
56. The weather instrument below is used to measure:-



- A. strength of the wind  
B. temperature  
C. direction of wind  
D. amount of rainfall
57. An example of planted forest is found in:-  
A. Mount Kenya forest  
B. Aberdare forest  
C. Karima hill  
D. Nyana hill
58. The carrying away of soil by water and wind is called soil \_\_\_\_\_  
A. protection                      B. cover  
C. transport                        D. erosion
59. Rainfall is measured in \_\_\_\_\_  
A. °C                                 B. mm  
C. km                                 D. cm
60. All the plants found in an area are known as \_\_\_\_\_  
A. vegetation                        B. vegetables  
C. forests                            D. trees
- C.R.E**
61. \_\_\_\_\_ means "The place of the skull"  
A. Gethsemane                      B. Calvary  
C. Sinai                              D. Olives
62. When Jesus raised Lazarus, He showed he had power over \_\_\_\_\_  
A. creation                          B. death  
C. evil                                D. resurrection
63. "Wherever you go, I will go; wherever you live I will live. Your people will be my people, and your God will be my God. These words were said by Ruth to \_\_\_\_\_  
A. Orpha                              B. Mahlon  
C. Elimelech                        D. Naomi
64. What was the name of Hannah's son?  
A. Samuel                            B. Joseph  
C. David                              D. Esau
65. \_\_\_\_\_ would not let Jesus wash his feet?  
A. Judas                              B. Andrew  
C. Simon                             D. James
66. When Jesus fed 4000 people \_\_\_\_\_ baskets were collected as left overs.  
A. 12    B. 3                                C. 8                                D. 7

67. Adam and Eve had been told by God not to eat fruits from the tree in the middle of the garden because if they ate they would:-  
 A. die                                      B. be seen  
 C. not be satisfied                      D. live forever
68. Who among the following made a good choice  
 A. Adam                                      B. Anannias  
 C. Levi                                        D. Sapphira
69. By promising her only son to God Hannah was \_\_\_\_\_  
 A. selfish                                    B. unselfish  
 C. obedient                                 D. unfair
70. Which one of the following is **not** an African Independent church?  
 A. The Akorino church  
 B. African Divine church  
 C. African Inland church  
 D. The Legio Maria church of Africa
71. Service given by people who do not ask for payment is \_\_\_\_\_ service.  
 A. voluntary                                B. emergency  
 C. christian                                  D. social
72. When Sarah was 99 years old and Abraham 100 years, God gave them a son called \_\_\_\_\_  
 A. Samuel                                    B. Jacob  
 C. Ismael                                    D. Isaac
73. Jesus healed the Centurion's servant at \_\_\_\_\_  
 A. Nazareth                                 B. Galilee  
 C. Jericho                                  D. Capernaum
74. Which one of the following is not a way of expressing peace in traditional African society?  
 A. Shaking hands  
 B. Drinking beer during parties  
 C. Through marriages  
 D. Reading together
75. "I will ask the father, and he will send you a helper, who will stay with you for ever" The helper being referred to is:-  
 A. The holy spirit                          B. Jesus  
 C. Mother                                    D. prophet
76. When Peter preached on the day of Pentecost, \_\_\_\_\_ people believed and were baptized.  
 A. three hundred                          B. three thousand  
 C. thirty                                        D. ten
77. The following are christian communities in Kenya **except:-**  
 A. The Akorino churches  
 B. The Presbyterian Church of East Africa  
 C. The Methodist church  
 D. Hinduism
78. When Jesus healed the ten lepers, the one who was thankful was a \_\_\_\_\_  
 A. jew                                         B. samaritan  
 C. levite                                        D. priest
79. King Ahab had a wife called:-  
 A. Deborah                                  B. Naomi  
 C. Lydia                                        D. Jezebel
80. Angel Gabriel informed Mary about the birth of Jesus. This is called \_\_\_\_\_  
 A. Annunciation                          B. Resurrection  
 C. Ascension                                D. Census
81. The Pharisee and the tax collector went to church to pray. In his prayers the pharisee was not \_\_\_\_\_  
 A. arrogant                                 B. proud  
 C. humble                                    D. self-conceited
82. Lazy people in the traditional African communities are mocked through all the following **except:-**  
 A. songs                                        B. prayers  
 C. stories                                      D. riddles
83. On his way to school, Kamau, a std 4 boy found a fifty shillings note lying on the road. As a christian what should he do?  
 A. Give the teacher on duty  
 B. Buy sweets and share with his friends  
 C. Take it back to his mother at home.  
 D. Give it as an offering to the church
84. The early christians did all the following **except:-**  
 A. hated each other  
 B. shared meals  
 C. worshipped together  
 D. sold their properties
85. Kamau a std 4 boy at Mucharage Primary school can serve in his church by doing all the following **except:-**  
 A. singing                                    B. reading the bible  
 C. praying                                    D. stealing
86. Prophet \_\_\_\_\_ prophesied about the birth of the prince of peace.  
 A. Micah                                      B. Isaiah  
 C. Joel                                         D. Jeremiah
87. Three of the following are sacred places for the traditional African communities. Which one is not?  
 A. Church                                      B. Caves  
 C. Hills                                         D. Mountains
88. \_\_\_\_\_ is the last book in the old testament while \_\_\_\_\_ is the last in the new testament.  
 A. Genesis and Mathew  
 B. Exodus and Mark  
 C. Malachi and Revelation  
 D. Mathew and Numbers
89. We respond to Jesus' salvation by all the following **except:-**  
 A. hating our enemies  
 B. showing kindness to others  
 C. being good to everyone  
 D. having joy even in difficulties
90. Which one of the following is not a fruit of the Holyspirit?  
 A. Joy    B. Patience  
 C. Humility                                  D. Anger

# 4

## NYERI COUNTY MARKING SCHEME

<u>MATHS</u>	<u>ENGLISH</u>	<u>KISWAHILI</u>	<u>SCIENCE</u>	<u>SOCIAL STUDIES</u>
1. C			1. B	1. D
2. B	1. B	1. B	2. D	2. B
3. D	2. C	2. C	3. A	3. C
4. A	3. A	3. D	4. D	4. A
5. A	4. C	4. B	5. B	5. B
6. D	5. D	5. C	6. C	6. D
7. B	6. A	6. D	7. D	7. A
8. D	7. B	7. B	8. D	8. C
9. C	8. A	8. C	9. C	9. D
10. B	9. C	9. B	10. B	10. B
11. D	10. B	10. A	11. C	11. C
12. C	11. D	11. D	12. A	12. A
13. A	12. D	12. B	13. B	13. C
14. C	13. A	13. D	14. A	14. D
15. B	14. B	14. A	15. A	15. B
16. B	15. C	15. C	16. A	16. C
17. A	16. B	16. A	17. C	17. A
18. D	17. B	17. B	18. D	18. B
19. B	18. C	18. B	19. B	19. D
20. C	19. A	19. C	20. C	20. A
21. C	20. A	20. C	21. D	21. B
22. B	21. B	21. D	22. C	22. C
23. A	22. C	22. A	23. A	23. A
24. D	23. B	23. C	24. B	24. D
25. B	24. D	24. B	25. A	25. B
26. C	25. A	25. A	26. C	26. C
27. D	26. B	26. B	27. C	27. A
28. B	27. A	27. C	28. D	28. D
29. D	28. D	28. D	29. B	29. B
30. C	29. A	29. B	30. C	30. C
31. C	30. B	30. A	31. A	31. B
32. B	31. C	31. B	32. A	32. D
33. A	32. B	32. A	33. D	33. B
34. D	33. A	33. D	34. B	34. C
35. C	34. D	34. B	35. C	35. D
36. A	35. A	35. C	36. B	36. B
37. B	36. C	36. C	37. B	37. B
38. D	37. B	37. A	38. A	38. A
39. A	38. C	38. D	39. D	39. B
40. C	39. A	39. B	40. C	40. C
41. A	40. D	40. C	41. B	41. A
42. C	41. D	41. A	42. B	42. A
43. D	42. B	42. D	43. B	43. A
44. B	43. B	43. D	44. C	44. C
45. A	44. C	44. A	45. D	45. B
46. C	45. D	45. B	46. B	46. D
47. B	46. A	46. C	47. A	47. B
48. D	47. C	47. D	48. C	48. B
49. A	48. B	48. D	49. C	49. D
50. B	49. C	49. B	50. D	50. C
	50. A	50. B		51. B
				52. A
				53. C
				54. D
				55. C
				56. A
				57. B
				58. D
				59. C
				60. A
				<u>C.R.E</u>
				61. C
				62. A
				63. B
				64. D
				65. A
				66. B
				67. C
				68. B
				69. D
				70. A
				71. B
				72. D
				73. C
				74. B
				75. D
				76. C
				77. C
				78. D
				79. B
				80. C
				81. A
				82. D
				83. B
				84. A
				85. C
				86. B
				87. A
				88. D
				89. C
				90. B