

EMBU COUNTY MOCK EXAMS
STANDARD 8 - YEAR 2014
ENGLISH COMPOSITION

8

Powered By: www.eeducationgroup.com

YOUR NAME	
INDEX NUMBER	
NAME OF YOUR SCHOOL	

ENGLISH
SECTION B: COMPOSITION

TIME : 40MINUTES

READ THE INSTRUCTIONS CAREFULLY

1. In the spaces provided write of your full Index Number, Your Name, and the Name of Your School.
2. Now open this page, read the composition subject carefully and write your composition on the lines, provided.

This Question paper consists of 4 printed pages.

Complete the following story and make it as interesting as possible

We had all waited for that day with a lot of excitement. The day was bright and promising. However

.....
.....
.....

Please Turn Over the page

For questions 1 - 15. Read the passage and fill in the blank spaces.

Everybody had instructed me 1 in traditional 2 at an early age. By the time I was a 3 girl could prepare a meal. It was the Parish Priest's habit, 4 he wanted to go round our parish. He 5 come and eat my meal. During one of his visits, he found mother 6 millet for the evening meal. I was 7 by a blinding admiration for her hardwork. I stole 8 at the priest. This was interrupted 9 the 10 of chickens dancing around 11 my mother warning me not to stand before adults due to he 12 as a teacher, I could not avoid looking at the chicken having authority 13 their youngones. I was 14 with jealousy. It did not 15 have a bad impact on me.

- | | | | | |
|-----|-------------------|----------------|--------------------|-------------------|
| | A. | B. | C. | D. |
| 1. | thoroughly | always | well | throughout |
| 2. | crockery | cutlery | cookery | cocktail |
| 3. | thirteen year old | thirteen years | thirteen years old | thirteen-year-old |
| 4. | while | whenever | when | however |
| 5. | could | might | would | should |
| 6. | crashing | beating | crushing | ponding |
| 7. | grabbled | seized | held | captured |
| 8. | glances | stares | glares | gazes |
| 9. | at. | with | because | by |
| 10. | chucking | chirping | lowing | squeling |
| 11. | inspite of | despite | inspite | despite of |
| 12. | profession | profession | profession | proffesion |
| 13. | on | of | over | to |
| 14. | overcome | overcame | overcomed | overcoming |
| 15. | furthermore | consquently | therefore | however |

Fill in the gaps with the best alternative

16. The teacher as well as the pupils _____ going on a trip.
A. are B. is C. was D. has been
17. Philip was angry and _____ the letter
A. tore out B. tore up C. tore into D. tore in
18. **Complete the following sentences correctly**
18. Only when she comes _____
A. will we visit the park
B. that I will prepare a meal
C. than they will walk down the aisle
D. for it will have stopped raining
19. Not until you pay _____
A. that I will deliver the goods
B. when goods will be delivered
C. for the goods to be delivered
D. goods will be delivered

Fill the gaps below in 20 - 21

20. The goods are estimated _____ ten million.
A. at B. for C. to D. with
21. They had seen the man who _____ on the path yesterday.
A. lied B. lay C. laid D. lain

Choose the antonym of the underlined word.

22. Mr. Onyango seldom goes home early.
A. not often B. rarely C. frequently D. barely

Read the passage to get information for 23 - 25

Ben, Tom, Charbs, Alice and Caroline were selecting subjects which they were going to study in high school. Ben, Tom and Charles picked Biology, Chemistry and Geography. Caroline and Alice picked Physics, Biology and History. All the students, except Tom and Caroline who picked Religion, opted for Social Ethics. Mathematics, English and Kiswahili were compulsory.

23. Which one of the following was selected by the least number of students?
A. chemistry B. biology
C. geography D. history
24. Religion was picked by _____
A. Tom and Ben B. Tom and Caroline
C. Caroline and Alice D. Charles and Tom
25. Which subject was selected by the most number of student?
A. chemistry B. geography
C. biology D. mathematics

Read the following vassase and answer questions 26 - 35

It is said that the darkest hour comes before dawn, and certainly that was true of my school life. The year I spent in standard 2 was as unlike that of standard I as it is possible to be. My new teacher was an easy-going man with a real affection for children. He seemed to like us as we were, not only for what he could make of us, He was especially gentle with me. The other children, so used to my father's rule, took advantage of his leniency and the standard of work went down. It did not, however, have that effect on me. At first I kept up my standard of neatness, accuracy and attention because my father kept a watchful eye on my progress and behaviour. Although I was no longer in his class, he inspected my exercise books regularly. But soon I was doing my best simply to please the teacher and win his praise. In a few weeks I was the top of the class and began to enjoy school.

I remember clearly the first time I was called out to the front of the class, not to be punished but to be praised. The teacher entered the room and picked out an exercise book from the pile on his table and said, "Kofi, come here." The room swam before my eyes, I felt sick, I could not move. How often during the year before had

I heard those words. They were always an indication of a sad happening situation. I felt again on imagination of a sad happening situation. I felt again on imagination forty pupils staring at me, heard again the cold cutting voice of my father announcing my disobedience or stupidity to forty pairs of ears; felt again the cut of the cane, and heard my own voice sob and gasp, although I had made up my mind to make no sound this time.

But I was not surprised. I had nothing on my conscience. The exercise book which my teacher held contained nothing but my most painstaking work. I forced myself to my feet. Well, this teachers worst punishments were light to anyone who had been in standard 1. But my heart cried out, "Not from you, Not from you."

Out in the front of the class I raised my eyes slowly to my teacher's face. He was smiling. He put a hand on my shoulder and turned to face the class. "Look," he said, "Kofi is the youngest of you all, and he has done a beautiful piece of work. Can you all see?" he asked, holding my opened exercise book towards them. "Not a single mistake, beautiful figures, straight lines drawn with a ruler, proper spacing. Very good indeed, Kofi "Children give him a clap." The class burst into applause. The children who had so often watched my humiliation. Here in the place that had held so much terror for me, I was actually being praised. I burst into tears, grabbed my exercise book from my astonished teacher and ran back to my desk amid the amazed exclamations and laughter of my friends.

My teacher was a wise man. He made no comment, nor did he praise me in front of the class for the next week. Instead he gave me a quiet "well done," as he went past my desk. Later he called me out to work sums on the blackboard to point out places on a map, until I forgot that the front of the class was ever an undesirable place to be.

- | | |
|---|--|
| <p>26. From the first paragraph the reader learns that _____</p> <p>A. Kofi liked his father more than his new teacher</p> <p>B. It was in standard 2 that Kofi found school life enjoyable</p> <p>C. Kofi's success was mainly due to the fact that his father was strict</p> <p>D. The other children in standard 2 worked as hard as Kofi</p> <p>27. Why did the writer make remarkable progress in standard 2?</p> <p>A. he relaxed while other children worked harder</p> <p>B. his new teachers praise made him take more interest in his studies</p> <p>C. his father often helped him with his homework</p> <p>D. like other children, he took advantage of his new teacher's leniency</p> <p>28. One of the following statements about the first and second paragraphs is wrong. Which one?</p> <p>A. Kofi's new teacher rightly praised the writer for his good work</p> <p>B. All standard 2 children except Kofi improved in their studies</p> <p>C. Kofi is the same person as the writer</p> <p>D. Kofi's father taught standard 1 pupils</p> <p>29. The whole class stared at him as if he had committed a crime.</p> <p>A. the whole class stared at him as if he had committed a crime</p> <p>B. he heard his father remark that Kofi was stupid and disobedient</p> <p>C. he started sobbing and gasping after he had been caned</p> <p>D. he was reminded of the punishments given to him in standard 1</p> <p>30. Why was Kofi highly surprised when he was called to appear in front of the class?</p> <p>A. he had never been punished before</p> <p>B. his exercise book contained only his best work</p> <p>C. his new teacher was known to have punished nobody</p> <p>D. he remembered he had never talked ill of his new teacher</p> | <p>31. Why did Kofi- burst into tears when the class tried to cheer him up by clapping?</p> <p>A. it was too wonderful an experience to bear</p> <p>B. the same class had humiliated him before</p> <p>C. he thought his classmates were making fun of him</p> <p>D. he thought his teacher was making fun of him</p> <p>32. Why did the teacher praise Kofi before the class?</p> <p>A. to make Kofi understand that he was the teacher's only favourite</p> <p>B. to enable other children pay no attention to their school work</p> <p>C. to get him interested in school work</p> <p>D. to create a good impression on Kofi's father</p> <p>33. Kofi describes his teacher as being wise because _____</p> <p>A. he often commented on Kofi's excellent progress</p> <p>B. he uttered a quiet "well done" whenever he went past him</p> <p>C. he made Kofi and other children work sums on the blackboard</p> <p>D. his not praising Kofi in front of the class for the next two weeks helped the pupil overcome his nervousness and become confident</p> <p>34. What made Kofi forget that the front of the class was ever on undesirable place to be?</p> <p>A. he was made to get to the front of the class to do some useful constructive work instead of being punished and humiliated</p> <p>B. Kofi's teacher did not say any more words of praise to him</p> <p>C. he was asked to point out places on a map</p> <p>D. he was asked to work on the sums on the blackboard</p> <p>35. What is Kofi's character according to the passage?</p> <p>A. sensitive by nature</p> <p>B. very careless</p> <p>C. of average ability</p> <p>D. disobedient and undisciplined</p> |
|---|--|

Read the passage and answer questions below 36 - 50

Throughout history humans have dreamt of a life without out disease. In the past hundred years, as scientists learn more about the cause of diseases, and as new miracle drugs were made, people began to loom forward to the defeat of disease. Disease is far from conquered and there is little chance that it ever will be. "Good health" is a hard term to define, but the health of a group of people is usually measured by how many of the children survive childhood and how long they live. By these measures only a few countries in the world have healthy populations. In the other countries-where two-thirds of the earth's people live the picture of health is quite different. In India, only one of three people born today can expect to live to the age of fifty. In many African and Asian countries these boys and girls who survive too many childhood diseases still face a grim life without enough of the right kinds of food.

Only a great deal of work, money and time will bring 'good health' to all of the world's people. In the meantime scientists are looking again at the idea of defeating disease. They not only doubt if it is possible, but they wonder if it is wise to try. All living things have diseases, including trees, grass and your pet dog or cat. Even the bacteria that infect humans it is a popular idea to blame most diseases on 'germs'. Few diseases have only one cause. Many people carry disease-causing germs, in their bodies. This germs doesn't make them sick. Something else in their surroundings, such as the weather, the food people eat, or even a family gamely may help the disease flare up. Usually disease have a variety of causes not just one. Scientists now know that simply finding new drugs and medicines to fight disease is not enough. In some cases new kinds of germs have appeared that are able to resist the drugs that used to be able to kill them. Scientists expect the same thing to happen with other kinds of diseases germs. We can still hope to reduce sickness by using what we already know about diseases and by learning more about how disease works in man's environment.

- | | |
|--|--|
| <p>36. How can we judge the health of a country's people?
 A. by comparing the African and Asian countries
 B. investigating type of food generally eaten
 C. finding out the number of children
 D. finding out how long people live on average</p> <p>37. How long will it take before man's life is completely free of disease?
 A. on approtimate two hundred years
 B. when alot of drugs are discovered
 C. when alot of invention about causes will be known
 D. perhaps there will never be such a time</p> <p>38. Where are healthy populations found?
 A. the countries where two-thirds of the earth's people live
 B. where one of three people born today can expect to live to age of fifty
 C. only a few countries, where people survive childhood diseases
 D. most Asian and African countries where young people do not suffer from disease</p> <p>39. All the worlds people will not enjoy good health unless
 A. a great deal of work is done
 B. a lot of money is spent
 C. a lot of time is devoted to the treatment of various diseases
 D. people do alot of work and spend a great deal of money and time for the cause of good health</p> <p>40. The scientists
 A. think that all diseases can be cured
 B. think that no disease can be cured
 C. are certain that disease can be defeated
 D. are certain that disease cannot be defeated</p> <p>41. What causes a person's illness?
 A. the germs and conditions affecting his life
 B. conditions affecting his life
 C. the germs
 D. lack of good food or weather conditions</p> <p>42. Which of the following statements is <u>UNTRUE</u>?
 A. the bacteria that infect living things are not without diseases
 B. all living things have diseases
 C. trees and grass are examples of living things
 D. all people carry disease causing germs in their</p> | <p>body</p> <p>43. Drugs cannot be depended upon to cure disease because
 A. there are not as many drugs as there are diseases
 B. all germs may not be killed by drugs
 C. germs are likely to become resistance to drugs
 D. a good diet may not be available to patients</p> <p>44. We can reduce sickness by
 A. not only making use of existing medical knowledge about diseases but also doing more research
 B. enabling people to take care of their health
 C. improving the living conditions of people
 D. producing more drugs</p> <p>45. Which one of the following is true?
 A. there will be a cure for every disease in hundred years time
 B. no disease has more than one cause
 C. no living things is without disease
 D. all children survive child hood disease in today's world</p> <p>46. When children don't survive in childhood we term that as
 A. immorality B. mortality
 C. immortality D. morality</p> <p>47. The phrase flare up has been underlined meaning
 A. get cured B. get well soon
 C. suddenly getting worse D. instantly bad</p> <p>48. "In some cases new kinds of germs have appeared that are able to resist the drugs....." this statement means?
 A. always new kinds of germs appear resistant
 B. often do new kinds of germs appear resistant
 C. hardly do new kinds of germs appear resistant
 D. barely do new kinds of germs appear resistant 4</p> <p>49. According to the passage all the following can flare up a disease EXCEPT
 A. how hot or cold it is B. domestic squabbles
 C. diet D. occupational perk</p> <p>50. The best title for the passage is
 A. how to carry disease- causing germs
 B. causes to various illness
 C. germs
 D. definition of 'Good health'</p> |
|--|--|

GATUZI LA EMBU MTHANI WA MWIGO
DARASA LA 8 - MWAKA 2014
KISWAHILI INSHA

Powered By: www.eeducationgroup.com



JINA LAKO	
NAMBA YAKO YA MTHANI	
NAME OF YOUR SCHOOL	

KISWAHILI
SEHEMU B:INSHA

MUDA : 40MINUTES

SOMA MAAGIZO HAYA KWA MAKINI

1. Kwenye nafasi zilizoachwa hapo juu, andika namba yako kamili ya mthani, Jina lako, Jina la Shule yako.
2. Sasa fungua Karatasik hii, soma kichwa cha insha kwa makini na uandike insha yako kwenye nafasi ulioachiwa.

KARATASI HII LA MASWALI LINA KURASA NNE ZILIZO PIGWA CHAPA

Umepewa dakika 40 kuandika insha yako.

Andika insha ya kusimua ukianza kwa maneno uliyopewa hapa chini

Oti alikuwa mtoto mwenye maadili. Lakini siku moja


.....

.....

.....

Fungua Kurasa

KAUNTI YA EMBU MTHANI WA MWIGO
DARASA LA 8 - MWAKA 2014
KISWAHILI



MUDA : 1 HOUR 40 MINUTES

SOMA KWA MAKINI MAAGIZO YAFUATAYO

1. Umepewa karatasi hii ya maswali na karatasi ya kujibia. Karatasi hii ina maswali 50
2. Ikiwa utataka kuandika chochote ambacho si jibu andika katika karatasi hii
3. Ukisha chagua jibu lako lionyeshwe katika KARATASI YA MAJIBU na wala siyo katika karatasi hii ya maswali

JINSI YA KUTUMIA KARATASI YA MAJIBU

4. Tumia Penseli ya kawaida
5. Hakikisha ya kwamba yafuatayo umeandika katika karatasi ya majibu;
NAMBA YAKO YA MTHANI
JINA LAKO
JINA LA SHULE YAKO
6. Kwa kuchora kistari katika visanduku vyenye namba zinazokuhusu, onyesha namba yako kamili ya mthani (yaani namba ya shule, na zile namba tatu za mtahiniwa) katika sehemu iliyotengwa mwanzo wa karatasi ya majibu.
7. Usitie alama zozote nje ya visanduku.
8. Iweke safi karatasi yako ya majibu na usiikunje.
9. Kwa kila swali 1-50 umepewa majibu manne. Majibu hayo yameonyeshwa kwa herufi A, B, C, D. Ni jibu MOJA tu kati ya hayo manne ambalo ni sahihi. Chagua jibu hilo.
10. Kwenye karatasi ya majibu, jibu sahihi lionyeshwe kwa kuchora kistari katika kisanduku chenye herufi uliochagua kuwa ndilo jibu.

Mfano:

Katika karatasi ya maswali :

21. Kwenye naeno NINAMPENDA, viwalilishi ni _____

A. Penda

B. Ni, M

C. Ni, Na

D. Na, M.

Jibu sahihi ni (B) (Ni, M)

Katika karatasi ya majibu

19. [A] [B] [C] [D]

20. [A] [B] [C] [D]

21. [A] [B] [C] [D]

22. [A] [B] [C] [D]

23. [A] [B] [C] [D]

Katika visanduku vinavyoonyesha majibu ya swali namba 21. Kisanduku chenye herufi B ndicho kilichorwa kistari

11. Chora kistari chako kiwe cheusi na kisijitokeze nje ya kisanduku.
12. Kwa kila swali, chora kisanduku kimoja tu kati ya visanduku vinne ulivyopewa.

Karatasi hii ina maswali 50 iliyopigwa chapa.

Chasua jibu sahihi kujazia nafasi zilizoachwa kuanzia 1-15.

Kisa cha uhalifu kiliripotiwa 1 ulifanywa na 2 akatiwa nguvuni na kupelekwa katika 3. Aliandikisha taarifa na kufungiwa katika 4. Siku iliyofuata, alipelekwa kortini 5 mashtaka. Alisimama 6 na kusomewa mashtaka lakini 7 mashtaka 8. Kadiri mtoto 9 ndivyo anavyojifunza mengi. Mara kwa mara mzazi hulazimika 10 anapakosea na kufunza mambo ambayo ni 11 kama vile kuoga na maadili. Mtoto 12 vizuri hawezi 13 familia yake aibu. Ni sharti wazazi wawe 14 chema kwa wana, 15.

A.	B.	C.	D.
1. npekuzi	upeketevu	uchaguzi	upatilivu
2. mhalifu	mfungwa	mshtakiwa	mtuhumiwa
3. mahakamani	korokoroni	kituo cha polisi	mashtakani
4. rumande	seli	husuni	huzuni
5. kujibu	kusema	kukana	kuteta
6. korokoroni	jukwani	mimbarini	kizimbani
7. alikiri	alikuwisha	alikubali	aliteta
8. zote	lote	wote	yote
9. anavyokua	anavyokuwa	anayokuwa	anayokua
10. kumpiga dafu	kumwasi	kumrudi	kumkemea
11. hiari	faradhi	ajabu	bahati
12. akilelewa	akilewa	akilishwa	akila
13. kuwaletea	kutetea	kuteta	kuitea
14. kielezi	kielekezo	kielelezo	kielezo
15. wao	yao	zao	lao

Kuanzia swali nambari 16 mpaka 30, jibu swali kulingana na maagizo

16. Chagua sentensi sahihi:
A. niliposikia mayowe, nilikimbia nje
B. gazeti lingine limenunuliwa
C. nje kumanyeshewa na mvua
D. sikioni jingine kumanta
17. Ni ipi isiyo maana ya neno **shida**?
A. faulu
B. kaa kutwa
C. isiyojaa
D. taabu
18. Kamilisha methali:
Kosa moja haliachishi _____
A. mtoto
B. mke
C. mwingi
D. mhalifu
19. Tumia "a" unganifu:
Mama _____ binamu yangu amesafiri
A. za
B. ya
C. wa
D. la
20. Mwiko, mwayo, mnanasi _____ nomino hizi zipo katika ngeli gani?
A. I-ZI
B. U-YA
C. I-I
D. U-I
21. Bainisha kiwakilishi katika sentensi:
Mtoto wa jirani si kama wa mgeni
A. wa mgeni
B. wa jirani
C. wa
D. kama
22. Tumia kiunganishi sahihi
Runinga nyingi hazifanyi kazi _____ ya mfumo mpya wa dijitali
A. iwapo
B. aidha
C. kwa minajili
D. kutokana na
23. Kifaa cha kushika sufuria unapopika ili usichomeke huitwa?
A. kawa
B. joko
C. boi
D. marigedi
24. Shule za kibinafsi zimesimamiwa na wizara gani?
A. wizara ya fedha
B. wizara ya elimu
C. wizara ya ruwaza ya 2030
D. wizara ya biashara
25. Inaonekana siku hizi "jua limekasirika" kifungu hiki "jua limekasirika" ni fani gani ya lugha?
A. methali
B. istiaha
C. tashbihi
D. tashihisi
26. Nomino ya dhahania inayotokana na kitenzi sahau ni _____
A. usahaulifu
B. sahaulifu
C. sahauliana
D. sahaulisha
27. Tumia kivumishi sahihi kukamilisha sentensi ifuatayo:
Mtu _____ hupendwa na watu wengi.
A. karimu
B. hodari
C. msafi
D. kakamavu
28. Kanusha:
Kucheza kwake kulimpeleka Ulaya.
A. kucheza kwake hakukumpeleka Ulaya
B. kutocheza kwake hakukumpeleka Ulaya
C. kutocheza kwake hakumpeleki Ulaya
D. kutocheza kwake kulimpeleka Ulaya
29. Sina budi kuenda shuleni. Ni kusema _____
A. si lazima niende
B. ni hiari yangu kuenda
C. ni lazima niende
D. labda nitaenda
30. Lipi jina baki katika ya haya:
A. mtumbwi
B. riksho
C. pantoni
D. dau

Soma makala haya kisha ujibu ntaswali 31 - 40

Takriban watalii laki mbili wanaozuru mbuga ya wanyama ya ziwa Nakuru kila mwaka huvutiwa na idadi kubwa ya vifaru waliomo. Mbuga hii ndiyo hifadhi ya pekee nchini ambako visa vya uwindaji haramu havijawahi kuripotwa tangu mwaka wa 1987.

Nyati mweusi mhalan, ambaye ni mlaji mkubwa wa mimea, ndiye kivutio kikuu katika hifadhi hiyo. Bila shaka kushamiri kwa vichaka katika sehemu za mwimuko za hifadhi hii ni zawadi murua kwa nyati hao. Kongoni nao hupatikana kwenye sehemu zenye yinamasi.

Wakati wa msimu wa kiangazi, jumla ya aina sitini za hayawani wa jamii ya mamalia hunyweshwa maji kwenye hodhi kadhaa zipatikanazo humu mbugani. Hali hii imetokana na maji ya ziwa lenye uchumvi tele kupenya hadinyikani.

Lakini katika siku za fivi karibuni, mjo wa maji mengi kutoka sehemu za nyanda za juu umepunguza kwa kiasi kikubwa huo umungu wa maji ya ziwa hili. Hivyo basi, shirika la huduma kwa wanyama wa pori himesitisha mpango wa kuwapa wanyama hao maji.

Kwa upande mwingine, maji yatokayo mlimani Menengai na kupitia mjini Nakuru yamezua changamoto kwa uchafuzi wa ziwa na mazingira yake. Uchungu wa mara kwa mara wa ubora wa maji ya ziwa unafanywa. Aidha washikadau wanajitahidi kuhakikisha kwamba majitaka kutoka viwandani hayaishii ziwani.

Baadhi ya vichafuzi vikuu vya maji ya ziwa ni pamoja na mashamba ya upanzi wa maua kunakotumika kemikali aina ainati. Pia kuna mafuta gushi na vichafuzi vinginevyo vinavyotoka katika karakana za kukarabati magari.

Wananchi wote kwa jumla wamejukumika kuhakikisha kwamba ziwa Nakuru linadumisha hadhi yake ya kuwa kivutio cha watalii kwa kulilinda dhidi ya kuharibiwa.

26. Takriban watalii wangapi wanaokisiwa kuizuru mbuga ya wanyama ya ziwa Nakuru?
A. 20,000 B. 200,000
C. 2,000,000 D. 2,000
27. Ni sentensi ipi iliyo sahihi kulingana na ufahamu huu?
A. vifaru vichache mno vya uwindaji haramu vimeripotwa
B. visa vichache mno vya uwindaji haramu vimeripotwa
C. kuna hifadhi moja tu nchini Kenya inayowavutia watalii.
D. ujangili haujaripotwa kwa muda mrefu katika mbuga ya ziwa Nakuru
33. Mbogo mweusi _____
A. hapendi sana kula mimea
B. wanapenda sana kuogelea katika ziwa
C. hupendwa sana na watalii
D. hupatikana kwenye maji ya chumvi
34. Ni hayawani yupi asiyepatikana katika mbuga ya ziwa Nakuru kulingana na habari?
A. kongoni B. ngwena
C. mbogo D. vifaru
35. Ni ipi si sababu ya kuwapawanyama maji hodhini?
A. upungufu wa maji yasiyo na chumvi huathiri hayawani
B. kiangazi husababisha wanyama kukosa maji
C. maji ya chumvi hayapendwi na hayawani
D. kupunguza ushindani kati ya hayawani
36. Huduma kwa wanyama pori huhusu nini?
A. kuongeza uchumvi katika maji
B. kulinda wanyamapori
C. kusaidia katika uwindaji wa wanyama
D. kulinda wanyama dhidi ya watalii
37. Kiwango cha umunyu wa maji kimepunguzwa na nini?
A. ongezeko la wanyama katika nyanda za juu
B. ongezeko la wanyamapori
C. ongezeko la mvua katika nyanda za juu
D. ongezeko la watalii
38. Baadhi ya mikakati inayofanywa kudumisha ziwa Nakuru ni pamoja na _____
A. kuongeza kiwango cha maji
B. kushirikiana kwa washikadau kutoa michango yao
C. kupunguza idadi ya watalii
D. kupunguza kiwango cha maji
39. Baadhi ya vitu vinavyochangia uchafuzi wa ziwa Nakuru ni _____
A. wanyama pori
B. watalii
C. maafisa wa huduma za hayawani
D. wenye viwanda vya mafuta
40. Ni kichwa kipi mwafaka kinafaa kwa taarifa hii?
A. uhifadhi wa ziwa Nakuru
B. usumbufu kwa nyati mweusi
C. kongoni katika vinamasi
D. watalii na karo kwa hayawani

Soma makala haya kisha ujibu maswali 41 - 50.

Juma alikuwa mtu karimu sana katika Nyakwere; alikuwa mtu mwungwana ambaye hakuchoka kamwe kuwasaidia wengine. Baadhi ya watu walimnena kuwa alionyesha busara pevu mno ya heshima katika shughuli zake kuliko mchuuzi yeyote katika kijiji kizima. Kwa sababu hii alipendwa vikubwa mno na wenzake.

Baina ya rafiki waliompenda Juma, mmoja aliyekuwa mfaragha na msiri mpenzi kabisa katika moyo wa Juma alikuwa Bonge. Ingawa Bonge alizaliwa katika jamaa ya namna iliyo maarufu kabisa katika Nyakwere, lakini hakuwa tajiri. Kadhalika huyu Bonge kwa kiasi alipendelea kuishi katika hali ya fahari, kama vile watu vijana wa jamaa iliyo maarufu wenye utajiri mdogo waelekeavyo kufanya. Ilimtukia kuwa alitumia karibu utajiri wake kidogo wote aliorithi kwa watu wa ukoo wake. Hata pana wakati Bonge hakuwa na fedha iliyomsalia, lakini alipokuwa na haja yainsaada, Juma alikuwa tayari kumsaidia. Hionekana kama kwamba walikuwa na moyo mmoja wa ushirika wa utajiri baina yao.

Siku moja Bonge alimwendea Juma na kumshtakia hali kwamba alitamani bibi aliyependa sana. Hayati baba wa bibi yule alikuwa amemwachia bintiye mali kochokocho. Bonge alizoea kwenda kule nyumbani kwa mze yule wakati wa uhai wake. Bibi huyu pana wakati alionekana kusema kwa macho yake kwamba kama Bonge akihitaji kumshika mkono waoane atakubali. Walakini, Bonge kwa utovu wa fedha za kumwezesha kujionyesha na kujishaka kitajiri, alikuja kwa Juma akitumai kupata hisani kama alivyozea kufanyiwa kwakumkopesha shillingi elfu ishirini na saba pesa taslimu.

41. Ukalimu wa Juma ulidbirika kutokana na _____

- A. alivyowasaidia watu
- B. busara zake
- C. uungwana wake
- D. uchuuzi wake

42. Juma alikuwa _____

- A. mtaalam
- B. mchuuzi
- C. mkopi
- D. tajiri

43. Bonge ameitwa mfaragha na msiri wa Juma. Ithibati yakaulihii nikuwa _____

- A. Bonge alitaka kuoa
- B. Juma alimkopesha Bonge fedha
- C. walipendana
- D. Bonge alimdokeza Juma siri yake ya kutaka kuoa lakini hakuwa na fedha

44. Bonge hakuwa tajiri kwa sababu alikuwa _____

- A. mbadhirifu
- B. hana busara
- C. yatima
- D. kapera

45. Bonge alipenda kuishi maisha ya _____

- A. duni
- B. magumu
- C. ya furaha
- D. ya anasa

46. Bonge alimwendea Juma siku moja _____

- A. kumwelezea alivyompenda bibi mmoja
- B. kumchumbia bibi
- C. kuomba mkopo
- D. kulipamahari

47. Binti aliyependwa na Bonge alikuwa katika hali ya _____

- A. ufukara
- B. ukwasi
- C. ukiwa
- D. furaha

48. Baba wa bibi aliyependwa na Bonge alikuwa _____

- A. akiitwa hayati
- B. mkali
- C. mpole
- D. marhemu

49. Utovu wa fedha maana yake ni _____

- A. upotevu wa mali
- B. utamu wa pesa
- C. ukosefu wa pesa
- D. ufukara wa pesa

50. Kutokana na habari hii twaji funza kwamba _____

- A. akupaye mpe
- B. wema hauozi
- C. adui mpende
- D. hasira hasara

EMBU COUNTY MOCK EXAMS
STANDARD 8 - YEAR 2014
MATHEMATICS

Powered By: www.eeducationgroup.com



TIME :2HOURS

READ THESE INSTRUCTIONS CAREFULLY

1. You have been given this question booklet and a separate answer sheet. The question booklet contains 50 questions,
2. Do any necessary rough work in this booklet.
3. When you have chosen your answer, mark it on the **ANSWER SHEET**, not in this question booklet.

HOW TO USE THE ANSWER SHEET

4. Use only an ordinary pencil.
5. Make sure that you have written on the answer sheet:
YOUR INDEX NUMBER
YOUR NAME
NAME OF YOUR SCHOOL
6. By drawing a dark line inside the correct numbered boxes mark your full Index Number (i.e.) School Code Number and the three-figure Candidate's Number) in the grid near the top of the answer sheet.
7. Do not make any marks outside the boxes.
8. Keep the sheet as clean as possible and do not fold it.
9. For each of the questions 1 -50 four answers are given. The answers are lettered A,B,C,D. In each case only ONE of the four answers is correct. Choose the correct answer,
10. On the answer sheet the correct answer is to be shown by drawing a dark line inside the box in which the letter you have chosen is written.

Example

In question booklet:

14. Find the circumference of a circle whose radius is 56m
- A. 176m
 - B. 9856m
 - C. 352m
 - D. 112m

The correct answer is C. (352)
On The answer sheet:

[A] [B] [C] [D] [A] [B] [C] [D] [A] [B] [C] [D] [A] [B] [C] [D]

In the First set, the box with the letter C printed in it is marked

11. Your dark line **MUST** be within the box.
12. For each question **ONLY ONE** box is to be marked in each set of four boxes

This Question Paper consists of 50 Printed Questions.

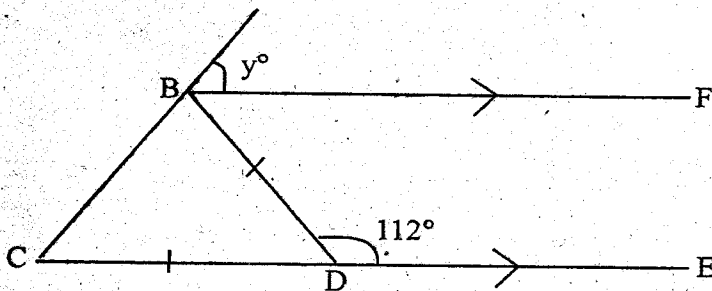
- Which of the following number is five million four thousand two hundred and two?
A. 5004202 B. 5004220
C. 5042002 D. 50040202
- What is the value of: $\frac{5}{2} + 2\frac{1}{2}$
 $3\frac{1}{4} - 1\frac{1}{4}$
A. 8 B. $6\frac{1}{2}$ C. $3\frac{1}{2}$ D. $2\frac{1}{2}$
- Work out the value of:
 $\sqrt{0.81} - 0.3^2 \times \frac{1}{2}$
A. $1\frac{1}{2}$ B. 1 C. 90 D. 0.0081
- What is the number 72.3468 rounded off to nearest hundredths.
A. 72.34 B. 72.3500
C. 0.35 D. 72.35
- What is the total value of digit 7 in the number 873461?
A. ten thousand
B. seventy thousand
C. hundred thousand
D. seven thousand

6. The table below shows the amount of milk delivered to a kiosk in five days.

Days of the week	Mon	Tue	Wed	Thur	Fri
Litres delivered	85	92	84	88	70

Between which two consecutive days was there the highest increase in the amount of milk delivered?

- Tuesday and Wednesday
 - Thursday and Friday
 - Monday and Tuesday
 - Wednesday and Thursday
7. In the figure below, ABC and CDE are straight lines. Line BQ = line CD and $\angle BDE = 112^\circ$. What is the value of the angle marked y?



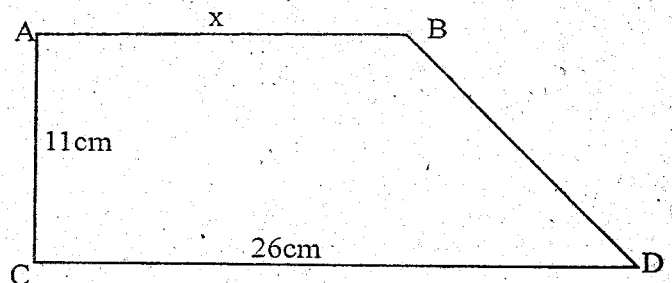
- 56° B. 68° C. 112° D. 124°
- Mary had 96 oranges, Mercy had 72 and Eric had 36. Each was instructed to share oranges equally to the same number of pupils without a remainder. What is the greatest number of pupils who received the oranges?
A. 288 B. 12 C. 24 D. 6
 - A cuboid is 40cm high by 18cm long. Water is poured into it up to a height 14cm. What volume of the container is not occupied by water?
A. 4400cm^3 B. 9600cm^3
C. 10080cm^3 D. 4320cm^3
 - Construct a triangle PQR in which $QR = 7\text{cm}$, $PQ = 5\text{cm}$ and angle $PQR = 35^\circ$. Draw a perpendicular bisector of line PR to meet QR at

point K. Measure length KR.

- 2.9 B. 4.1 C. 3.5 D. 2.0
- What is the next number in the sequence? 8, 13, 18, 23, _____
A. 27 B. 5 C. 28 D. 41
 - Otieno had the following amount of money in her saving box. How much money did she have altogether?

Value of coins/notes in shillings	1000	200	500	50	100	20	10	1	5
Number of coins/notes	1	4	1	5	6	20	25	25	10

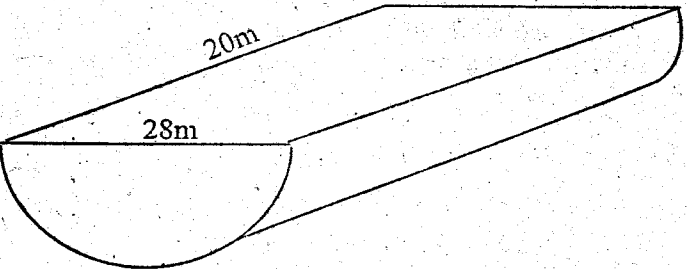
- Sh. 1983 B. Sh. 3875
C. Sh. 1886 D. Sh. 97
- A sales lady is given a 15% commission on sales. She uses 10% of her commission to pay her workers. If she sold goods worth Sh. 150,000, how much money was she left with after paying her workers?
A. Sh. 20,250 B. Sh. 2250
C. Sh. 22,500 D. Sh. 15,000
 - Construct parallelogram PQRS in which $PQ = 6\text{cm}$, $RS = 4\text{cm}$ $\angle PQR = 125^\circ$. Measure the length of the shorter diagonal.
A. 5cm B. 5.7cm C. 8.9cm D. 8.5cm
 - A shopkeeper made a profit of Sh. 600 after selling a radio at Sh. 5400. Calculate the percentage profit made?
A. $11\frac{1}{3}\%$ B. 10% C. 90% D. $12\frac{1}{2}\%$
 - The area of trapezium below is 242cm^2 . Find the value of length x?



- 22cm B. 9.3cm C. 15cm D. 18cm
- Nyatiti's lorry consumes 2 litres of petrol for every 20 kilometres travelled. He drove for 4 hours at an average speed of 80km/hr. If petrol costs Shs. 16 per litre, how much did he spend on petrol for the journey.
A, Sh. 521 B. Sh. 512 C. Sh. 256 D. Sh. 640
 - A father gave $\frac{3}{5}$ of his land to the son, $\frac{3}{4}$ of the remainder to the daughter and he was left with the rest. If he was left with 4 hectares, what was the size of the land before sharing.
A. 40ha B. 16ha C. 3ha D. 4ha
 - The mean of 7 numbers is 4. Six of the numbers are: 2, 3, 1, 2, 7, 8. What is the median of the seven numbers?
A. 2.5 B. 2 C. 3 D. 5

20. Find the value of: $\frac{0.024 \times 0.16}{0.12 \times 0.04}$
 A. 0.08 B. 0.8 C. 8 D. 0.032
21. The distance between two villages is 14km. What is the distance between them on a map if the scale is 1:400,000?
 A. 5.6cm B. 35km C. 3.5cm D. 35cm
22. Mama Fatuma spent her money in the shop as follows:-
 - Unga Shs. $(2x + 10)$
 - Sugar Shs. $(3x + 2)$
 - and fat Sh. $(x + 5)$
 If the total amount of money spent was Shs. 137, find the amount she spent on fat alone?
 A. Shs. 25 B. Sh. 62 C. Shs. 50 D. Sh. 87
23. Wanjiku borrowed Sh. 10,000 for a period of two years. She was charged a compound interest at the rate of 15% per annum. How much money did she pay back?
 A. Sh. 11,500 B. Sh. 1500
 C. Sh. 3225 D. Sh. 13,225
24. Construct triangle ABC such that $\angle BAC = 75^\circ$, $AB = 5\text{cm}$ and $AC = 7\text{cm}$. Measure line BC.
 A. 6cm B. 5cm C. 7.4cm D. 6.5cm

25. What is half of the Value of: $\frac{p^2 - k^2}{pk}$
 when $p = 10$ and $k = 4$
 A. 10.5 B. 1.05 C. 2.1 D. 0.05
26. A log of wood was cut into two equal parts along the diameter as shown in the figure below. What is the surface area of each part.

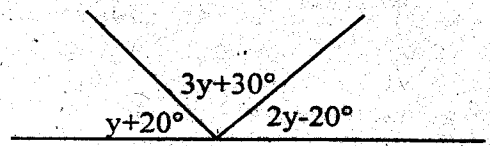


- A. 2396m^2 B. 2376m^2 C. 2056m^2 D. 2936m^2
27. What is the product of edges and vertices of a rectangular prism?
 A. 45 B. 54
 C. 40 D. 96
28. The mother is twice as old as the son. If the sum of the ages 5 years from now will be 58 years, what is the age of the son now?
 A. 16 years B. 21 years
 C. 31 years D. 11 years
19. Muthama left home at 2.45p.m and took 2hrs 30 minutes to travel to market. After staying in the market for 30 minutes, he travelled back home. The time taken to travel to market was twice that taken for the return journey. At what time did he reach home?
 A. 6.0p.m B. 7.00p.m

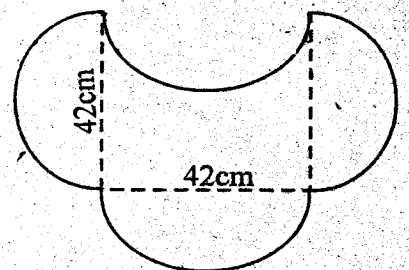
- C. 7.00a.m D. 9.30p.m
30. The table below shows the marks obtained by a pupil in a test marked out of 20

Subject	Maths	SST	Kisw	Eng	Scie
Mark out of 20	11	10	12	6	9

- If a pie chart is drawn, what angle represents marks for Kiswahili?
 A. 216° B. 90°
 C. 45° D. 240°
31. What is the value of the smallest angle?



- A. 55° B. 75° C. 35° D. 50°
32. Which is the simplest expression of:
 $\frac{3(2m - 4d) + 2(4m - 5d)}{2(m + 3d)}$
 A. $\frac{7m+11d}{m+3d}$ B. $\frac{14m+22d}{2m+6d}$
 C. $\frac{3m+16d}{m+3d}$ D. $\frac{7m-11d}{m+3d}$
33. In a class of 45 pupils each pupil was given a 5dl packet of milk. How many litres of milk were given out?
 A. 225 B. 2250 C. 22.5 D. 2.25
34. 18 men can dig a piece of land in 25 days. How many more days will 15 men take?
 A. 12 B. 7 C. 30 D. 5
35. The population in a town in 2004 was 40,000 people. If in the year 2005 the population was 50,000, what was the percentage increase?
 A. 25% B. 20% C. 125% D. 40%
36. A rectangular tank measuring 1.5m by 2.3 by 0.4 is half full. How much water in litres is in the tank?
 A. 1380L B. 690L
 C. 69L D. 138L
37. What is the perimeter of the figure below?



- A. 66cm B. 528cm C. 264cm D. 348cm
58. Trees were planted round a rectangle farm measuring 400m by 350m at an interval of 50m, how many trees were planted?
 A. 31 B. 15 C. 30 D. 16
139. Mrs. Nyaga bought the following items from the shop.

- 3 loaves of bread @ Sh. 40
 - 4 kilos of sugar for Sh. 320
 - 1½kg of meat @ Sh. 350
 - Two - 5kg packets of unga @ Sh. 120
- If she paid using three - five hundred shillings note, what balance did she get?

A. Sh. 1205 B. Sh.295 C. Sh. 415 D. Sh.375

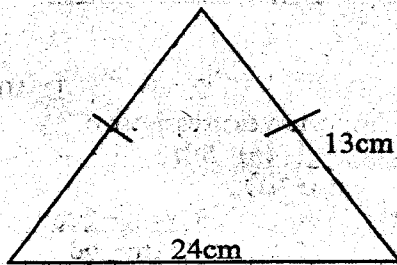
40. Find the value of: $\frac{1}{3}(p-15)+6=6$

- A. 15 B. 51
C. 18 D. 45

41. In a class the number of girls is 15 more than the number of boys. If the number of girls is p, write an expression to show the number of pupils in a class.

- A. p-15 B. 3p + 30
C. 2p+15 D. 2p-15

42. Find the area of the triangle shown below.



- A. 156cm² B. 60cm² C. 30cm² D. 78cm²

43. Mureti paid Sh. 540 for a jacket after getting a discount of 10%. What was the marked price of the jacket?

- A. Sh. 800 B. Sh. 594 C. Sh. 486 D. Sh. 600

44. Kiano hired a lorry to transport goods from the market to his shop. The lorry made two trips. In each trip the lorry carried the following items:-

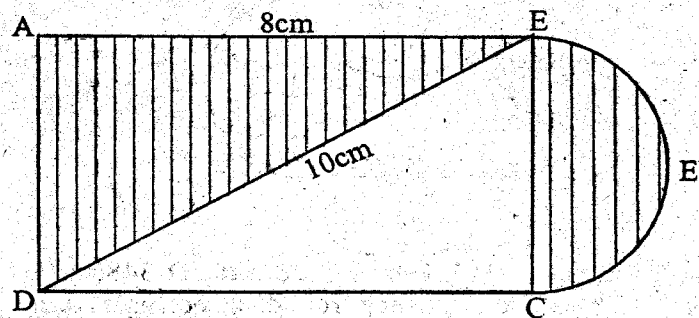
- 15 bags of onions each weighing 15.8kg
- 20 bags of fresh peas each weighing 90.5kg
- 25 bags of green maize each weighing 70kg

What was the total mass, in tonnes of all the items?

- A. 3797 B. 3.797

- C. 7594 D. 7.594


45. In the figure below, ABCD is a rectangle. The diagonal-DB = 10cm, AB = 8cm. EEC is a semi-circle. Find the area of the shaded part. ($\pi=3.14$)



- A. 38.13cm² B. 24cm²

- C. 14.13cm² D. 52.26cm²

46. What is made by folding the net below?



- A. rectangular prism
B. pyramid
C. triangular pyramid
D. triangular prism

47. A certain quadrilateral has the following properties

- two pairs of parallel lines
- diagonals are not equal
- opposite angles are equal
- all sides are equal


The quadrilateral described above is _____

- A. square
B. rhombus
C. rectangle
D. parallelogram

48. John travelled by train from 12 noon to 3pm and covered 180km. He then travelled for one hour in a car whose average speed was 20km/h more than the train. What was his average speed in km/h for the whole journey?

- A. 72km/h B. 140km/h
C. 65km/h D. 80km/h

49. Find the area of the figure below



- A. 105cm² B. 98cm²
C. 21cm² D. 42cm²

50. Karimi was admitted to hospital in the morning, of 11th January 2012 and discharge in the morning of 2nd March 2012. How many nights did she stay in hospital?

- A. 51 B. 49

- C. 50 D. 52

EMBU COUNTY MOCK EXAM

STD 8 - YEAR 2014

MARKING SCHEME

MATHS			ENGLISH		KISWAHILI		SCIENCE		SOCIAL STUDIES/ CRE		
1. A	26. C		1. A	26. B	1. A	26. A	1. A	26. B	1. B	31. B	61. B
2. C	27. D		2. C	27. B	2. D	27. D	2. C	27. C	2. B	32. C	62. D
3. A	28. A		3. D	28. B	3. C	28. B	3. B	28. A	3. C	33. A	63. C
4. D	29. B		4. B	29. D	4. B	29. C	4. A	29. D	4. C	34. D	64. A
5. B	30. B		5. C	30. B	5. A	30. B	5. C	30. B	5. A	35. C	65. B
6. C	31. D		6. C	31. A	6. D	31. B	6. B	31. D	6. C	36. B	66. B
7. A	32. D		7. B	32. C	7. B	32. C	7. C	32. A	7. D	37. A	67. C
8. B	33. C		8. A	33. D	8. D	33. C	8. A	33. D	8. A	38. C	68. D
9. D	34. D		9. D	34. A	9. A	34. A	9. A	34. B	9. C	39. D	69. A
10. A	35. A		10. A	35. A	10. C	35. A	10. A	35. C	10. B	40. B	70. B
11. C	36. B		11. B	36. A	11. B	36. B	11. B	36. C	11. D	41. A	71. B
12. B	37. C		12. C	37. D	12. A	37. C	12. D	37. A	12. D	42. D	72. D
13. A	38. C		13. C	38. C	13. D	38. B	13. A	38. D	13. C	43. C	73. A
14. A	39. B		14. A	39. D	14. C	39. D	14. C	39. C	14. A	44. B	74. B
15. D	40. A		15. D	40. D	15. A	40. A	15. B	40. D	15. B	45. A	75. C
16. D	41. D		16. A	41. A	16. A	41. C	16. D	41. A	16. A	46. D	76. C
17. B	42. B		17. B	42. D	17. D	42. B	17. A	42. D	17. B	47. D	77. A
18. A	43. D		18. A	43. C	18. B	43. D	18. C	43. B	18 D	48. A	78. D
19. C	44. D		19. A	44. C	19. B	44. A	19. B	44. D	19. B	49. D	79. C
20. B	45. A		20. A	45. C	20. D	45. D	20. B	45. C	20. C	50. C	80. A
21. C	46. D		21. B	46. B	21. A	46. C	21. A	46. B	21. D	51. C	81. B
22. A	47. B		22. C	47. C	22. C	47. B	22. C	47. D	22. D	52. C	82. B
23. D	48. C		23. C	48. B	23. C	48. D	23. B	48. B	23. B	53. A	83. C
24. C	49. D		24. B	49. D	24. B	49. C	24. A	49. C	24. B	54. C	84. C
25. B	50. A		25. C	50. B	25. D	50. B	25. B	50. B	25. A	55. D	85. A
									26. C	56. B	86. C
									27. B	57. A	87. B
									28. D	58. D	88. B
									29. A	59. C	89. C
									30. C	60. A	90. D

COMPOSITION / INSHA MARKING SCHEME

MARKING CRITERIA:

The composition will be assessed according to the following general guide lines

The Maximum mark will be 40 and the minimum mark 01

Does the script show that the candidate can communicate accurately, fluently and imaginatively in English

Accuracy (16 Marks)

- | | |
|--|--|
| a) Correct tense and agreement of verbs (4marks) | b) Accurate use of vocabulary (4 marks) |
| c) Correct spelling order (4marks) | d) Correct punctuation (4marks) |

Fluency (16 Marks)

- | | |
|--|---|
| a) Work in the correct order (4marks) | b) Sentences connected and paragraphs (4marks) |
| c) Correct spelling and paragraphs (4marks) | d) Ideas developed in logic sequence (4marks) |

Imagination (8marks)

- | |
|--|
| a) Unusual but appropriate use of words and phrases (4marks) |
| b) Variety of structure (4marks) |

NB : Please, teachers are requested to scrutinize this marking scheme before use, it is worth

EMBU COUNTY MOCK EXAMS
STANDARD 8 - YEAR 2014
SCIENCE

Powered By: www.eeducationgroup.com



TIME :1HOUR 40MINUTES

READ THESE INSTRUCTIONS CAREFULLY

1. You have been given this question booklet and a separate answer sheet. The question booklet contains 50 questions.
2. Do any necessary rough work in this booklet.
3. When you have chosen your answer, mark it on the ANSWER SHEET, not in this question booklet.

HOW TO USE THE ANSWER SHEET

4. Use only an ordinary pencil.
5. Make sure that you have written on the answer sheet:
YOUR INDEX NUMBER
YOUR NAME
NAME OF YOUR SCHOOL
6. By drawing a dark line inside the correct numbered boxes mark your full Index Number (i.e.) School Code Number and the three-figure Candidate's Number) in the grid near the top of the answer sheet.
7. Do not make any marks outside the boxes.
8. Keep the sheet as clean as possible and do not fold it.
9. For each of the questions 1 -50 four answers are given. The answers are lettered A,B,C,D. In each case only ONE of the four answers is correct. Choose the correct answer.
10. On the answer sheet the correct answer is to be shown by drawing a dark line inside the box in which the letter you have chosen is written.

Example

In question booklet:

4. Which one of the following is odd one out?
- | | |
|--------------------------|------------------|
| A. Dynamol | B. Dry cell |
| C. Geothermal generators | D. Wind turbines |

The correct answer is C. (Geothermal generators)

On The answer sheet:

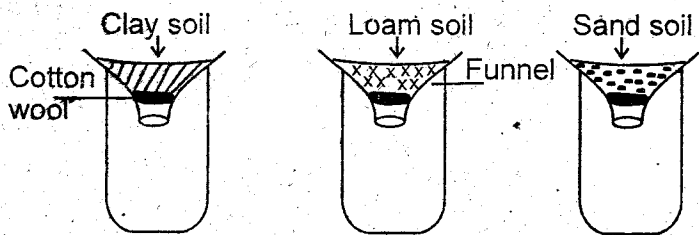
4. [A] [B] [C] [D] 14. [A] [B] [C] [D] 24. [A] [B] [C] [D] 34. [A] [B] [C] [D]

In the First set, the box with the letter C printed in it is marked

11. Your dark line **MUST** be within the box.
12. For each question **ONLY ONE** box is to be marked in each set of four boxes

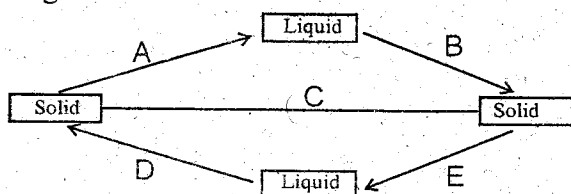
This Question Paper consists of 50 Printed Questions.

- The uneven tops on molars and pre-molars are called _____.
 A. cusps
 B. enamel
 C. crown
 D. gum
- Kamau a std 7 pupil had the following symptoms:
 - loss of memory
 - had a liver disease
 - had heart problems
 - hangover
 The drug he had been taking is likely to be _____.
 A. mandrax
 B. miraa
 C. alcohol
 D. tobacco
- The reason why some plants have a thick waxy cuticle is to _____.
 A. store manufactured food
 B. reduce water loss
 C. allow breathing to take place
 D. trap more sunlight
- The purpose of concentrates in the production of commercial animal feed is to _____.
 A. increase nutrients
 B. soften the feeds
 C. add flavour
 D. preserve the feed
- Clogging of metallic pipes is caused by _____.
 A. soft water
 B. scum
 C. hard-water
 D. scale
- The class 5 pupils of Kagumo primary conducted the experiment below.



Which one of the following aspect of soil **cannot** be investigated using the set up above.

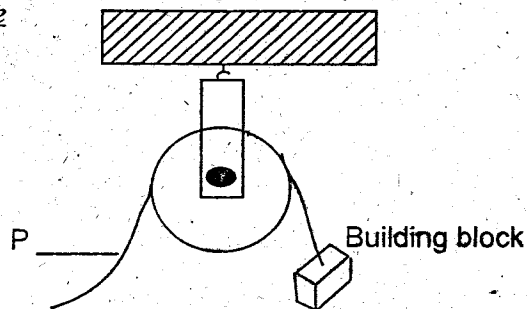
- water retention rate
 - fertility
 - drainage
 - infiltration
- Which of the following cannot be operated by current electricity?
 A. cameras
 B. television
 C. coal tongs
 D. radio
 - The chart below show the processes involved in the change of state of matter.



Which letters represents processes that require increased and decrease of heat respectively.

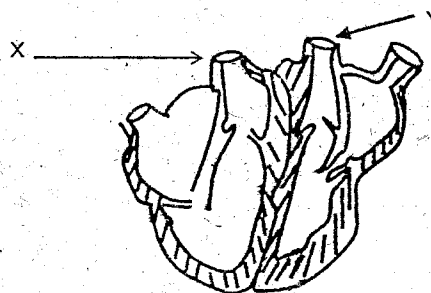
- a and d
- b and a
- e and d
- c and b

- The diagram below represent a simple machine in use



A spring balance at point P will measure _____

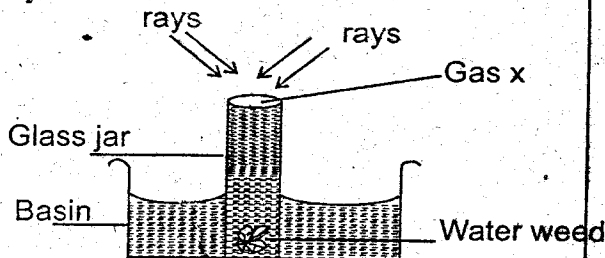
- force that is applied
 - force to be overcome
 - mass of the building block
 - work to be done
- Which one of the following is an example of air pollutant
 A. dead dog
 B. oil spillage
 C. lead
 D. floods
 - A cloud that indicate fair weather is also likely to be _____
 A. dark grey in colour
 B. high in altitude
 C. low altitude
 D. feathery
 - The diagram below represent a section of a heart of a mammal.



Which one of the following statement is **NOT TRUE**

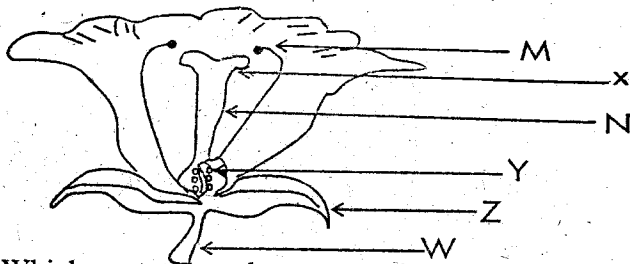
- x and y have thick walls
 - x carries deoxygenated blood whereas y carries oxygenated blood
 - x and y carry blood from the heart
 - x carries oxygenated blood whereas y carries deoxygenated blood
- Which of the following is NOT a sexually transmitted infection.
 A. yellow fever
 B. HIV
 C. chancroid
 D. Syphilis
 - The following are small organism. Which one belong to the same class?
 A. spider, tick, moth
 B. scorpion, ant, tick
 C. cockroach, butterfly, termite
 D. mite, coast, lady bird
 - Which one of the following is a use of water in the industry?
 A. keeping animals
 B. fountain
 C. bathing
 D. skating
 - The following are characteristics of a plant that is used to make green manure EXCEPT _____
 A. fast in rotting
 B. fast in growth

- C. leafy D. low nitrogen content
17. Which one of the following is a way of lighting a house naturally?
A. sky light B. torch C. electricity D. fire
18. The set up below was used to demonstrate a certain property of matter.



The following are uses of gas EXCEPT

- A. used in incubators
B. in respiration
C. used in fire extinguisher
D. support combustion
19. Which one of the following ways of maintaining tools prevent tools from tear and wear.
A. painting B. greasing
C. cleaning after use D. sharpening
20. Which one of the following is NOT TRUE about a rain gauge?
A. the units are in millimeters
B. it is placed 15cm above the ground when in use
C. should be made of durable materials
D. the amount of water collected should be measured at different times of the day
21. The diagram below represents a flower.



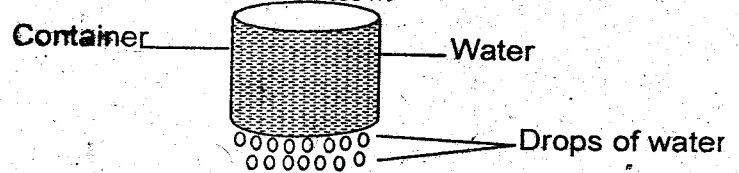
Which part plays the same role as testis in male reproductive system.

- A. M B. X C. Y D. Z
22. The following are stages of development of HIV/AIDS. Which one is associated with opportunistic disease?
A. window B. incubation
C. symptomatic D. full blown
23. Which of the following method of weed control is the best for controlling weeds in a nursery bed?
A. digging out B. uprooting
C. use of herbicides D. slashing
24. The diagram below represents a kind of a bird. Which one of the following is NOT TRUE about it.



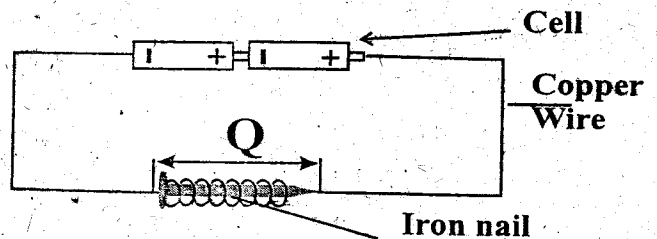
- A. it has very sharp eyesight
B. lives near lakes
C. has webbed feet

25. The following are signs and symptoms of a certain disease.
(i) swimmer itch (ii) fever
(iii) skin rash (iv) coughing
The disease described above is likely to be
A. malaria B. tuberculosis
C. typhoid D. bilharzia
26. Pupils were told by their science teacher to make a container as shown below.



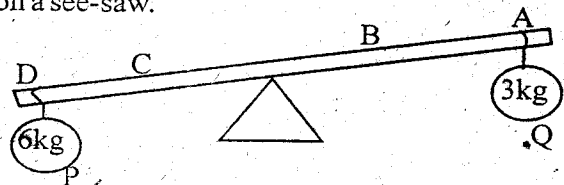
Pupils were likely to use the above container to investigate

- A. water pouring from container
B. splash erosion
C. liquids occupy space
D. rill erosion
27. The diagram below represent a set-up that can be used to demonstrate a certain effect of electricity.



The energy transformation that occurs at the section marked Q is

- A. electrical - light B. chemical-electrical
C. electrical - magnetic D. heat - light
28. Which group of substances has fixed mass but no fixed volume and shape
A. nitrogen, water vapour, carbon dioxide
B. cooking oil, toothpaste, glue
C. water, oxygen and cooking fat
D. plastic, polythene bag and spoon
29. The diagram below show loads that were balanced on a see-saw.

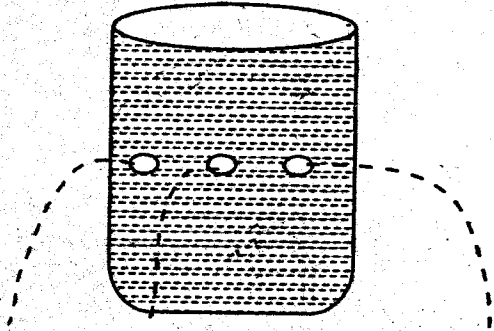


For them to be balanced, load P should be at point?

- A. B B. D C. A D. C
30. When part of alimentary canal does not perform the function of neither digestion nor absorption of food?
A. ileum B. rectum C. stomach D. mouth
31. The following are problems related to teeth EXCEPT
A. gingivitis B. tooth decay
C. cavities D. plaque
32. Which one store food in the leaves?
A. onion B. yams
C. sugarcane D. sweet potatoes
33. One hot afternoon a standard seven pupil

discovered that pupils had not worn their sweaters. The pupil concluded that it was as result of _____

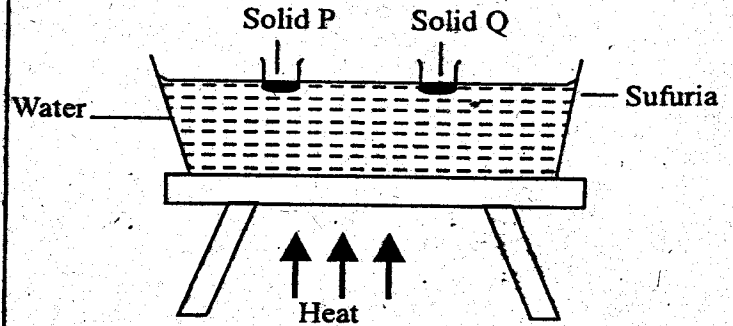
- A. sweating
 - B. breathing
 - C. they had grown big
 - D. reacted to the changes in the environment
34. Which one of the following is an effect of water pollution in animals?
- A. head to blockage of roots
 - B. head to waterborne diseases
 - C. blockage of stomata
 - D. kills aquatic plants
35. Which of these components of soil can be identified by heating a sample of soil at the same time.
- A. minerals and water
 - B. air and water
 - C. organic matter and water
 - D. minerals and air
36. A standard six pupil put a ruler in a glass of water. The ruler appeared bent due to _____
- A. light is reflected
 - B. light is dispersed
 - C. light bend
 - D. light is diffraction
37. The diagram below shows a set-up used by some pupils to perform a certain experiment.



Which principle were they investigating. That _____

- A. pressure in liquids is equal at the same depth
 - B. air exerts pressure in liquid
 - C. pressure in liquids is exerted in all direction
 - D. pressure in liquids depend in depth
38. Which one of the following simple machine is best to raise the flag.
- A. staircase
 - B. ladder
 - C. pole
 - D. single fixed pulley
39. Which one of the following is NOT interdependence between plants?
- A. shade
 - B. habitat
 - C. food
 - D. support
40. Which of the following parasite attack poultry and fish?
- A. liverfluke
 - B. hookworm
 - C. tapeworm
 - D. roundworm
41. Which of the following ways of handling plastic wastes will NOT lead to pollution of the environment?
- A. re-using
 - B. burying in the soil
 - C. dumping in the river
 - D. burning

42. The diagram below represent a set-up that is used to investigate a certain effect of heat.



The effect investigated is _____

- A. condensation
 - B. evaporation
 - C. boiling
 - D. melting
43. The path through which urine passes before being stored is known as _____
- A. bladder
 - B. ureter
 - C. kidney
 - D. urethra
44. When we wear heavy clothes when it is cold the heavy clothing _____
- A. warm the air around us
 - B. prevent cold coldness
 - C. absorbs heat from surrounding
 - D. insulates the body against heat loss
45. A moving staircase is an example of a _____
- A. lever
 - B. pulley
 - C. inclined plane
 - D. see saw
46. A lactating mother should be given green leafy vegetables and liver in order to _____
- A. replace mineral salts lost at birth
 - B. replace the amount of vitamins lost at birth
 - C. ensure the mother has milk for the baby.
 - D. ensure the mother has enough energy
47. Worn out tyres are taken for retreading to _____
- A. reduce weight
 - B. reduce friction
 - C. improve quality
 - D. increase roughness
48. The kind of energy that is found in charcoal is _____
- A. heat
 - B. chemical
 - C. sound.
 - D. kinetic
49. Which of the following is NOT a sign of ill-health in livestock?
- A. loss of weight
 - B. rough coat
 - C. wetness of the nostril
 - D. reduced production
50. The floating of a very big 10m of wood in water and while a one centimetre long piece of iron sink is brought about by the difference in.
- A. weight
 - B. material
 - C. size
 - D. length

EMBU COUNTY MOCK EXAMS
STANDARD 8 - YEAR 2014
SOCIAL STUDIES / CRE

Powered By: www.eeducationgroup.com



TIME :2HOUR 15MINUTES

READ THESE INSTRUCTIONS CAREFULLY

1. You have been given this question booklet and a separate answer sheet. The question booklet contains 50 questions,
2. Do any necessary rough work in this booklet.
3. When you have chosen your answer, mark it on the ANSWER SHEET, not in this question booklet.

HOW TO USE THE ANSWER SHEET

4. Use only an ordinary pencil.
5. Make sure that you have written on the answer sheet:
YOUR INDEX NUMBER
YOUR NAME
NAME OF YOUR SCHOOL
6. By drawing a dark line inside the correct numbered boxes mark your full Index Number (i.e.) School Code Number and the three-figure Candidate's Number) in the grid near the top of the answer sheet.
7. Do not make any marks outside the boxes.
8. Keep the sheet as clean as possible and do not fold it.
9. For each of the questions 1 -50 four answers are given. The answers are lettered A,B,C,D. In each case only ONE of the four answers is correct. Choose the correct answer,
10. On the answer sheet the correct answer is to be shown by drawing a dark line inside the box in which the letter you have chosen is written.

Example

In question booklet:

24. The culture of circumcision into Eastern Africa was introduced by the _____
- | | |
|------------|-------------|
| A. Semites | B. Cushites |
| C. Bantus | D. Nilotes |

The correct answer is B.

On The answer sheet:

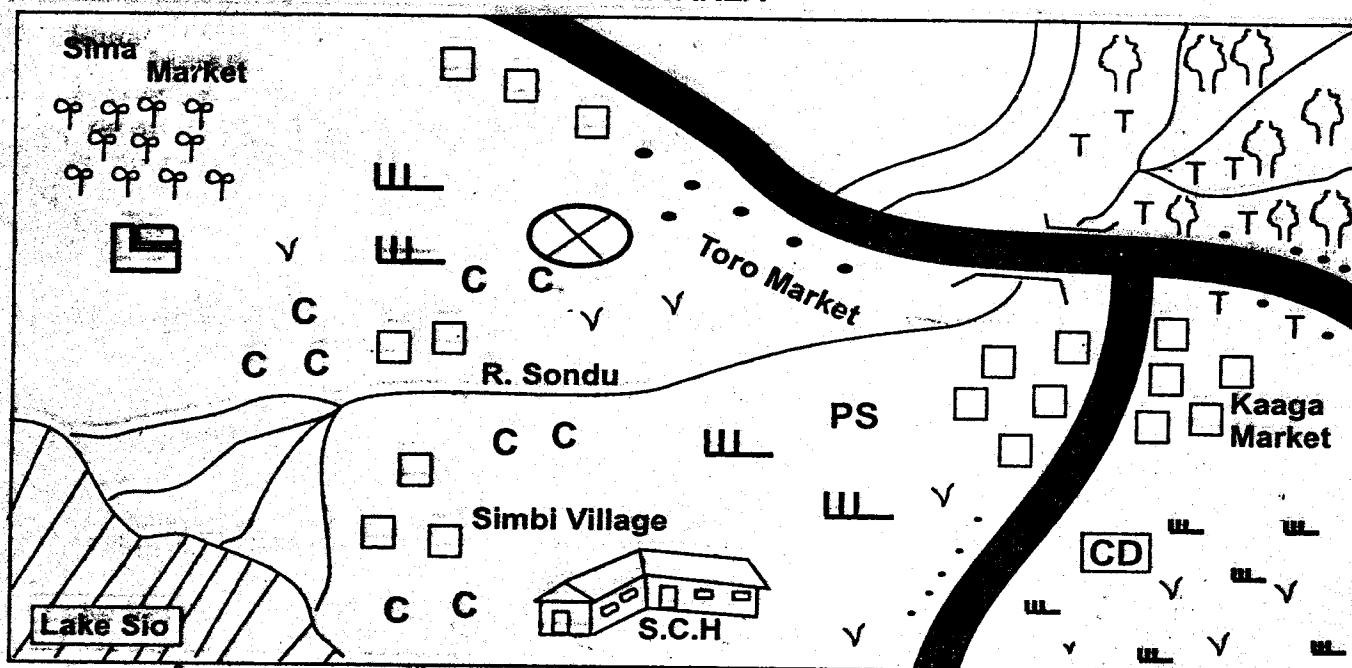
4. [A] [B] [C] [D] 14. [A] [B] [C] [D] 24. [A] [B] [C] [D] 34. [A] [B] [C] [D]

In the First set, the box with the letter D printed in it is marked

11. Your dark line **MUST** be within the box.
12. For each question **ONLY ONE** box is to be marked in each set of four boxes

This Question Paper consists of 90 Printed Questions.

PEMA AREA



TT	Tea		River		Human settlement		Governor's office
CC	Cotton		Forest		Lake		Stadium
	Permanent building		Bridge		Grass		School
	Scrubs		Cattle dip	PS	Police station		
	Pyrethrum		Tarmac road		Church		

Study the map of Pema area to answer questions 1-10

- The climate of North Eastern part of Pema area is likely to be ____
 A. hot and wet
 B. cool and wet
 C. cool and dry
 D. hot and dry
- The feature formed at the mouth of river Sondu is ____
 A. lagoon
 B. a delta
 C. a barchan
 D. an ox-bow lake
- The lowest point above the sea level Pema area is likely to be at ____
 A. Simbi village
 B. Kaaga market
 C. Toro market
 D. Sima market
- The county government of Pema area is headed by ____
 A. Councillor
 B. Chief
 C. Governor
 D. District officer
- The direction of the church from Simbi village is ____
 A. North West

- Which one of the following social services is **NOT** available in Pema area?
 A. educational services
 B. religious services
 C. health services
 D. recreational services
- The land in Pema area rises from ____
 A. North West
 B. North East
 C. West
 D. South West
- Which one of the following weather instruments is used to measure the speed of wind?
 A. anemometer
 B. barometer
 C. windvane
 D. hygrometer
- Which one of the following is the MAIN effect of HIV and AIDS on population growth?
 A. it reduces the fertility rates
 B. it lowers birth rates
 C. it lowers life expectancy
 D. it leads to increased deaths
- Which type of climate do the northern parts of Morocco experience.
 B. North East
 C. South
 D. South East

- government is _____
- A. divideds B. grants
C. taxes D. parking fees
51. The title given to a newly elected president before swearing in is _____
A. Commander in - chief
B. Deputy president
C. President elect
D. The chairman
52. The legal systems in Kenya are headed by _____
A. Public prosecutor
B. The president
C. Attorney General
D. Chief justice
53. Who among the following is NOT a member of the senate in Kenya?
A. 16 women representatives
B. elected senators
C. president
D. the speaker
54. Which one of the following organization is responsible for fighting against drug abuse in Kenya?
A. I.E.B.C B. PSC C. NACADA D. JSC
55. The main work of the Kenya Police is _____
A. punishing law breakers
B. educating citizens
C. defending our borders
D. maintaining law and order
56. The UN agency that mainly deals with Environmental Conservation is _____
A. UNHCR B. UNEP
C. WHO D. FAO
57. All the government policies are formulated by the _____
A. cabinet B. parliament
C. judiciary D. the senate
58. The following are arms of the government EXCEPT _____
A. executive
B. judiciary
C. legislature
D. public service commission
59. Chapter four of the constitution of Kenya deals with _____
A. citizenship
B. leadership and integrity
C. the bill of rights
D. public finance
60. The largest county in Kenya is _____
A. Marsabit B. Embu
C. Nairobi D. Mombasa

CHRISTIAN RELIGIOUS EDUCATION

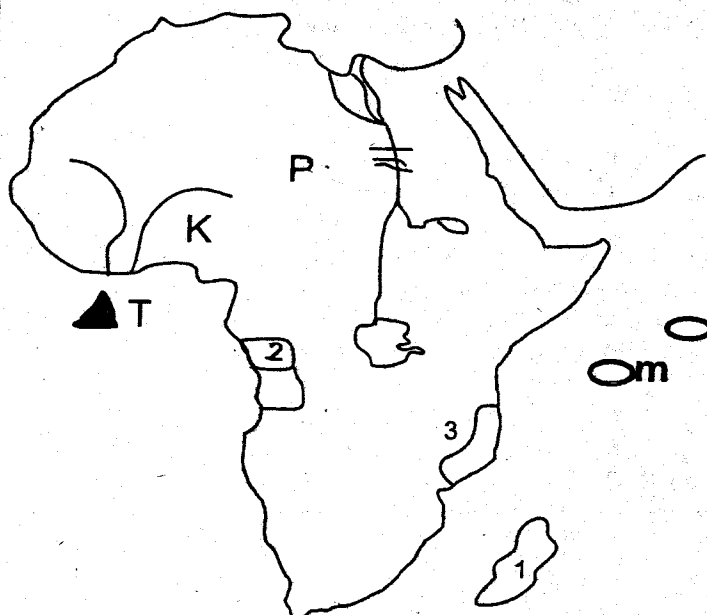
61. According to the Genesis stories of creation, which day is correctly matched with what God created?
A. second day - sea creatures
B. sixth day - domestic and wild animals

- C. seventh day - heavenly bodies
D. fourth day - vegetation
62. Which one of the following reasons best explains why Noah built the ark?
A. to save his family only
B. people had become very evil
C. to make his name famous
D. to fulfil the will of God
63. What did Jacob do at Peniel? Genesis 32:22 - 32
A. He received his blessings from God
B. He met his uncle Laban
C. He wrestled with an angel of God
D. He made his agreement with Laban
64. _____ was the wife of Moses,
A. Zipporah B. Bethsheba
C. Rebecca D. Leah
65. During the Passover the Israelites were to slaughter a male sheep or goat and eat the meat. What were they instructed to do in case a family could not eat a whole animal?
A. they share with the next-door neighbour
B. they preserve it for the next day
C. they carry the remaining meat to the promised land
D. they leave it to the Egyptians to celebrate.
66. _____ was the last judge of Israel
A. Othniel B. Samuel C. Eliud D. Samson
67. Which commandment did King Ahab break?
A. do not accuse anyone falsely
B. do not use my name for evil purposes
C. do not covet other people's property
D. observe the Sabbath and keep it holy
68. Which among the following was an achievement of king Solomon?
A. He killed Goliath
B. He defeated the Amalekites
C. He killed a lion and a bear while still young
D. He was given wisdom by God
69. Prophet _____ rebuked David when he sinned against God.
A. Nathan B. Jeremiah
C. Elisha D. Isaiah
70. The shepherds went to the town of David on the night Jesus was born to _____ Luke 1: 26 - 38
A. Take the gifts to the baby
B. worship the new born king
C. see the new born baby
D. name the baby after he was born
71. Who among the following deacons was a Gentile from Antioch?
A. Prochorus B. Nicolaus
C. Nicanor D. Timon
72. "Pray that you may not fall into temptations." Jesus said these words to _____
A. John, Peter, Matthew
B. Simon, Elijah, Moses
C. James; John, Phillip
D. Peter, James, John
73. How did Jesus show fairness to the woman caught

- in adultery?
- A. He forgave her sins
 - B. He did not condemn her actions
 - C. He allowed the Pharisees to punish her
 - D. He told her to perform the cleansing rituals
74. Which parable teaches Christians that helping the needy is the will of God?
- A. mustered seed
 - B. the rich man and Lazarus
 - C. the greatest banquet
 - D. master and his servant
75. When Jesus Christ obeyed his father's word by forgiving the sinners, these teaches Christians that _____
- A. Jesus feared his father very much
 - B. we should continue sinning as many times as possible
 - C. we should be obedient and be forgiving to our wrong doers
 - D. Jesus Christ did not forgive the sinners
76. Which among the following was not said by Jesus on the cross?
- A. I am thirsty
 - B. I will baptize with the holy spirit
 - C. she is your mother
 - D. forgive them father! They do not know what they are doing
77. During the last supper, Jesus told his disciples to share his blood and body. How do Christians exercise this today?
- A. By taking the Holy communion
 - B. By being baptised
 - C. by observing the sabbath day
 - D. by helping the needy
78. All worshipping places should be _____
- A. well built
 - B. far from home
 - C. in town
 - D. respected
79. After resurrection, Jesus did all the following EXCEPT _____
- A. gave instructions by the power of the holy spirit
 - B. appeared to different people
 - C. multiplied fish and bread for the disciples
 - D. talked about the kingdom of God
80. _____ is a gift of the holy spirit
- A. knowledge
 - B. joy
 - C. peace
 - D. self-control
81. Which among the following verses is found in the Apostle's creed.
- A. forgive us our sins
 - B. the communion of saints
 - C. Our Father art in heaven
 - D. Give us today our daily bread
82. Which one of the following was a way of reconciling with God in traditional African society?
- A. going for confession
 - B. offering animal sacrifices
 - C. reading the bible
 - D. fighting the wrongdoers
83. Which one of the following practices is found with Christians only?
- A. praying in Caves
 - B. giving ancestors' names to the children
 - C. baptizing the newborn
 - D. practising of polygamy
84. During worship, both Christians and traditional African communities may _____
- A. call on God to punish their enemies
 - B. recite the Apostle's creed
 - C. pray to God in Jesus' name
 - D. call on God to assist them in their problems
85. In John 9:1-12, why was the man born blind.
- A. so that God's power might be seen at work in him
 - B. to put more effort while praying
 - C. so that people could not continue sinning
 - D. his parent were sinners
86. Who among the following people helped Jesus carry the cross?
- A. Joseph of Arimathea
 - B. Barnabas
 - C. Simon of Cyrene
 - D. Pilate
87. Which among the following is NOT a quality of a good leader?
- A. honesty
 - B. unselfishness
 - C. kindness
 - D. selfishness
88. If you find some good money in the school compound, the best thing to do is _____
- A. keep it for personal use
 - B. take it to the headteacher
 - C. buy something for your family use
 - D. share it with your best friend
89. Your aunt takes care of orphans in her village. She gives food and clothes to them. Which one of the following values does she possess.
- A. purity
 - B. humbleness
 - C. kindness
 - D. tolerance
90. People can show respect to rulers by _____
- A. rebelling against unjust rulers
 - B. bribing them in need of help
 - C. pretending that they are very good to them
 - D. going to their homes and do some manual work

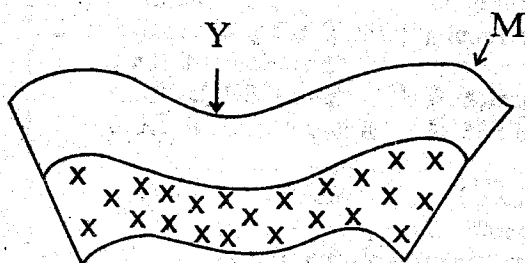
- A. equatorial
C. savannah
- B. Mediterranean
D. mountain
11. Which one of the following African communities had a king, prime minister and a traditional parliament?
 - A. The Nandi
 - B. The Nyamwezi
 - C. The Abawanga
 - D. The Baganda
 12. Which one of the following factors is required to help develop deep sea fishing along the Kenyan Coast?
 - A. increasing the number of fishing vessels
 - B. establishing of fishing cooperatives
 - C. promoting fish eating culture
 - D. provision of refrigeration facilities
 13. The capital of Old Ghana kingdom was situated at
 - A. Walata
 - B. Wagadu
 - C. Kumbi Saleh
 - D. Bissandugu
 14. The following are elective posts at the national level EXCEPT
 - A. The governors
 - B. The senators
 - C. The members of parliament
 - D. The president
 15. Which of the two countries below have the best road network?
 - A. Tanzania and Ethiopia
 - B. Kenya and Uganda
 - C. Kenya and Tanzania
 - D. Uganda and Tanzania
 16. The MAIN crop being grown in Perkera irrigation scheme is
 - A. chillies
 - B. seed maize
 - C. rice
 - D. cotton
 17. The following economic activities were carried out by the San EXCEPT
 - A. keeping livestock
 - B. fishing along rivers
 - C. trading
 - D. hunting and gathering
 18. Which of the following tourist attractions is found in Botswana?
 - A. Okavango delta sanctuary
 - B. Victoria falls
 - C. Kruger national park
 - D. The valley of kings
 19. Which of the following is a function of the school committee?
 - A. paying salaries of teachers
 - B. maintaining school traditions
 - C. employing teachers
 - D. transferring teachers
 20. Which of the following West African groups do the Asanté of Ghana belong to?
 - A. Afro Asiatic
 - B. Mande
 - C. Kwa speakers
 - D. Nilo-Saharan
 21. Which of the following is the main effect of destruction of forests on the slopes of Mt. Kenya?
 - A. shortage of herbal medicine
 - B. reduced supply of firewood
 - C. shortage of timber for building
 - D. reduced volume of water in rivers
 22. Three of the following people were early visitors to Eastern Africa. Who was not?
 - A. Dr. Livingstone
 - B. John Speke
 - C. William Mackinon
 - D. Charles Elliot

Study The map of Africa and answer Question that follows




23. The source of River K on the map is
 - A. bie plateau
 - B. Adamawa
 - C. Tos plateau
 - D. Fouta Djallon
24. The main method of mining the mineral at the place marked T on the map above is
 - A. open cast
 - B. drilling
 - C. panning
 - D. dredging
25. The main reason for establishing the river project marked P is
 - A. provide water for irrigation
 - B. create a lake for fishing
 - C. provide hydro-electric power
 - D. control floods
26. The Island marked M is
 - A. Sao Tome and Principe
 - B. Sychelles
 - C. Comoros
 - D. Madagascar
27. The countries marked 2 and 3 were colonized by
 - A. Britain
 - B. Portugal
 - C. Germany
 - D. Italy
28. Check dams are also known as
 - A. dams
 - B. valleys
 - C. faults
 - D. gabions
29. Who among the following leaders in Tanganyika led the Hehe rebellion?
 - A. Chief Mkwawa
 - B. Mirambo
 - C. Kinjeketile Ngwale
 - D. Julius Nyerere
30. The chairman of cabinet is
 - A. Deputy president
 - B. Speaker
 - C. President
 - D. Chief Justice
31. Which one of the following cultural practices did the Abaluhya borrow from the Luo as they interacted during pre-colonial period?
 - A. respect for ancestors
 - B. the removal of six lower teeth
 - C. use of herbs to treat diseases
 - D. marrying of many wives

32. The main reason why all African resistance movements were defeated was _____
 A. there was no unity among Africans
 B. Africans lacked equipment
 C. Africans were poorly equipped
 D. Africans were poor
33. Which of the following refers to the property left behind by a dead person?
 A. estate B. succession C. will D. wealth
34. Which of the following hominids discovered fire?
 A. homo habilis B. homo sapien sapien
 C. homo sapiens D. homo erectus
35. Which of the following factors is LEAST considered, when locating a bakery?
 A. availability of labour
 B. raw material
 C. government policy
 D. market
36. Which of the following towns serves both as a capital city and a sea-port?
 A. Kisumu
 B. Luanda
 C. Dar-es-Salaam
 D. Entebbe
37. _____ is the growing of vegetables, flowers and fruits for sale.
 A. horticulture
 B. cash crop farming
 C. agriculture
 D. beef mining
38. Arrange the following associations in order of the years they were formed?
 A. YKA, THA, KCA
 B. KCA, THA, YKA
 C. YKA, KCA, THA
 D. THA, KCA, YKA
39. The main problem limiting trade among African countries is that _____
 A. they use different national languages
 B. they have poor transport links
 C. they use different currencies
 D. they produce similar goods
40. Which one of the following was not formed through the process shown in the diagram?



- A. Atlas mountains
 B. Ruwenzori
 C. Akwaping
 D. Drankensberg
41. The part marked M in the diagram above is known as

- A. Anticline B. sycline
 C. fold D. valley
42. Which one of the following is the main reason why caning of pupils in school was banned in Kenya?
 A. it causes physical injury
 B. it discourages learning
 C. it creates fear among pupils
 D. it is against child rights
43. In 1957 elections Jaramogi Oginga Odinga joined the Legco to represent _____
 A. Rift Valley
 B. Coast
 C. Central Nyanza
 D. Nairobi
44. The current chairman of East Africa Community (EAC) is _____
 A. Jakaya Kikwete
 B. Uhuru Kenyatta
 C. Paul Kagame
 D. Yoweri Museveni
45. Thika town has grown to an important town mainly because _____
 A. it has many industries
 B. it has high population
 C. it has tourist attractions
 D. has a railway line
46. The road sign below is classified as a _____



- A. regulatory sign B. informative
 C. decorative D. warning sign
47. Which one of the following statements is true of both the Fulani and the Maasai?
 A. fishing is their main economic activity
 B. they live in Western Africa
 C. they belong to the same language group
 D. they keep large herds of livestock
48. Which one of the following is NOT a responsibility of a Kenyan citizen
 A. deforestation
 B. paying taxes
 C. obeying the laws of the land
 D. participating in the national development
49. Swaziland is ruled through a traditional system government called _____
 A. Ngwenyama B. Libandla
 C. Ligoqo D. Tinkhundla
50. The main source of revenue for the Central