

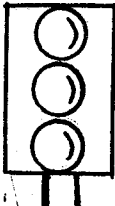



Powered By: [www.eeducationgroup.com](http://www.eeducationgroup.com)





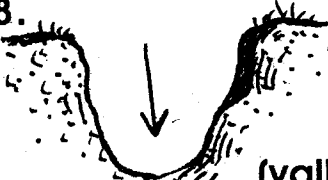
Menu:

1. Social
2. Science
3. Mathematics
4. English
5. Kiswahili
6. Reading

NAME \_\_\_\_\_

DATE \_\_\_\_\_

1. \_\_\_\_\_ is all that surround us.  
(environment, factory, fishing)
  2. Too much sun-shine causes \_\_\_\_\_.  
(floods, drought)
  3. People who kill wildlife illegally are called \_\_\_\_\_.  
(tourists, poachers, hunters)
  4. \_\_\_\_\_ is people's way of life.  
(stealing, culture, sleeping.)
  5. Cyclists should use the \_\_\_\_\_ side of the road.  
(left, right, short)
  6. We celebrate \_\_\_\_\_ on 12th of December.  
(Kenyatta, Madaraka, Jamhuri)
- Match the following
- |             |        |
|-------------|--------|
| 7. Bantu    | Borana |
| 8. Nilotes  | Ameru  |
| 9. Cushites | Maasai |
10. Farmers harvest during the \_\_\_\_\_ season.  
(wet, dry, rainy)
- Name the colours of traffic
11.  \_\_\_\_\_
  12.  \_\_\_\_\_
  13.  \_\_\_\_\_
- (Red, orange, green)
14. \_\_\_\_\_ is when people move from one place to another.  
(communication, migration)
  15. Things that make up weather are called \_\_\_\_\_.  
(man-made, physical, element)
  16. We care for our environment by \_\_\_\_\_ trees.  
(cutting, planting, burning)
  17. This is a 

- (drum, horn, pipe)
18. The colour that shows peace on our national flag is \_\_\_\_\_.  
(Red, Green, White)
  19. Diwali is celebrated by \_\_\_\_\_.  
(Muslims, Hindus, Christians)
- Name the road signs
20.  \_\_\_\_\_
  21.  \_\_\_\_\_
  22.  \_\_\_\_\_
  23.  \_\_\_\_\_
- (No entry, hospital ahead, bumps ahead, children crossing)
24. Our Deputy President is called \_\_\_\_\_  
(Ruto, Uhuru, Raila)
  25. Our national anthem has \_\_\_\_\_ verses.  
(2, 3, 4)
  26. When riding a bicycle we sit on a \_\_\_\_\_  
(Peddle, saddle, chain)
  27. Cutting down of trees is called \_\_\_\_\_  
(deforestation, soil erosion, resources)
  28.  This is a \_\_\_\_\_  
(valley, hill, rock)
  29. When people quarrel in the village, a village \_\_\_\_\_ talk to them.  
(elder, watchman, chief)
  30. A \_\_\_\_\_ is an instrument use to show direction.  
(Rain gauge, compass, thermometer)

**STEGA SERIES**  
**STD 3 TERM 3 2014**

**CRE**

NAME \_\_\_\_\_

DATE \_\_\_\_\_

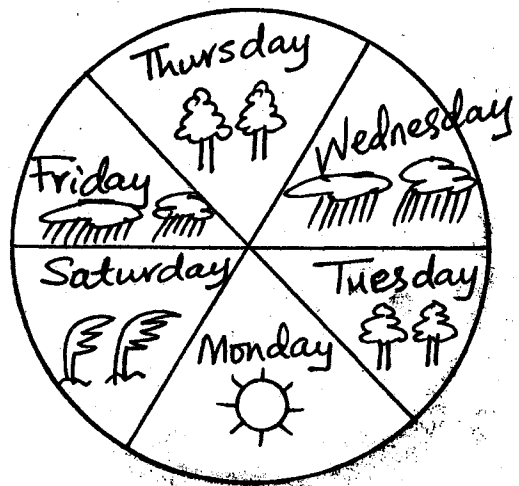
1. God created everything in \_\_\_\_\_ days.  
(5, 6, 7)
2. Jesus sent the Holy Spirit on the day of \_\_\_\_\_.  
(Pentecost, Baptism, Sabbath)
3. Gold, frankincense and myrrh were gifts taken to baby Jesus by the \_\_\_\_\_.  
(shepherds, uncles, wisemen)
4. Jesus left his disciples a helper called the \_\_\_\_\_.  
(Food, Holy spirit, Prayer)
5. Jesus washed his \_\_\_\_\_ feet.  
(mother uncle, disciples)
6. \_\_\_\_\_ was a very wiseman.  
(David, Solomon, Saul)
7. Saul got saved on his way to \_\_\_\_\_.  
(Bethlehem, Damascus, Judea)
8. \_\_\_\_\_ built an ark.  
(Noah, Moses, Abraham)
9. Paul was preaching in the town of \_\_\_\_\_ where he baptised Lydia.  
(Philippi, Jericho, Canaan)
10. An angel of the Lord provided Abraham with a \_\_\_\_\_ when he was about to kill Isaac.  
(goat, cow, lamb)
11. Prophet \_\_\_\_\_ played for the widow of Zeraphath's son and he came back to life.  
(Isaiah, Elisha, Elijah)
12. God gave us ears that we can \_\_\_\_\_.  
(see, smell, hear)
13. Cain's brother was called \_\_\_\_\_.  
(Adam, Abel, Jesus)
14. God made man in his own \_\_\_\_\_.  
(picture, image, drawing)
15. God rested on the \_\_\_\_\_ day.  
(5th, 6th, 7th)
16. When Isaac was born Abraham was \_\_\_\_\_ years old.  
(90, 99, 100)
17. Prophet Isaiah told about the \_\_\_\_\_ of Jesus long ago.  
(death, birth, resurrection)
18. We should treat each other \_\_\_\_\_ because we are the same before God.  
(unfairly, rudely, equally)
19. Waiting for something without complaining is called \_\_\_\_\_.  
(humility, patience, hatred)
20. Giving out to the needy without complaining is a sign of \_\_\_\_\_.

**STEGA SERIES**  
**STD 3 TERM 3 2014**

NAME \_\_\_\_\_ **SCIENCE** DATE \_\_\_\_\_

1. We use soap and \_\_\_\_\_ to clean our faces.  
(jik, soap, water)
  2. When we eat food like ugali, rice and potatoes we get alot of \_\_\_\_  
(water, energy, vitamins)
  3. Boiling water helps to kill \_\_\_\_\_  
(diseases, germs, dirt)
  4. A \_\_\_\_\_ has many seeds.  
(ovacado, mango, pawpaw)
  5. Cows feed their young ones with \_\_\_\_\_  
(food, milk, tea)
  6. A place where plants grow naturally is called \_\_\_\_\_  
(bush, home, habitat)
  7. Turkey, hen, ducks are all called \_\_\_\_\_  
(friends, beef, poultry)
  8. Bright light affects our \_\_\_\_\_  
(teeth, eyes, ears)
- 
9. The diagram above shows that water contains \_\_\_\_\_  
(soil, dirt, air)
  10. Rules of cleanliness are called \_\_\_\_\_  
(smartless, hyglene, Godliness)
  11. A fruit develops from the \_\_\_\_\_  
(leaves, roots, flower)
  12. Shadows are shorter at \_\_\_\_\_  
(night, morning, noon)
  14. When we feel sick, we are taken to the \_\_\_\_\_  
(field, nurse, doctor,)
  15. We wear heavy clothes when the weather is \_\_\_\_\_  
(cold, hot, dry)
  16. Name this tool  
(Rake, Hoe, Jembe)
  17. \_\_\_\_\_ soil has big particles.  
(clay, sand, loam)
  18. We \_\_\_\_\_ water to remove dirt.  
(boll, filter, drink)
  19. A deaf person lacks the sense of \_\_\_\_\_  
(seeing, hearing, tasting)
  20. We can use a \_\_\_\_\_ to cut a big tree.  
(scissors, jembe, axe)
  21. One of the following does not live at home. Which one is it?  
(rabbit, horse, hare)
  22. When a bell rings sound travels in \_\_\_\_\_ directions.  
(two, all no)
  23. Passing water through a cloth to remove dirt is called \_\_\_\_\_  
(filtering, boiling, storing)
  24. Mosquitoes spread a disease known as \_\_\_\_\_  
(AIDS, Malaria, Typhold)
  25. Sandy soil is the best for \_\_\_\_\_

26. Snails and tortoise have \_\_\_\_\_ for protecting themselves.  
(holes, shells, skin)
27. We use \_\_\_\_\_ to measure rainfall.  
(Raingauge, Thermometer)
28. Germs make us \_\_\_\_\_  
(sick, healthy, strong)
29. A \_\_\_\_\_ is a sense organ.  
(Touch, laugh, skin)
30. \_\_\_\_\_ is needed for good health.  
(milk, sweets, beer)
- Use the chart to answer question 31 to 34



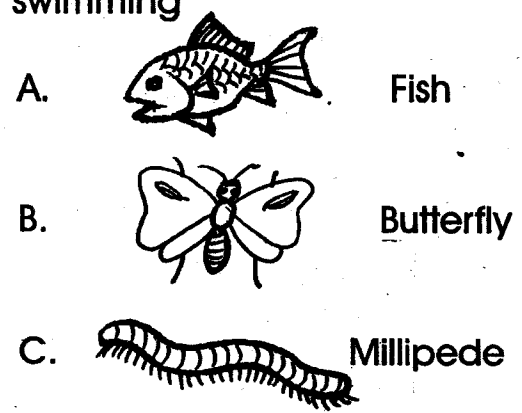
31. How many days were rainy?  
(2, 3, 1)
32. Which day was good for swimming and washing clothes  
\_\_\_\_\_
33. \_\_\_\_\_ and \_\_\_\_\_ were calm days.
34. On \_\_\_\_\_ day an umbrella was overturned by wind.
35. Which insect can be found in our kitchen?  
(butterfly, cockroach, tick)
36. We can improve the eyesight by wearing \_\_\_\_\_.

37. We eat the \_\_\_\_\_ of carrots.  
(stem, roots, leaves)
38. For a seed to grow it needs air, water and \_\_\_\_\_  
(warmth, shade, sticks)
39. I have \_\_\_\_\_ senses.  
(4, 5, 6)

Name the parts of a plant



40. \_\_\_\_\_
41. \_\_\_\_\_
42. \_\_\_\_\_
43. \_\_\_\_\_
44. \_\_\_\_\_
- (stem, flower, fruit, leaf, roots)
45. When cows are well fed they produce a lot of \_\_\_\_\_.  
(water, milk, noise)
46. Planting is done during \_\_\_\_\_ season.  
(dry, wet, hot)
47. A rainbow has \_\_\_\_\_ colours  
(7, 6, 8)
48. Which of these animals move by swimming



49. \_\_\_\_\_ is used as a spice.  
(neemplant, coriander, castor oil plant)
50. Which one of the following object will reflect light?  
(wooden spoon, mirror, black

# STEGA SERIES

## STD 3 TERM 3 2014

### MATHEMATICS

NAME \_\_\_\_\_ DATE \_\_\_\_\_

1.  $8 + 6 + 7 =$  \_\_\_\_\_
2.  $58 + 26 + 4 =$  \_\_\_\_\_
3.  $459 =$  \_\_\_\_\_  $+$  \_\_\_\_\_  $+$  \_\_\_\_\_

Write in words

4. 1676 \_\_\_\_\_
5. 843 \_\_\_\_\_
6. 726 = \_\_\_\_\_ hundreds \_\_\_\_\_ tens  
\_\_\_\_\_ ones.
7. 16 = \_\_\_\_\_ hundreds \_\_\_\_\_ tens  
\_\_\_\_\_ ones.
8. 2 hundreds 6 tens 4 ones =  
\_\_\_\_\_.

9.  $\frac{1}{8} + \frac{2}{8} + \frac{3}{8} =$  \_\_\_\_\_

10. Write the missing numbers;  
15, \_\_\_\_\_, 25, 30 \_\_\_\_\_

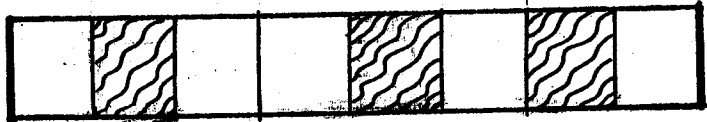
11. Name the shape?



12.  $63 \div 7 =$  \_\_\_\_\_
13.  $486 + 123 =$  \_\_\_\_\_
14.  $92 - 63 =$  \_\_\_\_\_
15.  $14 - 5 =$  \_\_\_\_\_
16. 643  
+ 47  
\_\_\_\_\_

17.  $16\text{kg} + 34\text{kg} =$  \_\_\_\_\_

18.  $48 \div 6 =$  \_\_\_\_\_
19.  $7 \times 5 =$  \_\_\_\_\_
20. What fraction is shaded?



21. A cat has 4 legs. How many legs do  
9 cats have? \_\_\_\_\_
22. 00000  
00000  
00000 \_\_\_\_\_  $\times$  \_\_\_\_\_ = \_\_\_\_\_  
00000  
00000

23.  + 49 = 64

24.  $4328 + 324 + 66 =$  \_\_\_\_\_

25. 124 m  
+ 37 m  
\_\_\_\_\_

26.  $12 \times 0 =$  \_\_\_\_\_

27. 6  
+ 7  
\_\_\_\_\_  
\_\_\_\_\_

28. 72  = 26

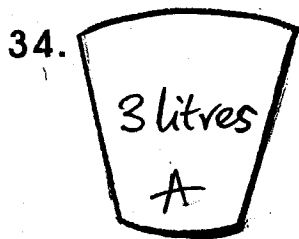
29. Wambui had 16 sweets, she ate 7 sweets. How many sweets did she remain with? \_\_\_\_\_

30.  $40 \div 8 =$  \_\_\_\_\_

31.  $\frac{5}{8} - \frac{2}{8} =$  \_\_\_\_\_

32.  $4 \overline{)36} =$  \_\_\_\_\_

33. How many days are there in 4 weeks? \_\_\_\_\_



Which container holds more water?

35. There are \_\_\_\_\_ months in two years.

36. What is the place value of 6 in 643? \_\_\_\_\_

37. 
$$\begin{array}{r} 760 \\ - 45 \\ \hline \end{array}$$

38. 
$$\begin{array}{r} \text{Shs} \quad \text{Cts} \\ 7 \quad 05 \\ \times \quad 7 \\ \hline \end{array}$$

39. 
$$\begin{array}{r} \text{Wks} \quad \text{days} \\ \quad \quad 7 \\ + \quad \quad 5 \\ \hline \end{array}$$

40.  $\square + 6 = 42$

41.  $\frac{1}{2}$  an hour = \_\_\_\_\_ minutes

42. 19 days = \_\_\_\_\_ weeks \_\_\_\_\_ days

43.  $\square + 209 = 510$

44.  $90 - \square = 27$

45.  $78 + \square = 150$

46. In a class there are 48 pupils, if 29 are boys. How many girls are there?

47.  $\square \times 8 = 56$

48.  $\square \div 9 = 1$

49. Which one is greater 427 or 772?

50.  $\frac{1}{8}$  of 64 =

**STEGA SERIES**  
**STD 3 TERM 3 2014**  
**ENGLISH**

NAME \_\_\_\_\_

DATE \_\_\_\_\_

Dictation

1. \_\_\_\_\_
2. \_\_\_\_\_
3. \_\_\_\_\_
4. \_\_\_\_\_
5. \_\_\_\_\_

Write the past tense

6. Buy \_\_\_\_\_
7. Go \_\_\_\_\_
8. Put \_\_\_\_\_
9. Carry \_\_\_\_\_
10. Say \_\_\_\_\_

Write the opposite

11. Asleep \_\_\_\_\_
12. New \_\_\_\_\_
13. Beautiful \_\_\_\_\_
14. Blunt \_\_\_\_\_

Use shall or will

15. The children \_\_\_\_\_ come tomorrow.

17. I \_\_\_\_\_ write my name.


18. We \_\_\_\_\_ do it.

Name the pictures

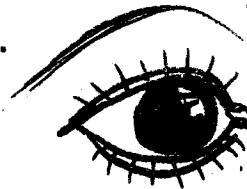
19.




20.



21.



22.



Fill in the missing letters.

23. Ch \_\_\_\_\_ r.

24. P \_\_\_\_\_ ck \_\_\_\_\_ t.

25. B \_\_\_\_\_ cycl \_\_\_\_\_.

26. Dr \_\_\_\_\_ w \_\_\_\_\_ r.

27. M \_\_\_\_\_ se.



**(Underline the noun)**

28. He was sitting in the car.

29. Put that rubbish here.

30. Blow your nose.

**Write the plural of the**

**following words.**

31. Lady \_\_\_\_\_

32. Ox \_\_\_\_\_

33. Foot \_\_\_\_\_

34. Mouse \_\_\_\_\_

35. Chief \_\_\_\_\_

**Write capital letters where**

**necessary.**

36. yesterday was friday.

\_\_\_\_\_

37. james went to nairobi.

\_\_\_\_\_

38. have you seen david.

\_\_\_\_\_

39. I am in class three.

40. nancy is a polite girl.

\_\_\_\_\_

**Write the correct answers.**

41. I mend torn shoes, I am a \_\_\_\_\_

(cobbler, tailor, carpenter)

42. A young one of a hen is called a

\_\_\_\_\_

43. As white as \_\_\_\_\_

(blood, snow, grass)

44. The home of a dog is called \_\_\_\_\_

(sty, stable, kennel)

45. Hot is to hotter, as bad is to \_\_\_\_\_

(good, badder, worse)

**Add - ing**

46. clap \_\_\_\_\_

47. Drive \_\_\_\_\_

48. Bake \_\_\_\_\_

49. Chop \_\_\_\_\_

50. Borrow \_\_\_\_\_

# STEGA SERIES

## KISWAHILI MUHULA WA TATU DARASA LA TATU 2014

JINA \_\_\_\_\_ TAREHE \_\_\_\_\_

Imla

1. \_\_\_\_\_
2. \_\_\_\_\_
3. \_\_\_\_\_
4. \_\_\_\_\_
5. \_\_\_\_\_


Andika vizuri

6. pmia \_\_\_\_\_
7. ikamas \_\_\_\_\_
8. shadiri \_\_\_\_\_
9. jaom \_\_\_\_\_
10. gende \_\_\_\_\_

Andika kinyume

11. penda \_\_\_\_\_
12. Mzee \_\_\_\_\_
13. Nuka \_\_\_\_\_
14. Nyeupe \_\_\_\_\_
15. Sahau \_\_\_\_\_



Andika majina ya picha hizi



Tumia ya, la, cha, wa, vya

19. Kiti \_\_\_\_\_ baba.
20. Shamba \_\_\_\_\_ shangazi.
21. Watoto \_\_\_\_\_ shule.
22. Nguo \_\_\_\_\_ mama.
23. Vijiko \_\_\_\_\_ mpishi.

Taja Maumbo haya



Andika kwa maneno

26. Watoto (214) \_\_\_\_\_  
27. Sahani (300) \_\_\_\_\_  
28. Vikombe (672) \_\_\_\_\_  
29. Mifuko (538) \_\_\_\_\_  
30. Magari (476) \_\_\_\_\_

Andika kwa wingi

31. Mkuki huu ni wa baba.  
32. Meza hii imepakwa rangi.  
33. Mbuzi ana rangi nzuri.  
34. Tunda limeoza.  
35. Kikapu kimepelekwa Kanisani.

Jibu salamu

36. Umeshindaje? \_\_\_\_\_  
37. Hamjambo \_\_\_\_\_  
38. Pole \_\_\_\_\_  
39. Shikamoo \_\_\_\_\_  
40. Habari \_\_\_\_\_

Kamilisha methali na

vitendawili

41. Umoja ni \_\_\_\_\_  
42. Kuuliza si \_\_\_\_\_  
43. Macho hayana \_\_\_\_\_  
44. Nameza lakini sishibi  
\_\_\_\_\_  
45. Kamba yangu ndefu na haifungi

kuni \_\_\_\_\_  
(pazia, nguvu, barabara,  
ujinga, mate)

Jaza nafasi

46. Ga\_\_i.  
47. W\_\_tal\_\_\_.  
48. Ny\_\_s\_\_\_.  
49. K\_\_n\_\_e\_\_e.  
50. Mw\_\_up\_\_.

**STEGA SERIES**  
**STD 3 TERM 3 2014**  
**READING**

NAME \_\_\_\_\_

DATE \_\_\_\_\_

**READ THESE WORDS**

1. Landslide
2. Scatter
3. Match
4. Dial
5. Hairdresser
6. Sling
7. Admit
8. Conserve
9. Suitable
10. Wheel

**READ THE SENTENCES**

11. The brown cat played under the tree.
12. The road was smooth and straight.
13. She goes to the market everyday.
14. The man who lives next door is a barber.
15. There are many races on sports day.

**READ THE PASSAGE**

Muna was very rich but he never liked to spend his money. He kept the money in a paper bag in the roof of the house. He did all kinds of things to avoid spending money. One day his son stole the paper bag and burnt it. Muna cried very loudly.

**MUHULA WA TATU 2014**  
**KUSOMA DARASA LA TATU**

**SOMA MANENO HAYA**

1. Muuzaji
2. Mamba
3. Twiga
4. Kitukuu
5. Chandarua
6. Bahasha
7. Bustani
8. Choka

**SOMA SENTENSI HIZI**

11. Mchwa ni mdudu mharibifu anayekula miti na mbao.
12. Kinyonga anaweza kujigeuza rangi mbali mbali.
13. Wauzaji watauza nafaka kesho.
14. Kikombe kipya kimevunjwa na nani?
15. Watoto wake na mkewe wametoroka.

**SOMA KIFUNGU**

Siku moja mvuvi mmoja alivua samaki mdogo. Yule samaki akamwambia mvuvi, " mimi ni samaki mdogo sana hata ukinila hutashiba. tafadhali nakuomba unirudishe majini ili nikuonyeshe samaki wakubwa."