

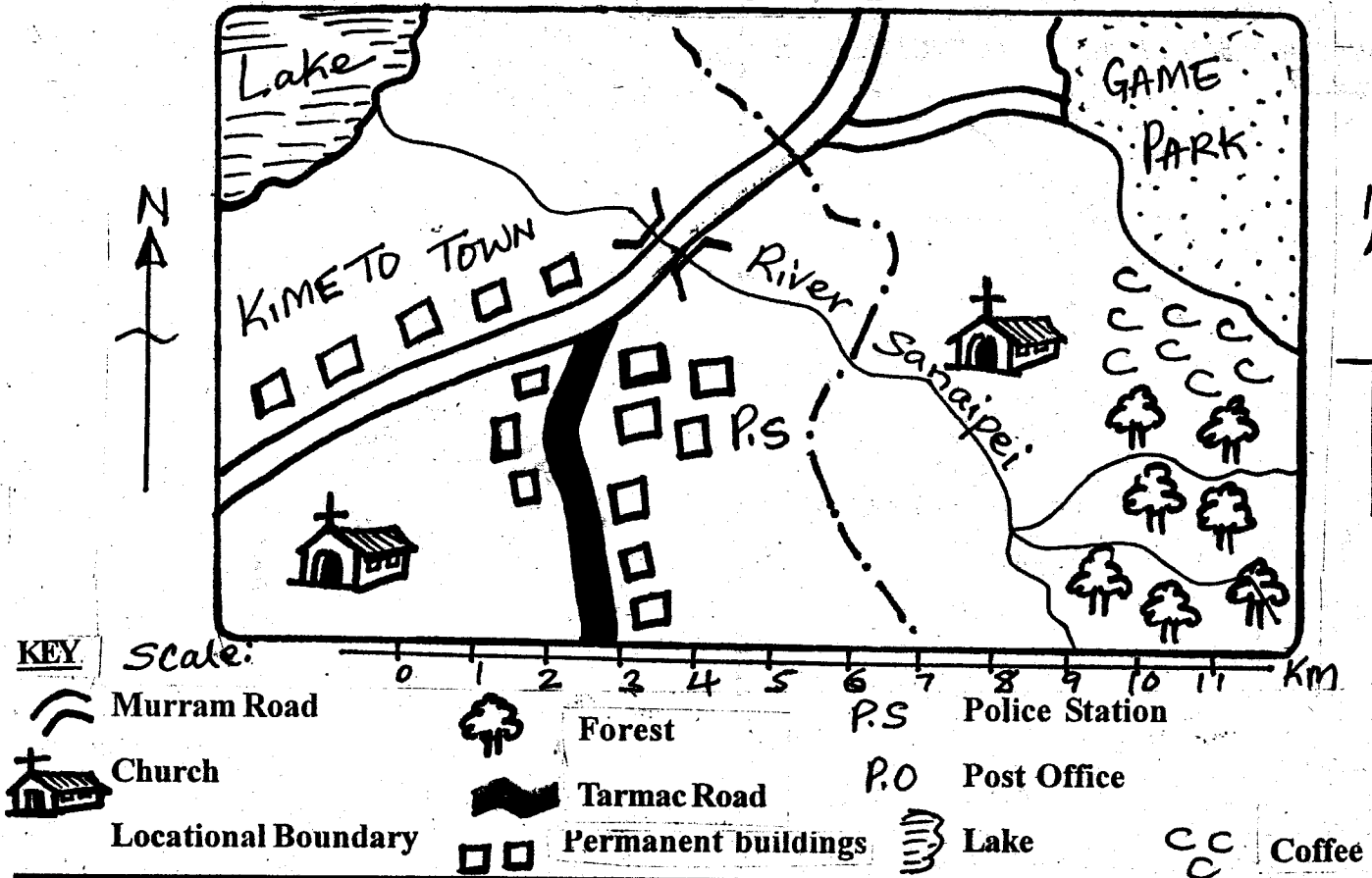
Powered By: [www.eeducationgroup.com](http://www.eeducationgroup.com)

Menu:

1. Social
2. Science
3. Mathematics
4. English
5. Kiswahili
6. Insha
7. Composition
8. Marking scheme

Study the map of Kimeto area and answer questions 1 - 7.

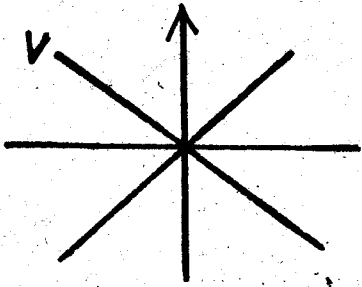
#### KIMETO AREA



- The people of Kimeto area are \_\_\_\_\_.  
A. Muslims  
B. Christians  
C. Hindus  
D. Pagans
- People of Kimeto area use \_\_\_\_\_ for transport.  
A. water  
B. air  
C. railway  
D. road
- The **MAIN** tourist attraction in Kimeto area is \_\_\_\_\_.  
A. Wildlife  
B. hills  
C. lakes  
D. mountains
- The people of Kimeto area are \_\_\_\_\_.  
A. maize farmers  
B. coffee farmers  
C. tea farmers  
D. cassava farmers
- The forest in Kimeto area \_\_\_\_\_.  
A. attracts rainfall.  
B. is used for making bricks.  
C. does control soil erosion.  
D. is used for making pots.
- River Sanaipei has \_\_\_\_\_ tributaries.  
A. three  
B. two
- The **MAIN** means of communication in Kimeto area is by use of \_\_\_\_\_.  
A. letters  
B. Television  
C. Radio  
D. Internet
- The arrow of the magnetic compass always points to the \_\_\_\_\_.  
A. East  
B. South  
C. West  
D. North
- The keeping of dairy animals in stalls where they are fed is known as \_\_\_\_\_.  
A. ranching  
B. paddocking  
C. zero grazing  
D. rotational grazing
- The Members of the County Assembly are elected to represent areas called \_\_\_\_\_.  
A. Counties  
B. Wards  
C. constituencies  
D. Districts
- Which one of the following was a means of communication used in our county in the past?  
A. Use of mobile phones

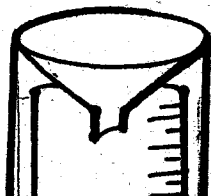
12. How many counties are there in our country Kenya?  
 A. Eighty seven                      B. Twenty seven  
 C. Thirty seven                        D. Forty seven
13. Three of the following are physical features. Which one is NOT?  
 A. Hill                                      B. Valley  
 C. River                                    D. Hall
14. The vegetation that grows in the swamp are \_\_\_\_\_  
 A. shrubs                                  B. reeds  
 C. forests                                 D. scrubs
15. Which one of the following is a traditional industry?  
 A. Jua kali                                 B. Paper making  
 C. Baskets making                       D. Tea processing

Use the diagram below to answer questions 16 and 17.




16. The direction marked V is \_\_\_\_\_  
 A. North West                            B. South West  
 C. North East                            D. South East
17. Which one of the following people mostly use the above instruments?  
 A. Teachers                                B. Sailors  
 C. Doctors                                 D. Meteorologists
18. The people's way of life is their \_\_\_\_\_  
 A. community                              B. society  
 C. culture                                  D. lifestyle
19. On 1<sup>st</sup> June of every year, people in our country celebrate \_\_\_\_\_  
 A. Christmas Day                        B. Mashujaa Day  
 C. Jamhuri Day                         D. Madaraka Day
20. The ceremony the youth undergone before becoming adults is \_\_\_\_\_  
 A. wedding                                 B. marriage  
 C. burial                                     D. initiation
21. The type of vegetation growing on its own is known as \_\_\_\_\_  
 A. scattered vegetation  
 B. natural vegetation  
 C. planted vegetation  
 D. human made vegetation
22. The name given to people belonging to a given country is \_\_\_\_\_  
 A. Citizens                                 B. gangs  
 C. congregation                         D. foreigners

Use the diagram below to answer questions 23 and 24.



23. The diagram above is used for measuring \_\_\_\_\_  
 A. temperature                            B. direction of wind  
 C. rainfall amount                        D. speed of wind
24. The above weather instrument is marked in units called \_\_\_\_\_  
 A. Centimetres                            B. Millimetres  
 C. Litres                                    D. Millilitres
25. Who among the following mainly taught the youth in the traditional African society?  
 A. Peers                                    B. Council of elders  
 C. Elders                                  D. Warriors
26. Savannah is the other name for \_\_\_\_\_  
 A. grassland                                B. woodlands  
 C. Bamboo forests                        D. thick forests
27. Which one of the following was NOT a source of traditional medicine?  
 A. Useful roots                            B. Toxic herbs  
 C. Tree barks                              D. Useful leaves
28. Which one of the following language groups in our county are non- Africans?  
 A. Nilotes                                  B. Bantu  
 C. Asians                                    D. Cushites
- Use the diagram below to answer questions 29 and 30.



29. The raw material used to make the above product is \_\_\_\_\_  
 A. vegetation                                B. iron  
 C. stones                                    D. clay
30. The diagram above represents a product from the industry called \_\_\_\_\_  
 A. pottery                                    B. weaving  
 C. blacksmithery                         D. leather tanning
31. The type of chicken kept for meat is \_\_\_\_\_  
 A. broilers                                 B. growers  
 C. layers                                    D. chicks
32. The word scrub means \_\_\_\_\_  
 A. swampy area                            B. dry bush land  
 C. desert area                              D. cool and wet area
33. The areas in our county with a few people are said to be \_\_\_\_\_  
 A. thickly populated                      B. thinly populated  
 C. sparsely populated                    D. densely populated
34. In our County, individual farmers keep fish in \_\_\_\_\_  
 A. Lakes                                    B. rivers  
 C. swamps                                 D. ponds
35. It is TRUE to say that riverine vegetation is found \_\_\_\_\_  
 A. along rivers                              B. around hills

36. The road sign below informs the drivers to \_\_\_\_\_.



- A. turn left
- B. stop immediately
- C. proceed carefully
- D. turn to the right

37. The rivers that dry up during the dry season are referred to as \_\_\_\_\_.

- A. temporary rivers
- B. permanent rivers
- C. young rivers
- D. seasonal rivers

38. A set of rules used by a community to control the behaviour of people is referred to as \_\_\_\_\_.

- A. Constitution
- B. moral values
- C. constituency
- D. political values

39. In our schools, conflicts between pupils and teachers are mainly caused by \_\_\_\_\_.

- A. poor class performance
- B. selfishness
- C. lack of fairness
- D. hatred

40. In our County, a location is headed by a \_\_\_\_\_.

- A. Governor
- B. Member of the County Assembly
- C. Chief
- D. Assistant Commissioner

41. Big farms where beef cattle for meat are kept are known as \_\_\_\_\_.

- A. cattle boma
- B. ranches
- C. stalls
- D. paddocks

Use the diagram below to answer questions 42 and 43.



42. The instrument above is used to measure \_\_\_\_\_.

- A. rainfall
- B. direction of wind
- C. temperature
- D. amount of sunshine

43. The liquid marked X is \_\_\_\_\_.

- A. petrol
- B. water
- C. kerosene
- D. mercury

44. Which one of the following statements **CORRECTLY** describes the meaning of the word weather?

- A. The height above sea level of a place.
- B. The plants growing in a place.
- C. The day to day conditions of a place's atmosphere.
- D. The amount of rain falling in a place.

45. Which one of the following is **NOT** one of the cardinal points of a compass?

- A. North East
- B. West
- C. North
- D. South

46. Long ago, people in our country were treated by \_\_\_\_\_.

- A. doctors
- B. nurses
- C. surgeons
- D. Herbalists

47. Which one of the following was **NOT** one of the ceremonies in our county long time ago?

- A. Marriage
- B. Naming
- C. Confirmation
- D. Initiation

48. Which one of the following is **NOT** an example of a weather element?

- A. Rainfall
- B. Vegetation
- C. Wind
- D. Temperature

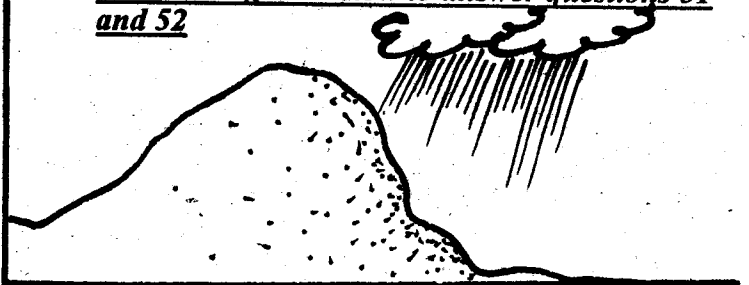
49. Which one of the following is used to make baskets?

- A. Clay
- B. Shrubs
- C. Papyrus
- D. Trees

50. In the past, the **MAIN** way of transporting heavy goods on land was \_\_\_\_\_.

- A. roads
- B. trains
- C. air
- D. animals

Use the diagram below to answer questions 51 and 52



51. The physical feature used in the above diagram is a \_\_\_\_\_.

- A. valley
- B. hill
- C. lake
- D. river

52. The physical feature above is best used for \_\_\_\_\_.

- A. getting fish
- B. putting water pipeline.
- C. putting a telephone satellite.
- D. building government offices.

53. The special areas in our County set aside for wildlife are known as \_\_\_\_\_.

- A. museum
- B. ranches
- C. forest reserves
- D. National Parks

54. Which one of the following is a food crop?

- A. Sweet Potatoes
- B. Cotton
- C. Coffee
- D. Sisal

55. Agriculture is also known as \_\_\_\_\_.

- A. forests
- B. Agro-forestry
- C. farming
- D. farmland

56. Which one of the following attracts tourists to our county?

- A. Crops
- B. Livestock
- C. Desert
- D. Wildlife

57. Which one of the following is **NOT** a member of a nuclear family?

- A. Uncle
- B. Mother
- C. Sister
- D. Brothers

58. In the traditional society people offered their prayers in special places called \_\_\_\_\_.

- A. temples
- B. shrines
- C. Churches
- D. Mosques

59. The crops grown by farmers in our county **MAINLY** for sale are known as \_\_\_\_\_.

- A. food crops
- B. staple crops
- C. subsistence crops
- D. cash crops

60. The name given to a stream joining a main river is \_\_\_\_\_.

- A. tributary.
- B. source
- C. mouth
- D. swamp

**C.R.E**

61. For how long did God take to create the earth?  
A. One day                      B. Six days  
C. Seven days                  D. Three days
62. Who among the following was one of the sons of Noah?  
A. Jacob                          B. Cain  
C. Abel                            D. Ham
63. Who among the following is known for his great faith in God?  
A. Moses                          B. Abraham  
C. David                          D. Cain
64. Which one of the following separated Adam from God?  
A. Sin                              B. Kindness  
C. Riches                          D. Fruit
65. The person who led the people of Israel out of Egypt was \_\_\_\_\_.  
A. Joshua                          B. Caleb  
C. Moses                          D. Aaron
66. A good effect of weather is \_\_\_\_\_.  
A. strong winds that destroy buildings.  
B. floods that destroy farmer's crop.  
C. drought that kill livestock.  
D. rain enough for crops to do well.
67. According to Jesus, a good leader should be \_\_\_\_\_.  
A. partial                          B. impartial  
C. proud                            D. poor
68. Which one of the following did God give to Solomon?  
A. Wisdom                          B. many wives  
C. Strength                          D. Children
69. The son of Jacob who was sold to Egypt by his brothers was \_\_\_\_\_.  
A. Benjamin                          B. Judas  
C. Reuben                          D. Joseph
70. Jesus was a refugee in \_\_\_\_\_.  
A. Egypt                            B. Italy  
C. Rome                              D. Israel
71. The mother of Samuel was called \_\_\_\_\_.  
A. Peninah                          B. Hannah  
C. Elizabeth                          D. Sarai
72. Who among the following lied to the Holy Spirit?  
A. Saul                              B. Peter  
C. Ananias                          D. Judas Iscariot
73. \_\_\_\_\_ was stoned to death.  
A. Ananias                          B. Jesus  
C. John the Baptist                  D. Stephen
74. Who among the following referred to Jesus as "Prince of Peace" ?  
A. Prophet Isaiah                  B. Propeht Jeremiah  
C. Prophet Ezekiel                  D. Propeht Micah
76. The first disciples of Jesus were mostly \_\_\_\_\_.  
A. traders                          B. fishermen.  
C. tax collectors                  D. iron workers
77. Which one of the following is NOT created by God?  
A. Houses                          B. Valleys  
C. Hills                              D. Lakes
78. The father of John the Baptist was \_\_\_\_\_.  
A. Elkanah                          B. Zebedee  
C. Jesece                          D. Zechariah
79. God gave Moses the ten commandments on top of Mount \_\_\_\_\_.  
A. Olive                              B. Olives  
C. Sinai                              D. Camel
80. Jesus fed \_\_\_\_\_ people using five loaves of bread and two fish.  
A. 7000                              B. 30000  
C. 450                                D. 5000
81. For how many days did Lazarus stay in the womb?  
A. 4 days                            B. 40 days  
C. 3 days                            D. Ten days
82. The first King of Israel was called \_\_\_\_\_.  
A. Solomon                          B. Saul  
C. David                              D. Ahab
83. The angel of God called a person Israel. This person was \_\_\_\_\_.  
A. Joseph                            B. Abraham  
C. Jacob                              D. Samson
84. Which work was done by Levi before he became a disciple of Jesus Christ?  
A. Fishermen                          B. Tent maker  
C. Carpenter                          D. Tax collector
85. People who are selfish are \_\_\_\_\_.  
A. loving                            B. honest  
C. greedy                            D. patient
86. Who among the following was crucified together with Jesus Christ?  
A. Kings                              B. Women  
C. Thieves                            D. Angels
87. The home town of King David was \_\_\_\_\_.  
A. Bethlehem                          B. Jericho  
C. Jerusalem                          D. Capernaum
88. Which one of the following names means God with us?  
A. Christ                            B. Jesus  
C. Emmanuel                          D. John
89. During the baptism of Jesus, the Holy Spirit was represented by \_\_\_\_\_.  
A. strong wind                          B. dove  
C. cloud                              D. fire
90. James your classmate likes stealing other pupils pencils. As a christian, the best advice to give her is \_\_\_\_\_.

# STEGA SERIES

## STANDARD FOUR TERM 3 2014


### SCIENCE

Time: 1 hour 40 min

- Which type of teeth is used in the grinding and chewing of food?
  - Canines and incisors.
  - Premolars and incisors
  - Canines and molars
  - Molars and premolars.
- Which of the following is **NOT** a symptom and sign of gum disease?
  - Bad breath
  - Cavities
  - Red swollen gums
  - Tooth sensitivity
- A weed is:-
  - a plant growing where it is not wanted.
  - a useful plant.
  - an important plant
  - a poisonous plant.
- Which statement is **NOT** correct about cumulus clouds?
  - They may form high in the sky.
  - They are common in fine weather.
  - They have no specific shape.
  - They usually cover the whole sky.
- A std 4 pupil observed the sky at night. The pupil was **LIKELY** to have seen:-
  - clouds, sun, stars.
  - stars, moon, clouds.
  - stars, sun, clouds
  - bluesky, clouds, moon.
- Which of the livestock below is **CORRECTLY** matched with its product?

	Animal	Product
A.	Poultry	Milk
B.	Goats	Mutton
C.	Sheep	Mohair
D.	Cow	Eggs

- Which of the following is **NOT** a phase of the moon?
  - Crescent
  - Gibbous
  - Nimbus
  - First quarter
- Which of the following foods is harmful to our teeth?
  - Carrots
  - Milk
  - Sugarcane
  - Biscuits
- Which of the phase of the moon below is **CORRECTLY** matched with its name?
 


- Which of the following **CANNOT** be used to transport water?
  - Tap
  - Drum
  - Pipe
  - Tanker
- In factories, water is used to:-
  - water flowers.
  - mix substances.
  - row boats ferrying wood.
  - make fountains.
- Four std 4 pupils carried packed lunch as shown below;
 

Kathule \_\_\_\_\_ Maize, beans, banana

Ndinda- \_\_\_\_\_ Chapati, peas, beef

Momanyi \_\_\_\_\_ Peas, rice, potatoes

Lagat \_\_\_\_\_ Kales, ugali, pawpaw

Who among them carried a balanced diet?

A. Momanyi                      B. Lagat

C. Kathule                      D. Ndida

13. The soil is important in all the following ways

**EXCEPT:-**

A. source of air.

B. supports growth of food crops.

C. home to certain animals.

D. supports growth of crops.

14. Which of the animals below does **NOT** fly?

A. Bee                              B. Owl

C. Glow worm                      D. Earthworm

15. The tooth problem illustrated below is \_\_\_\_\_



A. Tooth cavities                      B. Gingivitis

C. Bleeding gums                      D. Tooth decay

16. Crops grown for their threads are called fibre crops.

They are grouped under \_\_\_\_\_ crops.

A. Food                              B. cash

C. tuber                              D. vegetable

17. Which of the following groups of food show energy-giving food **ONLY**?

A. Cabbage, tomato, carrot.

B. Cooking oil, sugar, rice.

C. Beef, pork, beans.

D. Green bananas, yams orange

18. When brushing our teeth, the brush should mainly be moved:-

A. upward and downward.

B. across and upward.

19. Std 4 pupils observed clouds which had the following characteristics:-

i) covered the whole sky.

ii) irregular shaped.

iii) dark grey in colour.

The above clouds indicate:-

A. fine weather

B. heavy rainfall

C. windy condition

D. showers.

20. The soil with the largest particles is:-

A. clay                              B. loam

C. sand                              D. alluvial

21. Which of the following **BEST** describes the surrounding of an animal?

A. Habitat                              B. Home

C. Characteristic                      D. Environment

22. A human being develops \_\_\_\_\_ sets of teeth in the mouth.

A. 32                              B. 2

C. 20                              D. 12

23. Which of the following **DOES NOT** show a use of water in a farm?

A. Irrigation

B. Keeping fish.

C. Washing utensils.

D. Spraying pesticides.

24. Std 4 pupils heated garden soil in an open tin until they saw smoke. Which component of the soil were they investigating?

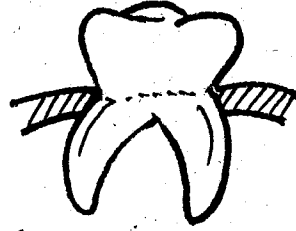
A. Air

B. Humus


C. Water

D. Minerals

25. The type of tooth represented by the diagram below:



- A. are the last to grow.
  - B. are useful in holding food.
  - C. are between the canines and incisors.
  - D. are eight in human beings.
26. Pressure in liquids:-
- A. increase with depth
  - B. decrease with depth
  - C. increase with height
  - D. depends on the size of the tap.
27. The type of tool drawn is BEST maintained by:-




- A. repairing the handle
  - B. oiling
  - C. storing it properly
  - D. sharpening
28. Which of the animals below does NOT remove liquid waste in form of urine?
- |        |          |
|--------|----------|
| A. Cow | B. Sheep |
| C. Hen | D. Dog   |
29. Poultry kept for meat production are known as:-
- |           |             |
|-----------|-------------|
| A. hens   | B. broilers |
| C. layers | D. cocks    |
30. Protective nutrients are obtained from:-
- A. Legumes and cereals
  - B. Vegetables and fruits
  - C. Fruits and cereals
  - D. legumes and vegetables,
31. Joyce observed a cat give birth. This characteristic is

- A. excretion
- B. transpiration
- C. reproduction
- D. respiration.

32. Weeds should be controlled:

- A. during the dry season.
- B. during the rainy season.
- C. when they dry up.
- D. whenever they germinate.

33. Soil was added into a container with water and the results were as shown below.



From the experiment. It was concluded that:-

- A. air has water
- B. soil has air
- C. water has soil
- D. water has air.

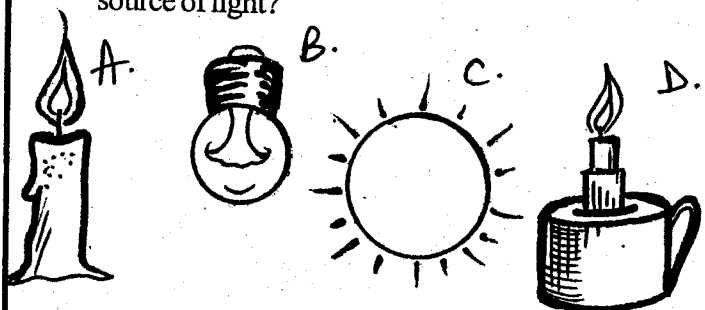
34. Which of the following is NOT a use of light?

- A. Drying cereals
- B. Safety
- C. During photosynthesis process.
- D. To discourage pests.

35. Solids, liquids and gases are states of:-

- |               |            |
|---------------|------------|
| A. substances | B. fuels   |
| C. matter     | D. sinkers |

36. Which of the materials below is NOT an artificial source of light?

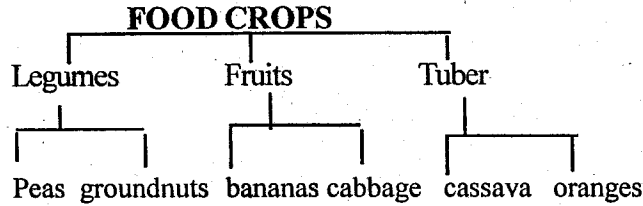


37. The BEST method of controlling weeds on a nursery



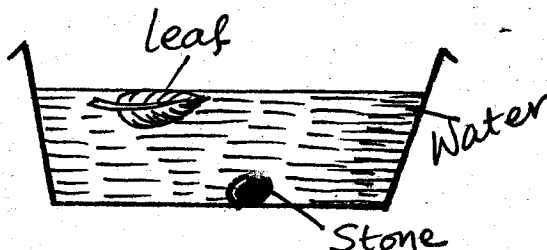
- A. use of chemicals
- B. digging
- C. uprooting
- D. slashing

38. A std 5 pupil classified crops as shown below



Which two crops were **WRONGLY** classified?

- A. Groundnuts and cabbage
  - B. Banana and cassava
  - C. Peas and cabbage
  - D. Oranges and cabbage
39. Which of the materials below **CANNOT** be used to make wheels of a toy car?
- A. Old slippers.
  - B. Blocks of wool.
  - C. Bottle tops.
  - D. Maize cobs.
40. A combination of many signs and symptoms of diseases is called:-
- A. Syndrome
  - B. Acquired
  - C. HIV
  - D. Deficiency
41. Which statement about the sky is **CORRECT**?
- A. The sun moves from East to West
  - B. Stars are always found in the sky.
  - C. The sun is nearer to the earth than clouds.
  - D. The moon has only one shape.
42. Akumu was playing by dipping some materials in water in a basin as shown below.



The above observation was due to the difference in:-

- A. shape
  - B. material
  - C. weight
  - D. size
43. All the following materials will add up to humus **EXCEPT**
- A. decaying plants
  - B. dead parts of animals
  - C. plastics buried in the soil
  - D. animals waste.
44. Sheep are reared for:-
- A. wool
  - B. mohair
  - C. beef
  - D. milk
45. A four year old boy has all the following types of teeth **EXCEPT**:-
- A. incisors
  - B. canines
  - C. molars
  - D. premolars
46. Which of the following is **NOT** a source of heat energy?
- A. Sun
  - B. Cooking gas.
  - C. Glow worms.
  - D. Kerosene
47. A piece of wire can be made to float by:-
- A. Rolling it into a ball of wire.
  - B. Cutting it into a small piece.
  - C. Attaching feathers to it.
  - D. Attaching it to a stone.
48. Which of the following is **NOT** used to clean teeth?
- A. Tooth paste
  - B. Honey
  - C. Soft stick
  - D. Salt
49. Which one of the following is the largest water storage?
- A. Tank
  - B. Drum
  - C. Dam
  - D. Tap
50. Which of the following is **NOT** a vegetable?
- A. Pawpaw
  - B. Lettuce
  - C. Kales
  - D. Cabbage

# STEGA SERIES

## STANDARD FOUR TERM 3 2014

### MATHEMATICS

Time: 2 Hours

1. Write 111011 in words:-
- A. One hundred thousand eleven hundred.  
B. One hundred and eleven thousand and eleven.  
C. Eleven thousand one hundred and eleven.  
D. One hundred and eleven thousand one hundred and eleven.

2. Work out:-
- $$0.34 + 1.394 + 163.23 =$$
- A. 177.51                      B. 164.964  
C. 1649.64                     D. 164.9064

3. What is the sum of the odd numbers between 10 and 20?
- A. 56                              B. 5  
C. 75                              D. 60

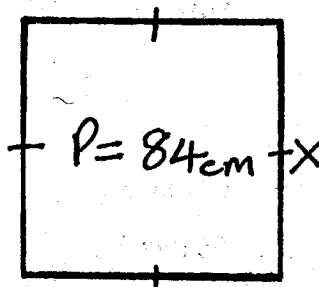
4. Work out:-
- $$6842 + 19233 + 156 =$$
- A. 26231                        B. 25231  
C. 26321                        D. 25132

5. The angle which is less than  $180^\circ$  by greater than  $90^\circ$  is known as \_\_\_\_\_ angle.
- A. acute                         B. reflex  
C. right                         D. obtuse

6. Work out :-
- $$8 \times \frac{2}{17} =$$
- A.  $\frac{17}{16}$                          B.  $1\frac{1}{16}$   
C.  $\frac{16}{17}$                          D.  $\frac{8}{34}$

7. Convert  $\frac{9}{100}$  into a decimal
- A. 0.009                        B. 90  
C. 0.9                            D. 0.09

8. How many cents are in 12 shillings 45 cts?
- A. 1245 cts                      B. 12450ct  
C. 165ct                         D. 12045
9. What is the appropriate unit for measuring the length of your Mathematics Text book?
- A. Metres                        B. Centimetres  
C. Millimetres                 D. Litres
10. The perimeter of the square below is 84cm. Calculate the side marked x?



- A. 44cm  
B. 336cm  
C. 42cm  
D. 21cm


11. What is  $\frac{1}{3}$  of 48?
- A. 18                              B. 24  
C. 12                              D. 16

12. Work out :-

Sh	Ct
44	75
x	8

- A. Sh 355                      40ct  
B. Sh 352                      600ct  
C. Sh 358                      00ct  
D. Sh 352                      00ct

13. How many squares units are in the figure below?



- A. 39
- B. 45
- C. 49
- D. 42

14.  $\frac{1}{2}L + \frac{1}{2}L + \frac{1}{2}L =$

- A.  $1\frac{1}{2}L$
- B.  $\frac{3}{4}L$
- C.  $2\frac{1}{2}L$
- D.  $3L$

15. The year 2012 was a leap year. Which was the previous leap year?

- A. 2008
- B. 2016
- C. 2020
- D. 2010

16. Work out :-

$$12 \overline{)689}$$

- A. 507 rem 5
- B. 57 rem 5
- C. 58 rem 75
- D. 56 rem 5

17. Work out :-

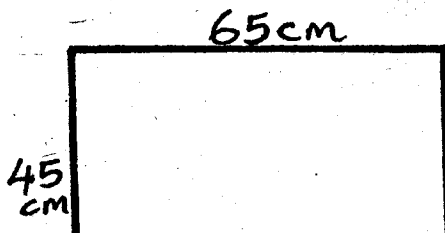
Wks	Days
8	4
- 2	6

- A. 6 wks      5 days
- B. 6 wks      1 day
- C. 5 wks      8 days
- D. 5 wks      5 days

18. 44 quarter kilograms = \_\_\_\_\_ half Kg

- A. 176
- B. 22
- C. 88
- D. 11

19. Find the perimeter of the rectangle drawn below?



- A. 200cm
- B. 110cm
- C. 220cm
- D. 2925cm

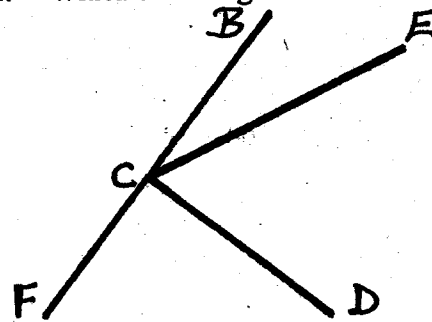
20. The time 4.50 written in the long form is \_\_\_\_\_

- A. ten minutes to four.
- B. fifty minutes past four.
- C. ten minutes to five.
- D. ten minutes past four.

21. A journey took 68 hours. How many days and hours was the journey?

- A. 2 days 20 hours
- B. 20 days 2 hours
- C. 5 days 8 hours
- D. 2 days 2 hours

22. Which of the angles is the smallest?



- A. BCD
- B. BCE
- C. ECD
- D. ECF

23. What is the total value of digit 2 in the number 127849?

- A. Two hundred thousand
- B. 2000
- C. Twenty Thousand
- D. 200 000

24. A teacher gave 18 books to each of her 30 pupils in class. How many books did she give out altogether?

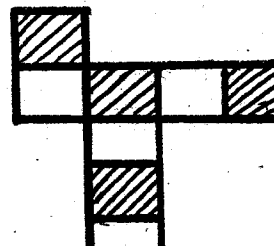
- A. 560
- B. 48
- C. 480
- D. 540

25. Collect the like terms :-

$$m + n + 2m + 3n =$$

- A.  $4m + 3n$
- B.  $4n + 3m$
- C.  $5n + 2m$
- D.  $n + m$

26. What fraction is shaded in the figure below?



- A.  $\frac{1}{4}$
- B.  $\frac{1}{2}$
- C.  $\frac{5}{4}$
- D.  $\frac{3}{8}$

27. What is  $\frac{9}{10}$  written as a decimal?

- A. 0.09                      B. 0.009  
C. 0.9                         D. 0.0009

28. Study the table below then complete the blank spaces.

Litres	$\frac{1}{2}$ Litres	$\frac{1}{4}$ Litres
3	_____	12
_____	18	36
12	24	_____

- | Litres | $\frac{1}{2}$ Litres | $\frac{1}{4}$ Litres |
|--------|----------------------|----------------------|
| A. 6   | 8                    | 48                   |
| B. 48  | 6                    | 6                    |
| C. 9   | 6                    | 48                   |
| D. 6   | 9                    | 48                   |

29. A tailor bought 14m 25cm of a material. How many trousers did he make if one trouser was using 95 cm of the material?

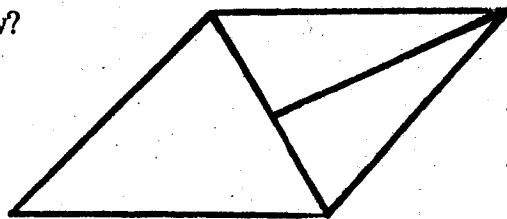
- A. 15                              B. 19  
C. 18                              D. 22

30. Work out :

$$400 - 21.99 =$$

- A. 379.99                      B. 378.01  
C. 379.01                      D. 378.01

31. How many points of intersection are in the figure below?



- A. 6                                B. 8  
C. 5                                D. 7

32. Which of the numbers below is divisible by both 2 and 5?

- A. 1449                         B. 5028

33.  $\frac{1}{8} + \frac{3}{8} + \frac{5}{8} =$

- A.  $\frac{9}{8}$                               B.  $\frac{7}{8}$   
C.  $\frac{8}{8}$                               D.  $\frac{6}{8}$

34. Natalia is 1M 40cm. She is 35cm taller than Naomi. How tall is Naomi?

- A. 1m 75cm                      B. 1m 25cm  
C. 2m 5cm                        D. 1m 5cm

35.  $12.36 - \text{_____} = 5.78$

- A. 6.68                         B. 18.14  
C. 6.58                         D. 7.48

36. Owira covered a distance of 1215M in one day. The following day, he covered 2370 Metres more. How many metres did he cover in the two days?

- A. 3558M                         B. 3585M  
C. 3855M                         D. 3505M

37. Work out :-

$$41 \overline{) 984} =$$

- A. 204                              B. 28  
C. 24                                D. 240

38. Halima had 40 Litres of juice. She packed the juice in  $\frac{1}{2}$  Litre container. How many containers did she fill?

- A. 160                              B. 20  
C. 10                                D. 80

39. Which of the fractions below is the smallest?

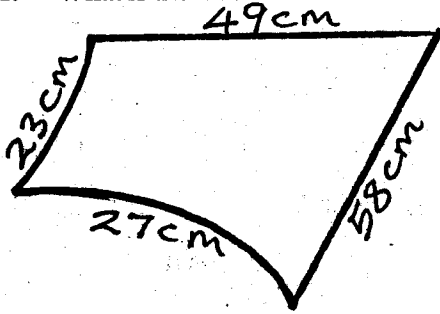
$$\frac{1}{12}, \frac{1}{9}, \frac{1}{4}, \frac{1}{6}$$

- A.  $\frac{1}{9}$                                 B.  $\frac{1}{6}$   
C.  $\frac{1}{12}$                                D.  $\frac{1}{4}$

40.  $12 \times 8 =$

- A. 72                                B. 84  
C. 108                              D. 96

41. What is the distance round the figure below?



- A. 147cm
- B. 157cm
- C. 134cm
- D. 167cm

42. A trader had 6 one hundred shilling notes. He changed all the money into ten shilling coins. How many coins did he get?

- A. 120
- B. 60
- C. 40
- D. 50

43. A book has 224 pages. A Pupil would read 8 pages per day. How long did it take the pupil to read all the pages?

- A. 28 days
- B. 1792 days
- C. 208 days
- D. 280 days

44. Which set of the numbers below is made up of even numbers only?

- A. 80, 49, 36, 52
- B. 61, 73, 79, 83
- C. 17, 980, 114, 815
- D. 120, 32, 88, 1420

45. Use 'greater than', 'less than' or equal to complete the statement

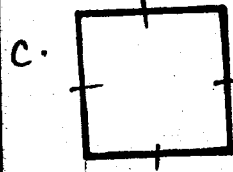
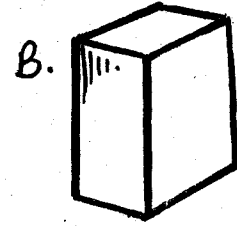
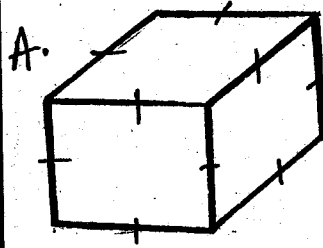
$$\frac{1}{5} \underline{\hspace{2cm}} \frac{1}{10}$$

- A. equal to
- B. less than
- C. greater than
- D. none

46. What is the approximate length of your classroom door?

- A. 200cm
- B. 200m
- C. 20m
- D. 2cm

47. Which of the figures below shows a cube?



The table below shows the type and number of pupils sold by a fruit vendor in a day. Use it to answer questions 48 to 50.

Type of fruit	Tally Marks	Number of Fruits
Pineapples		8
Melons	_____	17
Apples		_____
Oranges		22
Pawpaws		14

48. Which type of fruit was sold to most?

- A. Apples
- B. Melons
- C. Oranges
- D. Pawpaws

49. Which of the following shows the tally marks that would represent the number of melons?

- A. ||| |
- B. ||| ||| ||
- C. ||| ||| ||| |||
- D. ||| ||| ||| ||

50. How many fruits were sold altogether?

- A. 80
- B. 79
- C. 78
- D. 61

# STEGA SERIES

## STANDARD FOUR TERM 3 2014

### ENGLISH

Time: 1 hour 40 minutes

**Choose the most suitable word to fill the blank spaces numbered 1-15.**

Everyone   1   towards the field. It was a   2   July morning. We were very cold. P.E. time was a lot of fun for all of us. It   3   the time, that everyone ran round the field. At   4   time, one   5   scream and shout as they wished.

After that the teachers would divide us   6   groups where we played games. Each group competed to be   7   best. My group always   8   the others.

I was a very   9   runner. I played every game with a lot of skill. In football I was the best   10  . We always   11   and celebrated our victory   12   the other teams.

  13   was the best time I ever   14   at school. It kept us longing to go to school   15   of all the fun.

- |                |            |            |          |
|----------------|------------|------------|----------|
| 1. A. run      | B. ran     | C. running | D. rang  |
| 2. A. warm     | B. cool    | C. hot     | D. cold  |
| 3. A. is       | B. has     | C. were    | D. was   |
| 4. A. this     | B. that    | C. those   | D. these |
| 5. A. can      | B. will    | C. would   | D. shall |
| 6. A. to       | B. into    | C. for     | D. in    |
| 7. A. one      | B. those   | C. they    | D. the   |
| 8. A. defeated | B. won     | C. beaten  | D. win   |
| 9. A. first    | B. top     | C. bad     | D. fast  |
| 10. A. scorer  | B. goal    | C. playing | D. score |
| 11. A. shout   | B. cheered | C. jeered  | D. clap  |
| 12. A. against | B. for     | C. on      | D. by    |
| 13. A. Then    | B. Those   | C. These   | D. This  |
| 14. A. hard    | B. herd    | C. had     | D. heard |
| 15. A. because | B. due     | C. hence   | D. then  |

**For questions 16-18, choose the opposite of the underlined word**

16. This is a wide road.  
A. long                      B. narrow  
C. short                      D. big
17. He is the king  
A. princess                      B. president  
C. prince                      D. queen
18. She is my sister.  
A. niece                      B. nephew  
C. brother                      D. friend

**Write the past tense of the underlined word.**

19. The dig their shamba.  
A. dag                      B. dug  
C. dugged                      D. digged
20. He brings milk every day.  
A. brought                      B. bring  
C. bringing                      D. buy
21. Everyone should write in ink.  
A. right                      B. written  
C. writing                      D. wrote

**Choose the correct word to fill in the blank spaces.**

22. It is \_\_\_\_\_ turn to visit us.  
A. they                      B. there  
C. their                      D. the
23. Everyone should ensure we have \_\_\_\_\_

- A. pace                      B. peace  
C. piece                      D. place

24. We wondered \_\_\_\_\_ they were.  
A. where                      B. were  
C. why                      D. we

**Choose the best option to complete these sentences.**

25. Where \_\_\_\_\_ my rubber?  
A. am                      B. were  
C. are                      C. is
26. How old \_\_\_\_\_ you now?  
A. were                      B. was  
C. is                      D. are

27. He \_\_\_\_\_ given a present yesterday.  
A. were                      B. was  
C. were                      D. are

**Write the word that means the same as the underlined word.**

28. Eveyone was happy.  
A. sad                      B. pleased  
C. good                      D. scared

29. They built a big house.

- A. small                      B. large  
C. thin                      D. fat

30. He is very smart.

- A. neat                      B. quick  
C. stupid                      D. dirty

**Read the following passage and then use it to answer questions 31-40.**

The hare and the tortoise were friends no more. Every time the hare would cheat the tortoise. This time the two had vowed that they would not even cross the same path.

However, one day as tortoise was on his way to the market, he heard a cry from the nearby bush. "What could that cry be all about? Who could it be crying in such pain?" the tortoise wondered. To him it sounded like a little child who was in real danger.

When the tortoise peeped, he could hardly see anything but the cry was now even louder. Help! please help me get out of this trap. The tortoise decided to ask what the problem was. But the only reply he got was a soft groan. He decided to go nearer and see for himself.

Immediately he stepped into the bush he fell with a heavy thud. He had fallen into a deep trap. Although he cried loudly, nobody came to rescue him. His shell cracked into many pieces. He was in great pain. The hare had again tricked the tortoise. That is why tortoise's shell is cracked.

31. Why did hare and tortoise break their friendship?
- A. They were friends no more.  
B. Hare was bad.  
C. Hare always cheated tortoise.  
D. Tortoise always cheated hare.
32. When would hare cheat tortoise?
- A. Every time                      B. Always  
C. Sometimes                      D. Never
33. Where was tortoise going when he heard the cry?
- A. To work                      B. During the day  
C. To the Market                      D. To the river
34. Tortoise thought that the cry was that of ; \_\_\_\_\_
- A. Hare                      B. His child  
C. A child                      D. A sick person
35. What did tortoise see when he looked through the bush?
- A. Nothing                      B. An injured child  
C. Something                      D. A deep pit
36. The word peep used in the passage means:
- A. See                      B. Look  
C. Watch                      D. listen
37. When the tortoise asked who was crying in pain, he received:
- A. An answer                      B. No answer  
C. Only groans                      D. Only shouts
38. Where did the tortoise land when he went into the bush?
- A. In a pit                      B. In a hole  
C. On the ground                      D. In a trap
39. Why was the tortoise in great pain?
- A. His shell had cracked.  
B. He had been hurt.  
C. He had fallen down.  
D. He had been trapped again.
40. The best title for this passage is:
- A. A trap  
B. Two friends  
C. Why tortoise has a cracked shell



**Read the passage below carefully and then answer questions 41-50.**

It was the market day. At every Friday, Gathongo farmers from all the neighbouring homes brought their farm produce to the market. Potatoes were in plenty. They carried them in sacks. Carrots and cabbages were also in the market. What shocked us most was how cheap the carrots were.

Others carried arrow roots and sweet potatoes and beautifully displayed them in the market with different colours. Tomatoes and onions were there in plenty. Whatever one wanted, it was readily available. We could tell the area was very productive. At one corner of the market, there was a large heap of green maize. Many people bought this to cook their traditional food which was called githeri.

All types of green vegetables were readily available. Ranging from spinach, kales and other traditional green vegetables. Some farmers also carried chicken and eggs for sale.

The market was very busy with people buying and selling. It was the best day to go out and buy food because it was cheap then.

41. When was the market day?  
A. Everyday                      B. Any day  
C. Saturday                      D. Friday
42. Who brought goods to the market?  
A. The carts                      B. Farmers  
C. Traders                      D. Cars
43. What was very shocking about the market?  
A. There was a lot of food.  
B. The carrots were very cheap.  
C. Everyone went to the market.  
D. It was very colourful.
44. The arrow roots and sweet potatoes;  
A. Had one colour.  
B. Were plenty  
C. Were very cheap.  
D. Were beautifully displayed.
45. The area was productive because;  
A. anything one wanted was there.  
B. there was everything in the market  
C. the food was fresh.  
D. the food was cheap.
46. Why did people buy green maize?  
A. It was in a large heap.  
B. It was plenty.  
C. It was available  
D. To cook githeri.
47. The following are examples of green vegetables except \_\_\_\_\_  
A. Cabbages                      B. Spinach  
C. Tomatoes                      D. Kales
48. Apart from plants, the farmers also sold \_\_\_\_\_  
A. Chicken and eggs  
B. Potatoes  
C. Onions  
D. Goats
49. Why was the market day the best day to buy food?  
A. Everybody was at the market.  
B. It was very busy.  
C. Food was cheap.  
D. There was a lot of food.
50. The **best** title for the above passage is: \_\_\_\_\_  
A. Market day at Gathongo  
B. Farming in the village.  
C. Good business.  
D. A visit to a supermarket.

# STEGA SERIES

## DARASA LA NNE MUHULA WA TATU 2014

### KISWAHILI

MUDA: 1: DAKIKA 40

Chagua jibu lifaalo zaidi kati ya yale manne uliyopewa kujazia mapengo 1-15.

Kamusi 1 kitabu 2 maneno yaliyopangwa 3 utaratibu 4 alfabeti na 5 maana na maelezo 6. Kwa 7, ili kupata neno kwa 8 katika Kamusi ni lazima mtu 9 mipangilio ya maneno 10 na alfabeti. Pili, lazima ajue neno 11 kwa usahihi jinsi linavyoandikwa au linavyoendelezwa. Tatu, kama ni kitenzi, ni lazima mtu ajue shina la kitenzi 12. Ni 13 kila mwanafunzi kujifua 14 ya kuitumia Kamusi ili 15 kujifunza mengi.

- |                    |             |               |                 |
|--------------------|-------------|---------------|-----------------|
| 1. A. na           | B. ya       | C. si         | D. ni           |
| 2. A. la           | B. wa       | C. cha        | D. za           |
| 3. A. na           | B. kwa      | C. kwenye     | D. ndani ya     |
| 4. A. cha          | B. za       | C. wa         | D. na           |
| 5. A. kutolewa     | B. kutoa    | C. kutia      | D. kutoesha     |
| 6. A. mengine      | B. vingine  | C. pengine    | D. mengine      |
| 7. A. hivyo        | B. haya     | C. hii        | D. hizo         |
| 8. A. rahisi       | B. urahisi  | C. umoja      | D. uharaka      |
| 9. A. Akujie       | B. Ajiue    | C. Ajue       | D. Aeleze       |
| 10. A. kutokana na | B. kuandama | C. kutoana na | D. kulingana na |
| 11. A. lenyewe     | B. yenyewe  | C. chenyewe   | D. zenyewe      |
| 12. A. hiyo        | B. hao      | C. hivyo      | D. hicho        |
| 13. A. vizuri      | B. mzuri    | C. mazuri     | D. nzuri        |
| 14. A. vile        | B. jinsi    | C. ambavyo    | D. hali         |
| 15. A. awe         | B. asije    | C. aweze      | D. asiweze      |

Kutoka swali la 16-30 chagua jibu sahihi.

16. Jua hutua upande wa \_\_\_\_\_  
A. mashariki.  
B. kusini  
C. kaskazini.  
D. magharibi
17. Kamilisha sentensi :  
Alisoma kwa bidii \_\_\_\_\_ hakupita mtihani vizuri.  
A. kwa sababu  
B. bila  
C. wala  
D. lakini
18. Sehemu iliyotiwa rangi huandikwaje kwa maneno  
\_\_\_\_\_
- |  |  |  |  |  |  |  |  |  |  |
|--|--|--|--|--|--|--|--|--|--|
|  |  |  |  |  |  |  |  |  |  |
|--|--|--|--|--|--|--|--|--|--|
- A. robo  
B. sudusu  
C. humusi  
D. thumuni
19. Mguu wangu ulipovunjika ulitiwa \_\_\_\_\_  
A. bendeji  
B. kitambaa  
C. machele  
D. plasta
20. Chagua kinyume cha mkate mweupe pepepe!  
A. Mkate mweusi tititi  
B. Mkate mweusi pepepe  
C. Mkate mweusi ndindindu.  
D. Mkate mweusi gubigubi.
21. Yafuatayo ni mazao ya shambani isipokuwa  
\_\_\_\_\_
- A. maharagwe  
B. mahindi  
C. mgomba  
D. mtama
22. Tumia - ote kwa usahihi  
Wakati \_\_\_\_\_ umeihisa.  
A. wote  
B. yote  
C. lote  
D. zote

23. Ninajisomea kitabu hii  
Ji imetumika kumaanisha nini?  
A. nasoma mwenyewe.  
B. mtu mwengine anasoma.  
C. nitamsomea mwengine.  
D. kuosma ni kwa wengine.
24. \_\_\_\_\_ hurekebisha kiwango cha sukari mwilini.  
A. Ufizi  
B. Figo  
C. Ini  
D. Moyo
25. Alipohisi uchovu wa njaa nyingi \_\_\_\_\_  
A. alipiga miguu  
B. alipiga miayo  
C. alipiga chafya  
D. alipiga mbio
26. Kanusha : Nimekuja kwako  
A. Sijaja kwako.  
B. Sikuji kwako.  
C. Sitakuja kwako.  
D. Siji kwako.
27. Ni kitendo kipi hakifanyiki shambani?  
A. Kupalilia  
B. Kuangua  
C. Kupanda  
D. Kukaanga
28. Rangi ya upinde iliyo chini kabisa ya upindi huwa ndiye gani?  
A. Samawati  
B. Urujuani  
C. Manjano  
D. Nyekundu
29. Ndege wanaowavutia watalii katika maziwa huitwa  
\_\_\_\_\_
- A. korongo  
B. Heroe  
C. kipanga  
D. mbayuwayu
30. Wingi wa ubeti ni \_\_\_\_\_  
A. beti  
B. mabeti  
C. mbeti

Soma taarifa ifutayo kisha ujibu maswali

31-40 yafuatayo

Hapo zamani za kale paliishi Sungura na Kobe.

Wanyamna hawa waliishi pamoja na wanyama wengine wa porini. Hakuna mnyama aliyemla mnyama mwengine.

Wote walikuwa wakila majani ya porini na nyasi.

Zingetokea nyakati fulani ambapo wanyama wangepanga mashindano ya muziki au mbio.

Baada ya kuishi kwa muda mrefu; sungura alimwambia kobe rafiki yake kwamba angependa kuo. Basi akaanza kumtafuta mchumba. Alitembea kote porini mpaka alipompata binti mzuri sana wa mflame.

Akampenda sana ingawa binti mwenyewe hakumpenda kwa sababu ya masikio yake marefu.

Basi alimwendea Kobe, rafiki yake wa chanda na pete. Akamwambia aende akazungumzia binti yule. Kobe alienda taratibu. Akamsalimu kwa heshima yule binti alimwona Kobe kuwa bora kuliko Sungura kwa sababu alifurahisha, akamfanya acheke sana hadi akalia. Alipoenda kwa mfalme alimwambia angependa kuolewa na Kobe. Mfalme naye aliipanga harusi kubwa ili mwana wake aolewe. Aliwaita wanyama wote waje kuhudhuria.

Harusi ilikuwa ya kufana, vyakula vya aina nyingi viliandaliwa, pamoja na sharubati ya matunda. Jambo hili lilimkasirisha sana Sungura hadi urafiki wao ukavunjika. Akaanza kutafuta njia ya kulipiza kisasi.

31. Hapo kale wanyama wote \_\_\_\_\_  
A. waliishi porini  
B. waliishi katika nyumba moja  
C. waliishi na watu  
D. waliishi mjini
32. Ni wanyama gani waliokula nyama?  
A. Simba  
B. Pundamilia  
C. Kobe  
D. Hakuna
33. Ni jambo gani linaloonyesha wanyama waliishi kwa furaha?  
A. Harusi za kila siku.  
B. Nyimbo na mashindano.  
C. Kula pamoja.  
D. Kuishi pamoja.

34. Chakula maalumu cha wanyama kilikuwa \_\_\_\_\_  
A. nyama  
B. miti  
C. matunda  
D. majani
35. Sungura na kobe \_\_\_\_\_  
A. hawakuwa wameoa.  
B. kobe alikuwa na familia.  
C. hakutaka kuo.  
D. walikuwa wajanja.
36. Sungura alitaka kumwoa nani?  
A. Binti Kifarū  
B. Binti ndovu  
C. Binti mfalme  
D. Bintiye Kobe
37. Msichana huyu hakumpenda sungura kwa nini?  
A. Mkia mkubwa  
B. Alikuwa mjanja  
C. Alikuwa mdogo  
D. Masikio makubwa
38. Binti mfalme alimpenda Kobe kwa sababu \_\_\_\_\_  
A. alikuwa mpole na alifurahisha.  
B. alikuwa na masikio madogo.  
C. alikuwa mkubwa sana.  
D. alikuwa mdanganyifu.
39. Mfalme alikuwa mwenye heshima kwa binti yake, kwa sababu \_\_\_\_\_  
A. alikataza ndoa.  
B. hakuifanya arusi.  
C. alikubali ombi la mwana wake.  
D. hakumwalika sungura.
40. Urafiki wa Sungura na Kobe ulivunjika lini?  
A. Sungura alipora.  
B. Kobe alipomwoa binti mfalme.  
C. Wote walipooa.  
D. Kobe alipokataa kuo.

Soma ufahamu huu kisha ubibu maswali

41- 50.

Shuleni ni mahali ambapo wanafunzi kutoka sehemu mbalimbali hukutana na walimu wao ili wapate kufundishwa. Katika shule, wanafunzi hufunzwa masomo mbali mbali kama vile Hisabati, Kiingereza, Kiswahili,

michezo yaani-kwata sanaa na uchoraji, muziki. Kifaransa na masomo ya tarakilishi katika shule nyingine.

Shule nyingi za umma zina wanafunzi wengi sana kuliko zile za kibinafsi. Watoto wanapokuwa shuleni hujifunza mengi kutoka kwa wenzao katika michezo na kadhalika. Wanafunzi hujifunza kukaa na wenzao. Kuwasubiri wenzao au kuchukua nafasi na pia wao hujifunza kujitegemea.

Walimu nao huwafundisha watoto tabia nzuri ambazo zitawasaidia katika maisha yao. Tabia hizi ni kama vile kutii au kujiheshimu mwenyewe na wakubwa wako. Hufunzwa jinsi ya kuishi na wenzao na pia kufanya mambo mengi.

Walimu huwafunza umuhimu wa usafi wao wa mwili, wa shule, nyumbani na mazingira yao. Wao huelewa kuwa mazingira machafu yaweza kuleta magonjwa mengi kama vile waba au kipindupindu. Pia walimu huwahimiza kuomba Mungu katika kila jambo. Mwanafunzi anapokuwa shuleni hujifunza pia kuikuza talanta aliyopewa na Mungu. Ni muhimu kwa kila mwanafunzi kujitahidi na kujifunza mengi anapokuwa shuleni.

41. Wanafunzi huenda shuleni \_\_\_\_\_
  - A. kutembea.
  - B. kupata marafiki.
  - C. kupata mafunzo.
  - D. kuimba tu.
42. Mwanafunzi akitaka kujua watawala mbalimbali atasoma somo lipi?
  - A. Hisabati
  - B. Masomo ya jamii
  - C. Sayansi
  - D. Kiswahili
43. Somo la Kifaransa na tarakilishi \_\_\_\_\_
  - A. hufunzwa katika shule zote.
  - B. hufunzwa katika shule za msingi.
  - C. halifunzwi kabisa.
  - D. hufunzwa katika shule nyingine.
44. Ni shule zipi zenye wanafunzi wengi?
  - A. Za umma
  - B. za kibinafsi
  - C. za msingi
  - D. za Sekondari

45. Mwanafunzi akijifunza kusubiri tunasema ana nini?
  - A. Uvumilivu
  - B. Werevu
  - C. Subira
  - D. Mzuri
46. Tabia nzuri wanazofunzwa na walimu zitawasaidia \_\_\_\_\_
  - A. siku zijazo
  - B. leo tu
  - C. shuleni tu
  - D. nyumbani tu
47. Mtu akitaka kuheshimiwa lazima \_\_\_\_\_
  - A. awe mkali
  - B. awe mwerevu
  - C. akasirike
  - D. awaheshimu wenzake
48. Mtu aweza kupata kipindupindu akifanya nini?
  - A. Akikosa kwenda shule
  - B. Akiwa mchafu
  - C. Akiendelea kula
  - D. Asiposoma kwa bidii
49. Ipi si talanta kati ya hizi?
  - A. Kukimbia
  - B. Wizi
  - C. Uimbaji
  - D. Uchoraji
50. Mwanafunzi anapokuwa shuleni \_\_\_\_\_
  - A. anafaa kujua machache.
  - B. anafaa kufunzwa na mwalimu tu.
  - C. anafaa kuwa mvivu.





# STEGA SERIES - STD 4

## MARKING SCHEME 2014

<u>ENGLISH</u>		<u>KISWAHILI</u>		<u>MATHS</u>		<u>SCIENCE</u>		<u>SOCIAL STUDIES</u>		
1. B	31. C	1. D	31. A	1. B	31. C	1. D	31. C	1. B	31. A	61. B
2. D	32. A	2. C	32. A	2. B	32. C	2. B	32. D	2. D	32. B	62. D
3. D	33. C	3. B	33. B	3. C	33. A	3. A	33. B	3. A	33. C	63. B
4. A	34. C	4. C	34. D	4. A	34. D	4. C	34. A	4. B	34. D	64. A
5. C	35. A	5. A	35. A	5. D	35. C	5. B	35. C	5. A	35. A	65. C
6. B	36. B	6. D	36. C	6. C	36. B	6. B	36. C	6. B	36. C	66. D
7. D	37. C	7. A	37. D	7. D	37. C	7. C	37. C	7. A	37. D	67. B
8. A	38. D	8. B	38. D	8. A	38. D	8. D	38. D	8. D	38. B	68. A
9. D	39. A	9. C	39. C	9. B	39. C	9. A	39. B	9. C	39. A	69. D
10. A	40. C	10. B	40. B	10. D	40. D	10. A	40. A	10. B	40. C	70. A
11. B	41. D	11. A	41. C	11. D	41. B	11. B	41. B	11. C	41. B	71. B
12. A	42. B	12. D	42. B	12. C	42. B	12. C	42. B	12. D	42. C	72. C
13. D	43. B	13. A	43. D	13. D	43. A	13. A	43. C	13. A	43. D	73. D
14. C	44. D	14. B	44. A	14. A	44. D	14. D	44. A	14. B	44. C	74. A
15. A	45. A	15. C	45. C	15. A	45. C	15. D	45. C	15. C	45. A	75. C
16. B	46. D	16. D	46. A	16. B	46. A	16. B	46. C	16. A	46. D	76. B
17. D	47. C	17. D	47. D	17. D	47. A	17. B	47. C	17. B	47. C	77. A
18. C	48. A	18. B	48. B	18. B	48. C	18. A	48. B	18. C	48. B	78. D
19. B	49. C	19. D	49. B	19. C	49. D	19. B	49. C	19. D	49. C	79. C
20. A	50. A	20. A	50. D	20. C	50. A	20. C	50. A	20. D	50. D	80. D
21. D		21. C		21. A		21. D		21. B	51. B	81. A
22. C		22. A		22. B		22. B		22. A	52. C	82. B
23. B		23. A		23. C		23. C		23. C	53. D	83. C
24. A		24. C		24. D		24. B		24. B	54. A	84. D
25. C		25. B		25. B		25. D		25. C	55. C	85. C
26. D		26. A		26. B		26. A		26. A	56. D	86. C
27. B		27. D		27. C		27. D		27. B	57. A	87. A
28. B		28. B		28. C		28. C		28. C	58. B	88. C
29. B		29. B		29. A		29. B		29. D	59. D	89. B
30. A		30. A		30. B		30. B		30. A	60. A	90. D

### A COMPOSITION MARKING SCHEME

#### MARKING CRITERION

1. The composition will be assessed according to the following guidelines.

- The maximum mark will be 40 and the minimum (mark 01)

- Does the script show that the candidate can communicate accurately, fluently and imaginatively in English?

#### Accuracy (8 marks)

a) Correct tenses and agreement of verbs (4 marks)      b) Accurate use of vocabulary (4 marks)

(16) c) Following a sequence (4 marks)

d) Correct punctuation (4 marks)

#### Fluency (8 marks)

a) Words in the correct order (4 marks)

b) Sentence connection and paragraphs (4 marks)

c) Correct spelling (4 marks)

d) Ideas developed in logical sequence (4 marks)

#### Imagination (8 marks)

a) Unusual but appropriate use of words and phrases (4 marks)