

Choose the alternative that is correctly punctuated.

16. A. What a great day that was?
B. They enjoyed basking in the sun. Don't they?
C. "Come here? The teacher said.
D. Edwin doesn't play soccer.

For question 17 fill the blank spaces with the correct order of adjectives.

17. Shirleen wore a _____ jacket.
A. black, smart, leather B. smart, black, leather
C. leather, smart, black D. leather, black, smart

Choose the best alternative to replace the words underlined.

18. The meeting was **put off** because some members were away.
A. jumped B. postponed C. delayed D. stopped
19. The people who came to watch the game cheered loudly.
A. spectators B. team C. congregation D. crowd

Choose the best question tag to complete the blank spaces

20. Let us go for break, _____?
A. won't we? B. isn't it?
C. shall we? D. shan't we?
21. You won't go, _____
A. would you? B. will you?
C. shan't you? D. won't you?

For questions 22 and 23 choose the best arrangement of the given sentences to make a logical and sensible paragraph

22. (i) the women woke up at dawn
(ii) to go and sell their produce
(iii) being a market day
(iv) and trodded through the dusty road
A. (i), (ii), (iii), (iv) B. (iii), (i), (iv), (ii)
C. (i), (iv), (ii), (iii) D. (i), (ii), (iii), (iv)
23. (i) I realized I had left my bag
(ii) There was pin-drop silence when I got to class
(iii) Everybody stared at me weirdly
(iv) The lesson had already started
A. (iv), (ii), (i), (iii) B. (ii), (iii), (i), (ii)
C. (iii), (i), (ii), (iv) D. (ii), (iv), (iii), (i)

For questions 24 to 25, choose the word that means the same as the underlined word in the given sentences

24. If the rain continue like this there will be a disaster.
A. misfortune B. tragedy
C. accident D. danger
25. When she got to the kitchen, Maureen found her washing cups, glasses, plates and saucer.
A. utensils
B. cutlery
C. crockery
D. necessities

Read the following passage carefully and answer questions 26 to 38.

A long time ago, goat and leopard were great friends. They lived together and shared everything. They gave birth to bouncing baby girls at the same time. One day, leopard and goat were invited to visit leopard's family in a far away place. The next day at dawn, they set out for the journey.

Leopard had packed a basket and nearly covered it. When it was goat's turn to carry the heavy basket, she wondered what was in it. When leopard went to relieve herself, goat looked into the basket. Alas! It was her kids in the basket! She could not believe it. "I am carrying my own kids in the basket. My own blood?" Goat wondered.

She came up with a plan and decided to continue with the journey. After the two friends had travelled for some time, goat said she wanted to relieve herself. Goat went to the bush and stayed for long. When goat came back, leopard asked her why she had stayed for long. Goat lied that she had a serious diarrhoea. They continued with the journey and moved at a faster pace. All this time goat was thinking of what to do since she did not know how long the journey would take. Goat said that she wanted to relieve herself again.

Once more, goat disappeared into the bush claiming to have another bout of diarrhoea. As soon as leopard had gone far. Goat grabbed the basket and ran back home as fast as her legs would carry her. She removed her kids and put leopard's cubs in the basket. She then ran fast to catch up with leopard.

"Your stomach is horrible. Lets hope it will heal," Leopard told her.

leopard's turn to carry the load, goat volunteered to carry it even longer. She sensed that leopard would detect the change in weigh of the basket's contents and ask what happened.

They arrived and were welcomed warmly. Goat excused herself saying she had stomach problems again. A large pot of water was boiling to prepare a meal that leopard had promised to bring along. The host were directed to throw the contents of the basket into the boiling water.

They wailed when the saw leopard's children boil. They grabbed leopard, whipped her and sent her away. Leopard went hoe and found goat had packed her belongings and left. She cried all night until she could cry no more. She decided to go and search for goat in order to revenge. Ever since, leopard search for goats to repay her bad deeds.

26. Which statement is NOT true?

- A. Goat and leopard were not great friends
- B. The two animals lived together
- C. The two animals shared everything
- D. This story happened long time ago

27. Goat gave birth to a baby girl and leopard gave birth to a _____

- A. baby boy
- B. baby girl
- C. baby goat
- D. bouncing baby boy

28. What time did the friends start their journey?

- A. At sunset
- B. Later in the evening
- C. Early in the morning
- D. At midday

29. At what point did goat look into the basket?

- A. When she went to relieve herself –
- B. As the two friends were walking
- C. When leopard came to relieve goat
- D. When leopard went to relieve herself

30. Why did goat look into the basket?

- A. Goat was curious
- B. Goat knew her children were inside
- C. Leopard told him to
- D. It was part of a joke

31. When goat said she had a serious diarrhoea, was she telling the truth?

- A. Yes
- B. No
- C. Of course
- D. We are not told

32. What did goat find in the basket?

- A. Meat
- B. Leopard's children
- C. A lot of blood
- D. Her children

33. How did goat go back home?

- A. She hurried home
- B. She drove very fast
- C. She went slowly
- D. She ran lazily

34. The young one of a goat is a kid, what do we call the young one of a leopard?

- A. Cub
- B. Leopardess
- C. Lamb
- D. Kitten

35. "Lets hope it will heal." Who said these words?

- A. Goat
- B. Leopard
- C. The mother
- D. The stomach

36. Why did goat volunteer to carry the basket even longer?

- A. She was strong
- B. Leopard was very tired
- C. Because leopard might notice the change in basket's weight
- D. The basket was not heavy at all

37. How were goat and leopard welcomed when they arrived?

- A. Sadly
- B. Happily
- C. Angrily
- D. By being whipped

38. The word "hosts" has been used in the passage. What is the opposite?

- A. Hostess
- B. Hoster
- C. Guests
- D. Animals

Read the following passage carefully and answer questions 39 to 50.

Different people have different ideas about same thing. Conflict is a natural part of human life. Poor conflict resolution skills can damage a person's relationships, academic record, career and health and can lead to trouble with the law. The end result of a conflict can vary greatly, depending on how you respond to it. There are different ways people handle conflict and other's reaction to them.

Some people prefer to avoid the problem they have. People hope that conflict will go away by itself. They tend to ignore it. Minimize it or pretend it doesn't exist. But instead the conflicts grows until it reaches boiling point. Some people are annoyed when an important issue is ignored. They think the person avoiding the problem is a coward or just doesn't care. Some people feel hurt because important issues are not addressed.

TRIAL SERIES

DARASA LA SABA MUHULA WA TATU - 2014

PENPLUS
NPS-3

KISWAHILI

Muda: Saa 1 Dakika 40

JINSI YA KUTUMIA KARATASI YA MAJIBU

1. Tumia penseli ya kawaida.
2. Hakikisha umeandika kwa karatasi ya majibu:
(I) JINA LAKO (II) JINA LA SHULE YAKO
3. Kwa kila swali onyesha jibu sahihi kwa kuchora kistari katika kisanduku chenye herufi uliyochagua kuwa ndiyo jibu.

Chagua jibu mwafaka kwa yale uliyopewa kujazia nafasi zilizoachwa.

Vifaa 1 vilikuwa ni 2 na 3 au "maski" kengeze na ngoma. 4 5 ziliamini kwamba sura mbalimbali zilizofanywa kwa "maski" kama 6 kwa midomo au kusumbuliwa 7 zingetemesha pepo 8 na kuwatimua mbio.

Kanisa 9 Kikatolili kabla ya majilio ya 10, lilitumia kengeze maalum wakati wa 11 ili 12 mapapo.

Miongoni 13 makabila mengi ya 14, ngoma maalum ziliandaliwa kwa 15 ya kukabiliana na pepo.

- | | | | |
|------------------|--------------|---------------|-----------------|
| 1. A. hiyo | B. hivyo | C. hizo | D. hii |
| 2. A. ppa | B. sawa | C. kama | D. pamoja |
| 3. A. bakora | B. barakoa | C. baruti | D. baiskeli |
| 4. A. jakom | B. jamii | C. nyamaume | D. jamaa |
| 5. A. nyingine | B. ingine | C. kingine | D. zingine |
| 6. A. kukatwa | B. kushonwa | C. kusemwa | D. kubebeduliwa |
| 7. A. kwazo | B. kwao | C. kwayo | D. kwalo |
| 8. A. wabaya | B. mbaya | C. mrefu | D. baya |
| 9. A. ya | B. wa | C. mwa | D. la |
| 10. A. wazee | B. ukale | C. ustaarabu | D. umati |
| 11. A. visa | B. mechi | C. ndoto | D. misa |
| 12. A. kuogofya | B. kuonyesha | C. kuogopesha | D. kunyonyesha |
| 13. A. ya | B. za | C. mwa | D. cha |
| 14. A. Afrika | B. Kiafrika | C. Kiafrika | D. Kinafrika |
| 15. A. madhumuni | B. makosa | C. maneno | D. upeo |

Chagua jibu sahihi kwa maswali 16-30.

16. Kati ya maneno yafuatayo ni lipi kisawe cha zaraa:-
A. kizaazaa B. kilimo
C. kiota D. kipindi
17. Mfanyakazi wa kiume hujulikana kama mtwana, je
, wa kike naye hujulikana kama _____
A. mjakazi B. mbosh
C. mmaid D. mpishi
18. "Po" imetumikaje katika sentensi ifuatayo?
Nilipompata Mwasa hapakunipendeza.
A. wakati B. kuendelea
C. sifa D. mahali
19. **Tumia jawabu sahihi.**
Ni mkalimani _____ ametafsiri kwenye ibada ya leo.
A. mgani B. mpi C. gani D. ipi
20. "Adui mpende" ni semi iliyo katika sehemu gani ya lugha?
A. Msemo B. Methali
C. Tashbihi D. Takriri
21. Kati ya nchi zifuatazo, ni ipi iliyo Kaskazini mwa Kenya?
A. Uganda B. Tanzania
C. Uhabeshi D. Usudani
22. **Kamilisha nomino ambata ifuatayo.**
_____ sanda.
A. Mpasua B. Mwana C. Maiti D. Askari
23. **Chagua jawabu mwafaka**
Seremala amejenga dari _____
A. mzuri B. nzuri C. zuri D. pazuri
24. **Andika wingi wa:-**
Wizara hiyo imepewa mamlaka serikalini.
A. Mawizara haya yamepewa mamlaka serikalini
B. Mawizara hayo yamepewa mamlaka maserikalini
C. Wizara hizo zimepewa mamlaka maserikalini
D. Wizara hizo zimepewa mamlaka serikalini

25. Chagua kivyumishi katika sentensi ifuatayo.

- Ubwabwa wote umeliwa na Nyambura fyu.
A. fyu
B. umeliwa
C. ubwabwa
D. wote
26. Chagua viambishi sahihi kukamilisha sentensi ifuatayo.
Ng'ombe _____ Gikubu _____ mechinjwa _____ te.
A. za, zi, zo
B. wa, wa, wo
C. ya, i, yo
D. ya, i, wo
27. Kati ya viakifisho vifuatavyo ni kipi paradesi?
A. : B. ()
C. ; D. -
28. **Chagua kisawe cha neno lililopigiwa mstari.**
Ni bei ghali kununua jirafu.
A. friji B. twiga
C. ndege D. meli
29. **Kanusha:**
Kungetifuliwa kungepandwa mbegu.
A. Kusingalimwa kusingalipandwa mbegu
B. Kusingelimwa kusingelipandwa mbegu
C. Kusingalimwa kusingepandwa mbegu
D. Kusingelimwa kusingepandwa mbegu
30. **Andika ukubwa na wingi wa:-**
Ngamia mrefu ameumwa na mbwa mweupe
A. Majingamia marefu yameumwa na majibwa meupe
B. Ngamia warefu wameumwa na mbwa weupe
C. Magamia marefu yameumwa na majibwa meupe
D. Ngamia mrefu ameumwa na mbwa weupe

Soma ufahamu ufuateo kisha ujibu maswali 31-40.

Sarakasi inayoendelea ya viongozi wa Migori kupiga kambi jijini Nairobi wakitaka kukutana na Rais inasikitisha na kuibuia maswali mengi. Viongozi wa kaunti hiyo wakiongozwa na gavana Okoth Obado wanasemekana kulala jijini Nairobi mnano Jumatano, wakisubiri fursa ya kumwona Rais Uhuru Kenyatta wamwombe radhi ana kwa ana.

Wajumbe hao zaidi ya 400 walibebwa kutumia mabasi ya shule za upili na vyuo vya elimu katika kaunti hiyo. Istitoshe kuna madai kuwa walilipwa angalau Sh 7000 kila mmoja.

Kama madai hayo ya kulipwa ni ya kweli au la, muhimu ni kuwa Bw. Obado na wenzake wanafanya mambo yaliyo kinyume kabisa na lengo la ugatuzi. Wakenya walipotaka kuwe na uongozi wa kaunti, walitaka wapewe huduma muhimu kwa wakati ufaao. Kama Bw. Obado na msafara wake walienda Nairobi, ni nani anayewahudumia wakazi katika kaunti? Pili, magari ya shule na vyuo hayahitajiki kwa shughuli muhimu za kimasomo?

Siku ambapo kulizuka **rabsha** kwenye mkutano wa Rais, bila shaka viongozi hao **walimwomba radhi**. Kama hawakutosheka na kuomba radhi huko, Bw. Obado angempigia simu rais ama asubiri wakati mwingine atakapokuwa na ziara katika eneo hilo la Nyanza.

Kuna hoja gani ya kusafiri hadi Nairobi ili kumwomba radhi tena? Viongozi ambao hutumia muda wao mwingi wakizunguka huku na kule ndio wanaofanya wakenya wahisi kwamba hakuna umuhimu wa kusambaza pesa za kutosha mashinani.

Mwito wa sasa wa pesa mashinani hutenda usiwe na umuhimu, kama pesa zitakazopelekwa mashinani zitatumiwa kwa njia hii. Bw. Obado na wanasiasa wengine wanapaswa kujua kuwa kufanya kazi na serikali kuu hakumaanishi kuwa watu watakuwa wanafunga safari za kwenda Ikulu kila siku. Kushirikiana na serikali ni kuchapa kazi bila siasa duni.

31. Kitendo ambacho si cha kawaida kinachoendelea ni _____

- A. viongozi kupiga kambi Migori
- B. wajumbe kufanya sarakasi Nairobi
- C. viongozi kumwuliza Rais maswali mengi
- D. viongozi wa Migori kupiga kambi jijini kuu

32. Wakisubiri fursa ya kumwona Rais Uhuru Kenyatta Lipi si kisawe cha neno subiri

- A. ngojera
- B. kasirika
- C. stahimili
- D. vumilia

33. Wajumbe hao waliosafirishwa mjini Nairobi wote walilipwa angalau hela ngapi?

- A. 400
- B. 11000
- C. 28000
- D. 7000

34. Ni jambo lipi kulingana na aya ya nne ambalo Bw. Obado na wenzake wanalofanya kinyume na lengo la ugatuzi?

- A. Kulipwa fedha wasizostahili
- B. Kubebwa na mabasi ya vyuo vya elimu
- C. Kwenda mjini kumwona Rais
- D. Kupiga kambi mjini

35. Anayeongoza taifa huitwa rais, kama vile kiongozi wa kaunti huitwa _____

- A. makamu
- B. gavana
- C. mwanasiasa
- D. naibu

36. Mtu anapoomba radhi, inamaanisha:-

- A. anaomba ruhusa
- B. anahitaji msaada
- C. anaomba msamaha
- D. anataka kusaidiwa

37. Viongozi ambao wanafaa ni wale _____

- A. wanaozunguka huku na kule wakizua rabsha
- B. wanaotumia muda wao mwingi kwenda Ikulu
- C. wanaowajibika katika majukumu yao kule mashinani
- D. wanawasafirisha wakazi wa kaunti zao hadi mjini Nairobi

38. Kwa nini mwito wa pesa mashinani usiwe na umuhimu wowote?

- A. Wanasiasa hawahitaji pesa hizo
- B. Wakenya wanahisi hakuna umuhimu wa kusambaza pesa mashinani
- C. Viongozi wanafuja mali ya umma badala ya kuwasaidia wakenya
- D. Uchumi wa nchi yetu umeenda chini zaidi

39. Ni methali gani inayoweza kutumika kuwatahadharisha wakenya dhidi ya viongozi wabaya?

- A. Nazi mbovu harabu ya nzima
- B. Mchagua jembe si mkulima
- C. Ukistaajabu ya Musa utayaona ya Firauni
- D. Kitanda usichokilalia hujui kunguni wake

40. Makala haya hayatuhimizi _____

- A. kushirikiana na viongozi wetu ili kuleta maendeleo
- B. kuwaonya na kuwashauri wanaozua rabsha vijijini mwetu
- D. kuchapa kazi bila siasa duni
- D. kutoa vurugu mashinani ili kupata fursa ya kwenda mjini Nairobi

Soma kifungu hiki kisha ujibu maswali 41-50.

Ni mwaka mmoja baada ya kutokea kwa shambulizi la Westgate na huku wakenya wakijiunga na familia zilizoathirika katika mkasa huo.

Nyingi za familia zilizopoteza jamaa zao na nyingine kuhasiriwa na majeraha, zinaonekana kukubali athari za mkasa huo licha ya kuwa uchunguzi unaoendeshwa na serikali haujatolewa kufikia sasa.

Ripoti ya shambulizi la Westgate iliyoandaliwa na mbunge ilipuuziliwa mbali. Wabunge wenyewe waliipuuzilia mbali licha ya kuahidi serikali kufanya uchunguzi wa kina kuhusu mkasa huo. Watu zaidi ya sitini waliyapoteza maisha yao.

Ukweli mchungu ni kuwa idara za usalama nchini ikiwemo idara ya kitaifa ya ujasusi, jeshi na polisi zilishindwa kutumia mafunzo yake kudhihirisha uwezo wake wa kulinda wakenya.

Katika filamu iliyotengenezwa na wanahabari wa kigeni na ambayo inasambazwa katika mtandao ni wazi saa moja, baada ya kutokea kwa shambulizi hilo wanajeshi walikuwa bado "wanajitayarisha." Hii ilikuwa inatendeka nje ya jumba hilo licha ya watu zaidi kushikwa mateka na wengine kuuawa humo.

Filamu hiyo, kupitia kwa kanda za video zilizonaswa na kamera inaonyesha jinsi magaidi hao walivyotekeleza unyama huo. Walifanya hivyo bila haraka huku maelfu ya wanajeshi na polisi wakiwa nje ya jumba hilo bila kufanya chochote kwa muda mrefu.

Maelezo ya iwapo magaidi waliohusika waliuawa bado ni kitendawili. Kama waliuawa mbona inachukua mwaka mzima kufanyia miili yao uchunguzi ili kubaini uraia wao?

Ukweli pekee ambao wakenya wanafahamu ni kuwa lilikuwa shambulizi la kigaidi lililotekelezwa na kundi la Alshabaab. Serikali ya Jubilee ina rasilimali za kutosha kupambana na ugaidi na visa vingine vya utovu wa usalama iwapo itaweka siasa nyumba. Aidha kuchukulia jukumu lake kwa uzito zaidi. Usalama wa raia lazima uwekwe mbele.

- | | |
|--|--|
| <p>41. Shambulizi la Westgate lilitekelezwa na _____
A. majangili B. wezi C. majambazi D. wadokozi</p> <p>42. Familia zilizopoteza jamaa zao _____
A. zinaonekana kuathirika
B. zinakubali hasara ya mkasa huo
C. zinazidi kulalamikia serikali
D. zinaendeleza uchunguzi</p> <p>43. Jambazi anaweza tumia silaha za kisasa ila _____
A. bastola B. sime C. kombora D. bomu</p> <p>44. Jasusi ni mtu anayefanya kazi gani?
A. Kupeleleza nje ya nchi yake kwa niaba ya nchi yake
B. Anayetumwa na adui kuisaliti nchi yake
C. Anajitolea kufa kwa ajili ya nchi yake
D. Anayefanya biashara na kutajirika kwa njia haramu</p> <p>45. Sentensi "Wanajeshi walikuwa bado wanajitayarisha" Hii sentensi ina maana kuwa:-
A. walikuwa wanjihami vilivyo
B. wanajeshi walikuwa wanawavamia magaidi
C. walikuwa wanavaa sare zao na kubeba silaha zao
D. walikuwa wanafanya shughuli zao polepole wakihepa kushambulia magaidi</p> | <p>46. Kwa nini magaidi walitekeleza unyama wao bila haraka?
A. Walikuwa na muda mwingi
B. Walikosa njia ya kutorokea
C. Wanajeshi na polisi walikuwa nje ya jumba
D. Serikali ilikuwa mbali nao</p> <p>47. Maelezo ya iwapo magaidi waliohusika
Neno iwapo ni mfano wa:-
A. kiunganishi B. kielezi
C. kivumishi D. kiashirishi</p> <p>48. Serikali ya Jubilee ina jukumu gani?
A. Kupambana na ugaidi tu
B. Kutilia maanani vita dhidi ya ugaidi na visa vingine vya utovu wa usalama
D. Kuwafukuza Alshabaab
D. Kulinda jumba la Westgate</p> <p>49. Mtu aliyefiwa huambiwa maneno gani?
A. Pole B. Samahani
C. Usilie D. Makiwa</p> <p>50. Kichwa kifaacho zaidi cha ufahamu huu ni:-
A. Ubingwa wa magaidi
B. Vita vya wanajeshi
C. Shambulizi la Westgate
D. Serikali ya Jubilee</p> |
|--|--|

TRIAL SERIES

STD 7 - END TERM 3 - 2014

**PENPLUS
NPS-3**

MATHEMATICS

READ THESE INSTRUCTIONS CAREFULLY

Time: 2 Hrs

- Use only an ordinary pencil.
- Make sure that you have written on the answer sheet:-
(I) YOUR NAME (II) NAME OF YOUR SCHOOL
- For each question show the correct answer by drawing line in the brackets in which the letter you have chosen is written.

1. What is two million, five hundred and fifty five in figures?

- A. 200555 B. 2000555
C. 2005055 D. 2505005

2. What is the value of

$$\frac{(6^2 - 4^2) - 10}{7 - 5}$$

- A. 36 B. 8
C. 16 D. 14

3. What is 6.59954 written correct to three decimal places?

- A. 6.6 B. 6.599
C. 6.60 D. 6.600

4. What is the L.C.M of 18, 12, 36?

- A. 72 B. 6 C. 24 D. 48

5. What is the place value of digit 7 in the product of 36 and 27?

- A. Tens B. Hundreds
C. Ones D. Tenths

6. Mama Kabura bought the following goods:

2kg of Unga @ Sh 40.00

1 loaf of bread @ Sh 45.00

4kg of sugar @ Sh 100.00

1kg of meat @ Sh 400.00

How much money did she give to the shopkeeper if she received a change of Ksh 100?

- A. Sh 75 B. Sh 925
C. Sh 1000 D. Sh 1025

7. What is the value of x in the equation?

$$\frac{5}{6}x - 7 = 13$$

- A. $7\frac{1}{5}$ B. 4 C. 24 D. 20

8. The perimeter of a square is 56cm. What is its area?

- A. 784cm² B. 196cm²
C. 14cm² D. 3136cm²

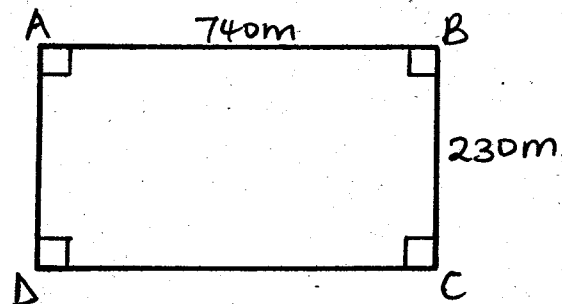
9. Write the following fractions from the largest to the smallest. $\frac{3}{5}, \frac{5}{8}, \frac{7}{12}$

- A. $\frac{3}{5}, \frac{7}{12}, \frac{5}{8}$ B. $\frac{5}{8}, \frac{7}{12}, \frac{3}{5}$
C. $\frac{7}{12}, \frac{3}{5}, \frac{5}{8}$ D. $\frac{5}{8}, \frac{3}{5}, \frac{7}{12}$

10. Construct a triangle PQR whose PQ = PR = 6cm and QR = 4cm. Bisect QR and name this point T. Join T to P. Measure angle QPT.

- A. 90° B. 70°
C. 160° D. 20°

11. How many fencing posts, spaced 5m apart are required to fence the plot below?



- A. 186 B. 389 C. 388 D. 187

12. Moses bought a pair of shoes for Sh 810 after getting a discount of 10%. What was the marked price of the pair of shoes?

- A. Sh 900 B. Sh 81
C. Sh 729 D. Sh 891

13. What is the median of the following numbers?

20, 17, 21, 15, 21, 22

- A. 21 B. $19\frac{1}{3}$
C. $20\frac{1}{2}$ D. 18

14. What is $\frac{3}{5}$ written as a ratio?
 A. 3:2 B. 2:3 C. 3:5 D. 5:3

15. What is the value of:-

$$\frac{0.5 + 0.2}{0.7}$$

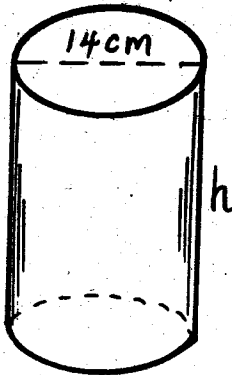
- A. 0.7 B. 1 C. 7 D. 2
16. Kamau had 3 one thousand shilling notes, 6 five hundred shilling notes, 5 two hundred shillings notes and 4 one hundred shilling notes. He changed the money into fifty shillings note. How many notes altogether did he get?

- A. 7400 B. 3500
 C. 140 D. 148

17. A map is drawn using the scale 1cm represents 50km. A river which is 1250km long is drawn on this map. What is the length of the river on the map?

- A. 25cm B. 25km
 C. 250cm D. 250km

18. The volume of a cylinder is 1540cm^3 . If the cylinder has a diameter of 14cm, what is its height?

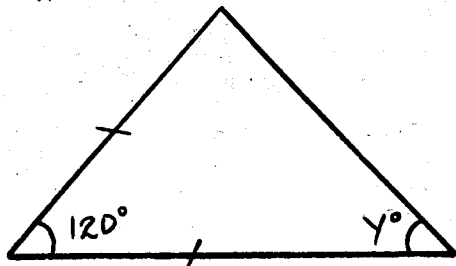


- A. 36cm B. 220cm
 C. 15cm D. 10cm

19. Simplify: $5(7 - 3e) + 3(9e + 2)$

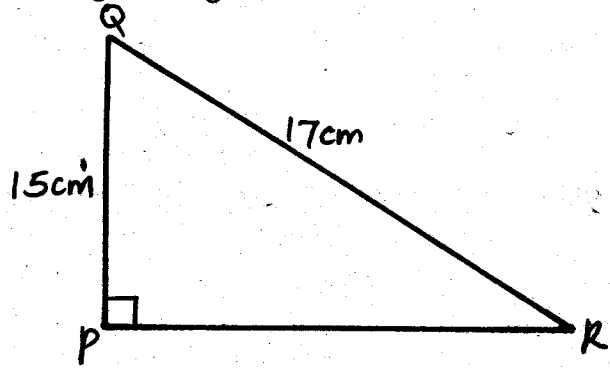
- A. $26 + 12e$ B. $29 + 12e$
 C. $35 + 42e$ D. $41 + 12e$

20. Find the measure of angle y.



- A. 120° B. 60°
 C. 30° D. 40°

21. What is the measurement of line PR in the right angled triangle below?

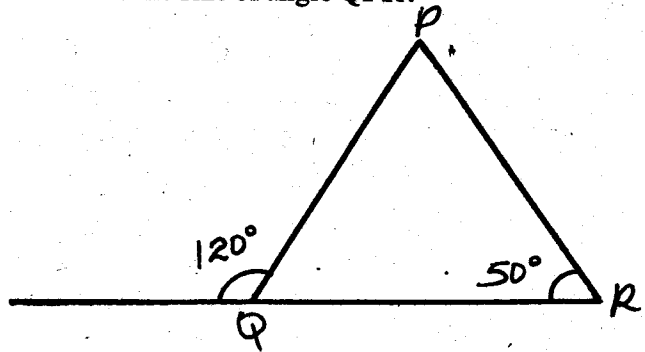


- A. 8cm B. 13cm
 C. 225cm D. 289cm

22. For every three mangoes Mwangi has ????? Jane has two. Wanjiru has five less than Jane. If Mwangi has twelve mangoes, how many mangoes does Wanjiru have?

- A. 12 B. 3 C. 5 D. 4

23. What is the size of angle QPR?

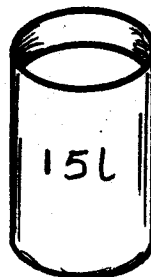


- A. 60° B. 130°
 C. 70° D. 170°

24. Gatuku is paid Sh 3750 after working for 25 days. How much money would he be paid if he does not work for 4 days?

- A. Sh 4464 B. Sh 4350
 C. Sh 3150 D. Sh 600

25. How many of the 150ml containers will fill 15 litre containers?

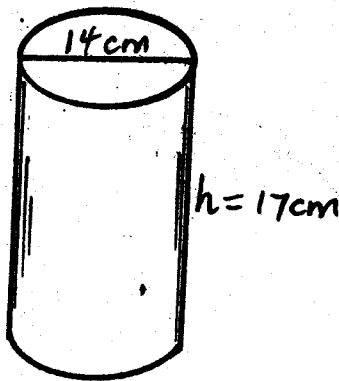


- A. 10 B. 100
 C. 1000 D. 10000

26. Increase Sh 40 by 20%
 A. Sh 48 B. Sh 32 C. Sh 50 D. Sh 24
27. The distance between two stations is 840km. A matatu takes 10 hrs. What is its speed in km/hr?
 A. 148km/hr B. 108km/hr C. 10km/hr D. 84km/hr
28. If $a = 3$, $b = 4$, and $c = b - a$, find the value of:-

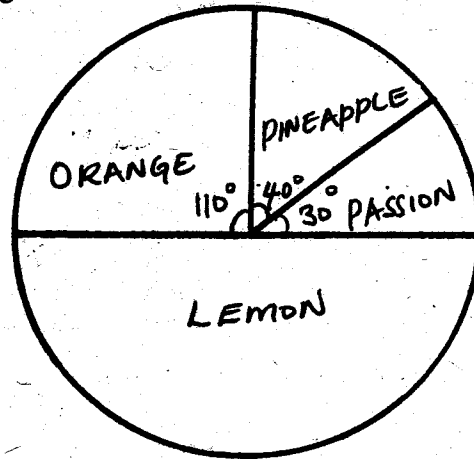
$$\frac{2a + 3ab}{abc}$$

- A. 2.5 B. 42 C. 3.5 D. 12
29. What is the surface area of a cylindrical container of height 17cm and diameter 14cm?
 (Take $\pi = \frac{22}{7}$)



- A. 748cm^2 B. 1056cm^2
 C. 2728cm^2 D. 902cm^2
30. Find the value of:
- $$\frac{7\frac{1}{2} \times 1\frac{1}{2} + 1\frac{1}{4}}{2\frac{1}{2}}$$
- A. 5 B. $12\frac{1}{2}$ C. $15\frac{1}{2}$ D. 10
31. Waweru bought 50 bananas @ Sh 3 each. He paid Sh 75 for transportation. During transportation, 5 bananas got spoilt but she sold the rest @ Sh 5 each. How much profit did he make?
 A. Sh 475 B. Sh 25
 C. Sh 250 D. Sh 225

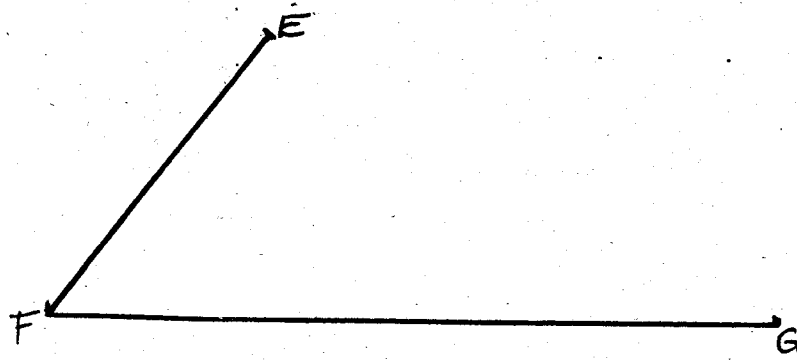
33. Karanja left Mombasa on Tuesday at 6.30 pm. He took 8 hrs and 45 minutes to reach home. At what time did he reach home?
 A. 3.15 am Tuesday B. 3.15 am Wednesday
 C. 15.15 am Tuesday D. 1525 hrs Wednesday
34. The pie chart below represents juice production in Engineer town in 2014.



If the production of juice was 3,600,000 litres, how much more litres of pineapple juice were produced than the passion juice?

- A. 300000 l B. 400000 l
 C. 700000 l D. 100,000 l
35. A car is travelling at 25m/s. What is this speed in kilometres per hour?
 A. 80km/hr B. 60km/hr C. 40km/hr D. 90km/hr
36. What is the next number in the sequence below?
 2, 5, 11, 23, _____
 A. 47 B. 33 C. 46 D. 45
37. A loaded lorry weighs 5 tonnes. The mass of maize 100kg bag and 100kg of beans per bag. It carried 20 bags maize. How many bags of beans did it carry?
 A. 70 bags B. 20 bags C. 30 bags D. 40 bags

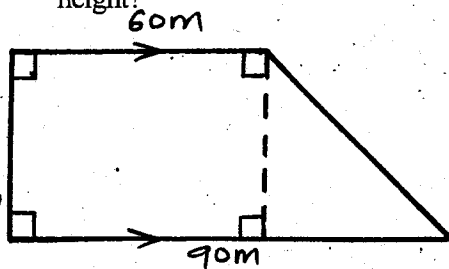
32. Two sides of a parallelogram EFGH have been drawn below. Complete the parallelogram EFGH. Draw diagonals EG and FH to intersect at J.



What is the length of line FJ?

- A. 6.5cm B. 3.2 cm C. 13.5 cm D. 4cm

38. The area of the figure below is 3000m^2 . Find the height?

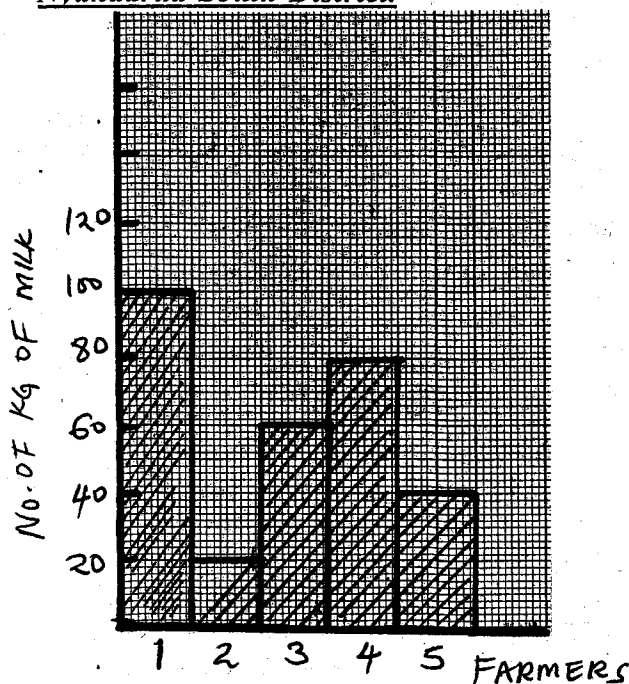


- A. 50m
B. 40m
C. 40m^2
D. 50m^2

39. The sum of Joe's and his wife ages now is 70 years. What will be the means of their ages in 10 years time?

- A. 80 B. 45 C. 40 D. 35

Use the bar graph below to answer questions 40 and 42. The graph shows the numbers of kilograms of milk produced by five farmers in Nyandarua South District.



40. Find the total weight of milk produced by five farmers.
- A. 200kg B. 250kg C. 400kg D. 300kg
41. What is the average production of milk produced by five farmers?
- A. 50kg B. 40kg C. 60kg D. 30kg
42. What is the difference in production of milk between the highest and the lowest farmer?
- A. 40kg B. 60kg C. 80kg D. 20kg
43. The hire purchase price of a radio was Sh 8,500. Waithuki bought the radio by paying a deposit of Sh 2500 and the balance on six equal monthly installments. What was the monthly instalment?
- A. Sh 1000 B. Sh 1200 C. Sh 3000 D. Sh 2500

44. Six men can weed a farm in eight days. Four men can do the job in how many days?

- A. 8 days B. 4 days
C. 10 days D. 12 days

45. On a map the scale used is 1:10,000. A rectangular field is 3cm by 5cm. Find the area of the field drawn on the map in hectares.

- A. 1500 ha B. 150 ha C. 15 ha D. 0.5 ha

46. A saving society earned an interest of Sh 11,250. If it had 25 members, how much interest did each one get?

- A. Sh 400 B. Sh 450 C. Sh 112 D. Sh 250

47. What is the next number in the pattern?

4, 9, 25, 49, 121, 169, _____

- A. 196 B. 225 C. 256 D. 289

48. Find the difference between the median and mode of the following numbers.

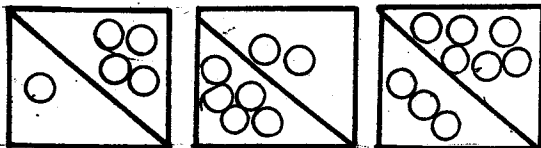
10, 5, 7, 4, 3, 5, 2, _____

- A. 0 B. 4 C. 2 D. 1

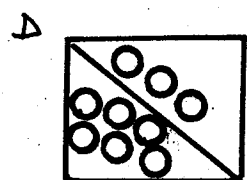
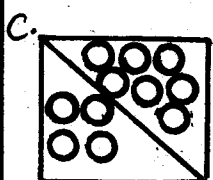
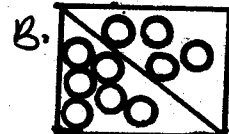
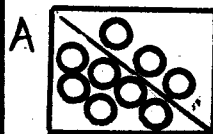
49. The price of a dress was Sh 600. Nyokabi was given 10% discount. How much did she pay for the dress?

- A. Sh 60 B. Sh 640
C. Sh 540 D. Sh 600

50.



What is the next shape in the pattern above?



TRIAL SERIES

STD 7 - END TERM 3 - 2014

SCIENCE

PENPLUS
NPS-3

Time: 1 Hr 40 Mins

READ THESE INSTRUCTIONS CAREFULLY

- Use only an ordinary pencil.
- Make sure that you have written on the answer sheet:-
(I) YOUR NAME (II) NAME OF YOUR SCHOOL
- For each question show the correct answer by drawing line in the brackets in which the letter you have chosen is written.

1. The following are ways of maintaining healthy and strong teeth. Which is **NOT**?

- A. Eating a balanced diet
- B. Eating food rich in Vitamin D
- C. Eating sugary foods
- D. Eating dry hard food such as sugarcane

2. Std 7 class made a model of a breathing system. What did the rubber sheet represents in their model?

- A. Lungs
- B. Trachea
- C. Diaphragm
- D. Bronchus

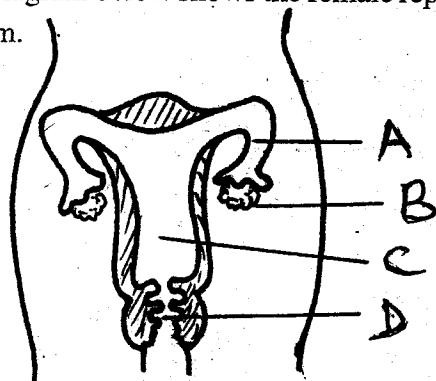
3. Which of the following organs is **NOT** involved in the digestion of food?

- A. Ileum
- B. Salivary glands
- C. Mouth
- D. Diaphragm

4. Which of the following body fluids can transmit HIV/AIDS?

- A. Digestive juices, mucus and saliva
- B. Blood, reproductive juice and saliva
- C. Bile juice, blood, saliva
- D. Saliva, pancreatic juice and blood

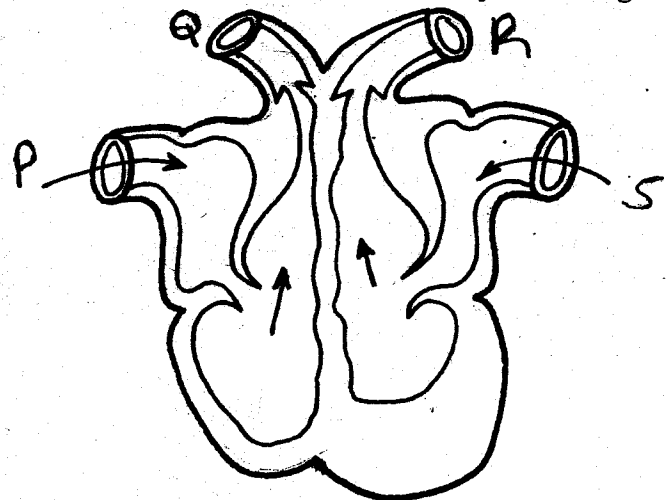
5. The diagram below shows the female reproductive system.



In which of the parts labelled A, B, C, D does fertilization take place?

- A. A
- B. B
- C. C
- D. D

6. A street girl inhaled a poisonous gas which was the first blood vessel to receive the poisonous gas?



- A. S
- B. Q
- C. P
- D. R

7. Which one of the following insects protects themselves against enemies by stinging?

- A. Cockroach and bee.
- B. Bee and wasp
- C. Scorpion and mosquito
- D. Grasshopper and housefly

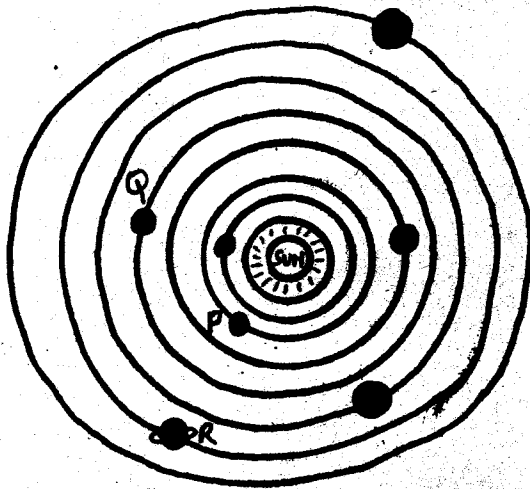
8. Which crop is both a fibre and an oil crop?

- A. Maize
- B. Coconut
- C. Sisal
- D. Cotton

9. Which is the **BEST** method of controlling weeds?

- A. Mulching
- B. Slashing
- C. Digging them out
- D. Uprooting

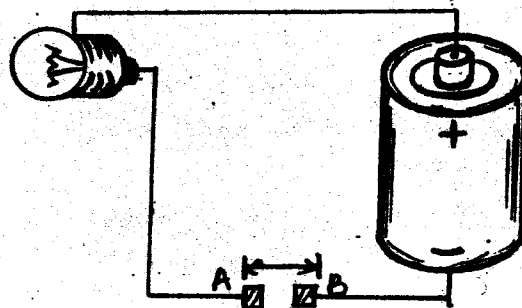
10. Which one of the following statements is **TRUE** about the tail of a windvane?
- It is half the size of the arrowhead
 - It is only made of wood
 - It is only able to turn twice the distance of the arrowhead
 - It points to the direction where the wind is blowing to
11. The diagram below shows the solar system.



Which planets are represented by letters P, Q, and R respectively?

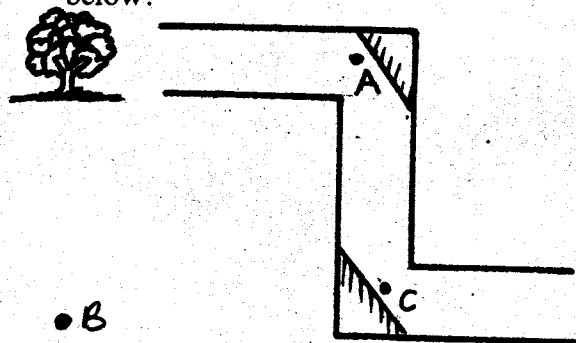
- Uranus, Venus, Mars
 - Mercury, Venus, Earth
 - Mercury, Mars, Venus
 - Venus, Mars, Uranus
12. Excessive use of farm chemical pollutes the:-
- air and soil
 - water
 - soil
 - air
13. Aerosol sprays mainly pollutes the:-
- plants
 - air
 - soil
 - water
14. Mixing of chemical is a common use of water in a:-
- house
 - industries
 - farm
 - recreation
15. The following are recreational uses of water **EXCEPT**:-
- skiing
 - boat racing
 - making fountains
 - surfing
16. Which one of the following methods of food preservation is **NOT** a modern way of preserving food?
- Drying
 - Using honey
 - Refrigeration
 - Canning

17. Which one of the following deficiency diseases is cause by lack of iron?
- Anaemia
 - Rickets
 - Kwashiorkor
 - Marasmus
18. The **BEST** soil for extinguishing fire is:-
- loam
 - clay
 - silt
 - sand
19. Which one need **NOT** to be the same when investigating drainage?
- Collecting jar
 - Amount of cotton wool
 - Amount of water
 - Size of the funnel
20. The **MAIN** source of energy in our body is:-
- Vitamins
 - Proteins
 - Fats
 - Carbohydrates
21. The diagram below show a simple circuit:

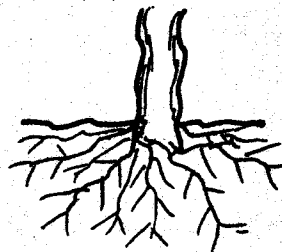


Which one of the following materials would make the bulb light when connected between points A and B?

- plastic strip
 - A piece of wood
 - A copper wire
 - A piece of charcoal
22. Which one of the following points shows the correct image position of the tree as soon in the periscope below?



23. Which one of the following is the **MAIN** reason why copper is used in making electrical wires?
- Copper is cheap
 - Copper can be insulated
 - Copper is easy to carry
 - Copper is light and good conductor of electricity
24. Which of the following is **NOT** true about cavities?
- They can cause tooth decay
 - They are not caused by sugary food
 - They can lead to tooth loss
 - They are holes on our teeth
25. A metal can be made to float on water by changing its:-
- size
 - weight
 - shape
 - material
26. When investigating pressure in liquids, what is **NOT** needed?
- Tin
 - Measuring jar
 - Nail
 - Hammer
27. Which factor is **common** to the three states of matter?
- Mass
 - Shape
 - Volume
 - Weight
28. Nitrogen present in the air is taken in through the:-
- stems
 - flowers
 - leaves
 - roots
29. Rice and wheat can be separated through:-
- filtering
 - winning
 - sieving
 - picking
30. Which one of the following blood vessels carries blood to the right side of the heart?
- Pulmonary vein
 - Venacava
 - Aorta
 - Pulmonary artery
31. Which one of the following body organs is **CORRECTLY** matched with one of its functions?
- Blood - transport body heat
 - Lungs - remove oxygen from the body
 - Skin - removes carbondioxide from the body
 - Kidney - removes excess sugar from the body
32. In which part of the female reproductive system is the zygote formed?
- Uterus
 - Cervix
 - Ovary
 - Oviduct
33. Which of the following is a social **effect** of drug?
- Rape
 - Fits
 - Coma
 - Impaired judgement
34. The following are functions performed by all the leaves **EXCEPT**:-
- respiration
 - transpiration
 - photosynthesis
 - food storage
35. The part which marks where the seeds were attached to the fruit is:-
- testa
 - radical
 - hilum
 - micropyle
36. The pest that makes holes in the stems and weakens them is:-
- cutworms
 - weevils
 - stalkborer
 - aphids
37. Which one of the following is **NOT LIKELY** to interfere with food production?
- Deforestation
 - Contour farming
 - Excess use of fertilizers
 - Quarrying
38. Which one of the following **crop pests** **correctly** matched with the part of the crop that it damages?
- | <u>Pest</u> | <u>Attacks</u> |
|--------------|----------------|
| A. Weevils | stems |
| B. Armyworms | leaves |
| C. Aphids | roots |
| D. Cutworms | flowers |
39. Which one of the following plants is a non-flowering plant?
- Spinach
 - Arrowroot
 - Tomato
 - Cypress
40. Stephen Njiraini a class seven boy uprooted a plant that had the root system shown below.



Which one of the following plants is he likely to have uprooted?

- A. Coconut
- B. Passion
- C. Sweetpotato
- D. Kale

41. Which of the following is not an agent of pollination?

- A. Water
- B. Building
- C. Insects
- D. Wind

42. Which one of the following foods can be both an energy giving and protective food?

- A. Beans
- B. Kale
- C. Irish potatoes
- D. Banana

43. Which one of the following is NOT a reason for proper storage of the tools?

- A. To prevent them from damage
- B. To make them clean
- C. To prevent accidents
- D. For tidiness in the house

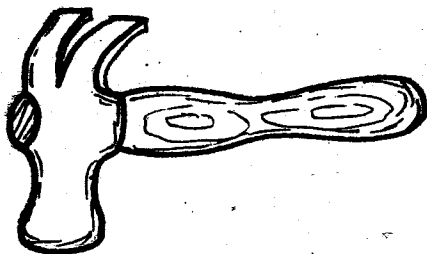
44. Which one of the following is an example of a force?

- A. Pull
- B. Effort
- C. Push
- D. Weight

45. Lactating mothers are advised to eat foods that are rich in iron. This is because:-

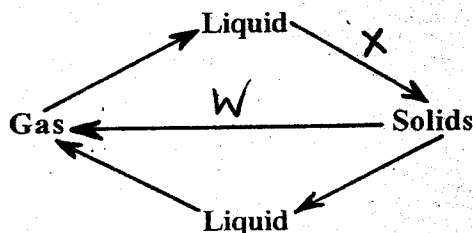
- A. improves the quality of breast milk
- B. contains a balanced diet
- C. helps to strengthen their bones
- D. helps to replace the blood lost during delivery

46. In which class does this simple tool belong?



- A. 3rd class lever
- B. levers
- C. 1st class lever
- D. 2nd class lever

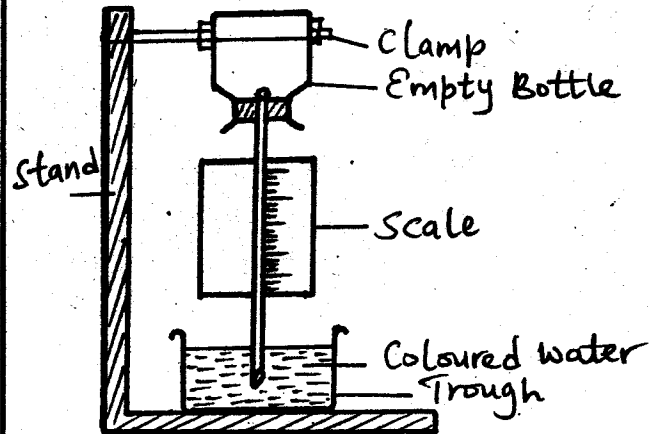
47. The diagram below shows changes in the state of matter.



Which processes are represented by letters W and X?

- A. Sublimation, freezing
- B. Cooling, freezing
- C. Freezing, condensation
- D. Melting, boiling

48. The diagram below shows an improvised air thermometer.




Which one of the following is NOT likely to happen when the temperature decreases?

- A. The level of water in the trough will decrease
- B. The air pressure in the bottle will decrease
- C. The level of water in the tube will increase
- D. The air pressure in the trough will decrease

49. Emmanuel had won a T-shirt written ARSENAL. He began to prepare himself and stood in front of a mirror. What was the image in the mirror?

- A. JANESRA
- B. JANESRA
- C. JANESRA
- D. ARSENAL

50. The diagram below shows glass containing water while on a table.



The plate did not fall after the glass was lifted up because:-

- A. liquids exert pressure
- B. solids exert pressure
- C. air exert pressure
- D. gravity force

TRIAL SERIES

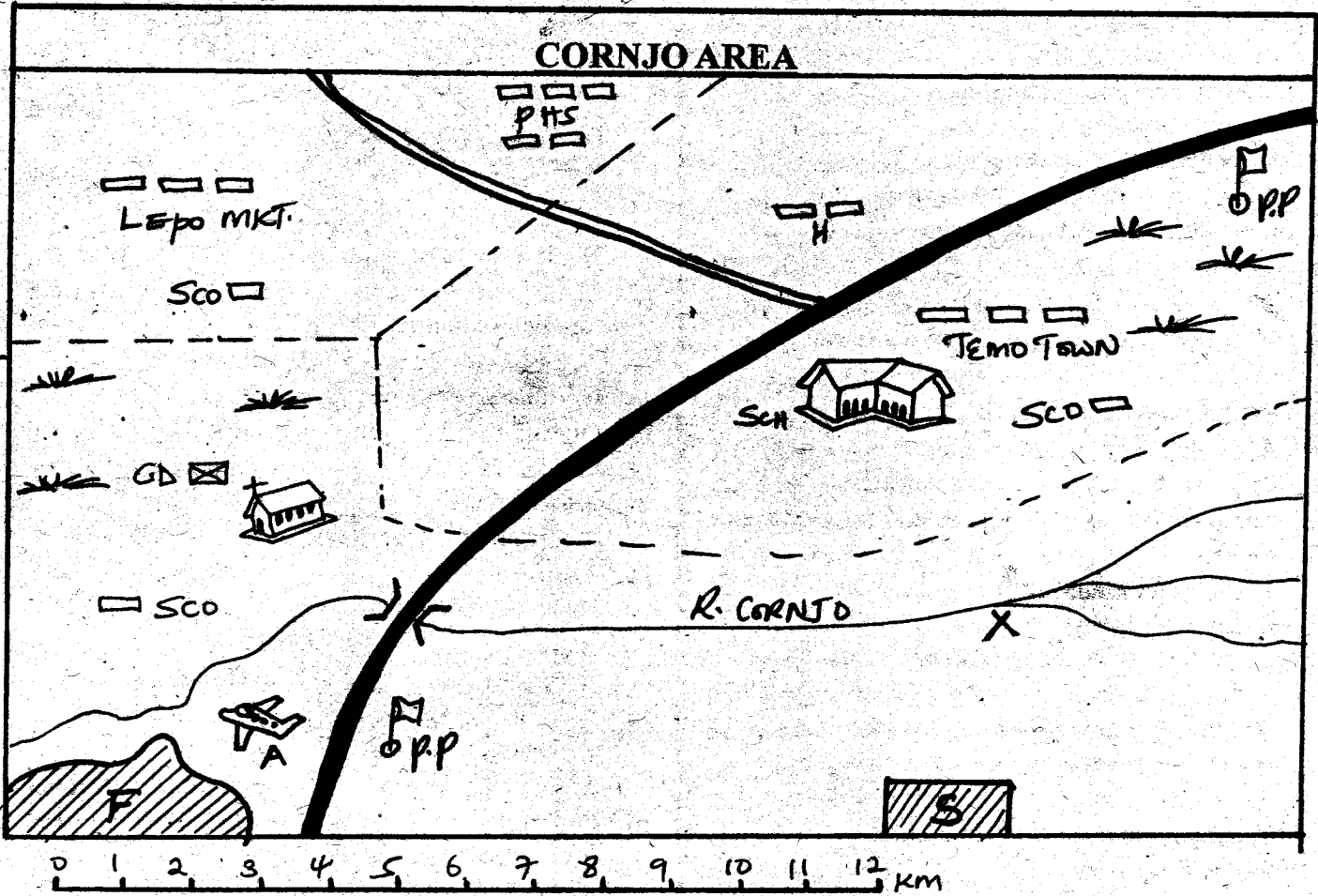
PENPLUS
NPS-3

STD 7 - END TERM 3 - 2014 SOCIAL STUDIES / C.R.E

READ THESE INSTRUCTIONS CAREFULLY

Time: 2 Hrs 15 Mins


1. Use only an ordinary pencil.
2. Make sure that you have written on the answer sheet:-
(I) YOUR NAME (II) NAME OF YOUR SCHOOL
3. For each question show the correct answer by drawing line in the brackets in which the letter you have chosen is written.



KEY		
	River and bridge	Permanent buildings
	Sisal farm	Tarmac road
	District boundary	Murrum road
	Flower farm	Air strip
PHS	Pre-historic site	P.P
SCO	Sub-county office	

Study the map of Cornjo area and use it to answer questions 1-7.

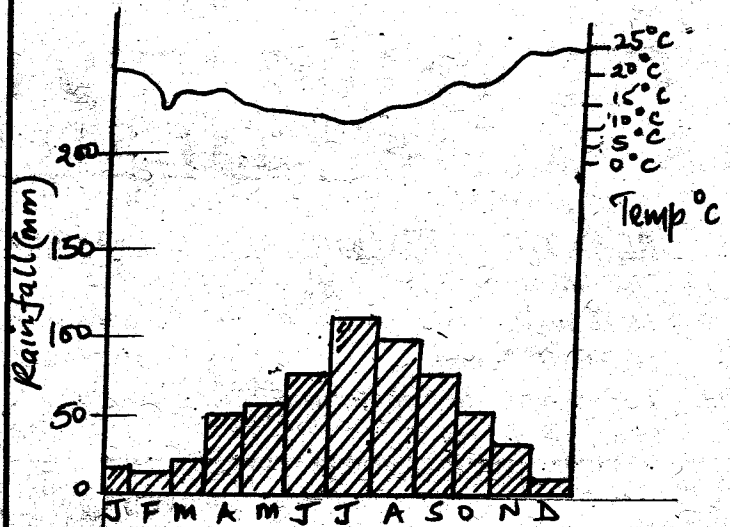
- The section marked X on R. Cornjo is called a:-
A. branch B. tributary
C. confluence D. junction
- The area is administered by a:-
A. Governor
B. District Officer
C. District Commissioner
D. County Commissioner
- What evidence on the map shows that Cornjo area is a tourist destination? Presence of:-
A. pre-historic site B. mosque
C. air strip D. law courts
- Why is the milk factory situated next to Temo town?
A. Government policy
B. Presence of raw materials
C. Police security
D. availability of large market
- Which one of the following is likely to be transported using the air strip?
A. Flowers B. Sisal C. Meat D. Milk
- The climate of Turu area is likely to be:-
A. hot and wet B. cool and wet
C. hot and dry D. wet and dry
- River Conjo flows from the:-
A. South West B. East
C. West D. North West
- The rotation of the whole earth on its own axis cause:-
A. changes in seasons
B. day and night
C. appearance of the new moon
D. eclipse of the sun
- One of the following is the main factor influencing vegetation distribution in a given area. Name it:-
A. winds B. type of soil
C. temperatures D. rainfall
- Below is a process:-



Which one of the following lakes was **NOT** formed through the above process?

- A. Lake Tana B. Lake Kivu
C. Lake Itasy D. Lake Ngami

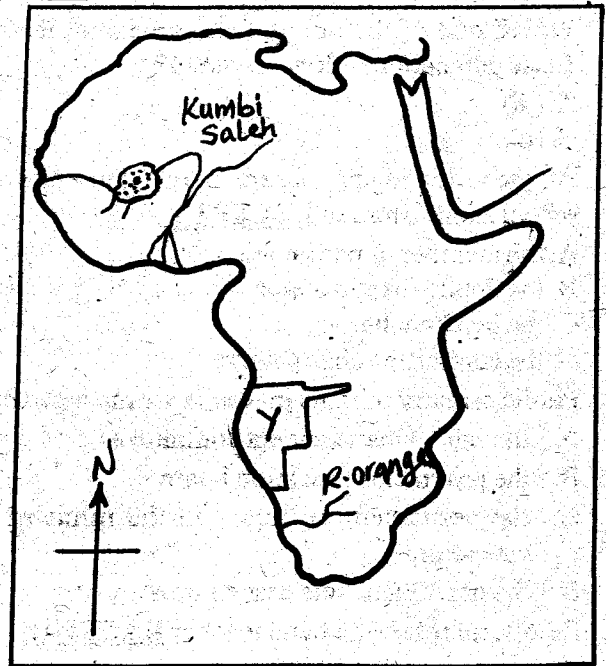
11. Which one of the following statements **CORRECTLY** describes the graph shown?



- The area receives highest rainfall when temperatures are lowest
 - The station is cool and wet throughout the year
 - It has two dry seasons
 - It has two rainy seasons
12. The Mediterranean climate is experienced in the following countries **EXCEPT**:-
A. Egypt B. Liberia
C. Tunisia D. Algeria
13. One of the following language groups was the inhabitants of Southern part of Sudan during the pre-colonial period?
A. Cushites B. Semites C. Bantus D. Nilotes
14. Choose the odd one out of the community that does not fit in the following:-
A. Bagisu B. Banyakole
C. Baganda D. Bakongo
15. All of the following are people from North Africa except one:-
A. Tuaregs B. Arabs C. Maghreb D. Berbers
16. Cold and rocky situations cause the following areas to be uninhabited by man in Africa except:-
A. peaks of Mt. Kilimanjaro
B. Mt. Kenya peaks
C. Mt. Elgon foots
D. Upper areas of Mt. Atlas
17. Which of the following least influences population distribution in our continent?
A. Relief B. Communication means
C. Soil D. Climate
18. One of the highly populated urban areas in our continent Africa is Johannesburg. The following factors has lead to this:
(i) Mining
(ii) Employment opportunities

36. Fishermen in Africa are faced with a lot of problems except one. Which one?
 A. Poor means of transport to fish-landing ports
 B. Poor fishing methods
 C. Inadequate capital
 D. Lack of adequate fishing grounds
37. Rapid industrialization has many factors leading to it in Kenya but one is not. Which one?
 A. Development in agriculture
 B. Establishment of (EPZs) Export Processing Zones
 C. Power stations growth
 D. High tax on imported materials
38. Eritrea and Sudan imports the following goods to their countries **EXCEPT**:-
 A. vehicles B. petroleum
 C. medicines D. cereals
39. The following are stretches of railways between towns in East Africa **EXCEPT**:-
 A. Mombasa and Jinja B. Wau to Haifa
 C. Gulu to Addis Ababa D. Mbeya to Iringa
40. Outline the item that is not part of the national parks in Eastern Africa.
 A. Aberdares B. Tarangine
 C. Marsabit D. Samburu
41. Below are traditional kingdoms in Africa **EXCEPT**:-
 A. Buganda B. Bunyoro
 C. Urambo D. Old Ghana
42. Which leader is incorrectly matched with the community he / she led during the pre-colonial period?
 A. Lenana - Maasai
 B. Mkwawa - Nandi
 C. Koitalel Samoei - Nandi
 D. Omukama Kabarega - Bunyoro
43. Below are leaders in Africa. Who did **NOT** resist?
 A. Mekatilili wa Menza B. Samouri Toure
 C. Oloibon Lenana D. Chief Mkwawa
44. The treaty of Bissandungu was signed between Samori Toure and the:-
 A. French B. British C. Italians D. Portuguese
45. Which colony is **INCORRECTLY** matched with its colonial power?
 A. Libya - Italy
 B. Congo DRC - Belgium
 C. Angola - Portugal
 D. Madagascar - Italy
46. The two countries of Africa that were never colonized are:-
 A. Ethiopia, Liberia B. Ethiopia, Djibouti
 C. Liberia, Guinea D. Sierra Leone, Ghana

Use the map below to answer questions 47 and 48.



47. Country Y marked on the map was colonized by:-
 A. German B. French C. Belgian D. British
48. Kumbi Saleh is a kingdom town of the Old Ghana. It was located between the upper sections of river _____ and _____.
 A. Gambia and river Volta
 B. Niger and river Senegal
 C. Niger and river Volta
 D. Senegal and river Congo
49. The Old Ghana kingdom was founded by the:-
 A. Mandinka B. Fulani
 C. Tukolor D. Soninke
50. Below are statements about a community that lived in Africa in the pre-colonial period:
 (i) *Decisions were mainly by consensus*
 (ii) *They had a chief who was usually assisted by elders*
 (iii) *They were organized into clans*
 (iv) *Their main economic activity was nomadic pastoralism*
 (v) *Their language had a click sound*
 The community described above was the:-
 A. Soninke B. San
 C. Khoikoi D. Zulu
51. The following are ways of demonstrating patriotism in our country. Which one is **NOT**?
 A. Attending national celebrations
 B. Being proud to be a Kenyan
 C. Demonstrating over good governance
 D. Taking part in government

52. Collective responsibility is people working together as a team as defined in citizenship. All of the following are collective responsibilities **EXCEPT**:-
- electing government leaders
 - fighting together corruption in offices
 - maintaining lawlessness in our society
 - fighting corruption in the society
53. Democracy is:-
- A system of government where people make decisions affecting lives
 - A system where leaders are elected to the government
 - A system of government where people are not stable
 - A system of government where people are free to exercise anything they wish
54. Sarah a class seven pupil was asked to give importances of respecting human rights. She said the following but one was wrong. Name it.
- promotes individualism in economic activities
 - helps people feel secure
 - promotes accountability in citizens
 - ensures gender equity in school
55. A long time ago, two countries in a country called Kuvukiburg fought. Later they used the following methods to solve their conflicts but one way was not right. Which one?
- Allowed freedom of worship to all communities
 - Used incitements one day in a peace conference
 - Promoted dialogue among their leaders
 - Gave fair trials to the convicted people
56. Give the factor that least explains why corruption should be killed in our country.
- To promote peace
 - To promote economic development
 - To promote national unity
 - To promote individual development
57. The person invited to solve a dispute among two conflicting parties is called:-
- a solicitor
 - an arbitrator
 - an umpire
 - an administrator
58. In our country the rights and freedoms of a person are guaranteed by:-
- the constitution
 - the national assembly
 - the judiciary
 - Kenya Commission for Human Rights
59. The Kenya National Anthem is important because:-
- it was first sung on independence day
 - It is sung by everybody in our beautiful country
 - Is a symbol of National unity
 - it is a source of entertainment

60. In Kenya law and order is maintained by:-
- National Youth Service
 - Kenya Defense Forces
 - The Prisons Service
 - The National Police Service

SECTION II

CHRISTIAN RELIGIOUS EDUCATION

61. According to the Genesis stories of creation, the heavenly bodies were created on the:-
- 4th day
 - 3rd day
 - 2nd day
 - 1st day
62. When people became so wicked, God was sorry He had made them. He decided to destroy them with floods. Who among the following was saved from the floods?
- Moses
 - Lot
 - Noah
 - Gideon
63. Which plague made Pharaoh to finally let the Israelites go out from Egypt?
- When all the water in the Nile turned into blood
 - When all the first born males of the Egyptians were killed
 - When the whole land of Egypt was filled with locusts
 - When the whole world was filled with frogs
64. Who among the following took the people of Israel into the promised land?
- Moses
 - David
 - Peter
 - Joshua
65. Prophet Samuel anointed the second king of Israel. The father of this king was called:-
- Amos
 - Kish
 - Jesee
 - Hilkiah
66. Moses was advised by Jethro his father-in-law to _____ (Exodus 18:17-23)
- appoint rulers
 - return to Egypt
 - marry Zipporah
 - circumcise his sons
67. The departure of the Israelites from Egypt to Canaan is recorded in the book of _____
- Genesis
 - Luke
 - Numbers
 - Exodus
68. Exodus 20:14 "Do not commit adultery" Who among the following people broke this commandment?
- Jacob
 - David
 - Saul
 - Moses
69. "Whenever you go I will go, your people shall be my people and your God shall be my God." Who did Ruth tell these words?
- Orpah
 - Obed
 - Naomi
 - God

70. Naaman's wife had a Jewish servant girl who advised her to tell Naaman to go and see a prophet in Israel who would help him get healed of leprosy. Which prophet was this?
 A. Elisha B. Elijah
 C. Jeremiah D. Nathan
71. My brother could not speak well, I was asked to speak for him before the king. I was later ordained as the first priest of my people Israel. Who am I?
 A. Moses B. Joshua C. Aaron D. Caleb
72. Elijah proved to all the Israelites that God was the only true God on mt. _____
 A. Sinai B. Carmel.
 C. Moriah D. Horeb
73. Who among the following prophets was called by God even before he was born?
 A. Isaiah B. Moses
 C. Jeremiah D. Ezekiel
74. According to *Mathew 5:8*, blessed are the pure in heart for they will _____
 A. be shown mercy B. be comforted
 C. see God D. inherit the earth
75. The words, "*I am fearfully and wonderfully made*" were said by _____
 A. David B. Isaiah C. Jesus D. John
76. All the following are Christians values EXCEPT:-
 A. mercy B. purity
 C. charity D. popularity
77. Which of the following miracles of Jesus teaches that there is life after death?
 A. Healing the sick B. Raising the dead
 C. Feeding the hungry D. Driving out demons
78. Which Christian values among the following involves treating everybody fairly and equally?
 A. Love B. Honesty
 C. Justice D. Mercy
79. Which of the following statements is NOT found in the Lord's prayer?
 A. May your kingdom come
 B. Hallowed be your name
 C. Maker of heaven and earth
 D. As we forgive those who wrong us
80. The MAIN reason why the angels appeared to the shepherds when Jesus was born was to:-
 A. help them protect the animals
 B. guide them to Bethlehem
 C. warn them about Herod
 D. tell them the good news
81. Lazarus, Mary and Martha lived in town called:-
 A. Bethlehem B. Samaria
 C. Jerusalem D. Bethany
82. Which one of the following events did not take place when Jesus was on the cross?
 A. The temple walls collapsed
 B. Darkness covered the earth
 C. There was an earthquake
 D. The temple curtain was torn into two
83. When Jesus told Nicodemus that he must be born again, He meant that he must _____
 A. follow the laws of Moses
 B. repent and be baptized
 C. die and resurrect
 D. be holy like God
84. School rules are there mainly for the:-
 A. proper conduct of pupils
 B. government policy
 C. headteachers own good
 D. proper running of the school
85. The BEST reason Christians help strangers is that:-
 A. it is the only way we can exercise our faiths
 B. their Christian faith direct them to do so
 C. it is the Christian obligation to help the needy
 D. they have plenty of food to share with strangers
86. In *Philippians 2:15*, Paul teaches that people are happiest when they are:-
 A. living in harmony B. ambitious
 C. boasting D. selfish
87. While in the synagogue in Nazareth, Jesus promised the following EXCEPT:-
 A. to bring good news to the poor
 B. to take people to heaven
 C. to give sight to the blind
 D. to set the oppressed free
88. I was discriminated against by my people because of my kind of work but Jesus appreciated me and He became my friend. I am _____
 A. Nicodemus B. Zaccheaus
 C. Bartimeaus D. The paralysed man
89. Which one of the following is the BEST way Christians can help the spread of HIV/AIDS in the society?
 A. Support HIV/AIDS orphans by providing food and clothes
 B. Provide ARVS to help the infected people live longer
 C. Live pure lives to set the best examples
 D. Hold seminars to help people of all ages to live responsible lives
90. The first mission station was set at:-
 A. Rabai B. Kijabe
 C. Nairobi D. Kisumu