

KNOWLEDGE EVALUATION TEST
STD. 3 TERM 2 - YEAR 2013
ENGLISH

NAME: _____

SCHOOL: _____

DATE: _____

Dictation


1. _____
2. _____
3. _____
4. _____
5. _____

Use 'this' or 'these'

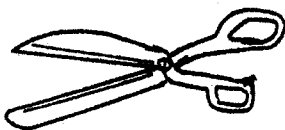
6. _____ are my mangoes
7. _____ is a dog.
8. _____ is a ripe banana.
9. _____ are our pens.
10. _____ is my book.

Name the pictures:-

11.



12.



13.




14.



15.



16.



(spoon, radio, pot, window, key, book)

Use 'who' or 'what'

17. _____ is your name?
18. _____ is going to teach us?
19. _____ is the best pupil?
20. _____ is in that bottle?
21. _____ is your brother?

Fill in the missing letters:-

22. Tr ____ ff ____ c

23. El ____ ph ____ nt

24. Fl ____ w ____ r

25. M ____ ize

26. Z ____ bra

Write the past tense:-

27. Walk - _____

28. Watch - _____

29. Play - _____

30. Call - _____

31. Write - _____

Fill in the gaps with 'have' or 'has':-

32. I _____ a pen.

33. He _____ a good shirt.

34. We _____ three balls.

35. She _____ a bucket.

36. Do you _____ a ruler?

Write the words well:-

37. kesna - _____

38. inpa - _____

39. chertea - _____

40. ortsh - _____

41. therbro - _____

Write the opposites:-

42. Shallow - _____

43. Narrow - _____

44. Big - _____

45. Good - _____

46. White - _____

(wide, black, deep, small, bad)

Complete the sentences:-

47. A _____ treats sick people.
(driver, doctor, teacher)

48. The young one of a cat is called
_____ (kitten, lamb, cub)

49. A _____ rides a bicycle.
(pilot, butcher, cyclist)

50. This is the boy _____ gave me
this pen. (which, who, when)

KNOWLEDGE EVALUATION TEST
DARASA LA TATU MUHULA WA PILI - 2013
KISWAHILI

JINA: _____ SHULE: _____ TAREHE: _____

IMLA

1. _____
2. _____
3. _____
4. _____
5. _____





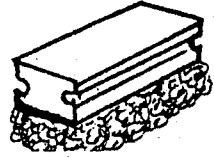

Andika tarakimu hizi kwa maneno

6. 96 _____
7. 81 _____
8. 54 _____
9. 33 _____
10. 27 _____

Kanusha:-

11. Njoo _____
12. Kula _____
13. Enda _____
14. Lala _____
15. Pima _____

Andika majiba ya picha hizi:-

- | | |
|---|--|
| 16.  | 17.  |
| _____ | _____ |
| 18.  | 19.  |
| _____ | _____ |
| 20.  | 21.  |
| _____ | _____ |

(jani, samaki, sufuria, kifutio, nyungu, jicho)

Andika kinyume:-

22. Lala - _____
23. Nuna - _____
24. Panda - _____
25. Kubwa - _____
26. Chini - _____

(cheka, shuka, amka, juu, ndogo)

Jaza pengo:-

27. M ___ ewe
28. Dh ___ h ___ bu
29. Ny ___ si
30. Gh ___ r ___ fa
31. Sa ___ aki

Andika majina ya ukoo:-

32. Dadake babangu ni _____
33. Mamake babangu ni _____
34. Ndugu wangu wa kike ni _____
35. Ndugu yake mamangu ni _____

(mjomba, shangazi, nyanya, dada)

Andika kwa wingi:-



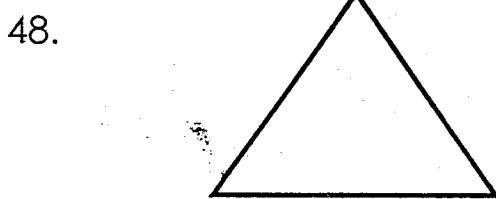

36. Kiti - _____
37. Mwalimu - _____
38. Mti - _____
39. Meza - _____
40. Embe - _____

Tumia 'hili' au 'haya'

41. Tunda _____ limeiya.
42. Machungwa _____ ni yangu.

43. Gari _____ limeharibika.
44. Matawi _____ yamekauka.
45. Maji _____ yamemwagika.

Andika majina ya maumbo:-



(Duaradufu, Pembe tatu, Mraba, Mstatili, Duara)

KNOWLEDGE EVALUATION TEST

STD. 3 TERM 2 - YEAR 2013

MATHEMATICS

NAME: _____ SCHOOL: _____ DATE: _____

1. What is the place value of digit 6 in 4613? _____

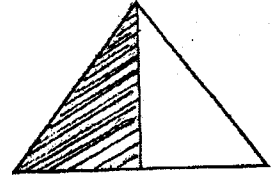
2. Which number is bigger between 5011 and 5101? _____

Write in words

3. 613 _____

4. 486 _____

5. Which fraction is shaded? _____



6. Add fifty one to seventy eight.
= _____

$$\begin{array}{r} 513 \\ + 426 \\ \hline \\ \hline \end{array}$$

$$\begin{array}{r} 639 \\ + 341 \\ \hline \\ \hline \end{array}$$


$$\begin{array}{r} 904 \\ + 195 \\ \hline \\ \hline \end{array}$$

$$\begin{array}{r} 838 \\ - 236 \\ \hline \\ \hline \end{array}$$

$$\begin{array}{r} 785 \\ - 163 \\ \hline \\ \hline \end{array}$$

$$\begin{array}{r} 649 \\ - 338 \\ \hline \\ \hline \end{array}$$

13.  What is the time?

14. 
_____ tens + _____ ones

15. 621 = _____ hundreds _____ tens
_____ ones

16. 89 = _____ hundreds _____ tens
_____ ones

17. 5 hundreds 2 tens 6 ones = _____

18. 1 hundred 6 tens 5 ones = _____

19. Mary had 75 oranges. She gave out 49 oranges. How many oranges did she remain with? _____

20. Moses had 67 sweets. He bought 95 more sweets. How many sweets did he have altogether? _____

21. Which fraction is unshaded? _____



22. $12 \div 3 =$ _____

23. $16 \div 4 =$ _____

24. $6 \overline{)42}$

25.

$$7 \overline{) 63}$$

26.

$$8 \overline{) 32}$$

27.

$$5 \overline{) 35}$$

28.

5 hundreds 6 tens 4 ones = _____

29.

7 thousands 2 hundreds 7 tens 8 ones = _____

30.

864 = _____ thousands _____ hundreds
_____ tens _____ ones

31.

951 = _____ hundreds _____ tens _____
ones

32.

Weeks	Days
14	2
+10	6
<hr/>	

33.

Weeks	Days
12	6
+ 9	5
<hr/>	

34.

Weeks	Days
34	5
- 25	2
<hr/>	

35.

Weeks	Days
28	3
-16	5
<hr/>	

36.

$$\underline{\quad} - 62 = 90$$

37.

$$86 - \underline{\quad} = 38$$

38.

How many days are there in five weeks? _____

39.

$$\frac{1}{3} + \frac{1}{3} = \underline{\quad}$$

40.

$$\frac{1}{4} - \frac{1}{4} = \underline{\quad}$$

41.

$$\begin{array}{r} 678 \\ - 434 \\ \hline \end{array}$$

42.

$$\begin{array}{r} 863 \\ - 256 \\ \hline \end{array}$$

43.

$$25 \times 4 = \underline{\quad}$$

44.

$$20 \times 4 = \underline{\quad}$$

45.

$$30 \times 3 = \underline{\quad}$$

46.

$$\begin{array}{r} 40 \\ \times 2 \\ \hline \end{array}$$

47.

$$\begin{array}{r} 10 \\ \times 8 \\ \hline \end{array}$$

Use the price list below to answer questions 48 - 50:-



Sh. 15



Sh. 10



Sh. 20

48.

What is the price of a pencil?

49.

Simon bought an orange and two bananas. How much money did he pay? _____

50.

Norah had Sh. 100. She bought two pencils, an orange and a banana. How much money did she remain with? _____

KNOWLEDGE EVALUATION TEST **STD. 3 TERM 2 - YEAR 2013 READING**

NAME: _____

SCHOOL: _____

DATE: _____

Read these words

- | | | | |
|------------|-------------|------------------|----------------|
| 1. Happy | 6. Thought | 11. Dream | 16. Pedestrian |
| 2. Laugh | 7. Arrange | 12. Dangerous | 17. Mountain |
| 3. Shirt | 8. Library | 13. Court | 18. Warden |
| 4. Plaster | 9. Grocer | 14. Weapon | 19. Calculate |
| 5. Length | 10. Measure | 15. Handkerchief | 20. Scissors |

Read these sentences

21. Are we going to church together?
22. The thief broke this window.
23. They are dancing to the tune of the music.
24. I tied the ribbon to my father's car.
25. It seems the train will be late today.

KNOWLEDGE EVALUATION TEST **DARASA LA TATU MUHULA WA PILI - 2013 KUSOMA**

JINA: _____

SHULE: _____

TAREHE: _____

Soma maneno haya

- | | | | |
|------------|-------------|---------------|-----------------|
| 1. Fedha | 6. Fununu | 11. Bidhaa | 16. Mashabiki |
| 2. Ukweli | 7. Mstatili | 12. Godoro | 17. Kamilisha |
| 3. Maradhi | 8. Kisigino | 13. Barafu | 18. Marekibisho |
| 4. Makali | 9. Jangwa | 14. Mwananchi | 19. Dhahabu |
| 5. Bahasha | 10. Daraja | 15. Gwaride | 20. Pilkapilka |

Soma sentensi hizi

21. Paka alimnyemelea panya polepole.
22. Naondoka kwa hivyo usitoke humu.
23. Mama aliziuza nyanya zote sokoni.
24. Majumba haya yaliangushwa na upepo mkali.
25. Katiba nzuri itatusaidia maishani mwetu.

KNOWLEDGE EVALUATION TEST
STD. 3 TERM 2 - YEAR 2013
SCIENCE

NAME: _____


SCHOOL: _____

DATE: _____

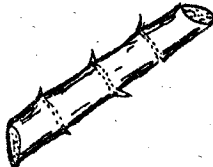
1. I have _____ sense organs.
(four, six, five)

2. _____ is not a source of water.
(tap, rain, river)

3. Unwanted plants growing in our farms are called _____.
(seeds, trees, weeds)

4.  This leaf is for _____.
(beans, maize, peas)

5. A place where a plant grows naturally is its _____.
(environment, home, habitat)

6.  We eat the _____ of sugarcane.
(stem, leaves, roots)

7. An _____ has one seed.
(orange, avocado, apple)

8. The main source of light is _____.
(torch, lamp, sun)

9. A _____ cannot fly.
(mosquito, bird, sheep)

10. We feel hot when it is _____.
(rainy, cloudy, sunny)

11. A _____ person cannot see
(dumb, deaf, blind)

12. We eat the _____ of carrots
(leaves, roots, stem)

13. Blood is _____ in colour.
(white, red, yellow)

14. Drinking water must be _____.
(boiled, washed, stored)

15. We should keep our nails _____.
(clean, long, dirty)

16.



The weather is _____.
(cloudy, rainy, windy)

17. A cow has _____ legs.
(five, three, four)


18. A farmer prepares land for farming during the _____ season.
(wet, rainy, dry)

19. A snake has _____ legs.
(0, 6, 4)

20. When there is danger, a butterfly _____ away.
(runs, flies, walks)

21. We should eat _____ food.
(dirty, rotten, clean)

22. A _____ cannot produce light.
(torch, candle, bell)

23.  The drum produces sound when it is _____.
(shaken, blown, hit)

24. My _____ are in my mouth.
(hair, toes, teeth)

25. Rotten eggs smell _____.
(good, better, bad)

26. A cactus plant grows in _____ areas.
(dry, swampy, wet)

27. Germs cause _____.
(health, diseases, strength)

28. Every home must have a _____.
(radio, toilet, television)

29. The best soil for modelling is _____.
(loam, clay, sand)

30.



A snake moves by _____.
(slithering, swimming, flying)

31. A _____ lives in a web.
(tick, spider, rat)

32. We should wash our hands _____ visiting the toilet.
(while, after, before)

33. Dirty feet keeps _____.
(lice, jiggers, flies)

34. I see using my _____.
(ears, eyes, mouth)

35. We get milk from _____.
(sheep, donkeys, cows)

36. A ripe banana tastes _____.
(bitter, sour, sweet)

37. Bees give us _____.
(honey, vegetables, sweet)

38. Dirty hands has _____.
(germs, insects, rain)

39. The colour of the sky is _____.
(red, blue, green)

40. _____ can be eaten raw.
(Beans, carrots, Maize)

41. A millipede has _____ legs.
(0, many, two)

42. _____ soil makes the longest ribbons.
(Loam, Clay, Sand)

43. A sick child should be taken to _____.
(hospital, shop, field)


44. A tree does not have a _____.
(tail, stem, leaf)

45. A _____ is a big animal.
(leopard, mosquito, fly)

46. Clean teeth are _____ in colour
(yellow, white, black)

47. A bird eats using its _____.
(feathers, beak, wings)

48.



The body of the fish is covered by _____.
(fur, scales, feathers)

49. Clean water is _____.
(blue, black, colourless)

50. A _____ is a harmful animal.
(cat, pig, tick)

KNOWLEDGE EVALUATION TEST
STD. 3 TERM 2 - YEAR 2013
SOCIAL STUDIES & C.R.E

NAME: _____


SCHOOL: _____

DATE: _____

1. Our district is headed by _____
(D.C, D.O, Chief)

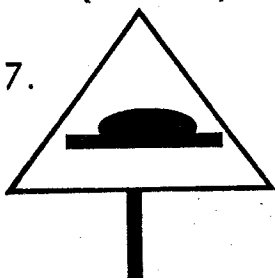
2. The head of a nuclear family is _____
(mother, father, child)

3. My father's sister is my _____
(aunt, uncle, sister)

4.  This is _____
(hill, valley, plain)


5. There are _____ cardinal points.
(4, 3, 5)

6. We should _____ our parents.
(disobey, hate, obey)

7.  This road sign means _____
(bumps ahead, children crossing, sharp bend ahead)

8. We go to school to _____
(play, sing, learn)


9. _____ is not an element of weather. (Rain, Hill, Wind)

10.  The weather is _____
(calm, cloudy, rainy)

11. A _____ is a domestic animal.
(sheep, lion, leopard)

12. It is _____ to play with fire.
(good, dangerous, better)

13. Our Prime Minister is called _____
(Kalonzo, Kibaki, Raila)

14.  This is a _____
(valley, swamp, plain)

15. When it is hot, we wear _____ clothes.
(heavy, light, dirty)

16. A family lives in a _____
(toilet, home, forest)

17. Farmers _____ crops.
(steal, destroy, grow)

18. Rainfall make us _____
(dry, warm, wet)

19. Our school is headed by a _____
(watchman, headmaster, prefect)

20. We wear uniform while going to _____
(sleep, eat, school)

21. We can buy bread from a _____
(shop, classroom, bedroom)

22. We bathe in a _____
(bedroom, bathroom, kitchen)

23. People walking along the road are called _____
(cyclists, passengers, pedestrians)

24. A _____ is a sharp object.
(knife, book, shirt)
25. A _____ is a wild animal.
(hyena, pig, donkey)
26. Colour white in the national flag means _____.
(vegetation, people, peace)
27. We should not _____ with our friends. (fight, play, reed)
28. Good children are those who are _____.
(obedient, rude, abusive)
29. Many trees growing together form a _____.
(lake, river, forest)
30. _____ is not a basic need.
(Television, Food, Shelter)
31. God created _____.
(nothing, everything, bad things)
32. Jesus had _____ disciples.
(Joseph, Moses, Saul)
33. Aaron was a brother to _____.
(Joseph, Moses, Saul)
34. _____ was not a disciple of Jesus. (David, Judas, Peter)
35. Jesus was born in _____.
(Nazareth, Bethlehem, Egypt)
36. We talk to God through _____.
(eating, prayers, sleeping)
37. Baby Jesus was given _____ gifts. (two, three, five)
38. Goliath was killed by _____.
(Saul, David, Joshua)
39. King Solomon asked God for _____.
(wealth, wives, wisdom)
40. The Holy Spirit came on the day of _____.
(Christmas, Pentecost, Easter)
41. Saphira had a husband called _____.
(Ananniah, Thomas, John)
42. Jesus was baptised on river _____.
(Jordan, Tigris, Euphrates)
43. We go to church to _____.
(sleep, eat, worship)
44. _____ denied Jesus three times. (Judas, John, Peter)

C.R.E

31. The first book the Bible is _____.
(Exodus, Genesis, Matthew)
32. _____ was not a son to Adam and Eve. (Abel, Cain, Shem)
33. Jesus was not visited by _____.
(wisemen, Abraham, Shepherds)
34. Muslims worship in a _____.
(church, mosque, temple)
35. God gave Moses the ten commandments on Mt. _____.
(Olives, Sinai, Carmel)
36. Jacob had _____ sons
(10, 12, 2)