

# KIRINYAGA COUNTY

## STD 7 - TERM 3

### SOCIAL STUDIES / C.R.E

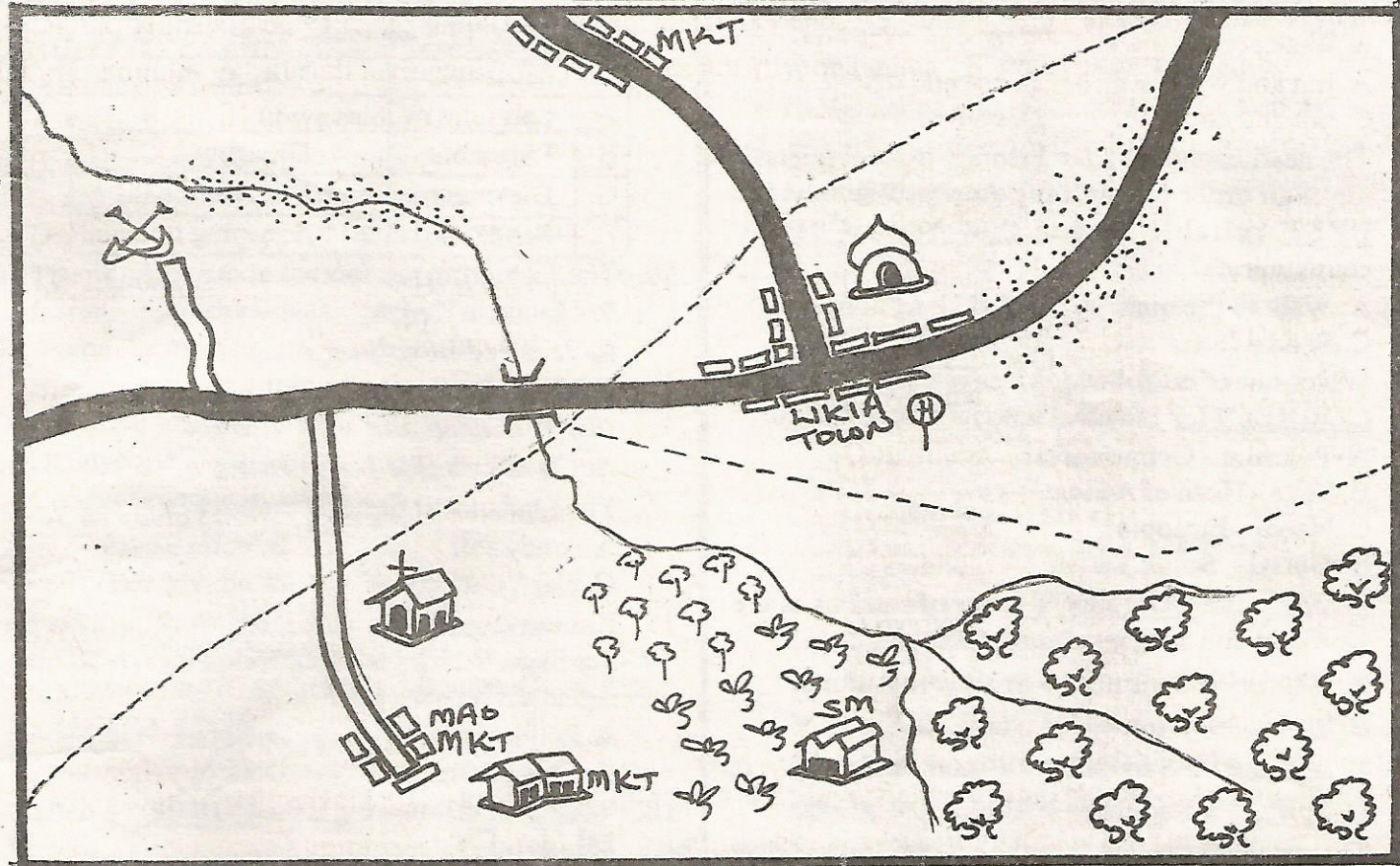
PENPLUS  
KIRINYAGA

**READ THESE INSTRUCTIONS CAREFULLY**

*Time: 2 Hrs 15 Mins*

1. Use only an ordinary pencil.
2. Make sure that you have written on the answer sheet:-  
(I) YOUR NAME                                  (II) NAME OF YOUR SCHOOL
3. For each question show the correct answer by drawing line in the brackets in which the letter you have chosen is written.

WOTE AREA



KEY

	Tarmac road		Murrum road		River and bridge
	Tea		Coffee		Forest
	Saw mill	MKT	Market		Church
	School		Permanent building		District boundary
	Hospital		Quarry		Mosque

Study the map of Wote area and use it to answer questions 1-7.

- The land in Wote area slopes towards:-  
A. South East                      B. North West  
C. South West                      D. North East
- The settlement pattern in Wote area can be described as \_\_\_\_\_  
A. linear    B. clustered    C. sparse    D. even
- What is the length of the tarmac road between the bridge and the junction at Likia town?  
A. 6 km    B. 7 km    C. 4 km    D. 8.5 km
- Wote area is likely to be a \_\_\_\_\_  
A. District    B. County    C. Division    D. Country
- Three of the following economic activities are carried out in Wote area **EXCEPT**:-  
A. mining    B. farming    C. lumbering    D. fishing
- The climate likely to be found on the Southern part of Wote area is:-  
A. hot and wet                      B. hot and dry  
C. hot and cool                      D. cool and wet
- The headteacher of Mao Primary School plans to make an order for building stones. Which is the **BEST** reliable means that he can use to communicate?  
A. Walk to the quarry    B. Make a phone call  
C. Send a letter              D. Send a runner
- Which one of the following Kenyan communities is **CORRECTLY** matched with its place of origin?  
A. Pokomo - Congo forest  
B. Taita - Horn of Africa  
C. Nandi - Ethiopia  
D. Boran - South Sudan
- Which is the **CORRECT** order of seasons in the Northern and Southern hemispheres?  
A. Winter → Summer → Spring → Autumn  
B. Spring → Winter → Autumn → Summer  
C. Autumn → Summer → Winter → Spring  
D. Spring → Summer → Autumn → Winter
- The statements below describe a traditional political structure of a community in Eastern Africa:  
(i) *Was organized into chiefdoms*  
(ii) *Was ruled by hereditary chiefs*  
(iii) *Chiefdoms had strong armies*  
The community described above is \_\_\_\_\_  
A. Abawanga                      B. Mieru  
C. Buganda                        D. Nyamwezi
- Which one of the following is the **MAIN** importance of marriage?  
A. To bear children  
B. To provide companionship

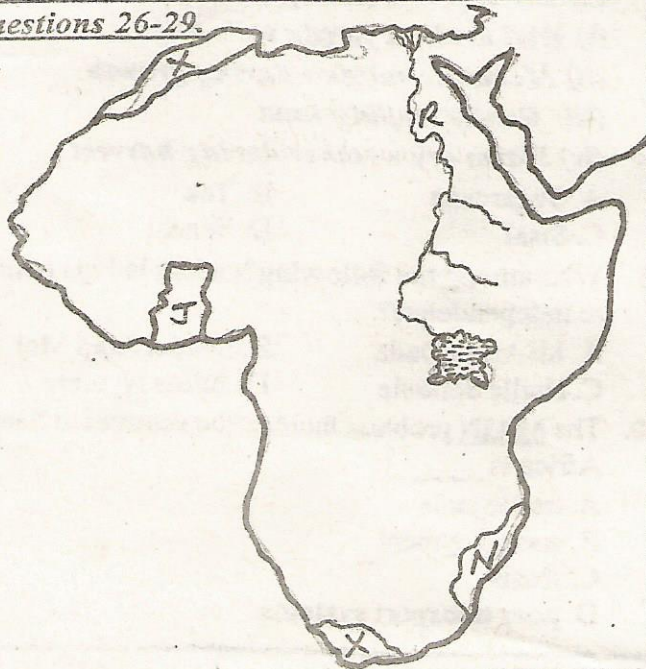
- To control spread of HIV/AIDS  
D. To enrich culture
- Which one of the following types of fish is caught in inland waters in Eastern Africa?  
A. Shell fish    B. Tuna    C. Mullet    D. Tilapia
- Who among the following led to Hehe rebellion against the Germans in Tanganyika?  
A. Abushiri                      B. Sarnoei  
C. Mkwawa                        D. Mirambo
- In which one of the following ways can democracy be applied in school?  
A. Involving the learners in choosing the school president  
B. Involving the learners in disciplining other pupils  
C. Allowing the learners to come to school late  
D. Allowing the learners to do whatever they want
- Which one of the following minerals is **CORRECTLY** matched with its mining method?

	Mineral	Mining method
A.	Salt	Adit
B.	Limestone	Dredging
C.	Diatomite	Evaporation
D.	Sand	Scooping

- The following are factors about a certain type of soil found in Kenya:  
(i) *It is red in colour*  
(ii) *It is fertile*  
(iii) *It is deep and well drained*  
(iv) *It is suitable for growing of coffee*  
The type of soil described above is \_\_\_\_\_  
A. sandy soil                      B. volcanic soil  
C. black cotton soil              D. alluvial soil
- Kamau stopped his wife from working after their marriage. Which one of the following type of human rights did he deny her?  
A. Political right                      B. Social right  
C. Economic right                      D. Group right
- Which of the following is the **CORRECT** definition of marriage?  
A. A union between a man and a woman who have agreed to live together  
B. People who love each other and have children  
C. People who live together to raise children  
D. A man and a woman who live together
- Germany East Africa Company (GEAC) was given the authority to administer present day Tanganyika on behalf of the Germany government in 1888. The leader of the company was \_\_\_\_\_  
A. Carl Peters                      B. William Mackinnon  
C. Dr. Ludwig Krapf                      D. Dr. David Livingstone

20. Elected members of the county assembly represent the \_\_\_\_\_
- A. parliament                      B. Senate  
C. Counties                         D. Wards
21. Which of the following is a function of the clan?
- A. It heals sick people  
B. It settles disputes among members  
C. It takes children to school  
D. It acquires community land
22. Which community is CORRECTLY matched with its leader?
- | Community  | Leader                 |
|------------|------------------------|
| A. Giriama | - Koitalel Arap Samoei |
| B. Kamba   | - Masaku               |
| C. Nandi   | - Mekatilili           |
| D. Maasai  | - Mumia                |
23. One of the contributions of beef farming to the economy of Tanzania is \_\_\_\_\_
- A. Central Tanzania is infested with tsetse flies  
B. inadequate slaughter houses  
C. animal diseases kill many animals  
D. source of income for the farmers
24. The MAIN reason for the migration of the Bantu from Congo forest was \_\_\_\_\_
- A. attacks from hostile neighbours  
B. search for pastures  
C. search for fertile land  
D. famine and starvation
25. Conflicts occur when people \_\_\_\_\_
- A. live together happily  
B. work in the same station  
C. are from different communities  
D. fail to understand one another

Use the map of Africa below to answer questions 26-29.



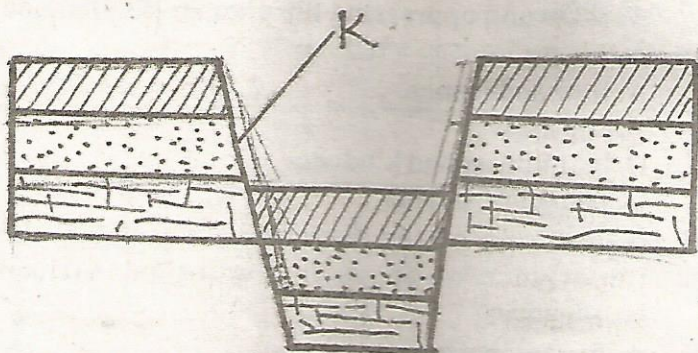
26. The crop grown in country marked J is likely to be:
- A. cloves                              B. cocoa  
C. palms                                D. sugarcane
27. The river project marked R was MAINLY started to:-
- A. bring more land under cultivation  
B. produce hydro-electric power  
C. produce a lot of fish  
D. produce water for industries
28. The country marked N is likely to be:-
- A. Mozambique                      B. Swaziland  
C. Lesotho                            D. Zambia
29. The climatic region marked X is:-
- A. Equatorial                         B. Warm continental  
C. Méditerranean                  D. Humid sub tropical
30. Which one of the following is a major security threat in Kenya?
- A. Robbery                            B. Terrorism  
C. Wild animals                      D. Cattle rustling
31. Which of the following communities are CORRECTLY matched with their language group?
- A. Mossi, Fon  
Ewe, Gurma                      → Kwa
- B. Hausa, Tuareg  
Andamawa                        → Afro-Asiatic
- C. Mande, Soninke  
Mandinka                         → Nilo-Saharan
- D. Asante, Wassa  
Ewe, Nupe                         → Mande
32. Which of the following is the MAIN factor that influences population distribution?
- A. Vegetation                         B. Relief  
C. Climate                              D. Drainage
33. The following contributions refers to a prominent African leader:
- (i) *Set up private schools*  
(ii) *Introduced a new constitution in his country*  
(iii) *Abolished ownership of slaves*
- The leader described is \_\_\_\_\_
- A. Haile Selassie  
B. Jomo Kenyatta  
C. Julius Nyerere  
D. Menelik II

4. Which one of the following is NOT an importance of trade in Eastern Africa?
- Leads to unhealthy competition
  - Earns foreign exchange
  - Creates employment
  - Encourages economic development
5. A good citizen should not \_\_\_\_\_
- pay taxes
  - be disloyal to his country
  - participate in democratic processes
  - be patriotic
6. Which one of the following was NOT a reason why the Nandi were able to resist the British for a long time?
- The British burnt down Nandi villages
  - They were strongly united under their leader
  - The Nandi warriors were well trained
  - They were able to hide in their hilly land
7. The MAIN benefit of forestry to the economy of Democratic Republic of Congo is \_\_\_\_\_
- source of medicine
  - provides shelter
  - water catchment
  - source of food
8. Who among the following early visitors to East Africa was an explorer?
- Seyyid Said
  - Johann Rebman
  - Vaco Da Gama
  - William Mackinon
9. Harer, Lake Stefanie and Mega are game reserves located in the country of \_\_\_\_\_
- Kenya
  - Ethiopia
  - Rwanda
  - Uganda
10. The following are functions of the Independent Electoral and Boundaries Commission except:-
- registers voters
  - counts the votes
  - distributes election materials
  - appoints governors
11. A certain crop has the following uses. Which crop is this?
- Its used in making perfumes
  - Used in spicing food
  - Processed to produce mouth wash
  - Pain reliever in toothaches
- Coffee
  - Pyrethrum
  - Cloves
  - Cocoa
12. A feeling of love that a citizen has towards his/her country and the willingness to defend it. This phrase defines \_\_\_\_\_
- democracy
  - philosophy
  - citizenship
  - patriotism
43. Which one of the following is NOT an importance of peace?
- Development of society
  - Children learn without fear
  - Tourists stop coming to the country
  - Government rules effectively
44. A community contribute a lot to the school development through one of the following ways. Which one?
- Donating land
  - Building homes
  - Participating in teaching
  - Disciplining teachers
45. Who among the following communities is NOT a pastoral community?
- Maasai
  - Tswana
  - Fulani
  - Soninke
46. Below are characteristics describing a vegetation zone:
- Trees grow close together
  - Trees are ever green
  - The floor of the forest has little or no undergrowth
  - Trees are mainly hardwoods
- The vegetation zone described above is \_\_\_\_\_
- Temperate grasslands
  - Tropical grasslands
  - Mediterranean vegetation
  - Tropical rainforest
47. In which of the following countries is one LIKELY to find the headquarters of ECOWAS?
- Gaborone
  - Lusaka
  - Abuja
  - Arusha
48. The following conditions favour the growth of a certain crop. Which crop is it?
- Well drained fertile soils
  - Moderate rainfall during growth
  - Gently sloping land
  - Warm dry weather during harvest
- Sugarcane
  - Tea
  - Sisal
  - Wheat
49. Who among the following leaders led his country to independence?
- Idi Amin Dada
  - Daniel Arap Moi
  - Haille Selassie
  - Julius Nyerere
50. The MAIN problem facing urban centres in Eastern Africa is \_\_\_\_\_
- traffic jams
  - unemployment
  - slums
  - poor transport systems

51. Three of the following are benefits of tourism in Africa. Which one is **NOT**?
- Employment
  - Market for goods
  - Immoral activities
  - Source of foreign exchange

52. If the time in Accra ( $0^{\circ}$ ) is 8.00 am, what will be the time in Mogandishu  $45^{\circ}\text{E}$ ?
- 11.00 am
  - 5.00 am
  - 11.00 pm
  - 10.00 am

Use the diagram below to answer questions 53-54.



53. The side marked **K** is \_\_\_\_\_
- Rift Valley
  - Escarpment
  - Cliff
  - Mountain
54. The above feature was formed through a process called \_\_\_\_\_
- folding
  - faulting
  - volcanicity
  - block
55. Which one of the following is **FALSE** about good citizenship?
- Terrorists are able to come into the country
  - Government is able to govern easily
  - Government is able to establish development projects
  - People are able to work freely
56. Which one of the following is **NOT** a member of the IGAD?
- Ethiopia
  - Djibouti
  - Tanzania
  - Uganda
57. One of the causes of road accidents in Kenya is \_\_\_\_\_
- overspeeding of vehicles
  - speed governors
  - safety belts
  - tarmac roads
58. The following are the branches of the Kenya government **EXCEPT**:-
- Legislature
  - Executive
  - Ministry
  - Judiciary
59. Which of the following is the **MAIN** factor that favours industrial development in Kenya?
- Adequate power
  - Presence of peaceful environment
  - Favourable government policies
  - Availability of raw materials

60. The capital city of South Sudan is \_\_\_\_\_
- Khartoum
  - Asmara
  - Juba
  - Addis Ababa

## SECTION II

### CHRISTIAN RELIGIOUS EDUCATION

61. According to the creation story. God mainly created man so that man could \_\_\_\_\_
- live with the birds and animals
  - take care of God's creation
  - toil and till the land to grow food
  - share in the moral value of God
62. Adam and Eve disobeyed God's commands by \_\_\_\_\_
- eating the forbidden fruit
  - committing murder
  - committing adultery
  - lying to the Holy Spirit
63. Abraham showed his obedience to God by \_\_\_\_\_
- going to Egypt when there was famine
  - marrying Sarah
  - visiting his nephew Lot
  - moving from Haran to Canaan
64. After the death of Moses, the Israelites were led to the promised land by \_\_\_\_\_
- Aaron
  - Gideon
  - Joshua
  - Caleb
65. Which one of the following was **NOT** a sin King Solomon committed? He \_\_\_\_\_
- worshipped idols
  - committed adultery
  - disobeyed the elders
  - oppressed his subjects
66. Which of the following prophets prophesied about the new covenant?
- Hosea
  - Isaiah
  - Zachariah
  - Jeremiah
67. Who among the following people was a judge?
- Abinadab
  - Deborah
  - Jonathan
  - Bezalel
68. Which commandment urges Christians to have leisure time?
- Keep the Sabbath holy
  - Respect your father and mother
  - Do not commit adultery
  - Do not accuse anyone falsely
69. Angel Gabriel was sent to a virgin woman called Mary who lived in the town of \_\_\_\_\_
- Bethlehem
  - Nazareth
  - Bethany
  - Capernaum
70. Jesus Christ compared the lit lamp covered with a bowl with \_\_\_\_\_
- talents that are not there at all
  - talents that are overused
  - talents that are not used
  - talents that are about to be used

71. Which one of the following miracles was performed by both Peter and Jesus?  
 A. Multiplication of oil    B. Healing lepers  
 C. Calming the storm    D. Raising the dead
72. Which among the following parables talked about the growth of the kingdom of God?  
 A. Mustard seed    B. The sower  
 C. Rich man and Lazarus    D. The prodigal son
73. Which disciple did evil because of the temptation of money?  
 A. Peter    B. Mark    C. Mathew    D. Judas
74. Which one of the following happened immediately after Jesus died on the cross?  
 A. Saints rose from the dead  
 B. Soldiers ran away  
 C. Women cried  
 D. Judas hanged himself
75. The resurrection of Jesus was first reported to the disciples by \_\_\_\_\_  
 A. Mary and Joana  
 B. the soldiers who were guarding the tomb  
 C. the two disciples on the road to Emmaus  
 D. Peter and John
76. When Jesus ascended, He told his disciples to go to Jerusalem and wait for \_\_\_\_\_  
 A. His second coming    B. The holy spirit  
 C. the kingdom of God    D. the blessing of God
77. In which book of the Bible are the gifts of the Holy Spirit listed?  
 A. Mathew    B. Galatians  
 C. Acts    D. 1st Corinthians
78. Who among the following people was not one of the seven deacons?  
 A. Stephen    B. Philip    C. Timothy    D. Permenas
79. Who among the following apostles did not minister with Paul?  
 A. Barnabas    B. Stephen  
 C. Silas    D. John Mark
80. Where should we store our riches according to *Mathew 6:19-21*?  
 A. In heaven    B. In banks  
 C. In our homes    D. Here on earth
81. Which of the following best explains the meaning of "abilities"?  
 A. The fruits of the Holy Spirit  
 B. Special power to do Mathematics  
 C. Special gifts enabling us to do different activities  
 D. Being able to work hard
82. Which one of the following portrays misuse of leisure?  
 A. Visiting the sick in hospital  
 B. Singing in the church  
 C. Helping our parents at home  
 D. Talking ill of other people
83. Which of the following **BEST** shows how Christian are helping those who are suffering from HIV/AIDS?  
 A. Encouraging them live a positive life  
 B. Starting schools for their children  
 C. Praying for them  
 D. Isolating them from the rest in the community
84. In the book of James 5:1-6, refusing to pay the workers and oppressing the poor are condemned as \_\_\_\_\_  
 A. love and justice  
 B. injustices  
 C. faithfulness and kindness  
 D. being fair and just
85. Which one of the following was **NOT** the importance of songs in traditional African communities?  
 A. For entertainment  
 B. To pass educative messages  
 C. To accuse people  
 D. As a leisure activity
86. People in traditional African communities believe in all the following **EXCEPT**:-  
 A. witchcraft and magic  
 B. ritual killings  
 C. sacrifices  
 D. resurrection of the dead
87. Which one of the traditional African practices is similar to confirmation in Christianity?  
 A. Marriage    B. Reconciliation  
 C. Initiation    D. Naming
88. Which one of the following is the **BEST** way for Christians to use their wealth?  
 A. Going for trips  
 B. Establishing a children's home  
 C. Buying clothes for their family  
 D. Entertaining friends
89. Who among the following is a good friend? One who will \_\_\_\_\_  
 A. show concern and correct you with love  
 B. point out your weaknesses all the time  
 C. give you what your parents cannot provide  
 D. favour you whenever possible
90. Which one of the following Christian communities sent the first missionaries to Kenya?  
 A. The Church of Scotland  
 B. African Inland Church  
 C. Mill Hill Missionaries  
 D. The Church Missionary Society