

# PENPLUS TRIAL SERIES

## STD 7 - END - TERM 3 -

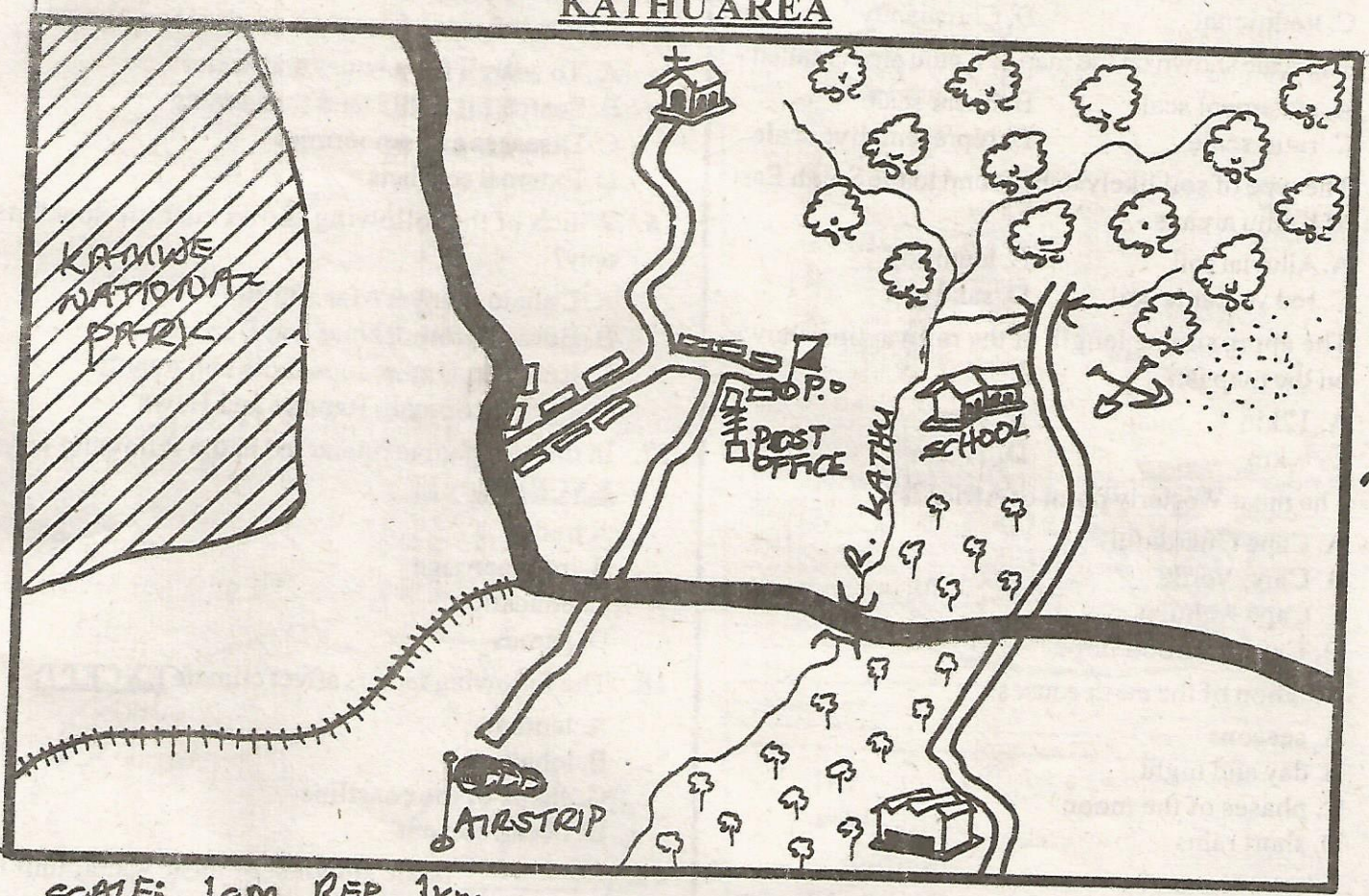
### SOCIAL STUDIES AND RELIGIOUS EDUCATION

Time: 2 hours 15 mins

READ THESE INSTRUCTIONS CAREFULLY

1. Use only an ordinary pencil.
2. Make sure that you have written on the answer sheet:-  
(I) YOUR NAME (II) NAME OF YOUR SCHOOL
3. For each question show the correct answer by drawing line in the brackets in which the letter you have chosen is written.

### KATHU AREA



SCALE: 1cm REP 1km

#### KEY

	Coffee		Permanent buildings		Tarmac road
	Railway line		River and bridge		Forest
	Village		Quarry		Murrum road
	Police office		National park		Coffee factory
	District Office				

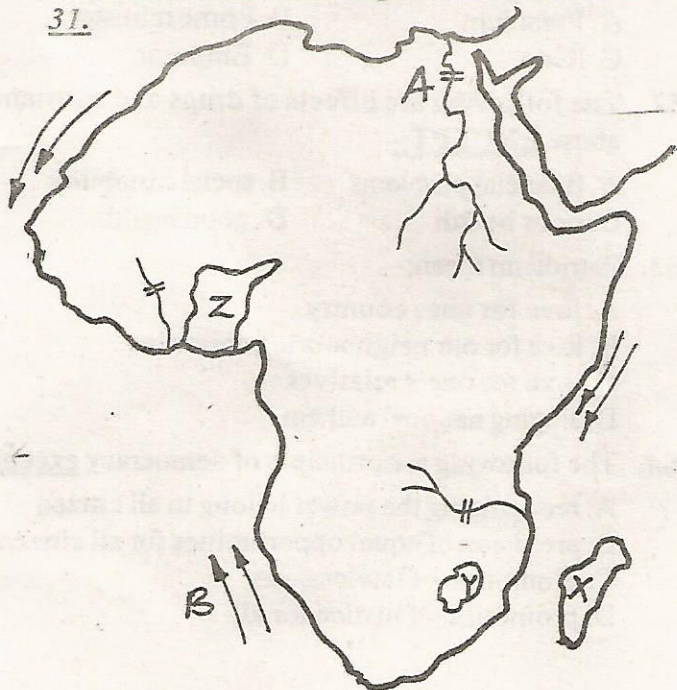
Study the map of Kathu area and answer questions 1-7.

- The North Eastern part of Kathu area has:-  
A. cool and wet climate  
B. cool and dry climate  
C. hot and wet climate  
D. hot and dry climate
- What is the direction of the airstrip from the school?  
A. North East                      B. South West  
C. North West                      D. South East
- The airstrip shown on the map is used to transport:-  
A. coffee                              B. stones  
C. tourists                              D. cows
- The people in the area covered by the map is likely to be followers of \_\_\_\_\_ religion.  
A. Islam                                B. Hinduism  
C. traditional                        D. Christianity
- The scale shown on the map of Kathu area is called:-  
A. statement scale                  B. linear scale  
C. ratio scale                         D. representative scale
- The type of soil likely to be found to the South East of Kathu area is:-  
A. Alluvial soil                        B. loam soil  
C. red volcanic soil                  D. sand soil
- The approximate length of the railwayline shown on the map is:-  
A. 12km                                B. 8km  
C. 6 km                                 D. 10 km
- The most Westerly point of Africa is:-  
A. Cape Guardafui  
B. Cape Verde  
C. Cape Aghulas  
D. Cape of Good hope
- Rotation of the earth causes:-  
A. seasons  
B. day and night  
C. phases of the moon  
D. short rains
- What is climate?  
A. Average weather condition over an area recorded for a long period of time  
B. Weather condition of an area recorded daily  
C. Heavy rainfall of an area  
D. High temperature recorded on an area
- The weather instrument used to measure the amount of water vapour in the atmosphere is:-  
A. hygrometer                        B. Thermometer  
C. Anemometer                        D. Barometer


- The process through which the Rift Valley was formed is known as:-  
A. folding                              B. faulting  
C. volcanicity                         D. down warping
- Which of the following rivers have a delta at their mouth?  
A. River Congo and River Zambezi  
B. River Senegal and River Gambia  
C. R. Nile and River Niger  
D. R. Limpopo and River Orange
- What is the time at town P which is 45°E when the time at Greenwich is 12.00 noon?  
A. 9.00 am  
B. 3.00 pm  
C. 12.45 pm  
D. 11.15 am
- Which of the following was the main reason why Nilotes migrated from their original homeland?  
A. To search for pasture and water  
B. Search for fertile land for farming  
C. Diseases and epidemics  
D. External conflicts
- Which of the following shows cushitic speakers only?  
A. Dahalo, Sanye, Afar and Burji  
B. Boran, Oromo, Nuer and Burugu  
C. Rendille, Dinka, Jopadhola and Acholi  
D. Dahalo, Somali, Rendile and Hawa
- In the past people interacted in the following ways EXCEPT:-  
A. trade  
B. intermarriage  
C. education  
D. games
- The following factors affect climate EXCEPT:-  
A. latitude  
B. longitude  
C. shape of the coastline  
D. ocean current
- \_\_\_\_\_ is the smallest or basic social unit in the societies.  
A. Clan  
B. Family  
C. Community  
D. County
- The following are types of marriage EXCEPT:-  
A. come we stay marriage  
B. customary marriage  
C. civil marriage  
D. religious marriage

21. (i) Write minute during staff meeting  
(ii) Teaches some lessons  
(iii) Head of discipline in the school  
The above are descriptions suits for:-  
A. headteacher B. deputy headteacher  
C. assistant teacher D. senior teacher
22. The cocoa triangle in Ghana consists of the following town **EXCEPT**:-  
A. Accra B. Kumasi  
C. Tamale D. Takoradi - sekondi
23. The following condition favours the growth of:-  
(i) Well distributed rainfall 1000 - 1500mm p.a  
(ii) High altitude over 1800m  
(iii) Well drained volcanic soils  
A. Pyrethrum B. Coffee  
C. Tea D. Cloves
24. The seasonal movements by pastoral communities in search of pastures for their animals is known as:-  
A. transhumance B. migration  
C. emigration D. immigration
25. The main problems facing pastoral farming in Africa is:-  
A. diseases  
B. land pressure  
C. attack by wild animals  
D. transport
26. The method of irrigation used in Pekerra irrigation scheme in Baringo county is:-  
A. canal B. furrow  
C. dripping D. overhead irrigation

Use the map below to answer questions 27 to 31.



27. The country marked X was colonized by:-  
A. Portugal B. Italians  
C. French D. Britain
28. The multi purpose river project marked A was mainly constructed to:-  
A. control floods  
B. produce H.E.P  
C. provide water for irrigation  
D. attract tourists
29. The ocean current marked B is known as:-  
A. cold canary current  
B. warm guinea current  
C. warm Benguela current  
D. cold Benguela current
30. The main species of trees found in the country marked Y is:-  
A. soft woods B. hard woods  
C. indigenous tree D. non of the above
31. The **MAIN** mineral mined in the country marked Z is:-  
A. copper B. gold  
C. petroleum D. diamond
32. The **MAIN** method used to mine copper when it is near the surface is called:-  
A. shaft method B. dredging  
C. stripping D. drilling
- 33.



The method of fishing shown above is:-

- A. net drifting B. longline  
C. trawling D. purse-seining
34. The **MAIN** problem facing fishing in lake Viet is:-  
A. water hyacinth  
B. over fishing  
C. pollution  
D. lack if markets for fish
35. The following are members of COMESA **EXCEPT**:-  
A. Zambia B. Tanzania  
C. Madagascar D. Rwanda

36. The headquarters of East Africa Community are found in:-  
 A. Arusha                      B. Dodoma  
 C. Addis Ababa                D. Nairobi
37. The MAIN touring attraction along the Kenyan Coast is:-  
 A. Fort Jesus  
 B. Vasco Dagama pillar  
 C. wildlife  
 D. sandy warm beaches
38. Which one of the following industries can be classified as a processing industry?  
 A. Petroleum refining  
 B. Glass making  
 C. Milk packaging  
 D. Tyre retreading
39. The MAIN method used to transport electricity from power station to consumer is:-  
 A. pipeline transport  
 B. cable transport  
 C. air transport  
 D. road transport
40. The earliest inhabitants of South Africa were:-  
 A. Khoisan                      B. Dutch  
 C. European                    D. Tswana
41. The title given to the Nyamwezi chief was:-  
 A. Katikiro                      B. Lukiko  
 C. Ntemi                         D. Nabongo
42. Who among these explorers discovered the source of river Nile?  
 A. Vasco Dagama                B. John Speke  
 C. Richard Burton               D. Samuel Baker
43. The following describe a certain businessman.  
 (i) *He was sent from Scotland*  
 (ii) *He founded Imperial British East Africa Company (IBEAC)*  
 The personality described above is:-  
 A. John Rebman  
 B. Seyyid Said  
 C. Carl Peters  
 D. William Macknon
44. The Maji maji rebellion of 1905 - 1907 was led by:-  
 A. Kinjeketile Ngwale        B. Jumbes and Akidas  
 C. Chief Mkwawa                D. Germans
45. The Old Ghana kingdom was founded by:-  
 A. Fulani                         B. Soninka  
 C. Debele                         D. Snona
46. The MAIN reasons why European scrambled and partitioned Africa was:-  
 A. to stop slave trade  
 B. to spread Christian  
 C. to obtain raw materials for their industries  
 D. to invest their surplus capital
47. The Berlin conference concluded the following EXCEPT:-  
 A. Feature dispute to be solved through negotiations  
 B. King Leopold II was made leader of Congo Free state  
 C. European power to start effective administration  
 D. Sphere of influence should be rewarded
48. Which of these countries from Africa were never colonized?  
 A. Liberia and Gambia  
 B. Sierra Leone  
 C. Ethiopia and Garbon  
 D. Liberia and Ethiopia
49. Who of the following resisted the European occupation in Africa?  
 A. Koitalel Arap Samoei  
 B. Waiyaki wa Hinga  
 C. Loibon Lenana  
 D. Karuri wa Gakure
50. Ghana attained independence through:-  
 A. fighting guerilla technique  
 B. diplomacy  
 C. Constitutional mean  
 D. armed struggle
51. Swaziland is headed by:-  
 A. President                      B. Prime minister  
 C. King                             D. Emperor
52. The following are effects of drugs and substance abuse EXCEPT:-  
 A. financial problems        B. social instability  
 C. poor health                    D. good health
53. Patriotism mean:-  
 A. love for ones country  
 B. love for our neighbouring countries  
 C. love for one's relatives  
 D. singing national anthem
54. The following are principle of democracy except:-  
 A. recognizing the power belong to all citizen  
 B. provision of equal opportunities for all citizens  
 C. promotion of lawlessness  
 D. promotion of justice for all

55. Which one of the following groups consists of abuse of human rights?

- A. Free education, discrimination on the basis of gender
- B. Provision of food, lack of shelter
- C. Child labour, early marriages
- D. Lack of treatment for the sick, proper clothing

56. Which of the following factors **DOES NOT** promote peace?

- A. Dialogue
- B. Nepotism
- C. Tolerance
- D. Games and sports

57. The body incharge of election in Kenya is called:-

- A. Interim Electoral and Boundaries Commission
- B. Independent Electoral and Boundaries Commission
- C. Independent Electoral and Boundaries Convention
- D. Independent and Boundaries Commission

58. The following are ways of resolving conflict **EXCEPT:-**

- A. discrimination
- B. litigation
- C. negotiation
- D. mediation

59. The following are arms of the government except:-

- A. executive
- B. national defence
- C. legislature
- D. judiciary

60. Population census in Kenya is usually held after:-

- A. 5 years
- B. 7 years
- C. 10 years
- D. 2 years

## SECTION II

### CHRISTIAN RELIGIOUS EDUCATION

61. Man being a special creation was given authority in the garden of Eden in all the following ways except:-

- A. guard and protect all birds
- B. crawl like a baby
- C. take control of all animals
- D. take care of all the fish

62. Who among the following people first ruled Israelites when they settled in the promised land?

- A. Moses
- B. Judges
- C. Priests
- D. Kings

63. Which one of the following is **NOT** a way through which we improve our abilities?

- A. Listening and not following instructions
- B. Assisting those who need our help
- C. Practising more
- D. Sharing our abilities with others

64. The flying doctors services are mostly needed in the:-

- A. remote and rural areas of Kenya
- B. places where robbery with violence is common
- C. urban areas where people are often involved in critical illnesses
- D. factories where accidents usually occur

65. The term "The clergy" in the church refers to:-

- A. mature male members of the church
- B. the catechists
- C. bishops, priests, pastors
- D. ushers

66. Which one of the following is a Bible example of serving others?

- A. Jacob taking care of Laban's cattle
- B. Jesus clearing the temple
- C. Jesus washing his disciples feet
- D. Esau hunting for a game to feed Isaac

67. One of the following prophets prophesied about the new covenant. Who is it?

- A. Micah
- B. Habakkuk
- C. Malachi
- D. Jeremiah

68. Which of the following stories in the bible teaches about concern and sharing: The story of \_\_\_\_\_

- A. Paul and Silas
- B. Job
- C. The rich woman of Shunem
- D. Gideon

69. Happy are the peace makers for they \_\_\_\_\_

- A. shall be comforted
- B. shall be called sons of God
- C. God will be merciful to them
- D. shall be blessed

70. The "Passover" means:-

- A. Israelites being delivered from Egypt
- B. An angel of death passing over Israelites houses
- C. killing of Israelites first born
- D. the feast held before delivery of Israelites from Egypt

71. Why did the members of the early church community appoint the seven helpers?

- A. To seek freedom for the Christians in prison
- B. To stop Saul from prosecuting Christians
- C. To help Christians to sell their property
- D. To ensure that the food is distributed to the widows

72. Jacob showed tolerance and patience by:-  
 A. working for fourteen years to marry Rachael  
 B. accepting to work in Laban's shamba  
 C. deciding to marry Leah instead of Rachael  
 D. falling in love with Rachael
73. Which of the following shows the gifts of the Holy Spirit only?  
 A. Prophecy, faithfulness, knowledge  
 B. Peace, self control, faithfulness  
 C. Wisdom, preaching, faithfulness  
 D. Faith, working miracles, knowledge
74. Which one of the following activities by Christians in Kenya show their involvement in community development?  
 A. Celebrating Christian festivals  
 B. Holding fellowship meetings  
 C. Funding local youth projects  
 D. Attending church services
75. Three of the following people received information about the birth of Jesus from an angel EXCEPT:-  
 A. Mary  
 B. King Herod  
 C. Joseph  
 D. shepherds
76. Setting our lives apart to be used by God is:-  
 A. faith B. holiness C. love D. joy
77. Daniel shares his things with the needy at school. The value that Daniel show is:-  
 A. respect B. mercy  
 C. charity D. discernment
78. Which one of the following gives hope to life after death?  
 A. Believe in Jesus  
 B. Believe in Church  
 C. Believe in the spirit  
 D. Believe in death and resurrection of Jesus
79. Jesus compared the lit lamp covered with a bowl with talents that are:-  
 A. not used B. over used  
 C. about to be used D. not there at all
80. According to apostle Paul, love and respect between a husband and a wife is like love between:-  
 A. Jesus and the church  
 B. Christians and friends  
 C. Children and parents  
 D. A boy friend and a girl friend
81. Which one of the following is not a cause of child labour?  
 A. Death of parents  
 B. School dropout  
 C. Broken family  
 D. Responsible parenthood
82. Which one of the following is NOT a reason for missionaries to come to Kenya?  
 A. To learn more about African traditional heritage  
 B. To teach how to read and write  
 C. To build schools  
 D. To preach the good news
83. Christians should pay taxes to:-  
 A. support the families of the leaders  
 B. support God's work in the world  
 C. help the poor in the country  
 D. please the authority
84. The best way in which Christians should help in maintaining peace in the community is by:-  
 A. obeying the laws of the country  
 B. Reporting law breakers to the authority  
 C. helping the needy in the society  
 D. Preaching against evil in the society
85. In traditional African communities ancestral spirits were best pleased through:-  
 A. calling out their names  
 B. singing songs to them  
 C. praying for them  
 D. naming children after them
86. Anyone in African traditional society who was not able to have children was considered:-  
 A. a blessing B. an elder  
 C. an outcast D. a law breaker
87. Which one of the following organizations does not help in taking care of refugees?  
 A. NCKK B. UNHCR  
 C. SDA D. WHO
88. Jane is a committed Christian. She can serve God in her church in the following ways EXCEPT:-  
 A. singing in the choir  
 B. teaching Sunday school  
 C. attending church wedding  
 D. visiting the sick
89. Who translated the bible into Kiswahili?  
 A. Kraph  
 B. Daving Livingstone  
 C. Johannes Rebman  
 D. Henry Stanely
90. Mr. Kamenya your Kiswahili teacher has refused to mark your books because his salary has been delayed. How will you advise him as a Christian?  
 A. He should go and request for his salary  
 B. He should be patient  
 C. He should stop teaching the pupils  
 D. He should resign and go home