


Use the map of Wanjo area above to answer questions 1 - 7

- Which of the following statement is **TRUE** about Wanjo area?
 - The area is hot and dry.
 - The administrative head of the area is a Chief.
 - Ranching is a major economic activity in the area.
 - The area receives convectional rainfall.
- The railway line in Solai area is used to transport ____
 - stones
 - sisal
 - passengers
 - water
- Which of the following is the highest in altitude according to the map?
 - The quarry
 - The police Station
 - Kimbo Hill
 - Benda market
- The government gave out money as part of the constituency Development Fund (CDF). Which of the following would the residents of this area build first?
 - A constituency office
 - A chief's office
 - A railway station
 - A dispensary
- The **MAIN** economic activity in Wanjo area is ____
 - mining
 - hunting
 - farming
 - trading
- What is the approximate length of the murram road?
 - 9.5km
 - 12km
 - 5km
 - 10km
- What is the direction of the quarry from Bero hill?
 - North West
 - South East
 - North East
 - South West
- River Niger and R. Nile have one major thing in common. It is ____
 - the longest rivers in Africa.
 - the rivers with most fish.
 - forms an estuary in the mouths.
 - forms a delta in their mouths.
- Who among the following are not bantus found in Tanzania?
 - Nyamwezi
 - Baganda
 - Chagga
 - Ngoni
- The chief legal advisor of the government in Kenya is ____
 - attorney General
 - chief justice
 - speaker
 - prime minister
- Which one of the following is the main reason why Kariba dam was established ____
 - to create a centre for tourism
 - to control floods on river Zambezi
 - to produce hydro-electric power
 - to provide water for irrigation

- The main gold mining area of South Africa is:-
 - Johannesburg
 - Cape town
 - Petersburg
 - Witwatersland
- _____ **DOES NOT** influence rapid industrialization in Kenya
 - Development of power stations
 - High tax on imported raw materials.
 - Establishment of export.
 - Development in agriculture.
- The diagram below shows _____



- formation of a crater lake.
 - formation of a tarn
 - formation of an ox-bow lake.
 - formation of mane-dammed lake.
- One of the following is an example of the above lake:-
 - L. Teleki
 - L. Chad
 - L. Kanyamboli
 - L. Malawi
 - Which one of the following is the **MAIN** problem facing forestry in Africa?
 - Cutting down of trees to create room for human activities.
 - Attack by pests and diseases.
 - Fires during the dry period
 - Poor methods of exploiting forest resources.
 - The major problem facing regional trade in Africa is ____
 - poor transport system.
 - lack of a common currency
 - political instability
 - similarity of goods produced.
 - The main power dam of Zambia and Zimbabwe is known as ____
 - Cabora Bassa Dam
 - Kainji dam
 - Kariba dam
 - Verwoed dam
 - Three of the following are ways of demonstrating patriotism **EXCEPT:-**
 - Obedying the laws of the country.
 - Participating in corrupt deals to become rich quickly.
 - Paying taxes
 - Respecting other peoples property

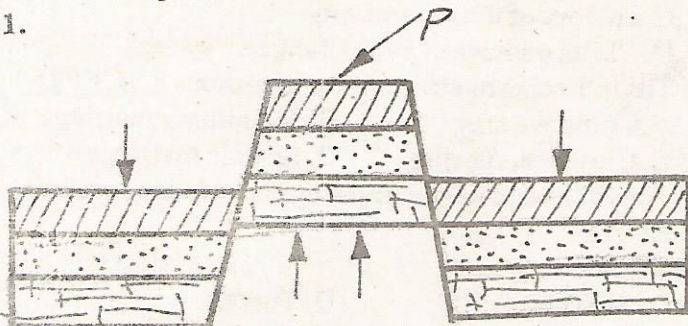
20. Which one of the following is NOT a role of a citizen in the government?
 A. Inciting other citizens.
 B. Participating in development projects.
 C. Participating in the election process.
 D. Attending public meetings.
21. The following are some of the ways through which citizens can participate in a democracy except?
 A. Voting during elections
 B. Seeking elective seats
 C. Seeking dialogue over problems
 D. Refusing to vote completely
22. The human rights in Kenya are contained in which document?
 A. The Kenya Gazette
 B. The Referendum
 C. The Constitution
 D. The voters register
23. A person invited by parties that are in conflict to help them resolve their differences is known as ____
 A. an empire B. an arbitrator
 C. an administrator D. a solicitor
24. Which one of the following undermines law and order?
 A. Nepotism B. Faithfulness
 C. Equality D. Patriotism
25. Which one of the following is the arm of government that implements its policies?
 A. Judiciary B. Cabinet
 C. Legislature D. Executive
26. In order for a constitutional amendment to be affected, it should be approved by the ____
 A. Cabinet Secretary
 B. Attorney General
 C. President
 D. chairperson of the constitutional Review Commission
27. The subordinate staff in parliament are employed by ____
 A. parliamentary select commission
 B. parliamentary service commission
 C. judicial service commission
 D. president
28. All the election petitions except the presidential election petitions are filed in the ____
 A. Courts martial
 B. supreme court
 C. High Court
 D. Chief Magistrate Court.
29. Cases concerning military offences are held in the:-
 A. kadhi's Court
 B. Court martial
 C. High Court
 D. Kenya Court of appeal
30. Which of the following marriages is presided over by the District Commissioner?
 A. Civil marriage B. Christian marriage
 C. Customary marriage D. Islamic marriage
31. Which one of the following was mainly acquired through apprenticeship in traditional African education?
 A. Iron smelting skills
 B. Social values
 C. History of the community
 D. Skills on how to avoid danger.
32. The following marriages are polygamous EXCEPT:-
 A. Come we stay B. Customary marriage
 C. Christian marriage D. Islamic marriage
33. The following language groups are Mande speakers except?
 A. Soninke B. Malinke
 C. Mande D. Tuareg
34. Which of the following statements given below might have influenced the migration of the Bantu from Shugwaya?
 A. Influence by other language groups
 B. Escape from the Galla hostilities.
 C. Search for land to settle and farm
 D. Search for pasture land and water for the animals
35. Which of the following consists of Western bantus only?
 A. Abakuria, Abagusii, Abaluhya
 B. Abakuria, Wadawida, Abagusii
 C. Akamba, Abakuria, Ameru
 D. Aembu, Ambere, Abagusii
36. In which of the following months is the sun overhead the equator?
 A. June and September
 B. December and March
 C. March and September
 D. June and December
37. Below are characteristics of a certain climate.
 (i) *Hot summers and cold winters*
 (ii) *Found in North Africa and Cape Province*
 (iii) *Receive rain during winter season.*
 Which climate is this?
 A. Tropical climate
 B. Mediterranean climate
 C. Equatorial climate
 D. Mountain climate
38. Which instrument is CORRECTLY matched with its use?
 A. Windvane- temperature
 B. Raingauge- intensity of wind
 C. Thermometer- rainfall
 D. Anemometer- speed of wind

39. Acacia trees are mainly found in ___ vegetation.
 A. Savannah B. Mediterranean
 C. Hot desert D. Mountains
40. Below are uses of a certain mineral in Kenya.

- (i) Used to flavor food.
 (ii) Use to make glass and soap
 (iii) Used to preserve food

The above mineral is _____
 A. limestone B. salt
 C. flourspar D. diatomite

41.

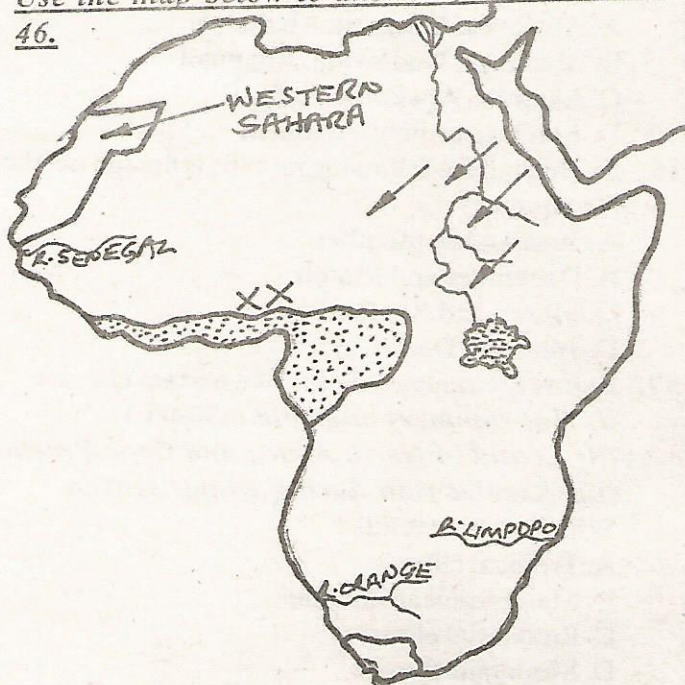


The part marked P is called _____
 A. Riftvalley B. Lava
 C. Faultline D. Horst

42. The following are results of Arab interaction along the Coast **EXCEPT:-**
 A. Spread of Islam
 B. Spread of Christianity
 C. Emerging of a new language kiswahili
 D. Growth of towns.

Use the map below to answer questions 43 to

46.



43. The prevailing winds shown on the map using arrows are _____
 A. land and see breezes
 B. harmattan winds
 C. off-shore North East trade winds.
 D. On- shore westerlies.

44. The shaded region to the Southern part of Africa experiences a climatic condition called _____
 A. mediterranean climate
 B. desert climate
 C. mountain climate
 D. temperate climate

45. The area marked xx on the map is covered by the vegetation which has _____
 A. the typical trees are acacia and baobab
 B. vegetation that changes as altitude increases.
 C. tall elephant grasses
 D. tall trees which grow very close together.

46. The country shown on the map as Western Sahara was colonised by a European power called _____
 A. French B. Spain
 C. Belgium D. British

47. The seasonal climate is not experienced in Africa because _____
 A. the sun is overhead equator two times in the year.
 B. the seasons are caused by the revolution of the earth.
 C. African is within the tropics.
 D. they are transtional seasons.

48. Which one of the following **does not** have an effect on the climate of a given place?
 A. Deforestation B. Industrial pollution
 C. Global warming D. Rotation of the earth
49. The most southerly point of the African continent is

- _____
 A. cape Aqulhas B. cape town
 C. Durban D. port Elizabeth

50. The trade between the people of old Ghana and North Africa was popularly known as _____
 A. long distance trade
 B. trans-Saharan trade
 C. triangular trade
 D. desert storm trade

51. The following are African leaders who collaborated with the Europeans to establish colonial rule with the exception of _____

- A. Lenana B. Lewanika
 C. Kabaka Mwangi D. Kabaka Mtesa

52. Which one of the following became the title of the head of state in Kenya when the country was declared a republic?

- A. Governor B. Emperor
 C. President D. Prime minister

53. Population of Africa has been increasing rapidly. The **MAIN** cause of the population growth is _____

- A. outbreak of killer disease.
 B. improved medical care and hygiene
 C. improved eating habits.
 D. high birth rate

54. Tourism industry earn Kenya a lot of foreign exchange. The industry is threatened by three of the following EXCEPT:-

- A. Poaching
- B. Terrorism
- C. Political stability
- D. Political instability

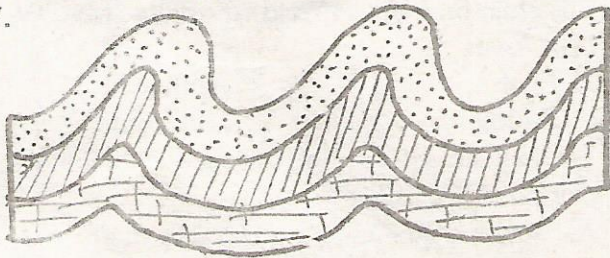
55. Which of the following is a role of the school management committee?

- A. Planning development projects.
- B. Disciplining teachers.
- C. Supervising class attendance by teachers.
- D. Disciplining teachers.

56. Three of the following were functions of a clan. Which one was not?

- A. Choosing marriage partners.
- B. Settling disputes
- C. Determining religious practices
- D. Allocating clan land to individual families.

57.



Which of the following mountains was formed as a result of the activity above?

- A. Ahaggar and Tibesti
- B. Adamawa, Elgon
- C. Cape ranges, Atlas
- D. Usambara, Ruwenzori

58. Three of the following towns developed as a result of mining EXCEPT:-

- A. Mwadui
- B. Kilembe
- C. Nakuru
- D. Magandi

59. (i) I was born in 1906

(ii) I was a poet

(iii) I was the greatest African writer.

(iv) I was the first president to retire voluntarily?

Who was I?

- A. Julius Nyerere
- B. Leopold Senghor
- C. Jomo Kenyatta
- D. Gamal Abdel Nasser

60. Who chairs parliamentary debates in the absence of the speaker?

- A. Deputy speaker
- B. Deputy president
- C. Chief whip
- D. Sergeant at- arms

SECTION B

CHRISTIAN RELIGIOUS EDUCATION

61. The main purpose of the creation story in the bible is to show that

- A. the Jews are God's chosen race
- B. the relationship between God and man kind
- C. God did not create some dangerous animals
- D. God is the creator of everything

62. During the covenant at mount Sinai, Moses took half the blood of the animals sacrificed and sprinkled it on the alter. Then he took the other half and

- A. offered it to God at the alter
- B. sprinkled it on the people
- C. poured it on the sacrifice
- D. poured it on the ground

63. The disobedience of Adam and Eve to God's command in the garden of Eden resulted in

- A. a broken relationship between God and man
- B. human beings ability to do the work of God
- C. God destroying human beings
- D. God abandoning human beings to act as they please

64. The ark of Noah rested on the mountain ranges of

- A. Horeb
- B. Sinai
- C. Arabia
- D. Ararat

65. During his free time, David played the harp for king Saul (1 Samuel 16:23). This teaches christian that during their freetime they should

- A. use their talents
- B. fight others
- C. visit new places
- D. talk about others

66. Human beings are different from all other creation Mainly because they were created

- A. on the sixth day
- B. in God's own image
- C. when God had created other creations
- D. different from other animals

67. Elisha's servant who did not practise integrity when he asked for some money from Naaman was called (2 kings 5:20-27)

- A. Gehazi
- B. Ananias
- C. Judas
- D. Ahab

68. "I alone know the plans I have for you, plans to bring you prosperity and not disaster." Which prophet was told these words?

- A. Isaiah
- B. Ezekiel
- C. Hosea
- D. Jeremiah

69. The MAIN reason why Abraham is considered important and a role model to christians is that

- A. he obeyed God
- B. he was ready to sacrifice his son Isaac
- C. he was the ancestor of Jesus Christ
- D. he was the grandfather of the people of Israel

70. When two women went to king Solomon with the case of a baby, king Solomon used his wisdom to judge the case. Which one of the following qualities did he apply in giving his judgement?
 A. Humility B. Self-control
 C. Discernment D. Honesty
71. Who among the following people helped in building the sacred tent?
 A. Bezalel and Oholiab B. Oholiab and David
 C. Bezalel and Solomon D. David and Bezalel
72. Luke 3:4 "A voice of one calling in the desert prepare the way for the Lord, make straight paths for him," Whose ways were being prepared?
 A. John the baptist B. Jesus
 C. God's D. Isaiahhs
73. I was discriminated against by my people because of my kind of work but Jesus appreciated me and he became my friend. I am
 A. Zaccheaus B. Zachariah
 C. Nicodemus D. Bartimeaus
74. Which one of the following people is properly matched to what they did?
 A. Jesus: preached in a valley
 B. David: killed King Saul
 C. Shepherds: the first to see baby Jesus
 D. Pharaoh: wanted to kill baby Jesus
75. When the wisemen came to see baby Jesus, they gave him all the following **EXCEPT**:-
 A. Frankincense B. Myrrh C. Silver D. Gold
76. The best way christian can overcome fear of darkness is to
 A. pray to God B. sing christian songs
 C. be with others D. put on lights
77. Jesus was a refugee in _____
 A. Israel B. Egypt C. Syria D. Judah
78. Who among the following is **NOT** a member of the clergy?
 A. Bishop B. Lay reader C. Major D. Pastor
79. Which of the following is not a gift of the Holy Spirit?
 A. Self-control B. Faith C. Wisdom D. Healing
80. The following four pupils had an argument on when eternal life begins
John : It starts when one is born
Kamau : It starts when going to church
Jane : It starts when one accepts Jesus in his/ her life
Dorcas : It starts when one dies
 Who gave the right explanation?
 A. Jane B. Roberts C. Kamau D. John
81. Three of the following teachings encourage christians in their suffering. Which one **DOES NOT**?
 A. Suffering is caused by sin
 B. Jesus suffered for their sake
 C. Suffering strengthens their faith in God
 D. God rewards those who suffer for His sake
82. Which one of the following events in the Bible took place first?
 A. The coming of the Holy Spirit in Jerusalem to the disciples
 B. The death of Jesus
 C. The last supper
 D. Jesus turning water into wine at Cana
83. Christian values are important to us because
 A. they make us to be more dedicated
 B. they help us acquire eternal life
 C. they make us more popular
 D. God wrote them
84. The name given to the first laity of the early church is _____
 A. ordained B. clergy C. ushers D. deacons
85. The elder brother of David who called him "**cheeky brat**" was _____
 A. Eliab B. Abinadab
 C. Zadok D. Absalom
86. We can do all the following to cope with our emotions **EXCEPT**
 A. seeking guidance from God through prayers
 B. consulting someone more experienced than us
 C. quarrelling those who hurt us
 D. forgiving those who wrong us and praying for them
87. Which one of the following is **NOT** a similarity between Christianity and African Traditional Society?
 A. There is life after death
 B. Reconciliation rites
 C. God is creator of the universe
 D. Reading the scripture
88. In traditional African religion, people pray mainly during the
 A. time of need B. time of harvest
 C. morning hours D. evening hours
89. Mukami has been given five hundred shillings by her uncle. As a christian, the Best way to spend his money is to
 A. organise a birthday party
 B. spend some of the money to buy for orphans
 C. go and watch film
 D. buy a new dress
90. Who were the first missionaries to come to Kenya?
 A. Vasco da Gamma and Ludwig Krapf
 B. Napoleon and Johann Rebmann
 C. Johann Rebmann and Ludwig Krapf
 D. David Livingstone and Stanley Speke