

# TOP MARK SERIES

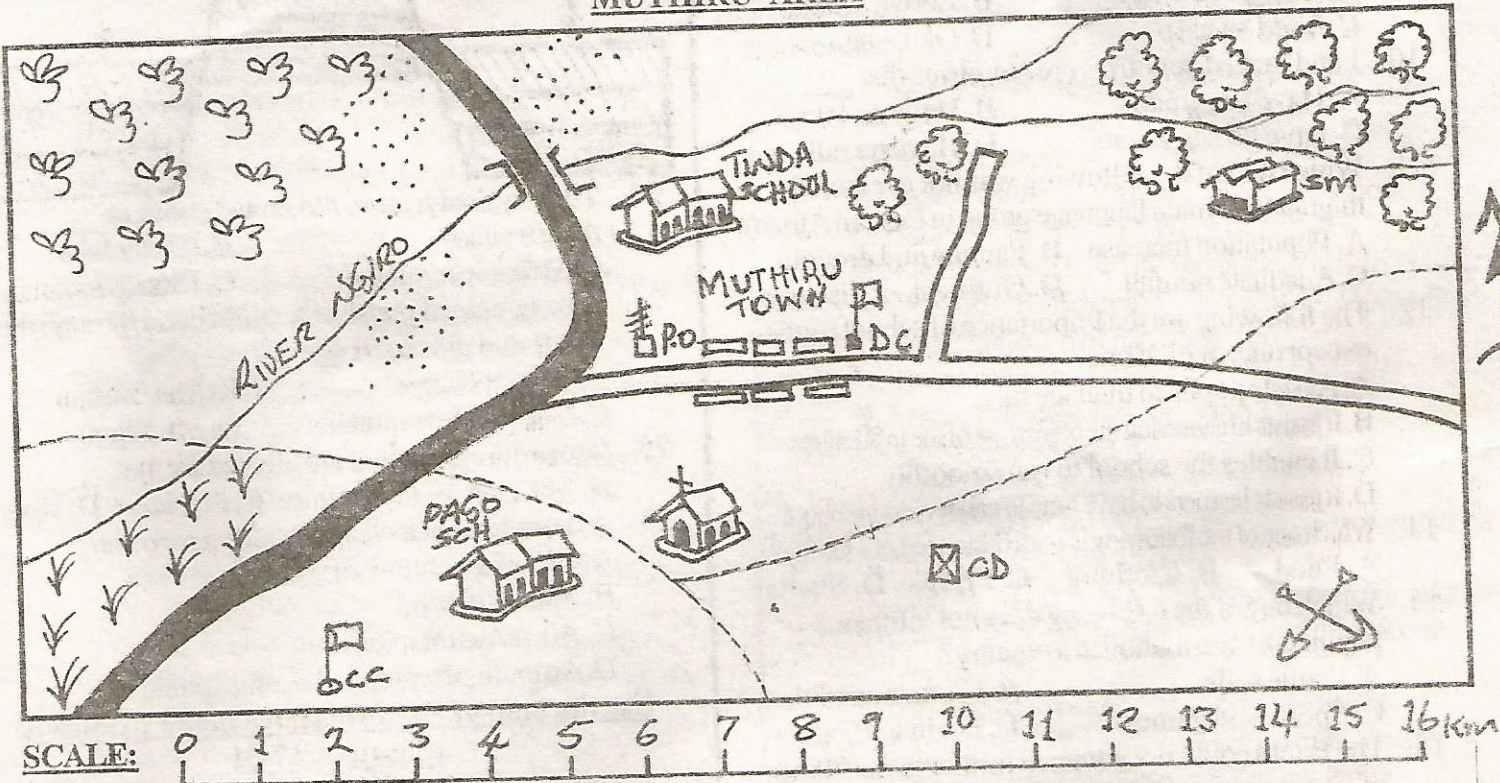
AIMWA  
010

TERM III

SOCIAL STUDIES & C.R.E

STD 6

MUTHIRU AREA



SCALE:  
KEY

School	Tarmac road	Murram road	Chief
Post office	Maize	River and bridge	Tea
Sawmill	Houses	District commissioner	Cattle dip
Locational boundary	Forest	Quarry	Church
Saw mill			

Use the map of Muthiru area to answer questions

1-7

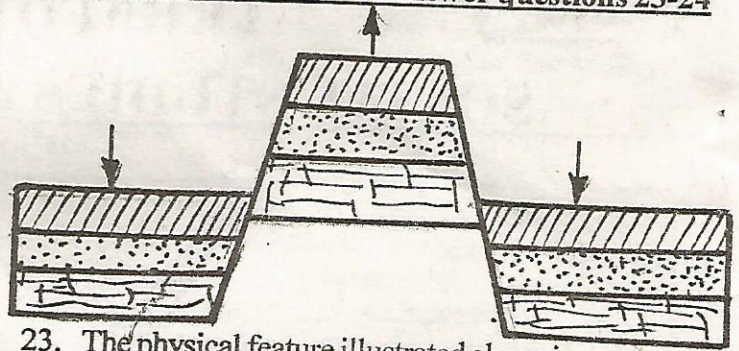
- The direction of Pago school from sawmill is \_\_\_\_  
A. SouthEast                      B. SouthWest  
C. North West                      D. NorthEast
- The people of Muthiru area are likely to be?  
A. Christians    B. Hindu    C. Pagans    D. Islams
- Muthiru area is likely to be a \_\_\_\_  
A. Location                      B. Division  
C. District                      D. Sub-location
- The people of Muthiru area are likely to practise?  
A. Arable                      B. Plantation  
C. Pastoralists                      D. Mixed farming

- The following are economic activities carried out in Muthiru area except one. Which one?  
A. Agriculture                      B. Trade  
C. Fishing                      D. Mining
- The climate of the North West of Muthiru area is likely to be?  
A. Hot and dry                      B. Cool and wet  
C. Cool and dry                      D. Wet and hot
- The tarmacked road in Muthiru area is likely to transport?  
A. Maize                      B. Mineral  
C. Fish                      D. Animals

8. Which one of the following communities belongs to the same language group?
  - A. Akamba, Samburu, Turkana
  - B. Iteso, Njemps, Samburu
  - C. Maasai, Pokomo, Borana
  - D. Taita, Ameru, Samburu
9. A swamp of floating vegetation found along the banks of the river Nile in Sudan is known as \_\_\_\_\_.
  - A. Mangrove swamp
  - B. Lorian swamp
  - C. Sudd swamp
  - D. Okavango swamp
10. Land locked countries are countries that \_\_\_\_\_.
  - A. Have no airports
  - B. Have no lakes
  - C. have no sea coasts
  - D. Have no railways
11. Which one of the following was not a reason for migration of main language group in Eastern Africa?
  - A. Population increase
  - B. Famine and drought
  - C. Adequate rainfall
  - D. Outbreak of diseases
12. The following are the importance of school routine except one. Which one?
  - A. Assists pupils to manage time
  - B. It assists in achieving the objectives of the institutions
  - C. It enables the school to run smoothly
  - D. It assists learners to have time to create riots in school
13. Which one of the following is not a basic need of a family?
  - A. Food
  - B. Clothing
  - C. Fridge
  - D. Shelter
14. Which one of the following does not influence population distribution in a country?
  - A. Fertile soils
  - B. Climate condition
  - C. Sports and games
  - D. Drainage feature
15. The Bantu could not advance further to the North of Shungwaya because \_\_\_\_\_.
  - A. Fear of wild animals
  - B. Fear of attacks by Galla
  - C. The area receives little rainfall
  - D. Lack of food and water
16. The main coffee growing areas in Ethiopia are the provinces of?
  - A. Busia and Kaffa
  - B. Bungoma and Kaffa
  - C. Kaffa and Harar
  - D. Kiyenzi and Harar
17. One of the following is a sugar factory in Kenya. Which one?
  - A. Nyando
  - B. Chemilil
  - C. Busia
  - D. Kisii
18. The world's leading sisal growing and exporting country is?
  - A. Kenya
  - B. Zanzibar
  - C. Tanzania
  - D. Sudan
19. The following are types of fish caught in the marine fishing in Eastern Africa except?
  - A. Mudfish
  - B. Tuna
  - C. Mullet
  - D. Sailfish
20. The main problem facing fishing in East Africa is inadequate capital to \_\_\_\_\_.
  - A. To build prisons for pirates
  - B. To chase poachers
  - C. Buy fishing equipment
  - D. To pay fishermen
21. At what time of the day do land breezes occur?
  - A. At night
  - B. Daytime
  - C. Midday
  - D. In the morning

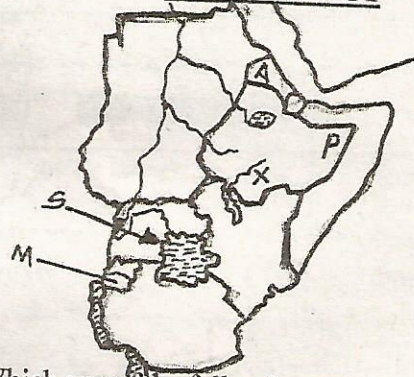
22. In Traditional African society young people are taught good moral values by?
  - A. Elders
  - B. Warriors
  - C. Chiefs
  - D. Young brothers

**Use the diagram below to answer questions 23-24**



23. The physical feature illustrated above is \_\_\_\_\_.
  - A. Rift valley
  - B. Crater lake
  - C. Volcanic mountain
  - D. Block mountain
24. An example of physical feature found through the illustrated process is \_\_\_\_\_.
  - A. Mount Kenya
  - B. Ras Dashan
  - C. Usambara mountains
  - D. Mt. Elgon
25. Governors in Kenya are elected by the \_\_\_\_\_.
  - A. Speaker
  - B. Councilors
  - C. President
  - D. Voters
26. A barometer at a weather station records?
  - A. Direction of flow of wind
  - B. Speed of wind
  - C. Air pressure of an area
  - D. Amount of water in the atmosphere


**Use the map of Eastern Africa below to answer questions 27-31**



27. Which one of the following communities is found in the country marked M?
  - A. Ngoni
  - B. Oromo
  - C. Dinka
  - D. Hutu
28. The river marked X is \_\_\_\_\_.
  - A. Awash
  - B. Omo
  - C. Blue Nile
  - D. Atbara
29. Which one of the following communities used the route marked S during migration?
  - A. Pokot
  - B. Maasai
  - C. Luo
  - D. Kalenjin
30. The natural vegetation found in the area marked P mainly consists of \_\_\_\_\_.
  - A. Papyrus reeds
  - B. Thick evergreen tropical rainforest
  - C. Umbrella shaped tree and tall grass
  - D. Scattered grass and dry bushes
31. The administrative capital of the country marked A is \_\_\_\_\_.
  - A. Port Sudan
  - B. Djibouti
  - C. Asmara
  - D. Addis Ababa

32. Which one of the following lakes in the Rift valley in Kenya is a fresh water lake?  
 A. L. Bogoria B. L. Elementaita  
 C. L. Baringo D. L. Magadi
33. The date of nomination of the candidates is announced by the \_\_\_\_\_  
 A. Chairman of the Electoral Commission  
 B. Presiding officer  
 C. President  
 D. Returning officer
34. The smallest social unit in a community is the \_\_\_\_\_  
 A. Clan B. Family C. Marriage D. Tribe
35. Which one of the following industries is located in Athi river in Kenya?  
 A. Oil refining B. Sugar refining  
 C. Cement making D. Salt making
36. Which one of the following is mainly a plantation crop?  
 A. Onions B. Tomatoes C. Sisal D. Rice
37. The largest inland waterway in Eastern Africa is  
 A. Indian Ocean B. L. Victoria  
 C. L. Turkana D. L. Tanganyika
38. Processing industries are also called?  
 A. Secondary industries B. Tertiary industries  
 C. Assembling industries D. Primary industries
39. (i) *It is a commercial centre*  
 (ii) *It is a transport and communication*  
 (iii) *Established by government policy as the capital city of Tanzania*  
 Which town is described above?  
 A. Arusha B. Tanga C. Dar-es-salaam D. Dodoma
40. Seyyid Said, William Mackinnon and Carl Peters share one feature in common, they were \_\_\_\_\_  
 A. Explorers B. Traders C. Missionaries D. Colonizers
41. The following colonial powers took over Somalia except?  
 A. Germans B. Italians C. British D. French
42. The leader of the majimaji rebellion against the Germans in Tanganyika was called?  
 A. Eliud Mathu B. Abushiri  
 C. Kinjeketile Ngwale D. Mkwawa

Use the diagram below to answer questions



43. The diagram shown above represents which kind of rainfall?  
 A. Convectional B. Orographic  
 C. Tornado D. Cyclonic
44. The main human economic activity on the side marked B is?  
 A. Lumbering B. Mining  
 C. Pastoralism D. Dairy farming

45. In which one of the following towns in Kenya would you expect to find that type of rainfall shown in the diagram?  
 A. Nyeri B. Kisumu C. Malindi D. Lamu
46. Which one of the following factors does not affect the climate of the given place?  
 A. Latitude B. Nature of the Coastline  
 C. Soil D. Winds
47. The tall grass that is commonly found in the Savanna grassland is known as?  
 A. Veld B. Miombo C. Elephant D. Buffalo
48. The original homeland of all the Nilotes living in Eastern Africa is?  
 A. Saudi Arabia B. Congo - Cameroon  
 C. Bahr-el-Ghazel D. Horn of Africa
49. The headquarters of East Africa community are in?  
 A. Dibouti B. Eritrea C. Arusha D. Dodoma
50. The main function of parliament is?  
 A. To make laws  
 B. Investigate cases of corruption  
 C. To discuss budget  
 D. To elect president
51. Which of the following countries is not a member of East African community?  
 A. Kenya B. Somalia C. Uganda D. Tanzania
52. The following are lowland rainforest except one. Which one?  
 A. Arabuko Sokoke B. Aberdare forest  
 C. Witu forest D. Shimba hills forests
53. Three of the following people belong to the Mijikenda group. Which one does not?  
 A. Kauma B. Jibana C. Pokomo D. Duruma
54. Koitalel Arap Samocci was a leader of the \_\_\_\_\_  
 A. Akamba B. Maasai C. Luo D. Nandi
55. In the Buganda kingdom, the Omwanika was \_\_\_\_\_  
 A. Kabaka B. Finance Minister  
 C. Chief minister D. Chief justice
56. Insurance, banking and hotel and catering fall under the category of industries known as \_\_\_\_\_  
 A. Manufacturing B. Service  
 C. Processing D. Jua kali
57. Areas established by the local councils for wild animals are known as?  
 A. Game parks B. Sanctuary  
 C. Game reserves D. Kenya wildlife service
58. The main export of most countries in Eastern Africa is?  
 A. Machinery B. Agricultural products  
 C. Minerals D. Petroleum products
59. Which one of the following factors does not influence trade in Eastern Africa?  
 A. Demand of trade goods  
 B. Availability of capital  
 C. Availability of reliable market  
 D. Rainfall distribution

60. The tropical climate region of Eastern Africa is also known as \_\_\_\_\_  
 A. Equatorial climate                      B. Mountain climate  
 C. Savanna climate                         D. Semi-arid climate

**C.R.E.**

61. When Adam and Eve were created God expected them to \_\_\_\_\_  
 A. Give Him offerings  
 B. Obey all the prophets  
 C. Cultivate the Garden of Eden  
 D. Respect the mother and father
62. Which of the following post did Gideon hold in Israel?  
 A. King    B. Prophet    C. Judge    D. Priest
63. He was disciple of Jesus Christ. He denied Jesus three times. Who is he?  
 A. Judas    B. Peter    C. Andrew    D. Reuben
64. Jesus went to Jerusalem for the \_\_\_\_\_ feast when he was 12 years  
 A. Passover    B. Pentecost    C. Advent    D. Christmas
65. The books written by Paul are called?  
 A. Gospel books                      B. Epistles  
 C. Historical books                      D. Prophecy
66. Moses fled from Egypt when Pharaoh wanted him killed. Which country did he go to?  
 A. Haran    B. Moab    C. Midian    D. Canaan
67. Ancestors are important people in the community because they?  
 A. Are spirits                              B. Demand sacrifices  
 C. Died along time ago                      D. Are founders of the clan
68. Who among the following prophets challenged the priests of Baal on Mount Carmel?  
 A. Jeremiah    B. Elisha    C. Elijah    D. Samuel
69. According to Apostles Creed who will come to judge the living and the dead?  
 A. Jesus                                      B. Holy Spirit  
 C. God                                         D. Pontius Pilate
70. Jesus was killed at a place called?  
 A. Golgotha    B. Bethlehem    C. Jericho    D. Galilee
71. To be a Christian witness is to \_\_\_\_\_  
 A. Accuse those who sin  
 B. Condemn those who sin  
 C. Testify the words and deeds  
 D. Assist thief and pray for them
72. Agreement between God and man is called?  
 A. Holy    B. Promise    C. Covenant    D. Church
73. The first book in the New Testament is?  
 A. Revelation    B. John    C. Mark    D. Mathew
74. Jesus appeared to Cleopas and his friend after resurrections on their way to?  
 A. Jericho    B. Jerusalem    C. Emmaus    D. Galilee
75. Which one of the following is not a gift of the Holy Spirit?  
 A. Teaching                                      B. Peace making  
 C. Preaching                                      D. Healing
76. Which prophet healed Naaman of leprosy?  
 A. Samuel    B. Jeremiah    C. Elijah    D. Elisha

77. Which one is a good way of spending one's leisure?  
 A. Drinking  
 B. Sleeping  
 C. Going for discos  
 D. Helping less privileged in our society
78. Which is the correct order of the first five books of the Old Testament?  
 A. Mathew, Mark, Luke, John  
 B. Genesis, Exodus, Numbers, Leviticus, Deuteronomy  
 C. Genesis, Exodus, Numbers, Deuteronomy, Leviticus  
 D. Genesis, Exodus, Leviticus, Numbers, Deuteronomy
79. From the miracles of the healing of the ten lepers Christians learn that they should be \_\_\_\_\_  
 A. Courageous                                      B. Faithful  
 C. Thankful                                         D. Forgiving
80. Who among the following people showed great faith in God in his sufferings?  
 A. Abraham    B. Moses    C. Job    D. Elijah
81. The African sacrificial offerings can be compared to Christian \_\_\_\_\_  
 A. Sacrament of confirmation                      B. Prayers  
 C. Sacrament of baptism                              D. Self denial
82. Jesus fed five thousand people with \_\_\_\_\_  
 A. 12 baskets of bread and fish  
 B. 5 fish and 2 loaves  
 C. 5 loaves and 2 fish  
 D. 7 baskets of fish and bread
83. The Apostles who went to preach to the Gentiles is?  
 A. Philip    B. John    C. Paul    D. Peter
84. I was chosen by God to lead the Israelites out of Egypt to the Promised Land. Who was I and which was the Promised Land?  
 A. Moses - Canaan                                      B. Jacob- Egypt  
 C. Moses - Israel                                         D. Isaac - Canaan
85. Faith becomes useful and meaningful through \_\_\_\_\_  
 A. Actions    B. Love  
 C. Prayers     D. Honesty
86. We celebrate the death and resurrection of Jesus during?  
 A. Christmas    B. Easter  
 C. Advent     D. Idd il fitri
87. Who among the following was not chosen as a deacon?  
 A. Philip     B. Nicolas  
 C. Prochorus    D. Peter
88. The greatest fruit of the Holy Spirit is \_\_\_\_\_  
 A. Respect     B. Love  
 C. Hope     D. Joy
89. \_\_\_\_\_ was one of Abrahams' brother  
 A. Haran     B. Japheth  
 C. Terah     D. Aaron
90. Who among the following asked for Jesus' body to bury?  
 A. James     B. Nicodemus  
 C. Joseph of Arimathea                                      D. Cleopas