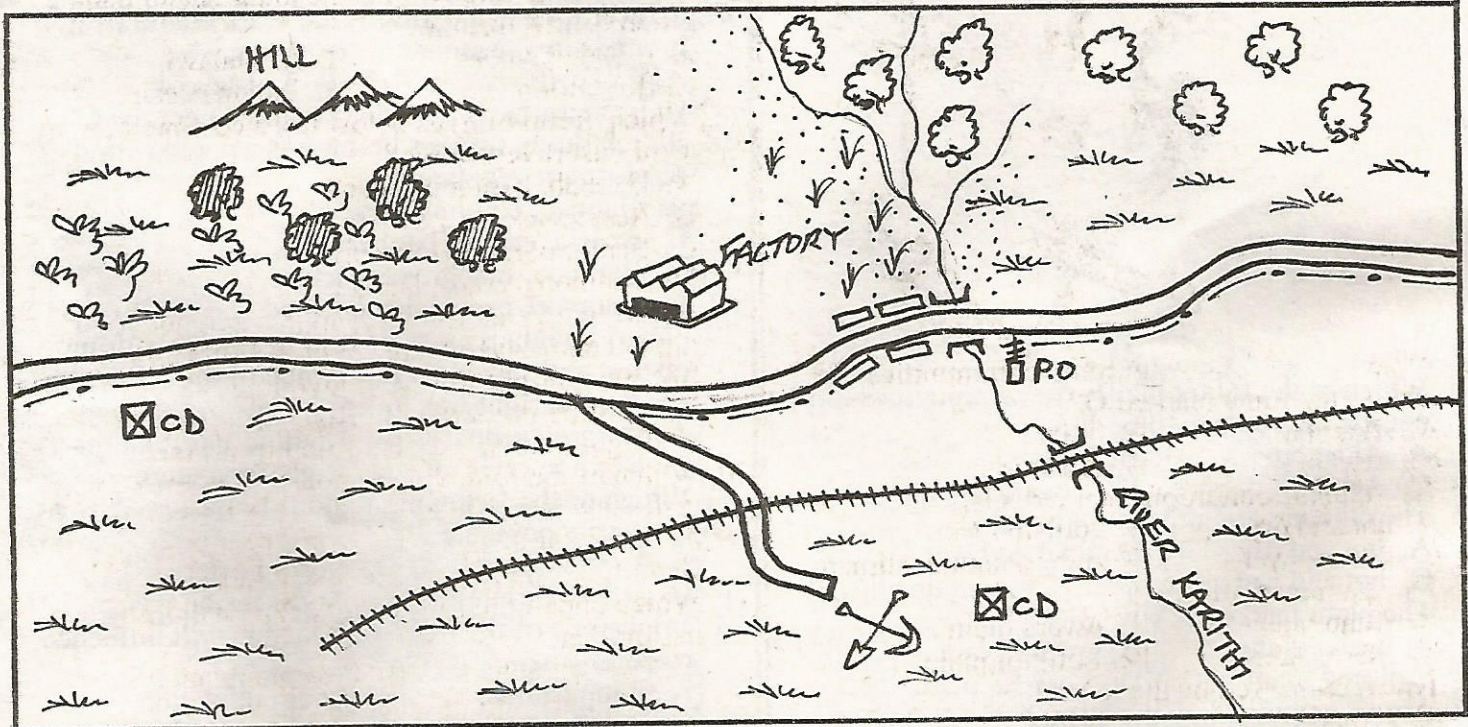


WISDOM SERIES

AIMWA
008

STD 6 - TERM III SOCIAL STUDIES & C. R. E

KANYIMO AREA



KEY

Hill		Post office	
Cattle dip		Tea	
Factory		Railway line	
Tarmac road		Shrubs	
Forest		Pyrethrum	
Quarry		Electric wire	
Grass		Maize	

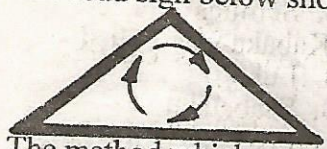
Use the map of Kanyimo area to answer questions 1-7.

- Which is the flow direction of River Karithi on the map? From _____
A. South to North B. North to South
C. North to South East D. North to East
- The highest point is at the _____
A. hill
B. cattle dip to the west
C. at the factory
D. near slopes
- One of the following economic activity is **not** carried out in Kanyimo area. It is _____
A. tourism B. farming
C. trade D. mining
- The climate of Kanyimo area is most likely to be:-
A. hot and wet B. hot and dry
C. cool and wet D. cool and hot
- One of the following is not found in Kanyimo area, it is _____
A. communication B. transport
C. mining D. place of worship
- The quickest means of transport found in the area is:-
A. road B. water
C. air D. railway
- The railway line in the map extract above is used to transport:-
A. cattle B. timber products
C. quarry D. fish
- How old must a Kenyan be to become a voter?
A. 21yrs B. 18yrs C. 35yrs D. 60yrs
- Which one of the following groups of people thought to have migrated from Congo?
A. Nilotes B. Cushites
C. Bantu D. Semites
- The council of chief of Kabaka was called:-
A. Ssaze B. Lukiko
C. Bataka D. Ssabataka
- Which of the following crops is from the large scale in Trans-Nzoia district?
A. Tea B. Oranges
C. Potatoes D. Maize

12. In which year did Maji maji uprising schools?
 A. 1900-1905 B. 1896-1900
 C. 1905-1907 D. 1888-1904
13. Which one of the following shows the swamp found in Sudan?
 A. Lorian swamp B. Shibeli
 C. Lotikipi D. Barhel-gazal

Use the map of Kenya below to answer questions 14-18.



14. Which of the following Bantu communities did not use the route marked Q?
 A. Akamba B. Taita
 C. Aembu D. Abakuria
15. The climatic conditions marked J is:-
 A. hot and dry B. cool and wet
 C. hot and wet D. high mountain climate
16. The plain marked XX is _____
 A. Kano plain B. Awara plain
 C. Mara plain D. Lotikipi plain
17. The river marked by the letter P is _____
 A. Nyando B. Nzoia
 C. Mara D. Kuja
18. The mineral mined at a place marked S is _____
 A. Fluorspar B. Diatomite
 C. Soda ash D. Limestone
19. The first vice president of Republic of Kenya was _____
 A. Joseph Murumbi B. Oginga Odinga
 C. Daniel Moi D. Josphat Karanja
20. Which one of the following is not a relief region in Eastern Africa?
 A. plateaus B. coastal plains
 C. highlands D. forests
21. Which one of the following mountains in Eastern Africa is not a block mountain?
 A. Ruwenzori B. Usambara
 C. Longonot D. Pare
22. Which one of the following means of communication reaches many people in Kenya today?
 A. E-mails B. Newspapers
 C. Radio D. landline telephones
23. The road sign below shows _____

 A. round about B. speed limit
 C. bumps ahead D. danger ahead
24. The method which was used to teach young people social skills was known as _____ in the past?

- A. Informal education B. Experimentation
 C. Apprenticeship D. Formal education
25. Which of the following rivers carries water out of lake Victoria?
 A. Mara B. Kagera C. Kerio D. Nile
26. Which of the following causes lawlessness in a society?
 A. adequate food
 B. conflicts on boundaries
 C. obeying laws
 D. well paid up jobs
27. Which of the following is the main inland fishing grounds in Tanzania?
 A. L. Tanganyika B. L. Malawi
 C. L. Victoria D. Indian ocean
28. Which group of trees below has a composition of semi-desert vegetation?
 A. Baobab, bamboo, acacia
 B. Acacia, cactus, baobab
 C. Bamboo, mangrove, cactus
 D. Bamboo, cactus, baobab
29. Omari bought a piece of land in a neighbouring district and stayed there. Which of the following life human right was he enjoying?
 A. Owning property B. Right to information
 C. Right to civil D. Right to venture
30. Which of the following regions in Eastern Africa is densely populated?
 A. L. Victoria B. North Eastern
 C. N.E to South D. North Sudan
31. Which one of the following factors will influence pastoralism?
 A. Poor climate B. Over population
 C. Reliable rainfall D. Fertile soil
32. When elements of weather are observed, measures and recorded for along period of time of about 30-35 this is called _____
 A. annual weather B. season
 C. climate D. weather forecast
33. The problem of rural-urban migration can be solved by _____
 A. starting industries in rural areas
 B. building good houses in rural areas
 C. forcing people back to rural areas
 D. People who do not work

Use the diagram below to answer question 34.



34. The diagram above shows the formation of:-
 A. land breeze B. ocean winds
 C. sea breeze D. ocean currents
35. The conditions shown in the diagram takes place mainly _____
 A. during the day B. at night
 C. in the evening D. during the rainy season
36. Which of the following communities comprises of the Plain Nilotes only?
 A. Maasai, Samburu B. Kalenjin, Turkana
 C. Pokot and Kalenjin D. Maasai and Pokot
37. Which mineral is wrongly matched with where it is mined?

- A. Diatomite - Mwadui-
- B. Soda ash - Magadi
- C. Copper - Kilembe
- D. Limestone - Kerio valley

38. Which one of the following mountains was found as a result of faulting?

- A. Mt. Kilimanjaro
- B. Ruwenzori mountains
- C. Mt. Meru
- D. Mt. Longonot

39. Which one of the following reasons does not account as to why different communities were migrating during the nineteenth century?

- A. Epidemics
- B. Adventure
- C. Drought
- D. Increase in population

40. The following are uses of a certain mineral mined in Eastern Africa:-

- (i) makes beautiful ornaments
- (ii) it is very hard
- (iii) used for drilling equipment


The mineral described above is likely to be:-

- A. Copper
- B. Diamond
- C. Soda ash
- D. Aluminium

41. The Nyika plateau vegetation consists mainly of:-

- A. Bamboo forest
- B. Desert scrubs
- C. Thorny bushes
- D. Scattered trees

42. The diagram below shows a weather instrument. The instrument is called



- A. Barometer
- B. Anemometer
- C. Hygrometer
- D. Wind vane

43. The above instrument is used to measure:-

- A. the speed of wind
- B. air pressure
- C. amount of humidity
- D. direction of wind

44. The main reason that led to the decline of sisal production in Kenya and Tanzania is _____

- A. competition from synthetic fibres
- B. price fluctuation
- C. costly machinery
- D. lack of cheap labour

45. Which of the following economic activity were the Akamba famous for during the nineteenth century?

- A. Fishing
- B. cattle keeping
- C. Iron smelting
- D. Wood carving

46. Crops grown mainly for family consumption are called _____

- A. food crops
- B. export food
- C. cash crops
- D. subsistence crops

47. Which one of the following countries is land locked?

- A. Kenya
- B. Ethiopia
- C. Somalia
- D. Tanzania

48. The colour of the national flag that stands for the struggle of independence is:-

- A. green
- B. white
- C. black
- D. red

49. Which one of the following communities does not belong to the Mijikenda group?

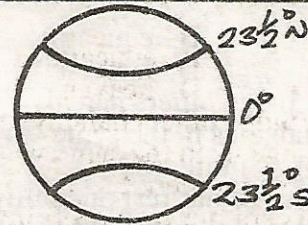
- A. Chonyi
- B. Wadawida
- C. Giriama
- D. Rabai

50. In which year did Kenya attain full independence?

- A. 1961
- B. 1963
- C. 1964
- D. 1952

Use the diagram below to answer questions

51-52.



51. The lines marked $23\frac{1}{2}^{\circ}$ S is _____

- A. Tropic of cancer
- B. Tropic of Capricorn
- C. Prime meridian
- D. Longitude

52. The line marked 0° is the _____

- A. Equator
- B. Latitude
- C. Prime meridian
- D. Tropic of cancer

53. The headquarters of IGAD are based in _____

- A. Somalia
- B. Djibouti
- C. Ethiopia
- D. Kenya

54. Which one of the following factors can promote National unity?

- A. Majimboism
- B. Tribalism
- C. Nepotism
- D. Language

55. Below are problems facing urban centres in Eastern Africa. Which one does not?

- A. good housing
- B. shortage of water
- C. unemployment
- D. traffic jam

56. In Kenya, the main reason why we raise the flag always is to:-

- A. display its beauty
- B. promote loyalty among citizens
- C. show the direction of wind
- D. promote loyalty among citizens

57. The set of rules which govern a county are called:-

- A. the constitution
- B. parliament
- C. democracy
- D. judiciary

58. Tourists in Kenya comes mainly to _____

- A. see Kenyans
- B. meet their funds
- C. see wild animals
- D. buy items

59. Which one of the following is the Kenya's most export?

- A. Agricultural products
- B. Minerals
- C. Fertilizers
- D. Livestock products

60. The fishing method below is best used in:-



- A. muddy water
- B. fast moving water
- C. deep waters
- D. shallow waters

C. R. E

61. The old testament has _____ books.

- A. 27
- B. 37
- C. 39
- D. 66

62. The sign of the covenant between God and Abraham was _____

- A. rainbow
- B. floods
- C. dove
- D. circumcision

63. Happy are those who mourn, _____

- A. God will comfort them
- B. God will reward them
- C. They will see God
- D. They will be called God's children

64. When fasting we should _____
 A. put on sad faces B. do it publicly
 C. not to comb our hair D. look tidy
65. According to Mathew 6:19-21, true riches are found in:-
 A. churches B. education
 C. the world D. heaven
66. We should not judge others harshly _____
 A. God will judge us in the same way
 B. We will not be murdered
 C. Because it is not our responsibility
 D. People will punish us harshly
67. The group of books which explains the birth, mission, death and resurrection of Jesus are called:-
 A. Gospels B. Epistles
 C. Law books D. Books of wisdom
68. The reason why Jesus was taken to Egypt by his parents was:-
 A. to be seen by the Egyptians
 B. to be circumcised
 C. to buy Him clothes
 D. because Herod wanted to kill Him
69. Which prophet killed Baal's prophet at mount Carmel?
 A. Elijah B. Elisha C. Micah D. Daniel
70. Which one of the following miracles was performed by God through prophet Elisha?
 A. getting water from a stone
 B. killing Goliath
 C. changing water into wine
 D. raising the son of the woman from Shunem
71. Jesus was referred to as "teacher" by _____
 A. his parents
 B. John the Baptist
 C. the Holy spirit
 D. the disciples and other people
72. Who of the following buried Jesus?
 A. Mary and Naomi
 B. John and Peter
 C. Peter and Simon of Cyrene
 D. Joseph of Arimathea
73. John the Baptist was killed by the orders of:-
 A. The priests B. The promises
 C. Pilate D. Herod
74. The fourth book in the old testament is _____
 A. Genesis B. Leviticus
 C. Numbers D. Deutronomy
75. Which of the following is a fruit of the Holy spirit?
 A. Prophecy B. Teaching
 C. Healing D. Trustworthy
76. In which town did Jesus grew up?
 A. Jericho B. Nazareth C. Bethlehem D. Egypt
77. God made promises to Abraham. Which one is not one of them?
 A. "I will make you a great Nation"
 B. "I will give you land"
 C. "You will be a father of the Israelites"
 D. "All nations will be blessed thoroughly"
78. Eternal life can be correctly defined as being in communion with _____
 A. Our relatives B. God through Jesus
- C. The living dead D. Our friends
79. The second King of Jesus was _____
 A. Saul B. David C. Jeroboam D. Solomon
80. Who among the following was a tax collector?
 A. Ananias B. Levi
 C. Simon Peter D. Judas Iscariot
81. When Jesus helped the fishermen catch fish, the boat which he entered was belonging to _____
 A. Janes B. John C. Zebedee D. Peter
82. The following stories teaches us that Jesus had power over nature except:-
 A. Jesus walking on water
 B. Jesus calming the storm
 C. Jesus helping the disciples to catch a lot of fish
 D. Jesus being baptised in River Jordan
83. According to 1st Timothy 3:1-7, a good leader should have the following qualities except:-
 A. be rich B. be gentle
 C. be sober D. be able to teach
84. "This is my own dear son with whom I am pleased. These words were spoken by _____ to _____
 A. God, John the Baptist
 B. Jesus Holy spirit
 C. Jesus, Dove
 D. God, Jesus Christ
85. Adam and Eve were driven out to the garden of Eden because:-
 A. They disobeyed God
 B. They spoke to the snake
 C. They were naked
 D. They ate the fruits of the garden
86. Who among the following said that your people are my people?
 A. Ruth B. Naomi
 C. Orphan D. Martha
87. Which statement is not true about the feeding of the 5,000 people by Jesus?
 A. twelve baskets of pieces of food were left over
 B. there were a few small fish
 C. Seven baskets of pieces of food were left over
 D. Seven loaves of bread were used
88. The following are reasons why we should follow Jesus except:-
 A. He is the son of God
 B. He cares for us
 C. There is no one else to follow
 D. We have faith in Him
89. When Jesus sent out the twelve disciples, He told them not to carry the following except:-
 A. sticks B. beggar's bag
 C. food D. books
90. During Jesus temptations in the wilderness which did he give to the third temptation?
 A. Do not put the Lord your God to the test
 B. Man shall not live on bread alone
 C. Do not take my life away for Satan
 D. We should worship God alone