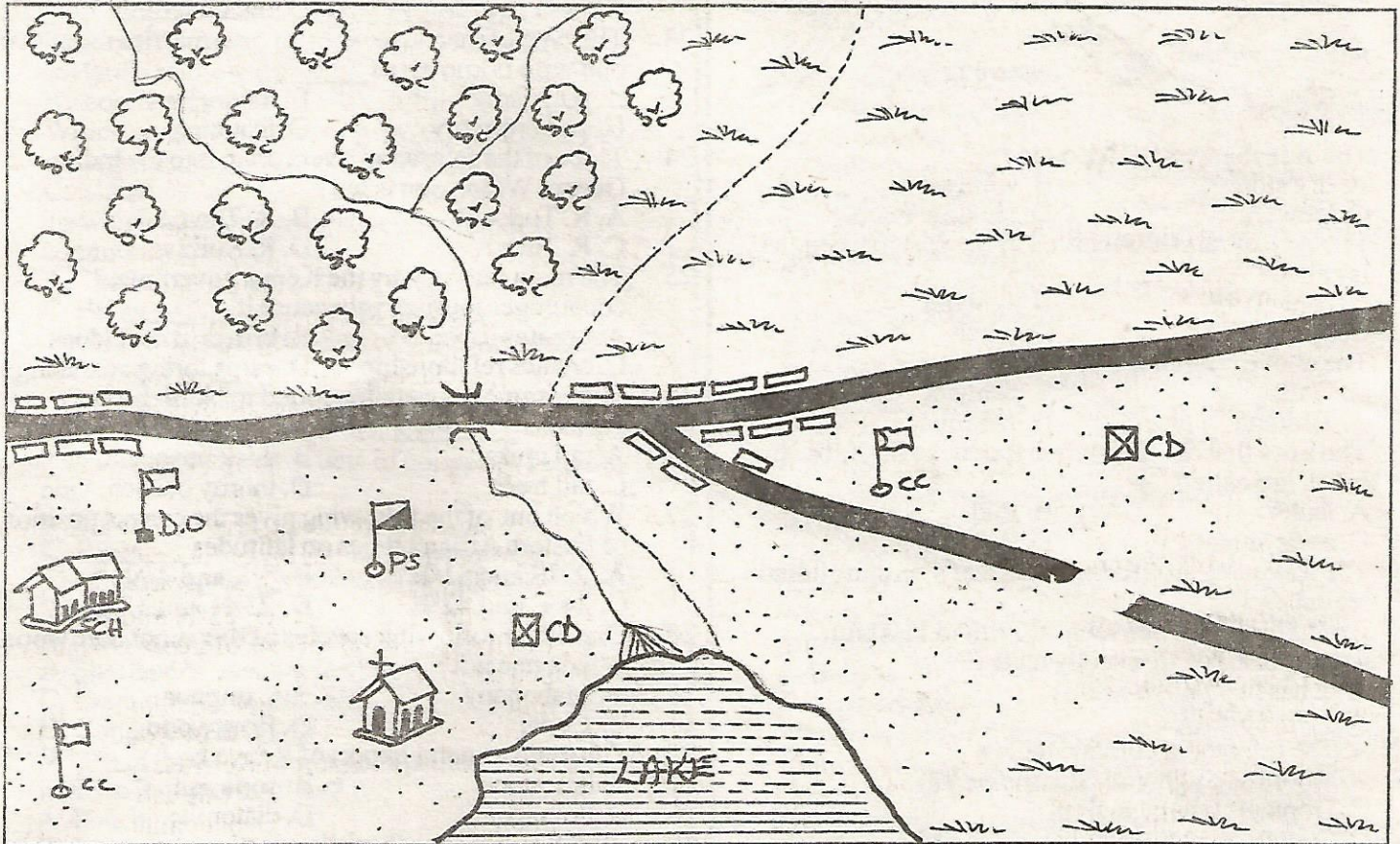


TRIAL SERIES

STD 6 - TERM III

SOCIAL STUDIES & C.R.E.

SOTI AREA



KEY:	Permanent buildings	Grass	D.O = District Officer
	Locational boundary	Murram road	River Soi
	Church	Huts/Houses	CD = Cattle Dip
	PS = Police Station	CC = Chief's Camp	Forest


Use the map of Soti area to answer questions 1-7

1. Who is the chief administrator of Soti area?
A. Chief B. District officer
C. Police D. District commissioner
2. The main religion in the area is _____
A. Christianity B. Muslim
C. Traditionalist D. Hinduism
3. Which is the main means of transport in Soti area?
A. Railway B. Road
C. Air D. Water
4. River Soi forms a feature called _____ as it drains in the lake.
A. an estuary B. a waterfall
C. a delta D. ox-bow lake

5. What is the direction of the lake from the forest?
A. South East B. North East
C. South D. North
6. One of the main economic activity carried out in the area is
A. farming B. fishing
C. mining D. cattle keeping
7. What evidence is there to show that the area is secure in Soti area?
A. Church B. School
C. Police Station D. D.O
8. The most utilised river in Kenya is called _____
A. River Athi B. River Kerio
C. River Tana D. River Turkwel
9. In Kenya population census is done after every _____

- A. 5 years
C. 1 year
- B. 10 years
D. 15 years
10. The Abawanga were ruled by _____
A kings
C. chiefs
- B. council of elders
D. warriors

Use the diagram below to answer questions 11-13

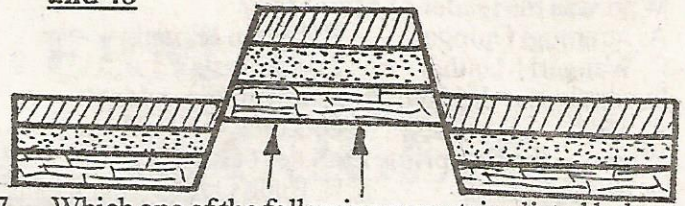


11. The side marked 'M' is called _____
A. dry side
C. leeward
- B. windward
D. shadow ward
12. The type of rainfall received in the part marked 'M' is called _____
A. convection
C. cyclonic
- B. lowland
D. relief
13. The above rainfall is likely to be experienced in
A. Garissa
C. Turkana
- B. Nanyuki
D. Mombasa
14. The lines that develop when the rocks of the earth break are called _____
A. faults
C. escarpments
- B. folds
D. Rift valley
15. The following are characteristics of a certain climatic region.
i) rainfalls varies between 800mm to 1100mm
ii) temperatures are usually high
iii) it has two rainy seasons
Which one is it?
A. The Equatorial climatic region
B. Modified equatorial climatic region
C. Tropical climatic region
D. Coastal climatic region
16. Which of the following best describes the monsoon winds?
A. They blow from the North - East
B. They blow from the South - East
C. They cause the short rains
D. They are seasonal
17. The type of vegetation that consists of short grass and scattered trees is called _____
A. mangrove vegetation
B. savannah grassland vegetation
C. scrub vegetation
D. semi desert vegetation
18. Which one of the following belong to the same language group?
A. Nandi, Samburu, Akamba
B. Pokot, Meru, Luo
C. Abaluhya, Abagusii, Abakuria
D. Somali, Boran, Iteso
19. Which of the following factors discourages settlement around the miombo woodlands of Tanzania?
A. Wild animals
C. Tse tse flies
- B. Government policy
D. The game park
20. Which one of the following consists of nuclear family?

- A. Father and children
B. Father, mother and children
C. Mother, nieces and in-laws
D. Aunts, cousins and grandparents
21. The following are factors which influence climate except _____
A. latitude
C. altitude
- B. winds
D. longitude
22. The branch of the government which makes laws is
A. Legislature
C. Judiciary
- B. Cabinet
D. Executive
23. The type of marriage where a man marries more than one wife is known as _____
A. polygamy
C. deuteronomy
- B. monogamy
D. featuring
24. Three of the following rivers drain into the Indian Ocean. Which one is not?
A. R. Turkwel
C. R. Juba
- B. R. Tana
D. R. Rufiji
25. The main reason why the Kenya government encourages tourism is because it _____
A. creates jobs
C. creates relationship
- B. brings in new ideas
D. earns foreign exchange
26. The common vegetation found in North Eastern Africa is _____
A. tall grass
C. tall trees
- B. thick bushes
D. thorny bushes
27. Which one of the following gives the correct position of Eastern Africa? It lies on latitudes _____
A. 22°E and 51°E
C. 34°E and 42°E
- B. 4°S and 4°N
D. 23°N and 12°S
28. One of the following species of tree is not hardwood. Which one is it?
A. Mahogany
C. Cedar
- B. Camphor
D. Rosewood
29. The main mineral export of Kenya is _____
A. limestone
C. flourspar
- B. soda ash
D. diatomite
30. Which one among the following is not a game reserve in Kenya?
A. Samburu
C. Maasai
- B. Boni
D. Amboseli
31. The main problem facing sisal production in Eastern Africa is _____
A. lack of labourers
B. lack of capital
C. competition from synthetic fibres
D. inadequate rainfall
32. Which one of the following industries can be classified as a manufacturing industry?
A. Milk processing
C. Tyre retreading
- B. Glass making
D. Petroleum refining
33. Which of the following forms of transport is least developed in Eastern Africa?
A. Air
C. Road
- B. Pipeline
D. Water
34. Which one of the following group of fish is caught in inland fisheries?
A. Tilapia, mudfish, trout
B. Lobster, dagaa, oysters
C. Nileperch, tuna, mullet
D. Parrot fish, kingfish, crab

35. Three of the following are inland fishing methods. Which one is not?
 A. Basket method B. Gill net method
 C. Trawling D. Hook and line method
36. Which one of the following is the best way of communicating to the majority of Kenyans?
 A. Radio B. Television
 C. Internet D. Newspapers
37. Nancy lives in an area with the following physical and climatic conditions.
 i) altitude between 1520mm to 2280mm
 ii) rainfall between 1250mm to 1650mm
 iii) fertile acidic soils
 iv) cool temperature 15°C to 22°C
 Which one of the following crops would she grow?
 A. Sugarcane B. Wheat
 C. Maize D. Tea
38. To which language group does the Rendille community belong?
 A. Nilotic B. Borana
 C. Bantu D. Cushitic
39. The following are examples of volcanic mountains. Which one is not?
 A. Nyiragongo B. Kilimanjaro
 C. Ruwenzori D. Kenya
40. The following are products of copper. Which one is not?
 A. Earing B. Utensils
 C. Pipes D. Electric wire
41. The following are the results of population growth. Which one is not?
 A. Shortage of food
 B. Shortage of medical facilities
 C. Creation of employment
 D. Congestion in towns
42. Which of the following is not a problem facing tourism in Eastern Africa?
 A. Poaching
 B. Poor means of transport
 C. Insecurity
 D. Inadequate tourists hotels
43. Which of the following is not a problem facing marine fishing?
 A. Inadequate planktons for food
 B. Presence of carnivorous fish
 C. Inadequate storage facilities
 D. Inadequate capital
44. The main sugarcane growing area within sugar belt in Sudan is _____
 A. Bahrel Ghazel B. Khartoum
 C. Kenana D. Gezira
45. Which one of the following inland water lakes in Kenya is not stocked with fish?
 A. L. Bogoria B. L. Victoria
 C. L. Naivasha D. L. Baringo
46. Parral winds along the coastline of Somalia _____
 A. encourage the growth of coastal vegetation
 B. encourage foggy and misty conditions
 C. discourage rainfall formation
 D. lower temperatures near Mogadishu

Use the diagram below to answer questions 47 and 48



47. Which one of the following mountains listed below was not formed through the process shown in the diagram above?
 A. Danakil Alps B. Ruwenzori mountains
 C. Usambara mountains D. Mfumbiro mountains
48. The diagram above shows a mountain that was formed through _____
 A. faulting and uplifting B. faulting and sinking
 C. tensional forces D. compression force
49. The River Lake Nilotes first dispersal point after leaving Sudan was _____
 A. around Lake Victoria region
 B. Pubungu (Pakwach)
 C. Around L. Turkana
 D. between L. Edward and lake Albert
50. Which is the most populated city in Africa?
 A. Nigeria B. Abuja
 C. Lagos D. Cairo
51. Medicinemen who treats patients using roots and leaves of plants are called _____
 A. nurses B. herbalists
 C. opticians D. dentists
52. Which people constructed Kenya - Uganda railway line?
 A. Indians B. Arabs
 C. Missionaries D. Cushites
53. Which one of the following is not a cultural artefact?
 A. An ornament B. A spear
 C. A sofa set D. A bow and arrow
54. The following are benefits of trade in Eastern Africa except one. Which one is it?
 A. Improvement of transport and communication
 B. Creation of employment for people of Eastern Africa
 C. Improvement of democracy
 D. Increase in government revenue
55. Which one of the following is the main problem facing inland fishing in Kenya?
 A. Poor state of the roads
 B. Lack of a market
 C. Lack of coordination of fishing activities
 D. The water hyacinth weed
56. The following are needs of a family.
 i) education ii) shelter
 iii) love iv) family property
 v) security vi) water
 Which of the following combinations consists of secondary needs?
 A. i, ii, iv, vi B. ii, iii, iv, v
 C. i, ii, v, vi D. i, iii, iv, v
57. The school motto is important because it _____
 A. is written on the school badge
 B. it produced by the school
 C. reminds pupils to work hard at school and set good examples

D. is a document that is used to teach pupils good behaviour

58. Who was the leader of Mau Mau?
A. Jaramogi Oginga B. Dedan Kimathi
C. Wangari Maathai D. Kenyatta
59. In which year did Kenya became independent?
A. 1965 B. 1963 C. 2002 D. 1978
60. Who was the first prime minister of Kenya?
A. Mwai Kibaki B. Raila Odinga
C. Jomo Kenyatta D. Daniel Moi

C.R.E.

61. _____ disobeyed God.
A. Cain and Abel B. Adam and Eve
C. Abraham and Sarah D. Hannah and Elikanah
62. When Jesus healed the blind man he told him to go and wash in the pool of _____
A. Cana B. Bethsaida
C. Siloam D. Jericho
63. When refugees come to our homes we should _____
A. ask them for money
B. tell them to go away
C. take their property
D. welcome them with food
64. _____ fought the Midianites.
A. Gideon B. Moses
C. Aaron D. Joshua
65. The Bible was written by _____
A. Jesus christ B. God
C. people inspired by God D. the Holy spirit
66. Which of the following is not a fruit of the Holy spirit.
A. knowledge B. self control
C. peace D. patience
67. _____ wanted to kill the baby Jesus.
A. Saul B. Herod
C. Solomon D. Paul
68. Which of the following ways of behaviour will make other people dislike us?
A. Being honest B. Being selfish
C. Being kind D. Being patient
69. Which of the following is a gift of the Holy spirit?
A. Love B. Humility
C. Patience D. Faith
70. _____ were daughters-in-law of Naomi.
A. Mary and Martha B. Elizabeth and Mary
C. Orpha and Ruth D. Lydia and Dinah
71. Another name for Dorcas is _____
A. Naomi B. Tabitha
C. Dina D. Martha
72. Jacob had _____ sons.
A. 12 B. 2 C. 10 D. 9
73. We get new life in Jesus christ when we _____
A. disobey our parents B. study CRE
C. go to church only D. believe in him
74. _____ baptised Jesus.
A. Simon Peter B. James
C. John D. Judas
75. John and James were sons of _____
A. Zechariah B. Zebedee
C. Zablon D. Zacchaeus
76. Passover was first celebrated by Israelites in _____
A. wilderness B. Canaan
C. Mt. Sinai D. Egypt

77. Which one of the following occasions does not mark new life in traditional African society?
A. Initiation B. Birth of a child
C. Baptism D. Marriage
78. God gave us talents to _____
A. enjoy ourselves B. laugh at others
C. share them with others D. make ourselves rich
79. The chosen people are all descendants of _____
A. Noah B. Jacob
C. Melchizedek D. Adam
80. The covenant made between God and Abraham proved _____
A. God will keep all his promises
B. God will give him a son
C. God had trust in him
D. He gave him land
81. Which of the following took place when Jesus was baptised?
A. Jesus laughed
B. Heavens closed
C. Satan ran away
D. The spirit of God came like a dove
82. Who among the following was not a disciple of Jesus?
A. Peter B. Phillip
C. Andrew D. Paul
83. The parable of the pharisees and tax collector is found in the book of _____
A. James B. Luke
C. John D. Malachi
84. The man who helped the man who had been beaten up by thieves was a _____
A. choir member B. priest
C. good samaritan D. pastor
85. When Jesus healed ten lepers _____ came to say thank you to Jesus.
A. 6 B. 3 C. 1 D. 10
86. Jesus sent out his disciples to _____
A. catch fish
B. drive out demons
C. build homes for Gentiles
D. curse the Gentiles
87. Jesus first miracle was performed in which town?
A. Cana B. Jerusalem
C. Nazareth D. Bethlehem
88. Which of the following is an occasion of joy?
A. Getting a new job
B. Childlessness
C. Death of a close relative
D. Failure in examination
89. When Jesus was baptised the voice came from heaven saying _____
A. Everybody should obey Jesus
B. This is the son of Joseph and Mary
C. Everybody should be baptised
D. This is my only son in whom I trust
90. While in class, Jane and Mary started fighting. As christians their classmates should _____
A. send them out of class
B. beat them up
C. scream and run away
D. separate and calm them down