

VINEYARD

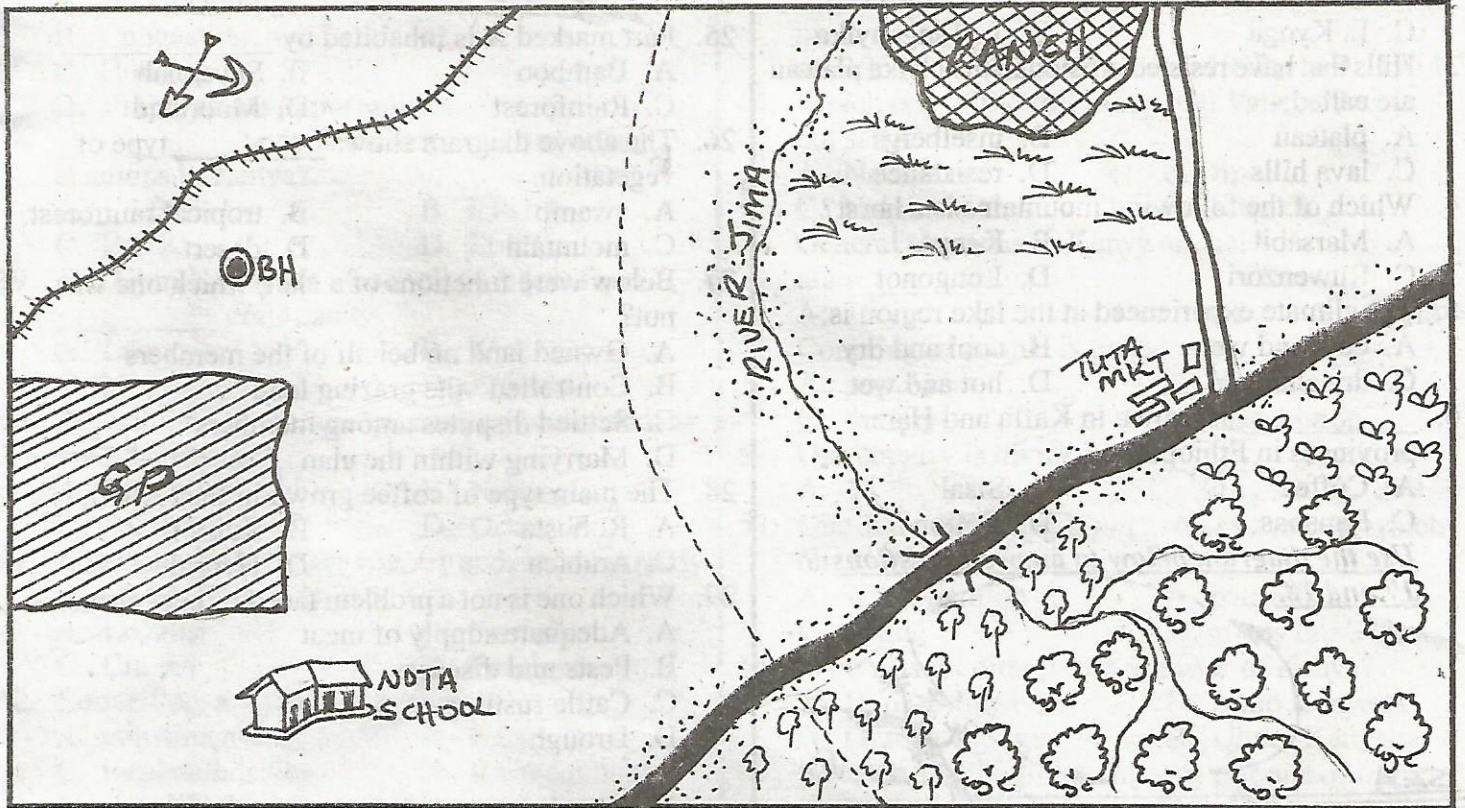
AIMWA
009

TERM III-

SOCIAL STUDIES & C.R.E

STD 6

TEMA AREA



KEY:



Tea	Grass	Tarmac road	Coffee
Railway	Murram road	Market	Quarry
Game park	Locational boundary	Settlements	Borehole


Use the map of Tema area to answer questions 1-7

- The main thing likely to be transported by the railway line is:-
 - stones
 - timber
 - beef and milk
 - hide and skin
- The direction of the school from the ranch is:-
 - South East
 - North West
 - South West
 - North East
- Tema area is likely to be administered by:-
 - Two chiefs
 - D.C
 - Police
 - D.O
- The religion that most people in the above area belong to is:-
 - Islam
 - Paganism
 - Hinduism
 - Christianity

- Which economic activity is not likely to be carried out in the area?
 - Mining
 - Lumbering
 - Tourism
 - Trading
- People living along river Jima are likely to be:-
 - poachers
 - traders
 - fishermen
 - farmers
- The main means of transport in the area is:-
 - road
 - railway
 - air
 - water
- Eastern Africa lies between longitude _____
 - 22°W, 51°W
 - 22°N, 12°S
 - 4°N, 14°S
 - 22°E, 51°E
- Turkana, Maasai, Iteso are _____ Nilotes.
 - River lake
 - Plain
 - Highland
 - Lowland
- Which country does not boarder Kenya among the following?

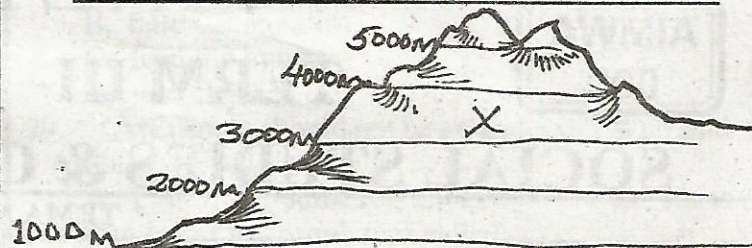
- A. Tanzania
C. Djibout
- B. Ethiopia
D. Sudan
11. The following vegetation found along the Nile in Sudan is referred to as:-
A. Sudd
C. Yala
B. Swamp
D. Papyrus
12. The deepest lake in Africa is _____
A. Albert
C. L. Kyoga
B. L. Victoria
D. L. Tanganyika
13. Hills that have resisted erosion in the Nyika plateau are called:-
A. plateau
C. lava hills
B. inselbergs
D. resistance
14. Which of the following mountains is a horst?
A. Marsabit
C. Ruwenzori
B. Kenya
D. Longonot
15. The climate experienced at the lake region is:-
A. cool and wet
C. dry and cool
B. cool and dry
D. hot and wet
16. _____ is grown in Kaffa and Harar provinces in Ethiopia.
A. Coffee
C. Bananas
B. Sisal
D. Cotton

Use the diagram below to answer questions 17 and 18.



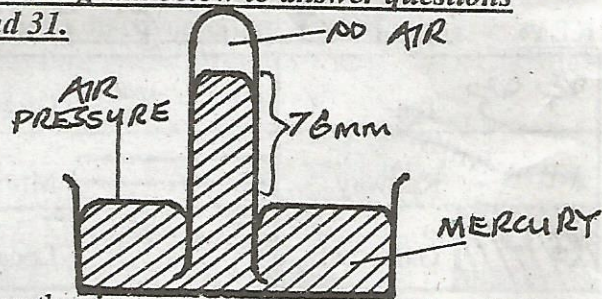
17. The above breeze is called _____
A. sea
C. relief
B. land
D. convectional
18. The breeze above occurs at _____
A. noon
C. night
B. day
D. evening
19. Which country has no railway in Eastern Africa?
A. Somalia
C. Ethiopia
B. Uganda
D. Tanzania
20. People who share a common ancestor form a:-
A. community
C. family
B. clan
D. marriage
21. The main tourist attraction in Eastern Africa is:-
A. sandy beaches
C. wildlife
B. sceneries
D. historical sites
22. Which group of Bantus escaped from the Southern part of Africa and settled in Tanzania?
A. Sukuma
C. Sudan
B. Ngoni
D. Tanzania
23. The most densely populated country in Eastern Africa is:-
A. Ethiopia
C. Sudan
B. Kenya
D. Tanzania
24. Which of the following towns has no water shortage?
A. Mombasa
C. Jinja
B. Nairobi
D. Kisumu

Use the diagram to answer questions 25 and 26.



25. Part marked X is inhabited by _____
A. Bamboo
C. Rainforest
B. Savannah
D. Moorland
26. The above diagram shows _____ type of vegetation.
A. swamp
C. mountain
B. tropical rainforest
D. desert
27. Below were functions of a clan, which one was not?
A. Owned land on behalf of the members
C. Settled disputes among members
D. Marrying within the clan
B. Controlled the grazing land
28. The main type of coffee grown in East Africa is:-
A. Robusta
C. Arabica
B. Ruiru II
D. Hybrid
29. Which one is not a problem faced by beef farmers?
A. Adequate supply of meat
C. Cattle rustling
D. Drought
B. Pests and diseases

Use the diagram below to answer questions 30 and 31.

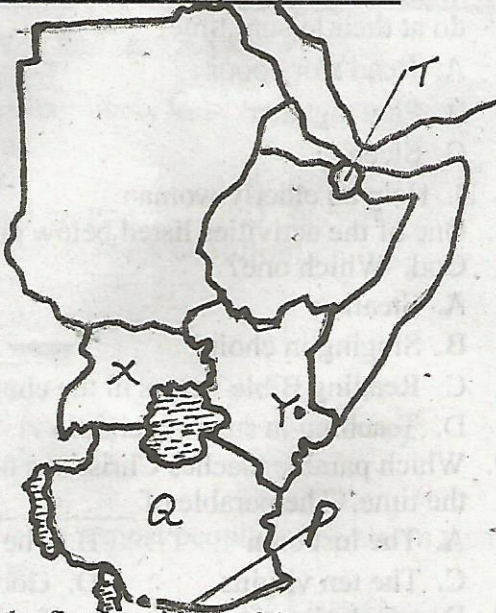


30. The weather instrument shown above is called:-
A. Anemometer
C. Windvane
B. Raingauge
D. Barometer
31. The instrument above is used to measure:-
A. direction of wind
C. air pressure
B. amount of rainfall
D. speed of wind
32. Which one of the following is not a Kenyan import?
A. Fertilizers
C. Petroleum
B. Furniture
D. Machinery
33. Before changing its name, Kisumu was referred to as:-
A. fort hall
C. Illinois
B. part florence
D. california
34. Processing industries mainly deal with:-
A. farm produce
C. giving services
B. hand crafts
D. fixing parts
35. An area that has been set by an individual for rearing wild animals is referred to as:-

- C. orphanages D. sanctuaries
36. Which of the following is **not** part of the BIG FIVE?
 A. Elephant B. Leopard
 C. Giraffe D. Rhino
37. One of the following is **not** a problem facing urban centres, which one is it?
 A. Poor planning
 B. Congestion
 C. Housing
 D. Employment opportunities
38. _____ body is in charge of conducting elections in Kenya?
 A. I.E.B.C B. F.I.D.A
 C. E.C.K D. I.I.E.C
39. The Njuri Ncheke is a council of elders from _____ community.
 A. Luo B. Kisii
 C. Meru D. Bukusu
40. Who among the following Kenyans collaborated with the British?
 A. Mekatilili B. Nabongo
 C. Sakawa D. Orkoiyot
41. A person who loves his country and is always ready to defend it is known as:-
 A. Loyalist B. Patriotic
 C. Citizen D. Foreigner
42. Councillors are elected to represent _____
 A. constituencies B. wards
 C. local authorities D. town councils
43. The head of the country is the _____
 A. Governor B. President
 C. Speaker D. Deputy president
44. The raw material from which cement is made is referred to _____
 A. limestone B. kimbelite
 C. diatomite D. mineral

Use the map below to answer questions

45-49.



45. Who was the first president of the country marked X

- C. Kabaka Mutesa II D. Joseph Lule
46. The game reserve marked Y is known as:-
 A. Serengeti B. Boni
 C. Tsavo D. Mara
47. The river marked P is known as _____
 A. Rufiji B. Pangani
 C. Wami D. Ruvuma
48. The country marked Q gained its independence in:-
 A. 1960 B. 1961 C. 1962 D. 1954
49. Which one of the following Rift Valley lakes is not salty?
 A. Naivasha B. Jipe
 C. Nakuru D. Magadi
50. General elections in Kenya are held after _____
 A. 10 yrs B. 2 yrs C. 5 yrs D. 7 yrs
51. Counting of people is called _____
 A. population B. census
 C. density D. distribution
52. Our country is divided into _____ counties.
 A. 18 B. 47 C. 30 D. 290
53. One of the following is **not** a role of a citizen, which one is it?
 A. witch hunting B. patriotism
 C. voting D. giving one's views
54. Who was the first prime minister of Kenya?
 A. Raila Odinga B. Jomo Kenyatta
 C. Oginga Odinga D. Uhuru Kenyatta
55. Who among the following was **not** one of the Kapenguria six?
 A. Bildad Kagia B. Paul Ngei
 C. Dedan Kimathi D. Jomo Kenyatta
56. The main crop grown at Mwea Tebere irrigation scheme is _____
 A. rice B. water melon
 C. onions D. sugarcane
57. The headquarters of East Africa community are in:-
 A. Uganda B. Ethiopia
 C. Tanzania D. Kenya
58. At which age is one allowed to vie for a civil seat?
 A. 18 B. 21 C. 35 D. 55
59. Which one of the following countries did **not** colonise Somali?
 A. France B. Spain C. Italy D. Britain
60. Relief rainfall falls in the _____
 A. ocean B. lowlands
 C. plateaus D. highlands

C. R. E

61. According to the creation story Genesis, man was created through:-
 A. word of mouth B. modelling
 C. carving D. angles
62. Human beings were created on the _____
 A. second day B. fourth day
 C. first day D. sixth day
63. The first food that God told man to eat after

- A. fruits
C. manna
- B. meat
D. trees
64. According to the traditional African story of creation the Bukusu belief to have been created by:-
A. Mwambu
C. Wele Khakaba
- B. Sara
D. Mukhoye
65. Man was created in the image of God and given responsibility to _____ over all the God's creation.
A. role
B. eat
C. create
D. fear
66. Rejoicing and celebrating a new born baby is a sign of _____
A. welcoming
C. fear
- B. hatred
D. initiation
67. We receive new life in Christ when we are:-
A. dead
C. sick
- B. born
D. baptised
68. Baptism is equivalent to _____ in African traditional religion.
A. birth
C. initiation
- B. death
D. marriage
69. I will praise you for I am fearfully and wonderfully made, These words were said by:-
A. Peter
C. David
- B. James
D. Jesus
70. What advise can a Christian give to a HIV/AIDS victim?
A. Consult a witch doctor
B. Infect other people
C. Sell all his belongings
D. Not to donate blood
71. What reason did God have when creating Eve?
A. Speak with snake
B. Cultivate the land
C. Mislead Adam
D. Be a companion of Adam
72. The stages of life in traditional African society are:-
A. Death, marriage, birth, initiation
B. Birth, initiation, marriage, death
C. Initiation, birth, death, marriage
D. Birth, marriage, initiation, death
73. A visually impaired person is the one who:-
A. cannot hear
C. cannot walk
- B. cannot see
D. cannot eat
74. The ten percent that we give as offering to God is called:-
A. donation
C. offering
- B. tithe
D. gift
75. On his way to Darmascus, he received a call by Jesus. Who was he?
A. John
C. Judas
- B. Peter
D. Paul
76. The Ethiopian Eunuch was baptised by:-
A. Jesus
C. John the Baptist
- B. Philip
D. Paul
77. The first passover was celebrated by Israelites in:-
A. Canaan
C. Egypt
- B. Jerusalem
D. Israel

78. In Mathew 25: 33-40, Jesus discouraged us to:-
A. give clothes to the naked
B. hate our enemies
C. feed the hungry
D. visit the sick
79. "Lazy people should not be given food." Who said these words?
A. Paul
B. James
C. Peter
D. Jesus
80. The father of Joseph was called _____
A. Jacob
C. Essau
- B. Isaac
D. Benjamin
81. Which of the following was not practised in the traditional African religion?
A. Circumcision
C. Baptism
- B. Marriage
D. Offering sacrifices
82. Which one of the following is not a gift of the Holy spirit?
A. Wisdom
C. Healing
- B. Faith
D. Self control
83. What was the name of the woman who had kept her son down in the wilderness to die out of thirst?
A. Sarah
C. Mary
- B. Haggar
D. Peninah
84. In his vision, Paul saw macedonians standing and begging him to go and help them. How did he respond?
A. He went
C. He refused
- B. He ran away
D. He ignored
85. Who among the following become a friend of Jesus after sharing a meal?
A. Lazarus
C. Nicodemus
- B. Zacheaus
D. Paul
86. You have discovered that ~~Kamau~~ your classmate copies homework from his friend. As a Christian what advise would you give?
A. It is good to copy instead of failing
B. Give you sweet so that you cannot report him
C. Copy in a better hiding not to be seen
D. Do his work instead of copying
87. Which is the best activity that std. 6 pupils should do at their leisure time?
A. Read story book
B. Play together
C. Sleep
D. Help an elderly woman
88. One of the activities listed below does not please God. Which one?
A. Stealing
B. Singing in choir
C. Reading Bible verses in the church
D. Teaching in sunday school
89. Which parable teaches Christians to be ready all the time. The parable of _____
A. The lost coin
C. The ten virgins
- B. The lost sheep
D. Good samaritan
90. Do not desire another man's wife. This is commandment number