

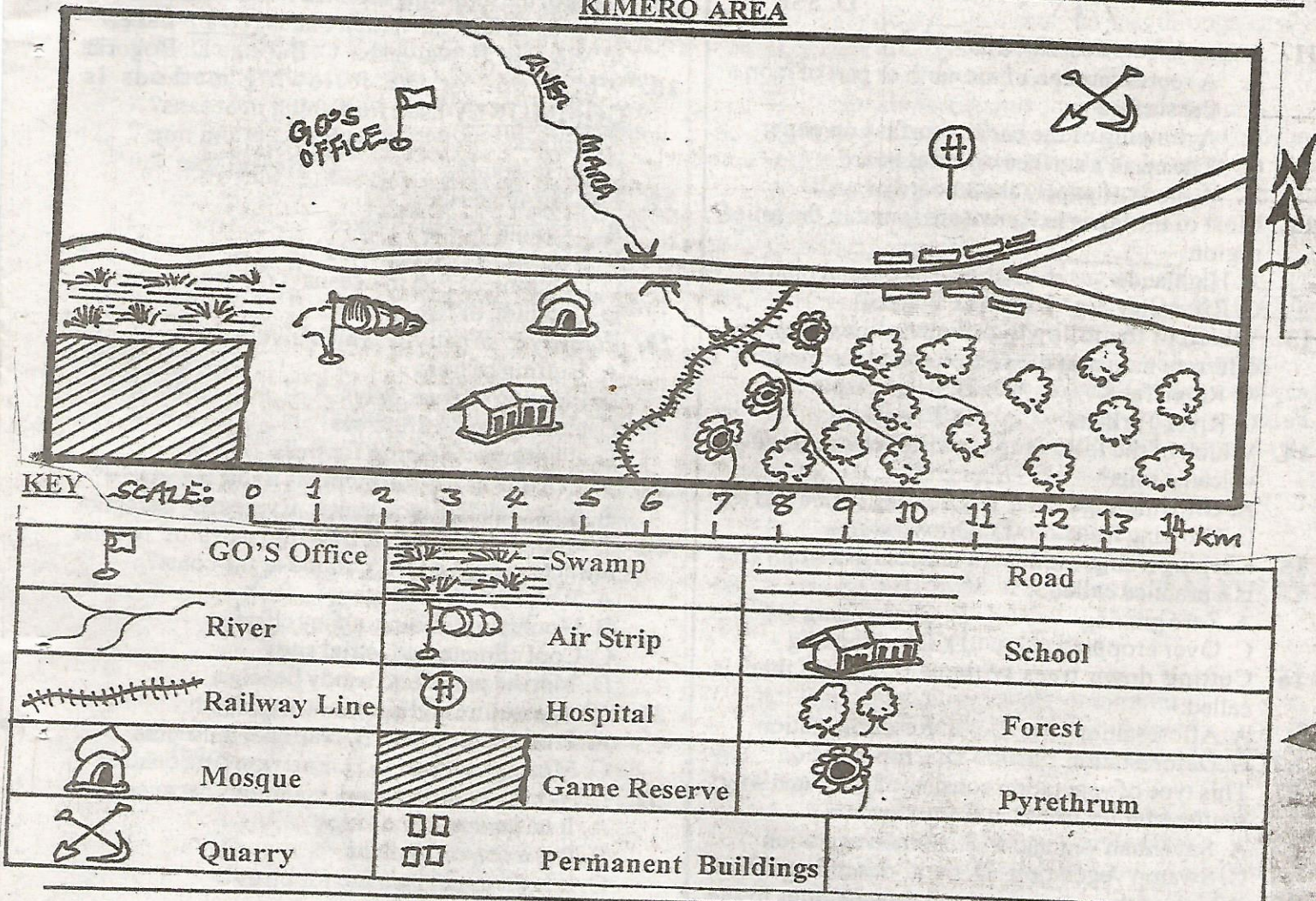
# NAIROBI COUNTY

PENPLUS  
NAIROBI

## STD 5 - TERM 3 SOCIAL STUDIES / C.R.E.

Time: 2Hrs 15Min.

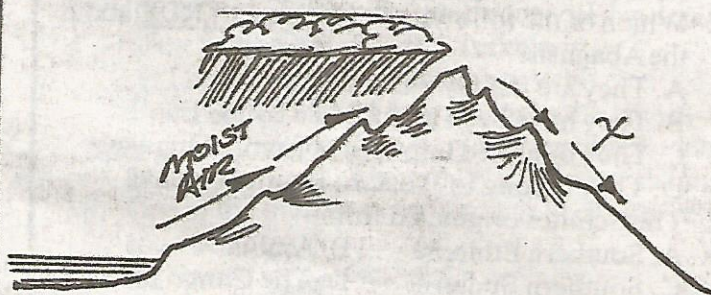
### KIMERO AREA



Study the map of Kimero Area to answer questions 1 - 7.

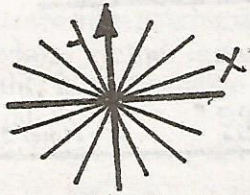
- The direction of the game reserve from quarry is:-  
A. South East      B. South West  
C. North West      D. North East
- The general flow of R. Mara is from \_\_\_ to \_\_\_  
A. N. - S.E.      B. N.W. - S.E.  
C. S.E. - N.      D. S.E. - W.
- The religion of the people in Kimero area is:-  
A. Islamic      B. Traditionalist  
C. Pagans      D. Christians
- The vegetation growing in the swamp is:-  
A. Grass    B. Cactus    C. Rice    D. Reeds
- The cash crop grown in Kimero area is used to make:-  
A. Clothes    B. Insecticides    C. Tea    D. Sacks
- Kimero area is administered by:-  
A. Governor    B. Councillor  
C. M.P      D. County representative
- The quickest means of transport in Kimero area is:-  
A. Railway    B. River    C. Air    D. Road

Use this diagram to answer questions 8-9.



- The type of rainfall shown above is:-  
A. Relief      B. Ocean currents  
C. Breeze      D. Convectional
- The economic activity LIKELY to be carried out in the area marked X is:-  
A. Lumbering      B. Dairy farming  
C. Cash crop farming      D. Pastoralism

10. Name the secondary point marked X is:-



- A. NNE
- B. ENE
- C. ESE
- D. SSE

11. A map is best described as:-

- A. A representation of the earth or part of it on a flat surface
- B. A drawing of the earth's surface on paper
- C. The earth's surface on a flat board
- D. A piece of paper, chalkboard or wall

12. Most of the lakes in Kenya are found in the relief region \_\_\_\_\_

- A. Highlands
- B. The coastal plains
- C. Rift valley
- D. Plateau

13. Which of the following rivers is known by two different names at the source and at the mouth?

- A. River Tana
- B. River Nzoia
- C. River Turkwel
- D. River Athi

14. Which of the following activities can be done on volcanic soils?

- A. Growing sugarcane
- B. Growing coffee and tea
- C. Growing fruits
- D. Growing rice

15. Keeping a large number of animals in a small area is a practice called:-

- A. Zero grazing
- B. Overgrazing
- C. Over cropping
- D. Overstocking

16. Cutting down trees without replacing them is called:-

- A. Afforestation
- B. Re-afforestation
- C. Deforestation
- D. Crop-rotation

17. This type of vegetation consists of grass and short scattered trees found in Kenya are:-

- A. Savannah vegetation
- B. Scrub vegetation
- C. Swamp vegetation
- D. Semi-desert vegetation

18. Which of the communities below belongs to the Plains Nilotes? The \_\_\_\_\_

- A. Luo
- B. Tugen
- C. Chamus
- D. Kipsigis

19. Which of the following statement is **TRUE** about the Abagusii?

- A. They are mainly pastoralists
- B. They have been assimilated by the Luo
- C. They migrated into Kenya from Shungwaya
- D. They belong to Western Bantu of Kenya

20. The Semites originated from:-

- A. Southern Ethiopia
- B. Arabia
- C. Southern Sudan
- D. The Congo forest

21. Which one is **NOT** a ways that were used in traditional education to teach the youth?

- A. Initiation
- B. Stories
- C. Apprenticeship
- D. Reading

22. Artifacts are important because:-

- A. They are kept in museums
- B. They are made by skilled people
- C. They show the history of the way of life of a community
- D. They can be sold for a lot of money

23. Which of the following areas has the **BEST** conditions for dairy farming?

- A. Coastal plains
- B. Central highlands
- C. Lake region
- D. Nyika plateau

24. The **MOST** widely used dairy product is:-

- A. Fresh milk
- B. Yorghut
- C. Powder milk
- D. Butter

25. Three of the following lakes are found inland fishing grounds in Kenya. Which one is **NOT**? Lake:-

- A. Victoria
- B. Naivasha
- C. Baringo
- D. Bogoria

26. Which one of the following methods is **COMMONLY** used for fishing in oceans?

- A. Gill net
- B. Hook and line
- C. Purse-seining
- D. Basket trap

27. Fish farming is the:-

- A. Keeping of fish in lakes
- B. Rearing of fish in ponds
- C. Catching of fish in oceans
- D. Catching of fish in rivers

28. Forestry is an activity which involves the:-

- A. Cutting of trees
- B. Planting of trees only
- C. Cutting and using trees
- D. Planting and caring for trees

29. Which one of the following is a soft wood tree?

- A. Meru oak
- B. Elgon teak
- C. Cypress
- D. Camphor

30. Which one of the following pairs of tourist attraction is **MAINLY** found at the coast?

- A. Water sport, wildlife,
- B. Mountain climbing, sunny climate
- C. Cool climate, industrial sites
- D. Marine parks and sandy beaches

31. Olorgessailie and Kariandusi are both:-

- A. Pre-historic sites
- B. National museums
- C. Mining centres
- D. Early trading centres

32. L. Nakuru National Park is famous because:-

- A. It has many hot springs
- B. It is a beautiful place
- C. It is an important site for birds
- D. It is a slaty lake

33. The medium of exchange used in internal trade is:-

- A. Barter
- B. Other goods
- C. Foreign exchange
- D. Money

34. Goods that are bought by a country from another country are:-

- A. Export
- B. Import
- C. External goods
- D. Domestic goods

35. Which of the following urban centres has many agriculture - based industries?

- A. Thika
- B. Eldoret
- C. Kisumu
- D. Nakuru

36. Webuye is a town where \_\_\_\_\_ is produced

- A. Vehicles
- B. Clothes
- C. Paper
- D. Sugar

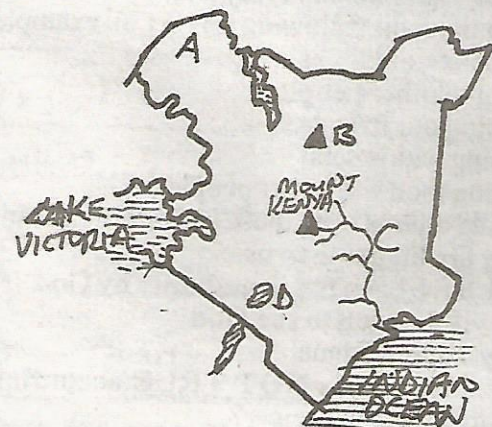
37. The **MAIN** road from Namanga to Nairobi and Moyale is known as the:-

- A. Great North Road
- B. Trans-African Highway
- C. Main Tarmac Road
- D. Tanzania Main Road

38. Vehicles that are **NOT** in good working condition are:-

- A. Unroad-worthy
- B. Useless
- C. Bad
- D. Highway code

39. Which one of the following is the **MOST** common way of sending messages?  
 A. Short message service B. Radio  
 C. Telefax D. Telephone
40. The following are examples of courier services. Which one is **NOT**?  
 A. Postal Services B. Kenya Airways  
 C. Group 4 securicor D. Telcom
41. Which one of the following is the **BEST** way of transporting petroleum from Mombasa to Kisumu?  
 A. Air B. Pipeline C. Water D. Railway
42. The following are an international airport. Which one is **NOT**?  
 A. Eldoret Airport B. Jomo Kenyatta Airport  
 C. Moi Airport D. Wilson Airport
43. Which one of the following towns is associated with a sea port?  
 A. Nakuru B. Kisumu C. Mombasa D. Eldoret
44. The following towns has international airport **EXCEPT:-**  
 A. Mombasa B. Kisumu C. Nairobi D. Eldoret
45. Which one of the following towns was started by railway builders as a lake port?  
 A. Nakuru B. Eldoret C. Kisumu D. Nairobi



46. The feature marked A is \_\_\_\_\_  
 A. Kingwal swamp B. Lotikipi plain  
 C. Yatta plateau D. Tiva plain
47. The feature marked B is \_\_\_\_\_  
 A. Mt. Marsabit B. Mt. Mandera  
 C. Mt. Kenya D. Mt. Wajir
48. The river marked C is river  
 A. Athi B. Sabaki C. Nyando D. Tana
49. The lake marked D is famous as a \_\_\_\_\_  
 A. Source of soda ash B. Home of flamingoes  
 C. Fishing ground D. Tourist site
50. Below are characteristic of a type of climate found in Kenya.  
 (i) It has one rainy season  
 (ii) Rain is usually below 1000mm per year  
 (iii) Temperatures are usually high  
 (iv) The dry season can last for more than five months

- The climate described is:-  
 A. Modified tropical climate  
 B. Modified equatorial climate  
 C. Tropical climate  
 D. Semi-desert climate
51. Black cotton soil are suitable for irrigation because:-  
 A. They do not allow water to pass through easily  
 B. They are found in flat areas  
 C. They are easy to plough  
 D. They are fertile and do not need manure
52. The following types of vegetation is found only in the coastal region in Kenya. Which one is it?  
 A. Savannah grassland vegetation  
 B. Mangrove forest vegetation  
 C. Swamp vegetation  
 D. Dry bushland and scrub vegetation
53. Which Kenyan community is **CORRECTLY** matched with its area of origin?  
 A. Luo - Bahr-el-ghazal B. Taita - Shungwaya  
 C. Iteso-Congo forest D. Maasai-Eastern Ethiopia
54. Which of the following was **MAINLY** acquired through apprenticeship in traditional education?  
 A. Iron - smelting skills  
 B. Social values  
 C. The history of the community  
 D. Skills on how to avoid danger
55. Cultural artifacts are important **MAINLY** because:-  
 A. They were made in the past  
 B. They attract tourists  
 C. They tell the history of a community  
 D. They were made by special people
56. The highlands are densely populated **MAINLY** because of:-  
 A. Fertile soils and presence of many rivers  
 B. Favourable climate and fertile soils  
 C. The absence of mosquitoes and availability of flat land  
 D. Favourable climate and good transport network
57. The biggest problem facing commercial development of the fishing industry in L. Turkana is:-  
 A. The long distance to the markets  
 B. The small size of fish caught in the lake  
 C. The mismanagement of cooperative societies  
 D. The failure to use modern method of fishing
58. One of the measurement taken in Kenya to reduce road accidents is:-  
 A. Introducing seat-belt in vehicles  
 B. Building more tarmac roads  
 C. Introducing speed governors in public transport vehicles  
 D. Removing old vehicles from the roads
59. Nabongo Mumia of the Wanga Kingdom collaborated with the British mainly because:-  
 A. He knew they were more interested in Uganda than Wanga  
 B. He wanted their help to defeat the Ababukusu and the Luo of Uganda Kager

- C. He wanted gift from them  
D. He wanted them to bring development to his area
60. A child whose mother is a citizen of Kenya and whose father is a citizen by:-  
A. Registration B. Birth  
C. Naturalization D. Adoption
- C.R.E.**
61. God gave the Israelites the ten commandments to:-  
A. Help them fight their enemies  
B. Help them to get food and water  
C. Guide them in their daily life  
D. Show them the way in the desert
62. The greatest commandment talks about \_\_\_\_\_  
A. Loving God above everything else  
B. Observing the Sabbath day  
C. Honouring your parents  
D. Not accusing anyone falsely
63. *Worship the Lord your God and serve him only (Luke 4:5-8)*. Who said these words  
A. Devil B. Jesus C. Peter D. Angel Gabriel
64. An agreement between God and man is called:-  
A. Salvation B. Promise C. Eternal life D. Covenant
65. The disciples of Jesus called from fishing was:-  
A. John B. Judas Iscariot C. Philip D. Nathaniel
66. \_\_\_\_\_ was stoned to death of his love for Christ.  
A. Peter B. Stephen C. Saul D. James
67. Jesus told the story of the good Samaritan to teach about:-  
A. Courage and understanding  
B. Sympathy and prosperity  
C. Obedience and knowledge  
D. Love and kindness
68. We celebrate the resurrection of Jesus during:-  
A. Christmas B. Passover  
C. Easter Monday D. Good Friday
69. The people of Israel were slaves in the land of:-  
A. Canaan B. Egypt C. Midian D. Haran
70. Jacob built a pillar at a place called:-  
A. Jerusalem B. Jericho C. Nazareth D. Bethel
71. The commandment that tells us to respect life is:-  
A. Do not steal B. Do not commit adultery  
C. Do not kill D. Do not covet
72. \_\_\_\_\_ is the day God rested after creating the earth.  
A. Pentecost B. Sabbath  
C. Easter Sunday D. Good Friday
73. Adam and Eve were told to eat all fruits in the garden of Eden except the fruits from the tree of:-  
A. Wickedness B. Life C. God D. Knowledge
74. Which one of the following is not a fruit of the Holy Spirit?  
A. Faith B. Kindness C. Peace D. Goodness
75. In traditional African Society people worshipped God in:-  
A. Temples B. Mosques C. Shrines D. Churches
76. The wine taken during the last supper represents the blood of:-  
A. Jesus B. Abraham C. God D. Sheep
77. Which one of the following is not an occasion when people gather and share joy?

- A. Easter B. Christmas  
C. Marriage ceremony D. Funeral service
78. The coming of the Holy Spirit was prophesied by prophet:-  
A. Jeremiah B. Joel C. Isaiah D. Ezekiel
79. According to the Apostles Creed, which among the following words means the universal church:-  
A. Genesis B. Commandments  
C. Catholic D. Mark
80. According to John 6:47 anyone who believes in Jesus has:-  
A. Blessings B. Eternal life C. Joy D. Salvation
81. We should love all people especially our:-  
A. Parents B. Friends C. Fools D. Enemies
82. 1 Peter 2:1-3, a true Christian witness should get:-  
A. Kindness B. Envy C. Humility D. Happiness
83. In which of the following activities can we find true happiness?  
A. Fighting other people B. Visiting the sick  
C. Speaking bad about others D. Stealing
84. In the book of John 14:26 the Holy Spirit is also called:-  
A. Counsellor B. Truth C. Protector D. Help
85. Complete the following sentence. "And in Jesus Christ our Lord, who was conceived by the power of....."  
A. Water B. Fire C. Holy Spirit D. Blood
86. Which among the following is NOT an example of an evil behaviour?  
A. Lying to other people  
B. Abusing our friends  
C. Fighting with others  
D. Sharing food with other people
87. We should always obey those in authority because:-  
A. They are bigger than us.  
B. They have been put in authority by God  
C. We will be able to see God  
D. They can punish us
88. Which statement is NOT TRUE according to Traditional African society?  
A. Boys and girls should not engage in sex before marriage  
B. Boys and girls should respect their bodies  
C. Boys and girls should express their love through sex  
D. Boys and girls should exercise self control
89. Atieno a class five pupil collected one thousand shillings on the way to the field. What was the BEST thing to do?  
A. Hide the money and take it to her mother  
B. Give it to the teacher to ask for the owner  
C. Ask for the owner at the roadside  
D. Share with friends
90. What advice will you give to your friend who has a habit of telling lies about others?  
A. Respect and sometimes tell the truth about others  
B. Continue telling lies to defend himself  
C. Threaten to report him to the teacher if he continues with the habit  
D. Tell him that God loves sinners