

# BUSIA COUNTY

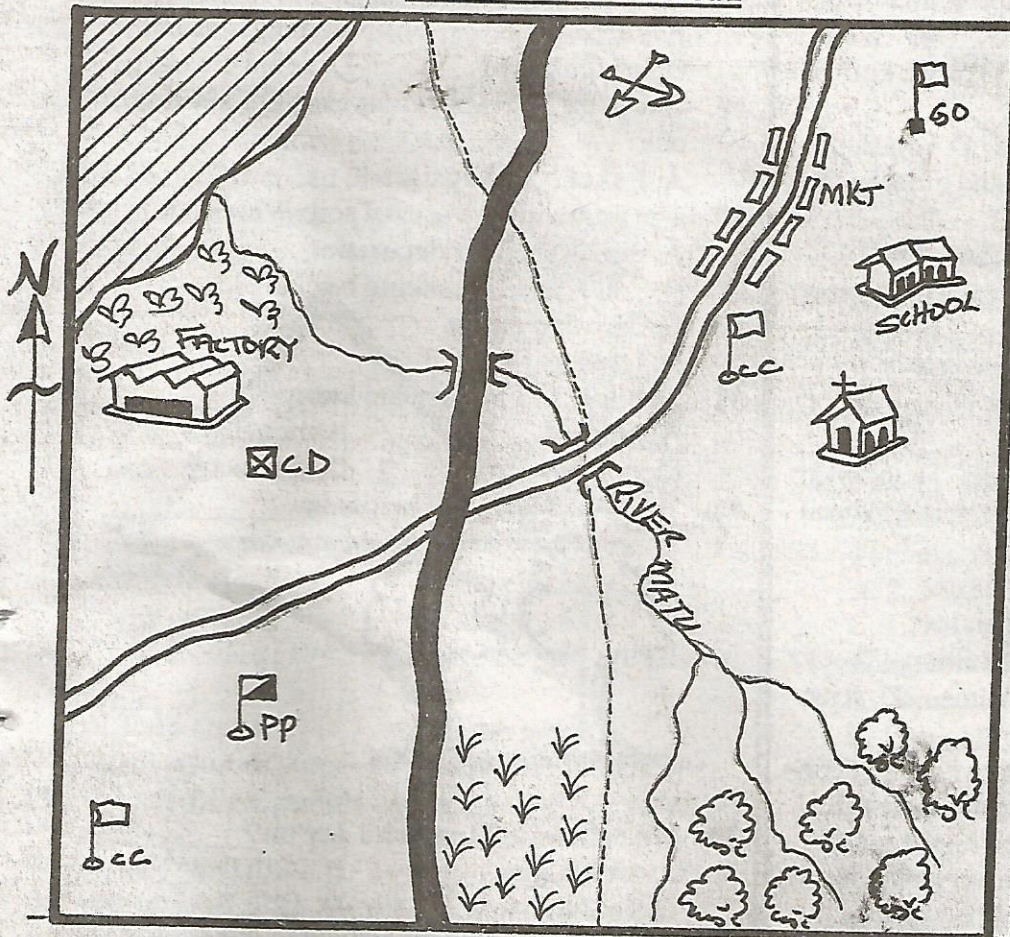
PENPLUS  
BUSIA

## STD 5 - TERM 3

### SOCIAL STUDIES / C.R.E

Time: 2Hrs 15 Mins

#### MUGWAN AREA



KEY	
	Tea
	Forest
	Rice
	Church
	Quarry
	Locational boundary
MKT	Market
	Police post
	Chief's camp
	Bridge
	Lake
	Tarmac road
	Murrum road
	Cattle dip
	Hill
	Governor's office

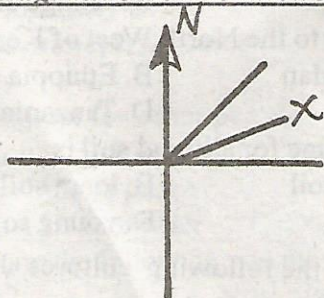
Use the map of Mugwan area to answer questions 1-7.

- River Matu flows from which direction?
  - North West
  - South West
  - South East
  - North East
- The people of Mugwan area are \_\_\_\_\_
  - Muslims
  - Hindus
  - Pagans
  - Christians
- The factory in the map processes \_\_\_\_\_
  - tea
  - rice
  - coffee
  - pyrethrum
- What is the **MAIN** economic activity in the area?
  - Trading
  - Farming
  - Mining
  - Nomadism
- How many natural physical features are there in the area?
  - 4
  - 2
  - 3
  - 5

- A thief was caught stealing in the market. Where was he likely to be taken?
  - School
  - Police post
  - Governor's office
  - Chief's camp
- Mugwan area is likely to be administered by \_\_\_\_\_
  - chief
  - sub-chief
  - Governor
  - village elder
- The country to the North West of Kenya is:-
  - South Sudan
  - Ethiopia
  - Somalia
  - Tanzania
- The other name for alluvial soil is \_\_\_\_\_
  - volcanic soil
  - loam soil
  - clay soil
  - young soil
- Which one of the following cultures should **NOT** be preserved?
  - Respect others
  - Traditional foods
  - Female Genital Mutilation
  - Boys initiation




11. What is poultry farming?  
 A. Keeping of pigs B. Keeping of birds  
 C. Keeping of cows D. Keeping of sheep
12. Traditional iron workers were known as \_\_\_\_\_  
 A. potters B. blacksmiths C. herders D. carvers
13. All the following are early forms of communication **EXCEPT:-**  
 A. messenger B. smoke  
 C. beating drums D. E-mail
14. Which is the fastest means of transportation?  
 A. Donkey B. Bicycle C. Air D. Water
15. Large farms where beef cattle are kept are known as \_\_\_\_\_  
 A. ranches B. paddocks C. ranks D. rotational
16. Which police force maintains law and order in the society?  
 A. Police B. Army C. Headteacher D. G.S.U
17. A member of parliament represents an electoral area known as \_\_\_\_\_  
 A. Ward B. Constituency  
 C. Division D. District
18. Killing of wildlife illegally is called \_\_\_\_\_  
 A. tourism B. rangers C. poaching D. tourism
19. The plateau referred to as a plateau within a plateau is \_\_\_\_\_  
 A. Nyika plateau B. Lotikipi  
 C. Kapiti plain D. Yatta plateau
20. Which of the following is **NOT** a traditional food?  
 A. Cassava B. Sorghum C. Yams D. Rice
21. Goats provide us with meat and \_\_\_\_\_  
 A. wool B. eggs C. mohair D. bacon
22. Which element of a map is used in getting the actual distance on the ground represented on the map?  
 A. Key B. Frame C. Scale D. Title
23. The number of counties in Kenya are \_\_\_\_\_  
 A. 8 B. 47 C. 68 D. 210
24. Which one of the following species of trees is **NOT** a hardwood?  
 A. Eucalyptus B. Mvule C. Camphor D. Mahogany
25. A person who loves his/her own country is called a:-  
 A. citizen B. patriot C. president D. tribalist
- Use the diagram below to answer questions 26.




26. The compass direction marked by letter X is:-  
 A. NE B. ENE C. NNW D. WNW

27. The Bantu are believed to have originated from \_\_\_\_\_  
 A. Congo forest B. South Sudan  
 C. Ethiopia D. Somalia
28. The road sign below means \_\_\_\_\_



- A. stop B. danger ahead  
 C. bridge ahead D. zebra crossing
29. One of the following groups is **NOT** a Nilote. Which one?  
 A. Pokot B. Kipsigis C. Nandi D. Kisii
30. The following are uses of soil. Which one is **NOT**?  
 A. Soil is used for decoration  
 B. Soil is used in making bricks  
 C. Growing crops  
 D. Used as food
31. The hills in a plateau are known as \_\_\_\_\_  
 A. ranges B. mountains  
 C. volcanis D. inselbergs
32. The weather drawn below is \_\_\_\_\_



- A. calm  
 B. cloudy  
 C. rainy  
 D. sunny

33. We celebrate Madaraka day on \_\_\_\_\_  
 A. 1st January B. 20th October  
 C. 1st June D. 12th December
34. The weather instrument used to measure rainfall is called \_\_\_\_\_  
 A. windvane B. raingauge  
 C. thermometer D. windsock
35. Chicken kept for meat are known as \_\_\_\_\_  
 A. ducks B. broilers C. layers D. birds
36. The colour at the bottom of the flag of Kenya is \_\_\_\_\_  
 A. black B. yellow  
 C. white D. green
37. As you go high in the sky it becomes \_\_\_\_\_  
 A. cooler B. hotter C. wetter D. warmer
38. Planting of trees where they have been cut is known as \_\_\_\_\_  
 A. afforestation B. deforestation  
 C. re-afforestation D. agroforestry
39. Three of the following lakes are in the Rift Valley **EXCEPT:-**  
 A. L. Baringo B. L. Nakuru  
 C. L. Victoria D. L. Naivasha



40. A person who shows love for his or her country is said to be \_\_\_\_\_

- A. loyal
- B. obedient
- C. hardworking
- D. patriotic


41. All the following are causes of disagreements in school **EXCEPT**:-

- A. fair punishment
- B. absence from school
- C. misbehaviour in class
- D. selfishness among students

42. Which one of the following shows the right to shelter?

- A. Living on the streets
- B. Living in a grass thatched house
- C. Eating balanced diet
- D. Having clothes

43. The road sign below shows \_\_\_\_\_



- A. round about
- B. road junction
- C. rail crossing
- D. stop

44. Crops that are grown mainly to be sold are known as \_\_\_\_\_

- A. food crops
- B. cash crops
- C. subsistence crops
- D. irrigation crops

45. Beef cattle are mainly kept in the \_\_\_\_\_ areas.

- A. forest
- B. swampy
- C. grassland
- D. semi-desert

46. Forests that grow along the river are known as \_\_\_\_\_ forests.

- A. savanna
- B. bamboo
- C. mountain
- D. riverine

47. Which one of the following is **NOT** part of the natural environment?

- A. Mountain
- B. Planted forest
- C. Rivers
- D. swamps

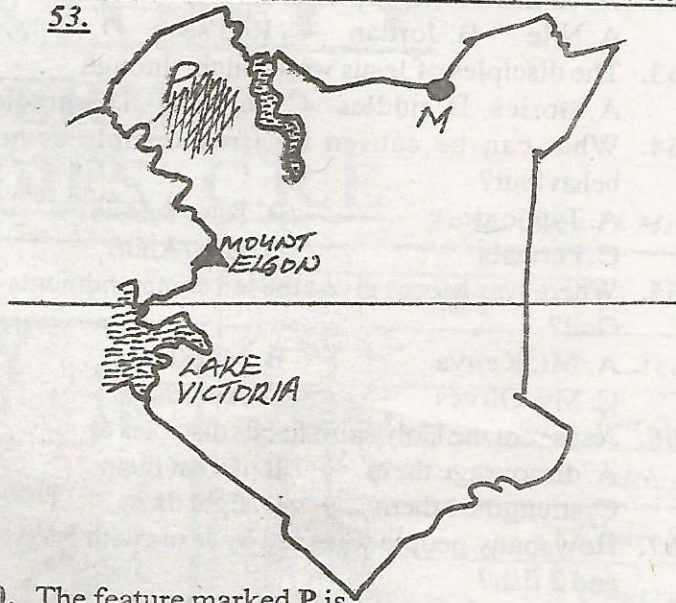
48. Which one of the following groups of people **DOES NOT** belong to Western Bantu?

- A. Wadawida
- B. Abagusii
- C. Abakuria
- D. Abaluhya

49. Which of the following shows the order in which the Luos migrated into Kenya?

- A. Joka Jok, Joka Owiny, Joka Omolo
- B. Joka Owiny, Joka Omolo, Joka Jok
- C. Joka Jok, Joka Omolo, Joka Owiny
- D. Joka Omolo, Joka Jok, Joka Owiny

Use the map of Kenya to answer questions 50-53.



50. The feature marked P is \_\_\_\_\_  
A. Loita plain                      B. Bilesha plain  
C. Lotikipi plain                  D. Awara plain

51. The town marked M is \_\_\_\_\_  
A. Eldoret    B. Lodwar    C. Moyale    D. Mandera

52. The line that crosses Kenya, marked O is \_\_\_\_\_  
A. Capricorn    B. Longitude    C. Cancer    D. Equator

53. The lake marked L is known as \_\_\_\_\_  
A. L. Magadi                      B. L. Jipe  
C. L. Nakuru                      D. L. Amboseli

54. The second prime minister in Kenya was \_\_\_\_\_  
A. Jomo Kenyatta                  B. Raila Odinga  
C. Daniel Moi                      D. Mwai Kibaki

55. The head of the county executive committee is the:-  
A. Governor                      B. Senator  
C. Mayor                          D. County Representative

56. Which one of the following is **NOT** an importance of peace in the society?

- A. Peace enables a country to develop
- B. Peace promotes unity
- C. Peace promotes selfishness
- D. Peace attracts tourists

57. The highest court in Kenya is the \_\_\_\_\_  
A. High Court                      B. Supreme court  
C. Court Martial                    D. Court of Appeal

58. The body incharge of election in Kenya is:-  
A. K.C.C    B. K.P.C    C. EACC    D. I.E.B.C

59. Census in Kenya is held after \_\_\_\_\_ years.  
A. 10                      B. 5                      C. 9                      D. 50

60. The person incharge of a ward is a \_\_\_\_\_  
A. MP                                  B. Governor  
C. County Representative              D. Senator

**C.R.E**

61. Jesus raised \_\_\_\_\_ from death.  
A. Lazarus    B. John    C. Esau    D. Barnabas



62. Jesus Christ was baptized at river \_\_\_\_\_  
A. Nile B. Jordan C. Red sea D. Malewa
63. The disciples of Jesus were taught through \_\_\_\_\_  
A. stories B. riddles C. parables D. miracles
64. What can be caused by irresponsible sexual behaviour?  
A. Typhoid B. Tuberculosis  
C. Pertusis D. HIV/AIDS
65. Where was Moses given the ten commandments of God?  
A. Mt. Kenya B. Mt. Sinai  
C. My. Olives D. Aberdares
66. Jesus sent the Holy spirit to His disciples to \_\_\_\_\_  
A. discourage them B. defeat them  
C. strengthen them D. fight them
67. How many people were fed by Jesus with 5 loaves and 2 fish?  
A. 500 B. 5000 C. 5 D. 50
68. Mwihaki a Std 5 pupil is suffering from HIV/AIDS. The best thing to do is \_\_\_\_\_  
A. not talking to her B. advising her to leave school  
C. not greeting her D. showing her love
69. Jesus showed that he had power over nature when he walked \_\_\_\_\_  
A. on land B. on water  
C. in the air D. on mountains
70. Your classmate has started smoking. The best thing to do is \_\_\_\_\_  
A. hate him/her  
B. change the classroom  
C. advice her/him to stop smoking  
D. report to the parents
71. Which one of the following is a gift of the Holy Spirit?  
A. Wisdom B. Love C. Patience D. Humility
72. Jesus fasted and prayed in the desert for how many days?  
A. 10 B. 40 C. 30 D. 20
73. Jesus prayed in the garden of \_\_\_\_\_  
A. Eden B. Golgotha  
C. Gethsemane D. Juda
74. A good leader is the one who \_\_\_\_\_  
A. talks for many hours  
B. has a commanding voice  
C. is rich  
D. has respect for other people
75. Who among the following prophets prophesied the birth of prince of peace?  
A. Isaiah B. Jeremiah C. Daniel D. Joel
76. Who among the following was the mother and father of Jacob?  
A. Racheal and Isaac B. Rebecca and Isaac  
C. Esau and Rebecca D. Racheal and John
77. The mother of Jesus was \_\_\_\_\_ and the father of Jesus was \_\_\_\_\_  
A. John and Mary B. Rachael and Joseph  
C. Mary and Joseph D. Rebecca and Isaac
78. Which one of the following was **NOT** used as a place of worship in the traditional African community?  
A. Caves B. Shrines C. Under trees D. Temple
79. In the wilderness, God provided the Israelites with \_\_\_\_\_ to eat.  
A. qualis B. bread C. raven D. pegin
80. Jesus was baptized by a man called \_\_\_\_\_  
A. Judas B. John C. Peter D. Isaiah
81. Which one of the following qualities must a good friend have?  
A. Selfish B. Unkind C. Patience D. Unsincere
82. As the people of God, we should accept the needy by \_\_\_\_\_  
A. looking down upon them  
B. letting them suffer  
C. talking evil about them  
D. Showing them love
83. Who among the following disciples of Jesus betrayed Him?  
A. Judas B. Andrew C. Simon D. John
84. Which one of the following is the greatest commandment of God?  
A. Loving our teachers  
B. Loving our God with all our heart, soul and mind  
C. Loving our friends  
D. Not stealing
85. The Agikuyu called their God \_\_\_\_\_  
A. Nyasaye B. Enkai C. Ngai D. Mulungu
86. When Jesus Christ was baptised in river Jordan the holy spirit came in form of \_\_\_\_\_  
A. smoke B. fire C. dust D. dove
87. What should you do if you find that your friend is sick?  
A. Report to the class teacher  
B. Tell him/her to sleep outside  
C. Tell him to run away  
D. Buy him/her some medicine
88. Which one of the following is the first and last books in the Old Testament?  
A. Genesis and Malachi  
B. Genesis and Revelation  
C. Mathew and Revelation  
D. Revelation and Genesis
89. Which one of the following is **NOT** a fruit of the Holy Spirit?  
A. Patience B. Love C. Jealousy D. Humility
90. The first disciples of Jesus were \_\_\_\_\_  
A. tax collectors B. doctors  
C. officers D. fishermen