

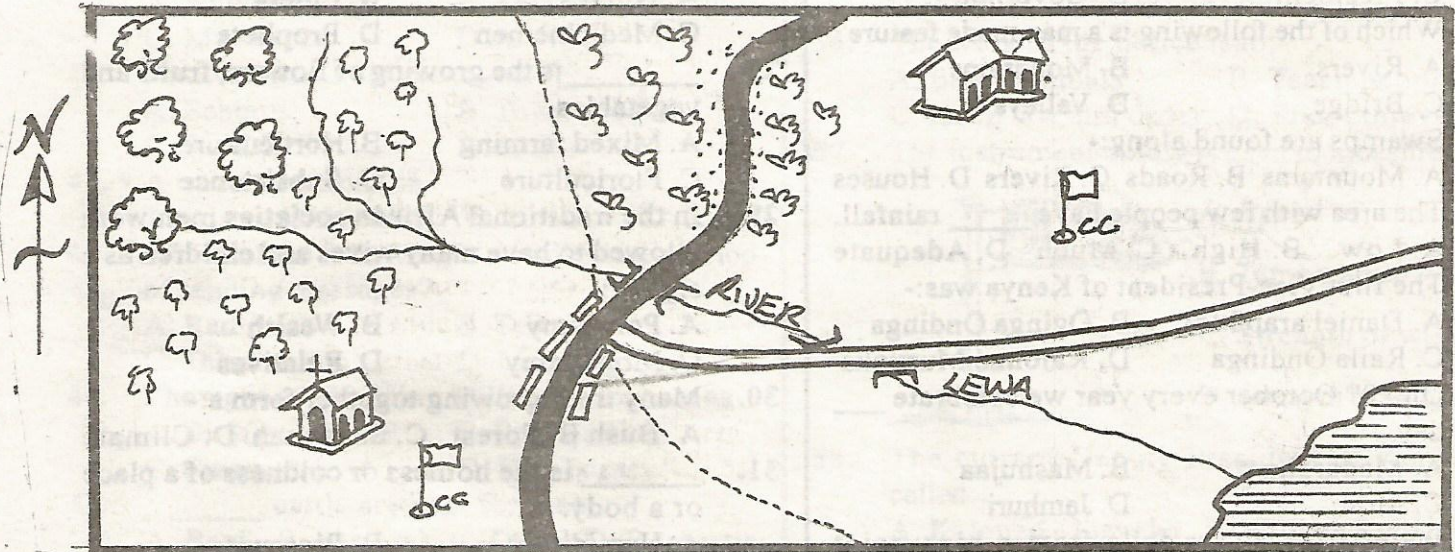
NAIROBI COUNTY

PENPLUS
NAIROBI

STD 4 - TERM 3

SOCIAL STUDIES/C.R.E.

MAKUTANO AREA



KEY SCALE: 0 1 2 3 4 5 6 7 8 9 10 11 12 13 14


	Forest		Church		Permanent Buildings
	Coffee		School		River
	Chiefs Camp		Tea		Lake
	Tarmac Road		Locational Boundary		Murram Road

Study the map of Makutano Area and answer questions 1 - 7.

- River Lewa flows from:-
 - North to South
 - North West to South East
 - West to East
 - South East to North West
- The climate of Makutano area is:-
 - Cool and wet
 - Cool and dry
 - Hot and wet
 - Wet and dry
- How many bridges are in Makutano area?
 - 1
 - 2
 - 4
 - 3
- How many locations are found in makutano area?
 - 3
 - 2
 - 1
 - 5
- The main religion found in the area is:-
 - Muslim
 - Christianity
 - Hindu
 - Buddhism
- Which of the following is a physical feature found in the area?
 - Lake
 - School
 - Bridge
 - Chiefs camp
- Which of the following is the highest area in the map?
 - South West
 - North East
 - North West
 - West
- Our country Kenya has _____ counties.
 - 8
 - 47
 - 9
 - 3
- Which one of the following is the MAIN tourist attraction in our country?
 - Good roads
 - Farming
 - Fishing
 - Wildlife
- The four points of a compass are called _____ points.
 - Cardinal
 - Total
 - True
 - Direction


11. The direction between North and East is:-
A. South West B. North East
C. South East D. North West
12. Many districts make a:-
A. Province B. Location
C. Division D. County
13. The head of a county is the:-
A. Chief B. Senator
C. President D. Governor
14. Which of the following is a man made feature?
A. Rivers B. Mountains
C. Bridge D. Valleys
15. Swamps are found along:-
A. Mountains B. Roads C. Rivers D. Houses
16. The area with few people have _____ rainfall.
A. Low B. High C. Much D. Adequate
17. The first Vice-President of Kenya was:-
A. Daniel arap Moi B. Oginga Odinga
C. Raila Odinga D. Kalonzo Musyoka
18. On 20th October every year we celebrate _____ day.
A. Madaraka B. Mashujaa
C. Moi D. Jamhuri
19. Water from rivers falls from a high point forming a:-
A. Gorge B. Ocean C. Water fall D. Dam
20. The vegetation which grow on their own are called:-
A. Artificial B. Natural
C. Forest D. Savannah
21. The type of vegetation found in a swamp is:-
A. Grass B. Forest C. Papyrus D. Melons
22. The things which make weather of a place are _____ of weather.
A. Elements B. Rain C. Factors D. Methods

Use the diagram below to answer questions 23-25.



23. The type of rainfall above is:-
A. Relief B. Convectional
C. Mountain D. Frontal
24. The side of the mountain marked B is called:-
A. Sun-side B. Windward
C. Rain-shadow D. Leeward

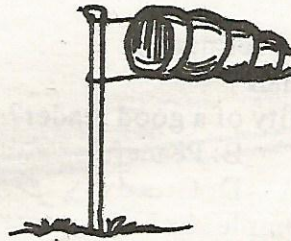
25. The type of rainfall above is experienced in:-
A. Desert B. Plains C. Highland D. Towns
26. _____ is used to measure atmospheric pressure.
A. Rain-gauge B. Thermometer
C. Barometer D. Hygrometer
27. People who used to treat the sick long ago were called:-
A. Nurses B. Elders
C. Medicinemen D. Prophets
28. _____ is the growing of flowers, fruits and vegetables.
A. Mixed farming B. Horticulture
C. Floriculture D. Subsistence
29. In the traditional African societies men were allowed to have many wives and children as a sign of:-
A. Polygamy B. Wealth
C. Monogamy D. Relatives
30. Many trees growing together form a:-
A. Bush B. Forest C. Savannah D. Climate
31. _____ is the hotness or coldness of a place or a body.
A. Humidity B. Pressure
C. Temperature D. Weather
32. The daily changes of a place are recorded in weather:-
A. Station B. Chart C. Books D. Graph
33. When a place has many people, we say that it is _____ populated.
A. Sparsely B. Full
C. Densely D. Congested
34. Which one is **NOT** a language group in Kenya?
A. Bantu B. Cushites
C. Nilotes D. Khoikhoi
35. The Agikuyu call their God _____
A. Mwene Nyaga B. Enkai
C. Mulungu D. Were
36. A person who has the power to tell events that will happen in the future is called:-
A. Mohammed B. Prophet
C. Herbalist D. Magician
37. The road sign below means:-



- A. Road closed B. Road junction
- C. Hospital D. Danger ahead

38. The land that is flat is called:-
A. Plain B. Hilly C. Rift Valley D. Slope
39. Which one of the following is **NOT** an importance of a river?
A. Irrigation B. Boundary
C. Building houses D. Electricity
40. Rivers, hills, swamps and mountains are called _____ features.
A. Nature B. Physical
C. Man made D. Artificial
41. National parks are managed by:-
A. Schools B. Town council
C. K.W.S D. M.P.s
42. A train moves on the:-
A. Air B. Metals C. Road D. Rail
43. Which of the following is a traditional method of sending messages?
A. Radio B. Television
C. Telephone D. Messengers
44. The right of one being a citizen is known as:-
A. Birth B. Registration
C. Citizenship D. Democracy
45. _____ cattle are kept for meat.
A. Beef B. Pastoral C. Dairy D. Domestic
46. Who among the following are **MOSTLY** found in towns?
A. Pastoralists B. Farmers
C. Traders D. Fishermen
47. Jua kali artisan use _____ available materials to make their wares.
A. Exported B. Imported
C. Locally D. Kenya
48. Which of the following can cause a road accident?
A. Good roads B. Good condition vehicles
C. Overloading D. Clear road signs
49. Which of the following is **NOT** a good element for a citizen?
A. Care for the sick
B. Patriotism
C. Cooperating with others
D. Being unfair to others
50. In Kenya the president is elected after every _____ years.
A. 4 B. 7 C. 10 D. 5
51. The green light in traffic means:-
A. Stop B. Get ready
C. Go D. Wait
52. The officer in-charge of a division is:-
A. Chief B. Elder C. D.O D. OCPD
53. In the past, boys were taught the following **EXCEPT?**
A. Looking after cattle B. Hunting
C. Cooking D. Making traps

54. Our Kenya National Flag has _____ colours.
A. 2 B. 3 C. 4 D. 5
55. Kimani found Kinuthia stealing from the teachers handbag. What should Kimani do?
A. Keep watch so that Kinuthia will not be caught
B. Report Kinuthia to the class teacher
C. Assume and forgive
D. Shout for others to beat him up
56. The work of the police is to:-
A. Beat criminals B. Teach people
C. Keep law and order D. Shoot thieves
57. The instrument below is used to measure:-



- A. Speed of wind
B. Temperature
C. Strength of wind
D. Amount of rainfall
58. The current Deputy President of Kenya is called:-
A. Kalonzo Musyoka B. William Ruto
C. Joseph Murumbi D. Raila
59. Uhuru Kenyatta is the _____ president of Kenya since independence.
A. First B. Second C. Third D. Fourth
60. The following are ways through which the Africans used to teach their young people **EXCEPT:-**
A. Initiation B. Work
C. Play D. Quarrelling
- C.R.E.**
61. _____ caused Adam and Eve to separate with God.
A. Snake B. Disobedience
C. Satan D. Fruit
62. The parents of John the baptist were:-
A. Hannah and Elikanah
B. Mary and Joseph
C. John and Elizabeth
D. Zachariah and Elizabeth
63. Christians worship in a:-
A. Mosques B. Shrines C. Church D. Temple
64. _____ denied Jesus three times.
A. John B. Peter C. Judas D. James
65. Which of the following is a good effect of weather?
A. Drying clothes
B. Crops dry up
C. Floods
D. Animals lack water and feeds

66. Jesus fed _____ with two fish and five loaves of bread.
 A. Four thousand people
 B. Two thousand people
 C. Five thousand people
 D. Fifteen thousand people
67. Lazarus was dead for _____ days when Jesus raised him.
 A. Four days
 B. Six days
 C. Five days
 D. Three days
68. The catching of many fish by disciples showed that:-
 A. Jesus has no power
 B. Jesus is not God
 C. Jesus has power over nature
 D. Jesus is a fisherman
69. Which one is a quality of a good leader?
 A. Proud
 B. Peaceful
 C. Lazy
 D. Greedy
70. Jesus clearing the temple showed that:-
 A. The temple is unholy
 B. The temple is dirty
 C. The temple should not be respected
 D. The temple is a place of worship
71. Judas Iscariot betrayed Jesus. This shows:-
 A. He was selfless
 B. He was unselfish
 C. He was selfish
 D. He was kind
72. Jesus prayed in the garden of:-
 A. Olives
 B. Gethsemane
 C. Sinai
 D. Germany
73. The two people crucified with Jesus were:-
 A. Beggars
 B. Soldiers
 C. Thieves
 D. Fisherman
74. When do we celebrate the birth of Jesus?
 A. Christmas day
 B. Mashujaa day
 C. Jamhuri day
 D. Easter Monday
75. Jesus overcome evil through his _____ and _____
 A. Life and death
 B. Death and resurrection
 C. Resurrection and life
 D. Death and crying
76. Jesus is a good:-
 A. Shepherd
 B. Disciple
 C. God
 D. Man
77. The bird that represented the Holy spirit during baptism was:-
 A. Eagle
 B. Cock
 C. Duck
 D. Dove
78. The first person to sin was:-
 A. Snake
 B. Cain
 C. Eve
 D. Man
79. The disciples received the Holy spirit on the day of:-
 A. Christmas
 B. Pentecost
 C. Sabbath
 D. Sunday
80. King Solomon asked God for:-
 A. Money
 B. Vehicles
 C. Wives
 D. Wisdom
81. Boys and girls should share:-
 A. Food
 B. Sex
 C. Fighting
 D. Stealing
82. HIV and AIDS can be spread by
 A. Sitting together
 B. Having sex
 C. Playing together
 D. Singing
83. Annah a standard four girl steals other pupils items. What advice can you give her as a Christian?
 A. Stealing is wrong
 B. Steal and share with you
 C. Continues stealing
 D. God loves her for stealing
84. Christians should do the following for people with problems:-
 A. Abuse them
 B. Fight them
 C. Beat them
 D. Give them food
85. Which of the following is a traditional way of forgiveness?
 A. Take one to court
 B. Report to the pastor
 C. Share food together
 D. Hate each other
86. Tabitha in the Bible was helping the widows by:-
 A. Making pots
 B. Selling to them shambles
 C. Knitting sweaters for them
 D. Selling them expensive clothes
87. Njoroge a Std 4 boy keeps beating other children in school. What should you advice him?
 A. Change and stop the behaviour.
 B. Tell him he is a good boy
 C. Tell him God hates him
 D. Continue the good behaviour
88. Wambui a standard four girl plays in church. What advice should you give her?
 A. Stay at home and not go to church.
 B. To respect the house of God.
 C. To play much more
 D. Abuse other children
89. In traditional time, children were taught good morals by:-
 A. Strangers
 B. Their elders
 C. Their friends
 D. Their teachers
90. Who has special needs?
 A. The rich
 B. The deaf
 C. The teachers
 D. The pupils