

BUSIA COUNTY

PENPLUS
BUSIA

STD 4 - TERM 3

SCIENCE

Time: 1 Hr 40 Mins

1. For good health we should wash our hands _____
A. before visiting the toilet
B. before and after visiting the toilet
C. after visiting the toilet
D. none of the above

2.



The above tooth is used for _____

- A. cutting and biting B. crushing and grinding
C. tearing and cutting D. cutting and grinding
3. The following are problems related to teeth except one. Which one?
A. Tooth decay B. Cavity
C. Bad breath D. Good breath
4. There are _____ teeth in deciduous set.
A. 20 B. 32 C. 28 D. 24
5. The following are beverage crops. Which one is **NOT**?
A. Cocoa B. Coffee C. Tea D. Sisal
6. Different shapes of the moon are called _____
A. shapes of the moon B. sizes of the moon
C. phases of the moon D. quarters of the moon
7. Which type of teeth is shed first?
A. Canines B. Incisors
C. Molars D. Premolars
8. Which one of the following is **NOT** a requirement for strong teeth?
A. Eating sweets and biscuits
B. Visiting a dentist regularly
C. Eating fruits and vegetables
D. Eating carrots and sugarcane
9. Plants which grow in areas which are not wanted are called _____
A. plants B. crops C. vegetables D. weeds
10. Dark grey clouds which bring heavy rainfall are called _____
A. rain clouds B. cumulus
C. nimbus D. low clouds
11. We get light at night from the _____ and _____
A. moon and sun B. moon and stars
C. sun and stars D. sun and torch

12. Grasshoppers move by _____
A. leaping B. crawling
C. slithering D. walking

13. The young one of a frog is called _____
A. fingerling B. kitten
C. kid D. tadpole

14. Which one is **NOT** a poultry?
A. Chicken B. Duck
C. Puppy D. Goose


15. The following are characteristics of animals. Which one is **NOT**?

A. They change colour B. They move
C. They die D. They grow

16. Which one of the following is **NOT** a fruit?
A. Pawpaw B. Sodom apple
C. Apple D. Avocado

17. AIDS stands for _____
A. Acquired Immuno Deficiency Sickness
B. Acquired Deficiency Immuno Syndrome
C. Acquired Immuno Deficiency Syndrome
D. Acquired Immunity Death Sickness

18. The phase of the moon shown below is called:-



A. crescent B. first quarter
C. gibbous D. full moon

19. Which of the following is **NOT** a cereal?
A. Beans B. Millet C. Maize D. Rice

20. A spider has _____ legs.
A. 8 B. 6 C. 4 D. 2

21. We cut napier grass using a _____
A. saw B. knife C. panga D. jembe













22. The **BEST** way of removing weeds is by _____
A. slashing B. mulching
C. using chemicals D. digging them out

23. Artificial teeth are also called _____
A. deciduous teeth B. milk teeth
C. wisdom teeth D. dentures

24. The soil that cracks easily when dry is called _____
A. clay B. silt
C. sand D. loam

25. The following are sources of water **EXCEPT**:-
 A. rain B. mountains
 C. dam D. river
26. Which one of the following is a product of sheep?
 A. Mutton B. Mohair
 C. Eggs D. Beef
27. Which one of the following is **NOT** a recreational use of water?
 A. Boat racing B. Surfing
 C. Swimming D. Irrigation
28. We cannot get AIDS from _____
 A. sex
 B. sharing piercing tools
 C. eating together
 D. blood transfusion
29. Chicken kept for meat are called _____
 A. broilers B. layers C. mutton D. beef
30. _____ is a poisonous weed.
 A. Oxalis B. Black jack
 C. Wandering jew D. Thorn apple
31. Animals protect themselves through the following ways **EXCEPT**:-
 A. eating B. stinging C. coiling D. biting

Use the chart below to answer the questions that follow

Day	Morning	Afternoon
Monday		
Tuesday		
Wednesday		
Thursday		 
Friday		 

32. Which day did the pupils wear light clothes?
 A. Monday B. Wednesday
 C. Tuesday D. Thursday
33. Which day was rainy in the morning and sunny in the afternoon?
 A. Thursday B. Tuesday
 C. Friday D. Monday
34. The hot and wet afternoon was _____
 A. Thursday B. Friday
 C. Tuesday D. Monday
35. Which day did people not see the sun at any time?
 A. Thursday B. Monday
 C. Wednesday D. Tuesday

36. Which of the following crops is **NOT** a tuber?
 A. Potato B. Cassava
 C. Tomato D. Carrot
37. Drinking water should be _____ before drinking.
 A. filtered B. boiled
 C. heated D. cooled
38. Which of the following is **NOT** a harmful animal?
 A. Grasshopper B. Mosquito
 C. Snake D. Housefly
39. We can feel things in a dark room using our _____
 A. eyes B. ears
 C. nose D. hands
40. Which of the following is **NOT** a use of wind?
 A. Sailing boats
 B. Winnowing
 C. Blowing roofs of houses
 D. Driving windmills
41. Which of the following is **NOT** made from plants?
 A. School desks B. Books
 C. School bell D. Our uniform
42. Shedding of teeth is _____
 A. losing permanent teeth
 B. losing milk teeth
 C. growing of new teeth
 D. putting a gap on teeth
43. To clean between teeth we use _____
 A. tooth brush B. tooth paste
 C. salty water D. dental floss
44. Which of the following animals **DOES NOT** feed by chewing?
 A. Sheep B. Grasshopper
 C. Tick D. Cow
45. Which one of the following is **NOT** a use of light?
 A. Seeing
 B. Ironing
 C. Controlling vehicles
 D. Taking photographs
46. Giving medicine to animals to remove worms is called _____
 A. deworming B. dipping
 C. spraying D. shearing
47. Farmers keep fish in _____
 A. rivers B. oceans
 C. dams D. ponds
48. The house of a sheep is called a _____
 A. shed B. pen
 C. sty D. kennel
49. Which of the following cannot be seen in the sky at night?
 A. Clouds B. Stars
 C. Sun D. Moon
50. Water is used in a paper factory to make _____
 A. books B. pulp
 C. covers D. newspapers