

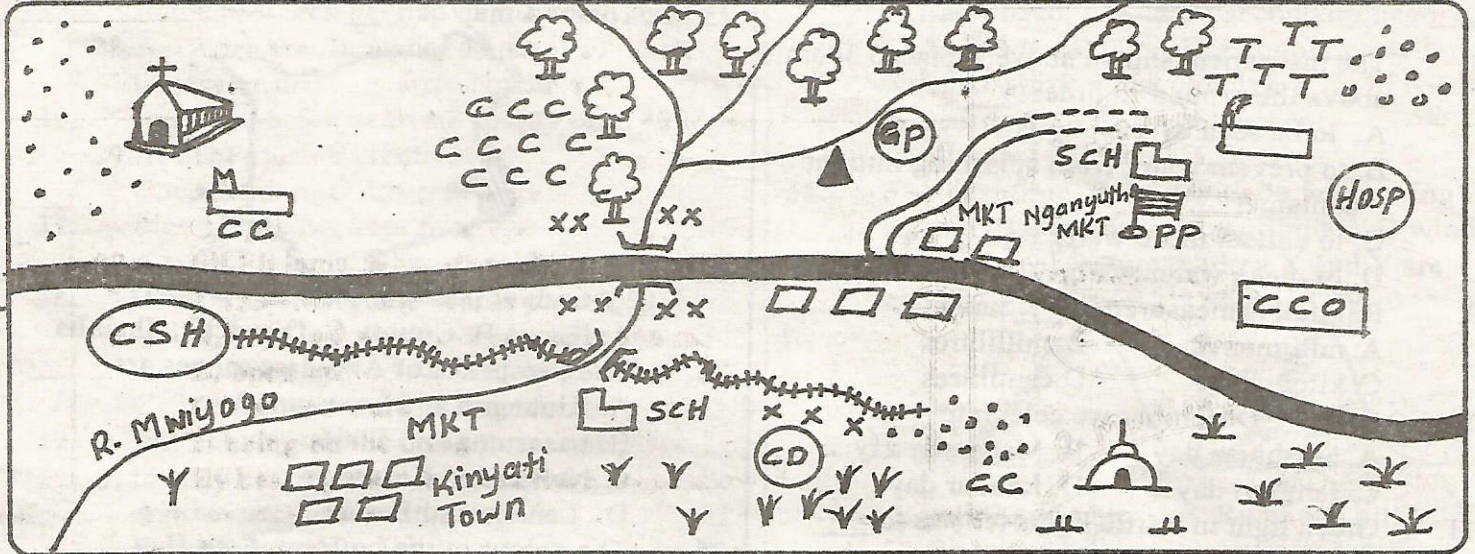
KIRINYAGA COUNTY

PENPLUS
KIRINYAGA

STD 4 - TERM 3

SOCIAL STUDIES / C.R.E. Time : 2 hrs 15 min

KIBITHUI AREA



KEY

| | | | | | |
|--|--------------------|--|------------------------|--|------------------------|
| | Tarmac road | | Mosque | | School |
| | Dry weather road | | County Council Office | | Settlement/houses/huts |
| | Murram road | | Police post | | Scrubs and grass |
| | Railway | | Tea | | Forest |
| | River and bridge | | Coffee | | Hill |
| | Permanent building | | Hospital | | Market |
| | Church | | Game Park | | Chief's Camp |
| | Cattle Dip | | County Slaughter House | | |

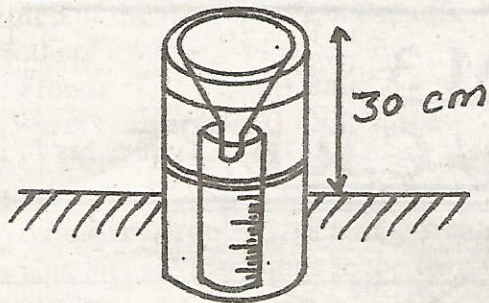
Study the map of KIBITHUI AREA above and answer questions 1-7

- The economic activity likely to be carried out at the Southern part of Kibithui is ____
A. mixed farming B. crop farming
C. pastoralism D. mono cropping
- The general flow of R. Mwiyo is ____
A. South B. North
C. South east D. South West
- People of Northern part of Kibithui area are ____
A. Pagans B. Muslims
C. Christians D. Hindus
- A thief was caught at Nganyuthe market. He was taken to ____
A. police post B. school
C. hospital D. county council office
- The highest administrator at Kibithui area is ____
A. chief B. Assistant Chief
C. D.O D. Governor
- The railway line on the map is likely to transport ____
A. tourist B. police C. tree D. livestock
- The man made feature at the point XXX is ____

A. river B. water C. bridge D. tank

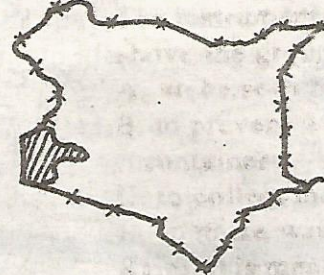
Use the diagram below to answer the question

below




8. The instrument shown above is placed 30cm above the ground in order ____
A. to be seen by the pupils
B. to prevent water from splashing into the container
C. to collect more water
D. to make water warm
9. Rainfall is measured in ____ units.
A. millimetres B. millilitres
C. kilograms D. centilitres
10. On 12th December we celebrate ____
A. Mashujaa day B. Madaraka day
C. Jamhuri day D. Labour day
11. Green light in traffic lights tells us to ____
A. stop B. run away
C. cross D. get ready
12. The removal of top soil by water is called ____
A. washing B. erosion
C. floods D. dust
13. People walking by the road are called ____
A. passengers B. pedestrians
C. passerby D. walkers
14. Our county is headed by ____
A. President B. Deputy President
C. Governor D. Chief
15. Money brought from other countries is called ____
A. dollar B. foreign currency
C. shilling D. imports
16. When people depend on each other it is called ____
A. interdependence B. independence
C. culture D. get together
17. ____ are people who speak in a similar manner and use words that are related.
A. Community B. Asian
C. Language group D. language barrier
18. People who move from one place to another with their animals are called ____
A. Maasai B. Samburu
C. pastoralists D. grazers
19. ____ is a person who belongs to a particular country.
A. Foreigners B. Citizen C. Christian D. Police

20. ____ is a place where beef cattle are kept.
A. Ranch B. Lunch
C. Boma D. Cattle dip
21. In the past people used to the following method of communication. Which one is not?
A. Drumming B. Ululation
C. Send young people D. Television
22. Perishable goods eg flowers are transported by ____
A. railway B. road C. air D. water
23. This is a map of ____



24. The two peaks of Aberdare ranges are ____
A. Kinangop and Lasasuma
B. Lasasuma and Batian
C. Nelion and Kinangop
D. Lenana and Batian
25. The colour at the bottom of our flag represent?
A. Peace B. Vegetation
C. Blood D. People
26. A place where there are many people living is said to be ____ populated.
A. densely B. sparsely
C. nuclear D. linear
27. As Juma was walking from school, the shadow pointed towards ____
A. North B. East C. West D. South
28. The exchange of good for good is called ____ trade.
A. exchange B. market
C. barter D. currency
29. Rivers that dry up during dry season are called ____ rivers.
A. tributaries B. permanent
C. dry D. seasonal
30. Small rivers that join the big river are called ____
A. tributaries B. swamps
C. channels D. lakes
31. In the olden days children were taught by their ____
A. church elders B. a gemates
C. classmates D. elders
32. Father, mother and children make up a ____ family.

- A. extended B. nuclear
C. clan D. community
33. The way of life is called _____
A. culture B. food C. clothes D. cattle
34. Who among the following is not a member of the county Assembly?
A. Speaker
B. Deputy Governor
C. Member from the youth
D. Elected members from ward
35. In the past sick people were treated by ____
A. veterinary B. mediceman
C. doctor D. Nurse
36. Most of people in Nyeri county are ____
A. doctors B. farmers
C. teachers D. drivers
37. Pigs are mainly kept for ____
A. wool B. skin C. pork D. milk
38. Growing of trees together with crops is called ____
A. afforestation B. deforestation
C. re-afforestation D. agroforestry
39. The activity of travelling from one place to another for pleasure is called ____
A. tourism B. leisure
C. passenger D. wildlife
40. People who made tools from iron were known as ____
A. witchdoctors B. herbalists
C. blacksmiths D. carpenter
41. A place where rules of a country are made is called ____
A. parliament B. county C. ward D. District
42. ____ are things people have and can use to make their lives better.
A. Cars B. Computers C. Resources D. food
43. The following are traditional ceremonies. Which one is not?
A. Naming ceremony
B. Initiation ceremony
C. Christmass ceremony
D. Circumcision ceremony
44. Making of thing like pens, papers and clothes is called ____
A. manufacturing B. tailoring
C. trading D. transporting
45. A cash crop found in our county that is used to make beverages is ____
A. cocoa B. wheat C. coffee D. avocadoes
46. The road sign shown means _____



- A. road is crossed B. there is a junction
C. Hospital D. roundabout
47. Democracy in the school is shown in the following ways except ____
A. choosing prefects B. sharing ideas
C. choosing clubs D. choosing hiding places
48. Which one is the main language group in our county?
A. Bantu B. Cushites C. Nilotes D. Semites
49. Food, clothes and shelter are called ____
A. Basic need B. Secondary need
C. Social need D. Economic need
50. Rain, sunshine, wind, clouds are ____ of wealth.
A. seasonal B. element
C. climate D. farming
51. The best time of the day to do winnowing is
A. rainy B. cloudy C. sunshine D. windy
52. The physical feature marked X and Y are called ____
-
- A. valley and a hill B. River and hill
C. Plain and hill D. Lake and swamp
53. ____ is a large area of water surrounded by land.
A. River B. Stream
C. Plains D. Lake
54. Which one of the following National parks is found in Nyeri county?
A. Aberdare B. Nakuru
C. Maasai mara D. Amboseli
55. One of the following was a traditional industry?
A. Weaving B. paper making
C. Refining D. Milk processing
56. The main work of police is to ____
A. guard people B. salute us
C. chase thieves D. keep law and order
57. Which of the following is a moral values?
A. Honest B. Corruption
C. Robbery D. Stealing
58. Acacia and cactus grow in ____ vegetation.
A. wet B. rainy
C. dry D. mountains
59. Members of county assembly represents an area called ____
A. constituency B. district
C. county D. ward
60. Which one of the following is not a symbol of National unity?
A. National Anthem B. National Flag
C. Court of arms D. National holiday

51. Which of the following is a bad effect of weather?
 A. Floods B. Rain
 C. Warm temperature D. Calm wind
52. Jesus raised Lazarus to show that he had power over ____
 A. nature B. people C. death D. sickness
63. Buying and selling things in the temple showed ____
 A. order in the temple
 B. people feared God
 C. respect to the house of God
 D. disrespect to the house of God
64. The small boy who gave his five loaves of bread and two fish showed that he was ____
 A. selfish B. unselfish
 C. greedy D. unkind
65. Jesus prayed in the garden of ____
 A. Golgotha B. Eden
 C. Gethsemane D. Jordan
66. Which one of the following is a way of giving service at home?
 A. Playing football B. Fetching firewood
 C. Stealing D. Fighting
67. Who among the following made the right choice?
 A. Anania B. Judas C. Saphira D. ham
68. Jesus was baptised by ____
 A. John the disciple B. John the baptised
 C. Simon peter D. sons of Zebedee
69. A group of people who believe that Jesus Christ is their lord and saviour is called ____
 A. Jesus community
 B. Bulhaism community
 C. Islam community
 D. Christian community
70. Moses married Zipporah a daughter of a midian priest called ____
 A. Aaron B. Elimelech
 C. Jethro D. Abraham
71. Jesus overcame evil by being ____
 A. prayerful B. brave
 C. unfaithful D. preaching
72. Jesus was tempted by the devil after ____
 A. crucifixion B. birth
 C. baptism D. resurrection
73. Who among the following were sisters of Lazarus?
 A. Mary and Martha C. Mary and Elizabeth
 C. Martha and Naomi D. Ruth and Naomi
74. Eli the priest was helped by ____ in the temple.
 A. Zachariah B. Samwel
 C. Elikanah D. Jesus

75. The early followers of Jesus Christ were first called Christian at ____
 A. Jerusalem B. Jericho
 C. Bethlhem D. Antioch
76. Solomon asked God to give him one of the following. Which one?
 A. Money B. Long life
 C. Wisdom D. Friends
77. The following items should be shared except-
 A. food B. house C. toothbrush D. wealth
78. After the floods in the times of Noah the water dried up after ____ days.
 A. 150 B. 50 C. 140 D. 40
79. The Luo call their God ____
 A. Mulungu B. Murungu
 C. Ngai D. Nyasaye
80. Eli Eli lama Sabachthani **Matthew 27:33--50**. These words means ____
 A. My God why have you abandon me
 B. open up
 C. rise and walk
 D. being on the cross
81. By healing the paralysed man, Jesus showed he had power ____
 A. to forgive sins and heal the sick
 B. over nature
 C. over death
 D. over life
82. We serve the country by doing one of the following. Which one?
 A. Playing hid and seek B. Burning charcoal
 C. Planting trees D. Fighting one another
83. Sharing work make work all the following except ____
 A. easier B. enjoyable
 C. promote unity D. promote hatred
- 84.. Jesus means ____
 A. saviour B. Christ
 C. Immanuel D. wonderful councillor
85. Elimelech the husband of Ruth went to Moab to look for ____
 A. land B. cattle C. food D. water
86. When God called Moses, he said he was the God of all the following except- ____
 A. Jacob B. Isaac C. Abraham D. David
87. Adam and Eve were given the garden of ____
 A. Gethsemane B. Eden C. Jordan D. Canaan
88. The mother of Jesus Christ was known as ____
 A. Elizabeth B. Ruth C. Mary D. Naomi
89. David son of Jesse killed a Philistine called ____
 A. Goliath B. Samson C. Saul D. Jonathan
90. All the following are elements weather except ____
 A. cloud B. wind C. water D. rain